



SSC CHSL 12th April 2021 Shift-1

All rights reserved. No part of this publication may be reproduced, distributed, or transmitted in any form or by any means, electronic, mechanical, photocopying, recording or otherwise, or stored in any retrieval system of any nature without the permission of cracku.in, application for which shall be made to support@cracku.in

English Language

Instructions

For the following questions answer them individually

Question 1

Given below are four jumbled sentences. Out of the given options, pick the one that gives their correct order.

- A. There he brought them up as his own children.
- B. He took them away to his hut.
- C. He found the two children and the basket.
- D. One day an old man came to the jungle.

- A BACD
- B DCBA
- C BDAC
- D DBAC

Answer: B

25 SSC CHSL Mocks for just Rs. 149

Question 2

Select the most appropriate meaning of the underlined idiom in the given sentence.

The eradication of corona virus is still a far cry.

- A very near
- B very easy
- C very fast
- D very distant

Answer: D

Question 3

Select the INCORRECTLY spelt word.

- A instead
- B install
- C instanse
- D inspire

Answer: C

Question 4

Select the most appropriate option to substitute the underlined segment in the given sentence. If there is no need to substitute it, select 'No substitution'.

The house has been auction before we reached there.

- A No substitution

- B was auctioning
- C had been auctioned
- D has been auctioned

Answer: C

SSC CHSL Free Mock Test

Question 5

Select the most appropriate ANTONYM of the given word.
RESOLVE

- A analyse
- B refuse
- C decide
- D agree

Answer: B

Question 6

Select the most appropriate antonym of the given word.
PRECIOUS

- A costly
- B simple
- C rare
- D cheap

Answer: D

Question 7

Select the most appropriate one-word substitution for the given words.
speed greater than that of sound

- A harmonic
- B cacophonic
- C supersonic
- D subsonic

Answer: C

SSC CHSL Previous Papers (DOWNLOAD PDF)

Question 8

Select the most appropriate synonym of the given word.
PRUDENT

- A reckless
- B rude
- C hasty
- D cautious

Answer: D

Question 9

Select the option which means the same as the group of words given.
A place where Buddhist monks live

- A monastery
- B pagoda
- C stupa
- D temple

Answer: A

Question 10

Given below are four sentences in jumbled order. Select the option that gives their correct order.

- A. This flight takes place on a hot summer day.
- B. It has a pair of wings but bites them off after its 'wedding' flight.
- C. In the heat, the queen leaves the nest and goes out to meet a drone, high up in the air.
- D. The queen is the mother of the entire population of a colony of ants.

- A CABD
- B BACD
- C DBAC
- D ACBD

Answer: C

SSC CGL Previous Papers (DOWNLOAD PDF)

Question 11

Fill in the blank with most appropriate word.

_____ of adulterated food stuff being sold in the market.

- A Wary
- B Beware
- C Aware
- D Cautious

Answer: B

Question 12

Select the correct passive form of the given sentence.
The prisoners of this jail have woven these carpets.

- A The prisoners have been woven by these carpets of this jail.
- B These carpets have been woven by the prisoners of this jail.
- C These carpets were woven by the prisoners of this jail.
- D These carpets wove the prisoners of this jail.

Answer: B

Question 13

Select the correct indirect form of the given sentence.
The gardener said to the children, "Please do not pluck any flowers."

- A The gardener requested the children not to pluck any flowers.
- B The gardener told to the children to kindly not pluck any flowers.
- C The gardener ordered the children to not pluck any flowers.
- D The gardener requested to the children please do not pluck any flowers.

Answer: A

SSC CGL Free Mock Test (Latest Pattern)

Question 14

In the given sentence, identify the segment which contains a grammatical error.
Why didn't you submitted your project on time?

- A you submitted
- B your project
- C Why didn't
- D on time

Answer: A

Question 15

In the given sentence, identify the segment which contains the grammatical error.
Electric heaters were providing to all the officers at the guest house.

- A at the guest house
- B were providing
- C to all the officers
- D Electric heaters

Answer: B

Question 16

Select the most appropriate synonym of the given word.

STRETCH

- A extend
- B cease
- C close
- D compress

Answer: A

SSC CHSL Important Questions and Answers (Download PDF)

Question 17

Select the most appropriate meaning of the given idiom.

Living in a fool's paradise

- A To believe wrongly that your situation is good
- B To be fooled by someone
- C To live in luxuriously after fooling someone
- D To live in a world of imagination

Answer: A

Question 18

Select the misspelt word.

- A parachute
- B partner
- C tarriff
- D sergeant

Answer: C

Question 19

Select the most appropriate option to substitute the underlined segment in the given sentence. If there is no need to substitute it, select 'No substitution'.

Supriya as well as her friends have gone of a trekking expedition.

- A have gone on
- B has gone on
- C No substitution
- D are going at

Answer: B

Question 20

Select the most appropriate option to fill in the blank.

I should have stopped them then and there. But it never even _____ to me that I should.

- A suggested
- B happened
- C occurred
- D reminded

Answer: C

Instructions

In the following passage some words have been deleted. Fill in the blanks with the help of the alternatives given. Select the most appropriate option for each blank.

Comprehension:

Before the giant waves slammed into the coast in India and Sri Lanka, wild and domestic animals (1) _____ to know what was about to happen. (2) _____ fled to safety. According to eyewitness (3) _____, elephants screamed and ran for (4) _____ grounds, dogs refused to go outdoors, flamingoes abandoned (5) _____ low-lying breeding areas and zoo animals rushed into their shelters.

Question 21

Select the most appropriate option for blank no. 1.

- A were seemed
- B seeming
- C seem
- D seemed

Answer: D

Question 22

Select the most appropriate option for blank no. 2.

- A They
- B Them
- C Us
- D We

Answer: A

SSC CHSL Free App

Question 23

Select the most appropriate option for blank no. 3.

- A statement

- B accounts
- C narrations
- D explanations

Answer: B

Question 24

Select the most appropriate option for blank no. 4.

- A highest
- B high
- C more high
- D higher

Answer: D

Question 25

Select the most appropriate option for blank no. 5.

- A our
- B theirs
- C their
- D her

Answer: C

Daily Free SSC Practice Set

General Intelligence

Instructions

For the following questions answer them individually

Question 26

P and Q are husband and wife. P's father-in-law is R's wife's father. Q is the brother of T. How is P related to R's wife?

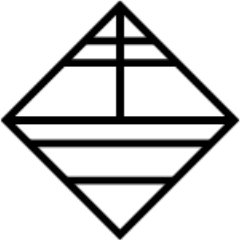
- A Aunt
- B Cousin
- C Sister-in-law
- D Brother

Answer: C

Free SSC Study Material (18,000 Solved Questions)

Question 27

How many triangles are there in the figure given below?



A 11

B 14

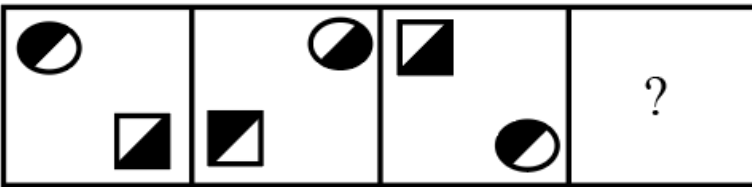
C 12

D 13

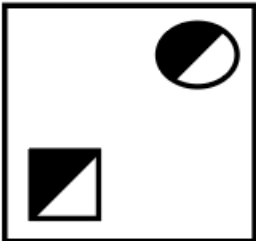
Answer: C

Question 28

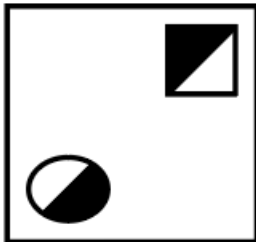
Select the figure that will come next (in place of the question mark [?]) in the following figure series.



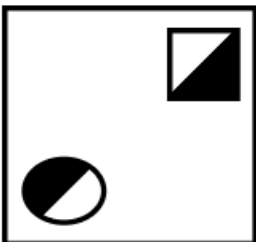
A

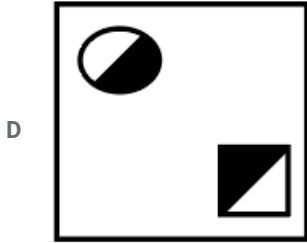


B



C





Answer: B

Question 29

Select the word-pair in which the two words are related in the same way as are the two words in the following word-pair.
Spoon : Utensil

- A Scooter : Vehicle
- B Bus : Passenger
- C House : Expenditure
- D Kitchen : Cooking

Answer: A

1500+ Very Important Free SSC Solved Questions

Question 30

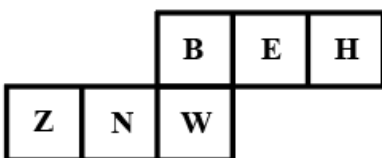
Vijay is 8 years younger than Amit. The sum of the current ages of Vijay and Amit is 42 years. What is the current age of Vijay?

- A 17 years
- B 25 years
- C 21 years
- D 15 years

Answer: A

Question 31

Which letter will be on the face opposite to the one showing 'N' when the given sheet is folded to form a cube?



- A H
- B Z
- C B
- D E

Answer: D

Question 32

Read the given statements and conclusions carefully. Assuming that the information given in the statements is true, even if it appears to be at variance with commonly known facts, decide which of the given conclusions logically follow(s) from the statements.

Statements:

All camels are doves.

Some doves are eagles.

Conclusions:

I. All camels are eagles.

II. Some camels are eagles.

III. Some eagles are doves.

IV. Some doves are camels.

A Both conclusions II and III follow

B Both conclusions III and IV follow

C Both conclusions I and II follow

D Both conclusions I and IV follow

Answer: B

SSC Exam Update Videos & Free Study Material (YouTube Channel)

Question 33

Select the option that is related to the third number in the same way as the second number is related to the first number.

25 : 750 :: 30 : ?

A 1110

B 1275

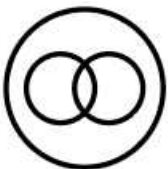
C 1625

D 1050

Answer: D

Question 34

Which of the following combinations of words best represents the Venn diagram given below?



A Fathers, Doctors, Males

B Females, Males, Aunts

C Females, Daughters, Sisters

D Mothers, Sisters, Brothers

Answer: C

Question 35

Select the combination of letters that when sequentially placed in the blanks of the given letter series will complete the series.
a _ _ gb _ _ acegb _ _ aceg _ _ _

- A ddfbcedf
- B cedfd bdf
- C fdfbdfced
- D cefbdfdfd

Answer: B

Latest Job Updates on Telegram - Join here

Question 36

Select the number from among the given options that can replace the question mark (?) in the following series.
2, 4, 5, 19, 71, ?

- A 361
- B 316
- C 216
- D 261

Answer: A

Question 37

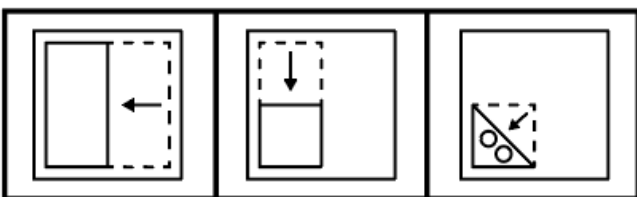
Four number-pairs have been given, out of which three are alike in some manner and one is different. Select the one that is different.

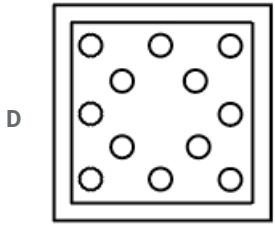
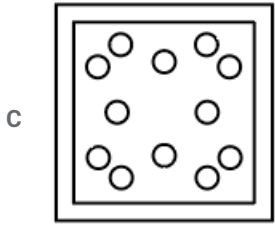
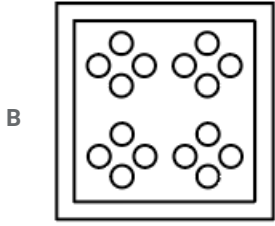
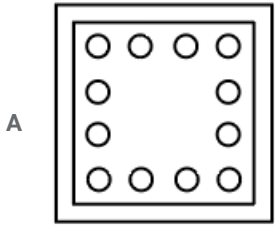
- A 5 : 65
- B 8 : 104
- C 12 : 146
- D 11 : 143

Answer: C

Question 38

The sequence of folding a piece of paper and the manner in which the folded paper has been cut is shown in the following figures. How would this paper look when unfolded?





Answer: B

Join SSC Daily Quiz Telegram Group

Question 39

Select the option that represents the correct order of the given words as they would appear in an English dictionary.

1. Rubric
2. Ruminare
3. Rose
4. Reader
5. Reap

A 4, 5, 3, 1, 2

B 4, 3, 5, 1, 2

C 4, 5, 3, 2, 1

D 4, 5, 1, 3, 2

Answer: A

Question 40

Select the option in which the numbers share the same relationship as that shared by the numbers of the given set. (8, 44, 224)

A (11, 59, 299)

- B (9, 80, 312)
- C (15, 75, 301)
- D (7, 39, 190)

Answer: A

Question 41

Select the option that is related to the third term in the same way as the second term is related to the first term.
SLIM : MHQO :: COLD : ?

- A GPZK
- B GKPZ
- C GPKZ
- D GZPK

Answer: D

25 SSC CHSL Mocks for just Rs. 149

Question 42

Select the correct mirror image of the given combination when the mirror is placed at 'PQ' as shown.

STRUCTURE 

- A ƆLƆCŪLŪƆE
- B ƆLƆŪCŪLŪƆE
- C ƆRƆTƆUƆRƆE
- D ƆRƆTƆUƆRƆTƆE

Answer: D

Question 43

Select the option in which the numbers are related in the same way as are the numbers of the following set.
(57, 126, 199)

- A (75, 148, 217)
- B (29, 96, 168)
- C (63, 132, 205)
- D (43, 112, 178)

Answer: C

Question 44

In a code language, if SEND is written as 168, then how will PURSE be written in the same language?

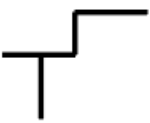
- A 185
- B 225
- C 395
- D 415

Answer: C

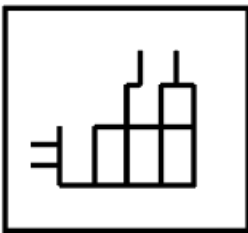
SSC CHSL Free Mock Test

Question 45

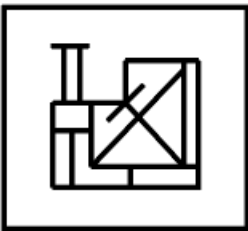
Select the option in which the given figure is embedded (rotation is NOT allowed).



A



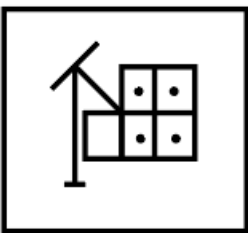
B



C



D



Answer: B

Question 46

In a certain code language, BEYOND is written as BDFNPY. How will PROMISE be written in that language?

- A FJNPQSR
- B ESIMORP
- C EIMOPRS
- D FJMPPRS

Answer: D

Question 47

Three of the following four letter-clusters are alike in a certain way and one is different. Select the odd one.

- A LPT
- B GKO
- C QUY
- D HLQ

Answer: D

SSC CHSL Prevoius Papers (DOWNLOAD PDF)

Question 48

Four words have been given, out of which three are alike in some manner and one is different. Select the word that is different.

- A Equivocal
- B Hesitant
- C Ambivalent
- D Certain

Answer: D

Question 49

Select the option that is related to the third word in the same way as the second word is related to the first word.

Ohmmeter : Resistance :: Zymometer : ?

- A Viscosity
- B Density
- C Fermentation
- D Radiation

Answer: C

Question 50

Select the correct combination of mathematical signs that can sequentially replace the * signs and balance the given equation.

$$14 * 11 * 552 * 23 * 29 = 159$$

- A $\times, +, \div, -$

B $\times, -, \div, +$

C $\times, \div, -, +$

D $+, -, \div, \times$

Answer: B

SSC CGL Previous Papers (DOWNLOAD PDF)

Quantitative Aptitude

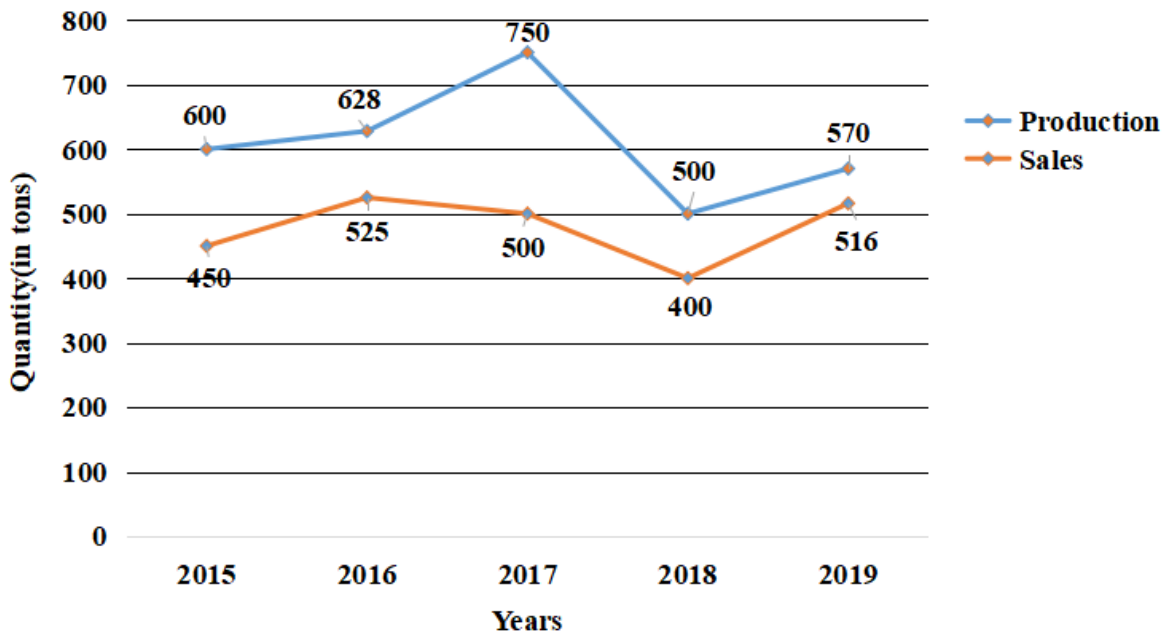
Instructions

For the following questions answer them individually

Question 51

The line graph shows the production (in tonnes) and the sales (in tonnes) of a company.

What percentage (approximately) of the total production of the company is the total sales of the company in all the years together? (correct to 2 decimal places)



A 75

B 72.55

C 68.12

D 78.44

Answer: D

SSC CGL Free Mock Test (Latest Pattern)

Question 52

If $\cos \theta = \frac{\sqrt{5}}{2}$, then what will be the value of $(\sec \theta + \tan \theta - \cot \theta \sin \theta)$?

A $2 + \frac{4\sqrt{5}}{5}$

B $2 + \sqrt{5}$

C $2 + \frac{\sqrt{5}}{2}$

D $2 + \frac{2\sqrt{5}}{5}$

Answer: A

Question 53

One diagonal of a rhombus is $8\sqrt{3}$ cm. If the other diagonal is equal to its side, then the area (in cm^2) of the rhombus is

A $12\sqrt{3}$

B $24\sqrt{3}$

C $16\sqrt{3}$

D $32\sqrt{3}$

Answer: D

Question 54

The average weight of 30 persons of group A is 3 kg more than the average weight of 25 persons of group B. The average weight of 25 persons of group B is 2.5 kg more than the average weight of 20 persons of group C. If the total weight of 30 persons of group A is 1725 kg, then what will be the average weight of the persons of group A and group C taken together (in kg)?

A 55.3

B 55.4

C 55.1

D 55

Answer: A

SSC CHSL Important Questions and Answers (Download PDF)

Question 55

In $\triangle ABC$, $\angle A = 135^\circ$, $CA = 5\sqrt{2}$ cm and $AB = 7$ cm. E and F are the midpoints of sides AC and AB, respectively. The length of EF (in cm) is:

A 6.5

B 5.5

C 6

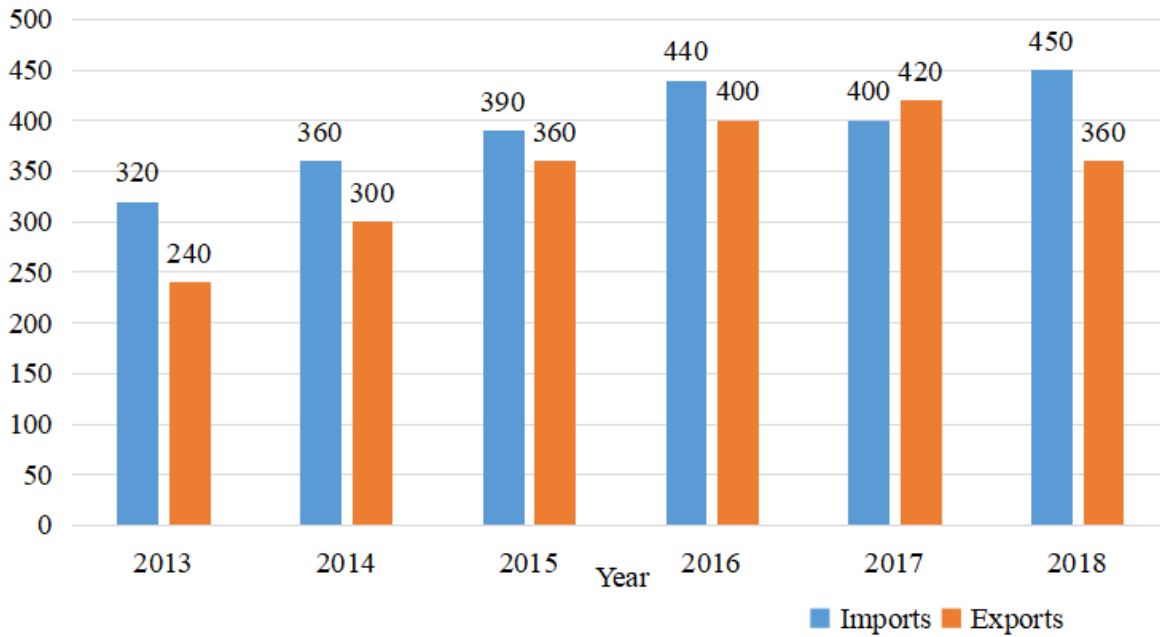
D 5

Answer: A

Question 56

Study the given graph and answer the question that follows.

Imports and Exports of Country XYZ during 2013 to 2018
(₹ crores)



What is the ratio of the total exports in 2014 and 2017 to the total imports in 2015 and 2018?

- A 14 : 15
- B 3 : 2
- C 6 : 7
- D 5 : 6

Answer: C

Question 57

If $x^2 - 6\sqrt{3}x + 1 = 0$, then the value of $x^3 + \frac{1}{x^3}$ will be:

- A $234\sqrt{3}$
- B $216\sqrt{3}$
- C $666\sqrt{3}$
- D $630\sqrt{3}$

Answer: D

SSC CHSL Study Material

Question 58

A car covers a distance of 48 km at a speed of 40 km/h and another 52 km with a speed of 65 km/h. What is the average speed of the car (in km/h) for the total distance covered?

- A 52.5

- B 50
- C 52
- D 53

Answer: B

Question 59

Simplify the following expression. $(2x - 3y)^3 - 18xy(2x - 3y)$

- A $8x^3 - 27y^3 - 36x^2y - 54xy^2$
- B $8x^3 - 72x^2y - 108xy^2 - 27y^3$
- C $8x^3 - 27y^3$
- D $8x^3 + 108xy^2 - 72x^2y$

Answer: B

Question 60

Anamika paid ₹4,965 as compound interest on a loan of ₹15,000 after 3 years when compounded annually. Suman took a loan of ₹10,000 at the same rate on simple interest. How much interest did Suman pay after 3 years?

- A ₹4,500
- B ₹4,000
- C ₹3,000
- D ₹3,500

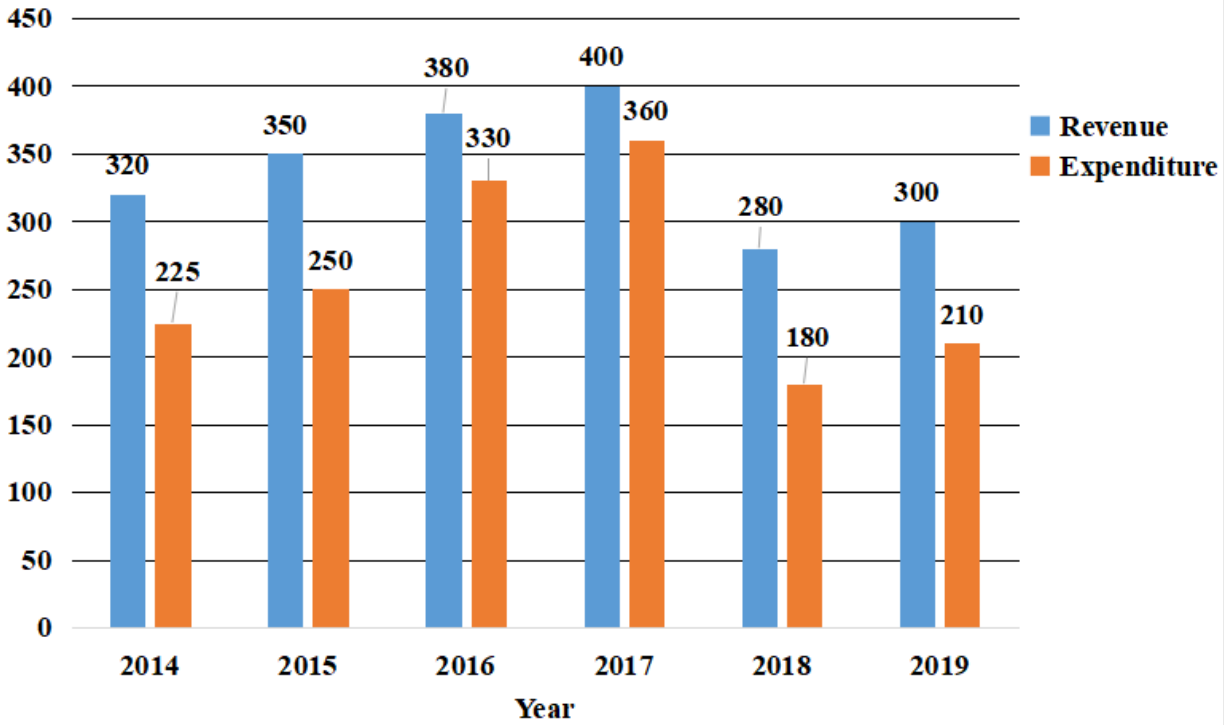
Answer: C

SSC CHSL Free App

Question 61

Study the given graph and answer the question that follows.

Revenue and Expenditure of Company XYZ (in ₹ crores) during 2014 to 2019



In which year was the percentage increase in the revenue as compared to that in its preceding year below 6%?

- A 2015
- B 2019
- C 2016
- D 2017

Answer: D

Question 62

If $8 \sin^2 \theta + 2 \cos \theta = 5, 0^\circ < \theta < 90^\circ$, then the value of $\tan^2 \theta + \sec^2 \theta - \sin^2 \theta$ will be:

- A $\frac{305}{144}$
- B $\frac{431}{144}$
- C $\frac{23}{9}$
- D $\frac{153}{72}$

Answer: A

Question 63

Chord AB and diameter CD of a circle meet at the point P, outside the circle when produced. If PB = 8 cm, AB = 12cm and the distance of P from the centre of the circle is 18 cm, the radius (in cm) of the circle is closest to:

- A 12.8

- B 12.4
- C 13
- D 12

Answer: A

Daily Free SSC Practice Set

Question 64

If $x^4 + y^4 + x^2y^2 = 117$ and $x^2 + y^2 - xy = 3(4 + \sqrt{3})$, then the value of $(x^2 + y^2)$ will be:

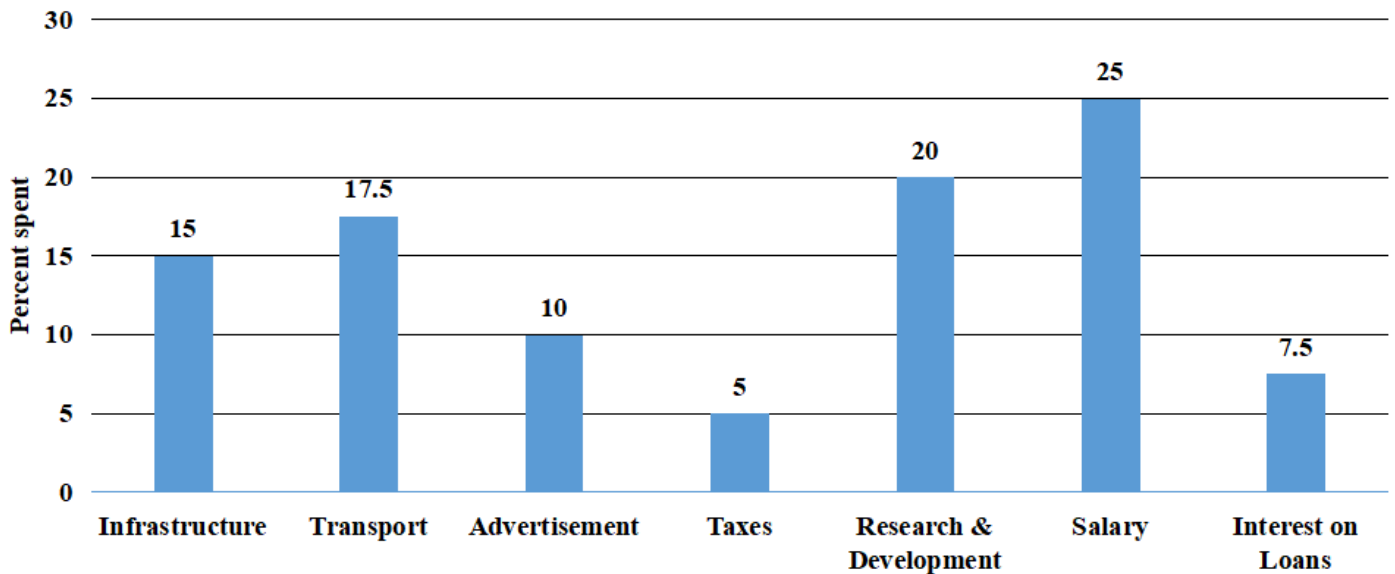
- A 9
- B $6\sqrt{3}$
- C 12
- D $13\sqrt{3}$

Answer: C

Question 65

Study the given graph and answer the question that follows.

Percentage distribution of total expenditure of a company Under Various heads during a year



The expenditure on Interest on Loans is by what percentage more than the expenditure on Taxes?

- A 30%
- B 40%
- C 25%
- D 50%

Answer: D

Question 66

The altitude AD of a triangle ABC is 9 cm. If $AB = 6\sqrt{3}$ cm and $CD = 3\sqrt{3}$ cm, then what will be the measure of $\angle A$?

- A 90°
- B 30°
- C 45°
- D 60°

Answer: D

Free SSC Study Material (18,000 Solved Questions)

Question 67

Sulekha bought 36 kg of sugar for ₹1,040. She sold it at a profit equal to the selling price of 10 kg of it. What is the selling price (in ₹) for 5 kg of sugar?

- A 235
- B 215
- C 220
- D 200

Answer: D

Question 68

Geeta scored 30% and failed by 50 marks, while Sandeep who scored 45% marks, got 25 marks more than the minimum marks required to pass the examination. How many marks did Vimal get if he scored 64% marks?

- A 500
- B 256
- C 320
- D 436

Answer: C

Question 69

A and B can complete a certain task in 24 days and 40 days, respectively. They worked together for 8 days. C completed the remaining task in 14 days. Working together, A and C will complete 75% of the same work in:

- A 10 days
- B 12 days
- C 15 days
- D 9 days

Answer: A

1500+ Very Important Free SSC Solved Questions

Question 70

In a circle with centre O, a 6 cm long chord is at a distance 4 cm from the centre. Find the length of the diameter.

- A 14 cm
- B 7 cm
- C 5 cm
- D 10 cm

Answer: D

Question 71

A sum of money is divided among A, B and C in the ratio 2 : 3 : 7, respectively. If the share of B is ₹15,000, then what will be the difference in the shares of B and C?

- A ₹15,000
- B ₹20,000
- C ₹18,000
- D ₹50,000

Answer: B

Question 72

What is the product of the largest and the smallest possible values of m for which a number $5m83m4m1$ is divisible by 9?

- A 80
- B 10
- C 40
- D 16

Answer: D

SSC Exam Update Videos & Free Study Material (YouTube Channel)

Question 73

An article is sold for ₹1,176 after two successive discounts of 30% and 16% on its list price. What is the difference (in ₹) between the list price and the selling price of the article?

- A 740
- B 820
- C 840
- D 824

Answer: D

Question 74

The value of $(2\frac{1}{2} \div 1\frac{7}{8}) (9\frac{4}{9} \div 11\frac{1}{3} \text{ of } 8) \text{ of } 3 \times 5\frac{1}{3} - 8 \div 4$ is:

- A $\frac{1}{5}$
- B $-\frac{7}{10}$
- C $\frac{23}{10}$
- D $-\frac{4}{5}$

Answer: B

Question 75

In $\triangle ABC$, AD is a median. If points E, F and G are midpoints of AD, AE and DE, respectively, then what will be the area $\triangle BFG$?

- A $\frac{1}{2}(\text{Area}\triangle ABC)$
- B $\frac{1}{8}(\text{Area}\triangle ABC)$
- C $\frac{1}{4}(\text{Area}\triangle ABC)$
- D $\frac{1}{2}(\text{Area}\triangle BGC)$

Answer: C

Latest Job Updates on Telegram - Join here

General Awareness

Instructions

For the following questions answer them individually

Question 76

Who among the following has been appointed as the Deputy Election Commissioner in the Election Commission of India?

- A Rajan Datta
- B Ashok Lavasa
- C Umesh Sinha
- D Rajiv Kumar

Answer: C

Join SSC Daily Quiz Telegram Group

Question 77

Swami Vivekananda established Ramakrishna Mission in the year ____.

- A 1876
- B 1897

C 1899

D 1882

Answer: B

Question 78

Which of the following is an extension of a temporary file?

A .tnt

B .tar

C .tmp

D .txt

Answer: C

Question 79

Birdie, eagle and albatross are all terms used in _____.

A golf

B polo

C baseball

D football

Answer: A

25 SSC CHSL Mocks for just Rs. 149

Question 80

_____ holds the Indian record for the most test matches as captain as of December 2020.

A Mohammad Azharuddin

B Kapil Dev

C MS Dhoni

D Virat Kohli

Answer: C

Question 81

Which of the following planets has the most number of moons?

A Jupiter

B Saturn

C Uranus

D Neptune

Answer: B

Question 82

Which of the following festivals of Tamil Nadu is dedicated to Lord Muruga?

- A Onam
- B Pongal
- C Thai Poosam
- D Aadi Perukku

Answer: C

SSC CHSL Free Mock Test

Question 83

In 2020, India co-sponsored a security council resolution that calls for full, effective and meaningful participation of _____ personnel in peacekeeping operations.

- A police
- B medical
- C nursing
- D women

Answer: D

Question 84

Champaran Satyagraha was launched in which of the following years?

- A 1935
- B 1917
- C 1928
- D 1945

Answer: B

Question 85

In how many countries, Union Cabinet approved the opening of Indian Missions in 2021?

- A 3
- B 6
- C 9
- D 5

Answer: A

SSC CHSL Previous Papers (DOWNLOAD PDF)

Question 86

AMR occurs when bacteria, viruses, fungi and parasites change over time and no longer respond to medicines making infections harder to treat and increasing the risk of disease spread, severe illness and death. What is the full form of AMR?

- A Acutemicrobial Resistance
- B Antimalarial Resistance
- C Antimeasles Resistance
- D Antimicrobial Resistance

Answer: D

Question 87

Which of the following is NOT an open-source operating system?

- A Windows
- B Ubuntu
- C Linux
- D Drupal

Answer: A

Question 88

What kind of soil is most suitable for growing cashew nuts?

- A Red and yellow soil
- B Alluvia soil
- C Black soil
- D Red laterite soil

Answer: D

SSC CGL Previous Papers (DOWNLOAD PDF)

Question 89

Who among the following is the first female Chief Justice of Telangana?

- A Hima Kohli
- B JK Maheshwari
- C Ruma Pal
- D R Banumathi

Answer: A

Question 90

Hakki, Pikki and Siddi are _____ from Karnataka.

- A languages
- B theatre forms
- C music types
- D dance forms

Answer: A

Question 91

Who is the author of the book 'Pathway to God'?

- A Sardar Vallabhbhai Patel
- B Mahatma Gandhi
- C Sri Aurobindo
- D Jawaharlal Nehru

Answer: B

SSC CGL Free Mock Test (Latest Pattern)

Question 92

Which helpline was launched by the Ministry of Social Justice & Empowerment in September 2020?

- A ASHA
- B SUBAH
- C KIRAN
- D UMMID

Answer: C

Question 93

Which of the following banks has launched contactless 'RuPay Select' debit card in association with NPCI (National Payment Corporation of India) in December 2020?

- A Central Bank of India
- B ICICI
- C HDFC
- D SBI

Answer: A

Question 94

Which of the following lakes of Maharashtra has been included in the list of Ramsar Sites in November 2020?

- A Vihar
- B Rankala
- C Lonar
- D Venna

Answer: C

SSC CHSL Important Questions and Answers (Download PDF)

Question 95

Which of the following is the most literate district in India as per Census 2011?

- A Ernakulam
- B Kottayam
- C Serchhip
- D Champhai

Answer: C

Question 96

Who has authored the book titled 'India's 71-Year Test: The Journey to Triumph in Australia'?

- A R Kaushik
- B Rahul Bhattacharya
- C Peter Hayter
- D Sachin Tendulkar

Answer: A

Question 97

As per The Indian Tourism Statistics (ITS) 2020, which Indian state attracted the highest number of domestic tourists in the country in 2019?

- A Uttar Pradesh
- B Tamil Nadu
- C Goa
- D Meghalaya

Answer: A

SSC CHSL Study Material

Question 98

As of January 2021, who among the following is the Union Minister of Rural Development?

- A Rajnath Singh
- B Amit Shah
- C Narendra Singh Tomar
- D S Jaishankar

Answer: C

Question 99

_____ is generally called as milk sugar as it is found in milk.

- A Glucose
- B Fructose
- C Maltose
- D Lactose

Answer: D

Question 100

Which of the following cities is situated on the banks of river Saryu?

- A Ahmedabad
- B Jaipur
- C Hyderabad
- D Ayodhya

Answer: D

SSC CHSL Free App

25 SSC CHSL Mocks for just Rs. 149

SSC CHSL Free Mock Test

SSC CHSL Previous Papers (DOWNLOAD PDF)

SSC CGL Previous Papers (DOWNLOAD PDF)

SSC CGL Free Mock Test (Latest Pattern)

SSC CHSL Important Questions and Answers (Download PDF)

SSC CHSL Study Material

SSC CHSL Free App

Daily Free SSC Practice Set

Free SSC Study Material (18,000 Solved Questions)

1500+ Very Important Free SSC Solved Questions

SSC Exam Update Videos & Free Study Material (YouTube Channel)

Latest Job Updates on Telegram - Join here

Join SSC Daily Quiz Telegram Group