



SSC CHSL 12th April 2021 Shift-3

All rights reserved. No part of this publication may be reproduced, distributed, or transmitted in any form or by any means, electronic, mechanical, photocopying, recording or otherwise, or stored in any retrieval system of any nature without the permission of cracku.in, application for which shall be made to support@cracku.in

English Language

Instructions

For the following questions answer them individually

Question 1

Select the most appropriate **ANTONYM** of the given word.

Bias

- A Prejudice
- B Stage
- C Prestige
- D Fairness

Answer: D

25 SSC CHSL Mocks for just Rs. 149

Question 2

Select the option that can be used as a one-word substitute for the given group of words.

Someone who studies elections and voting statistics

- A Analyst
- B Mathematician
- C Psychologist
- D Psephologist

Answer: D

Question 3

Select the most appropriate meaning of the given idiom.

To be all ears

- A To be inquisitive and curious
- B To have extra-large ears
- C To be ready and eager to listen
- D To be impatient about something

Answer: C

Question 4

The following sentence has been split into four segments. Identify the segment that contains a grammatical error.
The project is / tough and I / can't be able to / complete it by Monday.

- A can't be able to
- B tough and I
- C complete it by Monday

D The project is

Answer: A

SSC CHSL Free Mock Test

Question 5

Select the INCORRECTLY spelt word.

A Procure

B Destractson

C Provoke

D Kindle

Answer: B

Question 6

The following sentence has been divided into parts. One of them may contain an error. Select the part that contains the error from the given options. If you don't find any error, mark 'No error' as your answer.

We will definitely win the match / this time because our team / has prepare well.

A We will definitely win the match

B No error

C this time because our team

D has prepare well

Answer: D

Question 7

Sentences of a paragraph are given below in jumbled order. Arrange the sentences in the right order to form a meaningful and coherent paragraph.

A. The main activity of Palampur is farming and 80 families of the upper caste own the majority of land in Palampur.

B. Palampur village has around 450 families which belong to different castes and creeds.

C. The neighboring towns of the village are well connected and all-weather roads are also well connected.

D. There are other activities in Palampur like dairy, transport, small-scale manufacturing, etc. which also help run the economy in the village.

A BADC

B ABDC

C CABD

D CDAB

Answer: A

SSC CHSL Prevoius Papers (DOWNLOAD PDF)

Question 8

Select the most appropriate option to substitute the underlined segment in the given sentence. If there is no need to substitute it, select 'No substitution required'.

Seldom do we find so many birds nesting during this season.

- A No substitution required
- B Seldom does we find
- C Seldom did we found
- D Seldom we do find

Answer: A

Question 9

Select the most appropriate ANTONYM of the given word.

Fritter

- A Hoard
- B Waste
- C Spoil
- D Spread

Answer: A

Question 10

Select the most appropriate word to fill in the blank.

This training programme for students will help the _____ understand the different methods of communication.

- A critics
- B participants
- C trainers
- D organizers

Answer: B

SSC CGL Previous Papers (DOWNLOAD PDF)

Question 11

Select the most appropriate synonym of the given word.

Bolster

- A Discourage
- B Strengthen
- C Weaken
- D Embolden

Answer: B

Question 12

Select the option that expresses the given sentence in the active or passive voice.
The central team visited eight villages in the state to assess the damage to the crops.

- A The damage to the crops was assessed in eight villages in the state by the central team.
- B Eight villages in the state were visited by the central team to assess the damage to the crops.
- C Eight villages had visited the central team to assess the damage to the crops.
- D The central team assessed the damage to the crops in eight villages in the state.

Answer: B

Question 13

Select the INCORRECTLY spelt word.

- A Cloistered
- B Creativity
- C Maligned
- D Donations

Answer: B

SSC CGL Free Mock Test (Latest Pattern)

Question 14

Select the most appropriate option to substitute the underlined segment in the given sentence. If there is no need to substitute it, select 'No substitution required'.

I cannot understand that you are trying to say.

- A which you
- B what you
- C No substitution required
- D who you

Answer: B

Question 15

Select the option that can be used as a one-word substitute for the given group of words.
Doing something awkwardly or in a clumsy manner

- A Hastening
- B Faltering
- C Fumbling
- D Stumbling

Answer: C

Question 16

Select the most appropriate meaning of the idiomatic expression given.

Caught red-handed

- A Caught in the act of doing something illegal
- B Caught with a hand covered in blood
- C Caught by someone wearing a red wristband
- D Caught stealing red objects like apples and tomatoes

Answer: A

SSC CHSL Important Questions and Answers (Download PDF)

Question 17

Select the most appropriate synonym of the given word.

Random

- A Planned
- B Reasonable
- C Definite
- D Arbitrary

Answer: D

Question 18

Sentences of a paragraph are given below in jumbled order. Arrange the sentences in the right order to form a meaningful and coherent paragraph.

- A. Understanding a printed text comes from the interaction between printed words and one's prior knowledge of the world.
- B. Comprehension is the ability or process of understanding something that is spoken or written.
- C. Listening comprehension, however, involves multiple processes in understanding and making sense of spoken language.
- D. In active reading, readers think about their reading, and make connections and inferences.

- A BDCA
- B DACB
- C ADBC
- D BADC

Answer: D

Question 19

Select the option that expresses the given sentence in reported speech.

"Where did the children leave their record books?" the sports coach asked the class prefect.

- A The sports coach asked the class prefect where the children had left their record books.
- B The sports coach asked the class prefect where the children leave their record books.
- C The sports coach asked the class prefect where have the children left their record books.

D The sports coach asked the class prefect where the children are leaving their record books.

Answer: A

SSC CHSL Study Material

Question 20

Select the most appropriate word to fill in the blank.

Have you checked if we have _____ information about the location?

A inadequate

B profuse

C insufficient

D sufficient

Answer: D

Instructions

In the following passage, some words have been deleted. Select the most appropriate option to fill in each blank.

Comprehension:

In the 19th century, there was an industrial revolution in Europe. As a result, millions of people left the (1) _____ and went to work in big factories in cities. Today, it is the reverse. In several major cities, people have started moving out. Why? They want a cleaner, (2) _____ environment. There are fewer jobs in 'heavy' industries like steel and power generation. (3) _____, there are more jobs in service industries like banking, tourism and food delivery. Besides, modern transport and communications have made it easier for people to (4) _____ to work or even work from home. The result of this revolution in the 21st century will be 'spread cities' - cities are growing fast, but (5) _____, away from city centres and people are choosing to live 40, 50 or 60 kilometres away.

Question 21

Select the most appropriate option to fill in blank number 1.

A countries

B cities

C factories

D countryside

Answer: D

Question 22

Select the most appropriate option to fill in blank number 2.

A brighter

B darker

C greener

D worse

Answer: C

SSC CHSL Free App

Downloaded from cracku.in

Question 23

Select the most appropriate option to fill in blank number 3.

- A Instead
- B Clearly
- C Nevertheless
- D Of course

Answer: A

Question 24

Select the most appropriate option to fill in blank number 4.

- A calculate
- B compute
- C communicate
- D commute

Answer: D

Question 25

Select the most appropriate option to fill in blank number 5.

- A inwards
- B upwards
- C outwards
- D downwards

Answer: C

Daily Free SSC Practice Set

General Intelligence

Instructions

For the following questions answer them individually

Question 26

Four numbers have been given in the options, out of which three are alike in some manner and one is different. Select the number that is different.

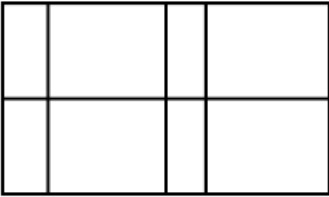
- A 2704
- B 1948
- C 2116
- D 1936

Answer: B

Free SSC Study Material (18,000 Solved Questions)

Question 27

How many rectangles are there in the given figure?



A 27

B 33

C 30

D 29

Answer: C

Question 28

Select the correct option that indicates the arrangement of the given words in a logical and meaningful order.

1. Armlet
2. Belt
3. Ascot
4. Socks
5. Turban

A 3-5-1-4-2

B 1-2-5-3-4

C 5-3-1-2-4

D 3-2-1-5-4

Answer: C

Question 29

Select the option in which the numbers are related in the same way as are the numbers of the following set.

173 : 125 : 85

A 365 : 293 : 229

B 285 : 221 : 135

C 259 : 199 : 147

D 293 : 228 : 171

Answer: A

1500+ Very Important Free SSC Solved Questions

Question 30

Select the combination of letters that when sequentially placed in the blanks of the given series will complete the series.

_ S _ E _ S Z _ F S _ E

A FESZE

B ZFSEZ

C FZFEZ

D FSEZF

Answer: C

Question 31

Three friends Aman, Ishaan and Anish have 12, 16 and 3 apples respectively. If Aman, Ishaan Gives twice the number of apples that Anish had and 4 apples to Anish, then how many apples does Aman have?

A 3

B 5

C 4

D 2

Answer: D

Question 32

Select the number from among the given options that can replace the question mark (?) in the following series.

56, 56, 54, 162, 158, ?

A 790

B 830

C 268

D 456

Answer: A

SSC Exam Update Videos & Free Study Material (YouTube Channel)

Question 33

Select the option that is related to the third word in the same way as the second word is related to the first word.

Googley : Cricket :: Gambit : ?

A Basketball

B Football

C Cycling

D Chess

Answer: D

Question 34

Four words are given, out of which three are alike in a certain way while one is inconsistent with them. Select the inconsistent word.

- A mycology
- B dermatology
- C nephrologist
- D cardiology

Answer: A

Question 35

Select the option that is related to the third term in the same way as the second term is related to the first term.

TAMPO : SCJTJ :: FIFTY : ?

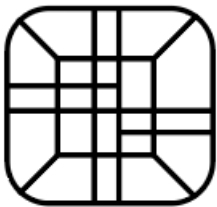
- A EKCYS
- B EKDXU
- C EKCXT
- D ELBXT

Answer: C

Latest Job Updates on Telegram - Join here

Question 36

Select the option that is embedded in the given figure (rotation is NOT allowed).



- A
- B
- C
- D

Answer: B

Question 37

In a certain code language, NAMELY is coded as 74 and MANAGE is coded as 45. How will MUSHER be coded in that language?

- A 88
- B 72
- C 80
- D 68

Answer: A

Question 38

Manyak is the son of Aravind. Manyak and Kashyap are brothers. Durga is the mother of Kashyap. Sanhit is the brother of Aravind. Hruday is the son of Sanhit. How is Hruday related to Kashyap?

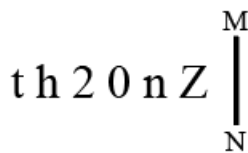
- A Son-in-law
- B Cousin
- C Son
- D Uncle

Answer: B

Join SSC Daily Quiz Telegram Group

Question 39

Select the correct mirror image of the given combination when the mirror is placed at MN as shown.



- A $\Sigma u 0 \Sigma d t$
- B $\Sigma n 0 z \psi t$
- C $\Sigma n 0 \Sigma d t$
- D $Z n 0 \Sigma d t$

Answer: C

Question 40

Which two numbers should be interchanged to make the given equation correct?

$$25 \times 7 + 20 - 40 \div 4 = 210$$

- A 20 and 7
- B 25 and 20

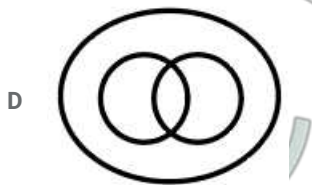
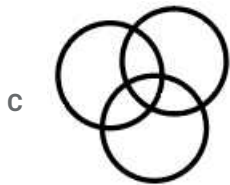
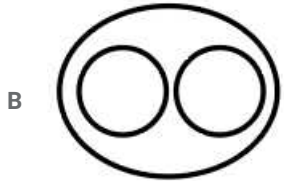
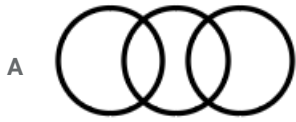
C 20 and 40

D 40 and 25

Answer: C

Question 41

Select the Venn diagram that best represents the relationship between the following classes.
Flowers, White, Cloths

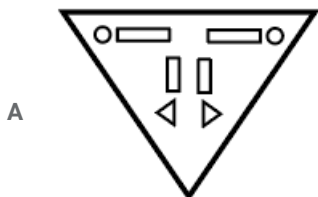
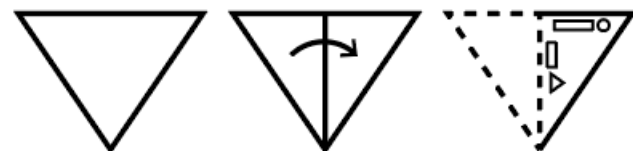


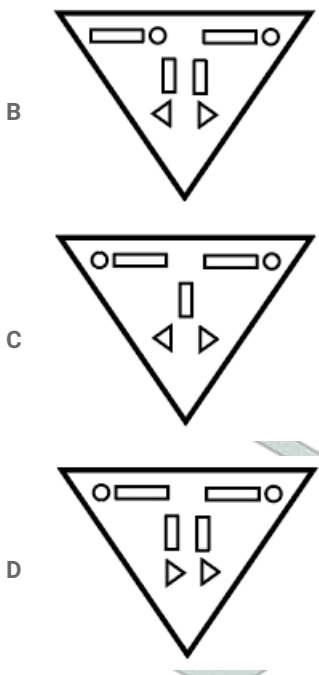
Answer: A

25 SSC CHSL Mocks for just Rs. 149

Question 42

The sequence of folding a piece of paper and the manner in which the folded paper has been cut is shown in the following figures.
How would this paper look when unfolded?





Answer: A

Question 43

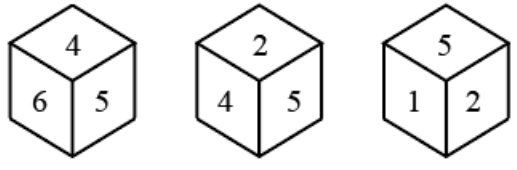
Select the option in which the numbers share the same relationship as that shared by the given pair of numbers.
93 : 87

- A 96 : 92
- B 64 : 61
- C 58 : 55
- D 49 : 53

Answer: C

Question 44

Three different positions of the same dice are shown. Select the number that will be on the face opposite to the face having the number 1.



- A 2
- B 3
- C 4
- D 6

Answer: C

Question 45

Read the given statements and conclusions carefully. Assuming that the information given in the statements is true, even if it appears to be at variance with commonly known facts, decide which of the given conclusions logically follow(s) from the statements.

Statements:

Some insects are animals.

Some animals are frogs.

All frogs are cats.

Conclusions:

I. Some cats are frogs.

II. Some frogs are animals.

III. Some animals are insects.

A Only conclusions II and III follow

B All conclusions follow

C Only conclusions I and III follow

D Only conclusions I and II follow

Answer: B

Question 46

Four letter-clusters have been given in the options, out of which three are alike in some manner and one is different. Select the letter-cluster that is different.

A JNRV

B FKOR

C RWAD

D LQUX

Answer: A

Question 47

In a certain code language, 'PENCIL' is written as 'CEILNP' and 'FROST' is written as 'FORST'. How will 'DUSTBIN' be written in that language?

A BDNISTU

B BDINSUT

C BDINSTU

D DIBNSTU

Answer: C

SSC CHSL Previous Papers (DOWNLOAD PDF)

Question 48

Select the option in which the numbers are related in the same way as are the numbers of the following set.
(4, 25, 105)

A (14, 50, 180)

B (26, 52, 275)

C (34, 52, 166)

D (12, 22, 87)

Answer: A

Question 49

Select the option in which the words share the same relationship as that shared by the given pair of words.

Papaya : Vitamin C

A Carrot : Vitamin B

B Apple : Vitamin D

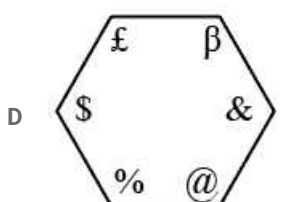
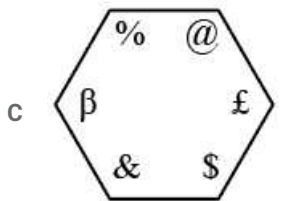
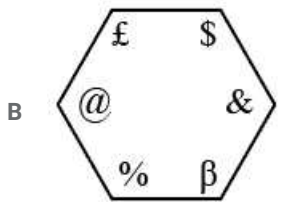
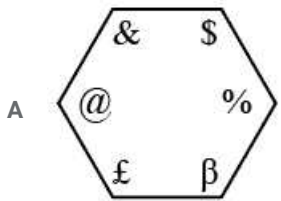
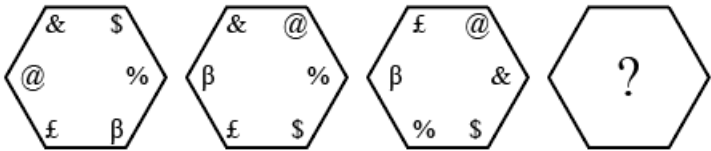
C Gooseberry : Vitamin C

D Guava : Vitamin A

Answer: C

Question 50

Select the figure from among the given options that can replace the question mark (?) in the following series.



Answer: D

SSC CGL Previous Papers (DOWNLOAD PDF)

Quantitative Aptitude

Instructions

For the following questions answer them individually

Question 51

The profit earned after selling an article for ₹8,579 is the same as the loss incurred after selling the article for ₹6,341. The profit percentage is:

- A 15%
- B 12%
- C 18%
- D 20%

Answer: A

SSC CGL Free Mock Test (Latest Pattern)

Question 52

$\triangle PQR$ is an isosceles triangle with $PQ = PR = 25$ cm. If PS is the median on QR from P such that $PS = 7$ cm, then the length of QR is:

- A 48 cm
- B 42 cm
- C 45 cm
- D 38 cm

Answer: A

Question 53

Let O be the centre of a circle. PA and PB are tangents to the circle from a point P outside the circle and A and B are points on the circle, If angle $APB = 50^\circ$, then angle OAB is equal to:

- A 25°
- B 20°
- C 40°
- D 50°

Answer: A

Question 54

If a nine-digit number $1263487xy$ is divisible by both 8 and 5, then the greatest possible values of x and y , respectively, are:

- A 6 and 5

B 2 and 0

C 6 and 0

D 2 and 5

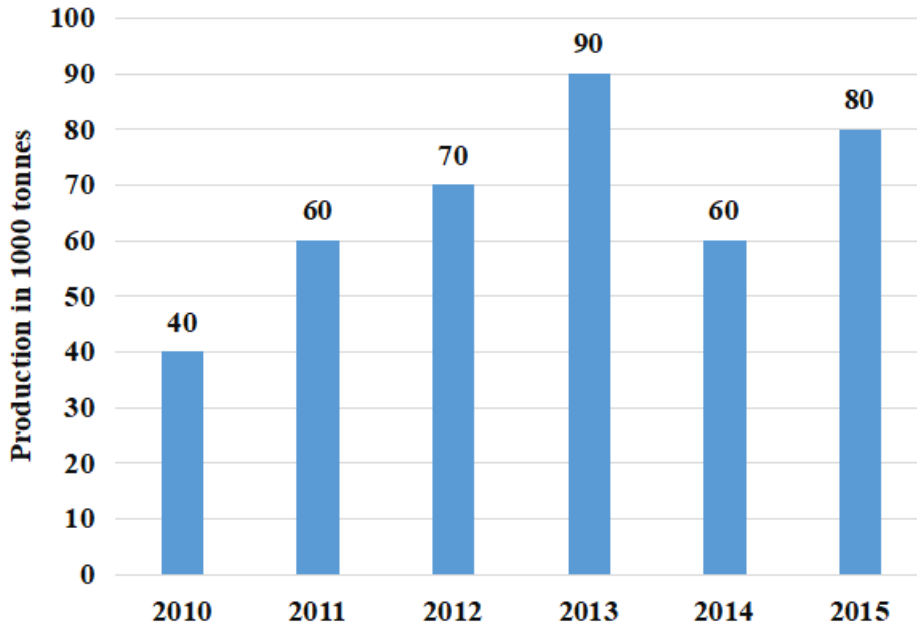
Answer: C

SSC CHSL Important Questions and Answers (Download PDF)

Question 55

Study the given bar chart and answer the question that follows.

The bar chart shows the production of medicines by a company (in 1000 tonnes) over six years 2010 to 2015.



If in each of the following years, the percentage increase in production as compared to the previous year is taken, then the ratio for increase production of the year 2011 to increase production of year 2015 is:

A 1 : 2

B 2 : 3

C 3 : 2

D 2 : 1

Answer: C

Question 56

$2 \cos \theta + \sec \theta - 2\sqrt{2} = 0$, where θ is an acute angle. Find the value of θ .

A 30°

B 15°

C 60°

D 45°

Answer: D

Question 57

Raghav spends 80% of his income. If his income increases by 12% and his expenditure increases by 17.5%, then what is the percentage decrease in his savings?

- A 12%
- B 10%
- C 8%
- D 15%

Answer: B

SSC CHSL Study Material

Question 58

Three numbers are in the ratio $\frac{1}{4} : \frac{5}{9} : \frac{7}{12}$, The difference between the greatest and the smallest number is 180, Find the sum of all the three numbers.

- A 650
- B 800
- C 500
- D 750

Answer: D

Question 59

The sum of the radius of the base and the height of a closed solid cylinder is 12.5 cm. If the total surface area of the cylinder is 275 cm², then its radius is:

(Take $\pi = \frac{22}{7}$)

- A 3.5 cm
- B 3 cm
- C 7 cm
- D 5 cm

Answer: A

Question 60

The simple interest on a certain sum for 3 years at 12% p.a. is ₹6,750. What is the compound interest (in ₹) on the same sum for 2 years at 20% p.a., if interest is compounded half-yearly? (rounded off to the nearest ₹)

- A 8,000
- B 8,702
- C 6,750
- D 7,729

Answer: B

SSC CHSL Free App

Question 61

Two circles touch internally. Their diameters are, respectively, 8 cm and 4 cm. What is the distance (in cm) between their centres?

- A 3
- B 2
- C 4
- D 1

Answer: B

Question 62

If a and b are the lengths of two sides of a triangle such that the product $ab = 24$, where a and b are integers, then how many such triangles are possible?

- A 18
- B 16
- C 12
- D 15

Answer: D

Question 63

The marked price of an article is ₹1,280. If a shopkeeper sold the article at 12% profit after giving 30% discount, then the cost price of the article is:

- A ₹700
- B ₹800
- C ₹600
- D ₹850

Answer: B

Daily Free SSC Practice Set

Question 64

The value of $7\frac{4}{13} \div 2\frac{5}{26}$ of $(4\frac{3}{5} + 7\frac{2}{5}) + (7\frac{1}{6} - 2\frac{1}{3})$ is:

- A 5
- B 6
- C 8

D 4

Answer: C

Question 65

If $x^2 - 3x + 1 = 0$, then the value of $2\left(x^8 + \frac{1}{x^8}\right) - 5\left(x^2 + \frac{1}{x^2}\right)$ is:

A 4379

B 4279

C 3479

D 4370

Answer: A

Question 66

The average monthly expenditure of a family was ₹18,600 during the first three months, ₹21,750 during the next four months and ₹22,840 during the last five months of a year. If the total savings during the year was ₹1,43,020, then the average monthly income (in ₹) of the family was:

A 32,225

B 34,115

C 35,333

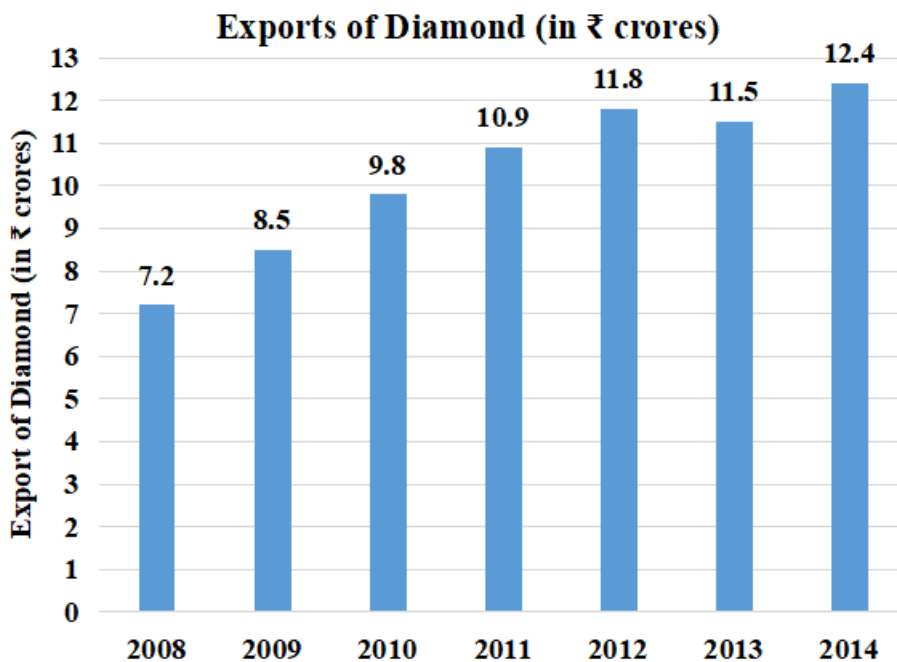
D 33,335

Answer: D

Free SSC Study Material (18,000 Solved Questions)

Question 67

Study the following bar graph and answer the question that follows.



In how many years was the export more than the average for the given period?

- A 6
- B 4
- C 5
- D 3

Answer: B

Question 68

In $\triangle ABC$, if $\angle B = 90^\circ$, $AB = 21$ cm and $BC = 20$ cm, then $\frac{1+\sin A-\cos A}{1+\sin A+\cos A}$ is equal to:

- A $-\frac{3}{5}$
- B $\frac{2}{5}$
- C $-\frac{2}{5}$
- D $\frac{3}{5}$

Answer: B

Question 69

If $\sec \theta = \frac{65}{63}$ and θ is an acute angle, then the value of $8(\operatorname{cosec} \theta - \cot \theta)$ is:

- A 1
- B 4
- C 2
- D 8

Answer: A

1500+ Very Important Free SSC Solved Questions

Question 70

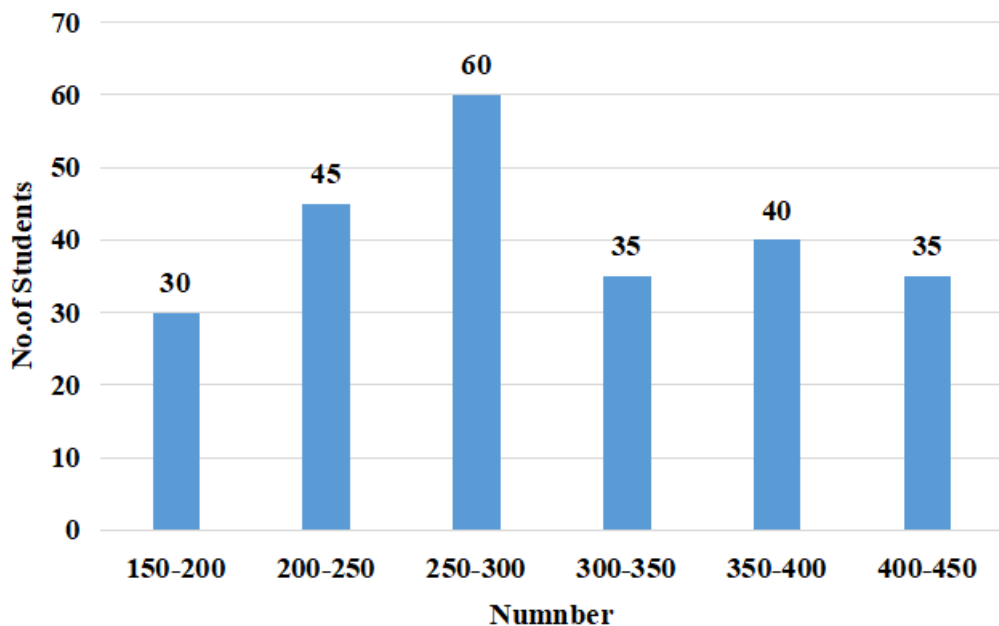
Working together, A, B and C can finish a piece of work in 3 hours. A finishes the same work in 8 hours and B finishes it in 6 hours. How long will it take for C alone to finish the same work?

- A 24 hours
- B 15 hours
- C 12 hours
- D 18 hours

Answer: A

Question 71

Study the following graph which shows the marks obtained by students in the examination and answer the questions.



The number of students obtained 350 and more marks is how much more than the number of students obtained the marks between 200 to 300?

- A 55%
- B 40%
- C 30%
- D 25%

Answer: B

Question 72

If $x - y - z = 0$, then the value of $(x^2 + y^2 + z^2) \div (y^2 + xz)$ is:

- A -2
- B 2
- C 1
- D -1

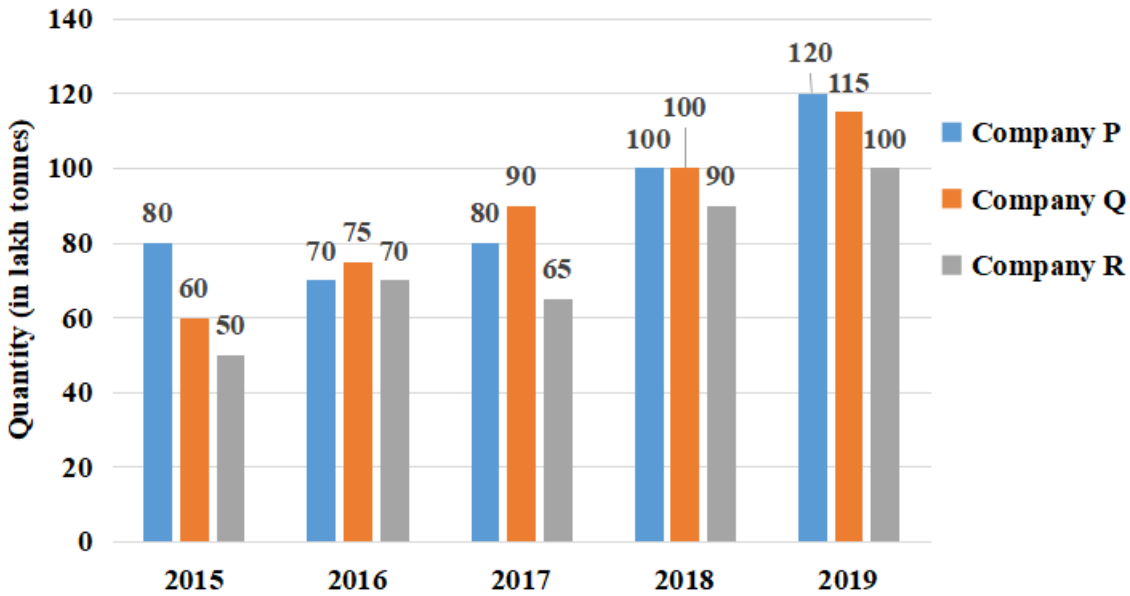
Answer: B

SSC Exam Update Videos & Free Study Material (YouTube Channel)



Question 73

The given bar graph indicates the production of sugar (in lakh tonnes) by three different sugar companies P, Q and R from the year 2015 to 2019. Study the bar graph and answer the question that follows. Production of sugar by companies P, Q and R from 2015 to 2019



The percentage increase in the production of sugar by company P in 2019 as compared to 2015 is:

- A 50%
- B 45%
- C 40%
- D 60%

Answer: A

Question 74

A truck covers a distance of 480 km at a certain speed. If the speed is decreased by 8 km/h, it would have taken 2 hours more to cover the same distance. 50% of its original speed (in km/h) is:

- A 20
- B 40
- C 48
- D 24

Answer: D

Question 75

If $x^4 + \frac{1}{x^4} = 6887$, then the positive value of $x - \frac{1}{x}$ is:

- A 12
- B 15
- C 8
- D 9

Answer: D

Latest Job Updates on Telegram - Join here

General Awareness

Instructions

For the following questions answer them individually

Question 76

When was the Federation of Indian Chambers of Commerce and Industry (FICCI) established in India?

- A 1952
- B 1948
- C 1939
- D 1927

Answer: D

Join SSC Daily Quiz Telegram Group

Question 77

How many monasteries and temples are there in Ellora caves?

- A 34
- B 32
- C 33
- D 31

Answer: A

Question 78

Which was the first Indian institution to receive the United Nations Population Award for 2020?

- A Kutumb Foundation
- B Child Rights and You
- C Childline India
- D HelpAge India

Answer: D

Question 79

Phodong Monastery is located in _____.

- A Sikkim
- B Bihar

C Madhya Pradesh

D Ladakh

Answer: A

25 SSC CHSL Mocks for just Rs. 149

Question 80

_____ was the Mughal emperor during the revolt of 1857.

A Akbar II

B Shah Alam II

C Bahadur Shah II

D Bahadur Shah I

Answer: C

Question 81

Which of the following state governments launched the 'Digital Seva Setu Programme' for rural areas in October 2020?

A Maharashtra

B Bihar

C Gujarat

D Uttar Pradesh

Answer: C

Question 82

Which of the following is the output device of a computer?

A Plotter

B Pen drive

C Joystick

D Scanner

Answer: A

SSC CHSL Free Mock Test

Question 83

Which of the following states leads in sunflower cultivation?

A Karnataka

B Rajasthan

C Punjab

D Uttar Pradesh

Answer: A

Question 84

In 1959, the Central Government of India undertook the governance in Kerala under _____ of the Constitution of India.

A Article 356

B Article 352

C Article 360

D Article 349

Answer: A

Question 85

A file with the _____ file extension is a Word Open XML Macro-Enabled Document file.

A .docm

B .docx

C .org

D .pdf

Answer: A

SSC CHSL Previous Papers (DOWNLOAD PDF)

Question 86

In August 2020, who was promoted to ICC's international panel of umpires?

A Kumar Dharmasena

B KN Ananthapadmanabhan

C Sundaram Ravi

D Anil Chaudhary

Answer: B

Question 87

Which of the following organisations awards the Nobel Memorial Prize in Economic Sciences?

A Swedish Academy

B Karolinska Institute

C Norwegian Nobel Committee

D The Royal Swedish Academy of Sciences

Answer: D

Question 88

_____ was the first person who discovered cells.

- A Robert Hooke
- B Francis Crick
- C Alexander Fleming
- D Ernest Rutherford

Answer: A

SSC CGL Previous Papers (DOWNLOAD PDF)

Question 89

Which of the following formulas related to monetary and liquidity aggregates is NOT correct?

- A $M1 = \text{Currency (notes + coins) + Demand deposits}$
- B $M4 = M3 + \text{Total deposits with post office savings organisations (excluding national savings certificates)}$
- C $M2 = M1 + \text{Savings deposits with post office savings banks}$
- D $M3 = M1 + \text{Net time deposits of post office savings}$

Answer: D

Question 90

What is the tenure of the chairman of the State Public Service Commission?

- A 6 years or the age of 60 years, whichever is earlier
- B 5 years or the age of 60 years, whichever is earlier
- C 5 years or the age of 65 years, whichever is earlier
- D 6 years or the age of 62 years, whichever is earlier

Answer: D

Question 91

Which of the following waterfalls is located in Jharkhand?

- A Jog waterfalls
- B Chulia waterfall
- C Dudhsagar waterfall
- D Hundru waterfall

Answer: D

SSC CGL Free Mock Test (Latest Pattern)

Question 92

Manitombi Singh was a _____ player from Manipur.

- A cricket
- B football
- C volleyball
- D hockey

Answer: B

Question 93

Sardar Sarovar Dam is situated in the state of _____ and on the river _____.

- A Gujarat, Narmada
- B Maharashtra, Krishna
- C Uttar Pradesh, Ganga
- D Rajasthan, Chambal

Answer: A

Question 94

Leprosy is caused by a bacterium called:

- A Mycobacterium leprae
- B Neisseria gonorrhoeae
- C Mycobacterium tuberculosis
- D Haemophilus pertussis

Answer: A

SSC CHSL Important Questions and Answers (Download PDF)

Question 95

A large area of land demarcated as Damin-i-Koh in 1832 was declared as the land of the _____.

- A Santhals
- B Murias
- C Warlis
- D Paharias

Answer: A

Question 96

Which of the following institutes got the first rank in the Atal Ranking of Institutions on Innovation Achievements (ARIIA) 2020 in the category of 'Institute of National Importance'?

- A Indian Institute of Technology Madras
- B Indian Institute of Technology Kanpur
- C Indian Institute of Technology Delhi
- D Indian Institute of Technology Mumbai

Answer: A

Question 97

Enzyme linked immuno-sorbent assay is a technique used in detection of which of the following diseases?

- A Acquired immunodeficiency syndrome (AIDS)
- B Kidney cancer
- C Malaria
- D Rheumatoid arthritis

Answer: A

SSC CHSL Study Material

Question 98

Which is the largest of the following Duns with an approximate length of 35-45 km and a width of 22-25 km?

- A Kota Dun
- B Nalagarh Dun
- C Harike Dun
- D Dehra Dun

Answer: D

Question 99

India's first 'Fire Park' was set up at _____ in January 2021.

- A Kolkata
- B Bhopal
- C Bhubaneswar
- D Hyderabad

Answer: C

Question 100

Who among the following persons secured the fourth position in the Dhaka Marathon 2021?

- A Angela Jim Asunde
- B Dutee Chand

C Jigmet Dolma

D Pushpa Bhandari

Answer: C

[SSC CHSL Free App](#)

[25 SSC CHSL Mocks for just Rs. 149](#)

[SSC CHSL Free Mock Test](#)

[SSC CHSL Previous Papers \(DOWNLOAD PDF\)](#)

[SSC CGL Previous Papers \(DOWNLOAD PDF\)](#)

[SSC CGL Free Mock Test \(Latest Pattern\)](#)

[SSC CHSL Important Questions and Answers \(Download PDF\)](#)

[SSC CHSL Study Material](#)

[SSC CHSL Free App](#)

[Daily Free SSC Practice Set](#)

[Free SSC Study Material \(18,000 Solved Questions\)](#)

[1500+ Very Important Free SSC Solved Questions](#)

[SSC Exam Update Videos & Free Study Material \(YouTube Channel\)](#)

[Latest Job Updates on Telegram - Join here](#)

[Join SSC Daily Quiz Telegram Group](#)