



SSC CHSL 14th October 2020 Shift-1

All rights reserved. No part of this publication may be reproduced, distributed, or transmitted in any form or by any means, electronic, mechanical, photocopying, recording or otherwise, or stored in any retrieval system of any nature without the permission of cracku.in, application for which shall be made to support@cracku.in

English Language (Basic Knowledge)

Instructions

For the following questions answer them individually

Question 1

Select the option that expresses the given sentence in direct speech.

Bharati told Rakesh to call her when he reached there.

- A "Call her when you have reached here", Bharati told Rakesh.
- B "Call me when you reached there", Bharati says to Rakesh.
- C "Call him when you are reaching there", Bharati told Rakesh.
- D "Call me when you reach there", Bharati told Rakesh.

Answer: D

25 SSC CHSL Mocks for just Rs. 149

Question 2

Select the most appropriate meaning of the underlined idiom in the given sentence.

To restart his cash-strapped company he decided to apply for a bank loan.

- A expensive
- B improving
- C impoverished
- D expanding

Answer: C

Question 3

Select the most appropriate option to substitute the underlined segment in the given sentence. If there is no need to substitute it, select No improvement.

Gitanjali did not had school yesterday because it was a second Saturday.

- A No improvement
- B does not have
- C did not have
- D was not having

Answer: C

Question 4

Select the most appropriate word to fill in the blank.

Around one hundred _____ across the world participated in the conference.

- A delegates

- B intelligent
- C talents
- D clever

Answer: A

SSC CHSL Free Mock Test

Instructions

In the following passage some words have been deleted. Fill in the blanks with the help of the alternatives given. Select the most appropriate option for each blank.

Champaner-Pavagadh Archaeological Park, a UNESCO World Heritage Site, is located in Panchmahal district in Gujarat, India. (1)_____ is situated near the historical (2)_____ of Champaner, a city which was founded by Vanraj Chavda, the (3)_____ prominent king of the Chavda Dynasty, in the 8th century. He named it (4)_____ the name of his friend and general Champa, also known later as Champaraj. The heritage site is dotted with forts with bastions ranging (5)_____ the hills of Pavagadh, and extending into the city of Champaner.

Question 5

Select the most appropriate option to fill in blank number 1.

- A Which
- B It
- C They
- D That

Answer: B

Question 6

Select the most appropriate option to fill in blank number 2.

- A garden
- B fort
- C city
- D tower

Answer: C

Question 7

Select the most appropriate option to fill in blank number 3.

- A more
- B main
- C most
- D chief

Answer: C

SSC CHSL Previous Papers (DOWNLOAD PDF)

Question 8

Select the most appropriate option to fill in blank number 4.

- A on
- B from
- C at
- D after

Answer: D

Question 9

Select the most appropriate option to fill in blank number 5.

- A from
- B above
- C away
- D to

Answer: A

Instructions

For the following questions answer them individually

Question 10

Select the word which means the same as the group of words given.

Act of giving up the throne

- A Abdication
- B Abandonment
- C Renunciation
- D Resignation

Answer: A

SSC CGL Previous Papers (DOWNLOAD PDF)

Question 11

Select the word which means the same as the group of words given.

A person who is blamed for something that someone else has done

- A Competitor
- B Scapegoat
- C Enemy

D Opponent

Answer: B

Question 12

Identify the segment in the sentence, which contains the grammatical error.

Yesterday I searched in every my cupboard for the shirt I couldn't find.

A in every my cupboard

B I couldn't find

C for the shirt

D Yesterday I searched

Answer: A

Question 13

Select the most appropriate ANTONYM of the given word.

NEAT

A Messy

B Sharp

C Strong

D Clear

Answer: A

SSC CGL Free Mock Test (Latest Pattern)

Question 14

Select the correctly spelt word.

A Wisdum

B Witness

C Wimper

D Welth

Answer: B

Question 15

Select the most appropriate ANTONYM of the given word.

RESPONSIBLE

A disresponsible

B unresponsible

C illresponsible

D irresponsible

Answer: D

Question 16

Select the most appropriate synonym of the given word.

MANDIBLE

A Jaw

B Human

C Glory

D Praise

Answer: A

SSC CHSL Important Questions and Answers (Download PDF)

Question 17

Select the most appropriate option to substitute the underlined segment in the given sentence. If there is no need to substitute it, select No improvement.

The firing of the missile not only killed innocent persons and also created political furore.

A No improvement

B not only killed innocent persons but also

C but killed innocent person and also

D not only kill innocent persons and also

Answer: B

Question 18

Select the most appropriate meaning of the idiom.

Pull yourself together

A Use a rope ladder

B Regain composure

C Talk about fitness

D Be friendly with everyone

Answer: B

Question 19

Select the option that expresses the given sentence in passive voice.

Sujata shared the results of her experiment with her colleagues.

A Her colleagues shared the results of her experiment with Sujata.

B The results of her experiment are being shared with her colleagues by Sujata.

C The results of her experiment can be shared with her colleagues by Sujata.

D The results of her experiment were shared with her colleagues by Sujata.

Answer: D

SSC CHSL Study Material

Question 20

Given below are four jumbled sentences. Out of the given options pick the one that gives their correct order.

A. Then he would give one leap, two leaps, through the snow, and sit up again on his hind legs and look all around.

B. A grey hare lived in the woods near a village.

C. Then he would prick up the other, jerk his whiskers, snuff, and sit up on his hind legs.

D. During the winter, when night came, he would prick up one ear and listen.

A BCDA

B BDCA

C ABCD

D CDBA

Answer: B

Question 21

Select the most appropriate synonym of the given word.

AURA

A Shriek

B Noise

C Colour

D Halo

Answer: D

Question 22

Given below are four jumbled sentences. Out of the given options pick the one that gives their correct order.

A. According to the EPR, the corporation expects such manufacturers to develop a collect back system for plastic waste.

B. The Municipal Corporation has introduced the extended producers responsibility (EPR) for producers and generators of plastic waste.

C. The producers are persons engaged in manufacture, or import of carry bags, multi-layered packaging and sheets, and persons using them.

D. They must formulate a plan to collect re-usable waste generated from their products within a prescribed timeframe.

A DBCA

B BCAD

C CADB

D ACBD

Answer: B

SSC CHSL Free App

Question 23

Select the INCORRECTLY spelt word.

- A Belligerent
- B Pharmaceutical
- C Trousseau
- D Tumultuous

Answer: D

Question 24

Select the most appropriate option to fill in the blank.

According to experts, some sectors remain _____ during these difficult times, including banking and financial services, FMCG, food and technology.

- A redundant
- B resilient
- C repentant
- D repugnant

Answer: B

Question 25

Identify the segment in the sentence, which contains the grammatical error.

Despite of her tiredness Meera went into the kitchen to make some dinner for the children.

- A Despite of her tiredness
- B Meera went into the kitchen
- C to make some dinner
- D for the children

Answer: A

Daily Free SSC Practice Set

General Intelligence

Instructions

For the following questions answer them individually

Question 26

Four words have been given, out of which three are alike in some manner and one is different. Select the odd one.

- A Amplify

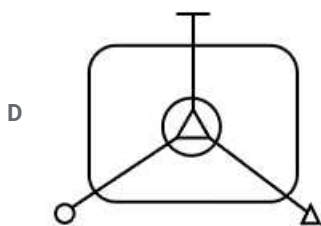
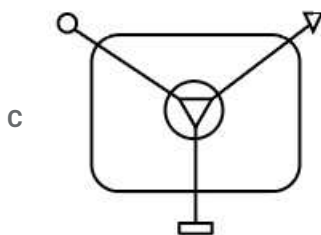
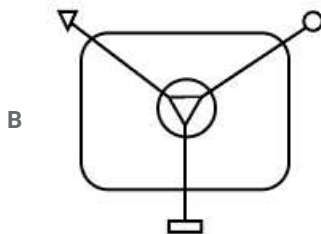
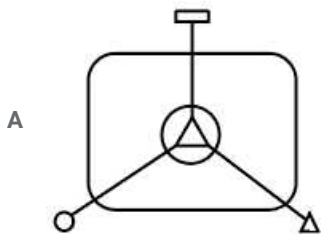
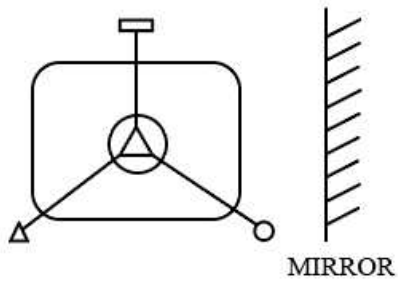
- B Gun
- C Axe
- D Microscope

Answer: A

Free SSC Study Material (18,000 Solved Questions)

Question 27

Select the correct mirror image of the given figure:



Answer: A

Question 28

If O = 20, LIT = 46, how will PIG be coded using the same code language?

- A 37
- B 53
- C 41
- D 46

Answer: A

Question 29

In a sale, the price of sarees was ₹700 each whereas the price of sandals was ₹500 each. A lady spent a total of ₹3,800 on both the items. Find the number of sarees she bought.

- A 1
- B 3
- C 4
- D 2

Answer: C

1500+ Very Important Free SSC Solved Questions

Question 30

Read the given statements and conclusions carefully. Assuming that the information given in the statements is true, even if it appears to be at variance with commonly known facts, decide which of the given conclusions logically follow(s) from the statements.

Statements:

1. No butter is jam.
2. Banana is a butter.

Conclusions:

- I. Banana is not a jam.
- II. Banana may or may not be a jam.

- A Neither conclusions I nor II follows.
- B Only conclusion II follows.
- C Only conclusion I follows.
- D Both conclusions I and II follow.

Answer: C

Question 31

If '+' means 'divided by', '-' means 'add', '×' means 'minus' and '÷' means 'multiplied by', what will be the value of the following expression?

$$[(12 \times 8) - (2 \div 3) + (3 - 2)] \div 2$$

- A 12
- B 5
- C 3

D 4

Answer: D

Question 32

Select the number-pair in which the two numbers are related in the same way as the two numbers of the following number-pair.

44 : 408

A 53 : 489

B 82 : 740

C 77 : 715

D 61 : 549

Answer: A

SSC Exam Update Videos & Free Study Material (YouTube Channel)

Question 33

Four letter clusters have been given, out of which three are alike in some manner and one is different. Select the odd one.

A QTP

B CGF

C MPL

D DGC

Answer: B

Question 34

In a dice 1,2,3 and 4 dots are on the adjacent faces, in a clockwise order, and 5 and 6 dots at the top and bottom. When 1 dot is at the top, then what number of dots will be at the bottom?



A 6

B 3

C 4

D 2

Answer: B

Question 35

Study the given pattern carefully and select the number that can replace the question mark (?) in it.

6 4 100

7 5 144

9 ? 169

A 7

B 6

C 4

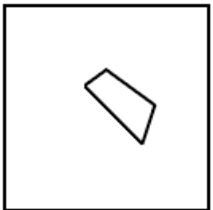
D 3

Answer: C

Latest Job Updates on Telegram - Join here

Question 36

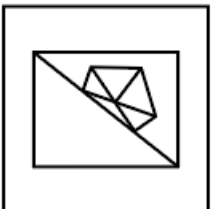
Select the option in which the given figure is embedded. (Rotation is not allowed)



A



B



C



D



Answer: D

Question 37

Select the option that is related to the third letter-cluster in the same way as the second letter-cluster is related to the first letter-cluster.

TALP : UXQO :: DUXR:?

A FSDR

B ESBQ

C FQBP

D ERCQ

Answer: D

Question 38

Select the number that can replace the question mark (?) in the following series.

216, ?, 64, 27, 8

A 144

B 121

C 125

D 169

Answer: C

Join SSC Daily Quiz Telegram Group

Question 39

Select the combination of letters that when sequentially placed from left to right in the gaps of the given letter series will complete the series.

_k_mmk_ikiim_ki_i_mk

A kiikmkkik

B iikimimmk

C iikmkkim

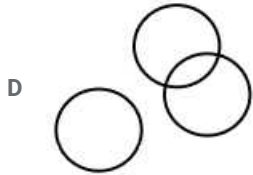
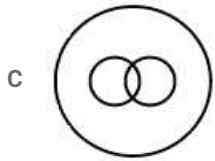
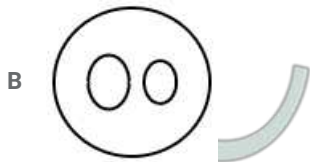

D miikmkiim

Answer: C

Question 40

Select the Venn diagram that best represents the relationship between the following classes.

Sisters, Mothers, Men.



Answer: D

Question 41

If A is the mother of B, X is the father of Y, H is the brother of J, L is the brother of Y's father, B is the sister of L and J is the husband of A, then how is J related to Y?

- A Paternal grandfather
- B Nephew
- C Son-in-law
- D Son

Answer: A

25 SSC CHSL Mocks for just Rs. 149

Question 42

Select the word-pair in which the two words are related in the same way as are the two words in the following word-pair.

Temple : Church

- A Hotel : Office
- B College : University
- C College : Theatre
- D University : Student

Answer: B



Question 43

Select the correct alternative to indicate the arrangement of the following words in a logical and meaningful order.

- 1. Deci
- 2. Mili
- 3. Kilo
- 4. Hecto
- 5. Centi
- 6. Deca

- A 2, 1, 5, 6, 4, 3
- B 4, 3, 5, 1, 2, 6
- C 2, 5, 1, 6, 4, 3
- D 1, 2, 6, 5, 4, 3

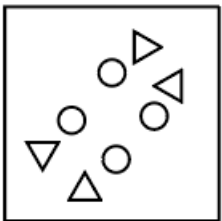
Answer: C

Question 44

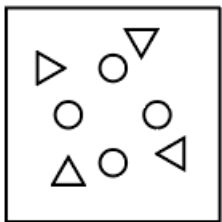
The sequence of folding a piece of paper and the manner in which the folded paper has been cut is shown in the following figures. How would this paper look when unfolded?



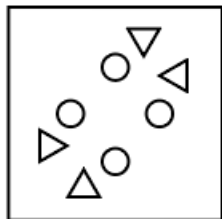
A

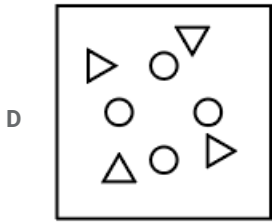


B



C





Answer: C

SSC CHSL Free Mock Test

Question 45


In a certain code language, if 'BURMUD' is written as 'RKHCKT', then how will 'ANGLE' be written as in that language ?

- A REXCV
- B HOPLY
- C PCVAT
- D QDWBU

Answer: D

Question 46

How many squares are there in the following figure?



- A 27
- B 28
- C 26
- D 25

Answer: A

Question 47

If '+' means ' \div ', ' \times ' means '+', ' \div ' means '-' and '-' means ' \times '. Then what will be the value of the following expression?

$$18 + 3 - 5 \times 6 \div 4$$

- A 15.5
- B 30
- C 32

D 13.5

Answer: C

SSC CHSL Previous Papers (DOWNLOAD PDF)

Question 48

Four number pairs have been given, out of which three are alike in some manner and one is different. Select the one that is different.

A 13 - 16

B 32 - 45

C 12 - 15

D 16 - 30

Answer: D

Question 49

Select the word-pair in which the two words are related in the same way as are the words in the following word-pair.

Paper : Pulp

A Pear : Fruit

B Linen : Flax

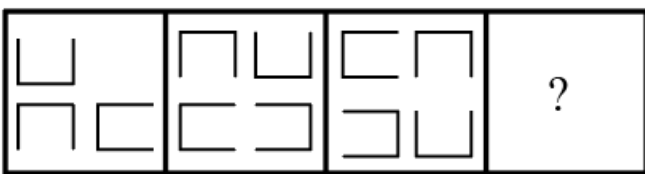
C Fan : Blade

D Road : Latex

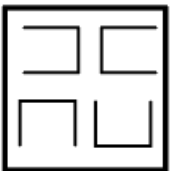
Answer: B

Question 50

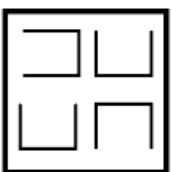
Select the figure that will come next in the following figure series.

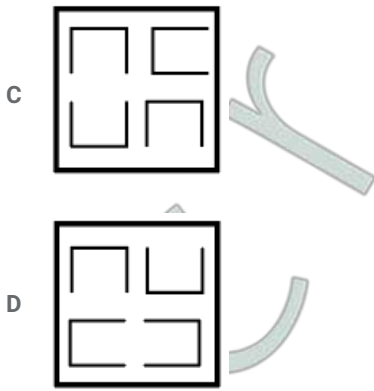


A



B





Answer: A

SSC CGL Previous Papers (DOWNLOAD PDF)

Quantitative Aptitude(Basic Arithmetic Skill)

Instructions

For the following questions answer them individually

Question 51

The compound interest on ₹4,000 at the rate of 5% p.a. is ₹630.50, then the time period is:

- A $3\frac{1}{2}$ years
- B 3 years
- C $1\frac{1}{2}$ years
- D 2 years

Answer: B

SSC CGL Free Mock Test (Latest Pattern)

Question 52

If $\tan x = \frac{3}{2}$, then the value of $\frac{3 \sin x + 2 \cos x}{3 \sin x - 2 \cos x}$ is:

- A 5
- B $\frac{5}{13}$
- C $\frac{13}{5}$
- D $\frac{1}{5}$

Answer: C

Question 53

The value of $4 + [335 + (42 + 10 \div 2 \times 3 - 40) + 7]$ is:

- A 167
- B 163

C 185

D 157

Answer: A

Question 54

The areas of two similar triangles are 324cm^2 and 225cm^2 . If the altitude of the smaller triangle is 10 cm, then the altitude of the bigger triangle in centimetres, is:

A 16

B 14

C 18

D 12

Answer: D

SSC CHSL Important Questions and Answers (Download PDF)

Question 55

A boat covered a distance of 15 km upstream in 5 hours and a distance of 42 km downstream in 6 hours. The speed of the stream in km/h is:

A 2

B 3

C 1.5

D 2.5

Answer: A

Question 56

If $\sec \theta$ and $\sin \theta$ ($0 < \theta < 90$) are the roots of the equation $\sqrt{6}x^2 - kx + \sqrt{6} = 0$. then the value of k is:

A $3\sqrt{3}$

B $2\sqrt{3}$

C $\sqrt{3}$

D $3\sqrt{2}$

Answer: A

Question 57

The cost price of 12 pens is equal to the selling price of 8 pens. The profit percentage is:

A 50%

B 45%

C 40%

D 55%

Answer: A

SSC CHSL Study Material

Question 58

The length and breadth of a cuboid are increased by 10% and 20%, respectively, and its height is decreased by 20%. The percentage increase in the volume of the cuboid is:

A $\frac{2}{55}$

B $\frac{4}{55}$

C $\frac{3}{55}$

D $\frac{1}{55}$

Answer: C

Question 59

If $\cos x = \frac{24}{25}$, $0 \leq x \leq 90^\circ$, then the value of $\cot x + \operatorname{cosec} x$ is:

A 1

B $\frac{7}{2}$

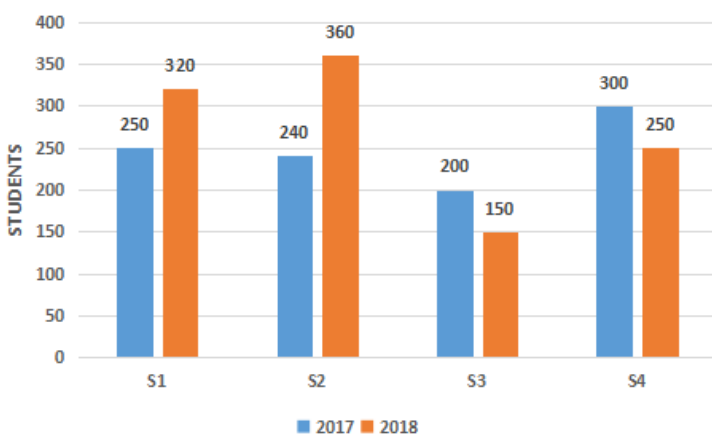
C 7

D 0

Answer: C

Question 60

The given bar graph represents the number of students admitted in four schools (S1, S2, S3, S4) during two consecutive years 2017 and 2018.



What is the average number of students admitted to all schools in 2018?

A 280

B 275

C 290

D 270

Answer: D

SSC CHSL Free App

Question 61

$(a + 2b)^2 - (a - 2b)^2$ is equal to:

A 10 ab

B 4 ab

C 8 ab

D 6 ab

Answer: C

Question 62

In an equilateral triangle, the value of each exterior angle is:

A 120°

B 100°

C 140°

D 130°

Answer: A

Question 63

If $x : y = 3 : 2$ and $x + y = 90$. Then the value $7(x - y) : (x + y)$ is:

A 7 : 6

B 7 : 9

C 2 : 3

D 7 : 5

Answer: D

Daily Free SSC Practice Set

Question 64

The radius of a circular cylinder is 5 cm and its height is 14 cm. Then the volume of cylinder in cm^3 is:

(Take $\pi = \frac{22}{7}$)

A 1254

B 1100

C 1120

D 1504

Answer: B

Question 65

Find the values of x for the given equation $3x^2 + 5x - 2 = 0$

A -3 and -2

B 3 and $-\frac{1}{2}$

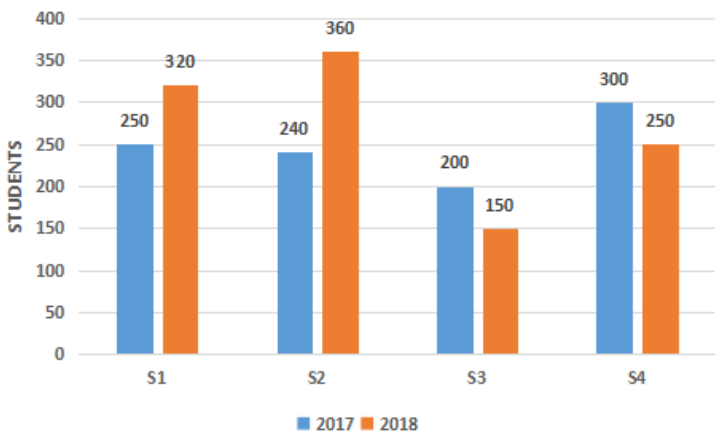
C 2 and -3

D -2 and $\frac{1}{3}$

Answer: D

Question 66

The given bar graph represents the number of students admitted in four schools (S1, S2, S3, S4) during two consecutive years 2017 and 2018.



What percentage is the average admission of schools S3 and S4 in 2018 of the average admission of schools S1 and S2 in 2017?

A 82.00%

B 81.63%

C 81.00%

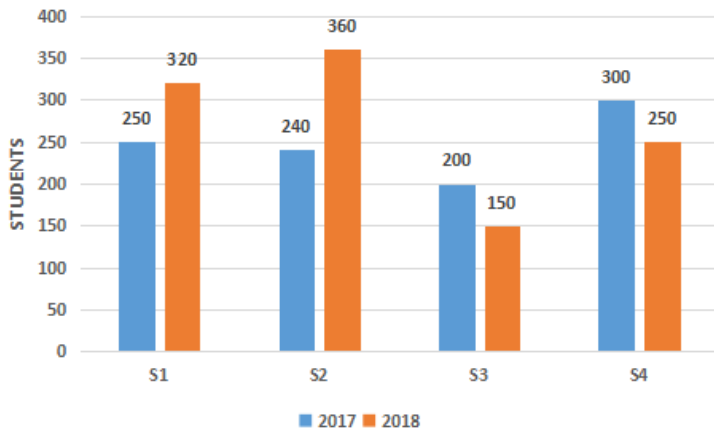
D 82.63%

Answer: B

Free SSC Study Material (18,000 Solved Questions)

Question 67

The given bargraph represents the number of students admitted in four schools (S1, S2, S3, S4) during two consecutive years 2017 and 2018.



The ratio between total number of students admitted in the four schools in 2017 to the total number of students admitted in the four schools in 2018 is:

- A 11 : 13
- B 12 : 11
- C 11 : 12
- D 13 : 11

Answer: C

Question 68

Tap A can fill a tank in 20 hours and tap B can fill the same tank in 30 hours. If both taps are opened together, then how much time will be taken to fill the tank?

- A 12 hours
- B 10 hours
- C 24 hours
- D 16 hours

Answer: A

Question 69

Two tangents AP and AQ are drawn to a circle with centre O from an external point A, where P and Q are points on the circle. If AP = 12 cm and $\angle PAQ = 60^\circ$, then the length of chord PQ is:

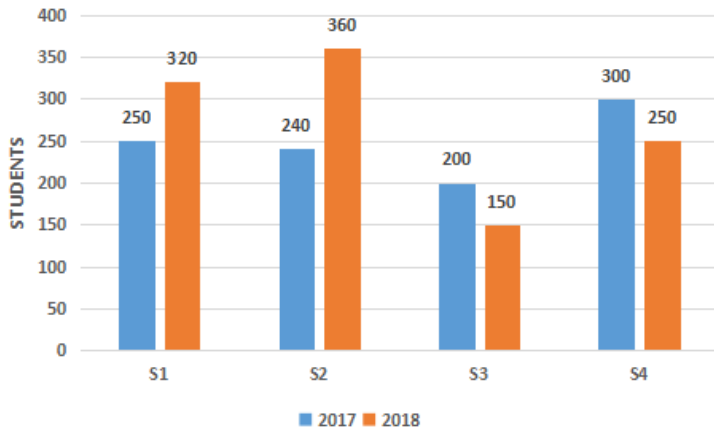
- A 10 cm
- B 24 cm
- C 12 cm
- D 16 cm

Answer: C

1500+ Very Important Free SSC Solved Questions

Question 70

The given bar graph represents the number of students admitted in four schools (S1, S2, S3, S4) during two consecutive years 2017 and 2018.



The total number of students admitted in school S3 for both years is approximately what percent of total student admitted in school S2 for both years?

- A 58.33%
- B 52.33%
- C 54.33%
- D 48.33%

Answer: A

Question 71

If $2x^3 + ax^2 + bx - 2$ leaves the remainders 7 and 0 when divided by $(2x - 3)$ and $(x + 2)$, respectively, then the values of a and b are respectively:

- A 2; -2
- B 3; -3
- C -3; 3
- D -2; 2

Answer: B

Question 72

If the cost price of a book after 10% discount is ₹486, then the marked price of the book is:

- A ₹580
- B ₹560
- C ₹600
- D ₹540

Answer: D

SSC Exam Update Videos & Free Study Material (YouTube Channel)

Question 73

Which are the two nearest numbers to 19,596, divisible by 9?

- A 19,611; 19,575
- B 19,593; 19,602
- C 19,564; 19,620
- D 19,509; 19,611

Answer: B

Question 74

Two tangents AP and AQ are drawn to a circle with centre O from an external point A, where P and Q are points on the circle. If the $\angle PAQ = 70^\circ$, then the angle AOP is equal to:

- A 45°
- B 55°
- C 60°
- D 50°

Answer: B

Question 75

Six years ago, the average of the ages of Ravi, Mohan and Govind was 32 years. If Shyam joins them now, the average of the ages of all four of them is 36 years. The present age of Shyam is:

- A 40 years
- B 32 years
- C 35 years
- D 30 years

Answer: D

[Latest Job Updates on Telegram - Join here](#)

General Awareness

Instructions

For the following questions answer them individually

Question 76

Which of the following teams won the 'FIH Series Finals Hockey Tournament' in June 2019?

- A Spain
- B Germany

- C India
- D Pakistan

Answer: C

Join SSC Daily Quiz Telegram Group

Question 77

As of January 2020, who among the following was the Chief Election Commissioner of India?

- A HS Brahma
- B Om Prakash Rawat
- C VS Sampath
- D Sunil Arora

Answer: D

Question 78

Who among the following is NOT an Indian weightlifter?

- A Dipika Pallikal
- B Mirabai Chanu
- C Rakhi Halder
- D Karnam Malleswari

Answer: A

Question 79

In which of the following years did Mahatma Gandhi launch Champaran Satyagraha?

- A 1917
- B 1922
- C 1927
- D 1914

Answer: A

25 SSC CHSL Mocks for just Rs. 149

Question 80

Who among the following won the 'Man-of-the-Match' award in the series-deciding third ODI in the three-match ODI series played between India and Australia in January 2020?

- A David Warner
- B Steven Smith

C Rohit Sharma

D Virat Kohli

Answer: C

Question 81

Which of the following blood groups is called the 'Universal Receiver'?

A A+

B O+

C O-

D AB+

Answer: D

Question 82

Which of the following is a lever that can be moved in several directions to control the movement of an image on a computer monitor or similar display screen?

A MIDI Devices

B Optical Mark Reader

C Visual Display Unit

D Joystick

Answer: D

SSC CHSL Free Mock Test

Question 83

Which of the following Himalayan regions is known as 'Shivaliks'?

A Outer Himalayas

B Lesser Himalayas

C Greater Himalayas

D Inner Himalayas

Answer: A

Question 84

Which of the following statements is NOT true about compounds?

A Compounds have a variable composition.

B Elements react to form new compounds.

C The composition of each new substance is always fixed.

D The constituents can be separated only by chemical or electrochemical reactions.

Answer: A

Question 85

The ____ layer is the upper limit of our atmosphere. It extends from the top of the thermosphere up to 10,000 km (6,200 miles).

- A Mesosphere
- B Exosphere
- C Troposphere
- D Ionosphere

Answer: B

SSC CHSL Previous Papers (DOWNLOAD PDF)

Question 86

'Mohiniyattam', is a traditional dance which originated in the state of ____ in India.

- A West Bengal
- B Andhra Pradesh
- C Kerala
- D Assam

Answer: C

Question 87

Who among the following won the 'BBC Sports Personality of the Year 2019' award?

- A Ben Stokes
- B Ken Williamson
- C Kylian Mbappe
- D Wayne Rooney

Answer: A

Question 88

Who among the following won the '2019 Man Booker International Prize' for her book 'Celestial Bodies'?

- A Anna Burns
- B Arundhati Roy
- C Salman Rushdie
- D Jokha Alharthi

Answer: D

SSC CGL Previous Papers (DOWNLOAD PDF)

Question 89

Which of the following best defines Net National Income?

- A GDP - Depreciation
- B GNP - Depreciation
- C NDP - Depreciation
- D GNP + Depreciation

Answer: B

Question 90

Ram Nath Kovind assumed office as the _____ President of India on 25th July 2017.

- A 14th
- B 13th
- C 15th
- D 12th

Answer: A

Question 91

Which of the following is NOT a good conductor of electricity?

- A Copper
- B Bromine
- C Silver
- D Graphite

Answer: B

SSC CGL Free Mock Test (Latest Pattern)

Question 92

Who among the following can be removed by the process of impeachment?

- A The Governor of India
- B The Prime Minister of India
- C The President of India
- D The Chief Minister of India

Answer: C

Question 93

Which of the following converts analogue information into digital form?

- A Barcode reader
- B Optical Mark Reading
- C Digitizer
- D Gamepad

Answer: C

Question 94

The patriotic song 'Sare Jahan Se Accha' was composed by:

- A Bankim Chandra Chatterjee
- B Rabindranath Tagore
- C Allama Muhammad Iqbal
- D Bismil Azimabadi

Answer: C

SSC CHSL Important Questions and Answers (Download PDF)

Question 95

Which of the following is an economic system in which capital goods are owned by private individuals or businesses and the production of goods and services is based on supply and demand in the general market?

- A Mixed Economy
- B State Economy
- C Capitalistic Economy
- D Communist Economy

Answer: C

Question 96

Which of the following nations has the most powerful passport in the world as per 'Henley Passport Index 2020'?

- A Japan
- B USA
- C China
- D UK

Answer: A

Question 97

Who among the following was elected as the President of the Indian National Congress in the years 1938 and 1939?

- A Rajendra Prasad
- B Subhash Chandra Bose
- C C Rajagopalachari
- D Annie Besant

Answer: B

SSC CHSL Study Material

Question 98

Which of the following nation's Prime Minister resigned from his post on 15 January 2020, along with his cabinet after its President called for Constitutional Reforms?

- A Sri Lanka
- B Italy
- C China
- D Russia

Answer: D

Question 99

Millions of years ago the Indian subcontinent was separated from the mainland by a large sea known as the:

- A Typhon
- B Prometheus
- C Tethys
- D Aegina

Answer: C

Question 100

Which of the following Indian states does NOT share its boundaries with Nepal?

- A Sikkim
- B Assam
- C Uttarakhand
- D West Bengal

Answer: B

SSC CHSL Free App

25 SSC CHSL Mocks for just Rs. 149

Downloaded from cracku.in

SSC CHSL Free Mock Test

SSC CHSL Previous Papers (DOWNLOAD PDF)

SSC CGL Previous Papers (DOWNLOAD PDF)

SSC CGL Free Mock Test (Latest Pattern)

SSC CHSL Important Questions and Answers (Download PDF)

SSC CHSL Study Material

SSC CHSL Free App

Daily Free SSC Practice Set

Free SSC Study Material (18,000 Solved Questions)

1500+ Very Important Free SSC Solved Questions

SSC Exam Update Videos & Free Study Material (YouTube Channel)

Latest Job Updates on Telegram - Join here

Join SSC Daily Quiz Telegram Group