



## SSC CHSL 12th October 2020 Shift-2

All rights reserved. No part of this publication may be reproduced, distributed, or transmitted in any form or by any means, electronic, mechanical, photocopying, recording or otherwise, or stored in any retrieval system of any nature without the permission of cracku.in, application for which shall be made to [support@cracku.in](mailto:support@cracku.in)

## English Language (Basic Knowledge)

### Instructions

For the following questions answer them individually

### Question 1

Select the wrongly spelt word.

- A Judiciary
- B Virtual
- C Ambassador
- D Appreciate

Answer: C

25 SSC CHSL Mocks for just Rs. 149

### Question 2

Select the most appropriate synonym of the given word.

**AGILE**

- A Visible
- B Guile
- C Nimble
- D Docile

Answer: C

### Question 3

Select the most appropriate meaning of the given idiom.

**Actions speak louder than words**

- A What you don't say is what you are
- B What you do is your own business
- C What you do reveals the real you
- D What you can see may not be true

Answer: C

### Question 4

Select the most appropriate synonym of the given word.

**FURTIVE**

- A Adhesive
- B Positive
- C Secretive
- D Abortive

Answer: C

## SSC CHSL Free Mock Test

### Instructions

In the following passage some words have been deleted. Fill in the blanks with the help of the alternatives given. Select the most appropriate option for each blank.

The choices we make in life determine who we are. One's life is (1)\_\_\_\_\_ marked by the exemplary choices one has made (2) \_\_\_\_\_ one's journey. The mega icon Ratan Tata has described his journey (3)\_\_\_\_\_ being a seven-year-old boy who played his (4) \_\_\_\_\_ the freedom struggle to being moved by the plight of a family on a two-wheeler which became the genesis of the world's most (5)\_\_\_\_\_ car the Tata Nano.

### Question 5

Select the most appropriate option for blank number 1.

- A rarely
- B often
- C seldom
- D never

Answer: B

### Question 6

Select the most appropriate option for blank number 2.

- A toward
- B into
- C along
- D upon

Answer: C

### Question 7

Select the most appropriate option for blank number 3.

- A above
- B for
- C though
- D from

Answer: D

## SSC CHSL Previous Papers (DOWNLOAD PDF)

### Question 8

Select the most appropriate option for blank number 4.

- A part in
- B part of
- C part from
- D part with

**Answer: A**

**Question 9**

Select the most appropriate option for blank number 5.

- A economical
- B economize
- C economic
- D economist

**Answer: A**

**Instructions**

For the following questions answer them individually

**Question 10**

Select the most appropriate meaning of the given idiom.

**A piece of cake**

- A Something serious
- B Something difficult
- C Something easy
- D Something amusing

**Answer: C**

**SSC CGL Previous Papers (DOWNLOAD PDF)**

**Question 11**

Select the most appropriate **ANTONYM** of the given word.

**RESERVED**

- A Cowardly
- B Friendly
- C Forgiving
- D Reticent

**Answer: B**

Question 12

Given below are four jumbled sentences. Select the option that gives their correct order.

- A. Behind them come camels carrying drums and small guns.
- B. The Emperor is escorted by two decorated elephants who head the procession.
- C. At the end come the platoons of soldiers in rows of two.
- D. First of all, there is a volley of guns announcing Emperor Bahadur Shah's entry into the mosque.

A BCDA

B DCBA

C DBAC

D ABDC

Answer: C

Question 13

In the given sentence identify the segment which contains the grammatical error.

Freedom of expression meaning the right to express one's own convictions and beliefs.

A Freedom of expression

B meaning the right

C to express one's own

D convictions and beliefs

Answer: B

## SSC CGL Free Mock Test (Latest Pattern)

Question 14

Select the most appropriate option to substitute the underlined segment in the given sentence. If there is no need to substitute it, select 'No improvement'.

The rising prices of essential food items have placed an weighty burden on the poor.

A No improvement

B trivial

C enormous

D lightest

Answer: C

Question 15

Select the most appropriate ANTONYM of the given word.

ENIGMA

A Make-believe

B Clarity

C Mystery

D Charade

Answer: B

Question 16

Select the word which means the same as the group of words given.  
Having no moral principles

A Mischievous

B Unscrupulous

C Ethical

D Unaware

Answer: B

## SSC CHSL Important Questions and Answers (Download PDF)

Question 17

A Resettlement

B Embarrassment

C Announcement

D Undergarment

Answer: B

Question 18

Select the most appropriate word to fill in the blank in the given sentence.

Those earning less than Rs.10,000 are \_\_\_\_\_ from paying income tax.

A adjusted

B exempted

C collected

D accepted

Answer: B

Question 19

Select the correct passive form of the given sentence.

The Delhi Police has shot an educational video on Traffic Rules for school students.

A An educational video on Traffic Rules for school students was being shot by the Delhi Police.

B An educational video on Traffic Rules for school students had been shot by the Delhi Police.

C An educational video on Traffic Rules for school students has been shot by the Delhi Police.

D An educational video on Traffic Rules for school students is being shot by the Delhi Police.

Answer: C

## SSC CHSL Study Material

### Question 20

Given below are four jumbled sentences. Select the option that gives their correct order.

- A. In order to buy that bicycle, he plans to win some prize money by teaching an illiterate person how to read and write.
- B. He needs a bicycle to win the bicycle race which would help pay off his father's debt.
- C. The film 'Douch' is about a young Iranian village boy.
- D. But the only illiterate person is a 90 year old woman who is ill-tempered and doesn't wish to learn anything.

A DABC

B ADBC

C CBAD

D CABD

Answer: C

### Question 21

Select the most appropriate option to substitute the underlined segment in the given sentence. If there is no need to substitute it, select 'No improvement'.

India has lost a veteran actor with the deceased of Shriram Lagoo.

A No improvement

B expired

C bereavement

D demise

Answer: D

### Question 22

Select the correct indirect form of the given sentence.

Sitab asked his mother, "Has it been snowing all night?"

A Sitab asked his mother if it is snowing all night.

B Sitab asked his mother if it had been snowing all night.

C Sitab asked his mother if it was snowing all night.

D Sitab asked his mother if it has snowed all night.

Answer: B

SSC CHSL Free App

**Question 23**

In the given sentence identify the segment which contains the grammatical error.

My hotel in Goa had a wonderful view of the sea in the window.

- A had a wonderful view
- B in the window
- C My hotel in Goa
- D of the sea

**Answer: B**

**Question 24**

Select the word which means the same as the group of words given.

Using right and left hand equally well

- A Ambidextrous
- B Left-handed
- C Inexpert
- D Unskilled

**Answer: A**

**Question 25**

Select the most appropriate word to fill in the blank in the given sentence.

The teacher \_\_\_\_\_ the student for cheating.

- A refused
- B invoked
- C praised
- D rebuked

**Answer: D**

## Daily Free SSC Practice Set

### General Intelligence

**Instructions**

For the following questions answer them individually



Question 26

Read the given statements and conclusions carefully. Assuming that the information given in the statements is true, even if it appears to be at variance with commonly known facts, decide which of the given conclusions logically follow(s) from the statements.

Statements:

1. All parrots are pigeons.
2. No pigeons are tables.

Conclusions:

- I. All pigeons are tables.
- II. No parrot is a tables.

- A Only conclusion I follows.  
B Either conclusion I or II follows.  
C Both conclusions I and II follow.  
D Only conclusion II follows.

Answer: D

Free SSC Study Material (18,000 Solved Questions)

Question 27

Select the option figure that can replace the question mark(?) in the following series.



Figure 1

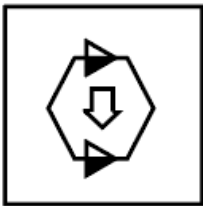


Figure 2



Figure 3


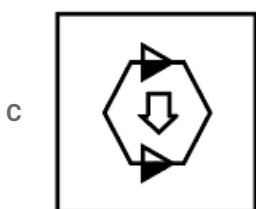
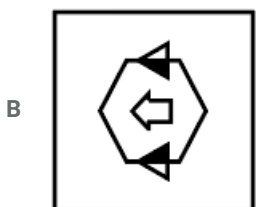
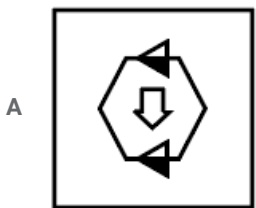
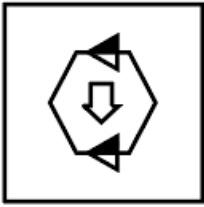


Figure 4



D



Answer: D

Question 28

Complete the following series.

7,16,34,70, \_\_\_\_, \_\_\_\_

A 144, 292

B 144, 286

C 142, 286

D 142, 294

Answer: C

Question 29

Complete the following series by replacing the question mark (?) given in the series.

AZ, CX, EV, ? IR

A GS

B GT

C HT

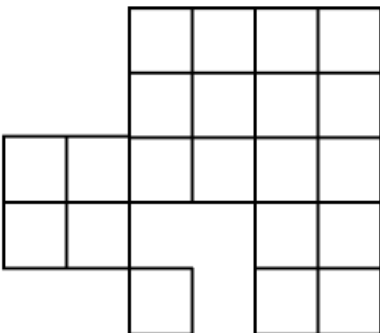
D FT

Answer: B

## 1500+ Very Important Free SSC Solved Questions

Question 30

How many squares are there in the given figure?



A 29

B 33

C 32

D 34

Answer: C

Question 31

Select the option in which the numbers share the same relationship as that shared by the given number-pair.

34 : 210

A 47 : 282

B 66 : 402

C 54 : 100

D 38 : 236

Answer: B

Question 32

In a certain code language, 'LOCKER' is written as 'OLXPVI'. How will 'GLOBAL' be written as in that language?

A JOREDO

B HUYTRE

C TOLYZO

D UPMZAP

Answer: C

## SSC Exam Update Videos & Free Study Material (YouTube Channel)

Question 33

Select the option in which the numbers are related in the same way as are the numbers in the given set.

(5, 6, 61)

A (3, 8, 24)

B (9, 4, 26)

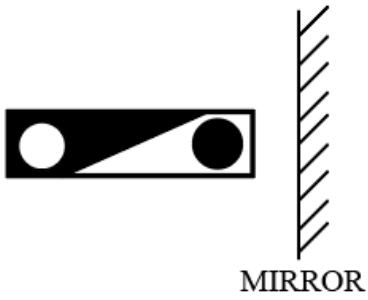
C (5, 2, 49)

D (3, 4, 25)

Answer: D

Question 34

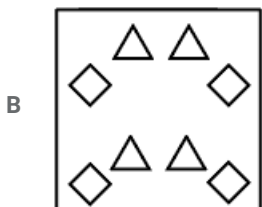
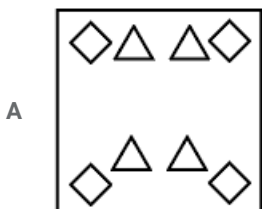
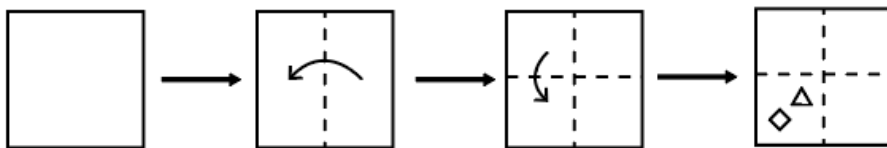
Select the correct mirror image of the given figure.

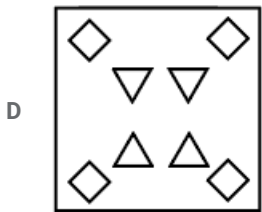
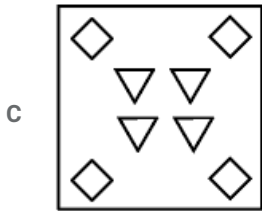


Answer: B

Question 35

The sequence of folding a paper and the manner in which the folded paper has been cut is shown in the following figures. How would this paper look when unfolded?





Answer: D

**Latest Job Updates on Telegram - Join here**

Question 36

If '+' means 'divided by', '-' means 'add', '×' means 'minus' and '÷' means 'multiplied by', what will be the value of the following expression?

$$[\{(32 \times 24) - (4 \div 3)\} + (3 - 2)] \div 3$$

- A 6
- B 8
- C 10
- D 12

Answer: D

Question 37

In certain code language, NIB is coded as 112 and COB is coded as 122. How will JET be coded as in that language?

- A 109
- B 102
- C 92
- D 81

Answer: C

Question 38

Select the option that is related to the third term in the same way as the second term is related to the first term.

EASY: IETZ :: LAKE : \_\_\_\_\_

- A MELI
- B PELI
- C MBLI

D PBKL

Answer: A

Join SSC Daily Quiz Telegram Group

Question 39

Select the option in which the numbers are related in the same way as are the numbers in the given set.

(9, 217, 8)

A (4, 37, 3)

B (2, 76, 5)

C (5, 625, 6)

D (3, 49, 2)

Answer: A

Question 40

Four number-pairs have been given, out of which three are alike in some manner and one is different. Select the number-pair that is different from the rest.

A 7 - 50

B 4 - 17

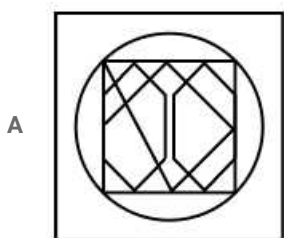
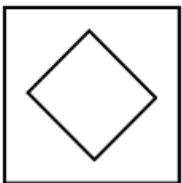
C 6 - 35

D 5 - 26

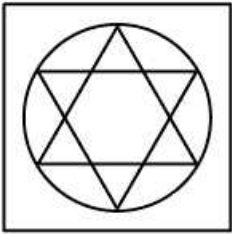
Answer: C

Question 41

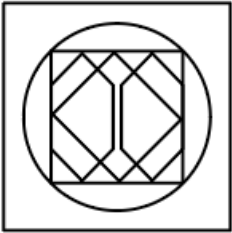
Select the option in which the given figure is embedded. (Rotation is not allowed)



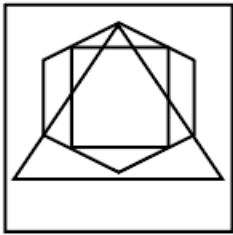
B



C



D



Answer: C

## 25 SSC CHSL Mocks for just Rs. 149

### Question 42

Select the option that is related to the third letter-cluster in the same way as the second letter-cluster is related to the first letter-cluster.

LAME : OXPB :: TREE : ?

A VNGB

B UMFA

C WOHB

D QUBH

Answer: C

### Question 43

Select the combination of letters that when sequentially placed from left to right in the blanks of the given letter series will complete the series.

\_\_bc\_daabc\_a\_\_ccd

A cacdca

B aacdca

C accdaa

D accdca

Answer: B

Question 44

There are 6 boys in a class of 11 students. A student is chosen from the class at random to be made the class monitor. What is the probability that the class monitor is a girl?

A  $\frac{5}{11}$

B 1

C  $\frac{6}{11}$

D  $\frac{7}{11}$

Answer: A

## SSC CHSL Free Mock Test

Question 45

Two positions of the same dice are shown. Select the number that will be on the face opposite to the one having the number 5.



A 6

B 3

C 1

D 4

Answer: B

Question 46

X is the mother of A. Y is the sister of B's father. R is the father of B. A and Z are sisters. B is the brother of Z. How is R related to X?

A Father

B Father-in-law

C Son

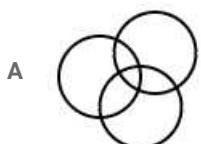
D Husband

Answer: D

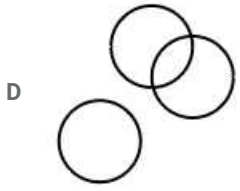
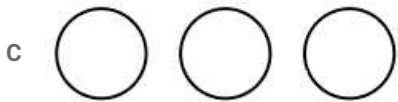
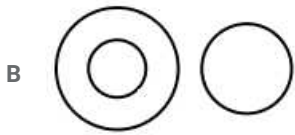
Question 47

Select the Venn diagram that best represents the relationship between the following classes.

Chandigarh, India, Seoul







Answer: B

## SSC CHSL Previous Papers (DOWNLOAD PDF)

### Question 48

Arrange the given words in a logical and meaningful sequence.

1. Shoulder
2. Thigh
3. Stomach
4. Chest
5. Face
6. Neck

A 5, 6, 1, 4, 3, 2

B 2, 4, 6, 1, 3, 2

C 5, 6, 3, 4, 1, 2

D 5, 6, 1, 2, 3, 4

Answer: A

### Question 49

Four letter-clusters have been given, out of which three are alike in some manner and one is different. Select the odd letter-cluster.

A TSRQ

B PONL

C MLKJ

D WVUT

Answer: B

### Question 50

Showing the picture of Shikha, Parul said, "she is the grandmother of my father's only son". How is the Shikha related to Parul?

A Grandmother

B Mother

- C Sister
- D Daughter in law

Answer: A

## SSC CGL Previous Papers (DOWNLOAD PDF)

### Quantitative Aptitude(Basic Arithmetic Skill)

#### Instructions

For the following questions answer them individually

#### Question 51

Length and breadth of rectangular field are in the ratio 5 : 2. If the perimeter of the field is 238 m. Find the length of the field.

- A 84 m
- B 85 m
- C 82 m
- D 83 m

Answer: B

## SSC CGL Free Mock Test (Latest Pattern)

#### Question 52

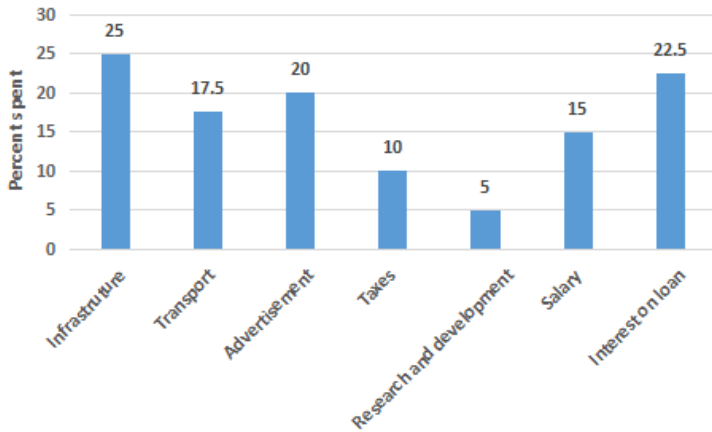
A man divided his journey into three parts of distances of 18 km, 20 km and 27 km. He travelled the distances at the speeds of 6 km/h, 5 km/h and 9 km/h, respectively. What was his average speed during the entire journey?

- A 6.5 km/h
- B 4.5 km/h
- C 7.5 km/h
- D 5.5 km/h

Answer: A

Question 53

The given graph represents the percentage distribution of the total expenditure of a company. Study the graph and answer the question that follows.



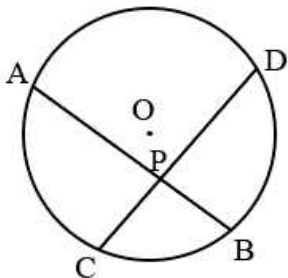
What is the ratio of the total expenditure on 'Infrastructure' and 'Transport' to the total expenditure on 'Taxes' and 'Interest on Loans'?

- A 16 : 13
- B 15 : 13
- C 17 : 13
- D 14 : 13

Answer: C

Question 54

In the given figure, O is the centre of the circle. Its two chords AB and CD intersect each other at the point P within the circle. If AB = 15 cm, PB = 9 cm, CP = 3 cm, then find the length of PD.



- A 20 cm
- B 22 cm
- C 16 cm
- D 18 cm

Answer: D

**SSC CHSL Important Questions and Answers (Download PDF)**

Question 55

On selling a bike for ₹2500 a seller incurs a loss of 20%. What price would have caused him to lose 30%?

- A ₹2186.5

B ₹2187.5

C ₹2188.5

D ₹2185.5

Answer: B

Question 56

If  $a - b = 4$  and  $a^3 - b^3 = 88$ , then find the value of  $a^2 - b^2$ .

A  $7\sqrt{6}$

B  $9\sqrt{6}$

C  $6\sqrt{6}$

D  $8\sqrt{6}$

Answer: D

Question 57

If  $x + y + z = 10$ ,  $x^3 + y^3 + z^3 = 75$  and  $xyz = 15$ , then find the value of  $x^2 + y^2 + z^2 - xy - yz - zx$

A 3

B 5

C 6

D 4

Answer: A

## SSC CHSL Study Material

Question 58

Mohan offers to sell his articles at a discount of 20%, but he marks his articles by increasing the price of each by 35%. What percentage would his gain be?

A 9%

B 7%

C 8%

D 10%

Answer: C

Question 59

Find the value of  $\frac{\tan 60^\circ - \tan 15^\circ}{1 + \tan 60^\circ \tan 15^\circ}$

A  $\frac{\sqrt{3}}{2}$

B 1

C  $\frac{1}{2}$

D  $\frac{1}{\sqrt{2}}$

Answer: B

Question 60

If  $3 \sec^2 x - 4 = 0$ , then the value of  $x (0 < x < 90^\circ)$

A  $15^\circ$

B  $45^\circ$

C  $30^\circ$

D  $60^\circ$

Answer: C

SSC CHSL Free App

Question 61

Find the value of  $2.1 + 2.25 \div [63 - 7.5 \times 8 + (13 - 2.5)]$ .

A 3.0

B 2.9

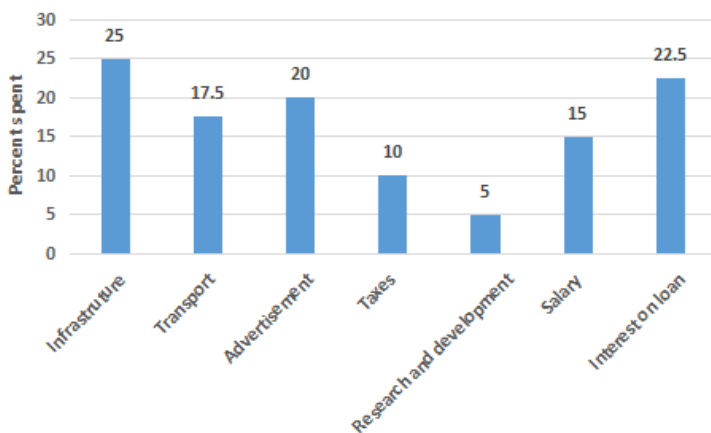
C 3.1

D 2.8

Answer: A

Question 62

The given graph represents the percentage distribution of the total expenditure of a company. Study the graph and answer the question that follows.



The expenditure on 'Interest on loans' is what percentage more than the expenditure on 'Transport'?

A 5%

B 2%

C 4%

D 3%  
Answer: A

Question 63

A runner is running at a speed of 40 km/h. If he runs at a speed of 30 km/h, then what will the decrease in the percentage of his speed be?

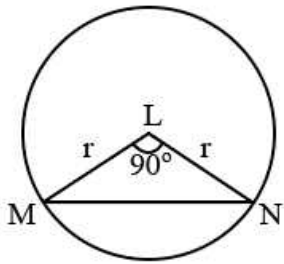
- A 30%
- B 25%
- C 20%
- D 15%

Answer: B

Daily Free SSC Practice Set

Question 64

In the figure, L is the centre of the circle, and ML is the perpendicular to LN. If the area of the triangle MLN is 36, then the area of the circle is:



- A  $68\pi$
- B  $70\pi$
- C  $66\pi$
- D  $72\pi$

Answer: D

Question 65

If  $4 \cos^2 \theta - 3 \sin^2 \theta + 2 = 0$ , then the value of  $\tan \theta$  is (where  $0 \leq \theta < 90^\circ$ )

- A 1
- B  $\sqrt{6}$
- C  $\sqrt{2}$
- D  $\frac{1}{\sqrt{3}}$

Answer: B

**Question 66**

In how many years will the simple interest on a sum of money be equal to the principle at rate of  $12\frac{1}{4}$  p.a. ?

- A 7 years
- B 8 years
- C 6 years
- D 5 years

**Answer: B**

**Free SSC Study Material (18,000 Solved Questions)**

**Question 67**

₹3,600 is divided between Seema, Komal and Rita, such that the ratios of the shares of Seema : Komal = 1.5 : 2 and Komal : Rita = 2 : 2.5. Find Rita's share.

- A ₹1,400
- B ₹1,200
- C ₹1,300
- D ₹1,500

**Answer: D**

**Question 68**

The average of the runs of a cricket player in 20 matches is 35. If the average of the first 12 matches is 45, find the average of the last 8 matches.

- A 20
- B 16
- C 22
- D 18

**Answer: A**

**Question 69**

When  $(77^{77} + 77)$  is divided by 78, the remainder is:

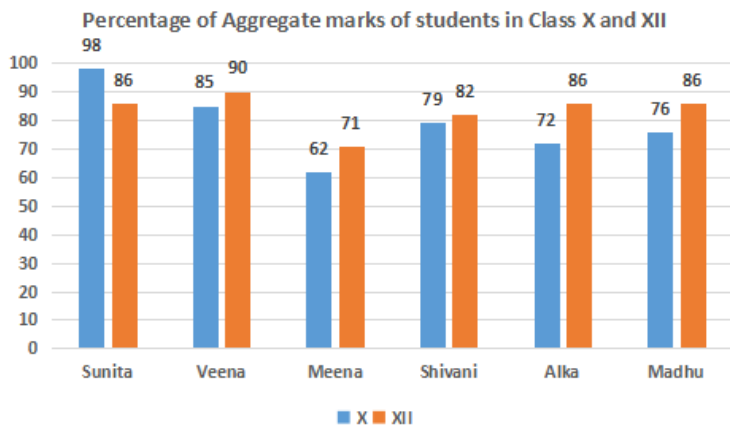
- A 74
- B 77
- C 75
- D 76

**Answer: D**

## 1500+ Very Important Free SSC Solved Questions

### Question 70

The following graph shows the performance in aggregate marks of 2 board examinations of a group of friends. On the basis of the graph, identify the girl who has shown the maximum improvement from class X to class XII.



A Veena

B Alka

C Meena

D Madhu

Answer: B

### Question 71

30 men working 8 hours per day can dig a pond in 16 days. By working how many hours per day can 32 men dig two same ponds, in 20 days?

A 6 hours per day

B 7 hours per day

C 5 hours per day

D 8 hours per day

Answer: A

### Question 72

If  $a + b = 11$  and  $ab = 15$  and  $a^2 + b^2$  is equal to

A 91

B 92

C 93

D 90

Answer: A



## SSC Exam Update Videos & Free Study Material (YouTube Channel)

### Question 73

XYZ is a triangle. If the medians ZL and YM intersect each other at G, then (Area of  $\triangle GLM$ : Area of  $\triangle XYZ$ ) is:

- A 1 : 12
- B 1 : 14
- C 1 : 11
- D 1 : 10

Answer: A

### Question 74

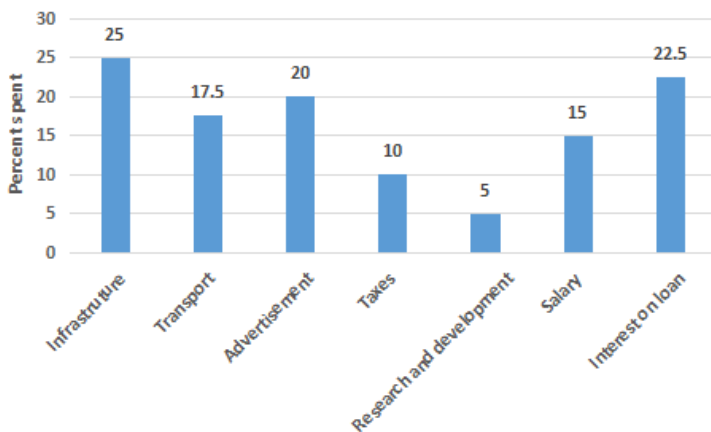
PQR is an isosceles triangle such that  $PQ = QR = 10$  cm and  $\angle PQR = 90^\circ$ . What is the length of the perpendicular drawn from Q on PR?

- A  $6\sqrt{2}$  cm
- B  $7\sqrt{2}$  cm
- C  $5\sqrt{2}$  cm
- D  $4\sqrt{2}$  cm

Answer: C

### Question 75

The given graph represents the percentage distribution of the total expenditure of a company. Study the graph and answer the question that follows.



The total expenditure of the company is how many times the total expenditure on 'Research and Development and 'Salary'?

- A 5.75
- B 8.75
- C 7.75
- D 6.75

Answer: A

## Latest Job Updates on Telegram - Join here

### General Awareness

#### Instructions

For the following questions answer them individually

#### Question 76

New Delhi's Lotus Temple was designed by an architect from \_\_\_\_\_.

- A Iran
- B Germany
- C Japan
- D UAE

Answer: A

### Join SSC Daily Quiz Telegram Group

#### Question 77

When did the Sarkaria Commission submit its report?

- A 1986
- B 1988
- C 1984
- D 1985

Answer: B

#### Question 78

Which country is to train Indian flight surgeons to enable them to monitor the health of astronauts selected for the human space mission Gaganyaan?

- A Russia
- B USA
- C China
- D France

Answer: D

#### Question 79

The famous Gupta period Dashavatara Temple, recognised as one of the earliest Panchayatana temples in north India, is located at:

- A Tigawa
- B Deogarh
- C Nachna - Kuthara

D Bhitargaon

Answer: B

## 25 SSC CHSL Mocks for just Rs. 149

Question 80

How many person(s) has/have been selected for the Rajiv Gandhi Khel Ratna Award, 2019?

A 1.3

B 2.1

C 3.4

D 4.2

Answer: D

Question 81

Who among the following took charge as the 39th President of the BCCI in October 2019?

A Sashank Manohar

B CK Khanna

C Sourav Ganguly

D Anurag Thakur

Answer: C

Question 82

Which of the following divisions of plants does NOT have a well differentiated body?

A Gymnosperms

B Bryophyta

C Thallophyta

D Pteridophyta

Answer: C

## SSC CHSL Free Mock Test

Question 83

What is the name of the first crude oil pipeline constructed in India?

A Kandla-Bhatinda Pipeline

B Hajira-Bijapur-Jagdishpur (HBJ) Gas Pipeline

C Naharkatia-Nunmati-Barauni Pipeline

D Mumbai High-Mumbai-Ankleshwar-Kayoli Pipeline

Answer: C

**Question 84**

What was the magnitude of the Indian Ocean Tsunami 2004?

- A 8.6
- B 8.9
- C 9.1
- D 7.4

Answer: C

**Question 85**

In the field of computing, what does ENIAC stand for?

- A Electronic Numerical Integrated Advanced Computer
- B Electronic Numerical Integrator and Computer
- C Electronic Numbers Integration and Computer
- D Electronic Numerals Integration and Computing

Answer: B

**SSC CHSL Previous Papers (DOWNLOAD PDF)**

**Question 86**

Which of the following sectors of the economy has the highest share in India's GDP?

- A Industrial
- B Service
- C Manufacturing
- D Agriculture

Answer: B

**Question 87**

The F7 key is commonly used in Microsoft programs such as Microsoft Word, Outlook, etc. for

- A renaming files and folders
- B searching content in various apps
- C checking spellings and grammar
- D opening help

Answer: C

**Question 88**

**The National Game of Bhutan is:**

- A taekwondo
- B shooting
- C archery
- D wrestling

**Answer: C**

## SSC CGL Previous Papers (DOWNLOAD PDF)

**Question 89**

**Which of the following banks prints the currency notes in India?**

- A Reserve Bank of India
- B NABARD
- C ICICI Bank
- D State Bank of India

**Answer: A**

**Question 90**

**During the phenomenon of aphelion, the approximate distance between the earth and the sun is:**

- A 152 million km
- B 137 million km
- C 142 million km
- D 147 million km

**Answer: A**

**Question 91**

**The novel 'Chanakya' which won the Sahitya Akademi Award in 2019 was in which language?**

- A Assamese
- B Hindi
- C Bengali
- D Gujarati

**Answer: A**

## SSC CGL Free Mock Test (Latest Pattern)

Question 92

What is the symbol of Tin?

- A Ti
- B Si
- C Ta
- D Sn

Answer: D

Question 93

What is the approximate speed of sound in distilled water at  $25^{\circ}\text{C}$  ( $77^{\circ}\text{F}$ )?

- A 1598 m/s
- B 1284 m/s
- C 1498 m/s
- D 3980 m/s

Answer: C

Question 94

Which of the following Articles of the Constitution of India has a provision for the Constitution of Legislatures in States?

- A 165
- B 168
- C 163
- D 167

Answer: B

## SSC CHSL Important Questions and Answers (Download PDF)

Question 95

Who was the founder of the City of Hyderabad?

- A Nizam-ul-Mulk
- B Sekhabat Jung
- C Salabat Jung
- D Nasir Jung

Answer: A

Question 96

How many West African nations agreed to change the name of their common currency from 'CFA Franc' to 'Eco' in December 2019?

- A 1.5
- B 2.8
- C 3.6
- D 4.7

Answer: A

**Question 97**

Ethiopia's first satellite was launched from which Country's Space Station in December 2019 ?

- A China
- B USA
- C India
- D Russia

Answer: A

## SSC CHSL Study Material

**Question 98**

Most of the atmospheric Ozone is found in which layer of atmosphere?

- A Thermosphere
- B Stratosphere
- C Mesosphere
- D Troposphere

Answer: B

**Question 99**

Miss Universe 2019 is the native of which of the following nations?

- A South Africa
- B Australia
- C France
- D Jamaica

Answer: C

**Question 100**

Bhatiali is the folk music of which of the following states?

- A Karnataka
- B Tamil Nadu

C West Bengal

D Kerala

Answer: C

**SSC CHSL Free App**

**25 SSC CHSL Mocks for just Rs. 149**

**SSC CHSL Free Mock Test**

**SSC CHSL Previous Papers (DOWNLOAD PDF)**

**SSC CGL Previous Papers (DOWNLOAD PDF)**

**SSC CGL Free Mock Test (Latest Pattern)**

**SSC CHSL Important Questions and Answers (Download PDF)**

**SSC CHSL Study Material**

**SSC CHSL Free App**

**Daily Free SSC Practice Set**

**Free SSC Study Material (18,000 Solved Questions)**

**1500+ Very Important Free SSC Solved Questions**

**SSC Exam Update Videos & Free Study Material (YouTube Channel)**

**Latest Job Updates on Telegram - Join here**

**Join SSC Daily Quiz Telegram Group**