



## SSC CHSL 13th October 2020 Shift-3

All rights reserved. No part of this publication may be reproduced, distributed, or transmitted in any form or by any means, electronic, mechanical, photocopying, recording or otherwise, or stored in any retrieval system of any nature without the permission of cracku.in, application for which shall be made to [support@cracku.in](mailto:support@cracku.in)

## English Language (Basic Knowledge)

### Instructions

For the following questions answer them individually

### Question 1

Select the correctly spelt word.

- A Studiuos
- B Business
- C Memmoir
- D Restaurent

Answer: B

25 SSC CHSL Mocks for just Rs. 149

### Question 2

Select the most appropriate ANTONYM of the given word.

**METROPOLITAN**

- A National
- B Insular
- C Federal
- D Provincial

Answer: D

### Question 3

Select the most appropriate option to fill in the blank in the given sentence.

A \_\_\_\_\_ of small stones is called a mosaic.

- A design
- B structure
- C mound
- D pattern

Answer: D

### Question 4

Select the synonym of the given word.

**Nebulous**

- A Dearly
- B Faith
- C Vague

D Stable

Answer: C

## SSC CHSL Free Mock Test

### Instructions

In the following passage some words have been deleted. Fill in the blanks with the help of the alternatives given. Select the most appropriate option for each blank.

A city, predominantly made of red sandstone, Fatehpur Sikri (1)\_\_\_\_\_ founded in the 16th century by the Mughal Emperor, Akbar. It is essentially a fortified city (2)\_\_\_\_\_ had been the capital of Akbar (3)\_\_\_\_\_ fifteen years. Now a UNESCO world heritage site (4)\_\_\_\_\_ a famous tourist attraction, it is a fine (5)\_\_\_\_\_ of Mughal architecture.

### Question 5

Select the most appropriate option to fill in blank number 1.

A is

B were

C was

D had

Answer: C

### Question 6

Select the most appropriate option to fill in blank number 2.

A who

B where

C what

D which

Answer: D

### Question 7

Select the most appropriate option to fill in blank number 3.

A since

B for

C from

D by

Answer: B

## SSC CHSL Previous Papers (DOWNLOAD PDF)

### Question 8

Select the most appropriate option to fill in blank number 4.

- A if
- B but
- C and
- D nor

**Answer: C**

**Question 9**

Select the most appropriate option to fill in blank number 5.

- A ruin
- B example
- C organization
- D infrastructure

**Answer: B**

**Instructions**

For the following questions answer them individually

**Question 10**

Select the option that is the direct form of the given sentence.

**Nidhi exclaimed that it was a beautiful painting.**

- A Nidhi said to the artist, "That looks like a beautiful painting!"
- B Nidhi told him in wonder, "How beautiful!"
- C Nidhi exclaimed, "What a beautiful painting!"
- D Nidhi said to the artist in surprise, "How beautiful you made that painting!"

**Answer: C**

**SSC CGL Previous Papers (DOWNLOAD PDF)**

**Question 11**

Select the most appropriate meaning of the idiom.

**To have a gut feeling**

- A To experience discomfort
- B To feel an instinct or intuition
- C To have pain in the abdomen
- D To suffer from inflammation

**Answer: B**

**Question 12**

Select the most appropriate ANTONYM of the given word.

**INSTANT**

- A Diverse
- B Prompt
- C Similar
- D Gradual

**Answer: D**

**Question 13**

Select the word which means the same as the group of words given.

**Tending to associate with others of one's kind**

- A Genial
- B Harmonious
- C Gregarious
- D Congruous

**Answer: C**

**SSC CGL Free Mock Test (Latest Pattern)**

**Question 14**

Select the most appropriate synonym of the given word.

**RIND**

- A Shade
- B Peel
- C Petal
- D Leaf

**Answer: B**

**Question 15**

Identify the segment in the given sentence which contains the grammatical error.

**We noticed that most of the shoppers in the mall looking for packets of ready to cook food.**

- A in the mall looking for
- B We noticed that
- C packets of ready to cook food
- D most of the shoppers

**Answer: A**

**Question 16**

Given below are four jumbled sentences. Select the option that gives their correct order.

- A. They grew cabbages and carrots in their back yard.
- B. The family was very poor and was always hungry because there was a war on.
- C. They also had a chicken, which provided the family with eggs, but still they were hungry.
- D. Their country had been invaded by a foreign army.

A CADB

B DABC

C CDAB

D BDAC

Answer: D

**SSC CHSL Important Questions and Answers (Download PDF)**

**Question 17**

Select the option that is the passive form of the given sentence.

The police brought a search warrant when they raided his house.

- A A search warrant was brought by the police when they raided his house.
- B A search warrant was brought when they raided his house by the police.
- C The police had raided his house and brought a search warrant.
- D A search warrant had been brought when the police raided his house.

Answer: A

**Question 18**

Select the word which means the same as the group of words given.

Lasting for a very short time

- A Illusory
- B Ephemeral
- C Endless
- D Infinite

Answer: B

**Question 19**

Select the most appropriate option to fill in the blank in the given sentence.

The performances of the notable dancers and guest artists \_\_\_\_\_ the audience.

- A enthralled
- B occupied

C absorbed

D immersed

Answer: A

## SSC CHSL Study Material

Question 20

Select the most appropriate meaning of the underlined idiom in the given sentence.

Akshay is likely to take the heat for having miscalculated the expenses.

A feel very hot

B receive criticism

C scold everyone

D enjoy warm climate

Answer: B

Question 21

Select the INCORRECTLY spelt word.

A Inclusion

B Discriminatory

C Excess

D Supportors

Answer: D

Question 22

Identify the segment in the given sentence which contains the grammatical error.

Most of voters in Taiwan seem to have once again voted for the democratic party and President Tsai Ing-wen.

A the democratic party

B in Taiwan seem to have

C once again voted for

D Most of voters

Answer: D

## SSC CHSL Free App

Question 23

Select the most appropriate option to substitute the underlined segment in the given sentence. If there is no need to substitute it, select No improvement.

Since it falls on the floor, her dog, a black Labrador, gulped the biscuit down.

- A Since it fell
- B No improvement
- C Because it is falling
- D As it have fallen

Answer: A

**Question 24**

Select the most appropriate option to substitute the underlined segment in the given sentence. If there is no need to substitute it, select No improvement.

This is a class who is expected to do exceptionally well in the quiz next week.

- A which is expected to do
- B No improvement
- C which are expecting to be doing
- D that is expecting to done

Answer: A

**Question 25**

Given below are four jumbled sentences. Select the option that gives their correct order.

- A. I sow a seed.
- B. I saw the sapling.
- C. I saw the sprout.
- D. I saw the plant.

- A ABCD
- B CABD
- C ACBD
- D DBAC

Answer: C

## Daily Free SSC Practice Set

### General Intelligence

**Instructions**

For the following questions answer them individually

**Question 26**

Pointing to a picture of Rajiv, a lady Neenasaid, "His sister's father is the only son of my father-in-law." Howis Neena related to Rajiv?

- A Sister
- B Granddaughter
- C Mother



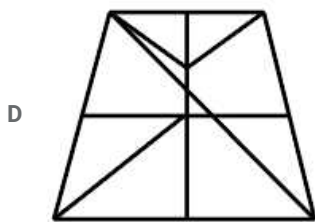
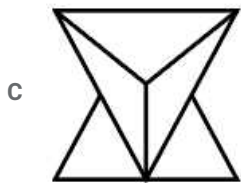
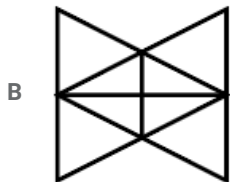
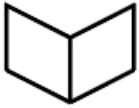
D Paternal Grandmother

Answer: C

## Free SSC Study Material (18,000 Solved Questions)

Question 27

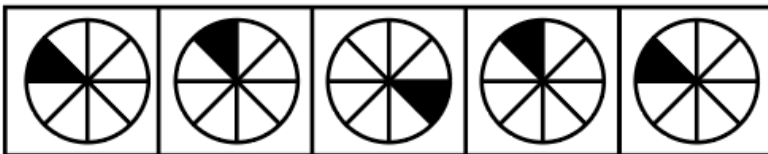
Select the option in which the given figure is embedded. (Rotation is NOT allowed)



Answer: B

Question 28

Select the figure that will come next in the following figure series.





Answer: A

**Question 29**

Which two signs should be interchanged in the given equation to make it correct?

$$4 - 7 \times 28 + 12 \div 3 = 4$$

A  $-$  and  $\div$

B  $\times$  and  $\div$

C  $\times$  and  $+$

D  $\times$  and  $-$

Answer: D

## 1500+ Very Important Free SSC Solved Questions

**Question 30**

Select the option that is related to the third term in the same way as the second term is related to the first term.

EASY : DDNF :: MAKE : ?

A NXPX

B XXPN

C LFDL

D LDFL

Answer: D

**Question 31**

Find the missing number from the below options.

16	30	18
4	34	?
10	32	40

- A 58
- B 38
- C 22
- D 62



Answer: D

**Question 32**

Rahul is three times as old as Amar. Amber was half the age of Rahul three years ago. After four years from now, Rahul will be 43. What are the present ages of Amar and Amber?

- A 13, 18
- B 39, 21
- C 38, 21
- D 13, 21

Answer: D

**SSC Exam Update Videos & Free Study Material (YouTube Channel)**

**Question 33**

Select the correct alternative to indicate the arrangement of the following words in a logical and meaningful order.

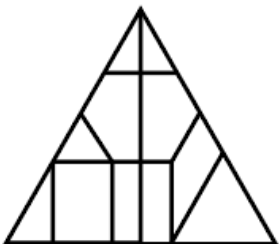
1. State
2. Village
3. District
4. City
5. Country

- A 4, 3, 5, 2, 1
- B 2, 4, 3, 1, 5
- C 1, 3, 5, 2, 4
- D 1, 3, 5, 4, 2

Answer: B

**Question 34**

How many triangles are there in the given figure?



- A 12

- B 8
- C 10
- D 15

Answer: C

**Question 35**

Select the option that is related to the third term in the same way as the second term is related to the first term.

**AIDS : VIRUS :: MALARIA: ?**

- A Parasite
- B Nematodes
- C Virus
- D Bacteria

Answer: A

**Latest Job Updates on Telegram - Join here**

**Question 36**

Select the option in which the number set shares the same relationship as that shared by the given number set.

**(6, 42, 1890)**

- A (2, 6, 54)
- B (9, 102, 1190)
- C (4, 20, 420)
- D (7, 23, 1069)

Answer: A

**Question 37**

Select the combination of letters that when sequentially placed in the gaps of the given letter series will complete the series.

**abcc\_\_ab\_\_de\_\_ccd\_eab\_\_de**

- A ddecdbccdcda
- B ddecabdabddcc
- C ccdabdcddde
- D ddecabdabcccd

Answer: D

**Question 38**

Select the letter cluster that will replace the question mark (?) in the following series.

**JAM, KEL, LIK, ?, NUI**

- A MAJ
- B MEJ
- C JEM
- D MOJ

Answer: D

## Join SSC Daily Quiz Telegram Group

### Question 39

Three different positions of the same dice are shown. Select the symbol that will be on the face opposite to the one having '!'.  


- A %
- B #
- C \$
- D &

Answer: A

### Question 40

Select the number that will come next in the following series.

6, 9, 13, 21, 38, 71, ?

- A 101
- B 121
- C 129
- D 99

Answer: C

### Question 41

Select the option in which the words in the word-pair shares the same relationship as that shared by the given word-pair.

Tiger : Felidae

- A Elephant : Canidae
- B Rabbit : Bovidae
- C Whale : Cetacea
- D Lion : Leporidae

Answer: C

## 25 SSC CHSL Mocks for just Rs. 149

### Question 42

In certain code language, KNOWLEDGE is written as DEEGKLNOW. How will SERIAL be written as in the same language?


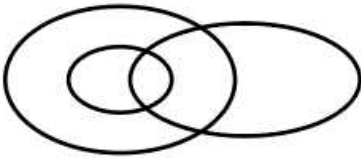
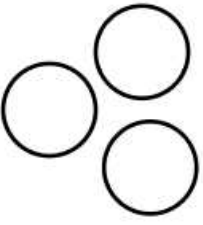

- A AELIRS
- B AEIRLM
- C AEILRS
- D AEILRM

Answer: C

### Question 43

Select the Venn diagram that best represents the relationship between the following classes.

Doctors, Neurosurgeons, Female

- A 
- B 
- C 
- D 

Answer: B

### Question 44

A boy has a total of ₹740 in the denominations of two rupee, five rupee, ten rupee and twenty rupee notes. If the number of each denomination is equal, what is the total number of notes the boy has?

- A 40
- B 20
- C 60
- D 80

Answer: D

## SSC CHSL Free Mock Test

### Question 45

Study the given pattern carefully and select the number that can replace the question mark (?) in it.

(1, 2, 2) (7, 35, 5) (12, 96, ?)

- A 9
- B 8
- C 11
- D 7

Answer: B

### Question 46

Read the given statements and conclusions carefully. Assuming that the information given in the statements is true, even if it appears to be at variance with commonly known facts, decide which of the given conclusions logically follow(s) from the statements.

Statements:

- I. Some men are animals.
- II. All trees are rivers.
- III. All animals are trees.

Conclusions:

- I. Some men are rivers.
- II. All rivers are animals.
- III. All rivers are men.
- IV. All men are trees.

- A Only conclusions I and II follow
- B Only conclusions III and II follow
- C Only conclusion I follows
- D Only conclusion IV follows

Answer: C

### Question 47

In a certain code language, IF is written as 225 and BUT is written as 1849. How will SLIP be written as in that language?

- A 6313
- B 3136
- C 3163
- D 1336


Answer: B

Question 48


Select the correct mirror image of the given figure when the mirror is placed to the right side of the figure.



A



B



C



D



Answer: A

Question 49

Four letter-clusters have been given, out of which three are alike in some manner and one is different. Select the one that is different.

A ADGPI

B OMKLU

C ECVMU

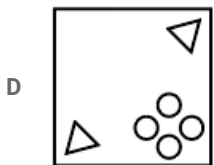
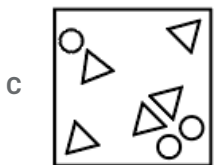
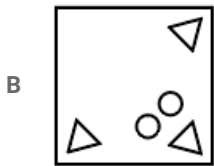
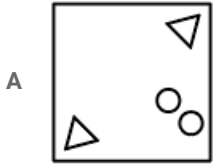
D VDCKA

Answer: D



Question 50

The sequence of folding a piece of paper and the manner in which the folded paper has been cut is shown in the following figures. How would this paper look when unfolded?



Answer: D

**SSC CGL Previous Papers (DOWNLOAD PDF)**

**Quantitative Aptitude(Basic Arithmetic Skill)**

**Instructions**

For the following questions answer them individually

**Question 51**

In  $\triangle PQR$ , S and T are mid-points of PQ and PR, respectively. If  $\angle QPR = 75^\circ$  and  $\angle PRQ = 40^\circ$ , then  $\angle TSQ$  is:

A  $105^\circ$

B  $135^\circ$

C  $115^\circ$

D  $120^\circ$

Answer: C

**SSC CGL Free Mock Test (Latest Pattern)**

Question 52

Tap A can fill a tank in 6 hours, tap B can fill the same tank in 8 hours and tap C can empty the same tank in 4 hours. If all three taps A, B and C are opened together, then how much time (in hours) will be taken to fill the tank?

- A 30
- B 28
- C 24
- D 20

Answer: C

Question 53

If the measures of the sides of a cuboid are 8 cm, 6 cm and 10 cm, then the volume ( $\text{in cm}^3$ ) of the cuboid, is:

- A 540
- B 840
- C 680
- D 480

Answer: D

Question 54

If  $xy = 16$  and  $x^2 + y^2 = 32$ , then the value of  $(x + y)$  is:

- A  $\pm 4$
- B  $\pm 8$
- C  $\pm 10$
- D  $\pm 6$

Answer: B

## SSC CHSL Important Questions and Answers (Download PDF)

Question 55

The value of  $(72 + 34) \div 2 + [(75 \div 15) + 6 \times 2]$  is:

- A 78
- B 75
- C 86
- D 74

Answer: B

Question 56

In a circle two equal and parallel chords are 6 cm apart and lie on the opposite sides of the centre of the circle. If the length of each chord is 8 cm, then the radius of the circle is:

- A 7 cm
- B 2 cm
- C 3 cm
- D 5 cm

Answer: D

**Question 57**

To a circle with centre at O, two tangents AP and AQ are drawn from an external point A. If the  $\angle PAQ = 80^\circ$ , then the  $\angle POQ$  is:

- A  $70^\circ$
- B  $80^\circ$
- C  $100^\circ$
- D  $90^\circ$

Answer: C

**SSC CHSL Study Material**

**Question 58**

If the average of 35 numbers is 22, the average of the first 17 numbers is 19, and the average of the last 17 numbers is 20, then the 18<sup>th</sup> number is:

- A 133
- B 132
- C 107
- D 108

Answer: C

**Question 59**

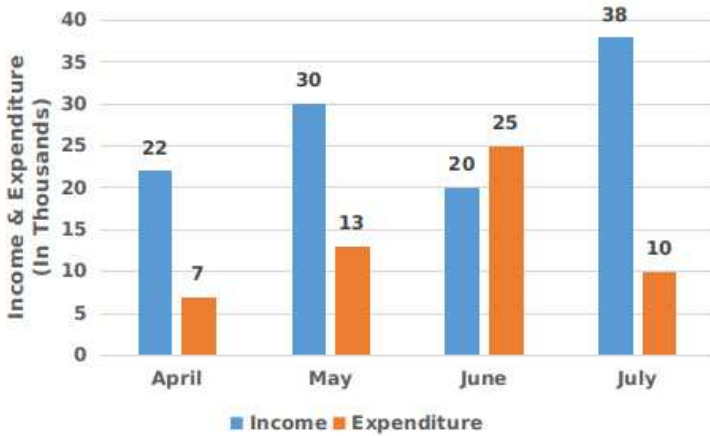
The compound interest and the amount obtained, on a certain sum of money are ₹820 and ₹8,820 respectively after 2 years. If the rate of interest compounded yearly, then the rate of interest is:

- A 6%
- B 7%
- C 5%
- D 8%

Answer: C

Question 60

The given bar graph represents the income and expenditure of a person during the four consecutive months, April to July, 2019.



What is the average income of the person?

- A ₹20,500
- B ₹17,500
- C ₹25,500
- D ₹27,500

Answer: D

SSC CHSL Free App

Question 61

If 40% of a number is less than its 60% by 30, then the 20% of that number is:

- A 40
- B 50
- C 30
- D 60

Answer: C

Question 62

If  $a + b = 10$  and  $\frac{3}{7}$  of  $ab = 9$ , then the value of  $a^3 + b^3$  is:

- A 350
- B 370
- C 270
- D 360

Answer: B

Question 63

If  $\tan x = \frac{m}{n}$  and  $a^\circ \leq x \leq 90^\circ$ , then the value of  $(\sin x + \cos x)$  is:

A  $\sqrt{m^2 - n^2}$

B  $\frac{1}{\sqrt{m^2 - n^2}}$

C  $\frac{m+n}{\sqrt{m^2+n^2}}$

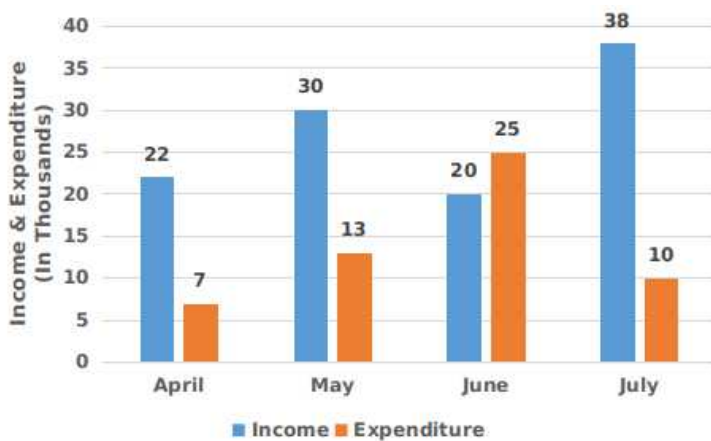
D  $\frac{1}{\sqrt{m^2+n^2}}$

Answer: C

## Daily Free SSC Practice Set

### Question 64

The given bar graph represents the income and expenditure of a person during the four consecutive months, April to July, 2019.



What is the percentage difference between the total income and the total expenditure with respect to the total income?

A 70 %

B 60 %

C 65 %

D 50 %

Answer: D

### Question 65

If  $\sin x - \cos x = 0$ , then the value of  $(\sin^3 x - \cos^3 x)$  is:

A 1

B 4

C 0

D 2

Answer: C

### Question 66

$\frac{\cot x}{1 + \operatorname{cosec} x} + \frac{1 + \operatorname{cosec} x}{\cot x}$  is equal to:

- A  $2 \sec x$
- B  $2 \cos x$
- C  $2 \sin x$
- D  $2 \operatorname{cosec} x$

Answer: A

## Free SSC Study Material (18,000 Solved Questions)

Question 67

If Ravi sells an old scooter for ₹18,000, then his loss incurred is 10%. If he sells it to gain a profit of 15%, then the selling price is:

- A ₹20,000
- B ₹23,000
- C ₹24,000
- D ₹22,000

Answer: B

Question 68

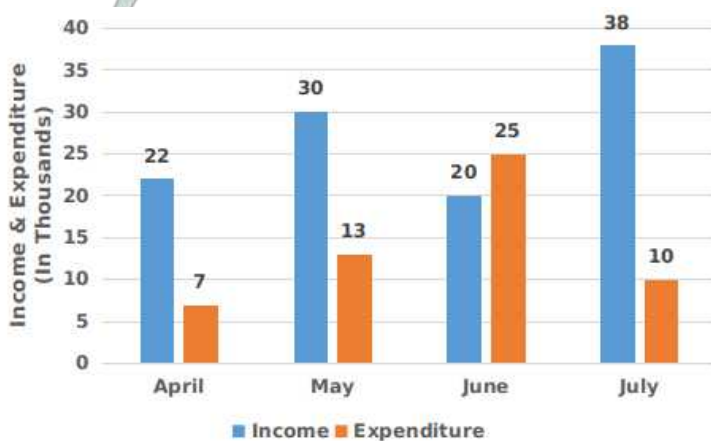
If  $a : b = 3 : 5$  and  $b : c = 2 : 3$ , then the proportion  $a : b : c$  is :

- A 3 : 10 : 15
- B 3 : 10 : 3
- C 3 : 5 : 3
- D 6 : 10 : 15

Answer: D

Question 69

The given bar graph represents the income and expenditure of a person during the four consecutive months, April to July, 2019.



What is the average expenditure of the person?

- A ₹13,750

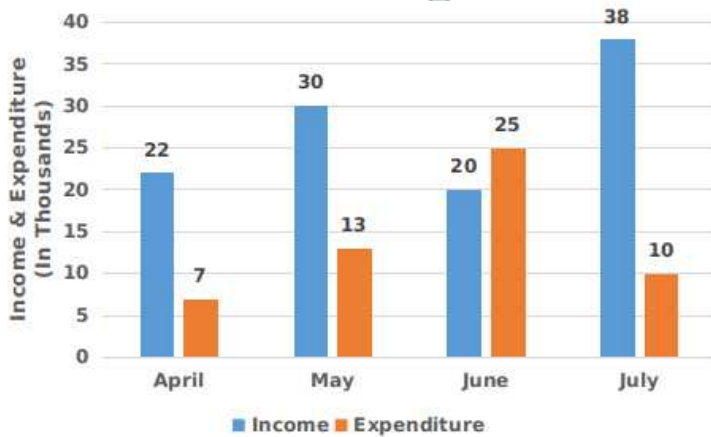
- B ₹17,520
- C ₹17,250
- D ₹15,570

Answer: A

## 1500+ Very Important Free SSC Solved Questions

Question 70

The given bar graph represents the income and expenditure of a person during the four consecutive months, April to July, 2019.



What is the percentage of the total expenditure of the total income?

- A 50%
- B 20%
- C 40%
- D 30%

Answer: A

Question 71

The marked price and costprice of a book are ₹850 and ₹748, respectively. The discount in percentage is:

- A 8 %
- B 12 %
- C 15 %
- D 10 %

Answer: B

Question 72

A train that is running at the speed of 72 km/h crosses an electric pole in 36 seconds. The length of the train (in metres) is:

- A 720 m
- B 460 m

C 360 m

D 620 m

Answer: A

## SSC Exam Update Videos & Free Study Material (YouTube Channel)

### Question 73

In  $\triangle ABC$ ,  $DE$  is parallel to  $BC$  where  $D$  and  $E$  are the points on  $AB$  and  $AC$ , respectively and  $AD = 4\text{ cm}$ ,  $DB = 8\text{ cm}$ ,  $AE = 3\text{ cm}$ . Length of  $EC$  is:

A 7 cm

B 6 cm

C 5 cm

D 9 cm

Answer: B

### Question 74

Find the factors of the expression  $3x^2 - 5x - 8$ .

A  $(x - 1)$  and  $(3x - 8)$

B  $(x + 1)$  and  $(3x - 8)$

C  $(x + 1)$  and  $(3x + 8)$

D  $(x - 1)$  and  $(3x + 8)$

Answer: B

### Question 75

If 2794p561 is divisible by 9, then the value of  $p$  is:

A 4

B 2

C 0

D 3

Answer: B

[Latest Job Updates on Telegram - Join here](#)

## General Awareness

### Instructions

For the following questions answer them individually

### Question 76

Which Indian mountain looks like a giant pyramid and has a flat summit area and two peaks?



- A Mamostang Kangri
- B Nanda Devi
- C Salto Kangri
- D Kamet

**Answer: C**

## Join SSC Daily Quiz Telegram Group

### Question 77

Which of the following temples has Panchayatana Style of architecture?

- A Kashi Vishwanath temple
- B Sun Temple
- C Brihadeeswara Temple
- D Dashavatara Temple

**Answer: D**

### Question 78

Which player became the first Indian brand ambassador of La Liga (the top tier of Spanish club football) in December 2019?

- A Sachin Tendulkar
- B Mahendra Singh Dhoni
- C Rohit Sharma
- D Virat Kohli

**Answer: C**

### Question 79

On which date did Indian National Congress pass the Resolution of 'Poorna Swaraj' (total independence) at the Lahore Session?

- A 15 December 1929
- B 19 December 1929
- C 26 December 1929
- D 21 December 1929

**Answer: B**

## 25 SSC CHSL Mocks for just Rs. 149

### Question 80

Which scientist arranged the Periodic Table of Elements in the order of increasing atomic masses ?

- A Robert Boyle

- B Henry Moseley
- C Dmitri Mendeleev
- D William Ramsay

**Answer: C**

**Question 81**

Which of the following monuments has NOT been notified as a National Geo-heritage Monument by the Geological Survey of India (GSI)?

- A Gingee Fort Villupuram District, Tamil Nadu
- B Peninsular Gneiss Lalbagh, Karnataka
- C Pillow Lava in Iron Ore belt at Nomira, Odisha
- D Nagahill Ophiolite site near Pungro, Nagaland

**Answer: A**

**Question 82**

Who was sworn in as the 11th Chief Minister of Jharkhand on 29 December 2019?

- A Shibu Soren
- B Alamgir Alam
- C Hemant Soren
- D Raghubar Das

**Answer: C**

## SSC CHSL Free Mock Test

**Question 83**

What is the chemical name of 'oil of vitriol'?

- A Methyl alcohol
- B Sodium chloride
- C Calcium hydroxide
- D Sulfuric acid

**Answer: D**

**Question 84**

Which child activist became the first Indian to be awarded the 'Changemaker Award 2019' (given by the Bill and Melinda Gates Foundation) for her work towards abolition of child marriage in Rajasthan?

- A Kanchan Upadhaya
- B Ridhima Pandey

- C Payal Jangid
- D Ayushi Dholakia

**Answer: C**

**Question 85**

**In DASD, what is the full form of 'A' ?**

- A Arithmetic
- B Around
- C Access
- D Accessible

**Answer: C**

**SSC CHSL Previous Papers (DOWNLOAD PDF)**

**Question 86**

**Which festival marks the beginning of the Tibetan New Year?**

- A Losar festival
- B Saga Dawa Festival
- C Ongkor Festival
- D Shoton Festival

**Answer: A**

**Question 87**

**When was the 'Rajiv Gandhi Khel Ratna Award' instituted?**

- A 2002 - 03
- B 1991 - 92
- C 1985 - 86
- D 1993 - 94

**Answer: B**

**Question 88**

**Which instrument records the waves reaching the surface during an earthquake?**

- A Seismograph
- B Manometer
- C Barograph
- D Chronometer

Answer: A

## SSC CGL Previous Papers (DOWNLOAD PDF)

### Question 89

Which Indian economist was appointed as the Chief Economist of the World Bank from 2012 to 2016 ?

- A Jagdish Bhagwati
- B Raghuram Rajan
- C Kaushik Basu
- D Indraprasad Gordhanbhai Patel

Answer: C

### Question 90

What was India's rank in the world in terms of military power as per the 'Global Firepower Nations Index 2019' ?

- A 5th
- B 4th
- C 9th
- D 3rd

Answer: B

### Question 91

Which former badminton player of India was awarded the 'Sportstar Lifetime Achievement Award' in February 2019?

- A Pullela Gopichand
- B Prakash Padukone
- C Sanave Thomas
- D Chetan Anand

Answer: B

## SSC CGL Free Mock Test (Latest Pattern)

### Question 92

Which of the following prominent leaders wrote the book 'Citizen Delhi: My Life, My Times'?

- A Arun Jaitley
- B Sheila Dikshit
- C Harsh Vardhan
- D Arvind Kejriwal

Answer: B

**Question 93**

As per state census 2011, which of the following is the least populous state of India?

- A Kerala
- B Odisha
- C Tamil Nadu
- D Sikkim

**Answer: D**

**Question 94**

On December 2019, the Prime Minister of \_\_\_\_\_ announced the commencement of the 'Gandhi Citizenship Education Award' to be given every year.

- A France
- B Portugal
- C Bhutan
- D Japan

**Answer: B**

## SSC CHSL Important Questions and Answers (Download PDF)

**Question 95**

In which year did Motilal Nehru (Chairman) and eight other Congress leaders draft a constitution for India ?

- A 1930
- B 1928
- C 1925
- D 1950

**Answer: B**

**Question 96**

Who designed the first analog computer in India?

- A Samarendra Kumar Mitra
- B Bimal Kumar Bhattacharyya
- C Deb Kumar Bose
- D Subodh Chandra Das Gupta

**Answer: A**

**Question 97**

Which planet is made up of thick white and yellowish clouds of sulfuric acid?

- A Uranus
- B Mars
- C Venus
- D Neptune

Answer: C

## SSC CHSL Study Material

### Question 98

Which of the following pairs is INCORRECTLY matched?

- A Hindustan Aeronautics Limited - Navratna
- B Airport Authority of India - Navratna
- C Indian Oil Corporation Limited - Maharatna
- D Bharat Sanchar Nigam Limited - Miniratna

Answer: B

### Question 99

What is the provision of Article 49 of the Constitution of India?

- A Provision for free and compulsory education for children
- B Protection of monuments and places and objects of natural importance
- C Prohibition of employment of children (Under the age of 14) in factories and mines
- D Promotion of international peace and security

Answer: B

### Question 100

In which language were the Mughal court chronicles written?

- A Hindi
- B Urdu
- C Sanskrit
- D Persian

Answer: D

SSC CHSL Free App

25 SSC CHSL Mocks for just Rs. 149

**SSC CHSL Free Mock Test**

**SSC CHSL Previous Papers (DOWNLOAD PDF)**

**SSC CGL Previous Papers (DOWNLOAD PDF)**

**SSC CGL Free Mock Test (Latest Pattern)**

**SSC CHSL Important Questions and Answers (Download PDF)**

**SSC CHSL Study Material**

**SSC CHSL Free App**

**Daily Free SSC Practice Set**

**Free SSC Study Material (18,000 Solved Questions)**

**1500+ Very Important Free SSC Solved Questions**

**SSC Exam Update Videos & Free Study Material (YouTube Channel)**

**Latest Job Updates on Telegram - Join here**

**Join SSC Daily Quiz Telegram Group**