



## SSC Stenographer 14 September 2017 Afternoon Shift

All rights reserved. No part of this publication may be reproduced, distributed, or transmitted in any form or by any means, electronic, mechanical, photocopying, recording or otherwise, or stored in any retrieval system of any nature without the permission of cracku.in, application for which shall be made to [support@cracku.in](mailto:support@cracku.in)

## Reasoning

### Instructions

In the following question, select the missing number from the given series.

### Question 1

2, 5, 11, 23, ?

A 47

B 45

C 44

D 43

Answer: A

### Explanation:

The pattern followed is that numbers of the form  $(3 \times 2^n)$  are added.

$$2 + (3 \times 2^0) = 5$$

$$5 + (3 \times 2^1) = 11$$

$$11 + (3 \times 2^2) = 23$$

$$23 + (3 \times 2^3) = 47$$

=> Ans - (A)

**Daily Free Online GK tests**

### Question 2

2, 3, 7, 16, 32, ?

A 57

B 76

C 62

D 67

Answer: A

### Explanation:

The pattern followed is :

$$2 + (1)^2 = 3$$

$$3 + (2)^2 = 7$$

$$7 + (3)^2 = 16$$

$$16 + (4)^2 = 32$$

$$32 + (5)^2 = 57$$

=> Ans - (A)

### Question 3

8, 11, 14, 17, 20, ?

- A 21
- B 22
- C 23
- D 27

**Answer:** C

**Explanation:**

The pattern followed is :

$$8 + 3 = 11$$

$$11 + 3 = 14$$

$$14 + 3 = 17$$

$$17 + 3 = 20$$

$$20 + 3 = 23$$

=> Ans - (C)

**Question 4**

**18, 14, 10, 6, ?**

- A 2
- B 3
- C 4
- D 5

**Answer:** A

**Explanation:**

The pattern followed is :

$$18 - 4 = 14$$

$$14 - 4 = 10$$

$$10 - 4 = 6$$

$$6 - 4 = 2$$

=> Ans - (A)

## SSC CHSL Previous Question papers (download pdf)

**Instructions**

A series is given with one term missing. Select the correct alternative from the given ones that will complete the series.

**Question 5**

**ADCB, FIHG, KNML, ?**

- A PSRQ
- B PSQR
- C QTRS

D QSTR

Answer: A

Explanation:

Series : ADCB, FIHG, KNML, ?

The pattern followed in each letter of the terms is :

1st letter : A (+5 letters) = F (+5 letters) = K (+5 letters) = P

2nd letter : D (+5 letters) = I (+5 letters) = N (+5 letters) = S

3rd letter : C (+5 letters) = H (+5 letters) = M (+5 letters) = R

4th letter : B (+5 letters) = G (+5 letters) = L (+5 letters) = Q

Thus, missing term = **PSRQ**

=> Ans - (A)

Question 6

BDG, HJM, NPS, ?

A TVY

B TVW

C UVX

D UWZ

Answer: A

Explanation:

Series : BDG, HJM, NPS, ?

The pattern followed in each letter of the terms is :

1st letter : B (+6 letters) = H (+6 letters) = N (+6 letters) = T

2nd letter : D (+6 letters) = J (+6 letters) = P (+6 letters) = V

3rd letter : G (+6 letters) = M (+6 letters) = S (+6 letters) = Y

Thus, missing term = **TVY**

=> Ans - (A)

Question 7

GF, KJ, ON, ?

A RS

B SR

C ST

D TS

Answer: B

Explanation:

Series : GF, KJ, ON, ?

The pattern followed in each letter of the terms is :

1st letter : G (+4 letters) = K (+4 letters) = O (+4 letters) = S

2nd letter : F (+4 letters) = J (+4 letters) = N (+4 letters) = R

Thus, missing term = SR

=> Ans - (B)

## SSC CPO Previous Question papers (download pdf)

### Instructions

For the following questions answer them individually

### Question 8

Which word will appear fourth when arranged in order of dictionary?

1. Dictation
2. Dictionary
3. Dimple
4. Dinner
5. Deputy

- A Dinner  
B Dimple  
C Dictation  
D Dictionary

Answer: B

### Explanation:

As per the order of dictionary :

= Deputy -> Dictation -> Dictionary -> *Dimple* -> Dinner

Thus, *Dimple* will appear 4th.

=> Ans - (B)

### Question 9

Arrange the given words in the sequence in which they occur in the dictionary.

1. Slowly
2. Slam
3. Slump
4. Sledge
5. Slate

- A 25431  
B 52413  
C 25413  
D 52431

Answer: C

### Explanation:

As per the order of dictionary :

= Slam -> Slate -> Sledge -> Slowly -> Slump

≡ 25413

=> Ans - (C)

**Question 10**

Which word will appear second when arranged in order of dictionary?

- A Boost
- B Bonkers
- C Bonjour
- D Bonnet

**Answer:** B

**Explanation:**

As per the order of dictionary :

= Bonjour -> Bonkers -> Bonnet -> Boost

Thus, *Bonkers* will appear 2nd.

=> Ans - (B)

**SSC GD Previous Question papers (download pdf)**

**Question 11**

Which word will appear last when arranged in order of dictionary?

- A Heritage
- B Hermitage
- C Healing
- D Heap

**Answer:** B

**Explanation:**

As per the order of dictionary :

= Healing -> Heap -> Heritage -> Hermitage

Thus, *Hermitage* will appear last.

=> Ans - (B)

**Instructions**

In the following question, select the odd number pair from the given alternatives.

**Question 12**

- A 7 - 50
- B 11 - 122
- C 15 - 226
- D 13 - 168

**Answer:** D

**Explanation:**

The pattern followed is :

$$(7)^2 + 1 = 50$$

$$(11)^2 + 1 = 122$$

$$(15)^2 + 1 = 226$$

$$(13)^2 + 1 = 170 \neq 168$$

=> Ans - (D)

**Question 13**

A 7 - 56

B 10 - 110

C 9 - 90

D 8 - 96

**Answer: D**

**Explanation:**

The pattern followed is :

$$(7)^2 + 7 = 56$$

$$(10)^2 + 10 = 110$$

$$(9)^2 + 9 = 90$$

$$(8)^2 + 8 = 72 \neq 96$$

=> Ans - (D)

**SSC MTS Previous Question papers (download pdf)**

**Instructions**

In the following question, select the odd letters from the given alternatives.

**Question 14**

A KM

B PR

C TV

D EH

**Answer: D**

**Explanation:**

(A) : K (+2 letters) = M

(B) : P (+2 letters) = R

(C) : T (+2 letters) = V

(D) : E (+3 letters) = H

=> Ans - (D)

**Question 15**

A RQP

B LKJ

C HGF

D ECB

**Answer: D**

**Explanation:**

(A) : R (-1 letter) = Q (-1 letter) = P

(B) : L (-1 letter) = K (-1 letter) = J

(C) : H (-1 letter) = G (-1 letter) = F

(D) : E (-2 letters) = C (-1 letter) = B

=> Ans - (D)

**Instructions**

For the following questions answer them individually

**Question 16**

In the following question, select the odd word from the given alternatives.

A Sword

B Spear

C Gun

D Dagger

**Answer: C**

**Explanation:**

All except gun are used while holding hand, hence it is the odd one out.

=> Ans - (C)

## SSC CHSL Free Mock Test

**Instructions**

In the following question, select the odd word pair from the given alternatives.

**Question 17**

A Brown - Colour

B Rice - Grain

C Fan - Air

D Iron - Metal

**Answer: C**

**Explanation:**

First comes under the category of second. Brown is a colour, rice is a grain and iron is a metal, but fan provides air, hence it is the odd one out.

=> Ans - (C)

**Question 18**

A Cry - Laugh

B Up - Down



C Increase - Decrease

D Walking - Running

**Answer:** D

**Explanation:**

The first three pairs of words are antonyms, but running is a faster form of walking, hence it is the odd one out.

=> Ans - (D)

**Instructions**

In the following question, select the related number from the given alternatives.

**Question 19**

11 : 121 :: 12 : ?

A 144

B 169

C 196

D 154

**Answer:** A

**Explanation:**

Expression = 11 : 121 :: 12 : ?

The pattern followed is =  $x : x^2$

Eg :- 11 :  $(11)^2 = 11 : 121$

Similarly,  $(12)^2 = 144$

=> Ans - (A)

## SSC CPO Free Mock Test

**Question 20**

15 : 256 :: 14 : ?

A 225

B 144

C 25

D 95

**Answer:** A

**Explanation:**

Expression = 15 : 256 :: 14 : ?

The pattern followed is =  $x : (x + 1)^2$

Eg :- 15 :  $(15 + 1)^2 = 15 : 256$

Similarly,  $(14 + 1)^2 = (15)^2 = 225$

=> Ans - (A)

**Question 21**

**108 : 11664 :: 107 : ?**

- A 11449
- B 10449
- C 10849
- D 11749

**Answer:** A

**Explanation:**

Expression = 108 : 11664 :: 107 : ?

The pattern followed is =  $x : x^2$

Eg :- 108 : (108)<sup>2</sup> = 108 : 11664

Similarly, (107)<sup>2</sup> = 11449

=> Ans - (A)

**Instructions**

In the following question, select the related letters from the given alternatives.

**Question 22**

**CHARGER : DGBQHDS :: CELLULAR : ?**

- A DDMKVKBQ
- B DDNKKVBQ
- C DDMKUKCQ
- D DDNKUBVQ

**Answer:** A

**Explanation:**

Expression = CHARGER : DGBQHDS :: CELLULAR : ?

The pattern followed is :

C	H	A	R	G	E	R
(+1)	(-1)	(+1)	(-1)	(+1)	(-1)	(+1)
D	G	B	Q	H	D	S

Similarly, for CELLULAR :

C	E	L	L	U	L	A	R
(+1)	(-1)	(+1)	(-1)	(+1)	(-1)	(+1)	(-1)
D	D	M	K	V	K	B	Q

=> Ans - (A)

**SSC GD Free Mock Test**

**Question 23**

**ROME : QNLD :: MORE : ?**

- A LNQD
- B LNQC
- C LMQD
- D LMQC

**Answer: A**

**Explanation:**

Expression = ROME : QNLD :: MORE : ?

The pattern followed is :

R	O	M	E
(-1)	(-1)	(-1)	(-1)
Q	N	L	D

Similarly, for MORE :

M	O	R	E
(-1)	(-1)	(-1)	(-1)
L	N	Q	D

=> Ans - (A)

**Question 24**

**CHANNEL : XSZMMVO :: MUSICAL : ?**

- A NFHRXZO
- B NFHQZYP
- C NEHRXZP
- D NFIRXZO

**Answer: A**

**Explanation:**

Expression = CHANNEL : XSZMMVO :: MUSICAL : ?

The pattern followed is that alphabets with the corresponding position from reverse end are coded together.

```

A B C D E F G H I J K L M N O P Q R S T U V W X Y Z
↓ ↓ ...                               ... ↓
Z Y X W V U T S R Q P O N M L K J I H G F E D C B A
  
```

Similarly, MUSICAL : **NFHRXZO**

=> Ans - (A)

**Instructions**

In the following question, select the related word from the given alternatives.

**Question 25**

**Rain : Clouds :: Heat : ?**

- A Distance
- B Sun
- C Night

D Day

**Answer: B**

**Explanation:**

Expression = Rain : Clouds :: Heat : ?

Rain generates from the clouds, similarly sun generates heat.

=> Ans - (B)

## SSC CGL Free Mock Test

**Question 26**

**Garden : Plants :: Book : ?**

A Words

B Pages

C Writing

D White

**Answer: B**

**Explanation:**

Expression = Garden : Plants :: Book : ?

A group of plants is called a garden, similarly a group of pages from a book.

=> Ans - (B)

**Question 27**

**Doctor : Patient :: Teacher : ?**

A Teach

B Student

C School

D Old

**Answer: B**

**Explanation:**

Expression = Doctor : Patient :: Teacher : ?

Doctor treats his patients, similarly teacher teaches students.

=> Ans - (B)

**Instructions**

For the following questions answer them individually

**Question 28**

If  $85 \times 5 - 3 = 20$  and  $18 \times 2 - 1 = 10$ , then  $100 \times 20 - 5 = ?$

A 15

B 20

C 10

D 13

Answer: C

Explanation:

The pattern followed is  $\times$  is replaced by  $\div$  and  $-$  is replaced by  $+$

$$\text{Eg :- } 85 \times 5 - 3 = \frac{85}{5} + 3 = 17 + 3 = 20$$

$$\text{and } 18 \times 2 - 1 = \frac{18}{2} + 1 = 9 + 1 = 10$$

$$\text{Similarly, } 100 \times 20 - 5 = \frac{100}{20} + 5 = 5 + 5 = 10$$

=> Ans - (C)

## Download SSC General Knowledge PDF

Question 29

By interchanging which two signs the equation will be correct?

$$25 + 18 \div 2 - 4 = 20$$

A + and  $\div$

B + and -

C  $\div$  and -

D None of these

Answer: B

Explanation:

$$\text{Expression : } 25 + 18 \div 2 - 4 = 20$$

(A) : + and  $\div$

$$\equiv 25 \div 18 + 2 - 4 = 20$$

$$\text{L.H.S.} = 1.39 - 2 = -0.61 \neq 20$$

(B) : + and -

$$\equiv 25 - 18 \div 2 + 4 = 20$$

$$\text{L.H.S.} = 25 - 9 + 4 = 20$$

=> Ans - (B)

Instructions

In the following question, select the word which cannot be formed using the letters of the given word.

Question 30

FUNDAMENTALY

A SUNDAY

B MEANT

C FUNNY

D TUNED

Answer: A

Explanation:

The word FUNDAMENTALLY does not contain any 'S', thus the word 'Sunday' cannot be formed.

=> Ans - (A)

**Question 31**

**DISTRIBUTION**

A BUTTON

B DISTURB

C BRITAIN

D BURNT

**Answer: C**

**Explanation:**

The word DISTRIBUTION does not contain any 'A', thus the word 'Britain' cannot be formed.

=> Ans - (C)

## SSC GD 10 Mock Tests for Rs. 117

**Instructions**

In the following question below are given some statements followed by some conclusions. Taking the given statements to be true even if they seem to be at variance from commonly known facts, read all the conclusions and then decide which of the given conclusion logically follows the given statements.

Statements:

**Question 32**

I. Some pen are black.

II. Some pen are blue.

III. No black is red.

**Conclusions:**

I. No pen is red.

II. Some blue are black.

III. Some black are pens.

A Only I

B Only II

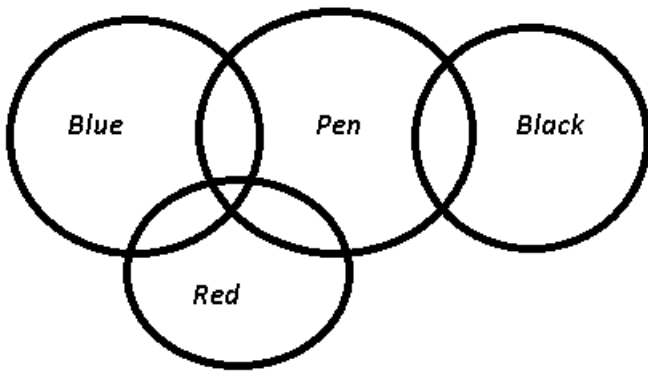
C Only III

D Only II and III

**Answer: C**

**Explanation:**

The venn diagram for above statements is :



Conclusions:

- I. No pen is red = false
- II. Some blue are black = false
- III. Some black are pens = true

Thus, only III follows.

=> Ans - (C)

**Question 33**

- I. All pen are pencils.
- II. All pencils are red.
- III. No pen is blue.

Conclusions:

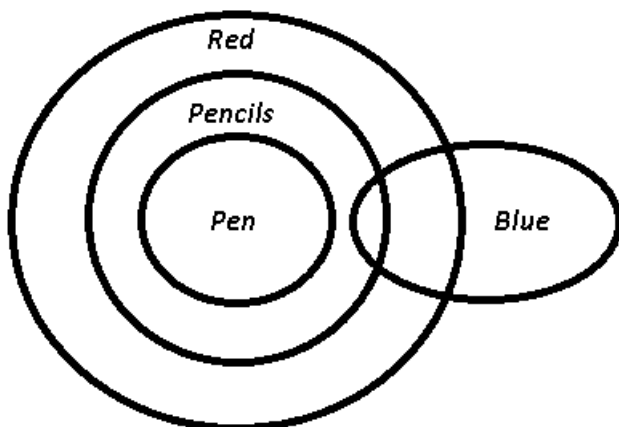
- I. No pencil is red.
- II. Some pencils are pens.
- III. No red is blue.

- A Only II
- B Only III
- C Both II and III
- D No conclusion follows.

Answer: A

**Explanation:**

The venn diagram for above statements is :



Conclusions:

- I. No pencil is red = false
- II. Some pencils are pens = true
- III. No red is blue = false

Thus, only II follows.

=> Ans - (A)

**Instructions**

For the following questions answer them individually

**Question 34**

In a certain code language, "POTTER" is written as "ONSUFS". How is "WALKER" written in that code language?

- A VZKLFS
- B VZLKFS
- C VZKLFT
- D WALLFS

**Answer:** A

**Explanation:**

"POTTER" is written as "ONSUFS"

The pattern followed is :

P	O	T	T	E	R
(-1)	(-1)	(-1)	(+1)	(+1)	(+1)
O	N	S	U	F	S

Similarly, for WALKER :

W	A	L	K	E	R
(-1)	(-1)	(-1)	(+1)	(+1)	(+1)
V	Z	K	L	F	S

=> Ans - (A)

## SSC CHSL Previous Papers (DOWNLOAD PDF)

**Question 35**

In a certain code language, "TOMB" is written as "MOVE" and "TACKLE" is written as "MFDGPR". How is "TABLET" written in that code language?

- A MFEPRT
- B MFDVER
- C MERPTS
- D MFEPRM

**Answer:** D

**Explanation:**

Codes for each alphabet is given :

T -> M  
 A -> F  
 B -> E  
 L -> P  
 E -> R  
 T -> M

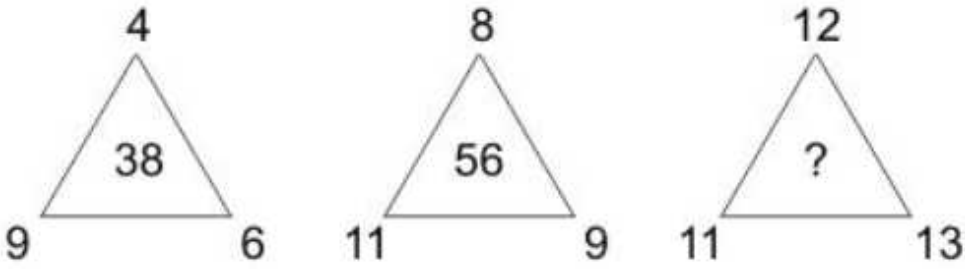
Thus, TABLET : **MFEPRM**

=> Ans - (D)



Question 36

In the following question, select the number which can be placed at the sign of question mark (?) from the given alternatives.



- A 72
- B 78
- C 108
- D 90

Answer: A

Explanation:

The number at the middle is twice the sum of number at the vertices.

Eg :-  $(4 + 9 + 6) \times 2 = 19 \times 2 = 38$

and  $(8 + 11 + 9) \times 2 = 28 \times 2 = 56$

Similarly,  $(12 + 11 + 13) \times 2 = 36 \times 2 = 72$

=> Ans - (A)

Question 37

In the following question, select the letter which can be placed at the sign of question mark (?) from the given alternatives.



- A X
- B Y
- C Z
- D A

Answer: C

Explanation:

Starting from top left and moving in clockwise direction, we get :

B (+3 letters) = E (+4 letters) = I (+5 letters) = N

N (+3 letters) = Q (+4 letters) = U (+5 letters) = Z

S (+3 letters) = V (+4 letters) = Z (+5 letters) = E

=> Ans - (C)

## SSC GD Constable Previous Papers

### Question 38

In the following question, select the letter which can be placed at the sign of question mark (?) from the given alternatives.

5	7	6	36
10	?	17	64
9	11	8	56

A 5

B 6

C 7

D 8

**Answer: A**

#### Explanation:

In each row, number at the end is twice the sum of remaining numbers.

$$\text{Eg :- } (5 + 7 + 6) \times 2 = 18 \times 2 = 36$$

$$\text{and } (9 + 11 + 8) \times 2 = 28 \times 2 = 56$$

$$\text{Similarly, } (10 + x + 17) \times 2 = 64$$

$$\Rightarrow 27 + x = \frac{64}{2} = 32$$

$$\Rightarrow x = 32 - 27 = 5$$

$\Rightarrow$  Ans - (A)

### Question 39

In the following question, select the number which can be placed at the sign of question (?) from the given alternatives.

<table border="1"><tr><td>5</td><td>6</td></tr><tr><td>30</td><td>11</td></tr></table>	5	6	30	11	<table border="1"><tr><td>8</td><td>9</td></tr><tr><td>72</td><td>17</td></tr></table>	8	9	72	17	<table border="1"><tr><td>11</td><td>?</td></tr><tr><td>132</td><td>23</td></tr></table>	11	?	132	23
5	6													
30	11													
8	9													
72	17													
11	?													
132	23													

A 10

B 12

C 14

D 16

**Answer: B**

#### Explanation:

The bottom left number is the product of top 2 numbers and the bottom right number is their sum.

$$\text{Eg :- } 6 \times 5 = 30 \text{ and } 6 + 5 = 11$$

$$8 \times 9 = 72 \text{ and } 8 + 9 = 17$$

Similarly,  $11 \times 12 = 132$  and  $11 + 12 = 23$

=> Ans - (B)

**Question 40**

Pointing to a lady, Rohit said "She is the sister of the daughter of my father's wife's son." How is the lady related to Rohit?

- A Daughter
- B Sister
- C Niece
- D Daughter or Niece

**Answer:** D

**Explanation:**

Rohit's father's wife's son = Either Rohit or his brother

Now, the girl is sister of daughter of either Rohit or his brother.

=> The lady is either his daughter or his niece.

=> Ans - (D)

## SSC Stenographer Previous Papers (DOWNLOAD PDF)

**Question 41**

Present ages of A and B are in ratio 3 : 5. 7 years later B's age will be twice the age of C. If C celebrated his 10th birthday 4 years ago, then what is the present age (in years) of A?

- A 14
- B 21
- C 28
- D 42

**Answer:** B

**Explanation:**

C celebrated his 10th birthday 4 years ago, => C's present age =  $10 + 4 = 14$  years

Also, B's age after 7 years =  $2 \times (14 + 7) = 2 \times 21 = 42$  years

=> B's present age =  $42 - 7 = 35$  years

∴ A's present age =  $\frac{3}{5} \times 35 = 3 \times 7 = 21$  years

=> Ans - (B)

**Question 42**

A, B, C, D and E are sitting around a circular table. A don't have B and E as his neighbours. E, who is not sitting with D is to the immediate left of B. When seen in clockwise direction, which of the order of sitting is correct?

- A ABDEC
- B ADBEC
- C DBCEA

D BCEDA

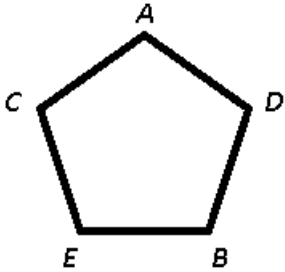
Answer: B

Explanation:

A don't have B and E as his neighbours, => A is sitting between C and D

E, who is not sitting with D is to the immediate left of B.

=> C sits to the immediate left of E and B to the immediate left of D.



∴ When seen in clockwise direction, correct sitting order : ADBEC

=> Ans - (B)

Question 43

In a class, there are 40 students. Some of them passed the examination and others failed. Raman's rank among the student who have passed is 13 th from top and 17 th from bottom. How many students have failed?

A 11

B 10

C 9

D Cannot be determined

Answer: A

Explanation:

Total number of students = 40

Among the student who have passed, Raman's rank from top = 13th

Raman's rank from bottom = 17th

=> Total students who passed =  $(13 + 17) - 1 = 30 - 1 = 29$

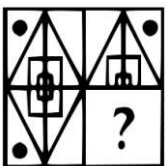
∴ Number of students who have failed =  $40 - 29 = 11$

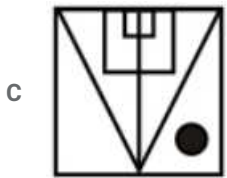
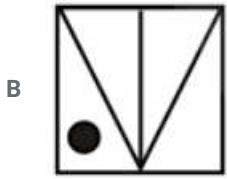
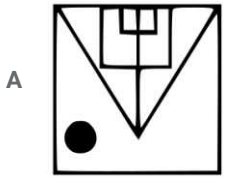
=> Ans - (A)

## SSC CGL Previous Papers (DOWNLOAD PDF)

Question 44

Which answer figure will complete the pattern in the question figure ?

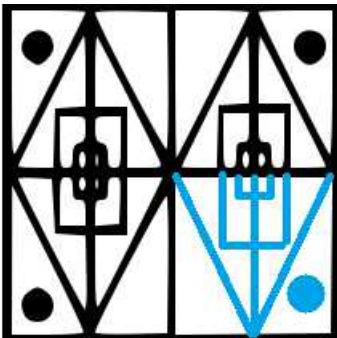




Answer: C

**Explanation:**

When we complete the above figure, we get :

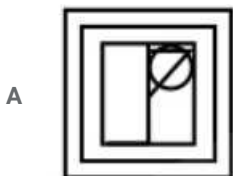
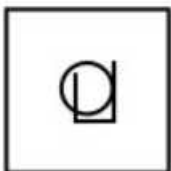


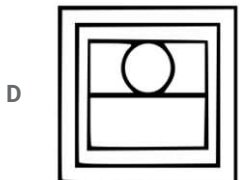
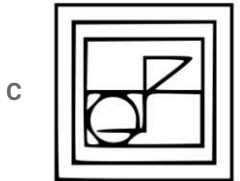
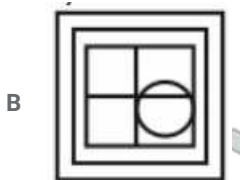
Thus, the third figure is similar to the figure in blue colour.

=> Ans - (C)

**Question 45**

From the given answer figures, select the one in which the question figure hidden/embedded.

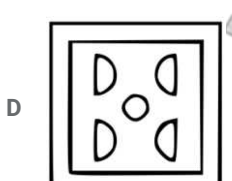

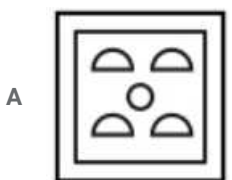




Answer: C

Question 46

A piece of paper is folded and punched as shown below in the question figures, indicate how it will appear when opened ?

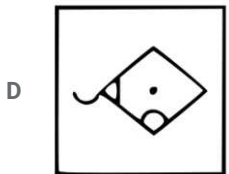
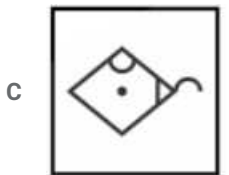
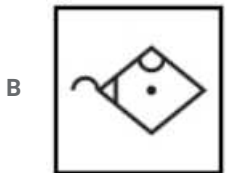
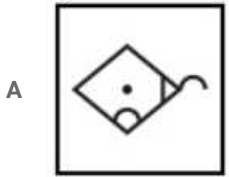
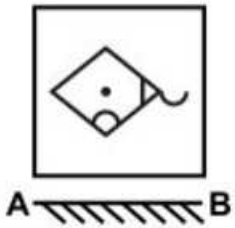


Answer: C

## SSC CHSL Free Mock Test (Latest Pattern)

### Question 47

A mirror is placed on the line AB, then which of the answer figures is the right image of the given figure ?



Answer: C

### Explanation:

A horizontal mirror is placed, so the figure will be reversed, that is, the sector pointing downwards will face up and vice-versa, and thus the first and last options are not possible.

But the semi circle outside the quadrilateral will remain on the right side, as it is in the original figure, so the second option is also eliminated.

=> Ans - (C)

### Question 48

Two position of a cube are shown below. What will come opposite to face containing 'X' ?



A Z

- B O
- C Either Z or O
- D P

Answer: A

Question 49

A word is represented by only one set of numbers as given in any one of the alternatives. The sets of numbers given in the alternatives are represented by two classes of alphabets as shown in the given two matrices. The columns and rows of Matrix-I are numbered from 0 to 4 and that of Matrix-II are numbered from 5 to 9. A letter from these matrices can be represented first by its row and next by its column, for example, 'I' can be represented by 41, 54 etc., and 'N' can be represented by 04, 89, etc. Similarly, you have to identify the set for the word "TRACE".

Matrix-I

	0	1	2	3	4
0	F	E	K	O	N
1	P	M	A	C	T
2	Z	G	W	I	Q
3	D	F	A	L	R
4	O	I	S	P	X

Matrix-II

	5	6	7	8	9
5	M	E	Z	S	T
6	Z	K	F	C	Z
7	L	Q	Z	Y	D
8	A	E	I	R	N
9	Q	N	T	Y	I

- A 14, 31, 32, 02, 56
- B 65, 67, 86, 97, 98
- C 97, 34, 12, 13, 01
- D 14, 88, 89, 68, 23

Answer: C

Explanation:

- (A) : 14, 31, 32, 02, 56 = TFAKE
- (B) : 65, 67, 86, 97, 98 = ZFETY
- (C) : 97, 34, 12, 13, 01 = **TRACE**
- (D) : 14, 88, 89, 68, 23 = TRNCI

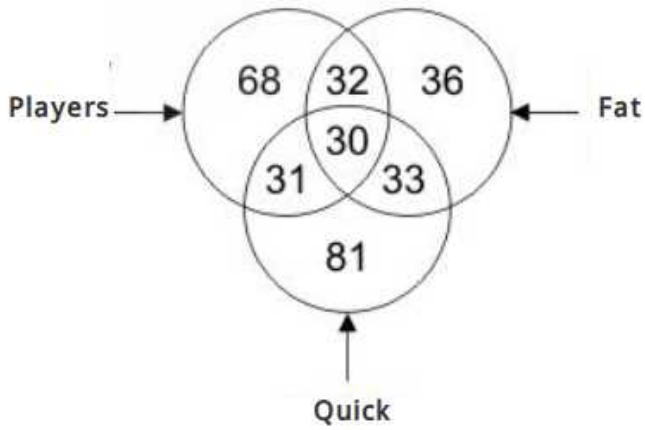
=> Ans - (C)

SSC Stenographer Previous Papers (Latest Pattern)



Question 50

In the given figure, how many players are quick and fat ?



- A 31
- B 30
- C 32
- D 33

Answer: B

Explanation:

Players who are quick and fat is the intersection of the three = 30

=> Ans - (B)

SSC GD Constable Free Mock Test (Latest Pattern)

General Awareness

Instructions

For the following questions answer them individually

Question 51

What is GST?

- A A direct tax
- B An indirect tax
- C A corporate tax
- D A municipal tax

Answer: B

SSC MTS Free Mock Test (Latest Pattern)

Question 52

Which of the following is the not a small-scale industry in India?

- A Sugar Industry

- B Cotton Industry
- C Petroleum Industry
- D Handloom Industry

Answer: C

**Question 53**

The Planning Commission is replaced by NITI Aayog. What is the full form of NITI?

- A National Institute of Team India
- B National Institution for Transforming India
- C New India and Team India
- D No option is correct.

Answer: B

**Question 54**

Which of the following is known as market clearing price?

- A Equilibrium Price
- B Disequilibrium Price
- C Ceteris Paribus
- D No option is correct.

Answer: B

## Current Affairs Questions & Answers (Download pdf)

**Question 55**

What is the main purpose of inclusion of Directive Principles in the Constitution of India?

- A to establish socio-economic democracy
- B to establish social democracy
- C to establish Gandhian democracy
- D to establish political democracy

Answer: A

**Question 56**

The Panchayati Raj is based on which of the principle?

- A centralisation of power
- B unification of power
- C decentralisation of power

D bifurcation of law

**Answer: C**

**Question 57**

**Who presides over the joint session of Lok Sabha and Rajya Sabha?**

A President of India

B Vice President of India

C Speaker of Lok Sabha

D Prime Minister of India

**Answer: C**

## Daily & Monthly Current Affairs (Download pdf)

**Question 58**

**By which Constitutional Amendment Bill was the voting age reduced from 21 years to 18 years in India?**

A 48th

B 59th

C 61st

D 78th

**Answer: C**

**Question 59**

**Who among the following elects the Vice President of India?**

A By the members of Parliament

B By the members of Rajya Sabha

C By the elected members of Lok Sabha

D Members of Parliament and State Legislative Assemblies

**Answer: A**

**Question 60**

**Whose absence from the Democracy makes its functioning impossible?**

A Home Ministry

B Prime Minister

C Political Parties

D Panchayati Raj System

**Answer: C**

## SSC Stenographer Important Questions (Download PDF)

Question 61

Which of the following is considered as a port town of Indus Valley Civilization?

- A Harappa
- B Lothal
- C Ropar
- D Banawali

Answer: B

Question 62

Krishnadevaraya was the ruler of which dynasty?

- A Chola
- B Bahmani
- C Pallava
- D Vijayanagara

Answer: D

Question 63

The details of coronation ceremony are narrated in which of the following scripture?

- A Kenopanishad
- B Vishnu Puran
- C Aitareya Brahmana
- D Atharv Veda

Answer: C

## SSC Stenographer Mocks For Just RS. 117

Question 64

Which among the following is correctly matched ?

- A Shams-e-Siraj Afir - Tarikh-e-Firozshahi
- B Ziya-ud-din Barni - Tarikh-e-Muhammadi
- C Amir Khusarau - Tabakat-e-Nasiri
- D Ibn Batuta - Fatawa-e-Jahandari

Answer: A

Question 65

Which among the following is the oldest mountain series in India?

- A Satpura
- B Nilgiri
- C Himalaya
- D Aravali

Answer: D

Question 66

Indravati, Pranhita and Sabari are important tributaries of which of these rivers?

- A Ganga
- B Godavari
- C Cauvery
- D Krishna

Answer: B

**SSC Stenographer Free Videos (Youtube)**

Question 67

Which type of forest is appropriate for Sandalwood trees

- A Evergreen
- B Tundra
- C Desert
- D Tropical Deciduous

Answer: D

Question 68

Which one of the following bio-reserves of India is not included in the world network of bioserve?

- A Manas
- B Nanda Devi
- C Gulf of Mannar
- D Nilgiri

Answer: A

Question 69

How many legs does an insect have?

- A 2
- B 3
- C 4
- D 6

Answer: D

## SSC Stenographer Expected Cutoff

Question 70

Insulin activates in \_\_\_\_\_.

- A Pancreas
- B Parathyroid
- C Thymus
- D Pituitary

Answer: A

Question 71

Which among the following is not related to vitamin B complex group?

- A Riboflavin
- B Thiamin
- C Ascorbic acid
- D Folic acid

Answer: C

Question 72

Viruses are usually made of which of the following?

- A Protein + Carbohydrates
- B Protein + Nucleic Acid
- C Protein + Ascorbic Acid
- D Protein + Lipid

Answer: B

## SSC Stenographer Syllabus PDF

Question 73

"Shrubs" are woody plants generally smaller and more compact than trees Which of the following is not a shrub tree?

- A Sunflower
- B Rose-of-Sharon
- C Butterfly Bush
- D Barberry

**Answer: A**

**Question 74**

A medical procedure, during which a small sample of tissue is removed from a part of the body, is \_\_\_\_\_.

- A MRI
- B CT Scan
- C Biopsy
- D All options are correct.

**Answer: C**

**Question 75**

Which force is responsible for the earth revolving around the sun?

- A Magnetic Force
- B Electro-Magnetic Force
- C Longitudinal Force
- D Gravitational Force

**Answer: D**

## Daily Free Online GK tests

**Question 76**

Which among the following is cryogenic engines are used?

- A In rocket technology
- B To run the navy ships
- C In frost free referigerators
- D All options are correct.

**Answer: A**

**Question 77**

During photosynthesis light energy is converted into which of the following?

- A Mechanical energy
- B Chemical energy

- C Heat energy
- D Radiation energy

**Answer: B**

**Question 78**

**What is the reason of surface tension in a liquid?**

- A Electrical force between molecules
- B Cohesive force between molecules
- C Adhesive force between molecules
- D Gravitational force between molecules

**Answer: B**

## SSC CHSL Previous Question papers (download pdf)

**Question 79**

**Which of the following is an input device?**

- A Printer
- B Headphone
- C Monitor
- D Scanner

**Answer: D**

**Question 80**

**Which of the following is not a computer language?**

- A Fortran
- B Pascal
- C Cobol
- D English

**Answer: D**

**Question 81**

**What is the constituent of tear gas?**

- A Ethane
- B Methane
- C Chloropicrin
- D Ether



Answer: C

[SSC CPO Previous Question papers \(download pdf\)](#)

Question 82

In which process there is gain of electron?

- A Decomposition
- B Reduction
- C Oxidation
- D Modification

Answer: B

Question 83

Which of the following gas is present in bio-gas?

- A Ethane
- B Methane
- C Oxygen
- D Nitrogen

Answer: B

Question 84

Solder is an alloy made of which two metals?

- A Zinc and lead
- B Zinc and copper
- C Tin and zinc
- D Tin and lead

Answer: D

[SSC GD Previous Question papers \(download pdf\)](#)

Question 85

Which of the following diseases is NOT caused by the smog?

- A Asthma
- B Throat Cancer
- C Emphysema
- D Breathing problem

Answer: B

**Question 86**

An increase in which of the following gases leads to global warming?

- A Oxygen
- B Carbon dioxide
- C Sulphur dioxide
- D Ozone

**Answer: B**

**Question 87**

What is the full form of "PMSBY"?

- A Pradhan Mantri Suraksha Bima Yojana
- B Pradhan Mantri Sukanya Bima Yojana
- C Pradhan Mantri Swachchh Bharat Yojana
- D None of the is correct.

**Answer: A**

**SSC MTS Previous Question papers (download pdf)**

**Question 88**

Which of the following schemes was replaced by APY in 2015?

- A Antyodaya Yojana
- B Swavablamban Yojana
- C National Pension System
- D Swabhiman Yojana

**Answer: B**

**Question 89**

Who invented Mercury Thermometer?

- A Galileo
- B Michael Faraday
- C J.J. Thompson
- D Fahrenheit

**Answer: D**

**Question 90**

The word 'Smash' is associated with which game?

- A Volleyball
- B Hockey
- C Lawn Tennis
- D Cricket

Answer: C

## SSC CHSL Free Mock Test

### Question 91

England was defeated by which of the following countries in T-20 World Cup 2016 final?

- A India
- B West Indies
- C Australia
- D Pakistan

Answer: B

### Question 92

Which of the following instruments is associated with Yehudi Menuhin?

- A Sitar
- B Piano
- C Violin
- D Congo

Answer: C

### Question 93

Which among the following is matched correctly ?

(i)	Bharatnatyam - Andhra Pradesh
(ii)	Kuchipudi - Madhya Pradesh
(iii)	Kathakali - Kerala
(iv)	Kathak - Tamil Nadu

- A (i)
- B (ii)
- C (iii)
- D (iv)

Answer: C

## SSC CPO Free Mock Test

### Question 94

"Kalinga Award" is provided by which institution/organization?

- A Indian Government
- B Orissa Government
- C Bengal Government
- D UNESCO

Answer: D

### Question 95

There were five categories in Nobel Prizes in beginning. Which among the following is the sixth which was added later?

- A Economics
- B Peace
- C Medical Science
- D Literature

Answer: A

### Question 96

The author of the book 'Life Divine' is?

- A Abul Kalam Azad
- B Jawaharlal Nehru
- C Aurobindo Ghosh
- D Mulk Raj Anand

Answer: C

## SSC GD Free Mock Test

### Question 97

Dayton Accord was signed to solve the problem of \_\_\_\_\_.

- A Russia
- B East Timore
- C Bosnia
- D Kosovo

Answer: C

**Question 98**

The idea of 'shuttle diplomacy' is closely associated with which of the following peace agreements?

- A Middle East Peace Accord
- B Peace Accord in Africa
- C Peace Accords in Latin America
- D Peace Accords in Southeast Asia

**Answer: A**

**Question 99**

The National Parliamentary body of China is known as \_\_\_\_\_.

- A State council
- B People's Assembly
- C National People's Congress
- D None of the is correct.

**Answer: C**

**SSC CGL Free Mock Test**

**Question 100**

The Union Cabinet has approved the Memorandum of Understanding (MoU) between India and \_\_\_\_\_ for the conservation of earthquake damaged pagodas.

- A Nepal
- B Myanmar
- C Bhutan
- D Thailand

**Answer: B**

**Download SSC General Knowledge PDF**

**English**

**Instructions**

In the following question, some part of the sentence may have errors. Find out which part of the sentence has an error and select the appropriate option. If a sentence is free from error, select 'No Error'.

**Question 101**

Hema doesn't has (a)/ to give (b)/ the dissertation to me (c)/ No Error (d)

- A 1
- B 2

C 3

D 4

Answer: A

## SSC GD 10 Mock Tests for Rs. 117

Question 102

My mother (a)/ is having (b)/ grey hairs (c)/ No Error (d)

A 1

B 2

C 3

D 4

Answer: C

Question 103

Oh dear, (a)/ do have some relief (b)/ on my nerves (c)/ No Error (d)

A 1

B 2

C 3

D 4

Answer: B

Question 104

Once you graduate (a)/ get a job (b)/ would be easier (c)/ No Error (d)

A 1

B 2

C 3

D 4

Answer: B

## SSC CHSL Previous Papers (DOWNLOAD PDF)

Question 105

He has been (a)/ working here (b)/ for quite some time (c)/ No Error (d)

A 1

B 2

C 3

D 4

Answer: D

Question 106

I decided (a)/ to climbed to the (b)/ top of the hill (c)/ No Error (d)

A 1

B 2

C 3

D 4

Answer: B

Question 107

Reading (a)/ provides nutrition (b)/ with the mind (c)/ No Error (d)

A 1

B 2

C 3

D 4

Answer: C

## SSC GD Constable Previous Papers

Question 108

Despite of minimal use of technology (a)/ they are able to manage (b)/ everything in a simple manner (c)/ No error (d)

A 1

B 2

C 3

D 4

Answer: A

Question 109

Sri Lanka is an island country (a) / into the Indian Ocean (b)/, south of India. (c)/ No error (d)

A 1

B 2

C 3

D 4

Answer: B

**Question 110**

I'm content with what I make (a)/ and I am found simple joys in seeing a smile on customer's face (b)/ when they smell the jasmine flowers. (c)/ No error (d)

- A 1
- B 2
- C 3
- D 4

Answer: B

**SSC Stenographer Previous Papers (DOWNLOAD PDF)**

**Instructions**

In the following question, the sentence given with blank to be filled in with an appropriate word. Select the correct alternative out of the four and indicate it by selecting the appropriate option.

**Question 111**

Each item was sold \_\_\_\_\_ a pound.

- A at
- B for
- C in
- D of

Answer: B

**Question 112**

Be just \_\_\_\_\_ fear nothing.

- A but
- B while
- C and
- D until

Answer: C

**Question 113**

He came two hours \_\_\_\_\_ us.

- A before
- B ago
- C above
- D ahead

Answer: A





## SSC CGL Previous Papers (DOWNLOAD PDF)

### Question 114

Sunaina said, "She is sick \_\_\_\_\_ the whole business."

- A by
- B of
- C for
- D with

**Answer: B**

### Question 115

He was quite \_\_\_\_\_ when he heard what had happened.

- A laughing
- B amused
- C lovable
- D beautiful

**Answer: B**

### Instructions

A sentence has been given in Active/Passive Voice. Out of the four given alternatives, select the one which best expresses the same sentence in Passive/Active Voice.

### Question 116

We saw you and him.

- A You and he were seen by us.
- B He and you were seen by us.
- C You were seen by us with him.
- D Both of you were seen by us.

**Answer: A**



## SSC CHSL Free Mock Test (Latest Pattern)

### Question 117

Tom painted the entire house.

- A The entire house was painted by Tom.
- B The entire house is painted by Tom.
- C The entire house were painted by Tom.



D The house is painted by Tom.

Answer: A

**Question 118**

**The science class viewed the comet.**

A The class viewed the comet.

B The comet was viewed by the science class.

C The comet is been viewed by the science class.

D The comet is viewed by the science class.

Answer: B

**Question 119**

**The kangaroo carried her baby in her pouch.**

A The baby was carried by the kangaroo in her pouch.

B The kangaroo carried the baby in pouch.

C The baby is carried by kangaroo in her pouch

D The baby is being carried up by kangaroo in her pouch.

Answer: A

**SSC Stenographer Previous Papers (Latest Pattern)**

**Question 120**

**Grandma is knitting the sweater.**

A The sweater is being knit by grandma.

B The sweater was being knit by grandma.

C Grandma knit the sweater.

D Grandma knitted the sweater.

Answer: A

**Question 121**

**Who teaches you English?**

A Do you know who teaches you English?

B English is taught by who?

C By whom are you taught English?

D Who taught you English?

Answer: C

**Question 122**

**Mohita was weaving the basket.**

- A The basket was woven by Mohita
- B The basket is woven by Mohita
- C The basket is being woven by Mohita
- D The basket was being woven by Mohita

**Answer: B**

**SSC GD Constable Free Mock Test (Latest Pattern)**

**Question 123**

**The hunter shot the deer.**

- A The deer is shot
- B The deer is shot by the hunter
- C The deer was shot by the hunter
- D The hunter was shot by the deer

**Answer: C**

**Question 124**

**Rohan gave the work to Pooja.**

- A The work has given to Pooja by Rohan
- B The work is given to Pooja by Rohan.
- C The work was given to Pooja by Rohan
- D The work will be given to Pooja by Rohan.

**Answer: C**

**Question 125**

**Mrs. Sharma invited us to her house party.**

- A We were invited by Mrs Sharma to her house party.
- B We are invited by Mrs. Sharma for house party.
- C We will be invited by Mrs Sharma for house party.
- D We are invited for the house party by Mrs Sharma.

**Answer: A**

**SSC MTS Free Mock Test (Latest Pattern)**

**Instructions**

In the following question, out of the four given alternatives, select the one which best expresses the meaning of the given word.

**Question 126**

**Distinct**

- A Obscure
- B Similar
- C Clear
- D Vague

**Answer: C**

**Question 127**

**Condemn**

- A Approve
- B Laud
- C Belittle
- D Commend

**Answer: C**

**Question 128**

**Dingy**

- A Pure
- B Sterile
- C Immaculate
- D Drab

**Answer: D**

**Current Affairs Questions & Answers (Download pdf)**

**Question 129**

**Clever**

- A Clear
- B Cunning
- C Foolish
- D Intelligent

**Answer: D**

**Question 130**

**Constant**

- A changing
- B flowing
- C moving
- D fixed

**Answer: D**

**Question 131**

**Confine**

- A permit
- B restrain
- C restrict
- D imprison

**Answer: A**

**Daily & Monthly Current Affairs (Download pdf)**

**Instructions**

In the following question, out of the four given alternatives, select the one which is opposite in meaning of the given word.

**Question 132**

**Defeat**

- A beat
- B attainment
- C collapse
- D loss

**Answer: B**

**Question 133**

**Fervent**

- A passionate
- B cold
- C zealous
- D blazing

**Answer: B**

**Question 134**

**Imitation**

- A copy
- B echo
- C genuine
- D follow

**Answer: C**

## SSC Stenographer Important Questions (Download PDF)

**Question 135**

**Immense**

- A big
- B tiny
- C huge
- D grand

**Answer: B**

**Instructions**

In the following question, out of the four given alternatives, select the alternative which best expresses the meaning of the Idiom/Phrase.

**Question 136**

**Apple of one's eye**

- A the person with sweet tastes
- B the person with wide pupils
- C the person who likes apple
- D the person who someone loves or cherishes the most

**Answer: D**

**Question 137**

**Ball is in your court**

- A Make the right decision
- B The judgement is in your favour
- C You should catch the ball
- D It is upto you to decide something

**Answer: D**

**SSC Stenographer Mocks For Just RS. 117**

**Question 138**

**Last Straw**

- A Last problem in the series of problems
- B Last attempt to do something
- C Last chance to take decision
- D Last chance

**Answer: A**

**Question 139**

**Back to Square One**

- A to go back to the beginning
- B going forward
- C you are holding a grudge
- D to go back to a square

**Answer: A**

**Question 140**

**Burst Your Bubble**

- A to blow away the balloons
- B to ruin someone's happiness
- C to give up
- D to talk with someone

**Answer: B**

**SSC Stenographer Free Videos (Youtube)**

**Instructions**

For the following questions answer them individually

**Question 141**

**Improve the bold part of the sentence:**

**(The bundle of coins were the only source) of information for them.**

- A The bundles of coins were the only source
- B The bundles of coins were the only sources
- C The bundle of coin was the only source
- D No Improvement

**Answer: A**

### Instructions

In the following question, out of the four alternatives, select the alternative which will improve the bracketed part of the sentence. In case no improvement is needed, select "no improvement".

#### Question 142

No sooner (do the phone ring) that he was out of home.

- A did the phone rang
- B did the phone rings
- C did the phone ring
- D No Improvement

Answer: C

#### Question 143

Two more employees (will be hiring) by the company.

- A be hiring
- B will be hired
- C will hire
- D No Improvement

Answer: B

## SSC Stenographer Expected Cutoff

#### Question 144

This (modern furnitures will be sold) in the main market.

- A modern furniture will be sold
- B modern furnitures will be selling
- C modern furniture will be selling
- D No Improvement

Answer: A

#### Question 145

My boss (have being given) me a lot of work.

- A was being given
- B is being given
- C have been giving
- D No Improvement

Answer: C



**Question 146**

I (wander about) the stars up in the sky.

- A wander for
- B wonder about
- C wander in
- D No Improvement

**Answer: B**

**SSC Stenographer Syllabus PDF**

**Question 147**

Go to the right and (keep a sharp left turn) you will reach the place.

- A take a sharp left turn
- B do a sharp left turn
- C make a sharp left turn
- D No Improvement

**Answer: A**

**Question 148**

Heena (keep a eye) on his son.

- A kept a eye
- B keep an eye
- C keeps an eye
- D kept a eyes

**Answer: C**

**Question 149**

(Why is) your working going on?

- A How is
- B What is
- C When is
- D No Improvement

**Answer: A**

**Question 150**

**(Pack your bags) and come with me.**

- A Keep your bag
- B Have your bag
- C Unpack your bag
- D No Improvement

**Answer: D**

**Instructions**

A sentence has been given in Direct/Indirect Speech. Out of the four given alternatives, select the one which best expresses the same sentence in Indirect/Direct Speech.

**Question 151**

**"What time does the train arrive?" she asked.**

- A She enquired at what time the train arrived
- B She asked about the train
- C When will the train arrive she asked
- D She said when does the train arrive

**Answer: A**

**Question 152**

**He said, "I must work hard."**

- A He told him to work hard
- B He was going to work hard
- C He said that he had to work hard.
- D He said I must be working hard

**Answer: C**

**SSC CHSL Previous Question papers (download pdf)**

**Question 153**

**He said, "My sister is writing letter to my uncle."**

- A He said that his sister was writing letter to his uncle.
- B He said that her sister is writing a letter to uncle.
- C He told that his sister is writing letter to his uncle.
- D He said to me that his sister is writing a letter

**Answer: A**

**Question 154**

**He said to me, "I have told you not to touch any electrical switches with wet hand."**

- A He reprimanded me that he had told me not to touch any electrical switches with wet hand.
- B He asked me not to touch any electrical switches with wet hand.
- C He told me not to touch any electrical switches with wet hand.
- D He reminded me that he had told me not to touch any electrical switches with wet hand.

**Answer: D**

**Question 155**

**He said, "Let us wait for him at the restaurant."**

- A He ordered that they should wait for him at the restaurant.
- B He said that they should wait for him at the restaurant.
- C He proposed that they should wait for him at the restaurant.
- D They should wait for him at the restaurant he ordered.

**Answer: C**

**SSC CPO Previous Question papers (download pdf)**

**Question 156**

**He said to Rama, "Come with me."**

- A He asked Rama to go with him.
- B He pleaded Rama to go with him.
- C He said Rama to come with him.
- D Rama come with me he said.

**Answer: A**

**Question 157**

**He said, "I am going to fetch a cot."**

- A He requested that he was going to fetch a cot.
- B He will fetch a cot he said.
- C He said that he was going to fetch a cot.
- D He will be fetching a cot he said.

**Answer: C**

**Question 158**

**Rohit said, "I came here yesterday"**

- A Rohit said that he went that place
- B Rohit said that he went there yesterday
- C Rohit said that he went there the previous day
- D Rohit said that he was there the previous day

**Answer: C**

## SSC GD Previous Question papers (download pdf)

### Question 159

**Ajay said, "Suman must go tomorrow".**

- A Ajay said that Suman would have to go the following day.
- B Ajay said that Suman would have to go tomorrow.
- C Ajay said that Suman must go yesterday.
- D Ajay said that Suman is going tomorrow.

**Answer: A**

### Question 160

**Manu said, "I am very busy now".**

- A Manu says that he is very busy then.
- B Manu said that he is very busy now.
- C Manu said that he was very busy then.
- D Manu said that he was very busy now.

**Answer: C**

### Instructions

The question below consists of a set of labelled sentences. Out of the four options given, select the most logical order of the sentences to form a coherent paragraph.

### Question 161

**They sat**

**P-each holding a long, crooked rod in his hands**

**Q-and eagerly waiting for "a bite."**

**R-in a heavy flat-bottomed boat**

- A PQR
- B RPQ
- C QRP
- D QPR

**Answer: B**

## SSC MTS Previous Question papers (download pdf)

Question 162

The boxes

P-were heavy

Q-so carrying two of them

R was a lot of weight to handle

A QRP

B PQR

C RPQ

D QPR

Answer: B

Question 163

A long hallway

P- leading to four bedrooms

Q-the back of the upstairs

R-ran across

A QPR

B QRP

C PQR

D RQP

Answer: D

Question 164

His father laughed softly

P- when he himself had been

Q- casting his mind back to the days of his youth

R- an eager player of the same game

A PQR

B RQP

C QPR

D QRP

Answer: C

Question 165

When they reached the summit,

P- the boys could hear the faint notes

Q- of a festival wafted towards them

R- on the soft breeze of the spring night

SSC CHSL Free Mock Test

- A QRP
- B RPQ
- C RQP
- D PQR

**Answer: D**

**Instructions**

Read the given passage carefully and select the best answer to each question out of the four given alternatives.

For most people, music is an important part of daily life. Some rely on music to get them through the morning commute, while others turn up a favorite playlist to stay pumped during a workout. Many folks even have the stereo on when they're cooking a meal, taking a shower, or folding the laundry. Music is often linked to mood. A certain song can make us feel happy, sad, energetic, or relaxed. Because music can have such an impact on a person's mindset and well-being, it should come as no surprise that music therapy has been studied for use in managing numerous medical conditions. All forms of music may have therapeutic effects, although music from one's own culture may be most effective. In Chinese medical theory, the five internal organs and meridian systems are believed to have corresponding musical tones, which are used to encourage healing.

**Question 166**

Music is often linked to \_\_\_\_\_.

- A anger
- B mood
- C anxiety
- D happiness

**Answer: B**

**Question 167**

How is music an important part of life?

- A It makes us feel different emotions
- B It makes us sad
- C It helps in our daily activities
- D It helps us in remembering things

**Answer: A**

## SSC CPO Free Mock Test

**Question 168**

Which of the statements is true?

- A All forms of music may heal wounds
- B All forms of music may have good effect
- C All forms of music may be soothing

D All forms of music may have therapeutic effects

Answer: D

**Question 169**

**How can music be used as a therapy?**

A It can help us to manage our day to day activities

B It can help us in managing numerous medical conditions

C It can help us manage our life

D It can help us manage our careers

Answer: B

**Question 170**

**In Chinese medical theory, the five internal organs and meridian systems \_\_\_\_\_.**

A are believed to have musical chords

B are believed to have no musical tones

C are believed to have same musical tones

D are believed to have corresponding musical tones

Answer: D

## SSC GD Free Mock Test

**Instructions**

Read the given passage carefully and select the best answer to each question out of the four given alternatives.

Approximately half of India's 1.2 billion people are under the age of 26, and by 2020 we are forecasted to be the youngest country in the world, with a median age of 29 years. With this tremendous forecast, it becomes imperative to ensure an environment which promotes positive well-being. Unfortunately, India has the highest suicide rate in the world among the youth standing at 35.5 per 100,000 people for 2012. The reason for such high numbers can be attributed to lack of economic, social, and emotional resources. More specifically, academic pressure, workplace stress, social pressures, modernisation of urban centers, relationship concerns, and the breakdown of support systems. Some researchers have attributed the rise of youth suicide to urbanisation and the breakdown of the traditional large family support system. The clash of values within families is an important factor. As young Indians become more progressive, their traditionalist households become less supportive of their choices pertaining to financial independence, marriage age, premarital sex, rehabilitation and taking care of the elderly.

**Question 171**

**Approximately half of India's 1.2 billion people are under the age of \_\_\_\_\_.**

A 30

B 26

C 22

D 18

Answer: B

Question 172

What are the reasons for high number of suicide rates among the youth in India?

- A lack of monetary help by the government
- B lack of healthy foods
- C lack of economical, social and emotional resources
- D lack of good roads and transports

Answer: C

Question 173

By which year India will become the youngest country in the world?

- A 2017
- B 2030
- C 2019
- D 2020

Answer: D

### SSC CGL Free Mock Test

Question 174

The \_\_\_\_\_ within families is an important factor.

- A clash of values
- B clash of resources
- C clash of power
- D clash of thinking

Answer: A

Question 175

How can we prevent youth from committing suicide?

- A by making families progressive
- B by creating an environment that which promotes good behaviour
- C by creating an environment that which promotes positive well being
- D by creating career opportunities

Answer: C

Instructions

Read the given passage carefully and select the best answer to each question out of the four given alternatives.

He was a vendor of sweets. He had his own peculiar method of advertising and doing business. He never depended upon others for



help and worked hard all alone. I speak of Murali-- the man who sold sweets. His customers were children, the future citizens of the world. At the stroke of nine in the morning, Murali would stand in front of the school with his tray of sweets. Till about eleven, the sale would be brisk. After that he moved off to other places. Even when the sweets became sticky in the heat, his business never slackened. There was depression in his business when the holidays came.

**Question 176**

**Who was Murali?**

- A a businessman
- B a vendor of sweets
- C a job seeker
- D a student

**Answer: B**

[Download SSC General Knowledge PDF](#)

**Question 177**

**Who were his customers?**

- A the children
- B the adults
- C the office goers
- D the housewives

**Answer: A**

**Question 178**

**What time would he go to the school?**

- A at 10 in the morning
- B at 8 in the morning
- C at 3 in the afternoon
- D at 9 in the morning

**Answer: D**

**Question 179**

**Complete the sentence.**

**Till about eleven, the sale would be \_\_\_\_\_.**

- A high
- B worse
- C brisk
- D low

**Answer: C**

## SSC GD 10 Mock Tests for Rs. 117

### Question 180

When did the depression come in his business?

- A after the holidays
- B when the holidays came
- C he was found cheating
- D None of these

Answer: B

### Instructions

In the following passage some of the words have been left out. Read the passage carefully and select the correct answer for the given blank out of the four alternatives.

You can spend hours looking for \_\_\_\_\_, days waiting for that Eureka \_\_\_\_\_, moving things around on screen, staring at blank pieces of paper, \_\_\_\_\_ down half-formed ideas, all to \_\_\_\_\_ no avail. Sometimes coming up with just one creative idea can feel \_\_\_\_\_. You feel this way because creativity is a process, a \_\_\_\_\_ that has to be learned and honed. \_\_\_\_\_ you're a marketer, designer, entrepreneur or anything in between, creative thinking is a valuable skill to \_\_\_\_\_. It can help us find \_\_\_\_\_, tailored solutions to problems and create memorable and effective \_\_\_\_\_.

### Question 181

You can spend hours looking for \_\_\_\_\_.

- A dedication
- B inspiration
- C solutions
- D ideas

Answer: B

### Question 182

days waiting for that Eureka \_\_\_\_\_.

- A moment
- B movement
- C type
- D day

Answer: A

## SSC CHSL Previous Papers (DOWNLOAD PDF)

### Question 183

\_\_\_\_\_ down half-formed ideas

- A idea
- B pencil
- C jotted
- D writes

Answer: C

Question 184

\_\_\_\_\_ no avail.

- A absolutely
- B silence
- C fully
- D rightly

Answer: A

Question 185

creative idea can feel \_\_\_\_\_.

- A impossible
- B lazy
- C cold
- D hot

Answer: A

## SSC GD Constable Previous Papers

Question 186

A \_\_\_\_\_ that has to be learned and honed.

- A talent
- B hobby
- C skill
- D sense

Answer: C

Question 187

\_\_\_\_\_ you're a marketer

- A and
- B but

- C still
- D whether

**Answer: D**

**Question 188**

Creative thinking is a valuable skill to \_\_\_\_\_.

- A possess
- B have
- C should
- D get

**Answer: A**

**SSC Stenographer Previous Papers (DOWNLOAD PDF)**

**Question 189**

It can help us find \_\_\_\_\_.

- A senseless
- B unique
- C ugly
- D worst

**Answer: B**

**Question 190**

Create memorable and effective \_\_\_\_\_.

- A memories
- B communications
- C borders
- D relations

**Answer: B**

**Instructions**

In the following passage some of the words have been left out. Read the passage carefully and select the correct answer for the given blank out of the four alternatives.

Art movement is described as a \_\_\_\_\_ or way of doing art of art that spans over a \_\_\_\_\_ of time that is subtly or \_\_\_\_\_ different than another movement of art. The style or method "moves" or changes to a different way if you will. These styles are used to \_\_\_\_\_ art practiced by a group of \_\_\_\_\_ within the same time period and/or region. Some art \_\_\_\_\_ that have been influenced by another art movement show obvious \_\_\_\_\_ while others seem to defy their cousins because of \_\_\_\_\_. It is interesting to study the differences between art \_\_\_\_\_ and also to study the different \_\_\_\_\_ of art.

**Question 191**

Art movement is described as a \_\_\_\_\_.

- A type
- B style
- C like
- D practice

Answer: B

## SSC CGL Previous Papers (DOWNLOAD PDF)

Question 192

Art that spans over a \_\_\_\_\_ of time.

- A tide
- B wait
- C period
- D during

Answer: C

Question 193

\_\_\_\_\_ different than another movement of art.

- A distinctly
- B easy
- C newly
- D otherwise

Answer: A

Question 194

These styles are used to \_\_\_\_\_ art practiced.

- A Visualise
- B Describe
- C Imagine
- D Ignore

Answer: B

## SSC CHSL Free Mock Test (Latest Pattern)

Question 195

Group of \_\_\_\_\_ within the same time period and/or region.

- A businessmen
- B actors
- C ventors
- D artists

Answer: D

**Question 196**

Some art \_\_\_\_\_ that have been influenced.

- A movements
- B pictures
- C books
- D scenes

Answer: A

**Question 197**

Art movement show obvious \_\_\_\_\_ while others.

- A alike
- B same
- C eagerness
- D similarities

Answer: D

## SSC Stenographer Previous Papers (Latest Pattern)

**Question 198**

Defy their cousins because of \_\_\_\_\_.

- A limitations
- B benefits
- C distance
- D time

Answer: A

**Question 199**

Study the differences between art \_\_\_\_\_

- A movements
- B flow

C revolution

D adequate

Answer: A

Question 200

Study the different \_\_\_\_\_ of art.

A length

B timezone

C periods

D duration

Answer: C

**SSC GD Constable Free Mock Test (Latest Pattern)**

**Daily Free Online GK tests**

**SSC CHSL Previous Question papers (download pdf)**

**SSC CPO Previous Question papers (download pdf)**

**SSC GD Previous Question papers (download pdf)**

**SSC MTS Previous Question papers (download pdf)**

**SSC CHSL Free Mock Test**

**SSC CPO Free Mock Test**

**SSC GD Free Mock Test**

**SSC CGL Free Mock Test**

**Download SSC General Knowledge PDF**

**SSC GD 10 Mock Tests for Rs. 117**

**SSC CHSL Previous Papers (DOWNLOAD PDF)**

[SSC GD Constable Previous Papers](#)

[SSC Stenographer Previous Papers \(DOWNLOAD PDF\)](#)

[SSC CGL Previous Papers \(DOWNLOAD PDF\)](#)

[SSC CHSL Free Mock Test \(Latest Pattern\)](#)

[SSC Stenographer Previous Papers \(Latest Pattern\)](#)

[SSC GD Constable Free Mock Test \(Latest Pattern\)](#)

[SSC MTS Free Mock Test \(Latest Pattern\)](#)

[Current Affairs Questions & Answers \(Download pdf\)](#)

[Daily & Monthly Current Affairs \(Download pdf\)](#)

[SSC Stenographer Important Questions \(Download PDF\)](#)

[SSC Stenographer Mocks For Just RS. 117](#)

[SSC Stenographer Free Videos \(Youtube\)](#)

[SSC Stenographer Expected Cutoff](#)

[SSC Stenographer Syllabus PDF](#)