



SSC CHSL 12th April 2021 Shift-2

All rights reserved. No part of this publication may be reproduced, distributed, or transmitted in any form or by any means, electronic, mechanical, photocopying, recording or otherwise, or stored in any retrieval system of any nature without the permission of cracku.in, application for which shall be made to support@cracku.in

English Language

Instructions

For the following questions answer them individually

Question 1

Select the most appropriate synonym of the given word.

PRIORITY

- A Inference
- B Deference
- C Subsistence
- D Preference

Answer: D

25 SSC CHSL Mocks for just Rs. 149

Question 2

Select the most appropriate one-word substitution for the given group of words.

A large bundle bound for storage or transportation

- A Bevy
- B Bouquet
- C Bale
- D Brood

Answer: C

Question 3

Select the **INCORRECTLY** spelt word.

- A definately
- B existence
- C mischievous
- D violence

Answer: A

Question 4

Fill in the blank with the most appropriate option.

She was greatly ____ by the nightmare she had.

- A feared
- B perturbed
- C dreaded

D trembled

Answer: B

SSC CHSL Free Mock Test

Question 5

Select the correct indirect form of the given sentence.

"like having South Indian breakfast," said Arun to the receptionist.

- A Arun tells the receptionist that he has liked South Indian breakfast.
- B Arun is telling the receptionist that he likes South Indian breakfast.
- C Arun told the receptionist that he will like South Indian breakfast.
- D Arun told the receptionist that he liked having South Indian breakfast.

Answer: D

Question 6

In the given sentence, identify the segment which contains the grammatical error.

Airlines have increased fares because according to the new rules only limiting passengers are allowed.

- A the new rules only limiting
- B because according to
- C Airlines have increased fares
- D passengers are allowed

Answer: A

Question 7

Select the most appropriate ANTONYM of the given word.

VITIATE

- A Violate
- B Affirm
- C Annul
- D Cancel

Answer: B

SSC CHSL Previous Papers (DOWNLOAD PDF)

Question 8

Examine the four jumbled sentences. Out of the given options, pick the one that gives their correct order.

- A. We found both to be very quiet and subdued.
- B. Later when we became good friends, they told us about their tragic loss.
- C. The Mehrahs were newcomers to the neighbourhood.
- D. My wife and I called on them to ask if they needed any help.

A CDAB

B BDAC

C DBAC

D ACDB

Answer: A

Question 9

Select the most appropriate meaning of the underlined idiom in the given sentence.
She may be the Principal but it is the school administrator who rules the roost.

A is proved right

B is in complete control

C is totally submissive

D is dependent upon her

Answer: B

Question 10

Select the most appropriate option to substitute the underlined segment in the given sentence. If there is no need to substitute it, select 'No substitution'.

My hands were eager for tore up that awful letter.

A for tearing upon

B of tearing up

C No substitution

D to tear up

Answer: D

SSC CGL Previous Papers (DOWNLOAD PDF)

Question 11

Select the misspelt word.

A exceed

B address

C annax

D attempt

Answer: C

Question 12

Select the option that will improve the underlined segment in the given sentence. In case no improvement is needed, select 'No improvement'

Make a list of most the things you would like to do once this lockdown is over.

- A each
- B No improvement
- C many
- D all

Answer: D

Question 13

Select the most appropriate ANTONYM of the given word.

AUGMENT

- A multiply
- B amplify
- C decrease
- D increase

Answer: C

SSC CGL Free Mock Test (Latest Pattern)

Question 14

Select the most appropriate synonym of the given word.

PRECISION

- A accuracy
- B vagueness
- C estimation
- D neglect

Answer: A

Question 15

Identify the segment in the given sentence which contains the grammatical error.

Einstein's school teachers thought he would never success in life.

- A in life
- B thought he would
- C never success
- D Einstein's school teachers

Answer: C

Question 16

Select the most appropriate meaning of the given idiom.

To put one's foot in one's mouth

- A To deliberately provoke someone
- B To gather all of one's resources
- C To be disorderly and stupid
- D To accidentally embarrass or upset someone

Answer: D

SSC CHSL Important Questions and Answers (Download PDF)

Question 17

Select the correct passive form of the given sentence.

The disaster management team rescued the flood victims.

- A The flood victims are being rescued by the disaster management team.
- B The flood victims have been rescued by the disaster management team.
- C The flood victims were rescued by the disaster management team.
- D The flood victims are rescued by the disaster management team.

Answer: C

Question 18

Select the option which means the same as the group of words given.

Doctor who deals with bone problems

- A orthodontist
- B chiropodist
- C orthopaedist
- D dermatologist

Answer: C

Question 19

Select the most appropriate option to fill in the blank.

Shekhar Gupta is one of the journalists of India.

- A imminent
- B exponent
- C eminent

D pertinent

Answer: C

SSC CHSL Study Material

Question 20

Given below are four sentences in jumbled order. Pick the option that gives their correct order.

- A. Her face had the most extraordinary expression of horror and amusement.
- B. My mother looked up in time to see me fall.
- C. But I missed and went sprawling across the kitchen floor.
- D. My hand reached out to grab the handle of the door that led into the kitchen.

A CBDA

B DCBA

C BDAC

D ABCD

Answer: B

Instructions

In the following passage some words have been deleted. Fill in the blanks with the help of the alternatives given. Select the most appropriate option for each number.

The doctor left some medicines with the instructions for giving them. One was to (1)_____ down the fever and another to overcome an acid condition. "The germs (2)_____ influenza can exist only in acid condition," he explained. He said there was (3)_____ to worry if the fever did not go up above 103 degrees. This was an (4)_____ of flu and there was no danger if pneumonia could be (5)_____.

Question 21

Select the most appropriate option to fill in the blank no. 1.

A bring

B shrink

C reduce

D decrease

Answer: A

Question 22

Select the most appropriate option to fill in the blank no. 2.

A on

B at

C to

D of

Answer: D

SSC CHSL Free App

Question 23

Select the most appropriate option to fill in the blank no. 3.

- A nothing
- B anything
- C nobody
- D everything

Answer: A

Question 24

Select the most appropriate option to fill in the blank no. 4.

- A explosion
- B erosion
- C epidemic
- D epidermis

Answer: C

Question 25

Select the most appropriate option to fill in the blank no. 5.

- A prevented
- B postponed
- C protected
- D preserved

Answer: A

Daily Free SSC Practice Set

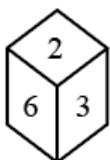
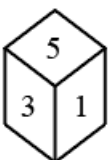
General Intelligence

Instructions

For the following questions answer them individually

Question 26

Two different positions of the same dice are shown. Select the number that will be at the top if '1' is at the bottom.



- A 4
- B 5
- C 6
- D 2

Answer: D

Free SSC Study Material (18,000 Solved Questions)

Question 27

Vineet is the husband of Antima. Dev is the brother of Kusha. Shalini is the mother of Kusha's mother. Dev is the son of Vineet. How is Antima related to Shalini?

- A Mother
- B Maternal aunt
- C Daughter
- D Sister

Answer: C

Question 28

Select the option in which the numbers are related in the same way as are the numbers of the following set. {8, 17, 15}

- A {7, 25, 24}
- B {43, 8, 5}
- C {46, 10, 9}
- D {49, 15, 11}

Answer: A

Question 29

Inacertain code language, SEMANTIC is coded as 14485293. How will PRACTICE be coded in that language?

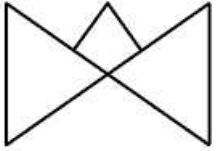
- A 29137934
- B 81943145
- C 79832934
- D 79132935

Answer: C

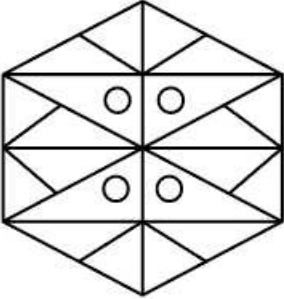
1500+ Very Important Free SSC Solved Questions

Question 30

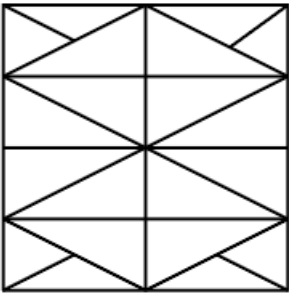
Select the option in which the given figure is embedded (rotation is NOT allowed).



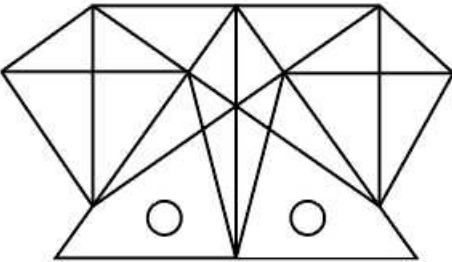
A



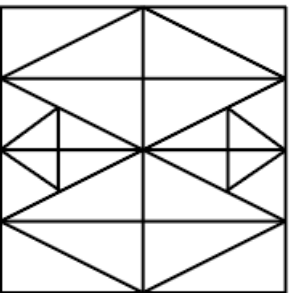
B



C



D



Answer: C

Question 31

Four letter-clusters have been given, out of which three are alike in some manner and one is different. Select the letter-cluster that is different.

A BASK

B SPIT

C TRAM

D MOVE

Answer: D

Question 32

Select the number from among the given options that can replace the question mark (?) in the following series.
10, 13, 19, 31, ?, 103

- A 55
- B 61
- C 73
- D 49

Answer: A

SSC Exam Update Videos & Free Study Material (YouTube Channel)

Question 33

Select the option in which the numbers share the same relationship as that shared by the given pair of numbers.
6:54

- A 10 : 108
- B 4 : 16
- C 2 : 9
- D 8 : 76

Answer: B

Question 34

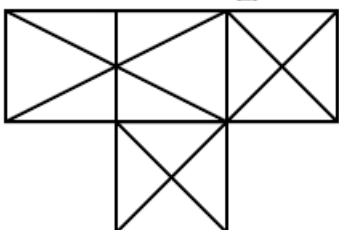
Four words have been given, out of which three are alike in some manner and one is different. Select the word that is different.

- A Termination
- B Conclusion
- C Progression
- D Valediction

Answer: C

Question 35

How many triangles are there in the following figure?



- A 30

B 24

C 20

D 28

Answer: A

Latest Job Updates on Telegram - Join here

Question 36

Select the option in which the words share the same relationship as that shared by the given pair of words.

Trust : Faith

A Fair : Wholesome

B Joy : Success

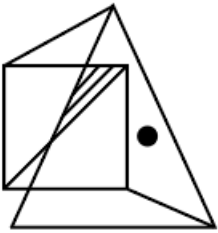
C Disgust : Distaste

D Salary : Employment

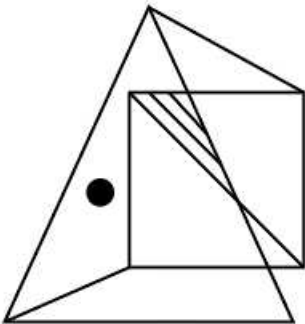
Answer: C

Question 37

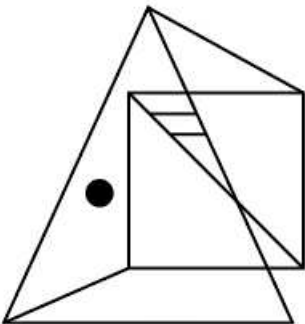
Select the correct mirror image of the given figure when the mirror is placed at the right side of the figure.



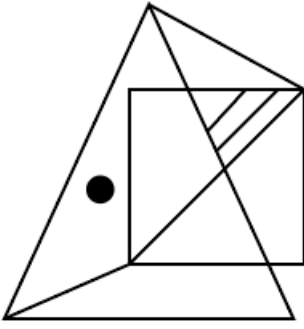
A



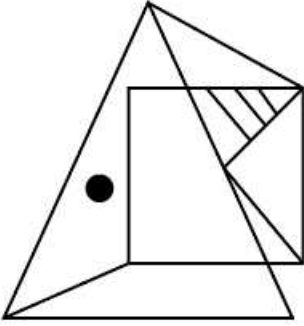
B



C



D



Answer: A

Question 38

Select the letter-cluster that can replace the question mark (?) in the following series.

REST, SEST, SFST, ?, SFTU

A SFUT

B SFRT

C SFTT

D SGTT

Answer: C

Join SSC Daily Quiz Telegram Group

Question 39

Select the correct option that indicates the arrangement of the given words in a logical and meaningful order.

1. Journey
2. Return
3. Destination
4. Reservation
5. Guided tour

A 3,4,1,5,2

B 3,5,4,2,1

C 4,5,3,1,2

D 3,4,2,1,5

Answer: A

Question 40

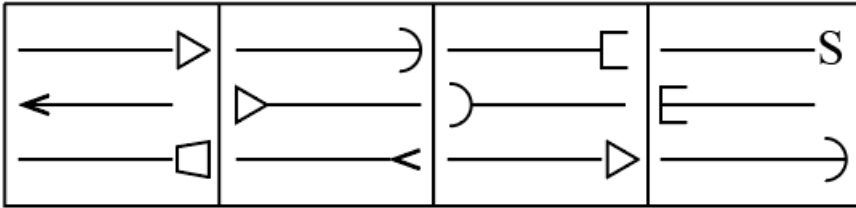
In a certain code language, INTERACT is written as TNIRETCA. How will SATURDAY be written in that language?

- A UTASYADR
- B ASUTDRYA
- C TASURYDA
- D TARSUYAD

Answer: D

Question 41

Select the figure that will come next in the following series.



- A
- B
- C
- D

Answer: A

25 SSC CHSL Mocks for just Rs. 149

Question 42

Select the option that is related to the third letter-cluster in the same way as the second letter-cluster is related to the first letter-cluster.

DJHF : JPNL :: KTQN : ?

- A QWUS
- B QHKN
- C PZWS
- D QzwT

Answer: D

Question 43

Which two signs should be interchanged to make the following equation correct?

$$8 + 12 \div 6 \times 8 - 9 = 8$$

- A \div and +
- B \times and \div
- C + and \times
- D \times and -

Answer: B

Question 44

Four numbers have been given, out of which three are alike in some manner and one is different. Select the number that is different.

- A 245
- B 385
- C 59
- D 315

Answer: C

SSC CHSL Free Mock Test

Question 45

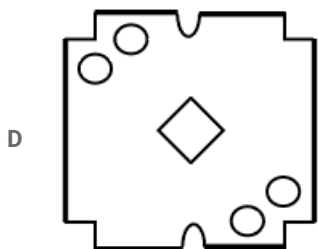
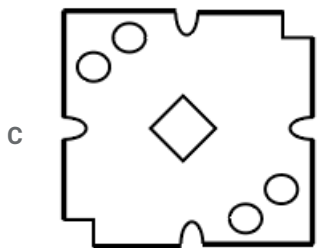
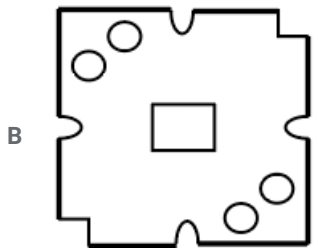
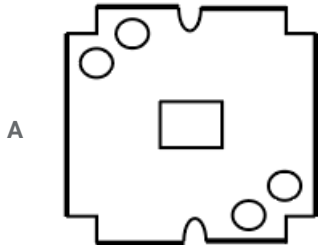
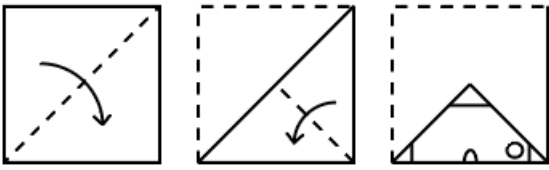
85 apples are to be distributed in a class consisting of boys and girls. If each boy gets 5 apples, then each girl will get 7 apples, and if each boy gets 4 apples, then each girl will get 9 apples. How many students are there in the class?

- A 15
- B 14
- C 19
- D 17

Answer: A

Question 46

The sequence of folding a piece of paper and the manner in which the folded paper has been cut is shown below. How would this paper look when unfolded?



Answer: A

Question 47

'Musician' is related to 'Piano' in the same way as 'Farmer' is related to '_____'.
A Bullock
B Plough
C Field
D Cultivation

Answer: B

SSC CHSL Previous Papers (DOWNLOAD PDF)

Question 48

Select the option in which the numbers are related in the same way as are the numbers of the following set.

{14, 44, 8}

- A {12, 36, 9}
- B {18, 54, 13}
- C {15, 32, 11}
- D {49, 38, 12}

Answer: C

Question 49

Read the given statements and conclusions carefully. Assuming that the information given in the statements is true, even if it appears to be at variance with commonly known facts, decide which of the given conclusions logically follow(s) from the statements.

Statements:

- Some vehicles are cars.
- All cars are four-wheelers.
- Some four-wheelers are trucks.

Conclusions:

- I. Some vehicles are trucks.
- II. Some four-wheelers are vehicles.
- III. Some trucks are cars.

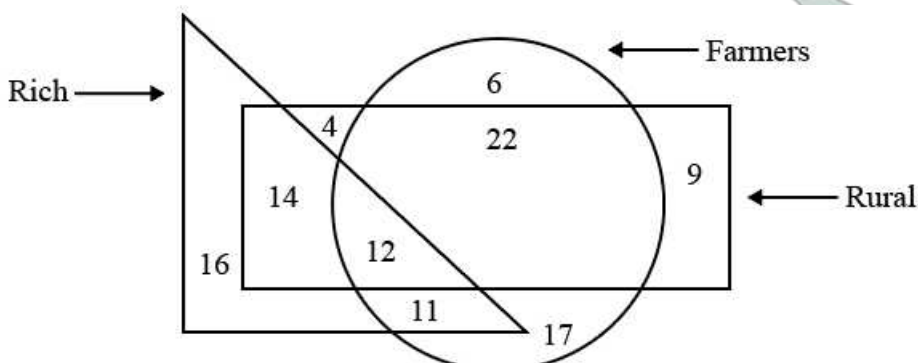
- A Only conclusions II and III follow
- B None of the conclusions follow.
- C Only conclusion I follows
- D Only conclusion II follows

Answer: D

Question 50

In the given diagram, the circle stands for 'farmers', the rectangle stands for 'rural', and the triangle stands for 'rich'. The numbers given in the different segments represent the number of persons of that category.

How many rural people are either farmers or rich but NOT both?



- A 28

- B 36
- C 25
- D 47

Answer: B

SSC CGL Previous Papers (DOWNLOAD PDF)

Quantitative Aptitude

Instructions

For the following questions answer them individually

Question 51

What is the value of x , if 25% of $480 + 30\%$ of $500 + x\%$ of $90 = 35\%$ of 900 ?

- A 45
- B 50
- C 55
- D 40

Answer: B

SSC CGL Free Mock Test (Latest Pattern)

Question 52

If the number $A9257B684$ is divisible by 11 , then what is the least value of $A - B$?

- A 14
- B 0
- C -8
- D 3

Answer: C

Question 53

If $\cot^2 x - 7 \operatorname{cosec}^2 x + 7 = 0$, then the value of x ($0 \leq x \leq 90^\circ$) is:

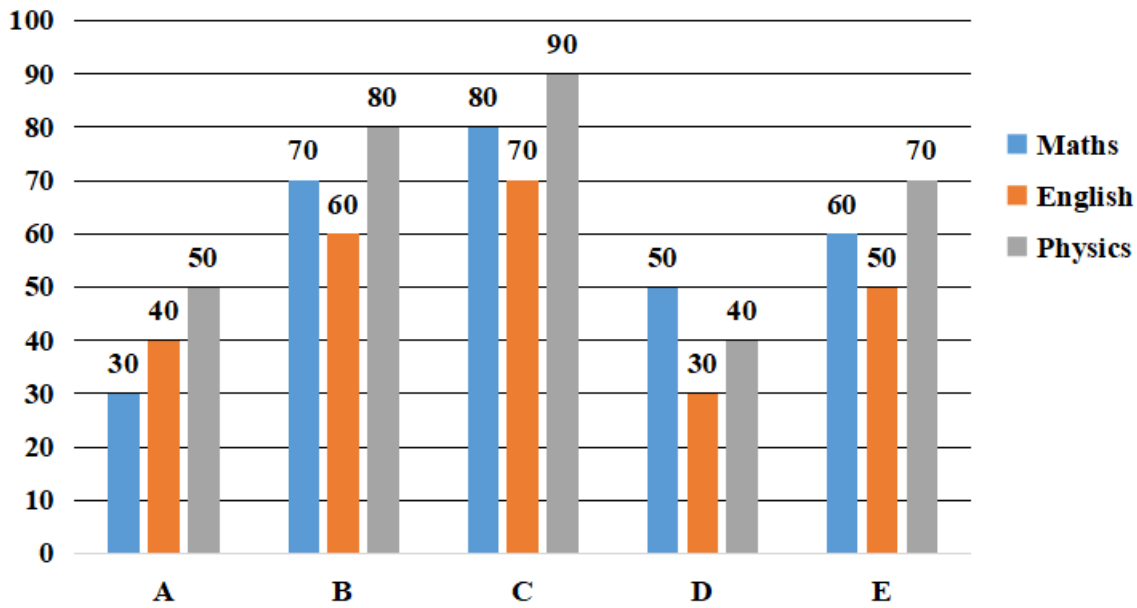
- A 30°
- B 0°
- C 90°
- D 60°

Answer: C

Question 54

Study the following graph and answer the question that follows.

Marks scored by five students A, B, C, D and E in three subjects (Maths, English and Physics). Total marks for each subject are 100.



What is the percentage marks obtained by E in all three subjects together? (Assuming maximum marks for each subject are 100.)

- A 40
- B 50
- C 70
- D 60

Answer: D

SSC CHSL Important Questions and Answers (Download PDF)

Question 55

Find the area (in cm^2) and the diameter (in cm), respectively, of a circle whose circumference is 40π cm?

- A 400π and 40
- B 40 and 400π
- C 400 and 40
- D 40 and 400

Answer: A



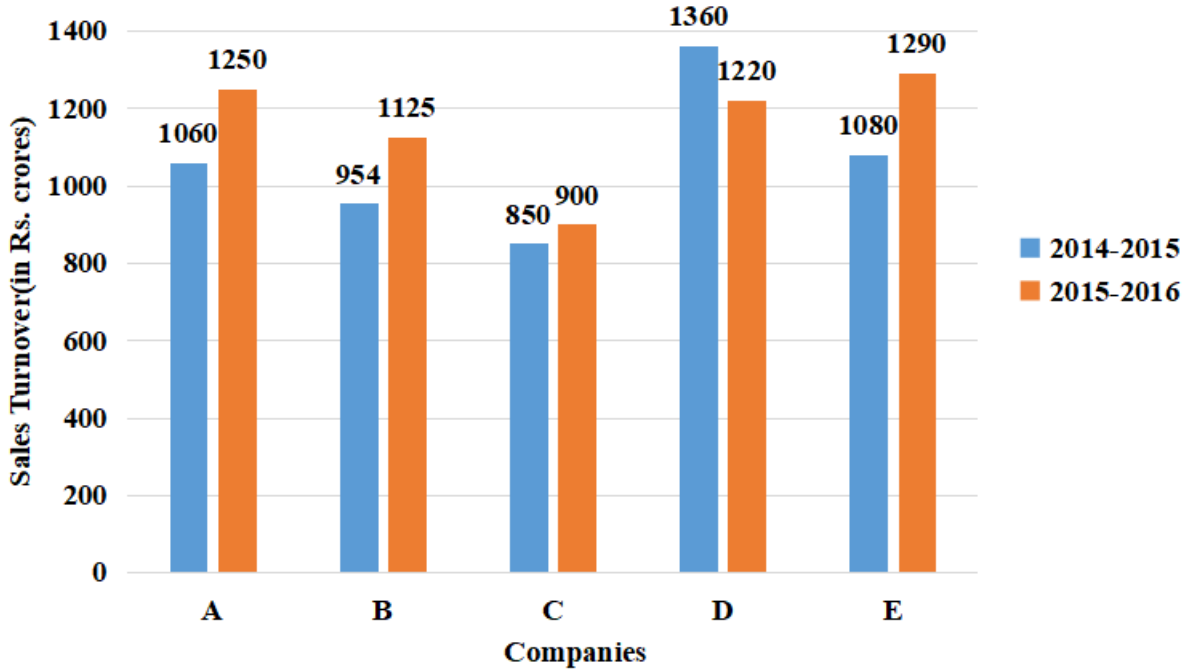
Question 56

Study the given bar graph and answer the question that follows.

The given bar graph represents the Sales Turnover (in 2 crore) of five automobile companies A, B, C, D and E during 2014-2015 and 2015-2016. The X-axis represents the Companies, and the Y-axis shows the Sales Turnover (in 2 crore).

(The data shown here is only for mathematical exercise. They do not represent the actual figures of the company.)

**Sales Turnover of Five Automobile Companies
(in Rs. crores) during 2014-2015 and 2015-2016**



If there was an increase of 25% in the average of the sales turnover of all the companies together in 2014-2015 from that in 2013-2014, then what was the average (in 2 crore, up to two decimal places) of the sales turnover of all the companies together in 2013-2014 ?

- A 848.64
- B 588.96
- C 806.21
- D 985.67

Answer: A

Question 57

If the difference between two numbers is 5 and the difference between their cubes is 1850, then the difference between their squares is:

- A $5\sqrt{484}$
- B $5\sqrt{482}$
- C $5\sqrt{485}$
- D $5\sqrt{483}$

Answer: C

SSC CHSL Study Material

Question 58

If $(a + b + c) = 0$ and $(abc) = 12$, then what is the value of $(a^3 + b^3 + c^3)$?

- A 6
- B 12
- C 72
- D 36

Answer: D

Question 59

In General store. an item with an MRP of ₹.35,600 is on the discount counter with a special price of ₹.34,888. What is the percentage of discount given for that item?

- A 3%
- B 4%
- C 1%
- D 2%

Answer: D

Question 60

The compound interest (in ₹., to the nearest integer) on ₹.8,950 for 2 years at the rate of 9% per annum, compounded annually, is:

- A 1,523
- B 1,683
- C 1,685
- D 1,468

Answer: B

SSC CHSL Free App

Question 61

AB and AC are tangents to a circle with centre O from an external point A. The tangents AB and AC touch the circle at B and C, respectively, such that $\angle BAC = 118^\circ$. Find the measure of $\angle OCB$.

- A 59°
- B 62°
- C 60°
- D 54°

Answer: A

Question 62

Varun and Syan can do a work in 3 days, Syan and Anil can do it in 4 days. and Anil and Varun can do it in 6 days. How many days will Anil alone take to do the work?

- A 22
- B 18
- C 20
- D 24

Answer: D

Question 63

What is the value of $\sin^2 60 + \tan^2 45 + \sec^2 45 - \operatorname{cosec}^2 30$?

- A 4
- B $\frac{1}{4}$
- C $-\frac{1}{4}$
- D -4

Answer: C

Daily Free SSC Practice Set

Question 64

Two trains start at the same time from two stations and proceed towards each other at speeds of 90 km/h and 70 km/h, respectively. When they meet, it is found that one train has travelled 140 km more than the other, What is the distance (in km) between the two stations?

- A 1100
- B 1120
- C 980
- D 1200

Answer: B

Question 65

What is the area (in m^2 , up to 1 place of decimal) of an equilateral triangular field of sides 8.5 m?

- A $\frac{18.1}{\sqrt{3}}$
- B $18.1\sqrt{3}$
- C $\frac{72.25}{\sqrt{3}}$
- D $72.25\sqrt{3}$

Answer: B

Question 66

A's salary increases in the ratio 8 : 11. If his new salary is ₹33,000, then what was his original salary (in ₹)?

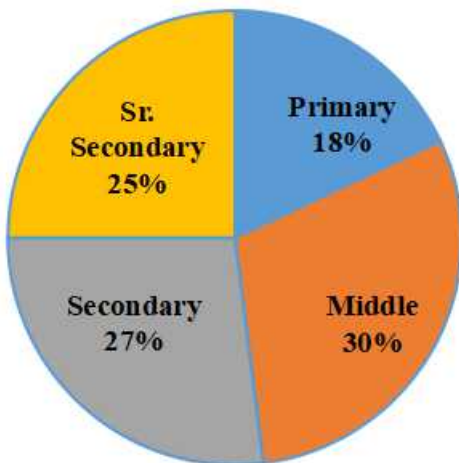
- A 20,000
- B 18,000
- C 22,000
- D 24,000

Answer: D

Free SSC Study Material (18,000 Solved Questions)

Question 67

Students of Primary, Middle, Secondary and Sr. Secondary classes collected donation for a Relief Fund as shown in the pie chart. If the donation collected from Middle classes was ₹6,750, then what would be the total amount of money collected by Secondary and Sr. Secondary classes?



- A ₹9,675
- B ₹11,700
- C ₹9,450
- D ₹12,825

Answer: B

Question 68

The sum of two numbers is 59 and their product is 1150. Find the sum of their squares.

- A 1183
- B 1178
- C 1176
- D 1181

Answer: D

Question 69

A shopkeeper sells two refrigerator sets at the same price. He gains 40% on one refrigerator and loses 40% on the other. What is his net loss percentage in the whole transaction?

- A 18%
- B 14%
- C 12%
- D 16%

Answer: D

1500+ Very Important Free SSC Solved Questions

Question 70

If $2 \tan x + 3 \cot x = 5$, then the value of $4 \tan^2 x + 9 \cot^2 x$ is:

- A 11
- B 15
- C 17
- D 13

Answer: D

Question 71

The length of a rectangle is five times of its breadth. If the area of the rectangle is 3125 cm^2 , then what is the length of the rectangle?

- A 125 cm
- B 120 cm
- C 135 cm
- D 130 cm

Answer: A

Question 72

The centroid of an equilateral triangle $\triangle ABC$ is O. If $AB = 27 \text{ cm}$, then the length of AO is:

- A $9\sqrt{3} \text{ cm}$
- B $6\sqrt{3} \text{ cm}$
- C $7\sqrt{3} \text{ cm}$
- D $8\sqrt{3} \text{ cm}$

Answer: A

SSC Exam Update Videos & Free Study Material (YouTube Channel)

Question 73

30 people went to a restaurant for a dinner party. 20 of them paid ₹880 each and each of the rest of them paid ₹110 more than the average of the total expenses. What was the total expense (in ₹) for the dinner?

- A 27,840
- B 29,360
- C 28,050
- D 24,580

Answer: C

Question 74

What is the value of 9% of $5500 + 2.4\%$ of $1100 - 40\%$ of 1600 ?

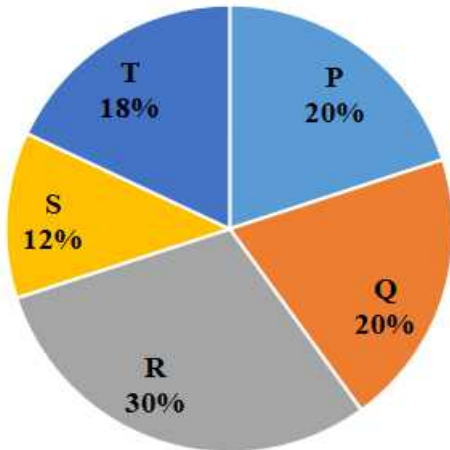
- A -118.6
- B 181.6
- C -181.6
- D 118.6

Answer: A

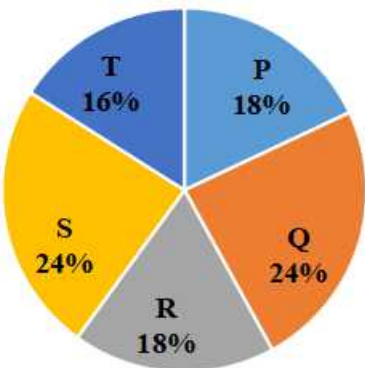
Question 75

The given pie charts represent the distribution of candidates who enrolled for a bank clerical examination and the candidates (out of those enrolled) who passed the examination. from five different institutes P, Q, R, S and T. Study the pie charts and answer the question that follows.

(i) Total number of candidates who enrolled for the examination from five institutes = 5500



(ii) Total number of candidates who passed the examination from five institutes = 3300



The average number of candidates passed from institutes P and Q together is what percentage of the total number of candidates enrolled from institutes P and Q together?

- A 30%
- B 25.2%
- C 25.8%
- D 24.6%

Answer: B

[Latest Job Updates on Telegram - Join here](#)

General Awareness

Instructions

For the following questions answer them individually

Question 76

In which state is the Renuka Lake located?

- A Arunachal Pradesh
- B Uttar Pradesh

C Himachal Pradesh

D Madhya Pradesh

Answer: C

Join SSC Daily Quiz Telegram Group

Question 77

In the context of computers, what is Ubuntu?

A An open-source operating system sponsored by Canonical Ltd.

B A search engine by Mozilla Foundation.

C An android-based search engine by Microsoft.

D An anti-virus software by Microsoft.

Answer: A

Question 78

Who among the following won the men's title in the 77th Senior National Squash Championship, held in February 2020?

A Abhay Singh

B Harinder Pal Singh Sandhu

C Abhishek Pradhan

D Saurav Ghosal

Answer: D

Question 79

Who among the following was NOT a ruler of the Kushana dynasty?

A Nahapana

B Vasishka

C Vasudeva

D Huvishka

Answer: A

25 SSC CHSL Mocks for just Rs. 149

Question 80

Who among the following was appointed as the Chief Vigilance Commissioner of India in April 2020?

A Sharad Kumar

B Suresh N Patel

C Sanjay Kothari

D Rajnish Kumar

Answer: C

Question 81

With which sport are Vijay Amritraj and Anand Amritraj associated?

A Lawn tennis

B Foot ball

C Table tennis

D Cricket

Answer: A

Question 82

According to a forecast by Oxford Economics Global Cities Research 2018, which Indian city tops the list of top ten fastest growing cities in the world between 2019 and 2035?

A Agra

B Surat

C Hyderabad

D Bengaluru

Answer: B

SSC CHSL Free Mock Test

Question 83

Which of the following is measured in the unit called Gauss?

A Radius of the nuclei

B Magnetic induction

C Marine depth

D Force

Answer: B

Question 84

In which of the following states / union territories has the Border Roads Organisation (BRO) constructed a 440-m-long tunnel to boost the Char Dham Project?

A Jammu and Kashmir

B Himachal Pradesh

C Uttarakhand

D Laddakh

Answer: C

Question 85

Which of the following pigments causes the red colour in onions?

- A Carotenoids
- B Anthocyanins
- C Chlorophylls
- D Betalains

Answer: B

SSC CHSL Previous Papers (DOWNLOAD PDF)

Question 86

When was the First Law Commission set up in independent India?

- A 1952
- B 1955
- C 1956
- D 1951

Answer: B

Question 87

In which of the following neighbouring countries of India is the famous Katal Raj Temples complex, with shrines of multiple faiths, located?

- A Myanmar
- B Afghanistan
- C Sri Lanka
- D Pakistan

Answer: D

Question 88

A soft currency is one that is expected to in value relative to other currencies.

- A reduce
- B dynamic
- C increase
- D constant

Answer: A

SSC CGL Previous Papers (DOWNLOAD PDF)

Question 89

Which was the first Union Territory in India to be declared 100% organic by the Ministry of Agriculture in 2020?

- A Lakshadweep
- B Ladakh
- C Chandigarh
- D Puducherry

Answer: A

Question 90

Which Mughal emperor built the city called 'Makhsudabad' later popularly known as Murshidabad?

- A Bahadur Shah Zafar
- B Shah Jahan
- C Humayun
- D Akbar

Answer: D

Question 91

Which of the following Indian states has the famous tourist destination called Pamban Island?

- A Odisha
- B Kerala
- C Andhra Pradesh
- D Tamil Nadu

Answer: D

SSC CGL Free Mock Test (Latest Pattern)

Question 92

According to the World Population Review Report, released in February 2020, Indian economy emerged as the world's largest economy in 2019.

- A 5th
- B 6th
- C 7th
- D 4th

Answer: A

Question 93

Who among the following became the first ever Indian female wrestler to win an Olympic medal?

- A Vinesh Phogat
- B Kavita Devi
- C Babita Kumari
- D Sakshi Malik

Answer: D

Question 94

Which Article of the Constitution of India affirms the right to move the Supreme Court by appropriate proceedings for the enforcement of the rights conferred in Part III of the Constitution?

- A Article 21
- B Article 32
- C Article 37
- D Article 46

Answer: B

SSC CHSL Important Questions and Answers (Download PDF)

Question 95

What do you call an event where a computer becomes unresponsive due to either a program or the system itself becoming unresponsive and no longer taking input?

- A Booting
- B Ejecting
- C Moving
- D Hanging

Answer: D

Question 96

Through which of the following states does the Rushikulya river pass?

- A Kerala
- B Andhra Pradesh
- C Tamil Nadu
- D Odisha

Answer: D

Question 97

Which of the following is an animal trading festival of Gujarat?

- A Vautha Mela
- B Madhavpur Mela
- C Ambubachi Mela
- D Kumbh Mela

Answer: A

SSC CHSL Study Material

Question 98

In February 2020, the armed forces of India and the UK held a joint exercise in the UK. The exercise was named

- A Ghatak Prahari
- B Mitra Prahar
- C Ajeya Warrior
- D Surya Kiran

Answer: C

Question 99

As per the standards set by the Department of Telecom, Government of India, for all the new designs of mobile handsets, the permissible Specific Absorption Rate (SAR) limit is averaged over 1 gram of human tissue with effect from 1st September 2012.

- A 1.8 W/kg
- B 2.1 W/kg
- C 2.2 W/kg
- D 1.6 W/kg

Answer: D

Question 100

Who among the following is the author of the book 'Amnesty'?

- A Vikram Seth
- B Aravind Adiga
- C Chetan Bhagat
- D Amish Tripathi

Answer: B

SSC CHSL Free App

25 SSC CHSL Mocks for just Rs. 149

SSC CHSL Free Mock Test

SSC CHSL Previous Papers (DOWNLOAD PDF)

SSC CGL Previous Papers (DOWNLOAD PDF)

SSC CGL Free Mock Test (Latest Pattern)

SSC CHSL Important Questions and Answers (Download PDF)

SSC CHSL Study Material

SSC CHSL Free App

Daily Free SSC Practice Set

Free SSC Study Material (18,000 Solved Questions)

1500+ Very Important Free SSC Solved Questions

SSC Exam Update Videos & Free Study Material (YouTube Channel)

Latest Job Updates on Telegram - Join here

Join SSC Daily Quiz Telegram Group