



## IBPS Clerk 2011 1st Shift

All rights reserved. No part of this publication may be reproduced, distributed, or transmitted in any form or by any means, electronic, mechanical, photocopying, recording or otherwise, or stored in any retrieval system of any nature without the permission of cracku.in, application for which shall be made to [support@cracku.in](mailto:support@cracku.in)

## Verbal

### Instructions

In each of these question two sentence I and II are given Each sentence has a blank in it Five words (a), (b), (c) (d) and (e) are suggested. Out of these only one fits at both the places in the context of each sentence Number of that word is the answer

### Question 1

- I. Our office decided to organize a party for the .....couple  
II. She.....him in conversation to while away some time.

- A new
- B engaged
- C pledged
- D held
- E encountered

**Answer: B**

### Explanation:

Only word that suits the context of both sentences is 'engaged'.  
In first senetnce, it refers to agrrement to get married.  
In the second sentence it refers to keep busy.  
Hence, the correct option is option B.

**Take 4 Free IBPS Clerk Mock Tests (With Solutions)**

### Question 2

- I. It is required that you fill out these two.....to register for the job  
II. This subject has many practical.....in day to day life.

- A forms
- B applications
- C relevance
- D statements
- E views

**Answer: B**

### Explanation:

The word suiting context of both the setences is applications.  
In the first sentence, it refers to a form which is to be filled in order to formally apply for something.  
In the second sentence, it refers to various operations.  
Option B is correct.

### Question 3

- I. The next.....of this case is after two months.  
II. After the accident her.....has been affected

- A dates

- B balance
- C evidence
- D health
- E hearing

**Answer:** E

**Explanation:**

Here, the word 'hearing' suits the context of both the sentences. In the first sentence, 'hearing' refers to the proceedings of court. In the second sentence, it refers to the sense of perceiving sound. Therefore, the correct answer is option E.

**Question 4**

- I. As a last..... we had to accept these terms and conditions
- II. This place has become a good tourist.....now

- A resort
- B step
- C attraction
- D spot
- E means

**Answer:** A

**Explanation:**

Here, the word suiting the context of both the sentence is 'resort'. In first sentence it is used to denote 'recourse'. In the second sentence it refers to a place for relaxing. The correct option is option A.

## IBPS Clerk Previous Papers (Download PDF)

**Question 5**

- I. The organization decided on an hourly minimum.....of rs35
- II. Will he.....a war on these fronts to improve things ?

- A pay
- B declare
- C pose
- D wage
- E campaign

**Answer:** D

**Explanation:**

Here, the appropriate word suiting the context is 'wage'. In the first sentence, it refers to salary.

In second sentence, it refers to act of declaring war.  
The correct option is option D.

### Instructions

Which of the phrases (a),(b),(c) and (d) given below should replace the phrase given in bold in the following sentence to make the sentence grammatically meaningful and correct If the sentence is correct as it is and 'No correction is required' mark (e) as the answer

### Question 6

**One of the factor** for her failure is the lack of concern for others

- A The mainly factor
- B One off factor
- C One of the factors
- D Among of the factor
- E No correction required

**Answer: C**

### Explanation:

The highlighted phrase is used in incorrect manner.

The correct sentence would read as:

**One of the factors** for her failure is the lack of concern for others

The correct option is option C.

### Question 7

**In reality this policy will only lead to more corruption in** an already corrupt environment

- A a already corrupt
- B already an corrupt
- C among already corrupt
- D Overly corrupt already
- E No correction required

**Answer: E**

### Explanation:

There is no error in highlighted part. It is grammatically correct.

Therefore, the correct option is option E.

## IBPS Clerk Important Questions PDF

### Question 8

**At currently estimates** the cost of modernizing the airport would be more than double the earlier estimate

- A By currently estimates
- B On current estimates
- C With estimates currently

- D At current estimates
- E No correction required

**Answer: D**

**Explanation:**

There is grammatical error in highlighted part.

The correct statement would read as:

**At current estimates** the cost of modernizing the airport would be more than double the earlier estimate. Therefore, the correct option is option D.

**Question 9**

**No of these moves brought credit to the management**

- A Any of these
- B Some off these
- C None of these
- D These of all
- E No correction is required

**Answer: C**

**Explanation:**

The highlighted part has been used in incorrect manner.

The correct sentence would read as:

**None of these moves** brought credit to the management. The correct option is option C.

**Question 10**

**India has always been primarily an agricultural country**

- A always be
- B been towards
- C become always
- D always become
- E No correction required

**Answer: E**

**Explanation:**

The sentence is grammatically correct and there is no error anywhere.

Hence, the correct option is option E.

**IBPS Clerk Free Preparation App**

**Instructions**

In each question below a sentence with four words printed in bold type is given These are numbered as (1),(2)(3), and (4).One of these four words printed in bold may be either wrongly spelt or inappropriate in the context of the sentence Find out the word which is wrongly spelt or inappropriate if any The number of that word is your answer If all the words printed in bold are correctly spelt and also appropriate in the context of the sentence mark (5) i.e, 'All correct' as your answer

**Question 11**

Bye(1) / the summer of 1939, Hitler was ready(2)/ to unleash(3)/his army on Europe(4) /All correct(5).

- A 1
- B 2
- C 3
- D 4
- E 5

**Answer:** A

**Explanation:**

The error is in part 1 of the sentence.

In part 1 of the sentence, the word 'by' has been mis-spelt as 'bye'.

The correct option is option A.

**Question 12**

The two national(1)/emblems(2)/of India are of(3)/Buddhist origin(4)/ All correct(5)

- A 1
- B 2
- C 3
- D 4
- E 5

**Answer:** E

**Explanation:**

The sentence is grammatically correct and has no error as such.

**Question 13**

Political(1)/desicions(2)/ought(3)/to have a rationale(4)/All correct(5).

- A 1
- B 2
- C 3
- D 4
- E 5

**Answer:** B

**Explanation:**

There is a spelling error in part 2 of the sentence.

In part 2 of the sentence, 'decisions' has been wrongly spelt as 'desicions'.

The correct option is option B.

Question 14

Traditionalli(1)/sales get a boost(2)/in the festival(3)/season(4)/All correct(5).

- A 1
- B 2
- C 3
- D 4
- E 5

Answer: A

Explanation:

There is spelling error in part 1 of the sentence.

In part 1 of the senetence, 'traditionally' has been wrongly spelt as 'traditionalli'.

The correct option is option A.

Question 15

Fifteen(1)per cent of India's land is still(2)/covered(3)/by forrests(4)/All correct(5).

- A 1
- B 2
- C 3
- D 4
- E 5

Answer: D

Explanation:

There is spelling error in part 4 of the sentence.

In part 4 of the senetence, forests has been wrongly spelt as 'forrests'.

The correct option is option D.

Instructions

Read the following passage to answer the given question based on it. Some words/phrases are printed in bold to help you locate them while answering some of the questions.

Organized retail has **"fuelled"** new growth categories like liquid hand wash, breakfast cereals and pet foods in the consumer goods industry accounting for almost 50% of their sales said data from market search firm Nielsen The figures showed some of these new categories got more than 40% of their business from modern retail outlets. The data also suggests how products in these categories reach the neighbourhood kirana stores after they have established themselves in modern trade

While grocers continue to be an important channel for the new and evolving categories we saw an increased presence of the high end products in modern trade For example **premium** products in laundry detergents dishwashing car air fresheners and surface care increased in availability through this format as these products are aimed at **"affluent"** consumers who are more likely to shop in supermarket/hypermarket outlets and who are willing to pay more for specialized products

Some other categories that have grown exceptionally and now account for bulk of the sales from modern retail are frozen and With the evolution of modern trade our growth in this channel has been healthy as it is for several other categories Modern retail is an important part of our business said managing director Kellogg India.

What modern retail offers to companies experimenting with new categories is the chance to educate customers which was not the case with a general trade store Category creation and market development starts with modern trade but as more consumer start consuming this category they "penetrate into other channels" said president food FMCG category Future Group the country's largest retailer which operates stores like Big Bazaar

But a point to note here is that modern retailers themselves push their own private brands in these very categories and can emerge as a big threat for the consumers goods and foods companies

For instance Big Bazaar's private label Clean Mate is hugely popular and sells more than a brand like Harpic in its own stores So there is a certain amount of conflict and competition that will play out over the next few years which the FMCG companies will have to watch out for said KPMG's executive director (retail)

In the past there have been instances of retailers boycotting products from big FMCG players on the issue of margins but as modern retail become increasingly significant for "pushing" new categories experts say we could see more partnerships being forged between retailers and FMCG companies Market development for new categories takes time so brand wars for leadership and consumer franchise will be fought on the modern retail platform A new brand can overnight compete with "established" companies by trying up with few retailers in these categories president of Future Group added

**Question 16**

**Which of the following is being referred to as new growth category ?**

- A Soap cake
- B Fresh fruits
- C Fresh vegetables
- D Liquid Hand wash
- E Usual groceries

**Answer: D**

**Explanation:**

At the starting of the paragraph, author says that liquid hand wash breakfast cereals and pet foods in the consumer goods are new growth categories.

Therefore the correct option is option D.

## IBPS Clerk Free Online Coaching

**Question 17**

**Which of the following is being referred to as modern retail outlet ?**

- A Kirana Store
- B On-line Store
- C Door-to-door Selling
- D Road-side Hawkers
- E Supermarket

**Answer: E**

**Explanation:**

The author refers to supermarket/hypermarket outlets when he says modern retail outlets. These outlets mainly cater to affluent strata of the market.

The correct option is option E.

**Question 18**

**Which of the following best conveys the meaning of the phrase "watch out for" as used in the passage ?**

- A Demand justice
- B Avoid conflict
- C Be on the alert



- D passively accept
- E Open for competition

**Answer: C**

**Explanation:**

Author uses the phrase 'watch out for' in context of FMCG companies to be on alert of the home grown FMCG products of the modern retail outlet.

It means that 'to be alert' towards someone or something.

The correct option is option C.

**Question 19**

**Which of the following is being referred to as certain amount of conflict ?**

- A Retailers selling their own products with products of companies
- B Retailers selling similar products of different consumer companies
- C Offering differential rate of margin for different products
- D New products killing the old products
- E Different retailers selling same category of products

**Answer: A**

**Explanation:**

The modern retail banks sell the FMCG products of their own brands in addition to that of the FMCG companies.

This creates conflict due to resulting competition.

Therefore, the correct option is option A.

**Question 20**

**The new growth category products**

- A reach first the neighbourhood Kirana shop and then the modern retail outlets
- B account for less than 20% of sales in organized retail
- C reach all the outlets almost at the same time
- D first become popular in modern trade outlets before reaching Kirana shops
- E are aimed at the poor section of the society

**Answer: D**

**Explanation:**

An interesting trend has been observed in the case of new growth category products.

They reached modern retail outlets first and then subsequently reached the neighbourhood kirana stores.

Therefore, option D is correct.

**Question 21**

**Which of the following is not true in the context of the passage ?**

- A Clean Mate is a product of an organized retailers

- B Some retailers don't keep some products if the profit margin is not good
- C A new brand can never quickly displace an established brand
- D Kirana store still remains an important channel
- E In future there will be more partnerships between retailers and FMCG Companies

**Answer:** C

**Explanation:**

Author quotes President of Future group as he states that a new brand can overnight compete successfully with established brand. If the new brand ties up with few retailers in growth categories, the new brand can emerge as a strong competitor. Statement C contradicts this and hence the correct option is option C.

**Question 22**

**Which of the following categories has become very popular through sales from modern retail outlets ?**

- A Frozen foods
- B Computers
- C Cell phones
- D Fresh fruits
- E Soft-drinks

**Answer:** A

**Explanation:**

As author says in the third paragraph of the passage, the sell of 'frozen food' has become very popular through modern outlets. Option A is correct.

## Daily Free Banking Online Test

**Question 23**

**Which class/section of the people are more likely to shop in Hypermarket outlets ?**

- A Senior citizens
- B Younger generation
- C Rich consumers
- D Poor section
- E Women

**Answer:** C

**Explanation:**

Hypermarket/Supermarket generally houses FMCG products in premium range. These are mainly for affluent strata of society which can afford these products. Therefore, the correct option is option C.

**Question 24**

Which of the following advantages do modern retail outlets provide for new categories of products as compared to general trade stores ?

- A Higher profit margins
- B Experimenting with new products
- C Competition with similar products
- D Better packing of the product
- E products at much lower price

**Answer: B**

**Explanation:**

Modern retail outlets are open to experimentations of new products from new brands. The traditional stores generally play it safe with known products and established brands. Therefore, the correct option is option B.

**Question 25**

..... penetrate into other Channels Which of the following is being referred to as Channels ?

- A Products
- B Companies
- C New products
- D Existing products
- E None of these

**Answer: E**

**Explanation:**

Here, channels refers to 'categories' of products. However no option states this. Hence, none of the option is the answer.

## Download IBPS Clerk General Knowledge PDF

**Question 26**

Choose the word which is most similar in meaning to the word, 'Fuelled', printed in bold as used in the passage

- A Killed
- B Conflicted
- C Stimulated
- D Contained
- E Retained

**Answer: C**

**Explanation:**

Here, fuelled is used to imply stimulation.  
It has been used in context of organized retail stimulating the new growth categories.  
Therefore, the correct option is option C.

**Question 27**

Choose the word which is most similar in meaning to the word, 'Pushing', printed in bold as used in the passage

- A Stalling
- B Introducing
- C Depressing
- D Segregating
- E Suggesting

**Answer:** B

**Explanation:**

Here, 'pushing' is used in reference to the introduction of new categories in market.  
In the given context, it refers to introduction.  
The correct option is option B.

**Question 28**

Choose the word which is most similar in meaning to the word, 'Premium', printed in bold as used in the passage

- A Superior
- B Bonus
- C Payable
- D Promotional
- E Indistinguished

**Answer:** A

**Explanation:**

In the context of passage, author uses premium to describe high quality or 'superior' products.  
Therefore, the correct option is option A.

## 200+ Free GK Tests for Banking exams

**Question 29**

Choose the word which is most opposite in meaning to the word, 'Established', printed in bold as used in the passage.

- A Small
- B New
- C Orthodox
- D Modern
- E Remaining

**Answer:** B

**Explanation:**

Author uses 'established' in case of brands. It means that the brands which are 'older' in market. The opposite of 'established' will be 'new'. Option B is correct.

**Question 30**

Choose the word which is most opposite in meaning to the word, 'Affluent', printed in bold as used in the passage.

- A Affected
- B Rural
- C Uneducated
- D Poor
- E Younger

**Answer: D**

**Explanation:**

In the context of the given passage, author uses the word 'affluent' to mean 'rich'. He makes reference to premium products which are afforded mostly by 'affluent' i.e rich strata of the society. The opposite of rich is poor. Therefore, the correct option is option D.

**Instructions**

Read each sentence to find out whether there is any grammatical mistake/error in it. The error if any will be in one part of the sentence Mark the number of the part with error as your answer If there is no error mark (5).

**Question 31**

The cost of constructing (1)/houses are increased (2)/because of the high (3)/price of cement (4)/No error (5).

- A 1
- B 2
- C 3
- D 4
- E 5

**Answer: B**

**Explanation:**

There is grammatical error in the part II of the sentence. 'Are' has been used incorrectly in the place of 'has'. The correct sentence would read as:  
The cost of constructing houses has increased because of the high price of cement. Option B is correct answer.

## 100 Free IBPS Clerk Computer Awareness Tests

**Question 32**

According to the Twelfth (1)/Five Year Plan India should (2)/invest one trillion dollars (3)/in infrastructure projects (4)/No error (5).

- A 1

- B 2
- C 3
- D 4
- E 5

**Answer:** E

**Explanation:**

There is no error in any part of the sentence as it is grammatically correct.  
The correct option is option E

**Question 33**

To increase the selling (1)/of products in rural areas (2)/the company will hire (3)/over five hundred trainees (4)/No error(5).

- A 1
- B 2
- C 3
- D 4
- E 5

**Answer:** A

**Explanation:**

There is error in part 1 of the sentence.  
'Selling' has been wrongly used instead of 'sales'.  
Therefore, the correct option is option A.

**Question 34**

We have spent (1)/most of the profits (2)/that we earn (3)/last year on purchasing new computers (4)/ No error (5).

- A 1
- B 2
- C 3
- D 4
- E 5

**Answer:** C

**Explanation:**

There is grammatical error in part III of the sentence. Present tense has been wrongly used instead of past tense.  
The correct sentence would read as:  
We have spent most of the profits that we earned last year on purchasing new computers.  
Therefore, option C is correct.

**200+ Banking Previous Papers (Download PDF)**

**Question 35**

The Government has (1)/promised to revise (2)/the pension scheme for bank (3)/staff since next year (4)/ No error (5).

- A 1
- B 2
- C 3
- D 4
- E 5

**Answer: D**

**Explanation:**

The error is in part IV of the sentence.  
The word 'since' has been wrongly used instead of 'from'.  
The correct answer is option D.

**Question 36**

If a software company (1)/sends its employees abroad (2)/to work for a foreign client they (3)/pays them a daily allowance (4)/No error (5).

- A 1
- B 2
- C 3
- D 4
- E 5

**Answer: C**

**Explanation:**

The error is in part III of the sentence.  
Plural form of the verb 'it' should be used instead of singular.  
The correct sentence would read as:  
If a software company sends its employees abroad to work for a foreign client it pays them a daily allowance.  
Option C is correct.

**Question 37**

As per RBI guidelines (1)/a bank account in which (2)/there is no transactions for (3)/two years is a dormant account (4)/No error (5).

- A 1
- B 2
- C 3
- D 4
- E 5

**Answer: C**

**Explanation:**

There is grammatical error in part III of the sentence.

'is' has been wrongly used instead of 'are'.

The correct sentence would read as:

As per RBI guidelines a bank account in which there are no transactions for two years is a dormant account.

The correct option is option C.

**Latest Job Updates on Telegram - Join here**

**Question 38**

Farmers can easy (1)/get loans under (2)/the Kisan Credit Card Scheme which (3)/was launched by RBI. (4)/No error (5).

A 1

B 2

C 3

D 4

E 5

**Answer: A**

**Explanation:**

The error is in part 1 of the sentence.

'Easy' has been wrongly used instead of 'easily'.

The correct option is option A.

**Question 39**

Today there are very few (1)/tigers left in India (2)/ and many NGOs are (3)/working saving our national animal (4)/No error (5)

A 1

B 2

C 3

D 4

E 5

**Answer: D**

**Explanation:**

The error is in part 4 of the sentence.

Gerund form of 'save' has been wrongly used instead of infinitive form.

The correct statement would read as:

Today there are very few tigers left in India and many NGOs are working to save our national animal.

Therefore, the correct option is option D.

**Question 40**

People are willing to (1)/pay higher taxes so that (2)the Government can build better roads (3)/and provide safe drinking water (4)/No error (5).

A 1



- B 2
- C 3
- D 4
- E 5

**Answer:** E

**Explanation:**

There is no error in the sentence and it is grammatically correct. Therefore, the correct option is option E.

## Take 4 Free IBPS Clerk Mock Tests (With Solutions)

**Instructions**

In the following passage there are blanks each of which has been numbered. These numbers are printed below the passage and against each five words are suggested one of which fits the blank appropriately. Find out the appropriate word in each case.

Today the economies of African countries are growing at 5 per cent every year. Rich countries usually help poorer ones (91) African countries through donations and aid. Their (92) are not always successful as loans are (93) not used for the projects for which they are (94). China however has found a different (95) to help Africa by trading more with the (96). In 2009 China's trade with African countries was \$90 billion (97) than the US which was \$86 billion (98) countries have now begun to notice the (99) available in Africa. China's attitude has (100) the way the world deals with poor countries.

"Trade not aid" is the new mantra of African nations.

**Question 41**

91

- A belonging
- B similar
- C compared
- D with
- E like

**Answer:** E

**Explanation:**

Here, with and like are the only two possible answers that grammatically apply to the context. The author cites the example of Africa as one of the poorer countries. So, "with" can't be an option. Hence, the correct word denoting this is 'like'.

Therefore option E is correct.

**Question 42**

92

- A efforts
- B practices
- C challenges
- D achievements
- E attempt

**Answer: A**

**Explanation:**

Here, the word which suits the context is 'efforts'. It means that the aid and donation provided or efforts of richer countries in helping poorer nations may not always prove to be fruitful, The correct option is option A.

**Question 43**

93

- A given
- B approved
- C regular
- D often
- E being

**Answer: D**

**Explanation:**

The correct which suits the copntext and is grammatically appropriate is 'often'. Therefore, the correct option is option D.

## IBPS Clerk Previous Papers (Download PDF)

**Question 44**

94

- A grant
- B sanctioned
- C took
- D hired
- E apply

**Answer: B**

**Explanation:**

We use 'sanctioned' in context of projects. It is most appropriate and suitable word amongst the options. It means formally allowed to do. Therefore, option B is correct option.

**Question 45**

95

- A goal
- B fund
- C way

D skill

E dream

**Answer: C**

**Explanation:**

The China is using different way or path to help poor nations.  
Here, the correct usage is way.  
Therefore, the correct option is option C.

**Question 46**

96

A countries

B others

C abroad

D neighbours

E poor

**Answer: E**

**Explanation:**

Here, the word 'poor' will suit the context.

It is used to refer to underdeveloped African countries and China's way of helping through trade rather than donation or aid.

The correct option is option E.

## IBPS Clerk Important Questions PDF

**Question 47**

97

A further

B extra

C more

D less

E high

**Answer: C**

**Explanation:**

The correct word to be used is 'more' which means in addition to or extra.  
The correct option is option C.

**Question 48**

98

- A Recently
- B Any
- C Friendly
- D Many
- E While

**Answer:** D

**Explanation:**

The correct word which can be used is 'many'.  
It makes the sentence grammatically sensible.  
Therefore, the correct option is option D.

**Question 49**

99

- A differences
- B supply
- C quantity
- D people
- E opportunities

**Answer:** E

**Explanation:**

There are 'opportunities' in the underdeveloped African countries. The developed countries are now understanding that establishing trade practices would help them better than just donations and aids.  
Therefore the correct option is option E.

## IBPS Clerk Free Preparation App

**Question 50**

100

- A substitute
- B changed
- C exchanged
- D transform
- E convert

**Answer:** B

**Explanation:**

Here, the most appropriate word suiting the context is 'changed'.  
It refers to the modification in the perspective of developed countries in helping the underdeveloped ones.  
Therefore, the correct option is option B.

## Free Banking Study Material (15000 Solved Questions)

### Reasoning

#### Instructions

For the following questions answer them individually

#### Question 51

In a certain code GRANT is written as UOBSH and PRIDE is written as FEJSQ How is SOLD written in that code ?

- A EPMT
- B TPME
- C EMPT
- D CKNR
- E ETPM

Answer: C

#### Explanation:

Here, the code for given word is obtained by

1. First, writing the word in reverse order
2. Second, the next letter in alphabetical series is written in place of given letter.

Therefore, the word SOLD will be coded as,

1. DLOS
2. EMPT

Therefore, the correct option is option C.

## IBPS Clerk Free Online Coaching

#### Question 52

Four of the following five are alike in a certain way and so form a group Which is the one that does not belong to that group ?

- A 19
- B 17
- C 13
- D 27
- E 37

Answer: D

#### Explanation:

Except 27, all other numbers are prime numbers.

27 is a composite number.

Therefore, the correct option is option D.

#### Question 53

How many meaningful English words can be made with the second the fourth the sixth and the seventh letters of the word STUMBLE using each letter only once in each word ?

- A None
- B One
- C Two
- D Three
- E More than three

**Answer: B**

**Explanation:**

The second, fourth, sixth and seventh letter of the word STUMBLE are T, M, L, E. Only one meaningful word i.e MELT can be formed from the letters. Therefore, the correct option is option B.

**Question 54**

What should come in place of the question mark (?) in the following letter series based on the English alphabetical order ?  
BE, GJ, LO, QT ?

- A UX
- B VY
- C SV
- D RU
- E WZ

**Answer: B**

**Explanation:**

Here, in the given series a peculiar pattern is followed. The second letter in group is third to the right of first letter in alphabetical series. The first letter in the next group is second to the right of the second letter in previous group. The last pair of letter is QT. The second letter to the right of T is V and third letter to the right of V is Y. Therefore the pair is VY. Hence, the correct option is option B

**Question 55**

How many such pairs of letters are there in the word GOVERNMENT each of which has as many letters between them in the word (in both forward and backward directions) as in the English alphabet ?

- A None
- B One
- C Two
- D Three
- E More than three

**Answer: E**

**Explanation:**

There are four pair of letters having as many letters between them in the word (in both forward and backward directions) as in the

English alphabet.

1. G & M
2. R & N
3. O & R
4. G & M

Hence, the correct option is E.

### Instructions

In the following question the symbols  $\delta$ , %, \$, # and @ are used with the following meanings as illustrated below

'P \$ Q' means 'P is not smaller than Q'

'P @ Q' means 'P is not greater than Q'

'P  $\delta$  Q' means 'P is neither smaller than nor equal to Q'

'P # Q' means 'P is neither greater than nor equal to Q'

'P % Q' means 'P is neither smaller than nor greater than Q'

Now in each of the following question assuming the given statements to be true find which of the two Conclusions I and II given below them is/are definitely true ?

### Question 56

**Statements** F @ N, N  $\delta$  R, H @ R

**Conclusions** I. H  $\delta$  N

II. F # R

- A If only Conclusion I is true
- B If only Conclusion II is true
- C If either Conclusion I or II is true
- D If neither Conclusion I or II is true
- E If both Conclusion I and II are true

**Answer:** D

### Explanation:

F @ N which means F is smaller than or equal to N

N  $\delta$  R which means N is greater than R

H @ R which means H is smaller than or equal to R

We can deduce that, H is smaller than N as it is smaller than R which is smaller than N.

We cannot establish any relationship between F and R.

Therefore, both conclusion I and II do not follow.

### Question 57

**Statements** M # T, T @ K, K \$ N

**Conclusions** I. M # N

II. K  $\delta$  M

- A If only Conclusion I is true
- B If only Conclusion II is true
- C If either Conclusion I or II is true
- D If neither Conclusion I or II is true
- E If both Conclusion I and II are true

**Answer:** B

**Explanation:**

$M \# T$  which means M is smaller than T

$T @ K$  which means T is smaller than or equal to K

$K \$ N$  which means K is greater than or equal to N

We can conclude that M is smaller than K as K is greater than T which is greater than M.

Also, no relation can be established between M and N.

Only II follows.

The correct option is option B.

## Daily Free Banking Online Test

**Question 58**

**Statements**  $T \% H, H \$ W,$

**Conclusions** I.  $W \# T$

II.  $W \% T$

- A If only Conclusion I is true
- B If only Conclusion II is true
- C If either Conclusion I or II is true
- D If neither Conclusion I or II is true
- E If both Conclusion I and II are true

**Answer:** C

**Explanation:**

$T \% H$  which means T is equal to H

$H \$ W$  which means H is greater than or equal to W

We can conclude that T is greater than or equal to W.

Therefore either conclusion I or II is correct.

Hence, the correct option is option C.

**Question 59**

**Statements**  $N \delta K, K \# D, D \% M$

**Conclusions** I.  $M \delta K$

II.  $D \delta N$

- A If only Conclusion I is true
- B If only Conclusion II is true
- C If either Conclusion I or II is true
- D If neither Conclusion I or II is true
- E If both Conclusion I and II are true

**Answer:** A

**Explanation:**

$N \delta K$  which means N is greater than K

$K \# D$  which means K is smaller than D

$D \% M$  which means D is equal to M

Therefore, we can conclude that M is greater than K as M and D are equal.



However, no relation can be established between D and N.  
Only conclusion I follows.

**Question 60**

**Statements**  $J \geq B, B = R, R > F$

**Conclusions** I.  $F > B$

II.  $R > J$

- A If only Conclusion I is true
- B If only Conclusion II is true
- C If either Conclusion I or II is true
- D If neither Conclusion I or II is true
- E If both Conclusion I and II are true

**Answer:** E

**Explanation:**

$J \geq B$  which means J is greater than or equal to B.  
 $B = R$  which means B is equal to R  
 $R > F$  which means R is greater than F  
Therefore, we can conclude that B is greater than F.  
Also, J is greater than or equal to R.  
Both I and II follow.

**Download IBPS Clerk General Knowledge PDF**

**Instructions**

Study the following information carefully and answer the question given below

A, B, C, D, E, F and G are sitting around a circle facing the centre not necessarily in the same order. D is not second to the left of F but D is second to the right of A C is third to the right of A and C is second to the left of G B is not an immediate neighbour of G

**Question 61**

**Who is the immediate right of C?**

- A D
- B G
- C E
- D B
- E Data inadequate

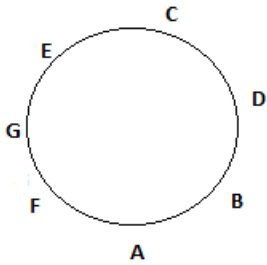
**Answer:** C

**Explanation:**

The data given to us is:

A, B, C, D, E, F and G are sitting around a circle facing the centre not necessarily in the same order. D is not second to the left of F but D is second to the right of A C is third to the right of A and C is second to the left of G B is not an immediate neighbour of G

This data can be interpreted in diagrammatic form as:



E is to the immediate right of C.

**Question 62**

who is the only one person sitting between A and G ?

- A B
- B D
- C C
- D E
- E F

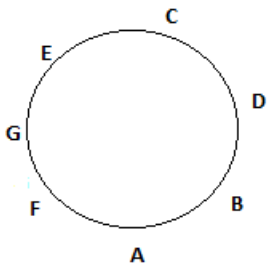
**Answer:** E

**Explanation:**

The data given to us is:

A, B, C, D, E, F and G are sitting around a circle facing the centre not necessarily in the same order. D is not second to the left of F but D is second to the right of A C is third to the right of A and C is second to the left of G B is not an immediate neighbour of G

This data can be interpreted in diagrammatic form as:



F sits between A and G.

**Question 63**

Who is to the immediate left of D?

- A B
- B C
- C A
- D Data inadequate
- E None of these

**Answer:** A

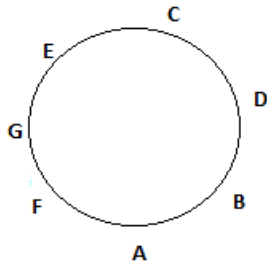
**Explanation:**

The data given to us is:

A, B, C, D, E, F and G are sitting around a circle facing the centre not necessarily in the same order. D is not second to the left of F but D

is second to the right of A C is third to the right of A and C is second to the left of G B is not an immediate neighbour of G

This data can be interpreted in diagrammatic form as:



B is to the immediate left of D.

## 200+ Free GK Tests for Banking exams

### Question 64

Who is second to the left of C ?

- A B
- B G
- C F
- D Data inadequate
- E None of these

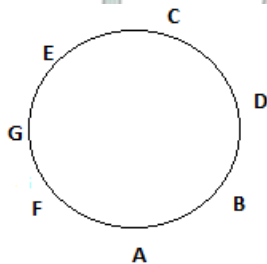
**Answer: A**

#### Explanation:

The data given to us is:

A, B, C, D, E, F and G are sitting around a circle facing the centre not necessarily in the same order. D is not second to the left of F but D is second to the right of A C is third to the right of A and C is second to the left of G B is not an immediate neighbour of G

This data can be interpreted in diagrammatic form as:



B is second to the left of C.

### Question 65

What is E's position with respect to D ?

- A To the immediate right
- B To the immediate left
- C Third to the right
- D Second to the right
- E Third to the left

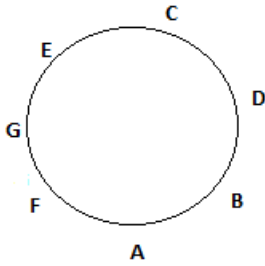
**Answer: D**

**Explanation:**

The data given to us is:

A, B, C, D, E, F and G are sitting around a circle facing the centre not necessarily in the same order. D is not second to the left of F but D is second to the right of A C is third to the right of A and C is second to the left of G B is not an immediate neighbour of G

This data can be interpreted in diagrammatic form as:



E is second to the right of D.

**Instructions**

In each question below is given a group of letters followed by four combinations of digits/symbols numbered a,b,c and d You have to find out which of the combinations correctly represents the group of letters based on the coding system and the conditions given below and mark the number of that combination as your answer If none of the combinations correctly represents the group of letters

mark e, i.e None of these as your answer

Letters P M A E J K D R W H I U T F

Digits/symbols 4 \$ 1 2 3 # 5 @ © 6 % δ 7 9

Conditions:

- (i) If the first letter is a consonant and the last letter is a vowel the codes of both these are to be interchanged
- (ii) If both the first and the last letter are consonants both these are to be coded as per the code of the last letter
- (iii) If the first letter is vowel and the last letter is a consonant both these are to be coded as '\*'.

Note All the remaining letters are to be coded as per their original codes.

**Question 66**

**ERWHKA**

- A 2@©6#1
- B 1@©6#2
- C 1@©6#1
- D 2@©6#2
- E None of these

**Answer: A**

**Explanation:**

The given letter starts with vowel and end with vowel.

Therefore, the correct coding for ERWHKA is 2@©6#1.

Option A is the correct option.

**100 Free IBPS Clerk Computer Awareness Tests**

**Question 67**

**MPEKDU**

- A \$42#5δ
- B \$42#5\$
- C δ42#5δ
- D δ425#5\$
- E None of these

**Answer:** E

**Explanation:**

The first letter is consonant while the last letter is a vowel. Hence, their codes are to be interchanged.

The correct coding is δ42#5\$. None of the options match.

**Question 68**

**TMEIUF**

- A 7\$2%δ9
- B 7\$2%δ7
- C 9\$2%δ7
- D 9\$2%δ9
- E None of these

**Answer:** D

**Explanation:**

Here, both the last letter and the first are consonants. Hence, the last letters code will be used for both of them. Therefore, the correct coding for TMEIUF is 9\$2%δ9.

The correct option is option D.

**Question 69**

**JTAERI**

- A %712@3
- B 3712@3
- C \*712@
- D %712@%
- E None of these

**Answer:** A

**Explanation:**

For the given word, the first letter is consonant and last letter is vowel. Therefore, the symbols for both of them will be interchanged. Hence, the correct coding for JTAERI is %712@3.

Therefore, the correct option is option A.

## 200+ Banking Previous Papers (Download PDF)

### Question 70

UKTMIH

- A  $\delta\#7\$\%6$
- B  $6\#7\$\%\delta$
- C  $\#7\$\%*$
- D  $\delta7\#\$\%6$
- E None of these

**Answer:** C

#### Explanation:

The first letter of the word is vowel and last word is consonant and therefore they will be coded as \*. UKTMIH is coded as  $\#7\$\%*$ . Therefore, the correct option is option C.

#### Instructions

Each of the following below consist of question and two statements numbered I and II given below it You have to decide whether the data provided in the statements are sufficient to answer the question Read both the statements and Give answer

- (a) If the data in Statement I alone is sufficient to answer the question while the data in Statement II alone is not sufficient to answer the question
- (b) If the data in Statement II alone are sufficient to answer the question while the data in Statement I alone is not sufficient to answer the question
- (c) If the data either in Statement I alone or in Statement II alone is not sufficient to answer the question
- (d) If the data given in both the Statement I and II together are not sufficient to answer the question
- (e) If the data in both the Statements I and II together are necessary to answer the question

### Question 71

In a row of girls facing North what is D's position from the left end ?

I. D is twentieth from the right end

II. There are ten girls between B and D

- A If the data in Statement I alone is sufficient to answer the question while the data in Statement II alone is not sufficient to answer the question
- B If the data in Statement II alone are sufficient to answer the question while the data in Statement I alone is not sufficient to answer the question
- C If the data either in Statement I alone or in Statement II alone is not sufficient to answer the question
- D If the data given in both the Statement I and II together are not sufficient to answer the question
- E If the data in both the Statements I and II together are necessary to answer the question

**Answer:** D

#### Explanation:

The first statement gives D's position with respect to the right end. However, we don't know how many people are to the left of D. Also, the second statement does not give relative position of B which can enable us to calculate the position of D.

None of the statements give us sufficient data to let us predict the position of D.  
Therefore, the correct option is option D.

**Question 72**

**Town M is towards which direction of Town K ?**

- I. Town K is towards North-West of Town D**
- II. Town M is towards South-East of Town D**

- A** If the data in Statement I alone is sufficient to answer the question while the data in Statement II alone is not sufficient to answer the question
- B** If the data in Statement II alone are sufficient to answer the question while the data in Statement I alone is not sufficient to answer the question
- C** If the data either in Statement I alone or in Statement II alone is not sufficient to answer the question
- D** If the data given in both the Statement I and II together are not sufficient to answer the question
- E** If the data in both the Statements I and II together are necessary to answer the question

**Answer: E**

**Explanation:**

- I. Town K is towards North-West of Town D**
- II. Town M is towards South-East of Town D**

From the above statements, we can predict the direction of M as it is towards north west of K.  
Therefore, the correct option is option E.

**Latest Job Updates on Telegram - Join here**

**Question 73**

**How many daughters does P have ?**

- I. K and M are sisters of T**
- II. T's father is husband of P's mother**

- A** If the data in Statement I alone is sufficient to answer the question while the data in Statement II alone is not sufficient to answer the question
- B** If the data in Statement II alone are sufficient to answer the question while the data in Statement I alone is not sufficient to answer the question
- C** If the data either in Statement I alone or in Statement II alone is not sufficient to answer the question
- D** If the data given in both the Statement I and II together are not sufficient to answer the question
- E** If the data in both the Statements I and II together are necessary to answer the question

**Answer: D**

**Explanation:**

The data given to us is:

- I. K and M are sisters of T**
- II. T's father is husband of P's mother**

The data does not establish the number of daughter the P has. It talks gives us the idea of his mother and father and his sibling.  
However, it is insufficient.  
The correct option is option D.

**Question 74**

**On which day of the week from Monday to Sunday did Arun leave for London ?**

**I. Arun did not leave for London during the weekend**

**II. Arun's brother left for London on Friday two days after Arun left for London**

- A** If the data in Statement I alone is sufficient to answer the question while the data in Statement II alone is not sufficient to answer the question
- B** If the data in Statement II alone are sufficient to answer the question while the data in Statement I alone is not sufficient to answer the question
- C** If the data either in Statement I alone or in Statement II alone is not sufficient to answer the question
- D** If the data given in both the Statement I and II together are not sufficient to answer the question
- E** If the data in both the Statements I and II together are necessary to answer the question

**Answer: B**

**Explanation:**

Statement I says, he did not leave on weekend. But then it is possible that he could have left on any day except weekend. Statement II says that Arun's brother left two days after Arun left i.e on Friday. Therefore, we can say that Arun left on Tuesday. The correct option is option B.

**Question 75**

**How is 'new' written in a code language ?**

**I. 'new good clothes' is written as '5 3 9' in that code language**

**II. 'good cloths are costly' is written as '9 6 7 3' in that code language**

- A** If the data in Statement I alone is sufficient to answer the question while the data in Statement II alone is not sufficient to answer the question
- B** If the data in Statement II alone are sufficient to answer the question while the data in Statement I alone is not sufficient to answer the question
- C** If the data either in Statement I alone or in Statement II alone is not sufficient to answer the question
- D** If the data given in both the Statement I and II together are not sufficient to answer the question
- E** If the data in both the Statements I and II together are necessary to answer the question

**Answer: E**

**Explanation:**

By analysing statements I and II, we get that, good clothes is coded as 3 or 9. Hence, new will be coded as 5. Here, data in both the sentences is necessary to find the solution. Therefore, the correct option is option E.

## Take 4 Free IBPS Clerk Mock Tests (With Solutions)

**Instructions**

Study the following information carefully and answer the given question

A word and number arrangement machine when given an input line of words and number rearranges them following a particular rule in each step. The following is an illustration of input and rearrangement (All numbers are two-digit numbers)

Input good for everything 19 37 26 all 65

Step I all good for everything 19 37 26 65



Step II all 65 good for everything 19 37 26 65

Step III all 65 everything good for 19 37 26

Step IV all 65 everything 37 good for 19 26

Step V all 65 everything 37 for good 19 26

Step VI all 65 everything 37 for 26 good 19

and Step VI is the last step of the rearrangement as the desired arrangement is reached

As per the rules followed in the above steps find out in each of the following questions the appropriate step for the given input (All numbers are two-digit numbers)

**Question 76**

**Input won 13 now 25 72 please go 47**

**How many steps will be required to complete the rearrangement ?**

- A Four
- B Five
- C Six
- D Three
- E None of these

**Answer: C**

**Explanation:**

Input won 13 now 25 72 please go 47

Step I: go won 13 now 25 72 please 47

Step II: go 72 won 13 now 25 please 47

Step III: go 72 please won 13 47 now 25

Step IV: go 72 please won 47 won 13 now 25

Step V: go 72 please 47 won 25 13 now

Step VI: go 72 now 47 please 25 won 13

There are 6 steps needed to get the desired output.

**Question 77**

**Step III of an input is car 81 desk 15 42 39 tall more which of the following will be step VI ?**

- A car 81 desk 42 39 15 tall more
- B car 81 desk 42 15 39 tall more
- C car 81 desk 42 more 39 15 tall
- D There will be no such step
- E None of these

**Answer: C**

**Explanation:**

If Step III of an input: car 81 desk 15 42 39 tall more

Then,

step VI : car 81 desk 42 more 39 15 tall

Therefore, the correct option is C.

**Question 78**

**Step II of input is bell 53 town hall near 27 43 12 How many more steps will be required to complete the rearrangement ?**

- A Five
- B Four
- C Six
- D Three
- E None of these

**Answer: B**

**Explanation:**

Step II : bell 53 town hall near 27 43 12

Step III: 53 bell town hall near 27 43 12

Step IV: 53 bell 43 town hall near 27 12

Step V: 53 bell 43 town 27 hall near 12

Step VI: 53 bell 43 town 27 hall 12 near

Therefore, the correct option is B as four more steps are required.

## IBPS Clerk Previous Papers (Download PDF)

**Question 79**

**Step II of an input is box 93 25 year end 41 32 value**

**Which of the following is definitely the input ?**

- A 25 year end box 93 41 32 value
- B 25 year end 93 41 32 value box
- C 93 25 box year end 41 32 value
- D Cannot be determined
- E None of the above

**Answer: D**

**Explanation:**

The input cannot be determined as there are many combinations possible.

Here, we are arranging the numbers in descending order and at the same time alternating them with the words in alphabetical order.

Therefore, we cannot determine what the input can be.

**Question 80**

**Input paper dry 37 23 height call 62 51**

**Which of the following steps will be the last but one ?**

- A V
- B IV
- C VI
- D III
- E None of these

**Answer: A**

**Explanation:**

Input: paper dry 37 23 height call 62 51  
 Step I : dry 37 23 height call 62 51 paper  
 Step II : 62 call dry 37 23 height 51 paper  
 Step III : 62 call height dry 37 23 51 paper  
 Step IV: 62 call dry height 37 23 51 paper  
 Step V: 62 call 51 dry height 37 23 paper  
 Step VI: 62 call 51 dry 37 height 23 paper

Hence, the penultimate step will be V.

**Instructions**

Study the following information carefully and answer the question given below

P,Q,R,S,T,V and W are travelling in three buses A, B and C with at least two of them in any of these buses Each of them has a favourite (likes) cuisine viz Punjabi, Rajasthani, Bengali, Maharashtrian, Gujarati, Kashmiri and Udipi not necessarily in the same order Q is travelling in Bus B with T. T's favourite cuisine is Udipi Those who travel in Bus A do not like Punjabi and Maharashtrian cuisines The one who likes Rajasthani cuisine travels only with W in Bus C The one whose favourite cuisine is Gujarati does not travel in the same bus with either T or W P does not travel in Bus B P likes Kashmiri cuisine S and V are travelling in the same Bus V does not like Bengali cuisine The one whose favourite cuisine is Maharashtrian does not travel in Bus B

**Question 81**

Which of the following combinations is correct ?

- A A-V-Gujarati
- B B-S-Bengali
- C C-W-Punjabi
- D B-Q-Gujarati
- E All are incorrect

**Answer: A**

**Explanation:**

The data given is:

P,Q,R,S,T,V and W are travelling in three buses A, B and C with at least two of them in any of these buses Each of them has a favourite (likes) cuisine viz Punjabi, Rajasthani, Bengali, Maharashtrian, Gujarati, Kashmiri and Udipi not necessarily in the same order Q is travelling in Bus B with T. T's favourite cuisine is Udipi Those who travel in Bus A do not like Punjabi and Maharashtrian cuisines The one who likes Rajasthani cuisine travels only with W in Bus C The one whose favourite cuisine is Gujarati does not travel in the same bus with either T or W P does not travel in Bus B P likes Kashmiri cuisine S and V are travelling in the same Bus V does not like Bengali cuisine The one whose favourite cuisine is Maharashtrian does not travel in Bus B

This data can interpreted in tabular form as:

P	Kashmiri	A
Q	Punjabi	B
R	Rajasthani	C
S	Bengali	A
T	Udipi	B
V	Gujrathi	A
W	Maharashtrian	C

Therefore, only combination of V-Gujrati-A is correct.

**IBPS Clerk Important Questions PDF**

**Question 82**

Whose favourite cuisine is Rajasthani ?

- A Q
- B S
- C V
- D R
- E Data inadequate

**Answer: D**

**Explanation:**

The data given is:

P,Q,R,S,T,V and W are travelling in three buses A, B and C with at least two of them in any of these buses Each of them has a favourite (likes) cuisine viz Punjabi, Rajasthani, Bengali, Maharashtrian, Gujarati, Kashmiri and Udipi not necessarily in the same order Q is travelling in Bus B with T. T's favourite cuisine is Udipi Those who travel in Bus A do not like Punjabi and Maharashtrian cuisines The one who likes Rajasthani cuisine travels only with W in Bus C The one whose favourite cuisine is Gujarati does not travel in the same bus with either T or W P does not travel in Bus B P likes Kashmiri cuisine S and V are travelling in the same Bus V does not like Bengali cuisine The one whose favourite cuisine is Maharashtrian does not travel in Bus B

This data can interpreted in tabular form as:

P	Kashmiri	A
Q	Punjabi	B
R	Rajasthani	C
S	Bengali	A
T	Udipi	B
V	Gujrathi	A
W	Maharashtrian	C

R's favorite cuisine is Rajasthani.

**Question 83**

**What is S's favourite cuisine ?**

- A Maharashtrian
- B Bengali
- C Rajasthani
- D Kashmiri
- E Data inadequate

**Answer: B**

**Explanation:**

The data given is:

P,Q,R,S,T,V and W are travelling in three buses A, B and C with at least two of them in any of these buses Each of them has a favourite (likes) cuisine viz Punjabi, Rajasthani, Bengali, Maharashtrian, Gujarati, Kashmiri and Udipi not necessarily in the same order Q is travelling in Bus B with T. T's favourite cuisine is Udipi Those who travel in Bus A do not like Punjabi and Maharashtrian cuisines The one who likes Rajasthani cuisine travels only with W in Bus C The one whose favourite cuisine is Gujarati does not travel in the same bus with either T or W P does not travel in Bus B P likes Kashmiri cuisine S and V are travelling in the same Bus V does not like Bengali cuisine The one whose favourite cuisine is Maharashtrian does not travel in Bus B

This data can interpreted in tabular form as:

P	Kashmiri	A
Q	Punjabi	B
R	Rajasthani	C
S	Bengali	A
T	Udipi	B
V	Gujrathi	A
W	Maharashtrian	C

S's favorite cuisine is Bengali.

**Question 84**

**What is Q's favourite cuisine ?**

- A Kashmiri
- B Maharashtrian
- C Punjabi
- D Data inadequate
- E None of these

**Answer: C**

**Explanation:**

The data given is:

P,Q,R,S,T,V and W are travelling in three buses A, B and C with at least two of them in any of these buses Each of them has a favourite (likes) cuisine viz Punjabi, Rajasthani, Bengali, Maharashtrian, Gujarati, Kashmiri and Udipi not necessarily in the same order Q is travelling in Bus B with T. T's favourite cuisine is Udipi Those who travel in Bus A do not like Punjabi and Maharashtrian cuisines The one who likes Rajasthani cuisine travels only with W in Bus C The one whose favourite cuisine is Gujarati does not travel in the same bus with either T or W P does not travel in Bus B P likes Kashmiri cuisine S and V are travelling in the same Bus V does not like Bengali cuisine The one whose favourite cuisine is Maharashtrian does not travel in Bus B

This data can interpreted in tabular form as:

P	Kashmiri	A
Q	Punjabi	B
R	Rajasthani	C
S	Bengali	A
T	Udipi	B
V	Gujrathi	A
W	Maharashtrian	C

Q's favorite cuisine is Punjabi.

**IBPS Clerk Free Preparation App**

**Question 85**

**In which bus are three of them travelling ?**

- A A only
- B B only
- C A or B
- D Data inadequate
- E None of these

**Answer: A**

**Explanation:**

The data given is:

P,Q,R,S,T,V and W are travelling in three buses A, B and C with at least two of them in any of these buses Each of them has a favourite (likes) cuisine viz Punjabi, Rajasthani, Bengali, Maharashtrian, Gujarati, Kashmiri and Udipi not necessarily in the same order Q is travelling in Bus B with T. T's favourite cuisine is Udipi Those who travel in Bus A do not like Punjabi and Maharashtrian cuisines The one who likes Rajasthani cuisine travels only with W in Bus C The one whose favourite cuisine is Gujarati does not travel in the same bus with either T or W P does not travel in Bus B P likes Kashmiri cuisine S and V are travelling in the same Bus V does not like Bengali cuisine The one whose favourite cuisine is Maharashtrian does not travel in Bus B

This data can interpreted in tabular form as:

P	Kashmiri	A
Q	Punjabi	B
R	Rajasthani	C
S	Bengali	A
T	Udipi	B
V	Gujrathi	A
W	Maharashtrian	C

Only A has three people travelling in it.

**Instructions**

In each question below are statements followed by two conclusions numbered I and II You have to take the two given statements to be true even if they seem to be at variance from commonly known facts and then decide which of the given conclusions logically follows from the given statements disregarding commonly known facts ?

Give answer

- (a) If only Conclusion I follows
- (b) If only Conclusion II follows
- (c) If either Conclusion I or II follows
- (d) If neither Conclusion I nor II follows
- (e) If both Conclusions I and II follow

**Question 86**

**Statements** No holiday is vacations Some vacations are trips

**Conclusion**

**I.No trip is a holiday**

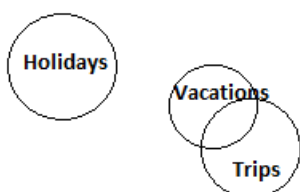
**II.Some holidays are definitely not trips**

- A** If only Conclusion I follows
- B** If only Conclusion II follows
- C** If either Conclusion I or II follows
- D** If neither Conclusion I nor II follows
- E** If both Conclusions I and II follow

**Answer: D**

**Explanation:**

The data can be interpreted in Venn diagram form as:



Now, conclusions are:

I.No trip is a holiday. There might be intersections between the two sets.

II.Some holidays are definitely not trips. This is a wrong conclusion as it is a possibility of two sets i.e Holidays and Trips intersecting. Therefore, the conclusion I and II do not follow.

**Question 87**

**Statement some kites are birds.No kite is an aeroplane**

**Conclusions**

**I.All aeroplanes are birds**

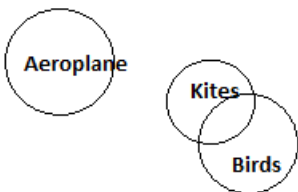
**II.some birds are definitely not kites**

- A If only Conclusion I follows
- B If only Conclusion II follows
- C If either Conclusion I or II follows
- D If neither Conclusion I nor II follows
- E If both Conclusions I and II follow

**Answer: D**

**Explanation:**

The data can be interpreted in Venn diagram form as:



Conclusions

I.All aeroplanes are birds. This is definitely an incorrect conclusion.

II.Some birds are definitely not kites. There might be intersection between two sets. Therefore this is also an incorrect conclusion.

Neither I or II follow.

**Free Banking Study Material (15000 Solved Questions)**

**Question 88**

**Statement All metals are plastics All plastics are fibres**

**Conclusion**

**I.At least some fibres are metals**

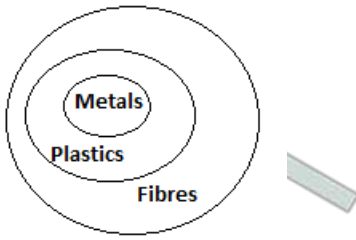
**II.some metals are not fibres**

- A If only Conclusion I follows
- B If only Conclusion II follows
- C If either Conclusion I or II follows
- D If neither Conclusion I nor II follows
- E If both Conclusions I and II follow

**Answer: A**

**Explanation:**

The data can be interpreted in Venn diagram form as:



Conclusion

I. At least some fibres are metals. This is a true conclusion.

II. Some metals are not fibres. This is an incorrect conclusion.

Only I follows.

#### Question 89

**Statement** All roads are streets No street is a highway

**Conclusions**

**I. No highway is a road**

**II. All streets are road**

- A If only Conclusion I follows
- B If only Conclusion II follows
- C If either Conclusion I or II follows
- D If neither Conclusion I nor II follows
- E If both Conclusions I and II follow

**Answer:** A

**Explanation:**

The data can be interpreted in Venn diagram form as:



Conclusions

I. No highway is a road. This is a correct conclusion.

II. All streets are road. This is a wrong conclusion.

Therefore, only conclusion I follows.

#### Question 90

**Statement** :All plants are animals. Some rocks are animals.

**Conclusions**

**I. Some animals are plants**

**II. All plants are rocks**

- A If only Conclusion I follows
- B If only Conclusion II follows

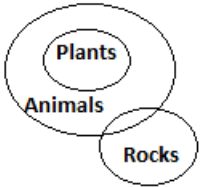


- C If either Conclusion I or II follows
- D If neither Conclusion I nor II follows
- E If both Conclusions I and II follow

**Answer: A**

**Explanation:**

The data can be interpreted in Venn diagram form as:



**Conclusions**

- I. Some animals are plants. This is a correct conclusion.
  - II. All plants are rocks. This is a wrong conclusion as evident from Venn diagram.
- Therefore, only I follows.

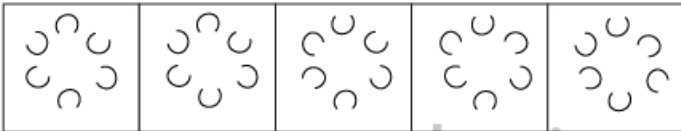
**IBPS Clerk Free Online Coaching**

**Instructions**

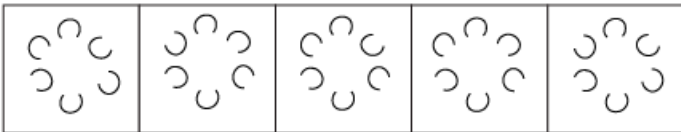
In each of the questions given below which one of the five answer figure should come after the problem figure, if the sequence were continued ?

**Question 91**

**Problem figures**



**Answer figures**



- (1)
- (2)
- (3)
- (4)
- (5)

- A (1)
- B (2)
- C (3)
- D (4)
- E (5)

**Answer: E**

Question 92

Problem figures



Answer figures



(1) (2) (3) (4) (5)

A (1)

B (2)

C (3)

D (4)

E (5)

Answer: A

Question 93

Problem figures



Answer figures



(1) (2) (3) (4) (5)

A (1)

B (2)

C (3)

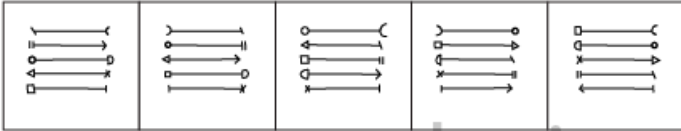
D (4)

E (5)

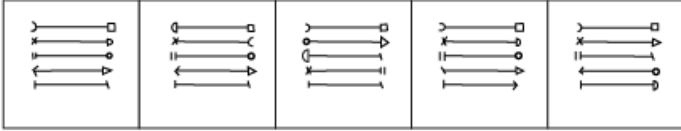
Answer: E

Question 94

Problem figures



Answer figures



(1) (2) (3) (4) (5)

A (1)

B (2)

C (3)

D (4)

E (5)

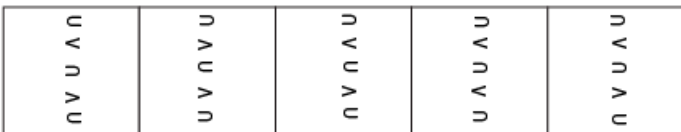
Answer: A

Question 95

Problem figures



Answer figures



(1) (2) (3) (4) (5)

A (1)

B (2)

C (3)

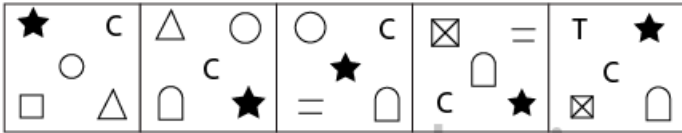
D (4)

E (5)

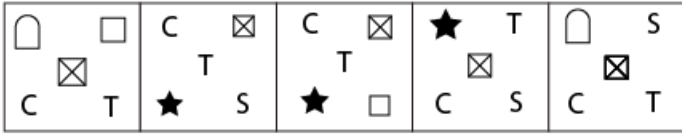
Answer: C

Question 96

Problem figures



Answer figures



(1) (2) (3) (4) (5)

- A (1)
- B (2)
- C (3)
- D (4)
- E (5)

Answer: A

Daily Free Banking Online Test

Question 97

Problem figures



Answer figures



(1) (2) (3) (4) (5)

- A (1)
- B (2)
- C (3)
- D (4)
- E (5)

Answer: D

Question 98

Problem figures

O S C	C S	S	S
★	O	T ★	O
T	★ T	O T ★	O S C T ★ C

Answer figures

S O	O S	S O	S O	T S
C	C	C	C	C
T ★	★ T	★ T	O T	★ O
(1)	(2)	(3)	(4)	(5)

- A (1)
- B (2)
- C (3)
- D (4)
- E (5)

Answer: C

Question 99

Problem figures

□ 	□ □ □	— □ □ □	□ □ □ □	□ □ □ □
-------	-------------	------------------	------------------	------------------

Answer figures

□ □ □	□ □ □	— □ □ □	— □ □ □	□ □ □
(1)	(2)	(3)	(4)	(5)

- A (1)
- B (2)
- C (3)
- D (4)
- E (5)

Answer: B

Question 100

Problem figures



Answer figures



(1) (2) (3) (4) (5)

A (1)

B (2)

C (3)

D (4)

E (5)

Answer: A

200+ Free GK Tests for Banking exams

Quant

Instructions

What should come in place of the question mark (?) in the following questions?

Question 101

$$(16\% \times 450) \div (?\% \times 250) = 4.8$$

A 12

B 6

C 4

D 10

E None of these

Answer: B

Explanation:

Let the required number be equal to X.

$$\text{So, } (16\% \times 450) \div (X\% \times 250) = 4.8$$

$$\text{Therefore, } 72 \times (X\% \times 250) = 4.8$$

$$\text{Or, } X\% \times 250 = 15$$

$$\text{So, } X = 6$$

## 100 Free IBPS Clerk Computer Awareness Tests

### Question 102

19.5% of 524=?

- A 102.18
- B 122.81
- C 120.18
- D 112.81
- E None of these

**Answer: A**

### Explanation:

$$19.5\% \text{ of } 524 = (19.5/100) \times 524 \\ = 102.18$$

Hence, the correct option is A.

### Question 103

$$\sqrt{?} - 11 = \sqrt{1521}$$

- A 2500
- B  $28^2$
- C  $\sqrt{28}$
- D 50
- E None of these

**Answer: A**

### Explanation:

$$\sqrt{1521} = 39$$

Let unknown be x.

$$\sqrt{x} = 39 + 11 = 50$$

$$x = 50^2 = 2500$$

Hence, the correct answer is option A.

### Question 104

$$700 \div 70 \div 0.5 = ?$$

- A 10
- B 2.5
- C 1.5
- D 20
- E None of these

**Answer:** D

**Explanation:**

Here, we will proceed by BODMAS rule and do the division in stepwise manner.

$$700/70 = 10$$

$$10/.5 = 20$$

Hence, the correct option is option D.

## 200+ Banking Previous Papers (Download PDF)

**Question 105**

$$12.8 \times 4.5 \times 2.2 = ?$$

A 168.27

B 126.72

C 128.27

D 162.72

E None of these

**Answer:** B

**Explanation:**

Here, we will proceed in a stepwise manner,

$$12.8 \times 4.5 = 57.6$$

$$57.6 \times 2.2 = 126.72$$

Hence, the correct option is option B.

**Question 106**

$$55 \div 5.5 - 0.5 = ?$$

A 11

B 10

C 8.5

D 10.5

E None of these

**Answer:** E

**Explanation:**

Proceeding by BODMAS rule in stepwise manner,

$$55/5.5 = 10$$

$$\text{Now, } 10 - 0.5 = 9.5$$

But none of the options are 9.5, therefore option E is the correct answer.

**Question 107**

$$(5 \times 5 \times 5 \times 5 \times 5 \times 5)^4 \times (5 \times 5)^6 \div (5)^2 = (25)^?$$



- A 10
- B 17
- C 19
- D 12
- E None of these

**Answer: B**

**Explanation:**

$$\begin{aligned} (5 \times 5 \times 5 \times 5 \times 5 \times 5)^4 \times (5 \times 5)^6 \div (5)^2 &= (25)^{12} \times (25)^6 \div 25 \\ &= (25)^{18} \div 25 \\ &= (25)^{17} \end{aligned}$$

Hence, the correct value of unknown number is 17.  
Therefore, the correct option is B.

**Latest Job Updates on Telegram - Join here**

**Question 108**

$$8059 - 7263 = ? \times 40$$

- A 19.9
- B 18.7
- C 15.9
- D 17.7
- E None of these

**Answer: A**

**Explanation:**

Let the unknown number be x.

$$8059 - 7263 = x \times 40$$

$$796 = x \times 40$$

$$796 \div 40 = x$$

$$x = 19.9$$

Therefore, the correct option is option A.

**Question 109**

$$4 \times ? = 4062 \div 5$$

- A 203.1
- B 213.1
- C 205.1
- D 215.1

E None of these

**Answer: A**

**Explanation:**

Let the unknown number be  $x$ .

$$4 \times x = 4062 \div 5$$

$$4 \times x = 812.4$$

$$x = 812.4 \div 4$$

$$x = 203.1$$

Therefore, the correct option is A.

**Question 110**

$$3.5 \times (80 \div 2.5) = ?$$

A 122

B 111

C 222

D 212

E None of these

**Answer: E**

**Explanation:**

Proceeding by BODMAS rule, we will first solve the bracketed part.

$$80/2.5 = 32$$

$$3.5 \times 32 = 112$$

Therefore, the correct option is option E.

## Take 4 Free IBPS Clerk Mock Tests (With Solutions)

**Question 111**

$$5\frac{1}{5} + 2\frac{3}{5} + 1\frac{2}{5} = ?$$

A  $7\frac{4}{5}$

B  $8\frac{3}{5}$

C  $6\frac{2}{5}$

D  $9\frac{1}{5}$

E None of these

**Answer: D**

**Explanation:**

Converting the mixed fraction into proper fraction, we get

$$5\frac{1}{5} + 2\frac{3}{5} + 1\frac{2}{5} = \frac{26}{5} + \frac{13}{5} + \frac{7}{5}$$
$$= \frac{26+13+7}{5}$$



Reconverting the answer to mixed fraction,

$$\frac{46}{5} = 9\frac{1}{5}$$

Option D is the correct answer.

**Question 112**

13% of 258-?=10

- A 23.45
- B 24.53
- C 23.54
- D 24.35
- E None of these

**Answer: C**

**Explanation:**

Let the unknown number be x.

$$13\% \text{ of } 258 - x = 10$$

$$13\% * 258 = 33.54$$

$$33.54 - x = 10$$

$$x = 33.54 - 10$$

$$x = 23.54$$

Therefore, the correct option is option C.

**Question 113**

$$\frac{4}{5} \times 2\frac{3}{4} \div \frac{5}{8} = ?$$

- A  $4\frac{12}{35}$
- B  $1\frac{12}{35}$
- C  $2\frac{11}{35}$
- D  $3\frac{13}{25}$
- E None of these

**Answer: D**

**Explanation:**

$$\frac{4}{5} \times 2\frac{3}{4} \div \frac{5}{8} = \frac{4}{5} \times \frac{11}{4} \div \frac{5}{8}$$

$$= \frac{11}{5} \times \frac{8}{5}$$

$$= \frac{88}{25} = 3\frac{13}{25}$$

Therefore, option D is correct answer.

## IBPS Clerk Previous Papers (Download PDF)

### Question 114

$$623.15 - 218.82 - 321.43 = ?$$

- A 89.2
- B 82.2
- C 89.9
- D 79.2
- E None of these

**Answer:** E

#### Explanation:

$$623.15 - 218.82 - 321.43 = 404.33 - 321.43 \\ = 82.9$$

But none of the options match the answer.  
Therefore, the correct option is option E.

### Question 115

$$5437 - 3153 + 2284 = ? \times 50$$

- A 96.66
- B 91.36
- C 96.13
- D 93.16
- E None of these

**Answer:** B

#### Explanation:

Let the unknown value be  $x$ .

$$5437 - 3153 + 2284 = x \times 50$$

$$2284 + 2284 = x \times 50$$

$$4568 = x \times 50$$

$$x = 4568/50$$

$$x = 91.36$$

Therefore, the correct option is B

### Instructions

What approximate value should come in place of the question mark (?) in the following questions ?  
(you are not expected to calculate the exact value)

### Question 116

$$16.003 \times 27.998 - 209.010 = ?$$

- A 150

- B 200
- C 75
- D 240
- E 110

**Answer:** D

**Explanation:**

We will proceed by BODMAS rule,

$$16.003 \times 27.998 = 448.80$$

$$\text{Now, } 448.80 - 209.010 = 239.79 \sim 240$$

Therefore, the correct option is option D.

## IBPS Clerk Important Questions PDF

**Question 117**

$$840.0003 \div 23.999 = ?$$

- A 47
- B 8
- C 35
- D 18
- E 23

**Answer:** C

**Explanation:**

Here, we can get the answer quickly by approximating.

$$840.0003 \sim 840$$

$$23.999 \sim 24$$

$$840/24 = 35$$

Therefore, the correct option is option C.

**Question 118**

$$6885.009 - 419.999 - 94.989 = ?$$

- A 6650
- B 6830
- C 6370
- D 6200
- E 6450

**Answer:** C

**Explanation:**

By approximating, we get

$$6885.009 \sim 6885$$

$$419.999 \sim 420$$

$$94.989 \sim 95$$

$$\text{Now, } 6885 - 420 = 6465$$

$$6465 - 95 = 6370$$

Therefore, the correct option is option C.

**Question 119**

$$(6.5)^2 = ?$$

A 58

B 25

C 43

D 35

E 50

**Answer: C**

**Explanation:**

$$(6.5)^2 = 42.25$$

$$\text{Now, } 42.25 \sim 43$$

Therefore, the correct option is option C.

**IBPS Clerk Free Preparation App**

**Question 120**

$$11111 \div 111 \div 11 = ?$$

A 9

B 20

C 5

D 2

E 25

**Answer: A**

**Explanation:**

We will proceed in a stepwise manner,

$$11111/111 = 100.09 \sim 100$$

$$100/11 = 9.099 \sim 9$$

Therefore, the correct option is option A.

**Instructions**

What should come in place of the question mark (?) in the following numbers series ?

**Question 121**

2 16 112 672 3360 13440 ?

- A 3430
- B 3340
- C 40320
- D 43240
- E None of these

**Answer: C**

**Explanation:**

Here, in the given series is obtained by  $n$ th term = previous term \* (10 - n)

We are supposed to calculate 7th term =  $13440 * (10 - 7) = 13440 * 3 = 40320$

Therefore, option C is correct.

**Question 122**

4 9 19 ? 79 159 319

- A 59
- B 39
- C 49
- D 29
- E None of these

**Answer: B**

**Explanation:**

In the given series, the  $n$ th term is obtained as,

$n$ th term = previous term +  $5 * 2^{(n-2)}$

Therefore, 4th term =  $19 + 5 * 2^{(2)} = 39$

Hence, the correct option is option B.

**Free Banking Study Material (15000 Solved Questions)**

**Question 123**

4000 2000 1000 500 250 125 ?

- A 80
- B 65
- C 62.5
- D 83.5
- E None of these

**Answer: C**

**Explanation:**

The given series is geometric progression with common ratio of 0.5.

Therefore, 7th term = 6th term \* 0.5 = 125 \* 0.5 = 62.5

Hence, the correct answer is option C.

**Question 124**

**588 563 540 519 ? 483 468**

- A 500
- B 496
- C 494
- D 490
- E None of these

**Answer: A**

**Explanation:**

588 563 540 519 ? 483 468

588 - 563 = 25

563 - 540 = 23

540 - 519 = 21

The difference is getting reduced by 2

Therefore, 519 - x = 19

x = 500

The correct option is option A.

**Question 125**

**121 ? 81 64 49 36 25**

- A 92
- B 114
- C 98
- D 100
- E None of these

**Answer: D**

**Explanation:**

Here, 81 64 49 36 25

81 - 64 = 17

64 - 49 = 15

49 - 36 = 13

36 - 25 = 11

Therefore, the difference is in arithmetic progression with common difference of 2.

Hence,

x - 81 = 19



$x = 100$

Therefore, the correct option is option D.

## IBPS Clerk Free Online Coaching

### Instructions

For the following questions answer them individually

### Question 126

The average weight of 15 girls was recorded as 54 kg. If the weight of the teacher was added the average increased by 2 kg What was the teacher's weight ?

- A 75 kg
- B 95 kg
- C 78 kg
- D 86 kg
- E None of these

**Answer: D**

### Explanation:

The average weight of 15 girls is 54 kgs.

Therefore, total weight = 810

Now, after adding teachers weight the average increase to 56 kgs

Let teachers weight be x.

$$(810+x)/16 = 56$$

$$x = 86$$

The teachers weight is 86 kgs.

The correct option is option D.

### Question 127

Find the average of the following set of scores

152, 635, 121, 423, 632, 744, 365, 253, 302

- A 403
- B 396
- C 428
- D 383
- E None of these

**Answer: A**

### Explanation:

$$\begin{aligned} \text{Average of all the scores} &= \frac{\text{Sum of all the scores}}{\text{Number of scores}} \\ &= \frac{152+635+121+423+632+744+365+253+302}{9} \\ &= 403 \end{aligned}$$

Option A is the correct answer.

**Question 128**

The sum of 15% of a positive number and 10% of the same number is 70. What is twice of that number ?

- A 440
- B 280
- C 560
- D 140
- E None of these

**Answer:** C

**Explanation:**

Let the number be  $x$ .

$$15\% \text{ of } x + 10\% \text{ of } x = 70$$

$$25\% \text{ of } x = 70$$

$$x = 70 \times 4$$

$$x = 280$$

$$\text{Now, twice of } 280 = 280 \times 2 = 560$$

The correct option is option C.

**Question 129**

Vikram scored 72 per cent marks in five subjects together viz Hindi, Science, Maths, English and Sanskrit together where the maximum marks of each subject were 100. How many marks did Vikram score in Science if he scored 80 marks in Hindi, 70 marks in Sanskrit, 76 marks in Maths and 65 marks in English ?

- A 72
- B 69
- C 59
- D 71
- E None of these

**Answer:** B

**Explanation:**

Now, let the mark scored by Vikram be  $x$  in Science.

$$\text{Hence, } \frac{x+80+70+65+76}{5} = 72$$

$$x+291 = 360$$

$$x = 69$$

Vikram scored 69 marks in Science. Therefore, the correct option is option B.

**Question 130**

The respective ratio between Pooja's, Prarthana's and Falguni's monthly income is 53:70:57. If Prarthana's annual income is Rs 420,000, what is the sum of Pooja's and Falguni's annual incomes? (In some cases monthly income and in some cases annual income is used)

- A Rs 592,500
- B Rs 683,500

- C Rs 660000
- D Rs 779200
- E None of these

**Answer: C**

**Explanation:**

The monthly and annual income ratio will be same.

Let the common multiple be x.

Now, Prarthana's income = 420000

i.e  $(70/180)x = 420000$

$x = 1080000$

Now, sum of Pooja's and Falguni's annual incomes =  $110/180 * 1080000$   
 $= 660000$

Hence, the correct option is option C.

**Question 131**

**Manhar sold an item for Rs 8400 and incurred a loss of 25%. At what price should he have sold the item to have gained a profit of 40%**

- A Rs 15680
- B Rs 16220
- C Rs 14540
- D Cannot be determined
- E None of these

**Answer: A**

**Explanation:**

Percent Loss =  $(\text{Cost Price} - \text{Selling Price}) / \text{Cost Price} * 100$

$$0.25 = (\text{Cost Price} - 8400) / \text{Cost Price}.$$

$$.75 \text{ Cost Price} = 8400$$

$$\text{Cost Price} = 11200$$

Now to gain profit of 40%, selling price must have been,

$$\text{Selling Price} = \text{Cost Price} + 0.4 * \text{Cost Price} = 1.4 * 11200 = 15,680$$

Therefore, the correct option is option A.

## Daily Free Banking Online Test

**Question 132**

**What will come in place of both the question mark (?) in the following question?**

$$\frac{(?)^{2.3}}{8} = \frac{2}{(?)^{1.7}}$$

- A 8
- B 1
- C 4
- D 16

E 2

**Answer:** E

**Explanation:**

Let the unknown number be x.

$$x^{2.3} * x^{1.7} = 2^8$$

$$x^4 = 16$$

Therefore, x = 2.

The correct option is option E.

**Question 133**

What would be the simple interest accrued in 4 yr on a principle of Rs 16500 at the rate of 16% per annum ?

A Rs 11560

B Rs 10250

C Rs 12500

D Rs 9980

E None of these

**Answer:** E

**Explanation:**

Now,

Simple Interest = Principal \* Number of years \* Rate of interest

$$= 16500 * 4 * 0.16$$

$$= 10560$$

The simple interest accrued will be 10560.

**Question 134**

A truck covers a distance of 360 Km in 8 h. A car covers the same distance in 6 h What is the respective ratio between the speed of the truck and the car ?

A 3:5

B 3:4

C 1:2

D 4:5

E None of these

**Answer:** B

**Explanation:**

Speed of the truck =  $360/8 = 45$  km/hr

Now,

Speed of the car =  $360/6 = 60$ km/hr

Ratio of speed of truck and car =  $45/60 = 3:4$

Therefore, option B is correct.

## Download IBPS Clerk General Knowledge PDF

### Question 135

In order to pass in an exam a student is required to get 975 marks out of the aggregate marks Piya got 870 marks and was declared failed by 7% What are the maximum aggregate marks a student can get in the examination ?

- A 1500
- B 1000
- C 1200
- D Cannot be determined
- E None of these

**Answer: A**

#### Explanation:

The difference between the aggregate mark required to pass and mark scored by Priya =  $975 - 870 = 105$

Now, 7% of  $x = 105$

$$0.07 * x = 105$$

$$x = 1500$$

Hence, the maximum aggregate mark that can be scored are 1500

The correct option is option A.

### Question 136

The average of four consecutive numbers A,B,C and D respectively is 56.5 What is the product of A and C ?

- A 3363
- B 3306
- C 3192
- D 3080
- E None of these

**Answer: E**

#### Explanation:

Let A = x

B = x+1

C = x+2

D = x+3

Now, average = 56.5

$$(A+B+C+D)/4 = 56.5$$

$$4x + 6 = 56.5 * 4$$

$$4x + 6 = 226$$

$$4x = 220$$

$$x = 55$$

Therefore A,B,C and D are 55,56,57 and 58 respectively.

Product of A and C =  $55 * 57 = 3135$

### Question 137

Parag walks 226 m everyday How many Kilometers will he walk in five weeks ?

- A 6.57
- B 7.91
- C 8.23
- D 9.41
- E None of these

Answer: B

**Explanation:**

Number of days in 5 weeks =  $5 \times 7 = 35$  days  
 Number of kilometres walked in one day = 0.226 kilometres  
 Number of kilometres walked in 35 days =  $0.226 \times 35 = 7.91$  km  
 Hence, option B is the correct answer.

**200+ Free GK Tests for Banking exams**

**Question 138**

At present Kavita is twice Sarita's age Eight years hence the respective ratio between Kavita's and Sarita's ages then will be 22:13. What is Kavita's present age ?

- A 26 yr
- B 18 yr
- C 42 yr
- D 36 yr
- E None of these

Answer: D

**Explanation:**

Let the Kavita's present age be  $2x$ .  
 Sarita's present age is  $x$ .  
 Now, 8 years hence,  
 $(2x + 8)/(x + 8) = 22/13$   
 $26x + 104 = 22x + 176$   
 $x = 18$   
 Hence, Kavita's age =  $18 \times 2 = 36$  years.  
 Option D is correct option.

**Question 139**

Out of the fractions  $\frac{4}{9}, \frac{5}{11}, \frac{3}{7}, \frac{1}{4}$  and  $\frac{2}{5}$  what is the difference between the second largest and second smallest fractions ?

- A  $\frac{2}{35}$
- B  $\frac{1}{45}$
- C  $\frac{3}{35}$

D  $\frac{2}{45}$

E None of these

**Answer: D**

**Explanation:**

Arranging the fractions in ascending order, we get  
(1/4), (2/5), (3/7), (4/9), (5/11)

Now difference between second largest and second smallest =  $4/9 - 2/5 = 2/45$   
Hence, option D is correct.

**Question 140**

**What would be the area of a square whose diagonal measures 28 cm?**

A  $288 \text{ cm}^2$

B  $514 \text{ cm}^2$

C  $428 \text{ cm}^2$

D  $392 \text{ cm}^2$

E None of these

**Answer: D**

**Explanation:**

We know that,

Diagonal = side \* 1.414

Therefore, side =  $28/1.414 = 19.8$

Area of square =  $19.8 * 19.8 = 392.04 \sim 392$

Therefore, the correct option is option D.

## 100 Free IBPS Clerk Computer Awareness Tests

**Question 141**

Riya Manasvi and Pintu start running around a circular stadium and complete one round in 24 s, 6 s and 14 s respectively. In how much time will they meet again at the starting point ?

A 1 min 32 s

B 4 min 8 s

C 3 min 25 s

D 2 min 48 s

E None of these

**Answer: D**

**Explanation:**

The time of their meeting again can be calculated by taking LCM of 24, 6 and 14.

LCM of 24, 6 and 14 = 168

Now, 168 seconds = 2 min 48 s.

Option D is correct.

**Question 142**

**A 240 m long train crosses a platform twice its length in 2 min what is the speed of the train ?**

- A 8 m/s
- B 4 m/s
- C 6 m/s
- D Cannot be determined
- E None of these

**Answer: C**

**Explanation:**

The length of platform =  $2 \times \text{length of train} = 2 \times 240 = 480$

Total distance covered by train = Length of platform + Length of train =  $480 + 240 = 720$

Speed of train =  $720 / 120 = 6 \text{ m/s}$

Hence, the correct option is option C.

**Question 143**

On children day sweets were to be equally distributed amongst 200 children But on that particular day 40 children remained absent hence each child got 2 sweets extra How many sweets were distributed ?

- A 3000
- B 1500
- C 2000
- D 1600
- E Cannot be determined

**Answer: D**

**Explanation:**

Let N be total number of sweets and each student get x sweet.

$$N/200 = x, N=200x$$

Also, as per given condition,

$$N/160 = x+2$$

$$N = 160x + 320$$

$$200x = 160x + 320$$

$$40x = 320$$

$$x = 8$$

Number of sweets = 1600

Hence, the correct option is option D.

## 200+ Banking Previous Papers (Download PDF)

**Question 144**

The perimeter of a square is one-fourth the perimeter of a rectangle If the perimeter of the square is 44 cm and the length of the rectangle is 51 cm what is the difference between the breadth of the rectangle and the side of the square ?

- A 30 cm
- B 18 cm
- C 26 cm



- D 32 cm
- E None of these

**Answer: C**

**Explanation:**

Perimeter of rectangle =  $4(44) = 176$  cm  
 Now,  $2*(length+breadth) = 176$   
 $2*(51+breadth) = 176$   
 $51 + breadth = 88$   
 $breadth = 88-51 = 37$   
 Difference between side of square and breadth of rectangle =  $37 - 11 = 26$  cm  
 Therefore, the correct option is option C.

**Question 145**

**What is the difference between the compound interest and simple interest accrued on an amount of Rs 12000 at the end 3 yr at the rate of 12% ?**

- A Rs 539.136
- B Rs 602.242
- C Rs 495.248
- D Rs 488.322
- E None of these

**Answer: A**

**Explanation:**

Compound Interest Accrued =  $12000*(1.12)^3 - 12000 = 16859.14 - 12000 = 4859.136$   
 Simple Interest accrued =  $12000*3*0.12 = 4320$   
 Difference between Compound Interest and Simple interest =  $4859.136 - 4320 = 539.136$   
 Therefore, the correct option is option A.

**Question 146**

**The area of a rectangle is equal to the area of a circle with circumference equal to 220 m What is the length of the rectangle if its breadth is 50 m ?**

- A 56 m
- B 83 m
- C 77 m
- D 69 m
- E None of these

**Answer: C**

**Explanation:**

Circumference =  $2*(22/7)*r = 220$   
 Hence,  $r = 35$   
 Now, area of circle =  $(22/7)*35*35 = 3850$   
 Area of rectangle is same as that of circle  
 Area of rectangle = 3850  
 Length \* breadth = 3850  
 length =  $3850/50 = 77$ m

Therefore, option C is correct answer.

## Latest Job Updates on Telegram - Join here

### Question 147

Prashant incurred a loss of 75 per cent on selling an article for Rs 6800 What was the cost price of the article ?

- A Rs 27700
- B Rs 25600
- C Rs 21250
- D Rs 29000
- E None of these

**Answer:** E

#### Explanation:

$$\begin{aligned} \text{Percent loss} &= \frac{\text{Cost Price} - \text{Selling Price}}{\text{Cost Price}} * 100 \\ &= \frac{\text{Cost Price} - 6800}{\text{Cost Price}} * 100 \end{aligned}$$

$$0.25 \text{Cost Price} = 6800$$

$$\text{Cost Price} = 6800 * 4 = 27200$$

Hence, the correct option is option E.

### Question 148

2 women and 10 children together take 8 days to complete a piece of work How many days will 10 children alone take to complete the piece of work if 8 women alone can complete the piece of work in 6 days ?

- A 15
- B 12
- C 10
- D 24
- E None of these

**Answer:** B

#### Explanation:

Let the speed of women be x and that of children be y. Let the piece of work be W.

$$2x + 10y = W/8$$

$$8x = W/6$$

$$x = W/48$$

Hence, we get  $y = W/120$

Speed of 1 child =  $W/120$

Speed of 10 children =  $W/12$

Now time needed for them to complete =  $W/(W/12) = 12$  days

Therefore, the correct option is B.

### Question 149

In how many different ways can the letters of the word 'TROUBLE' be arranged ?

- A 840
- B 5040
- C 1260
- D 2520
- E None of these

**Answer:** B

**Explanation:**

If there n different letters in the words then they can be arranged in n! different ways.  
Number of words formed by word TROUBLE =  $7! = 5040$   
Therefore, option B is the correct answer.

## Take 4 Free IBPS Clerk Mock Tests (With Solutions)

**Question 150**

A man riding a bicycle completes one lap of a circular field along its circumference at the speed of 79.2km/h in 2 min 40 s What is the area of the field ?

- A  $985600m^2$
- B  $848500m^2$
- C  $795600m^2$
- D Cannot be determined
- E None of these

**Answer:** A

**Explanation:**

Circumference of circular field = Distance covered by cyclist in one lap =  $(79.2 \times 1000) / 3600 \times 160 = 3520$  m  
Hence, radius = 560 m  
Area of the field =  $985600m^2$   
Therefore, option A is correct.

## IBPS Clerk Previous Papers (Download PDF)

### General Awareness

**Instructions**

For the following questions answer them individually

**Question 151**

Which of the following Awards is given for excellence in the field of Literature ?

- A Dada Saheb Phalke Award
- B Shanti Swarup Bhatnagar Award
- C Padma Bhushan
- D Nirja Bhanot Award

E Pulitzer prize

Answer: E

## IBPS Clerk Important Questions PDF

Question 152

Ms Hina Rabbani Khar of Pakistan and Mr Yang Jiechi of China held a meeting recently in Beijing. Both of them are holding which of the following positions in their respective countries?

- A Prime Ministers
- B Commerce Ministers
- C Foreign secretaries
- D Foreign Ministers
- E None of these

Answer: D

Question 153

International Cricket Matches are not played in

- A Mohali Stadium
- B Wankhede Stadium
- C Eden Gardens
- D Green Park Stadium
- E Mughal Garden

Answer: E

Question 154

Which term is used in the game of Chess?

- A Credit
- B Absolute Zero
- C Rabies
- D Thyroxine
- E Liquidity

Answer: B

## IBPS Clerk Free Preparation App

Question 155

Which of the following terms is used in the game of Chess?

- A Checkmate
- B Hoops
- C Stroke
- D Heave
- E Deuce

**Answer: A**

**Question 156**

Bank branches which can undertake foreign exchange business directly are known as .....in foreign exchange

- A authorized dealers
- B foreign dealers
- C overseas branches
- D approved dealers
- E Exchange branches

**Answer: A**

**Question 157**

Which of the following is the name of a Scientific Instrument ?

- A Plasma
- B Pascal
- C Radiation
- D Lactometer
- E Adrenal Cortex

**Answer: D**

## Free Banking Study Material (15000 Solved Questions)

**Question 158**

India recently conducted joint naval exercise SLINEX II with which of the following countries ?

- A Sri Lanka
- B China
- C Japan
- D Bangladesh
- E Russia

**Answer: A**

Question 159

Insurance cover for bank deposits in our country is provided by

- A SBI
- B Govt of India
- C GIC
- D LIC
- E DICGC

Answer: E

Question 160

The Financial Literacy does not include which of the following ?

- A How to invest the funds
- B How to use the limited funds carefully
- C How to minimize the risks
- D How to reinvest the money earned
- E None of these

Answer: E

## IBPS Clerk Free Online Coaching

Question 161

Which of the following countries is not a permanent member of the UN Security Council ?

- A China
- B India
- C Russia
- D France
- E USA

Answer: B

Question 162

Many times we read a term DoT in various newspapers in connection of 2G Spectrum What is its full form ?

- A Department of Transport
- B Department of Training
- C Directorate of Technology
- D Director of Tele Services

E Department of Telecom

**Answer: E**

**Question 163**

**As per the reports by the US Agencies which of the following countries was the largest purchaser of weapons in 2010 ?**

A China

B India

C Pakistan

D Sri Lanka

E Iran

**Answer: B**

**Question 164**

**Who among the following players got Honorary Rank of Lt. Colonel in the Territorial Army of India ?**

A Rahul Dravid

B Sachin Tendulkar

C Abhinav Bindra

D Leander paes

E Gagan Narang

**Answer: C**

**Question 165**

**Which of the following Social Welfare Schemes is launched by the Govt of India ?**

A Mid-day Meal Scheme

B Jeevan Asha

C Jeevan Bharti

D Look East Policy

E Bharat Nirman

**Answer: A**

**Question 166**

**'Dinar' is the currency of which of the following countries ?**

A Pakistan

B Iran

C Ghana

- D South Sudan
- E Libya

Answer: E

## Daily Free Banking Online Test

### Question 167

Who among the following also presides the sessions of the Rajya Sabha as its Chairman/Person ?

- A President
- B Vice President
- C Prime Minister
- D Leader of opposition in the Rajya Sabha
- E Minister of Home Affairs

Answer: B

### Question 168

Loans of very small amounts given to low income groups is called

- A Cash credit
- B Micro Credit
- C Simple overdraft
- D No frills loans
- E Rural credit

Answer: B

### Question 169

Which of the following awards was given to Mrs Nilima Mishra recently ?

- A Pulitzer prize
- B Ramon Magsaysay
- C Nobel Peace Prize
- D Golden Pen Award
- E Kalinga Award

Answer: B

## Download IBPS Clerk General Knowledge PDF

### Question 170

Which of the following is the name of the currency of a country ?



- A Mexico
- B Peru
- C Syria
- D Zambia
- E Lira

**Answer: E**

**Question 171**

**Which of the following is not the name of a country ?**

- A Congo
- B Ethiopia
- C Paris
- D Uganda
- E East Timor

**Answer: C**

**Question 172**

**Mr Mahindra Rajapaksa is the**

- A President of Sri Lanka
- B Prime Minister of Sri Lanka
- C President of Nepal
- D Prime Minister of Nepal
- E Foreign Minister of Fiji

**Answer: A**

**200+ Free GK Tests for Banking exams**

**Question 173**

**When a banker talks about CDR what is he talking about ?**

- A Corporate Debt Restructuring
- B Corporate Debt Rollover
- C Company Debt Rollover
- D Corporate Deposit Restructuring
- E Company Deposit Restructuring

**Answer: A**

**Question 174**

**Expand the term ALM as used in Banking/Finance sector ?**

- A Asset Liability Management
- B Asset Liability Maturity
- C Asset Liability Mismatch
- D Asset Liability Manpower
- E Asset Liability Maintenance

**Answer: A**

**Question 175**

**Which of the following is the overall female literacy rate in India as per recent census ? Approximately**

- A 50%
- B 60%
- C 65%
- D 70%
- E 73%

**Answer: C**

## 100 Free IBPS Clerk Computer Awareness Tests

**Question 176**

**Cash Reserve Ratio (CRR) and Statutory Liquidity Ratio (SLR) are terms most closely related to which of the following industries/markets ?**

- A Capital Market
- B Banking industry
- C Commodities market
- D Money Market
- E Mutual fund industry

**Answer: B**

**Question 177**

**What is the maximum period for which domestic term deposits are normally accepted by banks in our country ?**

- A 3 yr
- B 5 yr
- C 7 yr
- D 10 yr

E 12 yr

**Answer: D**

**Question 178**

If you wish to purchase some US Dollars for your travel abroad you should approach.....

A The ministry of finance

B The US Embassy

C Any Bank Branch authorised to do such activity

D The Reserve Bank of India

E External Affairs Ministry

**Answer: C**

**200+ Banking Previous Papers (Download PDF)**

**Question 179**

Which of the following is a mineral ?

A Isabgol

B Camphor

C Tobacco

D Nickel

E Jute

**Answer: D**

**Question 180**

Which of the following countries is passing through a peculiar political impasse as there is no constitutional government in the country ?

A Belgium

B Sudan

C Mongolia

D Iraq

E Greece

**Answer: A**

**Question 181**

Which of the following books is written by Sunil Gavaskar ?

A A Brief History of Time

B A Sense of Time

- C Sunny Days
- D Half A Life
- E Great Expectations

**Answer: C**

[Latest Job Updates on Telegram - Join here](#)

**Question 182**

What does the 'L' letter stands for in the term LAF commonly used in financial/economic news ?

- A Liquidity
- B Least
- C Liabilities
- D Long
- E Liquid

**Answer: A**

**Question 183**

**The Banking Ombudsman**

- A is in charge of bank loans for buses
- B fixes the rates of interest for loans
- C resolves complaints of customers
- D issues licences for new bank branches
- E is the head of all nationalized banks

**Answer: C**

**Question 184**

Which of the following is not classified as a Commercial Bank ?

- A Public Sector Bank
- B Foreign Bank
- C Private Sector Bank
- D Regional Rural Bank
- E Urban Cooperative Bank

**Answer: E**

[Take 4 Free IBPS Clerk Mock Tests \(With Solutions\)](#)

**Question 185**

**Which of the following is not the name of a Banking Organization ?**

- A HDFC
- B IDBI
- C YES
- D SEBI
- E ICICI

**Answer: D**

**Question 186**

**Which of the following terms is used in Sports/Games ?**

- A Equator
- B Clean-Bowled
- C Erosion
- D Neap Tide
- E Rotation

**Answer: B**

**Question 187**

**Money laundering means**

- A Hiding of income source mainly to avoid Income Tax
- B Money acquired through criminal source
- C Money acquired from undisclosed source and deposited in foreign banks
- D Process of conversion of money obtained illegally to appear to have originated from legitimate sources
- E Money acquired from drug trafficking

**Answer: D**

## **IBPS Clerk Previous Papers (Download PDF)**

**Question 188**

**Monetary Policy as an arm of the economic policy is administered by**

- A Government of India
- B Reserve Bank of India
- C State Bank of India
- D Governments of the respective states

E None of the above

**Answer: B**

**Question 189**

'Thumba' India's Rocket Launching Centre is located in

- A Kerala
- B Maharashtra
- C Tamil Nadu
- D Gujarat
- E Odisha

**Answer: A**

**Question 190**

Which of the following is not a primary function of a Bank ?

- A Granting Loans
- B Collecting Cheques/Drafts of customers
- C Facilitating import of goods
- D Issuing Banks Drafts
- E Selling Gold/silver Coins

**Answer: C**

## IBPS Clerk Important Questions PDF

**Question 191**

Mr Tony Tan is the new President of

- A China
- B Japan
- C Singapore
- D Hong Kong
- E North Korea

**Answer: C**

**Question 192**

Which of the following is observed as 'World Food Day' ?

- A 6th November
- B 16th November

- C 6th October
- D 16th October
- E 17th January

**Answer: D**

**Question 193**

**Which of the following States is among the North East States of India ?**

- A Jammu & Kashmir
- B Punjab
- C Himachal Pradesh
- D Meghalaya
- E Rajasthan

**Answer: D**

**IBPS Clerk Free Preparation App**

**Question 194**

**which of the following is an agriculture product ?**

- A Honey
- B Butter
- C Molasses
- D Ginger
- E Ethanol

**Answer: D**

**Question 195**

**Which of the following represent correct meaning of 'REPO RATE' ?**

- A Rate on which RBI sells Government Securities to Banks
- B Rate for borrowing rupees by banks from RBI
- C Rate offered by banks to their prime customers
- D Rate applicable for grant of priority sector loans
- E None of the above

**Answer: B**

**Question 196**

**Reserves which can act as a liquidity buffer for Commercial Banks during crisis times are**

- A CAR
- B CRR
- C CAR & CRR
- D CRR & SLR
- E SLR

**Answer: D**

## Free Banking Study Material (15000 Solved Questions)

**Question 197**

**Savings Bank accounts are opened by**

- A Trading entities manufacturing entities and individuals for saving purposes
- B Traders and manufacturers for business purposes
- C Individuals for savings purposes
- D Limited companies and partnerships for saving purposes
- E Cooperative Banks for savings

**Answer: C**

**Question 198**

**Union Budget is always presented in the month of**

- A January
- B March
- C April
- D December
- E February

**Answer: E**

**Question 199**

**A customer drawing a cheque on a bank has a right to**

- A take back the cheque from the bank after it is paid
- B take back the cheque from the bank after it is paid with the permission of Rbl
- C stop payment of the cheque it is paid
- D stop payment of the cheque after it is paid
- E stop payment of the cheque before it is issued

**Answer: C**





## IBPS Clerk Free Online Coaching

### Question 200

Who among the following is well known Politician and also a member of the Lok Sabha ?

- A Sri LK Advani
- B Sri Ranjan Mathai
- C Sri Mahesh Bhupathi
- D Ms Saina Nehwal
- E VVS Laxman

Answer: A

## Computer Knowledge

### Instructions

For the following questions answer them individually

### Question 201

Assembly language is

- A Machine language
- B High-level programming language
- C Low-level Programming language
- D Language for assembling computers
- E None of the above

Answer: C

## Daily Free Banking Online Test

### Question 202

Which of the following is not one of the syntax rules ?

- A The order in which you list the function's arguments
- B The precedence of the arguments
- C Whether or not the function has arguments
- D Properly spelling the function's name
- E None of the above

Answer: B

### Question 203

The binary system is a number system to the base

- A 2
- B 4
- C 8
- D 10
- E 16

**Answer: A**

**Question 204**

**Which of the following is not an example of hardware ?**

- A Scanner
- B Printer
- C Monitor
- D Mouse
- E Interpreter

**Answer: E**

**Download IBPS Clerk General Knowledge PDF**

**Question 205**

**Which contents are lost when the computer turns off ?**

- A Storage
- B Input
- C Output
- D Memory
- E None of these

**Answer: D**

**Question 206**

**Which of the following is hardware and not software ?**

- A Excel
- B Printer driver
- C Operating System
- D Power Point
- E CPU

**Answer: E**

**Question 207**

**On a CD-RW you can**

- A read and write information
- B only read information
- C only write information
- D read write and rewrite information
- E None of the above

**Answer: D**

**200+ Free GK Tests for Banking exams**

**Question 208**

**To be able to "boot" the computer must have a(n)**

- A Compiler
- B Loader
- C Operating System
- D Assembler
- E None of these

**Answer: C**

**Question 209**

**This is not a function category in Excel**

- A Logical
- B Data Series
- C Financial
- D Text
- E None of these

**Answer: B**

**Question 210**

**In Excel this is a prerecorded formula that provides a shortcut for complex calculations**

- A Value
- B Data Series
- C Financial
- D Text

E None of these

Answer: C

## 100 Free IBPS Clerk Computer Awareness Tests

Question 211

The following computer's memory is characterised by low cost per bit stored

A Primary

B Secondary

C Hard Disk

D All of these

E None of these

Answer: B

Question 212

What happens when we try to delete the files on the floppy ?

A The files get moved to the Recycle Bin

B Files on a floppy cannot be deleted

C The files get deleted and can be restored again from the Recycle Bin

D The files get deleted and cannot be restored again

E The files gets copied on the Hard disk

Answer: D

Question 213

In word replace option is available on

A File Menu

B View Menu

C Edit Menu

D Format Menu

E None of these

Answer: C

## 200+ Banking Previous Papers (Download PDF)

Question 214

In word you can change page Margins by

A dragging the scroll box on the scroll bars

- B deleting the margin boundaries on the ruler
- C dragging the margin boundaries on the ruler
- D clicking the right mouse button on the ruler
- E None of these

**Answer: C**

**Question 215**

**What type of keys are "ctrl" and 'shift' ?**

- A Adjustment
- B Function
- C Modifier
- D Alphanumeric
- E None of these

**Answer: C**

**Question 216**

**A word gets selected by clicking it to select a word in word**

- A Once
- B Twice
- C Three times
- D Four times
- E None of these

**Answer: B**

**Latest Job Updates on Telegram - Join here**

**Question 217**

**To reverse the effect of your last action in word**

- A use the cut command
- B use the undo command
- C press the delete key
- D use the redo command
- E None of these

**Answer: B**

**Question 218**

**Your position in the text is shown by a**

- A Blinker
- B Cursor
- C Causer
- D Pointer
- E None of these

**Answer: B**

**Question 219**

The time for the actual data transfer after receiving the request for data from secondary secondary storage is referred to as the disk's

- A transfer time
- B movement time
- C access time
- D data input time
- E None of these

**Answer: C**

**Take 4 Free IBPS Clerk Mock Tests (With Solutions)**

**Question 220**

Which of the following categories would include a keyboard ?

- A Printing Device
- B Output Device
- C Pointing Device
- D Storage Device
- E Input Device

**Answer: E**

**Question 221**

Using output devices one can

- A input data
- B store data
- C scan data
- D view or print data
- E None of these

**Answer: D**

**Question 222**

**Why is the Caps Lock Key referred to as a toggle key ?**

- A Because its function goes back and forth every time it is pressed
- B Because it cannot be used for entering numbers
- C Because it cannot be used to delete
- D Because it cannot be used to insert
- E None of these

**Answer: A**

**IBPS Clerk Previous Papers (Download PDF)**

**Question 223**

**Using Print Preview is useful when you want to**

- A colour the document
- B save the document
- C delete the document
- D copy the document
- E view how the document will appear when printed

**Answer: E**

**Question 224**

**Which of the following can input graphical images and pictures for a computer ?**

- A plotter
- B Scanner
- C Mouse
- D Printer
- E keyboard

**Answer: B**

**Question 225**

**When a chart is placed on this it is much larger and there is no other data on it**

- A Chart sheet
- B Exclusive sheet
- C Primary sheet
- D Reference sheet

E None of these

Answer: A

## IBPS Clerk Important Questions PDF

### Question 226

The process of trading goods over the Internet is known as

A e-selling-n-buying

B e-trading

C e-finance

D e-salesmanship

E e-commerce

Answer: E

### Question 227

Information that comes from an external source and fed into computer software is called

A Output

B Input

C Throughput

D Reports

E None of these

Answer: B

### Question 228

The main system board of a computer is called the

A integrated circuit

B motherboard

C processor

D microchip

E None of these

Answer: B

## IBPS Clerk Free Preparation App

### Question 229

This dialog box specifies or modifies the worksheet cell range containing data to be charted



- A Chart Location
- B Chart Style
- C Chart Options
- D Chart Source Data
- E None of these

**Answer: D**

**Question 230**

**If you change Windows 98 to Windows XP you are actually performing**

- A upstart
- B upgrade
- C update
- D patch
- E None of these

**Answer: D**

**Question 231**

**The operating system that is self-contained in a device and resident in the ROM is**

- A Batch Operating System
- B Real-time Operating System
- C Embedded Operating system
- D Mutli-Processor Operating
- E None of the above

**Answer: C**

## **Free Banking Study Material (15000 Solved Questions)**

**Question 232**

**To make a copy of the current document to disk**

- A use the save command
- B this cannot be done
- C use the duplicate command
- D copy the document
- E use the save as command

**Answer: E**

**Question 233**

.....is the process of carrying out commands

- A Fetching
- B Storing
- C Decoding
- D Executing
- E None of these

**Answer: D**

**Question 234**

In the formula  $=B1/B2+B3$  which of the following is the correct precedence ?

- A Addition higher precedence than division
- B Equal precedence among the two operators proceed right to left
- C Equal precedence among the two operators proceed left to right
- D Division higher precedence than addition
- E None of these

**Answer: D**

**IBPS Clerk Free Online Coaching**

**Question 235**

POST stands for

- A Power On Self Test
- B Program On Self Test
- C Power on System Test
- D Program on System Test
- E Power Off System Test

**Answer: A**

**Question 236**

In word you can use Styles to

- A make copies of documents
- B save changes to document
- C delete text in documents
- D format your documents

E None of these

**Answer: D**

**Question 237**

**How many megabytes make a gigabyte ?**

A 1024

B 128

C 256

D 512

E 64

**Answer: A**

**Question 238**

**An educational institution would generally have the following in its domain name**

A .org

B .edu

C .inst

D .com

E .sch

**Answer: B**

**Question 239**

**Which of the following is not a term pertaining to the Internet ?**

A Keyboard

B Link

C Browser

D Search Engine

E Hyperlink

**Answer: A**

**Question 240**

**Which of the following is used by the browser to connect to the locations of the Internet resources ?**

A Linkers

B Protocol

C Cable

- D URL
- E None of these

Answer: D

## Daily Free Banking Online Test

### Question 241

Excel would evaluate the formula, =20\*10/4\*8 and return the answer

- A 400
- B 40
- C 6.25
- D 232
- E 600

Answer: A

### Question 242

Which of the following is the fastest type of computer ?

- A Laptop
- B Notebook
- C Personal computer
- D Workstation
- E Supercomputer

Answer: E

### Question 243

Linux is a type of ..... software

- A Shareware
- B Commercial
- C Proprietary
- D Open Source
- E Hidden type

Answer: A

## Download IBPS Clerk General Knowledge PDF

### Question 244

In a website the 'homepage' refers to

- A the best page
- B the last page
- C the first page
- D the most recent page
- E the oldest page

**Answer: C**

**Question 245**

**Which key is used to delete one character to the left of the current position of the cursor ?**

- A Backspace
- B Delete
- C Insert
- D Esc
- E Ctrl

**Answer: A**

**Question 246**

**Which part of the computer helps to store information ?**

- A Monitor
- B Keyboard
- C Disk drive
- D Printer
- E Plotter

**Answer: C**

## 200+ Free GK Tests for Banking exams

**Question 247**

**To restart the computer the following combination of keys is used**

- A Del+Ctrl
- B Backspace+Ctrl
- C Esc+Ctrl
- D Insert+Esc
- E Ctrl+Alt+Del

**Answer: E**

**Question 248**

**ASCII stands for**

- A American Special Computer for Information Interaction
- B American Standard Computer for Information Interchange
- C American Special Code for Information Interchange
- D American Special Computer for Information Interchange
- E American Standard Code for Information Interchange

**Answer: E**

**Question 249**

**In word when you indent a paragraph you**

- A push the text in with respect to the margin
- B change the margins on the page
- C move the text up by one line
- D move the text down by one line
- E None of these

**Answer: A**

## 100 Free IBPS Clerk Computer Awareness Tests

**Question 250**

**Which keys enable the input of numbers quickly ?**

- A Ctrl,shift and alt
- B Function keys
- C The numeric keypad
- D Arrow keys
- E None of these

**Answer: C**

**200+ Banking Previous Papers (Download PDF)**

**Take 4 Free IBPS Clerk Mock Tests (With Solutions)**

**IBPS Clerk Previous Papers (Download PDF)**



**IBPS Clerk Important Questions PDF**

**IBPS Clerk Free Preparation App**

**Free Banking Study Material (15000 Solved Questions)**

**IBPS Clerk Free Online Coaching**

**Daily Free Banking Online Test**

**Download IBPS Clerk General Knowledge PDF**

**200+ Free GK Tests for Banking exams**

**100 Free IBPS Clerk Computer Awareness Tests**

**200+ Banking Previous Papers (Download PDF)**

**Latest Job Updates on Telegram - Join here**