



SBI Clerk 2009 ES

All rights reserved. No part of this publication may be reproduced, distributed, or transmitted in any form or by any means, electronic, mechanical, photocopying, recording or otherwise, or stored in any retrieval system of any nature without the permission of cracku.in, application for which shall be made to support@cracku.in

General Awareness

Instructions

For the following questions answer them individually

Question 1

As per the new targets fixed for 2009-10 the agriculture sector will receive the credit flow of Rs ____

- A 1,50,000 crores
- B 3,00,000 crores
- C 4,00,000 crores
- D 2,25,000 crores
- E 3,50,000 crores

Answer: D

SBI Clerk Free Mock Test (Latest Pattern)

Question 2

As per the Union Budget 2009-10 how much amount is allocated to National Rural Health Mission (NRHM) ? About Rs_____

- A 5,000 crores
- B 7,000 crores
- C 9,000 crores
- D 10,000 crores
- E 12,000 crores

Answer: E

Question 3

The National Commodity and Derivatives Exchange Limited (NCDEX) is located in which of the following cities ?

- A Mumbai
- B Kolkata
- C Hyderabad
- D Jaipur
- E New Delhi

Answer: A

Question 4

Many times we read in financial newspapers about the performance of the "core sectors" in Economy Which of the following is NOT included in the core sector of the same ?

- A Coal

- B Auto sector
- C Steel
- D Cement
- E Oil & Petroleum sector

Answer: B

SBI Clerk Previous Papers (Download PDF)

Question 5

Which of the following is/are the highlights of the Railway Budget 2009-10 presented by Ms. Mamta Banerjee ?

- (A) Several low fare AC Yuva Trains are introduced for the first time in the country
- (B) Twelve non stop point to point trains between the select cities are introduced
- (C) Railway will develop cold storages for farmers on surplus land of Railways so that vegetables and fruits can be stored there before loading on wagons

- A Only A
- B Only B
- C Only A and B
- D All A, B and C
- E None of these

Answer: D

Question 6

Which of the following programmes was launched in 2005-06 for creating infrastructure and basic amenities in rural parts of our country ?

- A Janani Suraksha Yojana
- B Sarva Shiksha Abhiyan
- C Swarnjayanti Shahari Rozgar Yojana
- D National Rural Employment Guarantee Scheme
- E Bharat Nirman

Answer: E

Question 7

A new scheme Pradhan Mantri Adarsh Gram Yojana is launched recently with an allocation of Rs_____

- A 100 crores
- B 200 crores
- C 350 crores
- D 500 crores
- E 1,000 crores

Answer: A

Free Banking Study Material (15,000 Solved Questions)

Question 8

"micro Credit" means_____

- (A)Loans of small amount to the people in unorganized sector
- (B)Loans to Self Help Groups
- (C)Loans amounting Rs 50 lakhs to Rs 5 crores to Medium and Small Industrial Units

- A Only A
- B Only B
- C Only A and B
- D All A, B and C
- E None of these

Answer: C

Question 9

Which of the following banks has launched a new product "Defence Salary Package-Army for the jawans of the defence services in India ?

- A Bank of India
- B Punjab National Bank
- C Axis Bank
- D State Bank of India
- E ICICI Bank

Answer: D

Question 10

As per the figures released recently the production of food grains during the last three consecutive years 2005-06 to 2007-08 recorded on average annual increase of about___

- A 3 million tonnes
- B 5 million tonnes
- C 7 million tonnes
- D 10 million tonnes
- E 15 million tonnes

Answer: D

Download Highly Rated Banking APP

Question 11

As per the newly released figures India has become the world's third largest manufacturer of which of the following surpassing USA and Russia ?

- A Cement
- B Steel
- C White goods
- D Cars and Wheelers
- E None of these

Answer: D

Question 12

As we all know in India currency market is regulated by the Reserve Bank of India (RBI) while "currency futures" are jointly regulated by the RBI and Which of the following others banks ?

- A NABARD
- B SIDBI
- C SEBI
- D State Bank of India
- E ICICI Bank

Answer: C

Question 13

National Sports Day is observed on which of the following days ?

- A 20th August
- B 29th August
- C 19th July
- D 29th July
- E 20th September

Answer: B

Question 14

Brazil won the confederation Cup Football Finals 2009 after defeating which of the following teams ?

- A USA
- B England
- C Italy
- D France

E Germany

Answer: A

Question 15

Which of the following countries was adjudged as the second biggest investors in Britain during 2008 ?

A India

B Japan

C China

D S Korea

E None of these

Answer: A

Question 16

Who amongst the following is the author of the book "The Miracle of Democracy India's Amazing Journey" ?

A Mr.Nandan Nilekani

B Mr.T S Krishnamurthy

C Mr.Madhav Godbole

D Mr.Gopal Krishna Pillai

E None of these

Answer: B

Free Banking Study Material (15000 Solved Questions)

Question 17

The first European Union-Pakistan Summit was organized in June 2009 in__

A London

B Brussels

C Rome

D Athens

E Budapest

Answer: B

Question 18

Who amongst the following has taken over as Chairperson of the Unique Identification Authority of India created recently ?

A Mr.Narayana Murthy

B Mr. V K Verma

- C Mr.V K Chandrasekhar
- D Mr.K C Chakraborty
- E None of these

Answer: E

Question 19

Govt. of India has made an agreement with which of the following countries to upgrade it's AN-32 aircrafts used by the Indian Air Force ?

- A Ukrain
- B France
- C Russia
- D Britain
- E None of these

Answer: A

SBI PO Solved Previous Papers (Download PDF)

Question 20

Serena Williams won which of the following women's Championship of 2009 after defeating her sister Venus Williams ?

- A French Open
- B Australian Open
- C Wimbledon
- D US Open
- E None of these

Answer: C

Question 21

Which of the following is Repo Rate at present ?

- A 3%
- B 3.5%
- C 4%
- D 4.75%
- E None of these

Answer: D

Question 22

Sri Hansraj Bhardwaj has taken over as the Governor of ____

A Tamil Nadu

B Assam

C Karnataka

D Maharashtra

E Jharkhand

Answer: C

Get Free Study Material & Updates - Whatsapp "Updates" to 7661025557

Question 23

Who amongst the following got the IIFA Award 2009 for Best Director ?

A Karan Johar

B Ashutosh Gowariker

C David Dhawan

D Rakesh Roshan

E None of these

Answer: B

Question 24

The first summit of BRIC nations was held recently in which of the following nations ?

A India

B Russia

C Brazil

D China

E None of these

Answer: B

Question 25

Who amongst the following is the author of the book "Shape of Things To Come" ?

A Adam Smith

B James Joyce

C Daniel Defoe

D Edgar Snow

E H G Wells

Answer: E

SBI PO Free Mocks (Latest Pattern)

Question 26

As per the recent announcement by the Govt.of India about 2200 items from a particular country are now allowed to enter India without payment of any import duty.Which of the following countries will be exporting these items ?

- A Singapore
- B China
- C Pakistan
- D Nepal
- E Myanmar

Answer: B

Question 27

As per the news published in various newspapers the RBI has given its permission for cash withdrawal at"POS terminals" What is the full form of "POS" ?

- A Permitted on Sale
- B Potential of Service
- C Point of Sale
- D Permission of Sale
- E None of these

Answer: C

Question 28

Which of the following has been the Gross Fiscal Deficit (per cent of GDP) during 2008-09 ? About__

- A 3%
- B 5%
- C 6%
- D 9%
- E 8%

Answer: C

Download SBI Clerk Syllabus PDF

Question 29

Which of the following States won the 63rd National Football (santosh Trophy) 2009 held in june 2009 ?

- A Maharashtra

- B Jharkhand
- C Karnataka
- D Punjab
- E Goa

Answer: E

Question 30

The eighth Indo-Gulf Conference was organized recently in which of the following cities ?

- A New Delhi
- B Kolkata
- C Kochi
- D Chennai
- E Hyderabad

Answer: D

Question 31

"OSCAR" Awards are given for the excellence in the field of ____

- A Journalism
- B Social Service
- C Films
- D Sports
- E None of these

Answer: C

GK Study Material for Banking Exams (Download PDF)

Question 32

Which of the following is NOT a banking related term ?

- A SME Finance
- B Overdraft
- C Drawing power
- D Sanctioning Authority
- E Equinox

Answer: E

Question 33

Mr.Mahmoud Ahmadinejad who was in news recently is the President of__

- A Iran
- B Iraq
- C Uganda
- D Chad
- E None of these

Answer: A

Question 34

"The Doing Business Report" is prepared by which of the following organizations every year ?

- A Asian Development Bank (ADB)
- B World Bank
- C International Monetary Fund (IMF)
- D World Trade Organisation (WTO)
- E None of these

Answer: B

SBI Clerk Free Mock Test (Latest Pattern)

Question 35

Bad loans in banking terminology are generally known as ____

- A Prime Loans
- B Prime Asset
- C BPO's
- D CBS
- E NPAs

Answer: E

Question 36

Which of the following is NOT a social Development Scheme launched by the Govt. of India ?

- A Indira Awas Yojana
- B Kutir Jyoti
- C Look East Policy
- D Operation Black Board
- E Mid day Meal Scheme

Answer: C

Question 37

Who amongst the following is the Chairperson of the 13th Finance Commission ?

- A Sri Bindeshwar Pathak
- B Mrs.Nirupama Rao
- C Dr.Vijay Kelkar
- D Dr.C Rangarajan
- E None of these

Answer: C

SBI Clerk Previous Papers (Download PDF)

Question 38

"Yen" is the currency of__

- A China
- B South Korea
- C North Korea
- D Taiwan
- E None of these

Answer: E

Question 39

Which of the following awards is given for excellence in the field of Literature ?

- A Saraswati Sanman
- B Tansen Sanman
- C Kalidas Sanman
- D Arjuna Award
- E None of these

Answer: A

Question 40

Which of the following terms is not related with the game of Hockey ?

- A Back Swing
- B Short grip
- C Hook
- D Slice

E Short comer

Answer: E

Free Banking Study Material (15,000 Solved Questions)

English

Instructions

Read the following passage carefully and answer the question given below it. Certain words/phrases have printed in bold to help you locate them while answering some of the question.

Once upon a time there lived a vicious king Raja Shankara short-tempered and temperamental "God I am" he said to his image as he started into the mirror everyday many times a day He was obsessed with himself He loved no one but himself He was blinded towards the injustice in his kingdom because he had little time for his subjects He wasted most of his time in pouring milk and honey over himself

Interruption in his possessed life was dealt with **stern** reprimanding and sometimes on **petty** issues he would behead his servants Provoked by his evil advisor Twishar he went on with his self-indulged life unaware of the plot his very devoted advisor was planning. A plot to dethrone the king rule the kingdom with his wicked ways only to harness wealth and the reputation of a King.

One morning the king was on his usual morning horseback rounds but returned to the palace with an intense look on his face. He locked himself inside his palatial room only to unlock it at sundown. Just as the doors cracked open and Raja Shankara emerged from it his wife rushed to embrace him. She feared a damaging incident had occurred.

The King spoke seldom that day and awoke the next day to make a proclamation to his servants and subjects. The whole kingdom feared what was in store for them from their angry King. But to their surprise he said to all **gathered**. "From now on I will be a different king. A softer and a patient king.

True to his words from that day on the king had truly turned on a new leaf he cleaned out the corruption and injustice in a tender manner with punishments aimed to renew the person from within.

One fine day his evil advisor gathered courage to ask the reason for his paradigm shift And the king answered. When I went on horseback that morning a month ago, I noticed a dog **brutally** chasing a cat, The cat managed to sneak into a hole only after the dog bit her leg, maiming her for life. Not far the barked at a farmer who picked up a sharp stone and hit it straight in the dog's eye. Bleeding profusely the dog yelped in pain. As the farmer walked on he slipped on the edge of the road and broke his head.

All this happened in a matter of minutes before me and then I realized that evil **begets** evil. I thought about it deeply and was ready to give up my worldly life for the betterment of my subjects I wanted to give up evil in me as I did not want evil to encounter me.

Sniggering away the immoral advisor thought what a perfect time it was to dethrone the king because the Raja had grown kind hearted and patient and would not endeavour a combat. Thinking how he would plan his attack he stumbled over a step that took him hurling down the remaining steps bringing his stop with a crash He howled in pain only to discover he had broken the bones in both his legs.

Question 41

How can Raja Shankara be described before his transformation ?

- (A) He was unjust
- (B) He was preoccupied with himself
- (C) He was cruel

- A Only A
- B Only B
- C Only C
- D Only A and B
- E All the three A,B, and C

Answer: E

Explanation:

The para 1 entirely describes the quality of the king. It states that the king is cruel, bothered of himself and unjust. Hence all three are correct.

Download Highly Rated Banking APP

Downloaded from cracku.in

Question 42

What happened to Twishar in the end when he had thought of a plan to dethrone Raja Shankara?

- A He was beaten up by the King for having cheated him
- B He was very apologetic for his plan
- C He at last managed to be crowned the King after successfully implementing his plan
- D He fell down a flight of steps and broke both his legs
- E None of these

Answer: D

Explanation:

The last two lines of the passage state that the wicked twishar trumbled on a step and fell down. Hence,D

Question 43

What proclamation did the Raja make to his subjects ?

- A That he was giving up his throne for the betterment of the Kingdom
- B That his advisor would be the King from then on
- C That he would be a better King to them than he had been all this while
- D That his subjects were not good enough to deserve better treatment than what was already being meted out to them
- E None of these

Answer: C

Explanation:

Refer to para4,1&4 Lines. Those state that the king proclaimed that he is ready to change. Hence,C

Question 44

What did Raja Shankara's wife think about the Raja's peculiar behaviour that particular day ?

- A She was afraid that something really bad had happened
- B She was afraid that the Raja would beat her up because of his unusual mood
- C She thought that he was in his usual sour mood
- D She thought that the Raja had received threats to his life from his servants
- E None of these

Answer: A

Explanation:

Refer to last line of pra3,it states that the queen is afraid that some bad has happened. So,A

Question 45

What was the reason for Raja Shankara's change in behaviour ?

- A His advisor's words had made him realize him mistake

- B He had felt bad for a poor family on his tour around his kingdom
- C He wife had betrayed him and hence he was upset
- D He had realized that doing good to people would bring good to him
- E None of these

Answer: D

Explanation:

Refer to last but one para 7 & 8 Lines. Those state that the king realised that one receives what one begets . Hence,D.

Question 46

What can possibly be the moral of the story ?

- A Believe in yourself
- B Money is not everything in life
- C Don't trust people
- D Better late than never
- E As you sow so shall you reap

Answer: E

Explanation:

As you show so shall you reap is a proverb used to convey a message that we will receive what we give. The passage out and out covers this meaning .Hence, E

Question 47

How did Raja Shankarsa treat all his servants if they interrupted him before he changed into a good person ?

- A He treated all his servants with respect
- B He would scold them and sometimes cut their heads off over trivial issues
- C He would dismiss them from their duties never to be reinstated
- D He would rob them of all their possessions
- E None of these

Answer: B

Explanation:

Refer to para2 Line 1, it states that the king uses to punish servants for petty things. Hence,B

Free Banking Study Material (15000 Solved Questions)

Question 48

What plan did Twishar have with regard to the Raja ?

- A He planned to take over the Raja's throne through devious means
- B He was a loyal servant to the Raju and always had his best interests in mind
- C He had plans to provoking the Raja into ruling the Kingdom in more wicked ways

- D He planned to kill the Raja with the help of the Raja's servants
- E None of these

Answer: A

Explanation:

The last para states that Twisher wants the king to be dethroned. Hence, A is correct.

Question 49

Why did Twishar think that this was the best time to dethrone the Raja ?

- A As the Raja was sick ailing and was on his deathbed
- B As he knew that the Raja had finally lost his mind
- C As he knew that the Raja had become a soft-natured person and would not attempt to fight
- D As he saw sure that he would be able to convince the people of the Kingdom that the Raja had become weak
- E None of these

Answer: C

Explanation:

Refer to last para lines 1 & 2 Those state that thwashar wants to dethrone the king as he became soft. Hence, C.

Question 50

What did the dog do to the cat ?

- A The dog chased the cat and sent it in the man's direction
- B The dog bit the cat's leg and crippled her for life
- C The dog killed the cat
- D Not mentioned in the passage
- E None of these

Answer: B

Explanation:

Refer to 5th para line 3 It states that the cat sneaked into the hole being bit by dog. Hence, B

SBI PO Solved Previous Papers (Download PDF)

Question 51

Choose the word/group of words which is most similar in meaning to the word/group of words printed in bold as used in the passage

BEGETS

- A produces
- B loses
- C expects
- D avoids
- E calls

Answer: A

Explanation:

Lose is to fail. Expect means to anticipate. Avoid is to put distant. Hence, A is correct.

Question 52

Choose the word/group of words which is most similar in meaning to the word/group of words printed in bold as used in the passage

STERN

- A hard
- B tall
- C easy
- D tight
- E severe

Answer: E

Explanation:

Stern means severe and extreme. Hard means not so feeble. Tall means high. Easy means simple. Tight is to hold on something too strongly. Hence, E.

Question 53

Choose the word/group of words which is most similar in meaning to the word/group of words printed in bold as used in the passage

GATHERED

- A partied
- B assembled
- C dispersed
- D pooled
- E collated

Answer: B

Explanation:

Gathered means assigned or combined together as used in the passage. partied means enjoyed. Dispersed is the opposite of gathered. Pooled means procured. Collated means adjoined. Hence, B

Get Free Study Material & Updates - Whatsapp "Updates" to 7661025557

Question 54

Choose the word/group of words which is most opposite in meaning to the word/group of words printed in bold as used in the passage

PETTY

- A tremendous
- B huge
- C vast

D important

E frugal

Answer: D

Explanation:

Petty means insignificant as used in the passage. In general petty means small. Hence,important is the exact opposite. Tremendous means huge or vast .Frugal means small or scanty. Hence,D.

Question 55

Choose the word/group of words which is most opposite in meaning to the word/group of words printed in bold as used in the passage

BRUTALLY

A cruelly

B partly

C gently

D rarely

E harmfully

Answer: C

Explanation:

Brutally means cruelly or severely (harming), Partly means sectionally or incompletely. Rarely means not so often. Hence,gently meaning smoothly is correct.

Instructions

Rearrange the following six sentence (A)(B)(C),(D)(E) and (F) in the proper sequence to form a meaningful paragraph then answer the question given below

(A)The contractor was sorry to see his good worker go and asked if he could build just one more house as a personal favour

(B)It was an unfortunate way to end a dedicated career.

(C)He told his employer contractor of his plans to leave the house buildings business to live a more leisurely life with his wife and enjoy his extended family

(D)An elderly carpenter was ready to retire

(E)He resorted to shoddy workmanship and used inferior materials.

(F)The carpenter said yes but over time it was easy to see that his heart was not in his work

Question 56

Which of the following should be the THIRD sentence after rearrangement ?

A A

B B

C C

D D

E E

Answer: A

Explanation:

Sentence D is the first sentence as it introduces the carpenter and his willingness to retire that sets the tone for the paragraph. Sentence C should follow it as in C 'his plans' can only denote carpenter's plan to retire. A should follow C because it states that contractor asked him a favour to do one more assignment. Sentence F follows it as it tells carpenter agreed which is followed by E.

Finally B is an apt end to the para and should come in the end. So, the sequence is DCAFEB.

Thus, the third sentence is A.

SBI PO Free Mocks (Latest Pattern)

Question 57

Which of the following should be the FIRST sentence after rearrangement ?

- A A
- B B
- C C
- D D
- E E

Answer: D

Explanation:

Sentence D is the first sentence as it introduces the carpenter and his willingness to retire that sets the tone for the paragraph. Sentence C should follow it as in C 'his plans' can only denote carpenter's plan to retire. A should follow C because it states that contractor asked him a favour to do one more assignment. Sentence F follows it as it tells carpenter agreed which is followed by E. Finally B is an apt end to the para and should come in the end. So, the sequence is DCAFEB.

Thus, the first sentence is D.

Question 58

Which of the following should be the LAST (SIXTH) sentence after rearrangement ?

- A A
- B B
- C D
- D E
- E F

Answer: B

Explanation:

Sentence D is the first sentence as it introduces the carpenter and his willingness to retire that sets the tone for the paragraph. Sentence C should follow it as in C 'his plans' can only denote carpenter's plan to retire. A should follow C because it states that contractor asked him a favour to do one more assignment. Sentence F follows it as it tells carpenter agreed which is followed by E. Finally B is an apt end to the para and should come in the end. So, the sequence is DCAFEB.

Thus, the last sentence is B.

Question 59

Which of the following should be the SECOND sentence after rearrangement ?

- A A
- B B
- C C

D D

E F

Answer: C

Explanation:

Sentence D is the first sentence as it introduces the carpenter and his willingness to retire that sets the tone for the paragraph. Sentence C should follow it as in C 'his plans' can only denote carpenter's plan to retire. A should follow C because it states that contractor asked him a favour to do one more assignment. Sentence F follows it as it tells carpenter agreed which is followed by E. Finally B is an apt end to the para and should come in the end. So, the sequence is DCAFEB.

Thus, the second sentence is C.

Download SBI Clerk Syllabus PDF

Question 60

Which of the following should be the **FOURTH** sentence after rearrangement ?

A B

B C

C D

D E

E F

Answer: E

Explanation:

Sentence D is the first sentence as it introduces the carpenter and his willingness to retire that sets the tone for the paragraph. Sentence C should follow it as in C 'his plans' can only denote carpenter's plan to retire. A should follow C because it states that contractor asked him a favour to do one more assignment. Sentence F follows it as it tells carpenter agreed which is followed by E. Finally B is an apt end to the para and should come in the end. So, the sequence is DCAFEB.

Thus, the fourth sentence is F.

Instructions

Which of the phrases a),b),c)and d) given below each sentence should replace the phrase printed in bold in the sentence to make grammatically correct ?If the sentence is correct as it is given and No correction is required mark e) as the answer.

Question 61

Her entry to the office party was restrict as an official enquiry had been constituted against her

A was restricting

B is restricted

C was restricted

D is restricting

E No correction is required

Answer: C

Explanation:

Was+verb+participle form in main clause, had been+verb+ participle form in subordinate clause is correct structuring of a sentence. Hence, it is used incorrectly .C corrects it.

Question 62

Rima was at her wit's end trying to figure out what to buy for her friend's birthday

- A at her witting end
- B at her wit ends
- C to her wit's end
- D so wit's end
- E No correction required

Answer: E

Explanation:

At her wit's end is an idiom and means that 'to be so worried, confused or annoyed that she does not know what to do next'. So, it is used rightly in the sentence. Hence, E.

GK Study Material for Banking Exams (Download PDF)

Question 63

Pritesh while away his time in playing games on the computer instead of studying

- A whiled away his time
- B whiled against his time
- C whiling away his time
- D while awayed his time
- E No correction required

Answer: A

Explanation:

The action stated in the sentence happened sometime before. Hence, we use past form of a tense and whiled away meaning wasted away is correct. Hence, A fits well.

Question 64

Mohan had make up his mind about going on the world tour all alone

- A made minds
- B make his mind
- C make up his minding
- D made up his mind
- E No correction is required

Answer: D

Explanation:

Make up someone's mind is to prepare for something, but the sentence has presence of 'had' in past tense so past form of make, made should be used. D fits in correctly.

Question 65

She rushed to the station but could find any trace of her daughter there

- A not found trace
- B find no trace
- C found not trace
- D finding no trace
- E No correction is required

Answer: B

Explanation:

The sentence should be corrected as could not find any trace or could find no trace. Hence, B fits in correctly.

SBI Clerk Free Mock Test (Latest Pattern)

Instructions

In each question below a sentence with four words printed in bold type is given. These are numbered as 1),2),3),4). One of these four words printed in bold may be either wrongly spelt or inappropriate in the context of the sentence. Find out the word which is wrongly spelt or inappropriate if any. The number of that words is your answer if all the words printed in bold are correctly spelt and also appropriate in the context of the sentence mark 5) i.e. 'All correct' as your answer.

Question 66

Discussion(1)/ is an exchange of Knowledge (2)/whereas argument(3)/is a depiction(4)/of ignorance.All correct(5).

- A 1
- B 2
- C 3
- D 4
- E 5

Answer: C

Explanation:

Depiction is explaining something using a painting or caricature. It should be replaced with description. Hence, C needs correction.

Question 67

He was arrested(1)/for the crime(2)and was charged(3)/with attempt(4)/to murder.All correct(5).

- A 1
- B 2
- C 3
- D 4
- E E 5

Answer: E

Explanation:

Charged with is the correct phrasal verb meaning accused . It is used correctly and all the other parts are also correct. Hence, E no correction

Question 68

Commit(1)/yourself to lifelong learning(2)/as the most valuable(3)/aset(4)/you will have is your mind.All correct(5).

- A 1
- B 2
- C 3
- D 4
- E 5

Answer: D

Explanation:

Asset should replace the misspelt aset in 3 Hence, C needs correction.

SBI Clerk Previous Papers (Download PDF)

Question 69

Belive(1)/that life is worth(2)/living and your belief will create(3)/the fact(4)/All correct(5).

- A 1
- B 2
- C 3
- D 4
- E 5

Answer: A

Explanation:

Believe is wrongly spelt as belive . So, A needs correction.

Question 70

The best educated(1)/human bing(2)/is the one who understands(3)/most about the life in which(4)/he is placed.All correct(5).

- A 1
- B 2
- C 3
- D 4
- E 5

Answer: B

Explanation:

Human being is wrongly spelt as human bing. So, B has an error.

Instructions

In the following passage there are blanks each of which has been numbered. These numbers are printed below the passage and against each five words are suggested one of which fits the blank appropriately. Find out the appropriate word in each case.

Once upon a time two friends were (71) through the desert. During some point of the (72) they had an argument and one friend slapped the other one in the face. The one who got slapped was (73) but without saying anything he wrote in the sand, "Today my best friend slapped me in the face. They kept on walking (74) they found an oasis where they (75) to take a bath. The one who had been slapped got (76) in the quicksand and started drowning but the friend saved him. After the friend (77) from the near drowning he wrote on a stone. Today my best friend saved my life. The friend who slapped and saved his best friend asked him "After I hurt you, you wrote in the sand and (78) you write on a stone why?" The other friend (79) "When someone hurts us we should write it down in sand where winds of forgiveness can erase it away. But when someone does something good for us we must (80) it in stone where no wind can ever erase it."

Question 71

71

- A crawling
- B speaking
- C swimming
- D walking
- E dancing

Answer: D

Explanation:

We can eliminate speaking, swimming & dancing as these do not have relevance to desert. Between walking and crawling, crawl means to creep. Hence, walking is the correct fit. Hence, D.

Free Banking Study Material (15,000 Solved Questions)

Question 72

72

- A journey
- B sand
- C running
- D border
- E hunt

Answer: A

Explanation:

B, C Sand and running can be eliminated as both of those do not find relevance to the sentence. D can be eliminated as we do not use 'during some part of the border'. E can be eliminated as they are not moving for a hunt. Hence, journey is correct as it reads during some point of journey, hence, A.

Question 73

73

- A dead
- B captured

- C presentable
- D missing
- E hurt

Answer: E

Explanation:

We can eliminate A,B,D dead,captured&missing; because if he is dead or missing , he cant write in the sand. Also C can be eliminated as it is irrelevant in the given context. Hence, E, hurt is correct.

Question 74

74

- A as
- B until
- C from
- D with
- E through

Answer: B

Explanation:

The sentence means that the friends walked up to some point of time till they reached an oasis. Until is the correct preposition .Remaining all prepositions are irrelevant.Hence, B

Download Highly Rated Banking APP

Question 75

75

- A decided
- B fell
- C made
- D want
- E left

Answer: A

Explanation:

Fell, left and made are eliminated as those have no relevance for their usage in the given passage.Between A,D D(want) can be eliminated because the verb we are supposed to use in the context is to be in the past participle form . Hence, A,decided is correct.

Question 76

76

- A home
- B stuck
- C blended

D mixed

E sitting

Answer: B

Explanation:

Stuck means to get stopped. It is the only word fitting into the sentence, Remaining all seem irrelevant. Hence, B is correct.

Question 77

77

A separated

B leaked

C died

D recovered

E saved

Answer: D

Explanation:

A ,B,C' separated, leaked, died' dont make sense in the context. Between B,C we use recovered,because saved is already used in the previous sentence and using it again seems awkward.Hence, C

Question 78

78

A so

B how

C when

D tomorrow

E now

Answer: E

Explanation:

So can be eliminated as it means that one friend hurted the other and hence, he wrote on stone.(getting hurt is not the reason behind writing on stone). B,C are irrelevant and the usage seems awkward. Btween D,E, now is correct. HHence E is correct.

Question 79

79

A called

B tell

C replied

D questioned

E asked

Answer: C

Explanation:

The previous sentence is a question asking for the reason behind writing on the stone. Hence, he should have answered or replied to the question. All other options sound irrelevant when included in the context of the passage. Hence, C

Question 80

80

- A talk
- B push
- C engrave
- D add
- E bury

Answer: C

Explanation:

A,B,D,E talk, push, add and bury can be eliminated as any of the given action couldn't be performed on a stone. To engrave means to cut a hard object or to carve or imprint. Hence, C is correct.

Free Banking Study Material (15000 Solved Questions)

Quant

Instructions

What will come in place of question mark (?) in the following questions ?

Question 81

$\frac{5}{11}$ of $\frac{4}{5}$ of $\frac{11}{16}$ of 848 =?

- A 216
- B 222
- C 208
- D 212
- E None of these

Answer: D

Explanation:

We need to find the value of $\frac{5}{11} \times \frac{4}{5} \times \frac{11}{16} \times 848$

This equals $\frac{1}{4} \times 848 = 212$

Hence, the correct answer is option (d)

SBI PO Solved Previous Papers (Download PDF)

Question 82

1.4% of 750 + 2.2% of 480 = ?

- A 21.06

- B 21.16
- C 20.88
- D 21.18
- E None of these

Answer: A

Explanation:

We need to find the value of 1.4% of 750 + 2.2% of 480

$$1.4\% \text{ of } 750 = 10.50$$

$$2.2\% \text{ of } 480 = 10.56$$

Hence the sum equals $10.50 + 10.56 = 21.06$

Question 83

$${}^3_4 \text{ of } 116 - {}^2_3 \text{ of } 87 = ?$$

- A 31
- B 27
- C 29
- D 26
- E None of these

Answer: C

Explanation:

We need to find the value of ${}^3_4 \text{ of } 116 - {}^2_3 \text{ of } 87$

$${}^3_4 \times 116 = 3 \times 29 = 87$$

$${}^2_3 \times 87 = 2 \times 29 = 58$$

Hence, the difference equals $87 - 58 = 29$

Question 84

$$6.96 \div 1.2 - 10 + 7.6 = ?$$

- A 3.4
- B 3.14
- C 3.04
- D 3.24
- E None of these

Answer: A

Explanation:

We need to calculate the value of $6.96 \div 1.2 - 10 + 7.6$

This equals $5.8 - 10 + 7.6$

Which is $13.4 - 10 = 3.4$

So, the correct answer is option (a)

Question 85

$$32.25 \times 2.4 \times 1.6 = ?$$

- A 128.84
- B 123.84
- C 112.88
- D 112.84
- E None of these

Answer: B

Explanation:

We need to find the value of $32.25 \times 2.4 \times 1.6$

This equals $64.5 \times 1.2 \times 1.6 = 129 \times 0.6 \times 1.6$

This equals $129 \times 0.96 = 123.84$

Hence, the correct answer is option (b)

Question 86

$$136\% \text{ of } 250 + ?\% \text{ of } 550 = 670$$

- A 64
- B 55
- C 56
- D 65
- E None of these

Answer: E

Explanation:

Let the number to replace the question mark be equal to X

Hence, $136\% \text{ of } 250 + X\% \text{ of } 550 = 670$

$136\% \text{ of } 250 = 340$

So, $X\% \text{ of } 550 = 670 - 340 = 330$

Hence, $X = 330/550 = 60\%$

As this is not among the options given, the correct answer is option (e)

Question 87

$$448 \div 16 \times 35 = ?$$

- A 850
- B 890
- C 950
- D 980

E None of these

Answer: D

Explanation:

We need to find the value of $448 \div 16 \times 35$

$$448 \div 16 = 28$$

So, the required expression equals $28 \times 35 = 980$

Hence, the correct answer is option (d)

SBI PO Free Mocks (Latest Pattern)

Question 88

$$\frac{14 \times 25 - 5^3}{24 \times 5 + 8 \times 9} = ?$$

A $1 \frac{9}{64}$

B $\frac{64}{75}$

C $1 \frac{11}{64}$

D $1 \frac{11}{75}$

E None of these

Answer: C

Explanation:

We need to find the value of $\frac{14 \times 25 - 5^3}{24 \times 5 + 8 \times 9}$

Let us first find the value of numerator. It equals $14 \times 25 - 5^3 = 350 - 125 = 225$

The value of the denominator equals $24 \times 5 + 8 \times 9 = 120 + 72 = 192$

Hence, the answer is $\frac{225}{192} = \frac{75}{64} = 1 \frac{11}{64}$

So, the correct answer is option (c)

Question 89

$$78.45 + 128.35 + 1122.25 = ?$$

A 1329.05

B 1239.55

C 1329.45

D 1239.45

E None of these

Answer: A

Explanation:

We need to find the value of the expression $78.45 + 128.35 + 1122.25$

This equals $206.8 + 1122.25 = 1329.05$

Hence, the correct answer is option (a)

Question 90

$$8729-4376+1245=?+2785$$

- A 2713
- B 2823
- C 2833
- D 2733
- E None of these

Answer: E

Explanation:

Let the number to replace the question mark be equal to X

$$\text{So, } 8729-4376+1245=X+2785$$

$$\text{Therefore, } 5598 = X + 2785$$

$$\text{So, } X = 2813$$

[Download SBI Clerk Syllabus PDF](#)

Question 91

$$17\frac{2}{5} \times \frac{5}{8} + ? = 46\frac{7}{8}$$

- A $32\frac{3}{5}$
- B 36
- C $33\frac{2}{5}$
- D $32\frac{2}{5}$
- E None of these

Answer: B

Explanation:

Let the number to replace the question mark be equal to X.

$$\text{So, } 17\frac{2}{5} \times \frac{5}{8} + X = 46\frac{7}{8}$$

$$\text{So, } \frac{87}{5} \times \frac{5}{8} + X = \frac{375}{8}$$

$$\text{So, } \frac{87}{8} + X = \frac{375}{8}$$

$$\text{Therefore, } X = \frac{288}{8} = 36$$

So, the correct answer is option (b)

Question 92

$$5616 \div 18 \div 8 = ?$$

- A 36
- B 76
- C 49

- D 39
E None of these

Answer: D

Explanation:

We need to find the value of $5616 \div 18 \div 8$

This equals $702 \div 18 = 39$

So, the correct answer is option (d)

Question 93

$420 \div 28 \times 288 \div 32 = ?$

- A 235
B 236
C 138
D 132
E None of these

Answer: E

Explanation:

We need to find the value of $420 \div 28 \times 288 \div 32$

$420 \div 28 = 15$ and $288 \div 32 = 9$

So, the given expression equals $15 \times 9 = 135$ and the correct answer is option (e)

GK Study Material for Banking Exams (Download PDF)

Question 94

$22^2 + \sqrt{?} = 516$

- A 1028
B 1024
C 1124
D 1128
E None of these

Answer: B

Explanation:

Let the number to replace the question mark be equal to X

So, $22^2 + \sqrt{X} = 516$

Therefore, $484 + \sqrt{X} = 516$

Or, $\sqrt{X} = 32$ and $X = 32^2 = 1024$

Question 95

$45\% \text{ of } 660 + 28\% \text{ of } 450 = ?$

- A 413
- B 428
- C 423
- D 418
- E None of these

Answer: C

Explanation:

$$45\% \text{ of } 660 = 297$$

$$28\% \text{ of } 450 = 126$$

Hence the sum equals 423

Instructions

What will come in place of question mark (?) in the following number series ?

Question 96

12, 16, 24, 40, ??

- A 76
- B 72
- C 84
- D 88
- E None of these

Answer: B

Explanation:

The difference between consecutive terms of the series is doubling as given below.

$$\text{For example, } 16 - 12 = 4$$

$$24 - 16 = 8$$

$$40 - 24 = 16$$

So, the number to come next is $40 + 32 = 72$

SBI Clerk Free Mock Test (Latest Pattern)

Question 97

9, 19, 39, 79, ??

- A 139
- B 129
- C 159
- D 149
- E None of these

Answer: C

Explanation:

Each term of the number series is one more than double the previous number.

$$\text{For example, } 19 = 2 \times 9 + 1$$

$$39 = 2 \times 19 + 1$$

$$79 = 2 \times 39 + 1$$

So, the number to come next is $2 \times 79 + 1 = 159$

Question 98

8, 17, 42, 91, ??

A 170

B 142

C 140

D 172

E None of these

Answer: D

Explanation:

The difference between consecutive terms of the number series are squares of odd natural numbers.

$$\text{For example, } 17 - 8 = 9$$

$$42 - 17 = 25$$

$$91 - 42 = 49$$

Hence, the number to come next is $91 + 81 = 172$

Question 99

7, 8, 18, 57, ??

A 244

B 174

C 186

D 226

E None of these

Answer: E

Explanation:

The number series given above follows the pattern described below.

$$\text{For example, } 8 = 7 \times 1 + 1$$

$$18 = 8 \times 2 + 2$$

$$57 = 18 \times 3 + 3$$

So, the number to come next is $57 \times 4 + 4 = 232$. As this is not given in the options given, the answer is option (e)

SBI Clerk Previous Papers (Download PDF)

Question 100

3840, 960, 240, 60, ??

A 20

- B 18
- C 12
- D 22
- E None of these

Answer: E

Explanation:

Each number in the given series is one fourth the previous number.

For example, $960 = 3840/4$

$240 = 960/4$

$60 = 240/4$

So, the number to come next is $60/4 = 15$

Instructions

For the following questions answer them individually

Question 101

75% of a number is equal to three-seventh of another number. What is the ratio between the first number and the second number respectively ?

- A 4:7
- B 7:4
- C 12:7
- D 7:12
- E None of these

Answer: A

Explanation:

Let the two numbers be X and Y respectively.

$$\text{So, } 75\%X = \frac{3}{7}Y$$

$$\text{Or, } 4 * X = \frac{3}{7} * Y$$

So, the ratio of X:Y = 4:7

Question 102

A 275 metre long train crosses a platform of equal length in 33 seconds What is the speed of the train in kmph ?

- A 66
- B 60
- C 64
- D 72
- E None of these

Answer: B

Explanation:

The length of the train is 275 m. Hence, the length of the platform is also 275 m.

The train covers a total distance of 550 m in 33 seconds.

Hence, the speed of the train is $\frac{550}{33} = \frac{50}{3}$ m/s

To convert this speed into kmph, we need to multiply it by $\frac{18}{5}$

Hence, the speed of the train in kmph is $\frac{50}{3} * \frac{18}{5} = 60$ kmph

So, the correct option is option (b)

Free Banking Study Material (15,000 Solved Questions)

Question 103

What is compound interest accrued on an amount of Rs 45,000 in two years @ 9 p.c.p.a ?

- A Rs 8,600
- B Rs 8,565.40
- C Rs 8,464.50
- D Rs 8,540
- E None of these

Answer: C

Explanation:

Interest earned in the first year = $45000 * 9 * 1 / 100 = 4050$

Interest earned in the second year = $49050 * 9 * 1 / 100 = 4414.5$

Hence, Compound Interest = $4050 + 4414.5 = \text{Rs } 8464.5$

Question 104

Cost of 18 shirts and 45 trousers is Rs 68,400. What is the cost of 10 shirts and 25 trousers ?

- A Rs 38,000
- B Rs 36,000
- C Rs 34,200
- D Rs 36,200
- E None of these

Answer: A

Explanation:

Let the cost of a shirt be S and the cost of a trouser be T.

So, $18S + 45T = 68400$

We need to know the value of $10S + 25T$.

In order to get that, multiply the above equation by $5/9$.

It implies $(18S + 45T) * 5/9 = 68400 * 5/9$

Or, $10S + 25T = 38000$

Question 105

If the fraction $\frac{4}{5}, \frac{9}{11}, \frac{7}{9}, \frac{5}{6}, \frac{11}{13}$ are arranged in ascending order which one will be the fourth ?

- A $\frac{9}{11}$
- B $\frac{7}{9}$
- C $\frac{4}{5}$
- D $\frac{5}{6}$
- E $\frac{11}{13}$

C $\frac{5}{6}$

D $\frac{4}{5}$

E $\frac{11}{13}$



Answer: C

Explanation:

In order to arrange the fractions in ascending order, all of them should have the same denominator. For this, we have to first calculate the LCM of the denominators. The LCM of 5, 11, 9, 6 and 13 is 2574

Representing all the fractions with denominator 12870, the fractions look as below.

$$\frac{4}{5} = \frac{10296}{12870}$$

$$\frac{9}{11} = \frac{10530}{12870}$$

$$\frac{7}{9} = \frac{10010}{12870}$$

$$\frac{5}{6} = \frac{10725}{12870}$$

$$\frac{11}{13} = \frac{10890}{12870}$$

Arranging them in ascending order, we get the following order

10010, 10296, 10530, 10725, 10890
12870, 12870, 12870, 12870, 12870

So, the fourth number in order is $\frac{10725}{12870}$ which is $\frac{5}{6}$

Download Highly Rated Banking APP

Question 106

Simple interest accrued on an amount in 8 years @ 12 p.c.p.a is Rs 5,520. What is the principal amount ?

A Rs 5,750

B Rs 8,500

C Rs 5,650

D Rs 8,250

E None of these

Answer: A

Explanation:

$$SI = \frac{PRT}{100}$$

$$\text{Hence, } P * 12 * 8 / 100 = 5520$$

$$P = 5520 * 100 / (12 * 8) = 5750$$

Question 107

Find the average of the following set of numbers

148, 88, 184, 166, 96, 122

A 146

B 142

- C 136
- D 132
- E None of these

Answer: E

Explanation:

The given set of numbers are 148, 88, 184, 166, 96, 122

Their sum equals $148+88+184+166+96+122 = 804$

As these are six numbers, their average is $804/6 = 134$.

As this is not amongst the options given, the correct answer is option (e)

Question 108

Shrikant and Vividh started a business investing amounts of Rs 1,85,000 and Rs 2,25,000 respectively. If Vividh's share in the profit earned by them is Rs 9,000 what is the total profit earned by them together ?

- A Rs 17,400
- B Rs 16,400
- C Rs 16,800
- D Rs 17,800
- E None of these

Answer: B

Explanation:

Total investment by Shrikant and Vividh together is $185000 + 225000 = 410000$

Vividh's share in the profits is 9000.

Hence, the total profits equal $9000 * 410000/225000 = 410 * 9000 / 225$

This equals $410 * 40 = 16400$

Question 109

Present ages of father and the son are in the ratio of 6:1 respectively Four years hence the ratio of their ages will become 4:1 respectively What is the son's present age ?

- A 10 years
- B 6 years
- C 4 years
- D 8 years
- E None of these

Answer: B

Explanation:

Let the age of the father be F and the age of the son be S.

So, $F:S = 6:1$ or $F = 6S$

Four years later, their respective ages will be $F+4$ and $S+4$.

So, $(F+4):(S+4)=4:1$

So, $(6S+4):(S+4)=4:1$

Therefore, $6S+4 = 4S+16$ or $2S=12$ or $S=6$

Hence, the current age of the son is 6 years.

Question 110

A DVD player was purchased for Rs 4,860. At what price should it be sold so that 25% profit is earned ?

- A Rs 6,225
- B Rs 6,275
- C Rs 6,075
- D Rs 6,025
- E None of these

Answer: C

Explanation:

The cost price of the DVD player is 4860.

The profit percentage is 25%

Hence, the selling price is $4860 * 125\% = 6075$

Question 111

65% of a number is more than its two-fifth by 140. What is 30% of that number ?

- A 186
- B 168
- C 164
- D 182
- E None of these

Answer: B

Explanation:

Let the number be X.

So, 65% of X - $\frac{2}{5}$ of X = 140

Or, $(\frac{65}{100} - \frac{2}{5}) * X = 140$

So, $\frac{25}{100} * X = 140$

Therefore, $X = 140 * 4 = 560$

Hence, 30% of X = $30\% * 560 = 168$

Free Banking Study Material (15000 Solved Questions)

Question 112

Number obtained by interchanging the digits of a two-digit number is more than the original numbers by 27 and the sum of the digits is 13. What is the original number?

- A 58
- B 67
- C 76

- D 85
E None of these

Answer: A

Explanation:

Let the two-digit number be 'xy'

The number obtained by interchanging the digits = yx

Given that $x + y = 13$

And $10y - x = 27 + 10x + y$

$y - x = 3$

On solving the equations, we get $x = 5, y = 8$

Hence, the required number is 58.

Question 113

32 Men can complete a job in 16 days. In how many days will 16 men complete that job ?

- A 14
B 12
C 16
D 9
E None of these

Answer: E

Explanation:

32 men complete a job in 16 days.

The number of days it takes 1 man to complete the job is $32 \times 16 = 512$ days.

Hence, the number of days it takes 16 men to complete the job is $512/16 = 32$ days.

As none of the options is 32 days, the correct answer is option (e)

Question 114

Mr.Davar spends 38% of his monthly income on food 25% on children's education and 12% on transport and the remaining amount of Rs 5,800 he saves.What is Mr.Davar's monthly income ?

- A Rs 23,200
B Rs 24,200
C Rs 23,800
D Rs 24,400
E None of these

Answer: A

Explanation:

The total percentage of his income that Mr. Davar spends equals $38\% + 25\% + 12\% = 75\%$

Hence, the percentage of his monthly income that Mr. Davar saves is $100 - 75 = 25\%$

This equals Rs. 5,800

Hence, Mr. Davar's monthly income equals $5800 \times 100/25 = \text{Rs. } 23,200$

Question 115

A, B, C, D and E are five consecutive odd numbers. Average of A and C is 59. What is the smallest number ?

- A 65
- B 63
- C 61
- D 57
- E None of these

Answer: D

Explanation:

Let the five numbers be $a, a+2, a+4, a+6$ and $a+8$.

The average of A and C is 59.

Therefore, $a + a+4 = 2 \times 59$

Or $2a + 4 = 118$

Therefore, $a = 57$

Hence, the smallest number is 57.

Instructions

Study the following table carefully to answer these questions

Number of students appeared in SSC examination from five schools over the years table

School Year	A	B	C	D	E
2004	650	760	820	800	780
2005	700	740	860	780	740
2006	800	820	940	750	730
2007	750	880	920	840	790
2008	850	840	900	860	770

Question 116

Number of students appeared from school E in 2004 is approximately what per cent of the total number of students appeared from all the schools together in that year ?

- A 12
- B 28
- C 15
- D 30
- E 20

Answer: E

Explanation:

The total number of students appeared from all the schools together in 2004 = $650 + 760 + 820 + 800 + 780 = 3810$

The required percentage = $\frac{780}{3810} \times 100 = 20.47\%$

Question 117

What is the average number of students appeared from school B for all the years ?

- A 828
- B 808
- C 804
- D 812
- E None of these

Answer: B

Explanation:

The total number of students from B over all the years = $760 + 740 + 820 + 880 + 840 = 4040$

So, the average per year = $4040/5 = 808$

Get Free Study Material & Updates - Whatsapp "Updates" to 7661025557

Question 118

Number of students appeared in 2006 from school A is what per cent of the total number of students appeared from school A for all the years together ?

- A $23\frac{2}{3}$
- B $22\frac{1}{3}$
- C $22\frac{2}{3}$
- D $21\frac{1}{3}$
- E None of these

Answer: D

Explanation:

Total number of students from school A in all the years = $650 + 700 + 800 + 750 + 850 = 3750$

So, the required percentage = $\frac{\text{Students from A in 2006}}{3750} * 100$

= 21.33%

Question 119

What is the ratio between the total number of students appeared in 2004 and 2005 together from schools C and D respectively ?

- A 84:79
- B 79:84
- C 48:79
- D 79:48
- E None of these

Answer: A

Explanation:

Total number of students from C in 2004 and 2005 = $820 + 860 = 1680$

Total number of students from D in 2004 and 2005 = $800 + 780 = 1580$

So, the required ratio = $1680 : 1580 = 168 : 158 = 84 : 79$

Question 120

What is the average number of students appeared from all the schools in 2007 ?

- A 842
- B 856
- C 836
- D 830
- E None of these

Answer: C

Explanation:

Total number of students in 2007 = $750 + 880 + 920 + 840 + 790 = 4180$

Therefore the required average = $4180 / 5 = 836$

SBI PO Free Mocks (Latest Pattern)

Reasoning

Instructions

For the following questions answer them individually

Question 121

In a certain code language 'tree is very beautiful' is written as 'ka na da ta' and 'this is strong tree' is written as 'na pa sa ka'. How is 'beautiful' written in that code language ?

- A da
- B ta
- C sa
- D Data inadequate
- E None of these

Answer: D

Explanation:

From the two conditions, there are two common words, i.e. 'is' & 'tree' coded as either 'na' or 'ka'

Now, in condition 1, there are still two words, thus beautiful is coded as either 'da' or 'ta'

=> Data inadequate

Download SBI Clerk Syllabus PDF

Question 122

In a certain code GIVE is written as '51 @ ©' and FAIL is written as '% 219' How is LEAF written in that code ?

- A 5©2%

- B 9©2%
- C 9@2%
- D 9©1%
- E None of these

Answer: B

Explanation:

Following the above pattern, the code for :

- L - 9
 - E - ©
 - A - 2
 - F - %
- => LEAF - 9 © 2%

Question 123

How many such pairs of letters are there in the word COMPUTER each of which has as many letters between them in the word as in the English alphabet ?

- A None
- B One
- C Two
- D Three
- E More than three

Answer: E

Explanation:

We can start from the first word and make it pairs with remaining ones and then check if they meet our requirement or not, So to start with let's take CO. Now CO does not have any letter between them in the given word which is not the case in actual english alphabets. So CO is not a possible pair, moving on to CM, we can see that this also does not meet the requirement as there are 11 letters between C and O in english whereas here there is just 1. Proceeding in a similar manner we can see that the following pairs meet our requirement.

MR UT UR TR

So since we have 4 pair of words, the correct answer is Option 5

Question 124

The positions of the first and the sixth digits in the number 5109238674 are interchanged. Similarly the positions of the second and the seventh digits are interchanged and so on. Which of the following will be the third digit from the right end after the rearrangement ?

- A 9
- B 0
- C 6
- D 3
- E None of these

Answer: B

Explanation:

Original number: 5109238674

The rule is nothing but to reverse the number.

New number obtained after changing the position of digits as per the given rule is: 4768329015

Now third digit from the right end is 0 which is option 2.

GK Study Material for Banking Exams (Download PDF)

Question 125

Four of the following five are alike in a certain way and so form a group Which is the one that does not belong to that group ?

- A Wheel
- B Tyre
- C Car
- D Door
- E Gear

Answer: C

Explanation:

Options a, b, d and e are parts of a car. Hence, option C is the odd one out.

Question 126

Four of the following five are alike in a certain way and so form a group Which is the one that does not belong to that group ?

- A 115
- B 85
- C 95
- D 75
- E 155

Answer: D

Explanation:

The numbers can be expressed as 23×5 , 17×5 , 19×5 , 15×5 and 31×5 . Except for option D, all other options are multiples of 5 with a prime number. Hence, option D.

Question 127

How many meaningful English words can be made with the letters EMTA using each letter only once in each word?

- A None
- B One
- C Two
- D Three
- E More than three

Answer: E

Explanation:

We can list down all possible words and then find out how many of them are meaningful.

So all possible words are EATM EAMT EMTA EMAT ETAM ETMA

ATME ATEM AMET AMTE AEMT AETM

TMAE TMEA TEAM TEMA TAME TAEM

MEAT META MATE MAET MTAE MTEA

Now we can see that the meaningful words are TEAM MEAT MATE TAME META, so the correct choice is option 5

SBI Clerk Free Mock Test (Latest Pattern)

Question 128

In a certain code SUBSTANCE is written as RATRUFDOB How is TENTHOUSE written in that code ?

- A SMDSIFTVP
- B UOFUIDRTN
- C UOFUIFTVP
- D SMDSIDRTN
- E None of these

Answer: A

Explanation:

The word SUBSTANCE is divided into three parts : SUBS , T , ANCE

I : SUBS - RATR

The diagonally opposite element is substituted by its immediate **preceding** alphabet in the English alphabetical series.

=> S is substituted by R at its diagonally opposite position. Similarly, U is substituted by T at its diagonally opposite position and similarly B & S by A and R.

II : T - U

The middle letter is substituted by its immediate **following** alphabet in the English alphabetical series.

III : ANCE - FDOB

The diagonally opposite element is substituted by its immediate **following** alphabet in the English alphabetical series.

=> A is substituted by B at its diagonally opposite position. Similarly N is substituted by O at its diagonally opposite position and similarly C & E by D and F.

Thus, code for TENTHOUSE :

TENT - SMDS

H - I

OUSE - FTVP

∴ TENTHOUSE - SMDSIFTVP

Instructions

Following questions are based on the five three digit number given below:

519 364 287 158 835

Question 129

If the positions of the first and third digits within each number are interchanged which of the following will be the third digit of the second lowest number ?

- A 9
- B 4

- C 7
- D 8
- E 5

Answer: D

Explanation:

519 364 287 158 835

On changing the first and third digit of each number, we get

915 463 782 851 538

Now the second lowest number is 538. Its third digit is 8, so the correct option is option 4.

Question 130

If the positions of the first and the third digit within each number are interchanged which of the following will be the middle digit of the second highest number ?

- A 1
- B 6
- C 8
- D 5
- E 3

Answer: D

Explanation:

519 364 287 158 835

On interchanging the first and third digit within each number, we get

915 463 782 851 538

The second highest number is 851, so the required middle digit is 5. So, Option D is the correct Choice.

SBI Clerk Previous Papers (Download PDF)

Question 131

Which of the following is the difference between the second digit of the highest and the lowest of these numbers ?

- A 3
- B 1
- C 2
- D 0
- E None of these

Answer: C

Explanation:

519 364 287 158 835

The highest number is 835 and lowest number is 519, so the difference between 2nd digits of these two numbers is $3 - 1 = 2$, So option C is the correct choice.

Instructions

Study the following information carefully and answer the question given below

A, M, P, D, Q, R, W and B are sitting around a circle facing at the center. D is fourth to the left of A, who is third to the right of M. P is third to the left of Q, who is third to the left of M. R is third to the right of W, who is second to the right of B.

Question 132

Who is second to the left of D ?

- A W
- B B
- C Q
- D Data inadequate
- E None of these

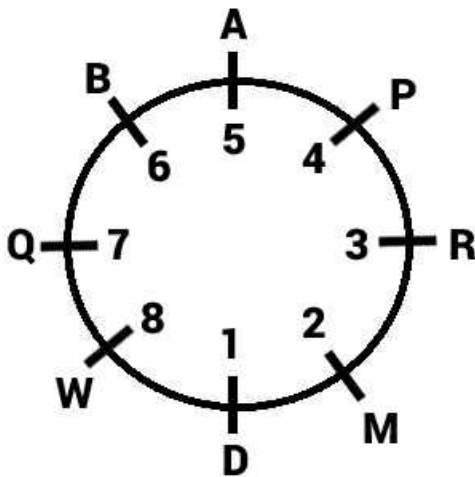
Answer: C

Explanation:

There are 8 people in the circle. Let's name the position of D as 1. So, the position of A is 5 and the position of M is 2.

Since Q is third to the left of M, the position of Q is 7. The position of P is 4.

The last three persons R, W and B can be arranged in only one way as shown in the diagram below.



That answers the question.

Question 133

Who is third to the left of P ?

- A M
- B D
- C R
- D Data inadequate
- E None of these

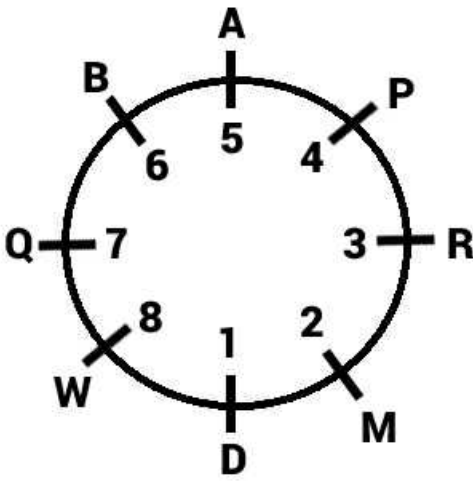
Answer: B

Explanation:

There are 8 people in the circle. Let's name the position of D as 1. So, the position of A is 5 and the position of M is 2.

Since Q is third to the left of M, the position of Q is 7. The position of P is 4.

The last three persons R, W and B can be arranged in only one way as shown in the diagram below.



That answers the question.

Free Banking Study Material (15,000 Solved Questions)

Question 134

Who is to the immediate right of Q ?

- A W
- B D
- C B
- D Data inadequate
- E None of these

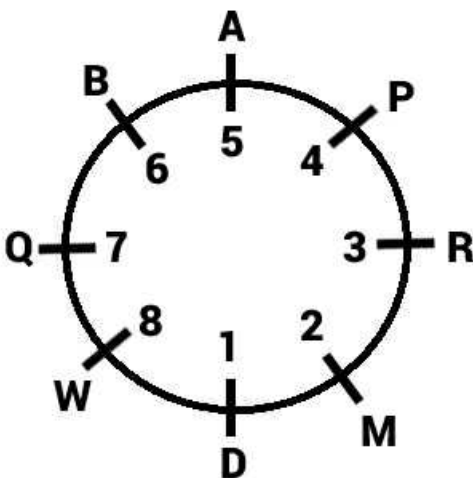
Answer: A

Explanation:

There are 8 people in the circle. Let's name the position of D as 1. So, the position of A is 5 and the position of M is 2.

Since Q is third to the left of M, the position of Q is 7. The position of P is 4.

The last three persons R, W and B can be arranged in only one way as shown in the diagram below.



That answers the question.

Question 135

Which of the following pairs represents the first and second respectively to the right of W ?

- A DM
- B QB
- C MR
- D Data inadequate
- E None of these

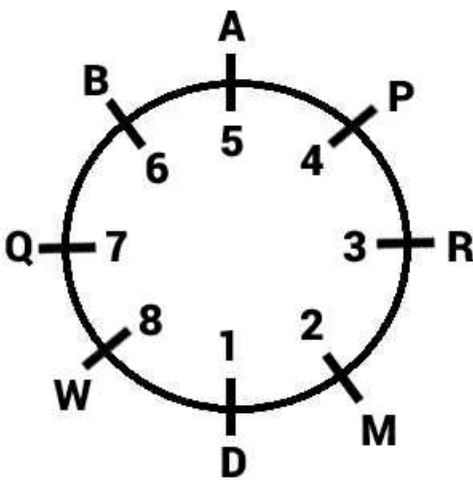
Answer: A

Explanation:

There are 8 people in the circle. Let's name the position of D as 1. So, the position of A is 5 and the position of M is 2.

Since Q is third to the left of M, the position of Q is 7. The position of P is 4.

The last three persons R, W and B can be arranged in only one way as shown in the diagram below.



That answers the question.

Question 136

In which of the following pairs is the second person sitting to the immediate right of the first person ?

- A MD
- B RM
- C AB
- D QB
- E None of these

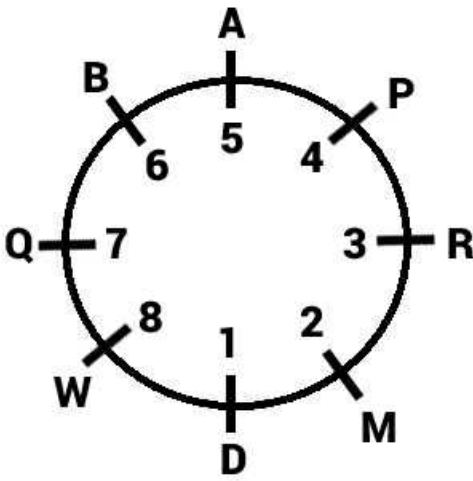
Answer: C

Explanation:

There are 8 people in the circle. Let's name the position of D as 1. So, the position of A is 5 and the position of M is 2.

Since Q is third to the left of M, the position of Q is 7. The position of P is 4.

The last three persons R, W and B can be arranged in only one way as shown in the diagram below.



That answers the question.

Download Highly Rated Banking APP

Question 137

Who is fourth to the right of R ?

- A P
- B A
- C B
- D Data inadequate
- E None of these

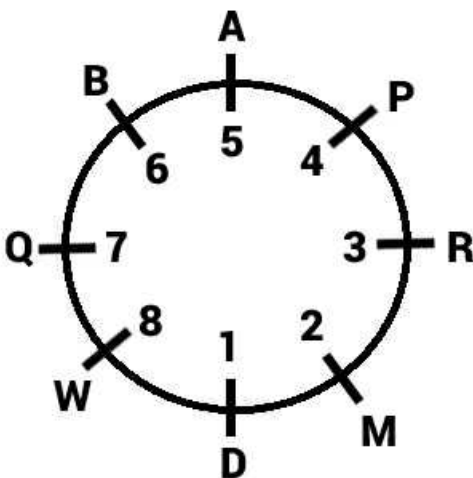
Answer: E

Explanation:

There are 8 people in the circle. Let's name the position of D as 1. So, the position of A is 5 and the position of M is 2.

Since Q is third to the left of M, the position of Q is 7. The position of P is 4.

The last three persons R, W and B can be arranged in only one way as shown in the diagram below.



That answers the question.

Instructions

In the following questions the symbols @, \$, ★, © and # are used with the following meanings as illustrated below:

'P★Q' means 'P is neither greater than nor smaller than Q'

'P\$Q' means 'P is neither greater than nor equal to Q.'

'P@Q' means 'P is not smaller than Q'

'P©Q' means 'P is not greater than Q'

'P#Q' means 'P is neither smaller than nor equal to Q'

Now each of the following question assuming the given statement to be true find which of the three conclusion I II and III given below them is/are definitely true and give your answer accordingly.

Question 138

Statements: W@T, T©M, M\$D

Conclusions: I.W#D

II.W@M

III.D#T

- A Only I is true
- B Only II is true
- C Only III is true
- D Only II and III are true
- E None of these

Answer: C

Explanation:

Statements :

$W \geq T, T \leq M, M < D$

$\Rightarrow D > M \geq T$ and $W \geq T$

Conclusions :

$W > D$ [not true]

$W \geq M$ [not true]

$D > T$ [true]

Thus, only conclusion III is true.

Question 139

Statements: F★R, R©M, M\$D

Conclusions: I.D#R

II.D#F

III.M@F

- A Only I and II are true
- B Only I and III are true
- C Only II and III are true
- D All I II and III are true
- E None of these

Answer: D

Explanation:

Statements :

$$F = R, R \leq M, M < D$$

$$\Rightarrow D > M \geq R = F$$

Conclusions :

$$D > R \text{ [true]}$$

$$D > F \text{ [true]}$$

$$M \geq F \text{ [true]}$$

Thus, all conclusions are true.

Question 140

Statements: $V \odot M, M \star B, B \$ F$

Conclusions: I. $F \# M$

II. $B @ V$

III. $F \# V$

- A Only I and II are true
- B Only II and III are true
- C Only I and III are true
- D All I, II and III are true
- E None of these

Answer: D

Explanation:

Statements :

$$V \leq M, M = B, B < F$$

$$\Rightarrow F > B = M \geq V$$

Conclusions :

$$F > M \text{ [true]}$$

$$B \geq V \text{ [true]}$$

$$F > V \text{ [true]}$$

Thus, all conclusions are true.

Question 141

Statements: $D \# N, N @ B, B \star F$

Conclusions: I. $F \# M$

II. $B @ V$

III. $F \# V$

- A Only I and II are true
- B Only II and III are true
- C Only I and III are true
- D All I II and III are true
- E None of these

Answer: E

Explanation:

Since, all the conclusions involve V or M which are not mentioned in the statements.

Thus, none of the conclusions is true.

Question 142

Statements:R\$T, T#K, K@M

Conclusions:I.R\$M

II.T#M

III.R\$K

- A None is true
- B Only I is true
- C Only II is true
- D Only III is true
- E Only II and III are true

Answer: C

Explanation:

Statements :

$R < T, T > K, K \geq M$

$\Rightarrow T > K \geq M$ and $T > R$

Conclusions :

$R < M$ [not true]

$T > M$ [true]

$R < K$ [not true]

Thus, only conclusion II is true.

Free Banking Study Material (15000 Solved Questions)

Question 143

Statements:H#N, N\$T, T@B

Conclusions:I.B\$N

II.H#T

III.B\$H

- A None is true
- B Only I is true
- C Only II is true
- D Only III is true
- E Only II and III are true

Answer: A

Explanation:

Statements :

$H > N, N < T, T \geq B$

Conclusions :

$B < N$ [not true]

$H > T$ [not true]

$B < H$ [not true]

Thus, none of the conclusions is true.

Instructions

Study the following arrangement carefully and answer the question given below

W 3 # R @ E J K T 4 B 9 1 ★ D U 8 1 H % A V 5 δ 7 M P 2 Q \$ 6

Question 144

Which of the following is the sixth to the right of the twenty-first from the right end of the above arrangement ?

- A 8
- B D
- C P
- D @
- E None of these

Answer: A

Explanation:

W 3 # R @ E J K T 4 B 9 1 ★ D U 8 1 H % A V 5 δ 7 M P 2 Q \$ 6

In the given sequence, 21st from the right is B. Sixth to the right of B is 8. So the correct option is Option 1.

Question 145

How many such vowels are there in the above arrangement each of which is immediately preceded by a symbol and immediately followed by a consonant ?

- A None
- B One
- C Two
- D Three
- E Four

Answer: C

Explanation:

W 3 # R @ E J K T 4 B 9 1 ★ D U 8 1 H % A V 5 δ 7 M P 2 Q \$ 6.

The vowels meeting the requirement of being preceded by a symbol and being followed by a consonant are

E A, so the correct choice is option 3

SBI PO Solved Previous Papers (Download PDF)

Question 146

How many such symbols are there in the above arrangement each of which is immediately followed by a number but not immediately preceded by a number ?

- A None
- B One
- C Two
- D Three
- E More than three

Answer: B

Explanation:

W 3 # R @ E J K T 4 B 9 1 ★ D U 8 1 H % A V 5 δ 7 M P 2 Q \$ 6

In the above sequence, there is only one symbol which is immediately followed by a number but not immediately preceded by a number. The symbol is \$.

So the correct option is option 2.

Question 147

How many such consonants are there in the above arrangement each of which is immediately preceded by a number and immediately followed by a symbol ?

- A None
- B One
- C Two
- D Three
- E More than three

Answer: C

Explanation:

W 3 # R @ E J K T 4 B 9 1 ★ D U 8 1 H % A V 5 δ 7 M P 2 Q \$ 6

The consonants which are immediately preceded by a number and immediately followed by a symbol are H and Q. So the correct choice is option 3.

Question 148

Four of the following five are alike in a certain way based on their positions in the above arrangement and so form a group Which is the one that does not belong to that group ?

- A 81D
- B δ75
- C P27
- D EJR
- E T4J

Answer: B

Explanation:

W 3 # R @ E J K T 4 B 9 1 ★ D U 8 1 H % A V 5 δ 7 M P 2 Q \$ 6

In the of the options the first two letters occur consecutively in the original sequence, where as the third letter is second to the left of first letter. This rule is followed in all options except option 2. So it is the odd one out.

Get Free Study Material & Updates - Whatsapp "Updates" to 7661025557

Question 149

If all the symbols in the above arrangement are dropped which of the following will be the fourteenth from the left end ?

- A 1
- B H
- C D
- D 8
- E None of these

Answer: D

Explanation:

Original Sequence: W 3 # R @ E J K T 4 B 9 1 ★ D U 8 1 H % A V 5 6 7 M P 2 Q \$ 6, The new sequence after dropping all the symbols is W 3 R E J K T 4 B 9 1 D U 8 1 H A V 5 7 M P 2 Q 6

Now the fourteenth element from the left end is 8. So the correct option is option 4.

Instructions

In each of the question below are given three statements followed by three conclusions numbered I, II III You have to take the given statements to be true even if they seem to be at variance from commonly known facts Read all the conclusions and then decide which of the given conclusions logically follows from three given statements disregarding commonly known facts.

Question 150

Statements:All petals are trees

All trees are gardens

All roads are gardens

Conclusions:I. Some roads are trees

II. Some garden are trees

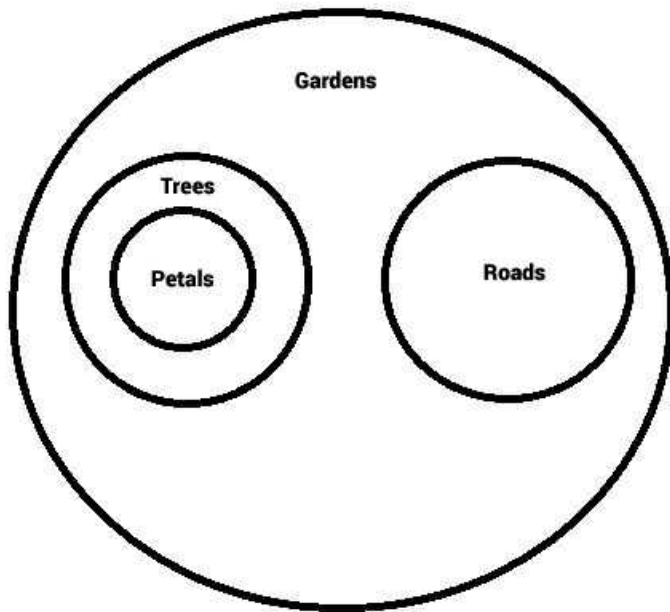
III. Some gardens are petals

- A Only I and II follow
- B Only II and III follow
- C Only I and III follow
- D All I,II and III follow
- E None of these

Answer: B

Explanation:

The Venn Diagram for the syllogism is as shown below:



Question 151

Statements:All keys are locks

No lock is toy

All bags are toys

Conclusions:I.No bag is key

II.Some bags are keys

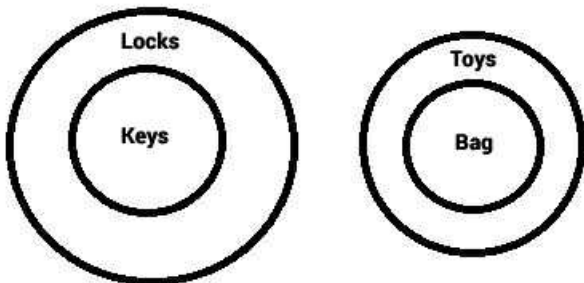
III.Some toys are keys

- A None follows
- B Only I follows
- C Only II follows
- D Only III follows
- E Only I and II follow

Answer: B

Explanation:

The Venn Diagram for the syllogism is as shown below:



Based on the figure we can observe that no bags are keys. Hence conclusion I is implied. However, conclusions II and III are not implied. If they are not implied in one situation, we can say they are not true in "every case". Hence, the correct answer is (b)

SBI PO Free Mocks (Latest Pattern)

Question 152

Statements:Some days are nights.

Some nights are months

Some months are years

Conclusions:I.Some years are nights

II.Some months are days

III.No year is night

- A Only I follows
- B Only II follows
- C Only III follows
- D Only either I or III follows
- E None of these

Answer: D

Explanation:

The Venn Diagram for the syllogism is as shown below:



Irrespective of the figure, we can observe that the conclusions I and III are universally complimentary ie. one of the two has to be true but both of them can't be true at the same time.

Hence, we use "either" and "or".

Question 153

Statements:All cycles are tyres

Some tyres are wheels

All wheels are buses

Conclusions:I.Some buses are tyres

II.Some wheels are tyres

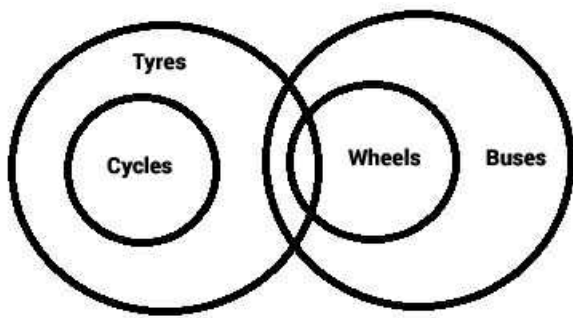
III.Some buses are cycles

- A Only I and II follow
- B Only I and III follow
- C Only II and III follow
- D All I, II and III follow
- E None of these

Answer: A

Explanation:

The Venn Diagram for the syllogism is as shown below:



Based on the figure we can observe that at least some buses are tyres and at least some wheels are tyres. But no buses are cycles. Hence, the correct answer is (a).

Question 154

Statements:Some dogs are cats

Some cats are horses

All horses are tigers

Conclusions:I. Some tigers are cats

II. Some horses are dogs

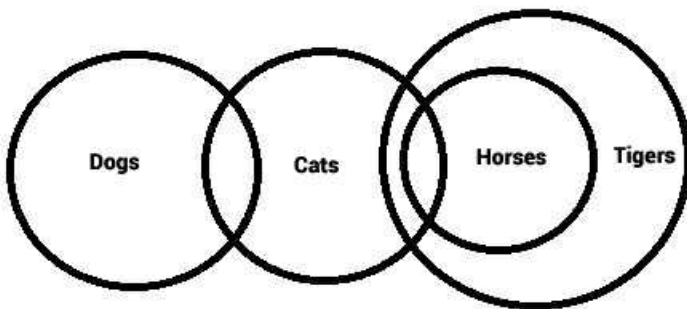
III. Some tigers are dogs

- A None follows
- B Only I follows
- C Only II follows
- D Only III follows
- E Only II and III follow

Answer: B

Explanation:

The Venn Diagram for the syllogism is as shown below:



Based on the figure we can observe that atleast some tigers are cats. Hence conclusion 1 is implied. However, none of the horses are dogs and none of the tigers are dogs. If they are not valid in one case, we can't claim that they are valid in "every" case. Hence, the correct answer is (b).

Download SBI Clerk Syllabus PDF

Question 155

Statements:All ropes are sticks

Some sticks are hammers

Some hammers are lakes

Conclusions:I. Some lakes are ropes

II. Some hammers are ropes

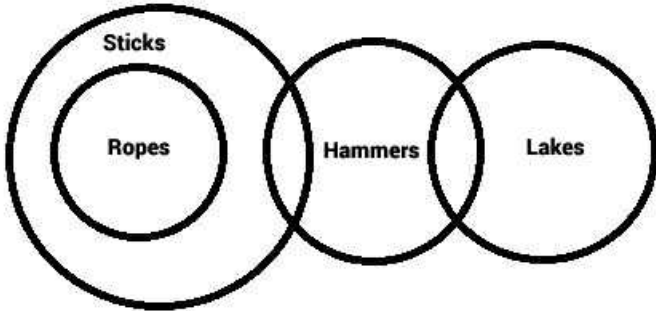
III. Some lakes are sticks

- A None follows
- B Only I follows
- C Only II follows
- D Only III follows
- E Only I and III follows

Answer: A

Explanation:

The Venn Diagram for the given syllogism is as shown below:



Based on the diagram, none of the conclusions shown are implied as there is no overlap between the sets mentioned in the conclusions. Hence, the correct answer is (a).

GK Study Material for Banking Exams (Download PDF)

Computer Knowledge

Instructions

For the following questions answer them individually

Question 156

Passwords enable users to____

- A get into the system quickly
- B make efficient use of time
- C retain confidentiality of files
- D simplify file structures
- E None of these

Answer: C

SBI Clerk Free Mock Test (Latest Pattern)

Question 157

When sending an e-mail the____line describes the contents of the message.

- A subject

- B to
- C contents
- D cc
- E None of these

Answer: A

Question 158

A(n)_____is a program that makes the computer easier to use.

- A utility
- B application
- C operating system
- D network
- E None of these

Answer: C

Question 159

The_____tells the computer how to use its components.

- A utility
- B network
- C application program
- D Operating system
- E None of these

Answer: D

SBI Clerk Previous Papers (Download PDF)

Question 160

Files deleted from the hard disk are sent to the_____

- A Recycle Bin
- B floppy disk
- C clipboard
- D motherboard
- E None of these

Answer: A

Question 161

A_____is a named set of characters that have the same characteristics.

- A type face
- B type style
- C font
- D pico
- E None of these

Answer: C

Question 162

A ____ pre-designed document that already has coordinating fonts a layout and a background

- A guide
- B model
- C ruler
- D template
- E None of these

Answer: D

Free Banking Study Material (15,000 Solved Questions)

Question 163

Personal computers can be connected together to form a ____

- A server
- B supercomputer
- C enterprise
- D network
- E None of these

Answer: D

Question 164

Which elements of a word document can be displayed in colour ?

- A Only graphics
- B Only text
- C All elements
- D All elements but only if you have a colour printer
- E None of these

Answer: C

Question 165

A complete electronic circuit with transistors and other electronic components on a small silicon chip is called a(n)_____

- A workstation
- B CPU
- C magnetic disk
- D integrated circuit
- E None of these

Answer: C

[Download Highly Rated Banking APP](#)

Question 166

To access properties of an object the mouse technique to use is_____

- A right-clicking
- B shift-clicking
- C dragging
- D dropping
- E None of these

Answer: A

Question 167

During the _____portion of the Information Processing Cycle the computer acquires data from some source

- A storage and output
- B storage
- C input
- D output
- E None of these

Answer: C

Question 168

The_____of software contains lists of commands and options.

- A menu bar
- B tool bar
- C title bar
- D formula bar

E None of these

Answer: A

Question 169

A _____ can make it easier to play games.

A mouse

B Joystick

C Keyboard

D pen

E None of these

Answer: B

Question 170

How many different documents can you have open at any one time ?

A Not more than three

B Only one

C As many as your computer memory will hold

D No more than your taskbar can display

E None of these

Answer: D

Question 171

To make the number pad act as directional arrows you press the _____ key

A shift

B arrow lock

C num lock

D caps lock

E None of these

Answer: C

Free Banking Study Material (15000 Solved Questions)

Question 172

Marketing can be effected by _____

A bringing in new customer

- B retaining existing customer
- C selling more to existing customers
- D quality pre and post sales service
- E All of these

Answer: E

Question 173

Something which has easily-understood instructions is said to be____

- A user friendly
- B information
- C word processing
- D icon
- E None of these

Answer: A

Question 174

Of the 4 P's of marketing 3 are Product Place and Promotion.Which is the 4th P ?

- A Price
- B Pricing
- C Purpose
- D Pride
- E Pursuit

Answer: A

SBI PO Solved Previous Papers (Download PDF)

Question 175

What is output ?

- A What the processor takes from the user
- B What the user gives to the processor
- C What the processor gets from the user
- D What the processor gives to the user
- E None of these

Answer: D

Question 176

Innovation in Marketing means_____

- A good communication skills
- B good negotiation skills
- C spirited motivation
- D novel methods of selling
- E tired of marketing

Answer: D

Question 177

Telemarketing involves____

- A good communication skills
- B high level of motivation
- C door-to-door campaigns
- D event management
- E All of these

Answer: A

Get Free Study Material & Updates - Whatsapp "Updates" to 7661025557

Question 178

Online Marketing is____

- A same as face-to-face marketing
- B easier than traditional marketing
- C boring as customer are not visible
- D Voluminous task
- E None of these

Answer: A

Question 179

A Mission Statement is____

- A same as a vision statement
- B same as targets
- C part of the marketing plan
- D All of these
- E None of these

Answer: D

Question 180

A set of instructions telling the computer what to do is called_____

- A mentor
- B instructor
- C compiler
- D program
- E None of these

Answer: D

SBI PO Free Mocks (Latest Pattern)

Question 181

Market Research is required for_____

- A deciding sales volume
- B deciding production levels
- C deciding marketing strategies
- D deciding sales team numbers
- E All of these

Answer: C

Question 182

Market segmentation means ____

- A dividing the sales team into small groups
- B dividing the marketing process into small steps
- C dividing the territory into small areas
- D dividing the targets groups into homogeneous groups
- E All of these

Answer: E

Question 183

Market segmentation is required_____

- A for avoiding cold calls
- B to increase production
- C for territory allocation
- D for focused marketing

E for increasing profits

Answer: D

Download SBI Clerk Syllabus PDF

Question 184

Softcopy is the intangible output so then what is hard copy ?

- A The physical parts of the computer
- B The printed parts of the computer
- C The printed output
- D The physical output devices
- E None of these

Answer: C

Question 185

Motivation for sales person can be achieved through____

- A high success rate of conversions
- B better sales incentives
- C continuous training and updation of knowledge
- D support from operation staff
- E All of these

Answer: E

Question 186

Marketing of Education Loans can be done by ?

- A approaching eligible students
- B approaching the parents
- C approaching colleges
- D having tie-ups with Educational Institutes
- E All of these

Answer: E

GK Study Material for Banking Exams (Download PDF)

Question 187

Diversification is useful for____

- A attaching more customers

- B retaining existing customers
- C increasing sales volume
- D All of these
- E None of these

Answer: B

Question 188

Diversification means___

- A dividing the market into small segments
- B dividing energy of the sales person
- C marketing of diverse products
- D All of these
- E None of these

Answer: C

Question 189

One of the following is not a function of Retail Banking ___

- A Accepting fixed deposits
- B Giving Home loans
- C Giving Education Loans
- D Joint ventures
- E None of these

Answer: D

SBI Clerk Free Mock Test (Latest Pattern)

Question 190

The target group for Fixed Deposits is___

- A all individuals
- B all corporates
- C NRI's
- D Government bodies
- E All of these

Answer: E

Question 191

Data mining means__

- A same as database
- B same as data warehouse
- C market survey
- D analyzing the data on customers
- E None of these

Answer: E

Question 192

Customer database is____

- A useful for lead generation
- B useful for cross selling
- C useful for CRM
- D useful for customization of products
- E All of these

Answer: C

SBI Clerk Previous Papers (Download PDF)

Question 193

Data warehouse is____

- A a godown
- B a shop selling computers
- C a showroom
- D a system where data of customers is stored
- E None of these

Answer: D

Question 194

Retail Banking means____

- A Retail shopkeepers
- B Bank financing to Retail Traders
- C Same as Universal Banking
- D Giving loans to corporates
- E Giving consumer loans to various public

Answer: C

Question 195

Education Loans can be more effectively canvassed by _____

- A Door-to-door campaigns
- B E-mail contacts
- C Diversification
- D tie-up with colleges
- E All of these

Answer: D

Free Banking Study Material (15,000 Solved Questions)

SBI Clerk Free Mock Test (Latest Pattern)

SBI Clerk Previous Papers (Download PDF)

Free Banking Study Material (15,000 Solved Questions)

Download Highly Rated Banking APP

Free Banking Study Material (15000 Solved Questions)

SBI PO Solved Previous Papers (Download PDF)

Get Free Study Material & Updates - Whatsapp "Updates" to 7661025557

SBI PO Free Mocks (Latest Pattern)

Download SBI Clerk Syllabus PDF

GK Study Material for Banking Exams (Download PDF)