



SSC Stenographer 13 September 2017 Afternoon Shift

All rights reserved. No part of this publication may be reproduced, distributed, or transmitted in any form or by any means, electronic, mechanical, photocopying, recording or otherwise, or stored in any retrieval system of any nature without the permission of cracku.in, application for which shall be made to support@cracku.in

Reasoning

Instructions

In the following question, select the missing number from the given series.

Question 1

17, 19, 22, 24, 27, ?

- A 28
- B 29
- C 30
- D 31

Answer: B

Explanation:

'2' and '3' are alternatively added.

$$17 + 2 = 19$$

$$19 + 3 = 22$$

$$22 + 2 = 24$$

$$24 + 3 = 27$$

$$27 + 2 = \mathbf{29}$$

=> Ans - (B)

Daily Free Online GK tests

Question 2

14, 18, 21, 25, 28, ?

- A 32
- B 31
- C 30
- D 35

Answer: A

Explanation:

'4' and '3' are alternatively added.

$$14 + 4 = 18$$

$$18 + 3 = 21$$

$$21 + 4 = 25$$

$$25 + 3 = 28$$

$$28 + 4 = \mathbf{32}$$

=> Ans - (A)

Question 3

14, 21, 35, 56, 84, ?

- A 163
- B 143
- C 158
- D None of the above

Answer: D

Explanation:

The pattern followed is :

$$14 + (7 \times 1) = 21$$

$$21 + (7 \times 2) = 35$$

$$35 + (7 \times 3) = 56$$

$$56 + (7 \times 4) = 84$$

$$84 + (7 \times 5) = 119$$

=> Ans - (D)

Question 4

2, 3, 10, 39, ?, 1175

- A 196
- B 195
- C 194
- D 193

Answer: A

Explanation:

The pattern followed is :

$$2 \times 2 - 1 = 3$$

$$3 \times 3 + 1 = 10$$

$$10 \times 4 - 1 = 39$$

$$39 \times 5 + 1 = 196$$

$$196 \times 6 - 1 = 1175$$

=> Ans - (A)

SSC CHSL Previous Question papers (download pdf)

Instructions

A series is given with one term missing. Select the correct alternative from the given ones that will complete the series.

Question 5

A, D, G, J, M, ?

- A Q
- B P

C S

D U

Answer: B



Explanation:

The pattern followed is :

A (+3 letters) = D

D (+3 letters) = G

G (+3 letters) = J

J (+3 letters) = M

M (+3 letters) = P

=> Ans - (B)

Question 6

LMO, PQS, TUW, ?

A XYA

B BYC

C BXC

D XYD

Answer: A

Explanation:

Series : LMO, PQS, TUW, ?

The pattern followed in each letter of the terms is :

1st letter : L (+4 letters) = P (+4 letters) = T (+4 letters) = X

2nd letter : M (+4 letters) = Q (+4 letters) = U (+4 letters) = Y

3rd letter : O (+4 letters) = S (+4 letters) = W (+4 letters) = A

Thus, missing term = **XYA**

=> Ans - (A)

Question 7

TRS, YWX, DBC, ?

A FIH

B GHI

C FGH

D IGH

Answer: D

Explanation:

Series : TRS, YWX, DBC, ?

The pattern followed in each letter of the terms is :

1st letter : T (+5 letters) = Y (+5 letters) = D (+5 letters) = I

2nd letter : R (+5 letters) = W (+5 letters) = B (+5 letters) = G

3rd letter : S (+5 letters) = X (+5 letters) = C (+5 letters) = H

Thus, missing term = IGH

=> Ans - (D)

SSC CPO Previous Question papers (download pdf)

Instructions

For the following questions answer them individually

Question 8

Arrange the given words in the sequence in which they occur in the dictionary.

1. Mother
2. Master
3. Mango
4. Malta
5. Moise

- A 42315
B 43251
C 43215
D 42351

Answer: B

Explanation:

As per the order of dictionary :

= Malta -> Mango -> Master -> Moise -> Mother

≡ 43251

=> Ans - (B)

Question 9

Which word will appear second when arranged in order of dictionary?

- A Twister
B Tertiary
C Twings
D Twine

Answer: D

Explanation:

As per the order of dictionary :

= Tertiary -> Twine -> Twings -> Twister

Thus, *Twine* will appear 2nd.

=> Ans - (D)

Question 10

Which word will appear third when arranged in order of dictionary?

- A Niggle

- B Nested
- C Night
- D Nippy

Answer: C

Explanation:

As per the order of dictionary :

= Nested -> Niggle -> Night -> Nippy

Thus, *Night* will appear 3rd.

=> Ans - (C)

SSC GD Previous Question papers (download pdf)

Question 11

Arrange the given words in the sequence in which they occur in the dictionary.

1. Linger
2. Large
3. Lamp
4. Lost
5. Long

- A 32154
- B 32145
- C 31254
- D 31245

Answer: A

Explanation:

As per the order of dictionary :

= Lamp -> Large -> Linger -> Long -> Lost

≡ 32154

=> Ans - (A)

Instructions

Question 12

In the following question, select the odd number pair from the given alternatives.

- A 12 - 156
- B 6 - 42
- C 8 - 72
- D 10 - 90

Answer: D

Explanation:

The pattern followed is :

$$(12)^2 + 12 = 156$$

$$(6)^2 + 6 = 42$$

$$(8)^2 + 8 = 72$$

$$(10)^2 + 10 = 110 \neq 90$$

=> Ans - (D)

Question 13

In the following question, select the odd number pair from the given alternatives.

A 14 - 194

B 13 - 167

C 12 - 146

D 11 - 119

Answer: C

Explanation:

The pattern followed is :

$$(14)^2 - 2 = 194$$

$$(13)^2 - 2 = 167$$

$$(12)^2 - 2 = 142 \neq 146$$

$$(11)^2 - 2 = 119$$

=> Ans - (C)

SSC MTS Previous Question papers (download pdf)

Question 14

In the following question, select the odd option from the given alternatives.

A FHJL

B RTVX

C BDFH

D NOQT

Answer: D

Explanation:

The pattern followed is :

$$(A) : F (+2 \text{ letters}) = H (+2 \text{ letters}) = J (+2 \text{ letters}) = L$$

$$(B) : R (+2 \text{ letters}) = T (+2 \text{ letters}) = V (+2 \text{ letters}) = X$$

$$(C) : B (+2 \text{ letters}) = D (+2 \text{ letters}) = F (+2 \text{ letters}) = H$$

$$(D) : N (+1 \text{ letter}) = O (+2 \text{ letters}) = Q (+3 \text{ letters}) = T$$

=> Ans - (D)

Instructions

For the following questions answer them individually

Question 15

Find the odd letter-cluster out of the following four options.

- A DEGJ
- B LMOR
- C RSUX
- D FGJM

Answer: D

Explanation:

The pattern followed is :

(A) : D (+1 letter) = E (+2 letters) = G (+3 letters) = J

(B) : L (+1 letter) = M (+2 letters) = O (+3 letters) = R

(C) : R (+1 letter) = S (+2 letters) = U (+3 letters) = X

(D) : F (+1 letter) = G (+3 letters) = J (+3 letters) = M

=> Ans - (D)

Instructions

In the following question, select the odd word pair from the given alternatives.

Question 16

- A Cloud : Sky
- B Organ : Body
- C House : Rooms
- D Water : River

Answer: C

Explanation:

The first is a part of second, but house is not part of rooms, vice-versa is possible, hence it is the odd one out.

=> Ans - (C)

SSC CHSL Free Mock Test

Question 17

- A Curd - Milk
- B Rice - Grain
- C Paper - Pulp
- D Sugar - Sugarcane

Answer: B

Explanation:

First is made from second, i.e. curd is made from milk, paper from pulp and sugar from sugarcane, hence rice-grain is the odd one out.

=> Ans - (B)

Question 18

- A Ice - Cold
- B Fire- Heat
- C Bulb - Light
- D Sleep - Wake

Answer: D

Explanation:

First provides second (synonyms), but sleep-awake are different actions (antonyms), hence it is the odd one out.

=> Ans - (D)

Instructions

In the following question, select the related number from the given alternatives.

Question 19

10 : 101 :: 12 : ?

- A 145
- B 144
- C 142
- D 141

Answer: A

Explanation:

Expression = 10 : 101 :: 12 : ?

The pattern followed is = $x : x^2 + 1$

Eg :- 10 : $(10)^2 + 1 = 10 : 101$

Similarly, $(12)^2 + 1 = 144 + 1 = 145$

=> Ans - (A)

SSC CPO Free Mock Test

Question 20

3476 : 20 :: 4235 : ?

- A 14
- B 13
- C 12
- D 16

Answer: A

Explanation:

Expression = 3476 : 20 :: 4235 : ?

The second number is equal to the sum of digits of first number.

Eg :- $3 + 4 + 7 + 6 = 20$

Similarly, $4 + 2 + 3 + 5 = 14$

=> Ans - (A)

Question 21

2237 : 84 :: 3642 : ?

A 144

B 142

C 147

D 137

Answer: A

Explanation:

Expression = $2237 : 84 :: 3642 : ?$

The second number is the product of digits of first number.

Eg :- $2 \times 2 \times 3 \times 7 = 84$

Similarly, $3 \times 6 \times 4 \times 2 = 144$

=> Ans - (A)

Instructions

In the following question, select the related letters from the given alternatives.

Question 22

ROOM : QNNL :: RENT : ?

A QDMS

B QEMS

C QDNS

D QDMT

Answer: A

Explanation:

Expression = $ROOM : QNNL :: RENT : ?$

The pattern followed is :

R	O	O	M
(-1)	(-1)	(-1)	(-1)
Q	N	N	L

Similarly, for RENT :

R	E	N	T
(-1)	(-1)	(-1)	(-1)
Q	D	M	S

=> Ans - (A)

SSC GD Free Mock Test

Question 23

PHONE : QJRRJ :: HELLO : ?

- A IGOPT
- B IGOPS
- C IGOQT
- D IGOQS

Answer: A

Explanation:

Expression = PHONE : QJRRJ :: HELLO : ?

The pattern followed is :

P	H	O	N	E
(+1)	(+2)	(+3)	(+4)	(+5)
Q	J	R	R	J

Similarly, for HELLO :

H	E	L	L	O
(+1)	(+2)	(+3)	(+4)	(+5)
I	G	O	P	T

=> Ans - (A)

Question 24

PHYSICS : KSBHRXH :: CHEMISTRY : ?

- A XSVNRHGIB
- B XSVNSHGIB
- C XSUNRIGIB
- D XSVMSITRC

Answer: A

Explanation:

Expression = PHYSICS : KSBHRXH :: CHEMISTRY : ?

The pattern followed is that alphabets with the corresponding position from reverse end are coded together.

A B C D E F G H I J K L M N O P Q R S T U V W X Y Z
↓ ↓ ... ↓ ... ↓
Z Y X W V U T S R Q P O N M L K J I H G F E D C B A

Similarly, CHEMISTRY : **XSVNRHGIB**

=> Ans - (A)

Instructions

In the following question, select the related word from the given alternatives

Question 25

Knife : Cut :: Pen : ?

- A Write

- B Wood
- C Join
- D Blue

Answer: A

Explanation:

Knife is used to cut, similarly a pen is used to write.

=> Ans - (A)

SSC CGL Free Mock Test

Question 26

Court : Justice : : College : ?

- A Education
- B Council
- C Chorus
- D Results

Answer: A

Explanation:

The second is the primary activity of the first, justice is served in court, similarly colleges are used for education.

=> Ans - (A)

Question 27

Hen : Coops : : Rabbit : ?

- A Den
- B Shed
- C Cobweb
- D Burrows

Answer: D

Explanation:

Coops are places where hen are kept, similarly rabbit lives in burrows.

=> Ans - (D)

Instructions

For the following questions answer them individually

Question 28

If $11 @ 13 @ 7 = 13711$ and $4 @ 14 @ 6 = 1464$, then $12 @ 6 @ 13 = ?$

- A 63121
- B 61213
- C 61312

D 13126

Answer: C

Explanation:

The pattern followed is that the numbers are concatenated in such a way : $a @ b @ c \equiv bca$

Eg :- $11 @ 13 @ 7 = 13,7,11 \equiv 13711$

and $4 @ 14 @ 6 = 14,6,4 \equiv 1464$

Similarly, $12 @ 6 @ 13 = 6,13,12 \equiv 61312$

=> Ans - (C)

Download SSC General Knowledge PDF

Question 29

What will come in place of question mark (?) in the given equation?

$$9 ? 11 ? 6 ? 3 ? 9 = 117$$

A +, -, ÷ and x

B x, +, ÷ and x

C x, -, + and ÷

D x, ÷, + and -

Answer: B

Explanation:

Expression : $9 ? 11 ? 6 ? 3 ? 9 = 117$

(A) : +, -, ÷ and x

$$\equiv 9 + 11 - 6 \div 3 \times 9 = 117$$

$$\text{L.H.S.} = 20 - (2 \times 9) = 20 - 18 = 2 \neq \text{R.H.S.}$$

(B) : x, +, ÷ and x

$$\equiv 9 \times 11 + 6 \div 3 \times 9 = 117$$

$$\text{L.H.S.} = 99 + (2 \times 9) = 99 + 18 = 117 = \text{R.H.S.}$$

=> Ans - (B)

Instructions

In the following question, select the word which cannot be formed using the letters of the given word.

Question 30

SUBSTITUTION

A BITS

B BOND

C BINS

D BUST

Answer: B

Explanation:

The word SUBSTITUTION does not contain any 'D', thus the word 'Bond' cannot be formed.

=> Ans - (B)

Question 31

CELEBRATIONS

A CREATE

B COINS

C SONG

D RATES

Answer: C

Explanation:

The word CELEBRATIONS does not contain any 'G', thus the word 'Song' cannot be formed.

=> Ans - (C)

SSC GD 10 Mock Tests for Rs. 117

Instructions

In the following question below are given some statements followed by some conclusions. Taking the given statements to be true even if they seem to be at variance from commonly known facts, read all the conclusions and then decide which of the given conclusion logically follows the given statements.

Question 32

Statements:

I. All cups are plates.

II. All plates are red.

Conclusions:

I. All cups are red.

II. All plates are cups.

III. All red are plates.

A Only I

B Only II

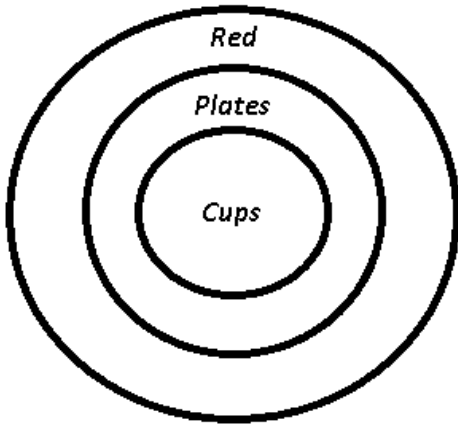
C Only III

D All conclusions follow.

Answer: A

Explanation:

The venn diagram for above statements is :



Conclusions:

- I. All cups are red = true
- II. All plates are cups = false
- III. All red are plates = false

Thus, only I follow.

=> Ans - (A)

Question 33

Statements:

- I. Some sky are blue.
- II. Some blue are soft.

Conclusions:

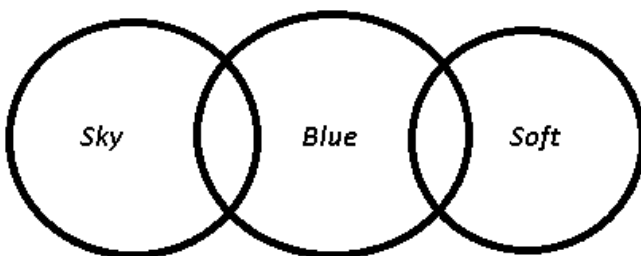
- I. Some sky are soft.
- II. Some soft are sky.

- A Only I
- B Only II
- C Neither I nor II
- D Both I and II

Answer: C

Explanation:

The venn diagram for above statements is :



Conclusions:

- I. Some sky are soft = false
- II. Some soft are sky = false

Thus, neither I nor II follow.

=> Ans - (C)

Instructions

For the following questions answer them individually

Question 34

In a certain code language, 'sky' means 'red', 'red' means 'tomato', 'tomato' means 'milk', 'milk' means 'soil' and 'soil' means 'white'. In the given code language where does a plant grow?

- A soil
- B white
- C red
- D tomato

Answer: B

Explanation:

Normally, a plant grows in soil, but in this code language 'soil' means 'white', thus a plant grows in 'white'.

=> Ans - (B)

SSC CHSL Previous Papers (DOWNLOAD PDF)

Question 35

In a certain code language, "GIANT" is written as "96432" and "FRAIL" is written as "58467". How is "GRAIN" written in that code language?

- A 93452
- B 95648
- C 98634
- D 98463

Answer: D

Explanation:

Codes for each letter is given :

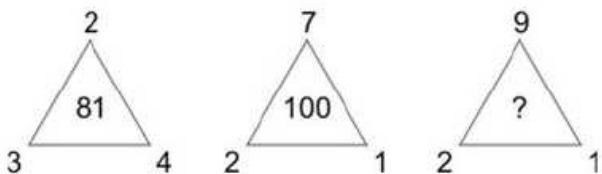
- G -> 9
- R -> 8
- A -> 4
- I -> 6
- N -> 3

Thus, GRAIN : **98463**

=> Ans - (D)

Question 36

In the following question, Select the number which can be placed at the sign of question mark (?) from the given alternatives.



- A 121
- B 100

C 64

D 144

Answer: D

Explanation:

The pattern followed is that the middle number is the square of sum of the digits at the vertices.

Eg :- $(2 + 3 + 4)^2 = (9)^2 = 81$

and $(7 + 2 + 1)^2 = (10)^2 = 100$

Similarly, $(9 + 2 + 1)^2 = (12)^2 = 144$

=> Ans - (D)

Question 37

In the following question, Select the number which can be placed at the sign of question mark (?) from the given alternatives

2	4	9	?
5	3	7	38
6	1	5	31

A 22

B 24

C 28

D 32

Answer: A

Explanation:

The pattern followed is that in each row for the numbers : $a, b, c, d \Rightarrow d = (a \times c) + b$

Eg :- $(5 \times 7) + 3 = 35 + 3 = 38$

and $(6 \times 5) + 1 = 30 + 1 = 31$

Similarly, $(2 \times 9) + 4 = 18 + 4 = 22$

=> Ans - (A)

SSC GD Constable Previous Papers

Question 38

In the following question, Select the number which can be placed at the sign of question mark (?) from the given alternatives

2	4
5	13

3	4
6	18

4	9
3	?

A 32

B 35

C 21

D 39

Answer: D

Explanation:

The pattern followed is that the bottom right number is the result of the sum of bottom left number and the product of top two numbers.

Eg :- $(2 \times 4) + 5 = 8 + 5 = 13$

and $(3 \times 4) + 6 = 12 + 6 = 18$

Similarly, $(4 \times 9) + 3 = 36 + 3 = 39$

=> Ans - (D)

Question 39

In the following question, Select the number which can be placed at the sign of question mark (?) from the given alternatives.

3	6	9	18
4	9	4	?
5	4	8	17

A 18

B 14

C 17

D 22

Answer: C

Explanation:

In each row, the number at the end is the sum of other numbers.

Eg :- $3 + 6 + 9 = 18$

and $5 + 4 + 8 = 17$

Similarly, $4 + 9 + 4 = 17$

=> Ans - (C)

Question 40

Present ages of Richa and her husband are in ratio 3 : 4. Five years from now, ages of her husband and her son will be in ratio 3 : 1. If the present age of Richa is 21 years, then what will be her son's present age (in years)?

A 16

B 11

C 6

D 5

Answer: C

Explanation:

Let Richa's present age = $3x$ years and her husband's present age = $4x$ years

Also, present age of Richa = 21 years

=> $3x = 21$

=> $x = \frac{21}{3} = 7$ years

Thus, her husband's present age = $4 \times 7 = 28$ years

5 years from now, let her husband's age = $3z$ years and her son's age = z years

Her husband's age 5 years from now = $28 + 5 = 33$ years

$$\Rightarrow 3z = 33$$

$$\Rightarrow z = \frac{33}{3} = 11$$

\therefore Son's present age = $z - 5 = 11 - 5 = 6$ years

\Rightarrow Ans - (C)

SSC Stenographer Previous Papers (DOWNLOAD PDF)

Question 41

Kamal's position from the left end in a row of boys is 31 st and Karan's position from the right end is 29 th . After interchanging their position, Kamal's position becomes 43 rd from the left end. How many boys are there in the row?

A 68

B 71

C 72

D 70

Answer: B

Explanation:

Karan's position from right end = 29th

When they interchange their positions,

\Rightarrow Karan's initial position = Kamal's final position from left end = 43rd

Thus, total boys in the row = $(43 + 29) - 1 = 72 - 1 = 71$

\Rightarrow Ans - (B)

Question 42

Six towels are kept one on top of the other. Red coloured is just above black coloured. The yellow coloured is between blue coloured and green coloured. Pink coloured is between red coloured and blue coloured. Which towel is between the pink coloured and yellow coloured towels?

A Red

B Green

C Pink

D Blue

Answer: D

Explanation:

Red coloured is just above black coloured. Pink coloured is between red coloured and blue coloured.

\Rightarrow Pink coloured towel is just below the blue towel.

The yellow coloured is between blue coloured and green coloured.

\Rightarrow Green towel is on top and black at the bottom.

Green
Yellow
Blue
Pink
Red
Black

∴ Blue towel is between the pink coloured and yellow coloured towels.

=> Ans - (D)

Question 43

Present age of a A is 2 times that of B. After 5 years the B's age will be 4 times of C's present age. If C celebrated his seventh birthday 4 years ago, then what will be the present age (in years) of A?

- A 73
- B 64
- C 78
- D 59

Answer: C

Explanation:

C celebrated his seventh birthday 4 years ago, => C's present age = $7 + 4 = 11$ years

Also, B's age after 5 years = $4 \times 11 = 44$ years

=> B's present age = $44 - 5 = 39$ years

∴ A's present age = $2 \times 39 = 78$ years

=> Ans - (C)

SSC CGL Previous Papers (DOWNLOAD PDF)

Question 44

Which answer figure will complete the pattern in the question figure ?





Answer: A

Explanation:

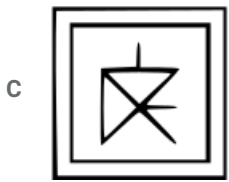
The question figure will be completed by :



=> Ans - (A)

Question 45

From the given answer figures, select the one in which the question figure is hidden/embedded.



Answer: C

Explanation:

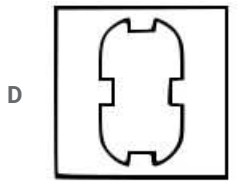

The above figure is represented by 'red' color and is hidden in :



=> Ans - (C)

Question 46

A piece of paper is folded and cut as shown below in the question figures. From the given answer figures, indicate how it will appear when opened ?




Answer: A

SSC CHSL Free Mock Test (Latest Pattern)

Question 47

If a mirror is placed on the line AB, then which of the answer figures is the right image of the given figure ?



Answer: D

Explanation:

A horizontal mirror is placed, so the object on the top will appear at the bottom in reverse position and vice-versa.

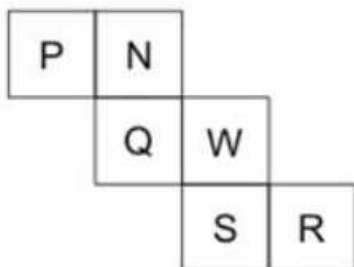
So the pentagon in the middle facing upwards will now appear facing downwards, thus the first option will be eliminated.

Also, in the question figure, the triangle appear at bottom right, hence it will appear at top right side, hence fourth option is the right image.

=> Ans - (D)

Question 48

In the given figure, what will come opposite to face containing 'N' ?



- A S
- B R
- C Q
- D W

Answer: A

Question 49

A word is represented by only one set of numbers as given in any of the alternatives. The sets of numbers given in the alternatives are represented by two classes of alphabets as shown in the given two matrices. The columns and rows of Matrix-I are numbered from 0 to 4 and matrices. The columns and rows 5 to 9 a letter from these matrices can be represented first by its row and next by its column, for example, 'Y' can be represented by 00, 22, etc., and 'U' can be represented by 42, 59, etc., Similarly, you have to identify the set for the word "PRANK".

Matrix-I

	0	1	2	3	4
0	Y	I	K	W	X
1	G	J	N	H	V
2	E	O	Y	K	T
3	M	G	W	L	R
4	A	E	U	N	K

Matrix-II

	5	6	7	8	9
5	N	I	X	P	U
6	K	V	O	T	S
7	L	P	R	A	D
8	O	H	J	L	N
9	P	J	Q	V	X

- A 58, 86, 40, 12, 34
- B 76, 89, 55, 43, 23
- C 23, 34, 78, 55, 02
- D 95, 77, 40, 43, 65

Answer: D

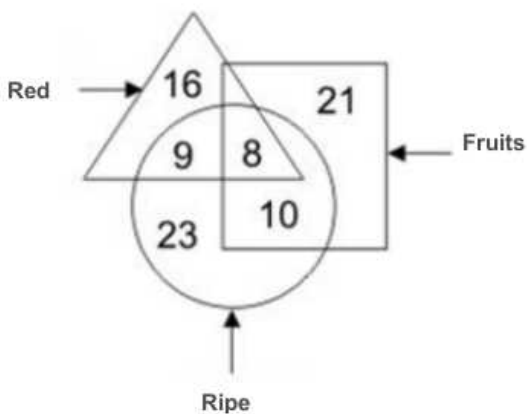
Explanation:

- (A) : 58, 86, 40, 12, 34 = PHANR
 - (B) : 76, 89, 55, 43, 23 = PNNNK
 - (C) : 23, 34, 78, 55, 02 = KRANK
 - (D) : 95, 77, 40, 43, 65 = PRANK
- => Ans - (D)

SSC Stenographer Previous Papers (Latest Pattern)

Question 50

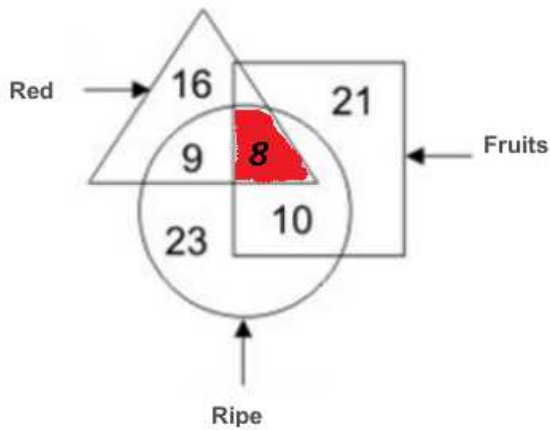
In the given figure, how many red fruits are ripe ?



- A 17
- B 8
- C 18
- D 27

Answer: B

Explanation:



Red fruits which are ripe = 8

=> Ans - (B)

SSC GD Constable Free Mock Test (Latest Pattern)

General Awareness

Instructions

For the following questions answer them individually

Question 51

Which one of the following is right about the nature of Indian economy?

- A Mixed economy
- B Socialist economy
- C Communist economy
- D Capitalist economy

Answer: A

SSC MTS Free Mock Test (Latest Pattern)

Question 52

Which of the following sector contributes highest to the national income of India?

- A Banking sector
- B Trade sector

C Manufacturing sector

D Agriculture sector

Answer: C

Question 53

Select the appropriate answer from the given options to fill the following sentence.
Market goods generally _____ by currency inflation.

A become expensive

B become cheaper

C first become expensive and later cheaper

D not available at all

Answer: D

Question 54

Which of the following minerals is abundant in the state of Kerala?

A Monazite

B Gold

C Iron ore

D Graphite

Answer: A

Current Affairs Questions & Answers (Download pdf)

Question 55

Which Act granted autonomy to the provinces in India?

A Indian Council Act 1909

B Government of India Act 1919

C Government of India Act 1935

D None of the option is correct.

Answer: C

Question 56

Which kind of justice has not been said in the Preamble of Indian Constitution?

A Democratic

B Social

C Economic

D Political

Answer: A

Question 57

How many fundamental duties are currently described in the Indian Constitution?

- A 9
- B 10
- C 11
- D 12

Answer: C

Daily & Monthly Current Affairs (Download pdf)

Question 58

The salary and allowances of important office bearers of India are mentioned in which Schedule of the Constitution?

- A First Schedule
- B Second Schedule
- C Third Schedule
- D Fourth Schedule

Answer: B

Question 59

Which place of Indus Valley Civilization was situated on the bank of Indus River?

- A Lothal
- B Mohenjodaro
- C Kalibanga
- D Harappa

Answer: B

Question 60

Which three Vedas are jointly called "Vedratri"?

- A Rig Veda, Yajurved, Atharva Veda
- B Rig Veda, Samaveda, Atharva Veda
- C Rigveda, Samaveda, Yajurveda
- D Yajurveda, Samveda, Atharva Veda

Answer: C

SSC Stenographer Important Questions (Download PDF)

Question 61

Who is considered the first Tirthankara of Jain Dharma?

- A Parshvanath
- B Mahavira Swami
- C Rishabhadev
- D Ajitnath

Answer: C

Question 62

Which Governor General was related to the abolition of Thuggee?

- A Lord Cornwallis
- B Lord William Bentinck
- C Lord Charles Metcalfe
- D Sir Henry Hardinge

Answer: B

Question 63

Which one of the following landscapes is not formed by the glacier?

- A Moraine
- B Meander
- C U-shaped Valley
- D Fiord

Answer: B

SSC Stenographer Mocks For Just RS. 117

Question 64

Which one of the followings is not an example of folded mountain?

- A Himalaya
- B Rocky
- C Aravali
- D Andes

Answer: C

Question 65

Which is the second largest planet in the solar system?

- A Saturn
- B Uranus
- C Earth
- D Mars

Answer: A

Question 66

Which port is located at the northern entrance to the Suez Canal?

- A Cairo
- B Port Said
- C Port Rotterdam
- D Port Alexandria

Answer: A

SSC Stenographer Free Videos (Youtube)

Question 67

Which of the following is studied under Phycology?

- A Flower
- B Orchid
- C Fungus
- D Algae

Answer: D

Question 68

Which of the following is not a root?

- A Potato
- B Radish
- C Carrot
- D Yam

Answer: A

Question 69

What is the botanical name of a wheat plant?

- A Oryza sativa
- B Triticum aestivum
- C Zea mays
- D Nelumbo Nucifera

Answer: B

SSC Stenographer Expected Cutoff

Question 70

Which of the following is not needed for photosynthesis?

- A Water
- B Sunlight
- C Chloroplast
- D Oxygen

Answer: D

Question 71

Who among the following scientists discovered the first free living cell?

- A Robert Hooke
- B Anton Von Leeuwenhoek
- C Purkinje
- D Robert Brown

Answer: B

Question 72

Which of the following crop is related to Tikka Disease?

- A Rice
- B Potato
- C Sugarcane
- D Groundnut

Answer: D

SSC Stenographer Syllabus PDF

Question 73

Dioptre is the SI Unit of which quantity?

- A Wavelength
- B Flame intensity
- C Power of lens
- D Magnetic power

Answer: C

Question 74

Which of the following statements is correct about mass and weight?

- A Mass is changeable
- B Weight is unchangeable
- C Mass is unchangeable
- D None of the option is correct.

Answer: C

Question 75

Acceleration in a body by an unbalanced force is _____.

- A proportional of force
- B inverse of force
- C remains independent of force effect
- D always remains zero

Answer: A

Daily Free Online GK tests

Question 76

Skating on the ice shows that the increase in pressure _____ the melting point of ice.

- A decreases
- B increases
- C first decreases and later increases
- D remains unchangeable with

Answer: A

Question 77

What is the full form of IBM?

- A International Business Machine
- B Indian Beta Machine

C Integral Business Machine

D Internal Beta Machine

Answer: B

Question 78

What is Michelangelo in the world of computers?

A A High Quality Designer Software

B A virus

C A type of circuit

D None of the option is correct.

Answer: B

SSC CHSL Previous Question papers (download pdf)

Question 79

What is called a substance when it is made from combination in a certain proportion of two or more elements?

A pure element

B compound

C pure mixture

D pure liquid

Answer: B

Question 80

Which of the following is a chargeless particle?

A Alpha particle

B Proton

C Electrone

D Neutrone

Answer: D

Question 81

Chemical nature of an element depends on which of the followings?

A On proton

B On charge

C On valence electron

D None of the option is correct.

Answer: C

SSC CPO Previous Question papers (download pdf)

Question 82

Radio activity is the characteristic of which of the following?

- A Nucleus
- B Electron
- C Proton
- D Neutron

Answer: A

Question 83

Which of the following is not a component of human-made environment?

- A Settlement
- B Land
- C Agriculture
- D Transport

Answer: B

Question 84

To maintain ecological balance, how much proportion of forest in India should be?

- A 20-23%
- B 25-28%
- C 31-34%
- D 42-45%

Answer: C

SSC GD Previous Question papers (download pdf)

Question 85

What is the main purpose of the "RUSA" scheme launched in 2013?

- A Providing finance to higher educational institutions of the states
- B Providing financial assistance for marriageable poor girls
- C Special arrangements for the treatment of old citizens
- D None of the option is correct.

Answer: A

Question 86

What is the prime objective of Prime Minister Ujjwala Yojna (PMUY)?

- A Electric lighting arrangement on rural roads
- B LPG connection to BPL families
- C Insure the BPL Family Head
- D None of the option is correct.

Answer: B

Question 87

Who is credited to travel around the earth first time through the sea route?

- A Bartholomew Diaz
- B Ferdinand Magellan
- C James Cook
- D Juan Sebastian Elcano

Answer: B

SSC MTS Previous Question papers (download pdf)

Question 88

Which of the following scientists is credited with the invention of cinema(Motion Picture)?

- A Wright Brothers
- B Lumiere Brothers
- C Michael Faraday
- D None of the option is correct.

Answer: B

Question 89

Tania Sachdev is related to which of the following sports?

- A Golf
- B Snooker
- C Chess
- D Boxing

Answer: C

Question 90

Who among of the following is author of the book "Idols"?

- A Ravi Shastri
- B Harsha Bhogle
- C Sunil Gavaskar
- D M.S. Dhoni

Answer: C

SSC CHSL Free Mock Test

Question 91

Which of the following has been called "Tota-e-Hind" i.e. Parrot of India?

- A Ziauddin Barani
- B Rahim Khan-e-Khana
- C Amir Khusrow
- D Malik Muhammad Jayasi

Answer: C

Question 92

Which of the following is a South Indian dance style?

- A Kathakali
- B Kathak
- C Odissi
- D Manipuri

Answer: A

Question 93

How much prize money is given for "Mahatma Gandhi Peace Prize"?

- A 2.5 million
- B 5 million
- C One crore
- D Two crore

Answer: C

SSC CPO Free Mock Test

Question 94

Nobel Prize is not given for which of the following subject ?

- A Mathematical
- B Medicine
- C Chemistry
- D Economics

Answer: A

Question 95

Who among the following is author of the book "Test of My Life"?

- A Yuvraj Singh
- B Mahendra Singh Dhoni
- C Gautam Gambhri
- D Virat Kohli

Answer: A

Question 96

Which among the following is not a famous writer of English?

- A Chetan Bhagat
- B Namvar Singh
- C Ruskin Bond
- D Anita Desai

Answer: B

SSC GD Free Mock Test

Question 97

Where is the headquarters of the international organization "BRICS" located?

- A Shanghai
- B New Delhi
- C Brasilia
- D Moscow

Answer: A

Question 98

The military exercise "Maitree 2016" was exercised between India and which of the following country?

- A China
- B Pakistan

C Thailand

D Russia

Answer: C

Question 99

Which of the following gem-stone is not produced on large scale in Myanmar?

A Rubies

B Sapphires

C Diamond

D Jade

Answer: C

SSC CGL Free Mock Test

Question 100

Who is the first woman President of Sri Lanka?

A Wimala Kannangara

B Leticia Rajapakse

C Sirimavo Bandaranaike

D Chandrika Kumaratunga

Answer: C

[Download SSC General Knowledge PDF](#)

English

Instructions

In the following question, some part of the sentence may have errors. Find out which part of the sentence has an error and select the appropriate option. If a sentence is free from error, select 'No Error'.

Question 101

You don't have to invest (a)/ on an fancy camera if you're (b)/ not a photography buff. (c)/ No Error (d)

A 1

B 2

C 3

D 4

Answer: B

[SSC GD 10 Mock Tests for Rs. 117](#)

Question 102

We accept unbelievably low rates for (a)/ sponsored articles; (b)/ a "something is better than nothing" kind of attitude. (c)/ No Error (d)

A 1

B 2

C 3

D 4

Answer: C

Question 103

For candidates with work-experience, interview (a)/ questions about their company test depth of their knowledge (b)/ and understandings of immediate environment. (c)/ No error (d)

A 1

B 2

C 3

D 4

Answer: C

Question 104

Agent Chitrangada will telegraphed a secret (a)/ code word to her boss as part (b)/ of a dubious mission. (c)/No Error (d)

A 1

B 2

C 3

D 4

Answer: A

SSC CHSL Previous Papers (DOWNLOAD PDF)

Question 105

You have too save the day by (a)/ cracking the code and (b)/ determining the code word. (c)/ No error (d)

A 1

B 2

C 3

D 4

Answer: A

Question 106

This short-term mentality, (a)/ most of the times, leads to undesired (b)/ loss and disappointment. (c)/ No error (d)

- A 1
- B 2
- C 3
- D 4

Answer: D

Question 107

Gear up of five days (a)/of non-stop shopping (b)/ and unlimited savings. (c)/ No Error (d)

- A 1
- B 2
- C 3
- D 4

Answer: A

SSC GD Constable Previous Papers

Question 108

It brings to you a basket of opportunities (a)/ that takes you to the positions of high (b)/ responsibilities at top corporates. (c)/ No Error (d)

- A 1
- B 2
- C 3
- D 4

Answer: D

Question 109

Hard as it is to believe, (a)/ she has no formal education also (b)/ training in content at all. (c)/ No Error (d)

- A 1
- B 2
- C 3
- D 4

Answer: B

Question 110

I also used to write scripts for hosting school (a)/ functions. Though, on that time I (b)/ hadn't identified this interest. (c)/ No error (d)

- A 1

- B 2
- C 3
- D 4

Answer: B

SSC Stenographer Previous Papers (DOWNLOAD PDF)

Instructions

In the following question, out of the four alternatives, select the alternative which will improve the bracketed part of the sentence. In case no improvement is needed, select "no improvement".

Question 111

Either she or her friends (have planning) to come here.

- A is planning
- B has planning
- C are planning
- D No improvement

Answer: C

Question 112

(I, you and she)are the best brains here.

- A You, she and I
- B I, she and you
- C She, you and I
- D No improvement

Answer: A

Question 113

Blood is thicker (than) water.

- A then
- B when
- C more than
- D No improvement

Answer: D

SSC CGL Previous Papers (DOWNLOAD PDF)

Question 114

She has worked (really hardly) and has no issues with fitness or her game.

- A so hardly
- B really hard
- C real hardly
- D No improvement

Answer: B

Question 115

You are requested (to be through) the safety tips and follow the same while using it.

- A to been over
- B to went throughout
- C to go through
- D No improvement

Answer: C

Question 116

We (are hope you) find the process extremely useful and convenient.

- A hope you
- B are in a hope
- C hoping
- D No improvement

Answer: A

SSC CHSL Free Mock Test (Latest Pattern)

Question 117

The government was planning but (I) not sure whether it will happen now.

- A I will not be
- B I am
- C won't I be
- D No improvement

Answer: B

Question 118

It (was a to be a sister company) of ABC Group of Companies.

- A is a concerned
- B was a to be twin sister

C is a sister concern

D No improvement

Answer: C

Question 119

The objective of the game is to be the first one to race from (start and end).

A start to end

B start an end

C start over end

D No improvement

Answer: A

SSC Stenographer Previous Papers (Latest Pattern)

Question 120

The player (who has throw) the highest number begins the game.

A who has throw

B who throws

C who had thrown

D No improvement

Answer: B

Instructions

In the following question, the sentence given with blank to be filled in with an appropriate word. Select the correct alternative out of the four and indicate it by selecting the appropriate option.

Question 121

_____ depends on what she says.

A Much

B More

C Any

D No more

Answer: A

Question 122

I have _____ milk to drink.

A most

B enough

C many

D none

Answer: B

SSC GD Constable Free Mock Test (Latest Pattern)

Question 123

There were trees on _____ side of the road.

A no

B any

C either

D every

Answer: C

Question 124

_____ of the land was cultivated.

A Two there

B Two three's

C Two's three

D Two third

Answer: D

Question 125

Kolkata is the _____ populous city in the world.

A more

B most

C much

D many

Answer: B

SSC MTS Free Mock Test (Latest Pattern)

Instructions

In the following question, out of the four given alternatives, select the one which best expresses the meaning of the given word.

Question 126

Creep

A Crawl

- B Cry
- C Stress
- D Run

Answer: A

Question 127

Natural

- A Skill
- B Uncommon
- C Pretended
- D Usual

Answer: D

Question 128

Decoy

- A Steal
- B Foil
- C Trap
- D Attempt

Answer: C

Current Affairs Questions & Answers (Download pdf)

Question 129

Entice

- A Beautiful
- B Allure
- C Miracle
- D Repel

Answer: B

Question 130

Pursuit

- A Retreat
- B Drive
- C Trail

D Dearth

Answer: C

Instructions

In the following question, out of the four given alternatives, select the one which is opposite in meaning of the given word.

Question 131

Valour

A Fear

B Heroism

C Bravery

D Endorse

Answer: A

Daily & Monthly Current Affairs (Download pdf)

Question 132

Sanguine

A Hopeful

B Confident

C Buoyant

D Depressed

Answer: D

Question 133

Solicit

A Entreat

B Answer

C Approach

D Accost

Answer: B

Question 134

Remorse

A Regret

B Lament

C Introspect

D None of the above

Answer: D

SSC Stenographer Important Questions (Download PDF)

Question 135

Aversion

A Indifferent

B Dislike

C Apathy

D Fondness

Answer: D

Instructions

In the following question, out of the four given alternatives, select the alternative which best expresses the meaning of the Idiom/Phrase.

Question 136

Look before you leap

A To take risk

B To keep waiting

C To think before doing

D To exercise influence

Answer: C

Question 137

Make a clean breast of it

A To take care of

B To disobey rule

C To follow the lead

D To confess completely

Answer: D

SSC Stenographer Mocks For Just RS. 117

Question 138

Put the saddle on right horse

A To blame the right party

- B To feel superior
- C To resist continuously
- D To go to ruin

Answer: A

Question 139

Strike while the iron is hot

- A To be contrary to
- B To prevent progress by influence
- C To make use of an opportunity
- D To be unsuccessful

Answer: C

Question 140

To end in smoke

- A To go alongside
- B To provoke to quarrel
- C To come to nothing
- D To compensate

Answer: C

SSC Stenographer Free Videos (Youtube)

Instructions

The question below consists of a set of labelled sentences. Out of the four options given, select the most logical order of the sentences to form a coherent paragraph.

Question 141

Stress is a

P: lot of people because

Q: of the day to day labour

R: major concern for a

- A PRQ
- B QRP
- C PQR
- D RPQ

Answer: D

Question 142

When the

P: our country was

Q: economically backward

R: Britishers left

A QPR

B RPQ

C PRQ

D QRP

Answer: B

Question 143

Global warming

P: is the steady and

Q: level of earth temperature

R: continuous rise in the

A PRQ

B RQP

C RPQ

D QPR

Answer: A

SSC Stenographer Expected Cutoff

Question 144

Education is

P: of acquiring

Q: skills and law knowledge

R: an important medium

A QRP

B RPQ

C PRQ

D RQP

Answer: B

Question 145

Good health is

P: happiness during his life time

Q: healthy man can enjoy great

R: important because a

A RQP

- B PRQ
- C QPR
- D RPQ

Answer: A

Instructions

A sentence has been given in Active/Passive Voice. Out of the four given alternatives, select the one which best expresses the same sentence in Passive/Active Voice.

Question 146

Nisha has rung the bell.

- A The bell has been rung by Nisha.
- B The bell was being rung by Nisha.
- C The bell was rung by Nisha.
- D The bell has been being rung by Nisha.

Answer: A

SSC Stenographer Syllabus PDF

Question 147

She likes people to call her Mam.

- A She likes to be called Mam by people.
- B She likes to be call Madam by people.
- C She likes people who call his, Madam.
- D To call her Madam is liked by people.

Answer: A

Question 148

The cable wire has been cut.

- A Someone has been cut the cable wire.
- B No one has cut the cable wire.
- C The cable wire has cut someone.
- D Someone has cut the cable wire.

Answer: A

Question 149

Will he tell her the truth?

- A Is the truth told to her by him?

- B The truth will be told to her by him.
- C Will the truth be told to her by him?
- D Will the truth be told her by him?

Answer: C

Question 150

They waste much time on trifles.

- A Much time was wasted on trifles.
- B Much time will be wasted on trifles.
- C Much time is wasted by them on trifles.
- D Much time is wasted on trifles.

Answer: C

Question 151

Rohan gave the beggar an old shirt.

- A An old shirt was given to Rohan by the beggar.
- B An old shirt was given to the beggar by Rohan.
- C The beggar was gave an old shirt by Rohan.
- D An old shirt was gave to the beggar by Rohan.

Answer: B

Question 152

They have made her a queen.

- A A queen has been made by her.
- B She was made a queen by them.
- C They have been made queens by her.
- D She has been made a queen by them.

Answer: D

SSC CHSL Previous Question papers (download pdf)

Question 153

Mr. Gupta asked him a question.

- A He was asked a question Mr. Gupta.
- B He was asked a question to Mr. Gupta.

- C He was asked a question by Mr. Gupta.
- D A question was being asked by Mr. Gupta.

Answer: C

Question 154

The teacher punished the students who had not done their homework.

- A The students who had not done their homework had been punished by their teacher.
- B The students were punished by their teacher who had not done their homework.
- C The students who had not done their homework were punished by the teacher.
- D The students who had not done their homework were being punished by the teacher.

Answer: C

Question 155

Who taught you Physics?

- A By whom Physics?
- B By whom were you taught Physics?
- C By whom was Physics taught to you?
- D By whom are you taught Physics?

Answer: B

SSC CPO Previous Question papers (download pdf)

Instructions

A sentence has been given in Direct/Indirect Speech. Out of the four given alternatives, select the one which best expresses the same sentence in Indirect/Direct Speech.

Question 156

I said to my friend, "Good Morning. Let us go for a walk today."

- A I told good morning to my friend, and asked to go for a walk that day.
- B I wished my friend good morning and proposed that we should go for a walk that day.
- C I wished my friend good morning and proposed that they should go for a walk that day.
- D I told good morning to my friend and suggested to go for a walk today.

Answer: B

Question 157

Akhil said to his friend, "Look out! There is a snake behind."

- A Akhil told her friend to look out as there was a snake behind him.
- B Akhil exclaimed to his friend with surprise that there was a snake behind him.

- C Seeing a snake behind him, Akhil asked his friend to look out.
- D Akhil warned his friend that there was a snake behind him.

Answer: D

Question 158

"Keshav made this mess. Let him clear it up", said his father.

- A Keshav's father said that Keshav had made the mess and proposed that the clear it up.
- B Keshav's father said that Keshav had made that mess and that he was to clear it.
- C Keshav's father said that Keshav had made the mess and suggested that he clear it.
- D Keshav's father said that Keshav had made the mess and that he should clear it.

Answer: B

SSC GD Previous Question papers (download pdf)

Question 159

The teacher said to Rakesh, "Congratulations! Wish you success in life."

- A The teacher congratulated Rakesh and wished him success in life.
- B The teacher wishes congratulation and a very success in life Rakesh.
- C The teacher said congratulation to Rakesh and wished him success in life.
- D The teacher congratulation Rakesh him success in life.

Answer: A

Question 160

Shreya said "You guys may go, I am busy."

- A Shreya said that she was busy and asked us to go.
- B Shreya was busy so she asked us to go.
- C Shreya said "You go I am busy".
- D Shreya being busy asked us to go.

Answer: A

Question 161

"Do you suppose you know better than your own mother?" his father jeered angrily.

- A His angry father jeered and asked if he supposed he knows better than his own mother.
- B His angry father jeered and asked him if he supposed he knew better than his own mother.
- C His angry father jeered and asked him if he supposed he knows better than his mother.
- D His angry father jeered and asked him did he supposed he knew better than his own mother.

Answer: B

SSC MTS Previous Question papers (download pdf)

Question 162

The mother said, "well done son, I am proud of you."

- A The mother appreciated her son saying that he had done well and that she was proud of him.
- B The mother told her son that she was proud of him as he had done well.
- C The mother said to her son that she was proud of him for doing very well.
- D The mother said her son had done well and that she was proud of him.

Answer: A

Question 163

He said "Let Parth come with us, mother. I'll take care of him."

- A He requested his mother to let Parth come with him as he will take care of him.
- B He informed his mother to let Parth come with her as he would take care of him.
- C He asked his mother to let Parth come with them as he would take care of him.
- D He told to his mother let Parth come with us as he would take care of him.

Answer: C

Question 164

"I've worked for you for five years," man said to them, "What about giving me a raise?"

- A The man said that he has worked for him for five year. He proposed that he may be given a raise.
- B The man said that he had worked for him for five years. He advised him to give him a raise.
- C The man said that he had worked for him for five years. He suggested that he should give him a raise.
- D The man said that he had worked for them for five years and asked about giving him a raise.

Answer: D

SSC CHSL Free Mock Test

Question 165

I told Reema, "I've been ill, but I'm better now, thanks for asking."

- A I told Reema that I had been ill, but was better now, and thanks to her for asking.
- B I told Reema that I have ill, but was better now, and said thanks her for asking.
- C I told Reema that I have been ill, but am better then, and thanked her for asking.
- D I told Reema that I had been ill, but was better now, and thanked her for asking.

Answer: D

Instructions

Read the given passage carefully and select the best answer to each question out of the four given alternatives.

Dreams are both internal and external. Since the ego or the director is absent during sleep the neural pathways have a run of their own. Thus the day long experiences or the existing memories are the driving force for the internal dreams. However when there is tremendous thinking activity or Sanyam on a particular thought during waking time, it leads sometimes to solution dreams. Various great inventions and discoveries of the world have come through such dreaming process. Why we do not remember dreams has been researched by lots of brain scientists and there are many reasons - part of it is to do with creating long term memory. Nevertheless it is the dreams that we remember that make life interesting. There are many theories of dreams but we still do not know why we dream and why most of the time we have random and strange dreams. A possible answer may lie in how synapses behave during sleep. The more we dream during the night the less restful is the sleep. A really restful sleep is deep sleep without dreams. This helps in the flushing out of the toxic material from major part of the brain. Besides removing the toxins from the brain the increase of synaptic cleft may also help in explaining the dreaming process.

Question 166

What are dreams?

- A Neural pathways
- B Necessary to remove the clutter from the brain
- C Both internal and external
- D Not possible in deep sleep

Answer: C

Question 167

What does the synaptic cleft helps in?

- A Explaining the dreaming process
- B Removing the toxins from one's eyes
- C Making your sleep less restful
- D Making you forget your dreams

Answer: A

SSC CPO Free Mock Test

Question 168

According to the author, why are the dreams that we do not remember are not important?

- A Let the bygones be the bygones
- B It's the dreams that we remember that make our life interesting
- C It takes a lot of time in trying to remember them
- D It is important to keep Snyam on ourselves

Answer: B

Question 169

What is a really restful sleep?

- A A really restful sleep is deep sleep without dreams.

- B A really restful sleep is the one in which all the toxins of our brains are increase flushed out.
- C A really restful sleep is the one in which synaptic cleft is increased.
- D A really restful sleep is the one in which we dream of our past life.

Answer: A

Question 170

When do neural pathways have a run of their own?

- A During Sanyam
- B During sleep
- C During intervals
- D During the process of waking up

Answer: B

SSC GD Free Mock Test

Instructions

Read the given passage carefully and select the best answer to each question out of the four given alternatives.

It was her sister Josephine who told her, in broken sentences; veiled hints that revealed in half concealing. Her husband's friend Richards was there, too, near her. It was he who had been in the newspaper office when intelligence of the railroad disaster was received, with Brently Mallard's name leading the list of "killed." He had only taken the time to assure himself of its truth by a second telegram, and had hastened to forestall any less careful, less tender friend in bearing the sad message. She did not hear the story as many women have heard the same, with a paralyzed inability to accept its significance. She wept at once, with sudden, wild abandonment, in her sister's arms. When the storm of grief had spent itself she went away to her room alone. She would have no one follow her. There stood, facing the open window, a comfortable, roomy armchair. Into this she sank, pressed down by a physical exhaustion that haunted her body and seemed to reach into her soul. She could see in the open square before her house the tops of trees that were all aquiver with the new spring life. The delicious breath of rain was in the air. In the street below a peddler was crying his wares. The notes of a distant song which someone was singing reached her faintly, and countless sparrows were twittering in the eaves. There were patches of blue sky showing here and there through the clouds that had met and piled one above the other in the west facing her window.

Question 171

How did Josephine spoke to Mrs. Mallard at first?

- A Half Concealing
- B Disastrously
- C With great care.
- D In broken sentences.

Answer: D

Question 172

Who was killed?

- A Richard
- B Josephine

C Brently Mallard

D Mrs. Mallard

Answer: C

Question 173

Why would Mrs. Mallard have no one follow her?

A She wanted to be alone in this moment of grief.

B No one dared to enter her room.

C She wanted to secretly make merry and that is why refused visitors.

D Something stopped everyone from entering her room.

Answer: A

SSC CGL Free Mock Test

Question 174

What all she could see from her window?

A Top of trees.

B Breathe of rain in the air.

C Notes of a distant song.

D All of these

Answer: A

Question 175

How did Mrs. Mallard react to the news?

A She cried inconsolably.

B She cried for some time and then withdrew for her room.

C She heard it with a paralyzed inability to accept its significance.

D She started searching for her soul.

Answer: B

Instructions

Read the given passage carefully and select the best answer to each question out of the four given alternatives.

She dressed plainly because she had never been able to afford anything better, but she was as unhappy as if she had once been wealthy. Women don't belong to a caste or class; their beauty, grace, and natural charm take the place of birth and family. Natural delicacy, instinctive elegance and a quick wit determine their place in society, and make the daughters of commoners the equals of the very finest ladies. She suffered endlessly, feeling she was entitled to all the delicacies and luxuries of life. She suffered because of the poorness of her house as she looked at the dirty walls, the worn-out chairs and the ugly curtains. All these things that another woman of her class would not even have noticed tormented her and made her resentful. The sight of the little Brenton girl who did her housework filled her with terrible regrets and hopeless fantasies. She dreamed of silent antechambers hung with Oriental tapestries, lit from above by torches in bronze holders, while two tall footmen in knee-length breeches napped in huge armchairs, sleepy from the stove's oppressive warmth. She dreamed of vast living rooms furnished in rare old silks, elegant furniture loaded with priceless ornaments, and

inviting smaller rooms, perfumed, made for afternoon chats with close friends - famous, sought after men, who all women envy and desire.

Question 176

Why did she dress plainly?

- A She was as unhappy as if she had once been wealthy.
- B She has suffered endlessly.
- C She had never been able to afford anything better.
- D She like being plain, that was her style.

Answer: C

Download SSC General Knowledge PDF

Question 177

Why did 'she' suffer endlessly?

- A Because she was entitled to all the delicacies.
- B Because of the poorness of her house.
- C Because she didn't belong to the caste of other women.
- D Because she notices things that no other women would ever notice.

Answer: B

Question 178

What did she NOT dream of?

- A Men, whom all women want to marry.
- B Vast rooms furnished in rare old silks.
- C Elegant furniture loaded with priceless ornaments.
- D Inviting smaller rooms, perfumed, made for afternoon chats.

Answer: A

Question 179

What filled her with terrible regret and hopeless fantasies?

- A A look at the dirty walls, the worn-out chairs and the ugly curtains.
- B The sight of the little Brenton girl who did her housework.
- C Two tall footmen in knee-length breeches napped in huge armchairs.
- D Their beauty, grace, and natural charm take the place of birth and family.

Answer: B

SSC GD 10 Mock Tests for Rs. 117

Question 180

According to the passage, which statement is TRUE?

- A Women don't belong to a caste or class.
- B Daughters of commoners are the equals of the very finest ladies.
- C Beauty, grace, and natural charm come from birth and family.
- D Natural delicacy, instinctive elegance and a quick wit has no place.

Answer: A

Instructions

Following passage some of the words have been left out. Read the passage carefully and select the correct answer for the given blank out of the four alternatives.

India is a very _____ country known for its cultural heritage, traditions, civilization, religion and geographical features from the _____ time. On the other hand, it is also popular as a _____ chauvinistic nation. Today, women in India are given first priority however it was not the same always. They were _____ treated in the family and society. They were limited only to the household _____ or to fulfill the responsibilities of home and family members. They were kept totally unaware of their rights and own development. People of India used to call this country as "Bharat-Mata" however never realized the true meaning of it. Bharat-Mata means a _____ of every Indian whom we have to _____ and care for always. Women constitute _____ power of the country so in order to make this _____ a fully powerful country, women empowerment is very _____.

Question 181

India is a very _____ country known for its cultural heritage,

- A harsh
- B crucial
- C famous
- D significant

Answer: C

Question 182

And geographical features from the _____ time.

- A ancient
- B real
- C modern
- D imaginative

Answer: A

SSC CHSL Previous Papers (DOWNLOAD PDF)

Question 183

As a _____ chauvinistic nation.

- A female
- B child
- C adult
- D male

Answer: D

Question 184

The other hand they were _____ treated in the family

- A highly
- B badly
- C largely
- D gradually

Answer: B

Question 185

They were limited only for the household _____ or understand

- A situation
- B Innovation
- C chores
- D construction

Answer: C

SSC GD Constable Previous Papers

Question 186

Bharat-Mata means a _____ of every Indian whom

- A father
- B daughter
- C sister
- D mother

Answer: D

Question 187

We have to _____ and care always.

- A save
- B kill

C destroy

D revive

Answer: A

Question 188

Women constitute _____ power of the country

A half

B no

C none

D nil

Answer: A

SSC Stenographer Previous Papers (DOWNLOAD PDF)

Question 189

The country so in order to make this _____ a fully

A state

B continent

C country

D city

Answer: C

Question 190

Powerful country, women empowerment is very _____.

A rare

B disturbing

C limited

D necessary

Answer: D

Instructions

In the following passage some of the words have been left out. Read the passage carefully and select the correct answer for the given blank out of the four alternatives.

Racism is something we've all _____. Many people _____ to believe that race isn't a _____ category, but an artificial classification of people with no scientifically variable facts. In other words, the _____ we make between races has nothing to do with genetic characteristics. Race was created _____, primarily by how people _____ ideas and faces we are not quite used to. The definition of race all depends on where and when the word is being used. In U.S. history, the meaning of the label "white" has changed _____ time, eventually adding groups like the Italians, Irish and Jews. Other groups, mainly African, Latino, American Indian, Pacific Islander, and Asian descendants, have found the path for worldwide social _____ much more _____. The irregular border of ethnicities touch educational and economic opportunity, political representation, as well as income, health and social mobility of people of _____.

Question 191

Racism is something we've all _____.

- A witnessed
- B through
- C realized
- D accepted

Answer: A

SSC CGL Previous Papers (DOWNLOAD PDF)

Question 192

- A learn
- B fail
- C win
- D lose

Answer: B

Question 193

That race isn't a _____ category

- A scientifically
- B emotional
- C biological
- D practical

Answer: C

Question 194

The _____ we make between races has nothing to do with

- A similarity
- B recognition
- C choices
- D distinction

Answer: D

SSC CHSL Free Mock Test (Latest Pattern)

Question 195

Race was created _____, primarily

- A socially
- B economically
- C politically
- D Situationally

Answer: A

Question 196

People _____ ideas and faces we

- A believe
- B perceive
- C deceive
- D receive

Answer: B

Question 197

Changed _____ time, eventually adding groups

- A on
- B in
- C over
- D of

Answer: C

SSC Stenographer Previous Papers (Latest Pattern)

Question 198

Found the path for worldwide social _____ much

- A rejection
- B diversification
- C status
- D acceptance

Answer: D

Question 199

More _____. The irregular border of ethnicities touch

- A difficult
- B significant

C insignificant

D useless

Answer: A

Question 200

Health and social mobility of people of _____.

A gender

B color

C caste

D creed

Answer: B

SSC GD Constable Free Mock Test (Latest Pattern)

Daily Free Online GK tests

SSC CHSL Previous Question papers (download pdf)

SSC CPO Previous Question papers (download pdf)

SSC GD Previous Question papers (download pdf)

SSC MTS Previous Question papers (download pdf)

SSC CHSL Free Mock Test

SSC CPO Free Mock Test

SSC GD Free Mock Test

SSC CGL Free Mock Test

Download SSC General Knowledge PDF

SSC GD 10 Mock Tests for Rs. 117

SSC CHSL Previous Papers (DOWNLOAD PDF)

[SSC GD Constable Previous Papers](#)

[SSC Stenographer Previous Papers \(DOWNLOAD PDF\)](#)

[SSC CGL Previous Papers \(DOWNLOAD PDF\)](#)

[SSC CHSL Free Mock Test \(Latest Pattern\)](#)

[SSC Stenographer Previous Papers \(Latest Pattern\)](#)

[SSC GD Constable Free Mock Test \(Latest Pattern\)](#)

[SSC MTS Free Mock Test \(Latest Pattern\)](#)

[Current Affairs Questions & Answers \(Download pdf\)](#)

[Daily & Monthly Current Affairs \(Download pdf\)](#)

[SSC Stenographer Important Questions \(Download PDF\)](#)

[SSC Stenographer Mocks For Just RS. 117](#)

[SSC Stenographer Free Videos \(Youtube\)](#)

[SSC Stenographer Expected Cutoff](#)

[SSC Stenographer Syllabus PDF](#)