



## SSC Stenographer 14 September 2017 Morning Shift

All rights reserved. No part of this publication may be reproduced, distributed, or transmitted in any form or by any means, electronic, mechanical, photocopying, recording or otherwise, or stored in any retrieval system of any nature without the permission of cracku.in, application for which shall be made to [support@cracku.in](mailto:support@cracku.in)

## Reasoning

### Instructions

In the following question, select the missing number from the given series.

### Question 1

3, 7, 13, 27, 53, ?

- A 107
- B 111
- C 109
- D 105

**Answer:** A

### Explanation:

The pattern followed is :

$$3 \times 2 + 1 = 7$$

$$7 \times 2 - 1 = 13$$

$$13 \times 2 + 1 = 27$$

$$27 \times 2 - 1 = 53$$

$$53 \times 2 + 1 = \mathbf{107}$$

=> Ans - (A)

**Daily Free Online GK tests**

### Question 2

35, 50, 63, 82, ?, 122

- A 101
- B 99
- C 100
- D None of these

**Answer:** B

### Explanation:

The pattern followed is :

$$(6)^2 - 1 = 35$$

$$(7)^2 + 1 = 50$$

$$(8)^2 - 1 = 63$$

$$(9)^2 + 1 = 82$$

$$(10)^2 - 1 = \mathbf{99}$$

$$(11)^2 + 1 = 122$$

=> Ans - (B)

**Question 3**

14, 22, 37, 61, 96, ?

- A 152
- B 132
- C 144
- D 162

**Answer:** C

**Explanation:**

The pattern followed is :

$$14 + (3)^2 - 1 = 22$$

$$22 + (4)^2 - 1 = 37$$

$$37 + (5)^2 - 1 = 61$$

$$61 + (6)^2 - 1 = 96$$

$$96 + (7)^2 - 1 = 144$$

=> Ans - (C)

**Question 4**

263, 277, 290, 302, 313, ?

- A 323
- B 329
- C 321
- D 331

**Answer:** A

**Explanation:**

The pattern followed is :

$$263 + 14 = 277$$

$$277 + 13 = 290$$

$$290 + 12 = 302$$

$$302 + 11 = 313$$

$$313 + 10 = 323$$

=> Ans - (A)

**SSC CHSL Previous Question papers (download pdf)**

**Instructions**

A series is given with one term missing. Select the correct alternative from the given ones that will complete the series.

**Question 5**

ABC, EXG, ITK, ?

- A MPO

- B NQL
- C MPL
- D NQO

Answer: A

**Explanation:**

Series : ABC, EXG, ITK, ?

The pattern followed in each letter of the terms is :

1st letter : A (+4 letters) = E (+4 letters) = I (+4 letters) = M

2nd letter : B (-4 letters) = X (-4 letters) = T (-4 letters) = P

3rd letter : C (+4 letters) = G (+4 letters) = K (+4 letters) = O

Thus, missing term = **MPO**

=> Ans - (A)

**Question 6**

**AN, ET, IZ, MF, ?**

- A AL
- B QL
- C AM
- D QM

Answer: B

**Explanation:**

Series : AN, ET, IZ, MF, ?

The pattern followed in each letter of the terms is :

1st letter : A (+4 letters) = E (+4 letters) = I (+4 letters) = M (+4 letters) = Q

2nd letter : N (+6 letters) = T (+6 letters) = Z (+6 letters) = F (+6 letters) = L

Thus, missing term = **QL**

=> Ans - (B)

**Question 7**

**ST, TV, VY, ?, CH**

- A VC
- B YH
- C YC
- D YZ

Answer: C

**Explanation:**

Series : ST, TV, VY, ?, CH

The pattern followed in each letter of the terms is :

1st letter : S (+1 letter) = T (+2 letters) = V (+3 letters) = Y (+4 letters) = C

2nd letter : T (+2 letters) = V (+3 letters) = Y (+4 letters) = C (+5 letters) = H

Thus, missing term = **YC**

=> Ans - (C)

## SSC CPO Previous Question papers (download pdf)

### Instructions

For the following questions answer them individually

### Question 8

Which word will appear third when arranged in order of dictionary?

1. Crumble
2. Crop
3. Croatia
4. Crow
5. Crown

- A Crow  
B Crown  
C Crop  
D Croatia

**Answer: A**

### Explanation:

As per the order of dictionary :

= Croatia -> Crop -> *Crow* -> Crown -> Crumble

Thus, *Crow* will appear 3rd.

=> Ans - (A)

### Question 9

Arrange the given words in the sequence in which they occur in the dictionary.

1. Home
2. House
3. Houston
4. Honor
5. Horror

- A 15432  
B 14523  
C 14532  
D 15423

**Answer: B**

### Explanation:

As per the order of dictionary :

= Home -> Honor -> Horror -> House -> Houston

≡ 14523

=> Ans - (B)

**Question 10**

Which word will appear second when arranged in order of dictionary?

- A Russia
- B Rusted
- C Rumble
- D Royal

**Answer:** C

**Explanation:**

As per the order of dictionary :

= Royal -> Rumble -> Russia -> Rusted

Thus, *Rumble* will appear 2nd.

=> Ans - (C)

**SSC GD Previous Question papers (download pdf)**

**Question 11**

Arrange the given words in the sequence in which they occur in the dictionary.

1. Range
2. Radar
3. Race
4. Rack
5. Rant

- A 34215
- B 34251
- C 32415
- D 32451

**Answer:** A

**Explanation:**

As per the order of dictionary :

= Race -> Rack -> Radar -> Range -> Rant

≡ 34215

=> Ans - (A)

**Question 12**

In the following question, select the odd number pair from the given alternatives.

- A 138 - 12
- B 237 - 11
- C 438 - 15
- D 961 - 16

**Answer:** B

**Explanation:**

The pattern followed is :

$$1 + 3 + 8 = 12$$

$$2 + 3 + 7 = 12 \neq 11$$

$$4 + 3 + 8 = 15$$

$$9 + 6 + 1 = 16$$

=> Ans - (B)

**Question 13**

In the following question, select the odd number from the given alternatives.

A 41

B 97

C 63

D 59

**Answer: C**

**Explanation:**

Apart from 63, all are prime numbers, hence it is the odd one out.

=> Ans - (C)

**SSC MTS Previous Question papers (download pdf)**

**Instructions**

In the following question, select the odd letters from the given alternatives.

**Question 14**

A AD

B VY

C MQ

D IL

**Answer: C**

**Explanation:**

(A) : A (+3 letters) = D

(B) : V (+3 letters) = Y

(C) : M (+4 letters) = Q

(D) : I (+3 letters) = L

=> Ans - (C)

**Question 15**

A CY

B NJ

C RN

D SN

**Answer: D**

**Explanation:**

(A) : C (-4 letters) = Y

(B) : N (-4 letters) = J

(C) : R (-4 letters) = N

(D) : S (-5 letters) = N

=> Ans - (D)

**Instructions**

In the following question, select the odd word pair from the given alternatives.

**Question 16**

A Car - Vehicle

B Potato - Vegetable

C Fruit - Grapes

D Square - Shape

**Answer: C**

**Explanation:**

The first comes under the category of second. Car is a vehicle, potato is a vegetable and square is a shape, but fruits are not grapes, vice-versa is true, hence it is the odd one out.

=> Ans - (C)

## SSC CHSL Free Mock Test

**Question 17**

A Organs - Body

B Rainbow - Colours

C Book - Pages

D Tyre - Rubber

**Answer: A**

**Explanation:**

The second is part of the first, but in the first option organs are part of the body, vice-versa is not true, hence it is the odd one out.

=> Ans - (A)

**Instructions**

For the following questions answer them individually

**Question 18**

In the following question, select the odd word from the given alternatives.

A Red

B Green



C Yellow

D Dull

**Answer: D**

**Explanation:**

Red, green and yellow are colours while dull is an adjective, hence it is the odd one out.

=> Ans - (D)

**Instructions**

In the following question, select the related number from the given alternatives.

**Question 19**

**431 : 12 :: 345 : ?**

A 12

B 60

C 45

D 105

**Answer: B**

**Explanation:**

Expression =  $431 : 12 :: 345 : ?$

The pattern followed is that the second number is the product of digits of first number.

Eg :-  $4 \times 3 \times 1 = 12$

Similarly,  $3 \times 4 \times 5 = 60$

=> Ans - (B)

## SSC CPO Free Mock Test

**Question 20**

**105 : 11025 :: 109 : ?**

A 11881

B 18118

C 18181

D 11818

**Answer: A**

**Explanation:**

Expression =  $105 : 11025 :: 109 : ?$

The pattern followed is =  $x : x^2$

Eg :-  $105 : (105)^2 = 105 : 11025$

Similarly,  $(109)^2 = 11881$

=> Ans - (A)

**Question 21**

12 : 1726 :: 8 : ?

- A 624
- B 510
- C 576
- D 448

**Answer:** B

**Explanation:**

Expression = 12 : 1726 :: 8 : ?

The pattern followed is =  $x : x^3 - 2$

Eg :- 12 :  $(12)^3 - 2 = 12 : 1726$

Similarly,  $(8)^3 - 2 = 512 - 2 = 510$

=> Ans - (B)

**Instructions**

For the following questions answer them individually

**Question 22**

In the following question, select the related letter from the given alternatives.

A : F :: N : ?

- A T
- B S
- C U
- D R

**Answer:** B

**Explanation:**

Expression = A : F :: N : ?

The pattern followed is :

A (+5 letters) = F

=> N (+5 letters) = S

=> Ans - (B)

**SSC GD Free Mock Test**

**Instructions**

In the following question, select the related letters from the given alternatives.

**Question 23**

MD : NZ :: IK : ?

- A JG
- B SH

C JH

D SG

**Answer: A**

**Explanation:**

Expression = MD : NZ :: IK : ?

The pattern followed is :

M	D
(+1)	(-4)
N	Z

Similarly, for IK :

I	K
(+1)	(-4)
J	G

=> Ans - (A)

**Question 24**

**ABC : EXI :: NOS : ?**

A SJU

B RKY

C TKV

D TJV

**Answer: B**

**Explanation:**

Expression = ABC : EXI :: NOS : ?

The pattern followed is :

A	B	C
(+4)	(-4)	(+6)
E	X	I

Similarly, for NOS :

N	O	S
(+4)	(-4)	(+6)
R	K	Y

=> Ans - (B)

**Instructions**

In the following question, select the related word from the given alternatives.

**Question 25**

**Close : Open :: Ascend : ?**

A Bottom

B Move

C Descend

D Walk

**Answer:** C

**Explanation:**

Close and open are antonyms, similarly opposite of ascend is *descend*.

=> Ans - (C)

## SSC CGL Free Mock Test

**Question 26**

**Soil : Earth :: Clouds : ?**

A Sky

B Rain

C Black

D Thunder

**Answer:** A

**Explanation:**

Soil is found on earth, similarly clouds are present in sky.

=> Ans - (A)

**Instructions**

For the following questions answer them individually

**Question 27**

**In the following question, select the related word pair from the given alternatives.**

**Rose : Flower :: ? : ?**

A Road : Land

B Mustard : Yellow

C Garden : Plants

D Banyan : Tree

**Answer:** D

**Explanation:**

Expression = Rose : Flower :: ? : ?

The first comes under the category of second, rose is a flower, similarly banyan is a tree.

=> Ans - (D)

**Question 28**

**If  $14 \# 13 = 9$  and  $27 \# 36 = 18$ , then  $46 \# 31 = ?$**

A 11

B 14

C 17

D 18

**Answer: B**

**Explanation:**

The number on the right is the sum of digits of the two numbers.

Eg :-  $14 \# 13 = 1 + 4 + 1 + 3 = 9$

and  $27 \# 36 = 2 + 7 + 3 + 6 = 18$

Similarly,  $46 \# 31 = 4 + 6 + 3 + 1 = 14$

=> Ans - (B)

## Download SSC General Knowledge PDF

**Question 29**

By interchanging which two signs the equation will be correct?

$$19 + 36 \times 12 \div 4 - 26 = 5$$

A + and -

B  $\times$  and  $\div$

C  $\div$  and -

D + and  $\times$

**Answer: B**

**Explanation:**

Expression :  $19 + 36 \times 12 \div 4 - 26 = 5$

(A) : + and -

$$\equiv 19 - 36 \times 12 \div 4 + 26 = 5$$

$$\text{L.H.S.} = 19 - (36 \times 3) + 26 = 19 - 108 + 26 = -63 \neq \text{R.H.S.}$$

(B) :  $\times$  and  $\div$

$$\equiv 19 + 36 \div 12 \times 4 - 26 = 5$$

$$\text{L.H.S.} = 19 + (3 \times 4) - 26 = 19 + 12 - 26 = 5 = \text{R.H.S.}$$

=> Ans - (B)

**Instructions**

In the following question, select the word which cannot be formed using the letters of the given word.

**Question 30**

**ENTERTAINMENT**

A TERMINATE

B TERMINAL

C RETAIN

D RETINA

**Answer: B**

**Explanation:**

The word ENTERTAINMENT does not contain any 'L', and thus the word 'Terminal' cannot be formed.

=> Ans - (B)

**Question 31**

**UNNECESSARILY**

- A RAINY
- B CRANE
- C LUNAR
- D CREATE

**Answer: D**

**Explanation:**

The word UNNECESSARILY does not contain any 'T', and thus the word 'Create' cannot be formed.

=> Ans - (D)

**SSC GD 10 Mock Tests for Rs. 117**

**Instructions**

In the following question below are given some statements followed by some conclusions. Taking the given statements to be true even if they seem to be at variance from commonly known facts, read all the conclusions and then decide which of the given conclusion logically follows the given statements.

Statements:

**Question 32**

- I. All red are pen.
- II. No pen is white.

**Conclusions:**

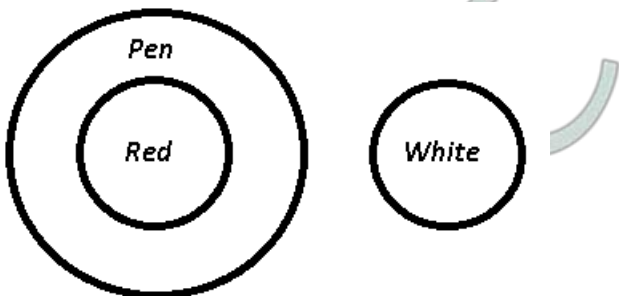
- I. No white is pen.
- II. No red is white.
- III. All pens are red.

- A Only I and III
- B Only I and II
- C Only II and III
- D All conclusions follow.

**Answer: B**

**Explanation:**

The venn diagram for above statements is :



Conclusions:

- I. No white is pen = true
- II. No red is white = true
- III. All pens are red = false

Thus, only I and II follow.

=> Ans - (B)

**Question 33**

**I. Some red are blue.**

**II. Some blue are plates.**

**Conclusions:**

**I. Some red are plates.**

**II. Some plates are red.**

**III. Some plates are blue.**

**A** Only I and II

**B** Only II and III

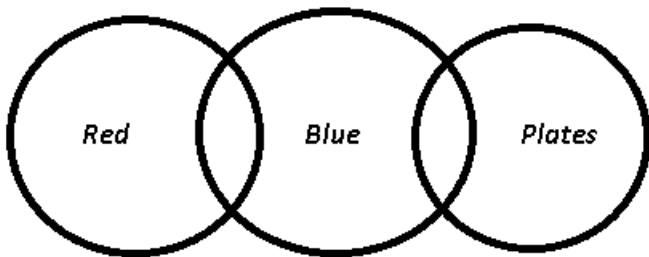
**C** Only III

**D** No conclusion follows.

**Answer: C**

**Explanation:**

The venn diagram for above statements is :



**Conclusions:**

**I. Some red are plates = false**

**II. Some plates are red = false**

**III. Some plates are blue = true**

Thus, only III follows.

=> Ans - (C)

**Instructions**

For the following questions answer them individually

**Question 34**

In a certain code language, "STRAIGHT" is written as "VQUXLDKQ" and "BLAMED" is written as "EIDJHA". How is "ROSTER" written in that code language?

**A** ULVQHO

**B** VLUQHN

**C** UMVPHN

**D** UMVPHO

**Answer: A**

**Explanation:**

"STRAIGHT" is written as "VQUXLDKQ"

The pattern followed is :

S	T	R	A	I	G	H	T
(+3)	(-3)	(+3)	(-3)	(+3)	(-3)	(+3)	(-3)
V	Q	U	X	L	D	K	Q

Also, BLAMED : EIDJHA

B	L	A	M	E	D
(+3)	(-3)	(+3)	(-3)	(+3)	(-3)
E	I	D	J	H	A

Similarly, for ROSTER :

R	O	S	T	E	R
(+3)	(-3)	(+3)	(-3)	(+3)	(-3)
U	L	V	Q	H	O

=> Ans - (A)

## SSC CHSL Previous Papers (DOWNLOAD PDF)

### Question 35

In a certain code language, "QUESTION" is written as "JFVHGRLM" and "ANSWER" is written as "ZMHDVI". How is "PROBLEM" written in that code language?

- A JHKYOVN
- B KIKXOVN
- C JHKXOUM
- D KILYOVN

Answer: D

#### Explanation:

"QUESTION" is written as "JFVHGRLM"

The pattern followed is that alphabets with the corresponding position from reverse end are coded together.

A	B	C	D	E	F	G	H	I	J	K	L	M	N	O	P	Q	R	S	T	U	V	W	X	Y	Z
↓	↓	...																					...	↓	
Z	Y	X	W	V	U	T	S	R	Q	P	O	N	M	L	K	J	I	H	G	F	E	D	C	B	A

Eg :- A -> Z, N -> M and "ANSWER" is written as "ZMHDVI"

Similarly, PROBLEM : KILYOVN

=> Ans - (D)

### Question 36

In the following question, Select the number which can be placed at the sign of question mark (?) from the given alternatives.

A	D	G
K	N	Q
U	X	?

- A Z
- B A
- C B



D Y

Answer: B

**Explanation:**

The pattern followed is :

$$A (+3 \text{ letters}) = D (+3 \text{ letters}) = G$$

$$K (+3 \text{ letters}) = N (+3 \text{ letters}) = Q$$

$$U (+3 \text{ letters}) = X (+3 \text{ letters}) = A$$

=> Ans - (B)

**Question 37**

In the following question, Select the number which can be placed at the sign of question mark (?) from the given alternatives.

4	5	8
3	12	?
5	13	17

A 15

B 12

C 13

D 9

Answer: A

**Explanation:**

The pattern followed is that in each column :

$$(4)^2 + (3)^2 = 16 + 9 = 25 = (5)^2$$

$$(5)^2 + (12)^2 = 25 + 144 = 169 = (13)^2$$

$$(8)^2 + (x)^2 = (17)^2$$

$$\Rightarrow x^2 = 289 - 64 = 225$$

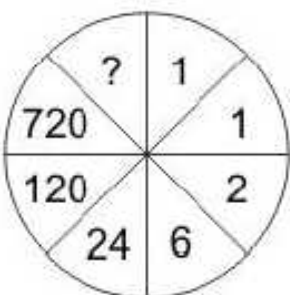
$$\Rightarrow x = \sqrt{225} = 15$$

=> Ans - (A)

## SSC GD Constable Previous Papers

**Question 38**

In the following question, Select the number which can be placed at the sign of question mark (?) from the given alternatives.



A 1000

B 5760

C 4320

D 5040

Answer: D

**Explanation:**

Starting from 1 and moving in clockwise direction, consecutive natural numbers are multiplied.

$$1 \times 1 = 1$$

$$1 \times 2 = 2$$

$$2 \times 3 = 6$$

$$6 \times 4 = 24$$

$$24 \times 5 = 120$$

$$120 \times 6 = 720$$

$$720 \times 7 = 5040$$

=> Ans - (D)

**Question 39**

In the following question, Select the number which can be placed at the sign of question mark (?) from the given alternatives.

4	12
120	24

?	24
240	48

6	18
180	36

A 6

B 8

C 4

D 12

Answer: B

**Explanation:**

The pattern followed is that starting from the top left and moving clockwise, the numbers are of the form =  $a, 3a, 6a, 30a$

Eg :-  $(4), (3 \times 4), (6 \times 4), (30 \times 4) = 4, 12, 24, 120$

and  $(6), (3 \times 6), (6 \times 6), (30 \times 6) = 6, 18, 36, 180$

Similarly,  $(8), (3 \times 8), (6 \times 8), (30 \times 8) = 8, 24, 48, 240$

=> Ans - (B)

**Question 40**

Aman's rank is 10 th from top and 12 th from bottom in a row of people. How many people are there in the row?

A 21

B 22

C 15

D 18

Answer: A

**Explanation:**

Aman's rank from top = 10th

Aman's rank from bottom = 12th

=> Total number of people =  $(10 + 12) - 1 = 22 - 1 = 21$

=> Ans - (A)

## SSC Stenographer Previous Papers (DOWNLOAD PDF)

**Question 41**

Ratio of present ages of A and B is 4 : 5. After 5 years age of B will be 35 years. What is the present age (in years) of A?

A 24

B 29

C 26

D 31

**Answer: A**

**Explanation:**

Let A's present age =  $4x$  years and B's present age =  $5x$  years -----(i)

Age of B after 5 years = 35 years

=> B's present age =  $35 - 5 = 30$  years

From equations (i) and (ii), =>  $5x = 30$

=>  $x = \frac{30}{5} = 6$

∴ A's present age =  $4 \times 6 = 24$  years

=> Ans - (A)

**Question 42**

A is father of B. B is daughter of C. D is brother of B. N is sister of C. How is B related to N?

A Daughter

B Niece

C Mother

D Sister

**Answer: B**

**Explanation:**

A is father of B and B is daughter of C.

=> A is husband of C, and B (female) is their daughter.

D is brother of B, => D (male) is son of A (male) and C (female).

Also, N is sister of C.

Thus, B is niece of N.

=> Ans - (B)

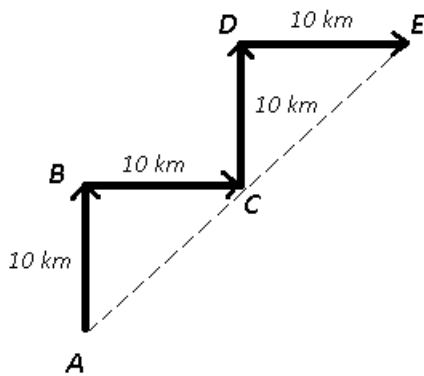
Question 43

Rohini walks 10 km north and turns right. She walks 10 km and then turns left. She walks 10 km and then turns right and walks 10 km more. How far (in km) is she from her starting point?

- A 20
- B  $10\sqrt{2}$
- C  $20\sqrt{2}$
- D 40

Answer: C

Explanation:



Let Rohini starts from point A and walks 10 km north to reach B and turns right and walks 10 km to reach C and then turns left to walk 10 km and finally turns right eastwards and walks 10 km more to stop at point E.

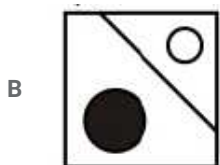
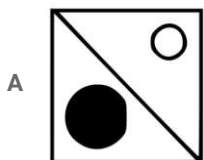

$$\begin{aligned} \text{Thus, } AE &= \sqrt{(20)^2 + (20)^2} \\ &= \sqrt{400 + 400} = \sqrt{800} = 20\sqrt{2} \text{ km} \end{aligned}$$

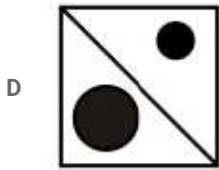
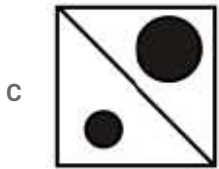
=> Ans - (C)

**SSC CGL Previous Papers (DOWNLOAD PDF)**

Question 44

Which answer figure will complete the pattern in the question figure





Answer: A

Explanation:

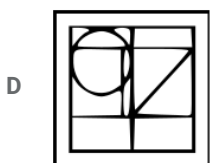
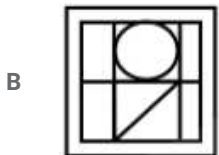
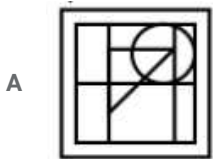
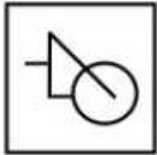
The question figure will be completed by :



=> Ans - (A)

Question 45

From the given answer figures, select the one in which the question figure is hidden/embedded.



Answer: A

**Explanation:**

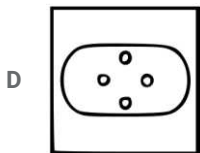
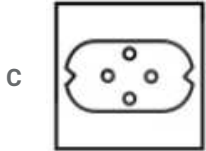
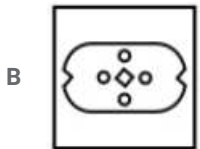
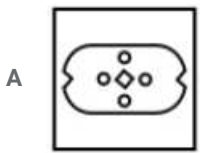
If we rotate the question figure upside down, it is represented by 'red' color and is hidden in :



=> Ans - (A)

**Question 46**

A piece of paper is folded and punched as shown below in the question figures. From the given answer figures, indicate how it will appear when opened ?

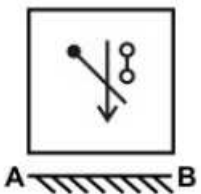


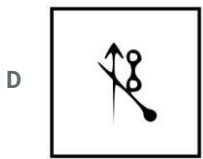
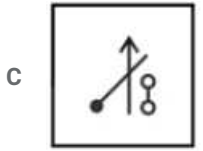
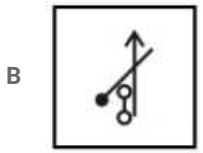
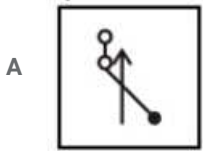
Answer: A

**SSC CHSL Free Mock Test (Latest Pattern)**

**Question 47**

If a mirror is placed on the line AB, then which of the answer figures is the right image of the given figure ?d





Answer: C

**Explanation:**

A horizontal mirror is placed, so the object on the top will appear at the bottom in reverse position and vice-versa.

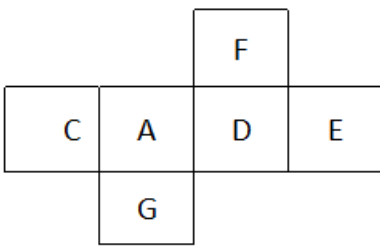
So the vertical arrow in the middle facing downwards will now face upwards.

Also, in the question figure, the two circles at top right will now appear at bottom right side of the arrow, hence third option is the right image.

=> Ans - (C)

**Question 48**

In the given figure, what will come opposite to face containing 'A' ?



A E

B D

C C

D G

Answer: A

**Explanation:**

If we fold the above figure keeping 'A' as the base, we will get the pair of opposite faces as :

A -> E, C -> D and F -> G

Thus, E will face A.

=> Ans - (A)

**Question 49**

A word is represented by only use set of numbers as given in any one of the alternatives. The sets of numbers as given in any one of the alternatives are represented by two classes of alphabets as shown in the given two matrices. The columns and rows of Matrix-I are numbered from 0 to 4 and that of Matrix-II are numbered from 5 to 9. A letter from these matrices can be represented first by its row and column, for example, 'J' can be represented by 42, 87 etc., and 'N' can be represented by 04, 89, etc. Similarly, you have to identify the set for the word "EXACT"

	0	1	2	3	4
0	A	E	T	S	N
1	L	M	I	C	I
2	U	E	S	V	X
3	D	G	W	L	R
4	O	K	J	C	Z

	5	6	7	8	9
5	Z	G	W	I	Q
6	Y	M	B	T	A
7	L	Q	Z	Y	D
8	F	E	J	T	N
9	U	I	Y	V	X

- A 01, 42, 00, 88, 02
- B 21, 24, 31, 02, 44
- C 86, 99, 69, 13, 68
- D 23, 24, 21, 43, 88

**Answer: C**

**Explanation:**

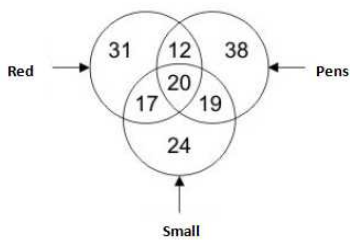
- (A) : 01, 42, 00, 88, 02 = EJATT
- (B) : 21, 24, 31, 02, 44 = EXGTZ
- (C) : 86, 99, 69, 13, 68 = **EXACT**
- (D) : 23, 24, 21, 43, 88 = VXECT

=> Ans - (C)

### SSC Stenographer Previous Papers (Latest Pattern)

**Question 50**

In the given figure, how many red are pens ?

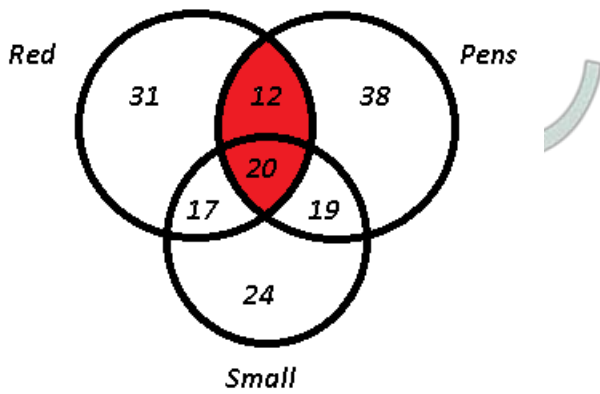


- A 12
- B 32
- C 20
- D 29

**Answer: B**

**Explanation:**





Number of red pens =  $12 + 20 = 32$

=> Ans - (B)

## SSC GD Constable Free Mock Test (Latest Pattern)

### General Awareness

#### Instructions

For the following questions answer them individually

#### Question 51

What was the main aim of First Five Year Plan?

- A Self-dependent
- B Industrial growth
- C Economic growth
- D Agricultural growth

Answer: D

## SSC MTS Free Mock Test (Latest Pattern)

#### Question 52

"Detroit" is famous for which of the following Industries?

- A Textiles
- B Cement
- C Steel
- D Automobile

Answer: D

#### Question 53

When does the problem of unfavourable balance of payments arise?

- A imports > exports
- B exports = imports

C inflation decreases

D No option is correct.

Answer: A

Question 54

Which one among the following formulates the fiscal policy in India ?

A Planning Commission

B Finance Commission

C Reserve Bank of India

D Ministry of Finance

Answer: A

## Current Affairs Questions & Answers (Download pdf)

Question 55

When the first elected Lok Sabha came into existence in India?

A January, 1952

B April, 1952

C November, 1950

D November, 1949

Answer: B

Question 56

What is the function of political pressure group in democracy?

A Government formation

B Pressurize the government for its own interest

C Pressurizing the government for the sake of people

D Making midterm elections

Answer: C

Question 57

Which of the following is considered to be the most influential on the Constitution of India?

A Constitution of USA

B Constitution of Soviet Russia

C British constitution

D Government of India Act, 1935

Answer: D

## Daily & Monthly Current Affairs (Download pdf)

### Question 58

To whom does the President address his resignation letter?

- A Vice-President
- B Prime Minister
- C Speaker, Lok Sabha
- D Chief Justice of Supreme Court

Answer: A

### Question 59

Who determines the term and membership of the Central Council of Ministers?

- A Home Minister
- B President of ruling party
- C President of India
- D Vice President

Answer: C

### Question 60

By which Constitutional Amendment has the right to property been scrapped as a Fundamental Right?

- A 42nd
- B 43rd
- C 44th
- D 45th

Answer: C

## SSC Stenographer Important Questions (Download PDF)

### Question 61

During which dynasty, Mahabalipuram temple was constructed?

- A Gupta Dynasty
- B Pallava Dynasty
- C Chola Dynasty
- D Chalukya Dynasty

Answer: B

**Question 62**

**With which Movement Mahatma Gandhi entered into Indian Politics ?**

- A Surat Session
- B Champaran Movement
- C Dandi March
- D Civil Disobedience

**Answer: B**

**Question 63**

**Which amongst the following Sultans of Delhi established several cities in North India?**

- A Balban
- B Alauddin Khilji
- C Firoz Shah Tughlaq
- D Ibrahim Lodhi

**Answer: C**

**SSC Stenographer Mocks For Just RS. 117**

**Question 64**

**Who among the following Governor-General introduced the policy of 'Doctrine of Lapse' during the British Administration?**

- A Lord Cornwallis
- B Lord Hastings
- C Lord William Bentick
- D Lord Dalhousie

**Answer: D**

**Question 65**

**Ahom tribes is which of the following states of India?**

- A Assam
- B Andhra Pradesh
- C Madhya Pradesh
- D Jharkhand

**Answer: A**

**Question 66**

**Which is the tallest dam of the India?**

- A Indira Sagar dam
- B Tehri dam
- C Mettur dam
- D Koyna dam

**Answer: B**

## SSC Stenographer Free Videos (Youtube)

**Question 67**

What is called the line on map joining places having equal pressure zones?

- A Isobar
- B Isohaline
- C Isotherm
- D Isohyte

**Answer: A**

**Question 68**

As one moves from the polar region towards equator the diversity of plant and animal species \_\_\_\_\_.

- A increases
- B decreases
- C no changes
- D No option is correct.

**Answer: A**

**Question 69**

What is the main constituent of the human bone?

- A Phosphorus
- B Calcium
- C Zinc
- D Iron

**Answer: B**

## SSC Stenographer Expected Cutoff

**Question 70**

Trachoma disease is related to which of the following organs?

A Nose

B Ear

C Tooth

D Eye

**Answer: D**

**Question 71**

Which of the four blood groups, A, AB, B and O is called universal donor?

A O

B A

C B

D AB

**Answer: A**

**Question 72**

Night blindness is caused by the deficiency of which of the following?

A Vitamin B

B Vitamin A

C Vitamin C

D Vitamin D

**Answer: B**

## SSC Stenographer Syllabus PDF

**Question 73**

Seeds can best be preserved in which condition?

A Cool and wet conditions

B Hot and dry conditions

C Cool and dry conditions

D Hot and wet conditions

**Answer: C**

**Question 74**

Which part of coconut is eatable?

A Endosperm

B Mesocarp

C Endocarp

D Exocarp

**Answer: A**

**Question 75**

The current flows in a telephone line is \_\_\_\_\_.

A sound energy

B electric energy

C radio energy

D mechanical energy

**Answer: C**

**Daily Free Online GK tests**

**Question 76**

Which type of insulators are used for high voltage application?

A Suspension type

B Pin type

C Strain type

D Post type

**Answer: A**

**Question 77**

Rectifiers are used to convert \_\_\_\_\_.

A High voltage to low voltage

B Low voltage to high voltage

C DC to AC

D AC to DC

**Answer: D**

**Question 78**

When an object is transferred from Earth to Moon \_\_\_\_\_.

A Its mass increases

B Its weight increases

C Its mass decreases

D Its mass remains unchanged

Answer: D

## SSC CHSL Previous Question papers (download pdf)

Question 79

If a computer has more than one processor then it is known as \_\_\_\_\_.

- A Uniprocessor
- B Multiprocessor
- C Dual processor
- D Quad Core processors

Answer: B

Question 80

What is full form of SMPS ?

- A Switch Mode Power Supply
- B Simple Mode Power Supply
- C Storage Mode Power Supply
- D Storage Mode Power Shortage

Answer: A

Question 81

Which among the following acids is used in Lead storage batteries?

- A Acetic acid
- B Hydrochloric acid
- C Sulphuric acid
- D Nitric acid

Answer: C

## SSC CPO Previous Question papers (download pdf)

Question 82

Which metal remains in liquid form at normal temperature?

- A Bromite
- B Mercury
- C Cadmium
- D Glass

Answer: B



**Question 83**

Which of the following is not a noble gas?

- A Radon
- B Argon
- C Carbon
- D Neon

**Answer: C**

**Question 84**

Which element has maximum presence in the Sun?

- A Hydrogen
- B Oxygen
- C Argon
- D Krypton

**Answer: A**

**SSC GD Previous Question papers (download pdf)**

**Question 85**

Due to greenhouse effect \_\_\_\_\_.

- A temperature of earth is decreasing
- B temperature of earth is increasing
- C temperature of earth is constant
- D No option is correct.

**Answer: B**

**Question 86**

Which of the following is a biodegradable waste?

- A Nylon
- B Plastics
- C Wool
- D Polythene bags

**Answer: C**

**Question 87**

Which of the following programs aims at the promotion of savings among rural women?

- A Mahila Samridhhi Yojna
- B Javhar Rozgar Yojna
- C Rashtriya Mahila Kosh
- D Antyodaya Yojana

**Answer: A**

## SSC MTS Previous Question papers (download pdf)

### Question 88

Bringing Green Revolution to eastern India is a sub scheme of \_\_\_\_\_.

- A National Mission on Agriculture Extension and Technology
- B National Mission for sustainable agriculture
- C Rashtriya Krishi Vikas Yojana
- D No option is correct.

**Answer: C**

### Question 89

Who among the following was the inventor of long distance telephone?

- A Christopher Dack
- B Neils Bohr
- C Michael Pupin
- D Alexander Graham Bell

**Answer: D**

### Question 90

Which among the following is given to a player for instant energy?

- A Carbohydrates
- B Protein
- C Vitamin
- D No option is correct.

**Answer: A**

## SSC CHSL Free Mock Test

### Question 91

Who among the following is the first Indian player to win a Grand Slam in Tennis?

- A Leander Paes
- B Mahesh Bhupathi
- C Ramesh Krishnan
- D Anand Amritraj

**Answer: B**

**Question 92**

**Apart from India, in which of the following two countries, Tamil is an official language?**

- A Srilanka
- B Singapore
- C Srilanka and Singapore Both
- D No option is correct.

**Answer: C**

**Question 93**

**The famous "Ganga Sagar Mela", an annual fair is held in which state of India?**

- A Bihar
- B Jharkhand
- C Uttar Pradesh
- D West Bengal

**Answer: D**

## SSC CPO Free Mock Test

**Question 94**

**Which of the following prizes is given for fiction?**

- A Bharat Ratna
- B Booker Prize
- C Pulitzer Award
- D No option is correct.

**Answer: B**

**Question 95**

**The Nobel Peace Prize 2016 was awarded to Juan Manuel Santos. He is the president of which of the following countries?**

- A Colombia
- B Georgia

C Canada

D Brazil

Answer: A

Question 96

'Abhigyanashakuntalam' is a \_\_\_\_\_.

A Play

B Novel

C Poetry

D Story

Answer: A

## SSC GD Free Mock Test

Question 97

Black Sea Economic Cooperation Zone consists of \_\_\_\_\_ members.

A 11

B 12

C 13

D 14

Answer: B

Question 98

The ANZUS was signed in 1951 between \_\_\_\_\_.

A Australia & New Zealand

B Australia & USA

C New Zealand & USA

D Australia, New Zealand & USA

Answer: D

Question 99

Palk Strait is between which of the following countries?

A India & Pakistan

B Pakistan & Srilanka

C India & Srilanka

D Pakistan & Iran

Answer: A

## SSC CGL Free Mock Test

Question 100

Which of the following is not a member of SAARC?

- A Afghanistan
- B Bangladesh
- C Bhutan
- D Myanmar

Answer: D

**Download SSC General Knowledge PDF**

**English**

**Instructions**

In the following question, some part of the sentence may have errors. Find out which part of the sentence has an error and select the appropriate option. If a sentence is free from error, select 'No Error'.

Question 101

I have written (a)/ a letter for the issue (b)/ of sports equipments. (c)/ No error (d)

- A 1
- B 2
- C 3
- D 4

Answer: C

**SSC GD 10 Mock Tests for Rs. 117**

Question 102

Many people (1) / have lost their lives (b) / in sea. (c) / No error (d)

- A 1
- B 2
- C 3
- D 4

Answer: C

Question 103

Mr Roy's (a) / eyes widened (b) / in surprise. (c) / no error (d)

A 1

B 2

C 3

D 4

Answer: D

Question 104

They wondered (a) / how many windows (b) / were in there room .(c) / no error (d)

A 1

B 2

C 3

D 4

Answer: C

## SSC CHSL Prevoius Papers (DOWNLOAD PDF)

Question 105

There were (a) / curtains over (b) / the cracked glass. (c) / no error (d)

A 1

B 2

C 3

D 4

Answer: D

Question 106

The decoration (a) / on the wall (b) / were a horse painting. (c) / no error (d)

A 1

B 2

C 3

D 4

Answer: C

Question 107

I have (a) / checked this (b) / month calender. (c) / no error (d)

A 1

B 2

C 3

D 4

Answer: C

## SSC GD Constable Previous Papers

Question 108

The Roman Church of Catholics (a) / is one of the (b) / precious institutions. (c) / No error (d)

A 1

B 2

C 3

D 4

Answer: D

Question 109

The plane (a)/ has (b)/ sunk the ship (c)/ No error (d)/

A 1

B 2

C 3

D 4

Answer: D

Question 110

He leans (a)/ forward to (b)/ shut the door (c) / no error (d)

A 1

B 2

C 3

D 4

Answer: D

## SSC Stenographer Previous Papers (DOWNLOAD PDF)

Instructions

In the following question, out of the given four alternatives, select the one which is opposite in meaning of the given word.

Question 111

Ancient

A former

- B obsolete
- C modern
- D historical

**Answer: C**

**Question 112**

**Ally**

- A friend
- B enemy
- C sibling
- D relative

**Answer: B**

**Question 113**

**Intermittent**

- A regular
- B irregular
- C isolated
- D random

**Answer: A**

**SSC CGL Previous Papers (DOWNLOAD PDF)**

**Question 114**

**Penalise**

- A Legalise
- B forbid
- C veto
- D outlaw

**Answer: A**

**Question 115**

**lethargic**

- A animated
- B dull
- C inert



D sluggish

Answer: A

### Instructions

A sentence has been given in Active/Passive Voice. Out of the four given alternatives, select the one which best expresses the same sentence in Passive/Active Voice.

### Question 116

'Sunaina read the novel in four hours.'

- A The novel had been read by Sunaina in four hours.
- B The novel was read by Sunaina in four hours.
- C The novel has been reading by Sunaina withing four hours.
- D The novel is read by Sunaina in four hours.

Answer: B

## SSC CHSL Free Mock Test (Latest Pattern)

### Question 117

'I have made all the reservations.'

- A All the reservations are made by myself.
- B The reservations are made by myself.
- C All the reservations have been made by me.
- D None of these

Answer: C

### Question 118

'Sharif's parents took him to the hospital at night.'

- A Sharif is taken to the hospital by his parents at night.
- B Sharif was taken to the hospital by his parents at night.
- C Sharif was being taken by his parents to the hospital at night.
- D Sharif can be taken to the hospital by his parents at night.

Answer: B

### Question 119

Who did this?

- A This was done by whom?
- B Who has done this?
- C By whom was this done?

D Who had done this?

Answer: C

## SSC Stenographer Previous Papers (Latest Pattern)

Question 120

The carpenter is making furniture.

- A The furniture is being made by the carpenter.
- B The furniture was made by the carpenter.
- C The furniture was being made by the carpenter.
- D The furniture will be made by the carpenter.

Answer: A

Question 121

Prem will teach the child.

- A The child would be taught by Prem.
- B Prem shall be teaching the child.
- C The child will be taught by Prem.
- D The child was taught by Prem.

Answer: C

Question 122

Ramesh buys a book

- A A book is bought by Ramesh
- B Ramesh shall buy a book
- C A book shall be bought by Ramesh
- D A book was bought by Ramesh

Answer: A

## SSC GD Constable Free Mock Test (Latest Pattern)

Question 123

Somebody had stolen her purse.

- A The purse that is stolen was hers.
- B Her purse has been stolen by somebody.
- C Her purse had been stolen by somebody.
- D Her purse is being stolen by somebody.

Answer: C

**Question 124**

He wore a blue shirt.

- A The shirt that he wore was blue.
- B A blue shirt was worn by him.
- C He was wearing a blue shirt
- D The shirt that he was wearing was blue.

Answer: B

**Question 125**

The streets were thronged with supporters of the ruling party.

- A The supporters of the ruling party thronged the streets.
- B The supporters of the ruling party were thronging the streets.
- C The streets had been thronged by the supporters of the ruling party.
- D The supporters of the ruling party thronged to the street.

Answer: A

## SSC MTS Free Mock Test (Latest Pattern)

**Instructions**

In the following question, the sentence given with blank to be filled in with an appropriate word. Select the correct alternative out of the four and indicate it by selecting the appropriate option.

**Question 126**

The boats sail \_\_\_\_\_ the river.

- A in
- B on
- C above
- D to

Answer: A

**Question 127**

Neither Purna nor Priya \_\_\_\_\_ working on Independence day.

- A is
- B are
- C will
- D None of these

Answer: A

Question 128

I am tired \_\_\_\_\_ walking.

- A by
- B of
- C for
- D in

Answer: B

## Current Affairs Questions & Answers (Download pdf)

Question 129

One should not question \_\_\_\_\_ does not concern him/her.

- A what
- B that
- C which
- D whatever

Answer: A

Question 130

Sohail carefully put the painting \_\_\_\_ the wall.

- A on
- B for
- C above
- D in

Answer: A

### Instructions

In the following question, out of the given four alternatives, select the one which best expresses the meaning of the given word.

Question 131

**Palpable**

- A Perceptible
- B Obscure
- C Intangible
- D Clear

Answer: A

## Daily & Monthly Current Affairs (Download pdf)

Question 132

Feeble

- A strong
- B robust
- C sound
- D weak

Answer: D

Question 133

Plausible

- A Improbable
- B Unlikely
- C Reasonable
- D Preposterous

Answer: C

Question 134

Arouse

- A Disenchant
- B Discourage
- C Cease
- D Incite

Answer: D

## SSC Stenographer Important Questions (Download PDF)

Question 135

Evident

- A Unclear
- B Dubious
- C Hidden
- D Obvious

Answer: D

**Instructions**

In the following question, out of the given four alternatives, select the alternative which best expresses the meaning of the Idiom/Phrase.

**Question 136**

**Best thing since sliced bread**

- A happy when someone leaves
- B a good invention
- C a good food
- D none of the above

**Answer: B**

**Question 137**

**Hit the nail on the head**

- A Do or say something exactly right
- B attack someone at the right time
- C create problems for others
- D get into conspiracy

**Answer: A**

**SSC Stenographer Mocks For Just RS. 117**

**Question 138**

**When pigs fly**

- A Something that will never happen
- B When miracle happens
- C When there is a sudden change in the weather
- D When something bad is about to happen

**Answer: A**

**Question 139**

**Hear it on the grapevine**

- A to hear screams from somewhere
- B to hear a secret from the third person
- C to hear a some rumours about something
- D to hear the rustling of a tree

**Answer: C**

**Question 140**

**A chip on your shoulder**

- A your shoulder is injured
- B there is burden on your shoulder
- C you are holding a grudge
- D you are ill

**Answer: C**

**SSC Stenographer Free Videos (Youtube)**

**Instructions**

In the following question, out of the four alternatives, select the alternative which will improve the bracketed part of the sentence. In case no improvement is needed, select "no improvement".

**Question 141**

**(Looking my bad mental condition,) I went forward for help and encouragement.**

- A Watching my bad mental condition
- B Finding myself in bad mental condition
- C Seeing my bad mental condition
- D No improvement

**Answer: B**

**Question 142**

**(Meditation have been) the most effective way of boosting concentration level.**

- A Meditation was
- B Meditation has been
- C Meditation will be
- D No improvement

**Answer: B**

**Question 143**

**Balanced diet (comprises of water), roughage and other nutritional value.**

- A Comprises water
- B Comprises of the water
- C Comprised of water
- D No improvement

**Answer: D**

## SSC Stenographer Expected Cutoff

### Question 144

(One of the major drawback of cleanliness drives is) less action and more talks.

- A One of the major drawbacks of cleanliness drives is
- B One of the major drawbacks of cleanliness drives are
- C One of the major weakpoint of cleanliness drives is
- D No improvement

Answer: A

### Question 145

He was dressed in (bright clothes for the funeral).

- A plain clothes for the funeral
- B bright cloth for the funeral
- C bright clothes for the funerals
- D No improvement

Answer: A

### Question 146

He distributed the (candies between the children).

- A candies in the children
- B candies for the children
- C candies among the children
- D No improvement

Answer: C

## SSC Stenographer Syllabus PDF

### Question 147

(Her companion was) her daughter and son-in-law.

- A Her companions was
- B Her companion is
- C Her companions were
- D No improvement

Answer: C



**Question 148**

**He respects all religion, (he is a liberalist).**

- A he is a teacher
- B he is secular
- C he is a astronomer
- D No improvement

**Answer: D**

**Question 149**

**We have (buy) vegetables from the market.**

- A bought
- B buying
- C are buying
- D No improvement

**Answer: A**

**Daily Free Online GK tests**

**Question 150**

**A certain amount of (mystic) exudes his own charm.**

- A mysticity
- B mysticism
- C mysticly
- D No improvement

**Answer: B**

**Instructions**

A sentence has been given in Direct/Indirect Speech. Out of the four given alternatives, select the one which best expresses the same sentence in Indirect/Direct Speech.

**Question 151**

**'Where are you going?' said his mother.**

- A Mother said where I was going.
- B Mother told where I was going.
- C Mother enquired where I was going.
- D Mother asked where I am going.

**Answer: C**

**Question 152**

**'What a sight to behold!' said the painter.**

- A The painter said it is a beauty to behold.
- B The painter exclaimed that it was a sight to behold.
- C The painter said it was a sight to behold.
- D The painter exclaimed that what a sight to behold.

**Answer: B**

**SSC CHSL Previous Question papers (download pdf)**

**Question 153**

**"What time does the train arrive?" she asked**

- A she enquired at what time the train arrived
- B she asked about the train
- C when will the train arrive she asked
- D she said when does the train arrive

**Answer: A**

**Question 154**

**"Have you got a computer?"**

- A Where is your computer?
- B Do you have a computer?
- C He wanted to know about the computer
- D He wanted to know whether you had a computer.

**Answer: D**

**Question 155**

**"Did you come by train?"**

- A have you come by train?
- B when did the train come?
- C he enquired whether I had come by train
- D he enquired about my train

**Answer: C**

**SSC CPO Previous Question papers (download pdf)**

**Question 156**

**Tom said "I was playing cricket".**

- A Tom said, who was playing cricket?
- B Tom was playing cricket.
- C Tom said that he had been playing cricket.
- D Tom said he was playing cricket.

**Answer: C**

**Question 157**

**My mother said "God is everywhere".**

- A my mother said that god is everywhere.
- B my mother has said that God is everywhere.
- C my mother said God is everywhere.
- D my mother said that God was everywhere.

**Answer: A**

**Question 158**

**He said, "Where have you been lately?"**

- A He said where were he lately.
- B He told him where was he lately.
- C He asked him where he was lately.
- D He asked him where he had been lately.

**Answer: D**

**SSC GD Previous Question papers (download pdf)**

**Question 159**

**"She has a high temperature." Mother said to her brother.**

- A Mother told her brother that she had a high temperature.
- B Mother said to brother she was having a high temperature.
- C Mother said to brother she will have high temperature.
- D Mother said to her brother that she had been having high temperature.

**Answer: A**

**Question 160**

**"You should do what your heart wants," she told him.**

- A She told him that he should do what his heart wants.
- B She advised him to do what his heart wanted.
- C She asked him to do what he want.
- D She said that he should do what his heart wants.

**Answer: B**

**Instructions**

The question below consists of a set of labelled sentences. Out of the four options given, select the most logical order of the sentences to form a coherent paragraph.

**Question 161**

**To be yourself in a world  
P- to make you something else  
Q-that is constantly trying  
R- is the greatest achievement**

- A PQR
- B RQP
- C QPR
- D QRP

**Answer: C**

**SSC MTS Previous Question papers (download pdf)**

**Question 162**

**Life appears to me  
P- too short to be spent  
Q- or registering wrongs  
R- in nursing animosity**

- A PQR
- B PRQ
- C RPQ
- D QPR

**Answer: B**

**Question 163**

**No man, for any considerable period,  
P- without finally getting bewildered  
Q- as to which may be the true  
R- can wear one face to himself and another to the multitude**

- A QRP
- B RPQ

C PQR

D QPR

Answer: B

**Question 164**

**The magnificent horse roamed**

**P- before stopping**

**Q- in front of the hut where Dhammasethe resided**

**R- the length and breadth of the country**

A PQR

B RQP

C RPQ

D QRP

Answer: C

**SSC CHSL Free Mock Test**

**Question 165**

**Don't leave something good**

**P-because once you realize**

**Q-to find better**

**R-you had the best,the best has found better**

A RPQ

B QPR

C PQR

D QRP

Answer: B

**Instructions**

Read the given passage carefully and select the best answer to each question out of the four given alternatives.

History plays a key role in helping the current generation to know where they came from. It also helps us understand the transformation that the society has gone through. We all know that change is a constant thing that takes place every now and then. History plays a very crucial role when it comes to making comparisons. For example, historians help us understand why small things may lead to big disasters. The best example being the causes of the first and second world wars. The current generation tends to gain more information about their past culture. By knowing your culture, you are placed at a better position to preserving it. History is such an important subject and plays a very vital role when it comes to shaping our society. History is the study of past events. We refer to the past when comparing it with the present times and deduce the changes that have taken place. This is the easiest way to make comparisons on timely basis.

**Question 166**

**Why is history such an important subject to study?**

A History plays a crucial role when it comes to making comparisons

B History helps us preserve humans

C History helps to understand our current generation

D History can prevent diseases

**Answer: A**

**Question 167**

**How is history beneficial to the current generation?**

A It helps them to know about world wars

B It helps them to know where they came from

C It helps them to know the mistakes of their ancestors

D It helps them to create opportunities

**Answer: B**

## SSC CPO Free Mock Test

**Question 168**

**History is the study of \_\_\_\_\_ events.**

A future

B present

C new

D past

**Answer: D**

**Question 169**

**What is the role of historians?**

A to help us understand why small things lead to big disaster

B to study future disasters

C to acknowledge the mistakes of the past

D to study wars of different periods

**Answer: A**

**Question 170**

**Which of the statement is true?**

A by knowing our culture, we can understand other cultures also

B by knowing our culture, we can add more to it

C by knowing our culture, we can better preserve it

D by knowing our culture, we can understand our country

Answer: C

## SSC GD Free Mock Test

### Instructions

Read the given passage carefully and select the best answer to each question out of the four given alternatives.

Is my yellow the same as your yellow? Does your pain feel like my pain? The question of whether the human consciousness is subjective or objective is largely philosophical. But the line between consciousness and unconsciousness is a bit easier to measure. A research suggests that our experience of reality is the product of a delicate balance of connectivity between neurons - too much or too little and the consciousness slips away. "It's a very nice study," says neuroscientist Melanie Boly at the University of Wisconsin, Madison, who was not involved in the work. "The conclusions that they draw are justified." Previous studies of the brain have revealed the importance of "cortical integration" in maintaining consciousness, meaning that the brain must process and combine multiple inputs from different senses at once. Our experience of an orange, for example, is made up of sight, smell, taste, touch, and the recollection of our previous experiences with the fruit. The brain merges all of these inputs - photons, aromatic molecules, etc. - into our subjective experience of the object in that moment.

### Question 171

Our experience of reality is the product of \_\_\_\_\_.

- A a delicate balance of connectivity between both hands
- B a delicate balance of connectivity between right hemisphere and left hemisphere
- C a delicate balance of connectivity between neurons
- D a delicate balance of connectivity between consciousness and subconsciousness

Answer: C

### Question 172

How our subjective experience of an object forms?

- A with the help of sensation
- B the recollection of previous experiences with the help of sensory inputs
- C with the help of our eyesight only
- D the recollection of experience as dictated by other person

Answer: B

### Question 173

What is "cortical integration"?

- A the process of mixing subconscious and conscious
- B the process of combining multiples inputs of senses at different time
- C the process of combining one input from different senses at once
- D the process of combining multiple inputs from different senses at once

Answer: D

## SSC CGL Free Mock Test

**Question 174**

**Which one is true, according to the passage?**

- A whether the human consciousness is subjective or objective is largely philosophical
- B whether the human consciousness is subjective or objective is largely biological
- C whether the human consciousness is subjective or objective is largely psychological
- D whether the human consciousness is subjective or objective is largely scientific

**Answer: A**

**Question 175**

**How can consciousness be slipped away?**

- A too much or too little connectivity between neurons
- B no connectivity between neurons
- C too much connectivity between neurons
- D too little connectivity between neurons

**Answer: A**

**Instructions**

Read the given passage carefully and select the best answer to each question out of the four given alternatives.

During the Victorian period men and women's roles became more sharply defined than at any time in history. In earlier centuries it had been usual for women to work alongside husbands and brothers in the family business. Living 'over the shops' made it easier for women to help out by serving customers or keeping accounts while also attending to their domestic duties. As the 19th century progressed men increasingly commuted to their place of work- the factory, shop or office, wives, daughters and sisters were left at home all day to oversee the domestic duties that were increasingly carried out by servants. From the 1830s, women started to adopt the crinoline, a huge bell-shaped skirt that made it virtually impossible to clean a grate or sweep the stairs without tumbling over. The two sexes now inhabited what Victorians thought of as 'separate spheres', only coming together at breakfast and again at dinner.

**Question 176**

**During which period men and women's roles became more sharply defined?**

- A Victorean period
- B Elizabethen period
- C Edwardian period
- D Georgean period

**Answer: A**

**Download SSC General Knowledge PDF**

**Question 177**

**In which century men started commuting to their place of work?**

- A 17th century
- B 18th century



C 19th century

D 20th century

**Answer: C**

**Question 178**

**What constitutes the "separate sheres"?**

A the two periods

B their workplaces

C the two centuries

D the two sexes

**Answer: D**

**Question 179**

**Complete the sentence.**

Living \_\_\_\_\_ made it easy for women to help out by serving customers or keeping accounts while also attending to their domestic duties.

A in the shops

B over the shops

C behind the shops

D ahead the shops

**Answer: C**

## SSC GD 10 Mock Tests for Rs. 117

**Question 180**

**What is Crinoline?**

A a huge bell shaped shirt

B a huge bell shaped skirt

C a huge bell shaped hat

D a huge bell shaped earrings

**Answer: B**

**Instructions**

In the following passage some of the words have been left out. Read the passage carefully and select the correct answer for the given blank out of the four alternatives.

The businessman was \_\_\_\_\_. The \_\_\_\_\_ of bread he had eaten only served to \_\_\_\_ his \_\_\_\_\_. He took out a \_\_\_\_\_ of coins and kept on buying \_\_\_\_\_ of bread. Each time he was hungry, he would \_\_\_\_\_ into his sack full of \_\_\_\_\_. He would \_\_\_\_\_ at the farmer with hungry \_\_\_\_\_.

**Question 181**

**The businessman was \_\_\_\_\_**

- A hungry
- B angry
- C fool
- D up

Answer: A

Question 182

The \_\_\_\_\_ of bread

- A morsel
- B taste
- C savoury
- D sip

Answer: A

## SSC CHSL Previous Papers (DOWNLOAD PDF)

Question 183

Only served to \_\_\_\_

- A dampen
- B turn
- C whet
- D polish

Answer: C

Question 184

His \_\_\_\_\_.

- A greed
- B appetite
- C anger
- D disappointment

Answer: B

Question 185

He took out a \_\_\_\_\_ of coins

- A pack
- B sack

C bundle

D handful

Answer: D

Question 186

Kept on buying \_\_\_\_\_ of bread.

A bouquet

B sweet

C piece

D bite

Answer: C

Question 187

He would \_\_\_\_\_ into his sack

A dug

B find

C go

D search

Answer: A

Question 188

Full of \_\_\_\_\_.

A monies

B contacts

C fruits

D coins

Answer: D

## SSC GD Constable Previous Papers

Question 189

He would \_\_\_\_\_ at the farmer

A bite

B look

C peal

## SSC Stenographer Previous Papers (DOWNLOAD PDF)

D like

Answer: B

Question 190

With hungry \_\_\_\_\_.

A ears

B tongue

C eyes

D hands

Answer: C

Instructions

In the following passage some of the words have been left out. Read the passage carefully and select the correct answer for the given blank out of the four alternatives.

Interestingly, rice hats were used in the old days when \_\_\_\_\_ were fought \_\_\_\_\_ and there was \_\_\_\_\_ of being attacked without \_\_\_\_\_. Khowpuk or rice cakes made of \_\_\_\_\_ rice, salt and \_\_\_\_\_ sesame were \_\_\_\_\_ into hats and left to \_\_\_\_\_. The \_\_\_\_\_ of this hat was \_\_\_\_\_ known to the farmer.

Question 191

Old days when \_\_\_\_\_ were fought

A quarreled

B squabbled

C fought

D won

Answer: C

**SSC CGL Previous Papers (DOWNLOAD PDF)**

Question 192

Were fought \_\_\_\_\_

A mercifully

B relentlessly

C beautifully

D splendidly

Answer: B

Question 193

There was \_\_\_\_\_ of being attacked

A danger

B interest

C ambush

D injury

Answer: A

Question 194

Without \_\_\_\_\_.

A warning

B food

C clothes

D money

Answer: A

## SSC CHSL Free Mock Test (Latest Pattern)

Question 195

Khowpuk or rice cakes made of \_\_\_\_\_

A leftover

B dry

C glutinous

D wet

Answer: C

Question 196

Rice, salt and \_\_\_\_\_

A powdered

B wet

C brown

D raw

Answer: A

Question 197

Sesame were \_\_\_\_\_

A broken

B turned

C converted

D fashioned

Answer: D

## SSC Stenographer Previous Papers (Latest Pattern)

Question 198

Hats and left to \_\_\_\_\_.

A fry

B dry

C soak

D wet

Answer: B

Question 199

The \_\_\_\_\_ of this hat

A advantages

B colours

C benefit

D snacks

Answer: C

Question 200

Was \_\_\_\_\_ known to the farmer.

A good

B better

C well

D not

Answer: C

## SSC GD Constable Free Mock Test (Latest Pattern)

Daily Free Online GK tests

SSC CHSL Previous Question papers (download pdf)

SSC CPO Previous Question papers (download pdf)

[SSC GD Previous Question papers \(download pdf\)](#)

[SSC MTS Previous Question papers \(download pdf\)](#)

[SSC CHSL Free Mock Test](#)

[SSC CPO Free Mock Test](#)

[SSC GD Free Mock Test](#)

[SSC CGL Free Mock Test](#)

[Download SSC General Knowledge PDF](#)

[SSC GD 10 Mock Tests for Rs. 117](#)

[SSC CHSL Previous Papers \(DOWNLOAD PDF\)](#)

[SSC GD Constable Previous Papers](#)

[SSC Stenographer Previous Papers \(DOWNLOAD PDF\)](#)

[SSC CGL Previous Papers \(DOWNLOAD PDF\)](#)

[SSC CHSL Free Mock Test \(Latest Pattern\)](#)

[SSC Stenographer Previous Papers \(Latest Pattern\)](#)

[SSC GD Constable Free Mock Test \(Latest Pattern\)](#)

[SSC MTS Free Mock Test \(Latest Pattern\)](#)

[Current Affairs Questions & Answers \(Download pdf\)](#)

[Daily & Monthly Current Affairs \(Download pdf\)](#)

[SSC Stenographer Important Questions \(Download PDF\)](#)

[SSC Stenographer Mocks For Just RS. 117](#)

**SSC Stenographer Free Videos (Youtube)**

**SSC Stenographer Expected Cutoff**

**SSC Stenographer Syllabus PDF**