



SSC CHSL 24 March 2018 Evening Shift

All rights reserved. No part of this publication may be reproduced, distributed, or transmitted in any form or by any means, electronic, mechanical, photocopying, recording or otherwise, or stored in any retrieval system of any nature without the permission of cracku.in, application for which shall be made to support@cracku.in

Instructions

For the following questions answer them individually

Question 1
 $1 + \frac{1}{2} + \frac{1}{4} + \frac{1}{16} + \frac{1}{32} + \frac{1}{64}$ is approximately equal to _____.

- A 1.5
B 2
C 2.5
D 3

Answer: B**Explanation:**

$$\text{Expression} = 1 + \frac{1}{2} + \frac{1}{4} + \frac{1}{16} + \frac{1}{32} + \frac{1}{64}$$

$$= \left(1 + \frac{1}{2} + \frac{1}{2^2} + \frac{1}{2^3} + \frac{1}{2^4} + \frac{1}{2^5} + \frac{1}{2^6}\right) - \left(\frac{1}{8}\right)$$

The first term above is a geometric progression with first term, $a = 1$ and common ratio, $r = \frac{1}{2}$

Number of terms, $n = 7$

$$\text{Sum of } n \text{ terms of G.P. (when } r < 1) = \frac{a(1-r^n)}{1-r}$$

$$= \left[\frac{1(1-\frac{1}{2}^7)}{1-\frac{1}{2}} \right] - \left(\frac{1}{8}\right)$$

$$= \left[2 \times \left(1 - \frac{1}{128}\right) \right] - \left(\frac{1}{8}\right)$$

$$= \frac{127}{64} - \frac{8}{64}$$

$$= \frac{119}{64} = 1.85 \approx 2$$

=> Ans - (B)

25 SSC CHSL Mocks for just Rs. 149

Question 2

If $\frac{2x+3y}{3x-4y} = \frac{11}{7}$, then the value of $\frac{x}{y}$ is _____

- A $\frac{65}{19}$
B $\frac{68}{19}$
C $\frac{67}{19}$
D $\frac{64}{19}$

Answer: A**Explanation:**

$$\text{Expression: } \frac{2x+3y}{3x-4y} = \frac{11}{7}$$

$$\Rightarrow 7(2x + 3y) = 11(3x - 4y)$$

$$\Rightarrow 14x + 21y = 33x - 44y$$

$$\Rightarrow 33x - 14x = 21y + 44y$$

$$\Rightarrow 19x = 65y$$

$$\Rightarrow \frac{x}{y} = \frac{65}{19}$$

\Rightarrow Ans - (A)

Question 3

Find the value of $\sqrt{(2x-5)^2} + 2\sqrt{(x-1)^2}$, if $1 < x < 2$

A 1

B 6

C 3

D 0

Answer: C

Explanation:

Since, $1 < x < 2$

$$\sqrt{(2x-5)^2} = 5 - 2x \text{ (as value in square root should be positive)}$$

$$\Rightarrow \sqrt{(2x-5)^2} + 2\sqrt{(x-1)^2} = 5 - 2x + 2(x-1) = 5 - 2x + 2x - 2 = 3$$

Question 4

The pair of equations are $7x+8ky-16=0$ and $14x+112y-21=0$. Find the value of 'k' for which the system is inconsistent.

A 2

B 3

C 5

D 7

Answer: D

Explanation:

Equations : $7x+8ky-16=0$ and $14x+112y-21=0$

For two equations to be inconsistent (no solution), the ratio of coefficients of both equations must be of the form = $\frac{a_1}{b_1} = \frac{a_2}{b_2} \neq \frac{c_1}{c_2}$

$$\Rightarrow \frac{7}{14} = \frac{8k}{112} \neq \frac{-16}{-21}$$

$$\Rightarrow \frac{k}{14} = \frac{1}{2}$$

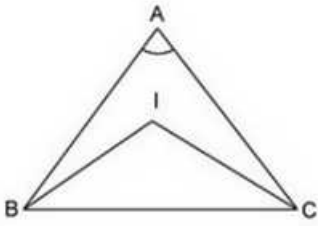
$$\Rightarrow k = \frac{14}{2} = 7$$

\Rightarrow Ans - (D)

SSC CHSL Free Mock Test

Question 5

Calculate the angle BAC if the angle BIC = 125° and 'I' be the in-center of the triangle?



- A 50°
- B 60°
- C 70°
- D 80°

Answer: C

Explanation:

Given : $\angle BIC = 125^\circ$ and I is the incentre of the triangle

To find : $\angle BAC$

Solution : Incentre of a triangle = $90^\circ + \frac{1}{2} \times$ (angle opposite to it)

$$\Rightarrow 125^\circ = 90^\circ + \frac{\angle A}{2}$$

$$\Rightarrow \frac{\angle A}{2} = 125^\circ - 90^\circ = 35^\circ$$

$$\Rightarrow \angle A = 2 \times 35^\circ = 70^\circ$$

\Rightarrow Ans - (C)

Question 6

The point where the triangle forms the right angle in the right angled triangle is known as the _____.

- A in-centre
- B circum-centre
- C centroid
- D ortho-centre

Answer: D

Explanation:

The point where the triangle forms the right angle in the right angled triangle is known as the **orthocentre**.

Question 7

A has thrice as much amount as that of B and B has 40% more amount than C. If the average of the amount of all three of them is Rs 1320, then what amount (in Rs) A has?

- A 2410
- B 2520
- C 2250

D 3240

Answer: B

Explanation:

Let amount with C = Rs. $100x$

$$\Rightarrow \text{B's amount} = 100x + \left(\frac{40}{100} \times 100x\right) = \text{Rs. } 140x$$

$$\Rightarrow \text{A's amount} = 3 \times 140x = \text{Rs. } 420x$$

$$\text{Average amount with the three} = \frac{(100x+140x+420x)}{3} = 1320$$

$$\Rightarrow \frac{660x}{3} = 1320$$

$$\Rightarrow 220x = 1320$$

$$\Rightarrow x = \frac{1320}{220} = 6$$

$$\therefore \text{Amount (in Rs.) that A has} = 420 \times 6 = \text{Rs. } 2520$$

\Rightarrow Ans - (B)

SSC CHSL Previous Papers (DOWNLOAD PDF)

Question 8

Marks of two candidates X and Y are in the ratio of 4 : 7. If the marks of X is 140, then what will be the marks of Y?

A 210

B 180

C 245

D 225

Answer: C

Explanation:

Ratio of marks of X : Y = 4 : 7

Marks of X = 140

$$\Rightarrow \text{Y's marks} = \frac{7}{4} \times 140 = 245$$

\Rightarrow Ans - (C)

Question 9

In what ratio salt costing Rs.13/kg mixed with another salt costing Rs.7/ kg to get a mixture costing Rs.9/kg?

A 4 : 7

B 3 : 5

C 2 : 3

D 1 : 2

Answer: D

Explanation:

Let quantity of Rs. 13/kg and Rs. 7/kg salt mixed be x and y kg respectively.

According to ques,

$$\Rightarrow 13x + 7y = 9(x + y)$$

$$\Rightarrow 13x + 7y = 9x + 9y$$

$$\Rightarrow 13x - 9x = 9y - 7y$$

$$\Rightarrow 4x = 2y$$

$$\Rightarrow \frac{x}{y} = \frac{2}{4} = \frac{1}{2}$$

∴ Required ratio = 1 : 2

⇒ Ans - (D)

Question 10

The average age of 8 members of a group is 36 years. The age of the eldest member is 32 years. If we exclude that eldest member from the group, then what will be the average age (in years) of the remaining members?

A 38.5

B 42.67

C 48.5

D 36.57

Answer: D

Explanation:

Average age of 8 members of a group = 36 years

$$\Rightarrow \text{Total age of 8 members} = 36 \times 8 = 288$$

Age of eldest member = 32 years

$$\text{Average age (in years) of the remaining members} = \frac{(288-32)}{7}$$

$$= \frac{256}{7} = 36.57$$

⇒ Ans - (D)

SSC CGL Previous Papers (DOWNLOAD PDF)

Question 11

Rs 10000 is kept at compound interest at an interest rate of 18% per annum (compounding annually). If the compounding of interest is done half yearly, then how much more interest (in Rs) will be obtained?

A 243

B 324

C 81

D 162

Answer: C

Explanation:

Principal sum = Rs. 10,000

Time period = 1 year and rate of interest = 18%

$$\Rightarrow \text{Difference between compound interest compound annually and half yearly} = [P(1 + \frac{R}{200})^{2T} - P] - [P(1 + \frac{R}{100})^T - P]$$

$$= P[(1 + \frac{18}{200})^2 - (1 + \frac{18}{100})^1]$$

$$= 10,000 \left[\left(1 + \frac{9}{100}\right)^2 - \left(1 + \frac{18}{100}\right) \right]$$

$$= 10,000 \left[\left(\frac{109}{100}\right)^2 - \left(\frac{118}{100}\right) \right]$$

$$= 10,000 \left[\frac{(109)^2 - (118 \times 100)}{10000} \right]$$

$$= 11881 - 11800 = \text{Rs. } 81$$

=> Ans - (C)

Question 12

Rahul professes to lose 16% on selling sugar and uses a weight of 680 gm instead of 1 kg. What is the total profit percentage?

A 23.53

B 16

C 28.57

D 19.24

Answer: A

Explanation:

Let cost price of 1 kg sugar = Rs. 1000 (1 gm sugar cost Re. 1)

=> Cost price of 1 kg sugar (680 gm in reality) = Rs. 680

Selling price after 16% loss of 1 kg sugar = $1000 - \left(\frac{16}{100} \times 1000\right) = \text{Rs. } 840$

$$\therefore \text{Profit \%} = \frac{(840 - 680)}{680} \times 100$$

$$= \frac{400}{680} = 23.529 \approx 23.53\%$$

=> Ans - (A)

Question 13

Two successive discounts of 5% and 15% are given by Rakesh on a table. If the marked price of the table is Rs 2000, then what is the value (in Rs) of discount?

A 385

B 425

C 330

D 500

Answer: A

Explanation:

Marked price = Rs. 2000

Amount deducted on 1st discount of 5% = $\frac{5}{100} \times 2000 = \text{Rs. } 100$

Thus, net price = $2000 - 100 = \text{Rs. } 1900$

Amount deducted on 2nd discount of 15% = $\frac{15}{100} \times 1900 = \text{Rs. } 285$

=> Value (in Rs) of discount = $100 + 285 = 385$

=> Ans - (A)

Question 14

What is the square root of $\frac{(3-2\sqrt{2})}{(3+2\sqrt{2})}$?

- A $3 - 2\sqrt{2}$
- B $3 + 2\sqrt{2}$
- C 1
- D $\frac{1}{17}$

Answer: A

Explanation:

Expression : $\frac{(3-2\sqrt{2})}{(3+2\sqrt{2})}$

Rationalizing the denominator,

$$= \frac{(3-2\sqrt{2})}{(3+2\sqrt{2})} \times \frac{(3-2\sqrt{2})}{(3-2\sqrt{2})}$$

$$= \frac{(3-2\sqrt{2})^2}{(3+2\sqrt{2})(3-2\sqrt{2})}$$

$$= \frac{(3-2\sqrt{2})^2}{9-8} = (3-2\sqrt{2})^2$$

Thus, square root is = $3-2\sqrt{2}$

=> Ans - (A)

Question 15

A certain number of men can complete a book in 10 days. If there were three more men, then book could be completed in 2 days less. How many men were there in the beginning?

- A 8
- B 15
- C 12
- D 10

Answer: C

Explanation:

Let number of men in the beginning = x

According to ques,

$$\Rightarrow x \times 10 = (x+3)(10-2)$$

$$\Rightarrow 10x = 8x + 24$$

$$\Rightarrow 10x - 8x = 24$$

$$\Rightarrow x = \frac{24}{2} = 12$$

Thus, there were 12 men in the beginning.

=> Ans - (C)

Question 16

A boy walking at the speed of 3 km/hr covers a certain distance in 3 hours 40 minutes. If he covers the same distance by cycle in 11 hours, then what is the speed (in km/hr) of cycle?

- A 1
- B 2

C 4

D 3

Answer: A

Explanation:

Walking speed of boy = 3 km/hr

Distance covered by boy in 3 hours and 40 minutes = $3 \times (3 + \frac{40}{60})$ km

= $3 \times (3 + \frac{2}{3}) = 3 \times \frac{11}{3} = 11$ km

Now, time taken to cover 11 km on cycle = 11 hours

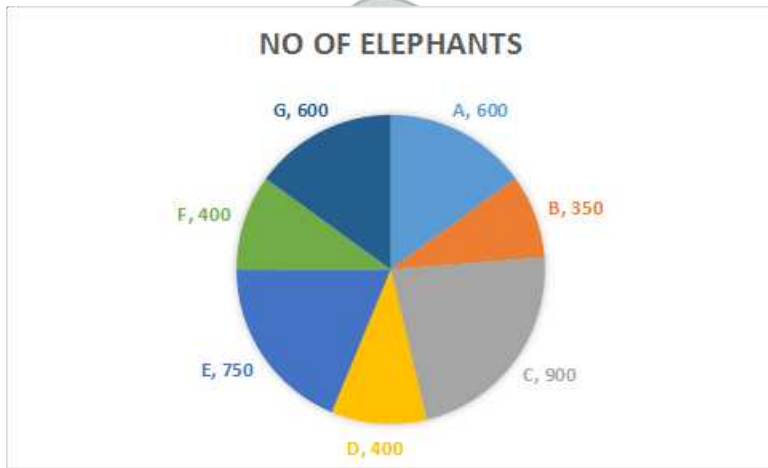
=> Speed of cycle = $\frac{11}{11} = 1$ km/hr

=> Ans - (A)

SSC CHSL Important Questions and Answers (Download PDF)

Instructions

The pie chart shows the number of elephants in all the elephant wild life sanctuaries in the country. Study the diagram and answer the following questions.



Question 17

The least number of elephants are in which sanctuary?

A C

B D

C G

D B

Answer: D

Explanation:

The least number of elephants are in sanctuary B = 350

=> Ans - (D)

Question 18

What is the total number of elephants in these sanctuaries?

A 4500

B 3000

C 4000

D 3500

Answer: C

Explanation:

Total number of elephants in these sanctuaries

$$= 600 + 350 + 900 + 400 + 750 + 400 + 600$$

$$= 4000$$

=> Ans - (C)

Question 19

The measure of the central angle of the sector representing the number of elephants in Sanctuary D is _____ degrees.

A 40

B 45

C 36

D 30

Answer: C

Explanation:

Number of elephants in Sanctuary D = 400

Total number of elephants in these sanctuaries

$$= 600 + 350 + 900 + 400 + 750 + 400 + 600 = 4000$$

$$\Rightarrow \text{Required central angle} = \frac{400}{4000} \times 360^\circ$$

$$= \frac{360^\circ}{10} = 36^\circ$$

=> Ans - (C)

SSC CHSL Study Material

Question 20

If the average area occupied by each elephant in these sanctuaries is 50 sq km, then what is the total area (in 1000 sq km) of these sanctuaries?

A 200

B 150

C 100

D 300

Answer: A

Explanation:

Total number of elephants in these sanctuaries

$$= 600 + 350 + 900 + 400 + 750 + 400 + 600 = 4000$$

Average area occupied by each elephant in these sanctuaries = 50 sq km

$$\Rightarrow \text{Total area (in 1000 sq km) of these sanctuaries} = 4 \times 50 = 200$$

=> Ans - (A)

Instructions

For the following questions answer them individually

Question 21

The area of an equilateral triangle is $36\sqrt{3} \text{ cm}^2$. Find its side (in cm).

- A 6
- B 24
- C 12
- D 36

Answer: C

Explanation:

Let side of equilateral triangle = s cm

Area of equilateral triangle = $\frac{\sqrt{3}}{4} (s)^2 = 36\sqrt{3}$

$$\Rightarrow s^2 = 36 \times 4$$

$$\Rightarrow s = \sqrt{6 \times 6 \times 2 \times 2}$$

$$\Rightarrow s = 6 \times 2 = 12 \text{ cm}$$

=> Ans - (C)

Question 22

If the sum of the interior angles of a regular polygon is 540° then how many sides does it have?

- A 6
- B 8
- C 5
- D 9

Answer: C

Explanation:

Let number of sides of the polygon = n

Sum of interior angles of a regular polygon = $(n-2) \times 180^\circ$

$$\Rightarrow (n-2) \times 180^\circ = 540^\circ$$

$$\Rightarrow n-2 = \frac{540}{180} = 3$$

$$\Rightarrow n = 3 + 2 = 5$$

=> Ans - (C)

SSC CHSL Free App

Question 23

The curved surface area and the diameter of a right circular cylinder are 132 cm^2 and 7 cm respectively. Find its height (in cm).

- A 7
- B 8

C 9

D 6

Answer: D

Explanation:

Let height of cylinder = h cm and radius, $r = \frac{7}{2}$ cm

Curved surface area = $2\pi r h = 132$

$\Rightarrow 2 \times \frac{22}{7} \times \frac{7}{2} \times h = 132$

$\Rightarrow 22h = 132$

$\Rightarrow h = \frac{132}{22} = 6$ cm

\Rightarrow Ans - (D)

Question 24

$\triangle XYZ$ is right angled at Y. If $m\angle X = 30^\circ$, then find the value of $(\cos Z + \frac{1}{3})$.

A $\frac{(2 + \sqrt{3})}{2}$

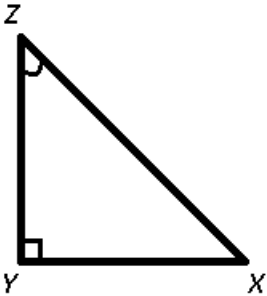
B $\frac{(2\sqrt{2} + \sqrt{3})}{2}$

C $1 + \sqrt{3}$

D $\frac{5}{6}$

Answer: D

Explanation:



Sum of angles of $\triangle XYZ = \angle X + \angle Y + \angle Z = 180^\circ$

$\Rightarrow 30^\circ + 90^\circ + \angle Z = 180^\circ$

$\Rightarrow \angle Z = 180^\circ - 120^\circ = 60^\circ$

To find : $(\cos Z + \frac{1}{3})$

$= \cos(60^\circ) + \frac{1}{3}$

$= \frac{1}{2} + \frac{1}{3}$

$= \frac{5}{6}$

\Rightarrow Ans - (D)

Question 25

In $\triangle XYZ$ measure of angle Y is 90° . If $\tan X = \frac{15}{8}$, and $XY = 16$ cm, then what is the length (in cm) of side YZ?

A 34

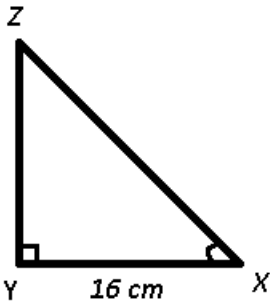
B 30

C 15

D 14

Answer: B

Explanation:



Given : $XY = 16 \text{ cm}$ and $\tan X = 15/8$

To find : $YZ = ?$

Solution : In right $\triangle XYZ$,

$$\Rightarrow \tan(X) = \frac{YZ}{XY}$$

$$\Rightarrow \frac{15}{8} = \frac{YZ}{16}$$

$$\Rightarrow YZ = \frac{15}{8} \times 16 = 30 \text{ cm}$$

\Rightarrow Ans - (B)

Daily Free SSC Practice Set

Reasoning

Instructions

For the following questions answer them individually

Question 26

In the following question, select the related word pair from the given alternatives.

Balance : Mass :: ? : ?

- A Speed : Odometer
- B Second : Time
- C Thermometer : Temperature
- D Ammeter : Wind

Answer: C

Explanation:

Expression = Balance : Mass :: ? : ?

First is used to measure second, i.e. Spring balance is used to measure mass, similarly a thermometer measure temperature.

\Rightarrow Ans - (C)

Free SSC Study Material (18,000 Solved Questions)

Question 27

In the following question, select the related number from the given alternatives.

54 : 135 :: 32 : ?

- A 90
- B 80
- C 65
- D 74

Answer: B

Explanation:

Expression = $54 : 135 :: 32 : ?$

The numbers are of the form = $2.5n$

Eg :- $2.5 \times 54 = 135$

Similarly, $2.5 \times 32 = 80$

=> Ans - (B)

Question 28

In the following question, select the related letter/letters from the given alternatives.

RTK : NPG :: XSP : ?

- A TPM
- B SOM
- C SPL
- D TOL

Answer: D

Explanation:

Expression = $RTK : NPG :: XSP : ?$

The pattern followed is :

R	T	K
(-4)	(-4)	(-4)
N	P	G

Similarly, for XSP : **TOL**

X	S	P
(-4)	(-4)	(-4)
T	O	L

=> Ans - (D)

Question 29

In the following question, select the odd word pair from the given alternatives

- A Ant - Insect
- B Chair - Furniture
- C Sketch pen - Stationery
- D Bird - Parrot

Answer: D

Explanation:

First is one of the types of second, ant is an insect, chair is a part of furniture and sketch pen is a stationary, hence **Bird - Parrot** is the odd one out, since its order is reversed.

=> Ans - (D)

1500+ Very Important Free SSC Solved Questions

Question 30

In the following question, four number pairs are given. The number on left side of (-) is related to the number on the right side of (-) with some Logic/Rule/Relation. Three are similar on basis of same Logic/Rule/Relation. Select the odd one out from the given

A 12 - 8

B 28 - 24

C 66 - 62

D 84 - 76

Answer: D

Explanation:

The difference between each of the pair of numbers is 4.

But in the last option => $84 - 76 = 8$

Thus, (84 - 76) is the odd one out.

=> Ans - (D)

Question 31

In the following question, select the odd letter/letters from the given alternatives.

A RNJ

B TPL

C AWS

D EBX

Answer: D

Explanation:

(A) : R (-4 letters) = N (-4 letters) = J

(B) : T (-4 letters) = P (-4 letters) = L

(C) : A (-4 letters) = W (-4 letters) = S

(D) : E (-3 letters) = B (-4 letters) = X

=> Ans - (D)

Question 32

From the given alternatives, according to dictionary, which word will come at FIRST position?

1. Packing
2. Panda
3. Painless
4. Pacts
5. Panic

- A Panda
- B Pacts
- C Painless
- D Packing

Answer: D

Explanation:

As per the order of dictionary :

= Packing -> Pacts -> Painless -> Panda -> Panic

Thus, the first word = **Packing**

=> Ans - (D)

SSC Exam Update Videos & Free Study Material (YouTube Channel)

Question 33

In the following question, select the missing number from the given series.

60, - 52, 44, - 36, 28, ?

- A - 18
- B - 12
- C - 24
- D - 20

Answer: D

Explanation:

Decreasing multiples of 16 are alternatively subtracted and added respectively.

$$60 - 112 = -52$$

$$-52 + 96 = 44$$

$$44 - 80 = -36$$

$$-36 + 64 = 28$$

$$28 - 48 = -20$$

=> Ans - (D)

Question 34

A series is given with one term missing. Select the correct alternative from the given ones that will complete the series.

L, P, T, ?, B, F, ?

- A X, J
- B Y, K
- C W, I
- D Y, J

Answer: A

Explanation:

Series : L, P, T, ?, B, F, ?

The pattern followed is :

L (+4 letters) = P (+4 letters) = T (+4 letters) = X (+4 letters) = B (+4 letters) = F (+4 letters) = J

=> Ans - (A)

Question 35

Ankit walks 17 km towards east. He turn left and walks 17 km. He turns left again and walks 24 km to reach point A. What is the straight line distance (in km) between the starting point and point A?

A $13\sqrt{2}$

B $14\sqrt{4}$

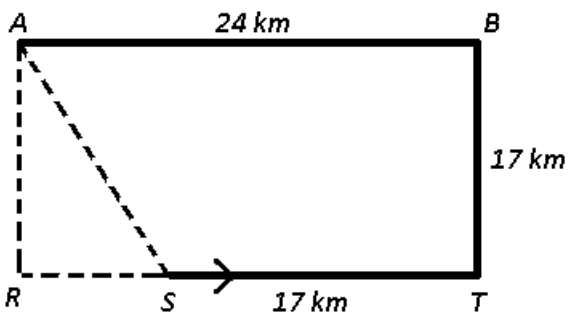
C $4\sqrt{2}$

D $11\sqrt{2}$

Answer: A

Explanation:

Let Ankit starts from point S walks 17 km towards east to reach T. He turn left and walks 17 km northwards to reach B. He turns left again and walks towards west 24 km to reach point A.



$$\Rightarrow AS^2 = (AR)^2 + (RS)^2$$

$$\Rightarrow AS^2 = (17)^2 + (7)^2$$

$$\Rightarrow AS^2 = 289 + 49 = 338$$

$$\Rightarrow AS = \sqrt{338} = 13\sqrt{2} \text{ km}$$

\therefore Distance between the starting point and point A = $13\sqrt{2}$ km

=> Ans - (A)

Latest Job Updates on Telegram - Join here

Question 36

From the given alternatives, select the word which CANNOT be formed using the letters of the given word.

Uninspiring

A Ring

B Spring

C Nothing

D Sun

Answer: C

Explanation:

The word UNINSPIRING does not contain any 'O' or 'T' or 'H', thus the term **Nothing** cannot be formed.

=> Ans - (C)

Question 37

In a certain code language, "MAID" is written as "13194" and "TEAR" is written as "205118". How is "OHMS" written in that code language?

- A 198135
- B 6191312
- C 1213195
- D 1581319

Answer: D

Explanation:

The letters are numbered based on their position according to the English alphabetical order. A=1, B=2, C=3, D=4 and so on.

Eg :- MAID = 13,1,9,4 -> 13194

TEAR = 20,5,1,18 -> 205118

Similarly, OHMS = 15,8,13,19 -> **1581319**

=> Ans - (D)

Question 38

In a certain code language, 'x' represents '+', '÷' represents 'x', '-' represents '÷' and '+' represents '-'. Find out the answer to the following question.

$$16 - 2 + 35 \times 20 \div 2 = ?$$

- A 13
- B 29
- C 11
- D 32

Answer: A

Explanation:

Expression : $16 - 2 + 35 \times 20 \div 2 = ?$

$$\equiv 16 \div 2 - 35 + 20 \times 2$$

$$= 8 - 35 + 40$$

$$= 48 - 35 = 13$$

=> Ans - (A)

Join SSC Daily Quiz Telegram Group

Question 39

The following equation is incorrect. Which two signs should be interchanged to correct the equation?

$$14 - 6 \times 30 \div 10 + 4 = 28$$

- A - and +
- B ÷ and x

C \times and +

D $-$ and \div

Answer: A

Explanation:

Expression : $14 - 6 \times 30 \div 10 + 4 = 28$

(A) : $-$ and $+$

$$\equiv 14 + 6 \times 30 \div 10 - 4 = 28$$

$$\text{L.H.S.} = 14 + (6 \times \frac{30}{10}) - 4$$

$$= 14 + (6 \times 3) - 4 = 28 = \text{R.H.S.}$$

\Rightarrow Ans - (A)

Question 40

If $8\&4 = 64$, $5\&8 = 80$ and $8\&1 = 16$, then find the value of $9\&9 = ?$

A 124

B 40

C 162

D 28

Answer: C

Explanation:

Given : $8\&4 = 64$, $5\&8 = 80$ and $8\&1 = 16$

If we replace ' $\&$ ' with ' \times ' and also multiply the final result with '2', then we will get the desired result.

$$\text{Eg :- } 2 \times (8 \times 4) = 64$$

$$\text{and } 2 \times (5 \times 8) = 80 \text{ and } 2 \times (8 \times 1) = 16$$

$$\text{Similarly, } 2 \times (9 \times 9) = 162$$

\Rightarrow Ans - (C)

Question 41

Which of the following terms follows the trend of the given list?

XYXXXXXY, XXYXXXXY, XXXYXXXXY, XXXXYXXX, XXXXXYXY, _____.

A YXXXXXXY

B XYXXXXXY

C XXXXXXY

D XXYXXXXY

Answer: C

Explanation:

Expression : XYXXXXXY, XXYXXXXY, XXXYXXXXY, XXXXYXXX, XXXXXYXY, _____.

The pattern followed is that in each term there are combinations of 6 X's and 2 Y's in which last letter is always 'Y' and the position of second Y keeps shifting one place to the right starting from second position.

Thus, in the missing term, the second last term will be 'Y' = XXXXXYY

\Rightarrow Ans - (C)

25 SSC CHSL Mocks for just Rs. 149

Question 42

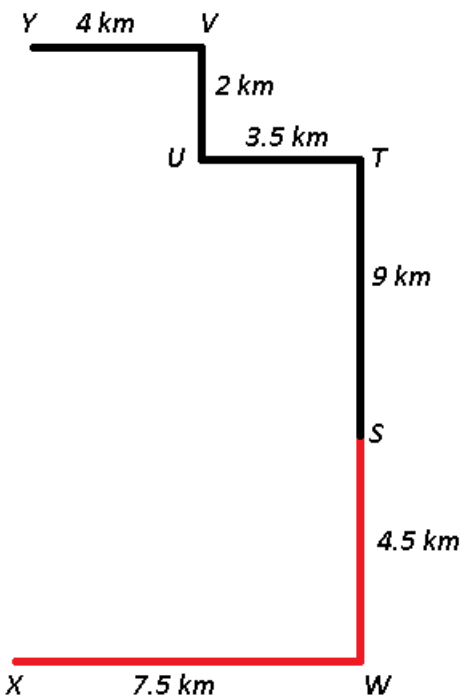
Two horse drawn wagons start from the same farm. Wagon X travels South 4.5 km and then turns right and travels 7.5 km. In the mean while wagon Y travels 9 km North, then 3.5 km West, then 2 km North, then it turns left and travels 4 km. Where is wagon Y with respect to wagon X?

- A 6.5 km North
- B 15.5 km North
- C 15.5 km South
- D 6.5 km South

Answer: B

Explanation:

Let the two horse drawn wagons start from the same farm S. Wagon X (red) travels South 4.5 km to W and then turns right and travels 7.5 km towards west. In the mean while wagon Y (black) travels 9 km North, then 3.5 km West to reach U, then 2 km North, finally it turns left and travels 4 km westwards to stop at point Y.



$$\Rightarrow XY = 4.5 + 9 + 2 = 15.5 \text{ km}$$

\therefore Wagon Y is 15.5 km north with respect to wagon X.

\Rightarrow Ans - (B)

Question 43

In the question two statements are given, followed by two conclusions, I and II. You have to consider the statements to be true even if it seems to be at variance from commonly known facts. You have to decide which of the given conclusions, if any, follows from the given statements.

Statement I: Some papers are tabloids

Statement II: No magazines are papers

Conclusion I: No tabloids are magazines

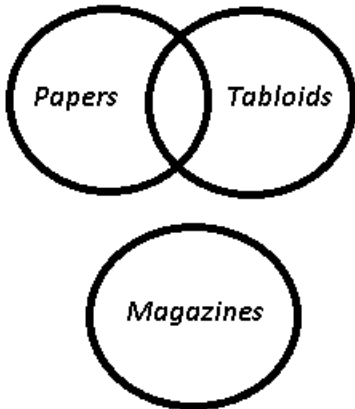
Conclusion II: All magazines are tabloids

- A Only conclusion I follows
- B Only conclusion II follows
- C Both conclusions I and II follow
- D Neither conclusion I nor conclusion II follows

Answer: D

Explanation:

The venn diagram for above statements is :



Conclusion I: No tabloids are magazines = may or may not be true

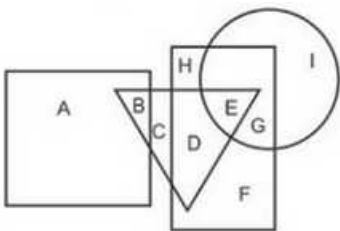
Conclusion II: All magazines are tabloids = false

Thus, neither conclusion I nor conclusion II follows.

=> Ans - (D)

Question 44

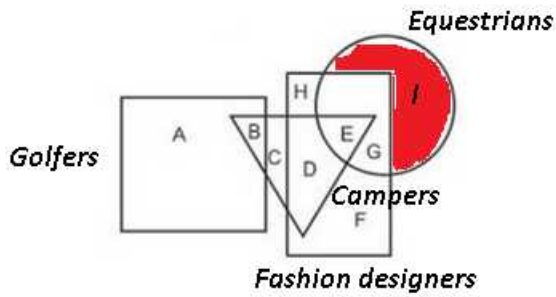
In the following figure, rectangle represents Fashion designers, circle represents Equestrians, triangle represents Campers and square represents Golfers. Which set of letters represents Equestrians who are not Fashion designers?



- A EG
- B DEG
- C I
- D E

Answer: C

Explanation:



Equestrians who are not Fashion designers are represented by = I

=> Ans - (C)

SSC CHSL Free Mock Test

Question 45

A series is given with one term missing. Select the correct alternative from the given ones that will complete the series.
UPY, QLU, MHQ, IDM, ?

- A FYI
- B EYJ
- C EZI
- D FZJ

Answer: C

Explanation:

Series : UPY, QLU, MHQ, IDM, ?

The pattern followed in each letter of the terms is :

1st letter : U (-4 letters) = Q (-4 letters) = M (-4 letters) = I (-4 letters) = E

2nd letter : P (-4 letters) = L (-4 letters) = H (-4 letters) = D (-4 letters) = Z

3rd letter : Y (-4 letters) = U (-4 letters) = Q (-4 letters) = M (-4 letters) = I

Thus, missing term = **EZI**

=> Ans - (C)

Question 46

In the following question, select the missing number from the given series.
147, 153, 159, ?, 171, 177

- A 161
- B 164
- C 168
- D 165

Answer: D

Explanation:

'6' is added to all the numbers.

$147 + 6 = 153$

$153 + 6 = 159$

$$159 + 6 = 165$$

$$165 + 6 = 171$$

$$171 + 6 = 177$$

=> Ans - (D)

Question 47

In the following question, four groups of three numbers are given. In each group the second and third number are related to the first number by a Logic/Rule/Relation. Three are similar on basis of same Logic/Rule/Relation. Select the odd one out from the given alternatives.

A (12, 35, 59)

B (16, 47, 79)

C (19, 57, 94)

D (9, 26, 44)

Answer: C

Explanation:

The numbers are of the form : $(x, 3x-1, 5x-1)$

But in the third option, we have = $3 \times 19 - 1 = 56 \neq 57$

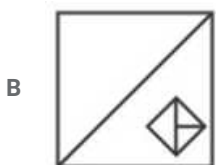
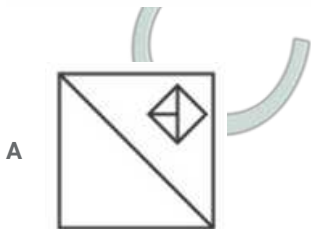
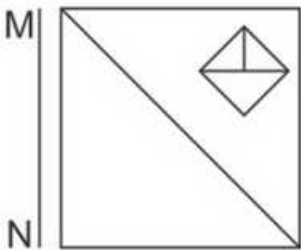
Thus, (19, 57, 94) is the odd one out.

=> Ans - (C)

SSC CHSL Previous Papers (DOWNLOAD PDF)

Question 48

If a mirror is placed on the line MN, then which of the answer figures is the right image of the given figure?



D



Answer: D

Explanation:

A vertical mirror is placed, so the object on the left will appear right in reverse position and vice-versa.

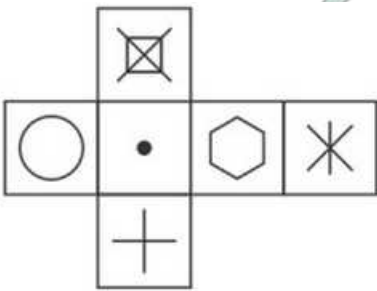
So the diagonal originating from top left will now appear at top right, thus the first and third options will be eliminated.

Also, in the question figure, the rhombus at top right will appear at top left side, hence fourth option is the right image.

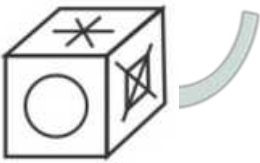
=> Ans - (D)

Question 49

Which of the following cube in the answer figure cannot be made based on the unfolded cube in the question figure?
137489



A



B



C



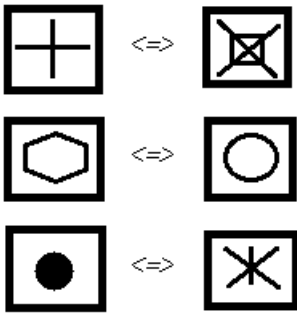
D



Answer: B

Explanation:

When we fold the given figure, the square with a 'dot' sign will become the base of the cube and the square with a 'X' sign with vertical line will become top, and thus they will face each other. Similarly, the sides which will face each other will be :



Since, the opposite sides cannot be adjacent in the cube, thus the cube in the second option is not possible.

=> Ans - (B)

Question 50

A word is represented by only one set of numbers as given in any one of the alternatives. The sets of numbers given in the alternatives are represented by two classes of alphabets as shown in the given two matrices. The columns and rows of Matrix-I are numbered from 0 to 4 and that of Matrix-II are numbered from 5 to 9. A letter from these matrices can be represented first by its row and next by its column, for example 'IC can be represented by 23, 41 etc and 7 can be represented by 59, 67 etc. Similarly, you have to identify the set for the word 'NAME'

Matrix - I

	0	1	2	3	4
0	H	H	C	E	A
1	M	E	A	B	I
2	M	L	G	K	E
3	D	H	M	L	E
4	C	K	A	B	E

Matrix - II

	5	6	7	8	9
5	O	S	Z	O	P
6	N	W	P	X	W
7	N	S	R	Q	Q
8	O	P	N	X	V
9	V	Z	S	S	T

- A 24,59,30,99
- B 65,12,32,24
- C 10,68,14,95
- D 30,85,44,75

Answer: B

Explanation:

- (A) : 24,59,30,99 = EPDT
- (B) : 65,12,32,24 = **NAME**
- (C) : 10,68,14,95 = MXIV
- (D) : 30,85,44,75 = DOEN

=> Ans - (B)

SSC CGL Previous Papers (DOWNLOAD PDF)

English

Instructions

In the following question, some part of the sentence may have errors. Find out which part of the sentence has an error and select the appropriate option. If a sentence is free from error, select 'No Error'.

Question 51

Writing therapy posit that writing about one's (a)/ feelings gradually eases the impact (b)/ of emotional trauma. (c)/ No error (d)

- A a

- B b
- C c
- D d



Answer: A

SSC CGL Free Mock Test (Latest Pattern)

Question 52

The rotational period and seasonal cycles of the Mars are (a)/ similar to those of the Earth, as (b)/ is the tilt that produces the seasons. (c)/ No error (d)

- A a
- B b
- C c
- D d

Answer: A

Instructions

In the following question, the sentence given with blank to be filled in with an appropriate word. Select the correct alternative out of the four and indicate it by selecting the appropriate option.

Question 53

They _____ the storm approaching.

- A seen
- B looked
- C admired
- D saw

Answer: D

Question 54

This is _____ worse than I thought it would be.

- A far
- B about
- C more
- D the

Answer: A

SSC CHSL Important Questions and Answers (Download PDF)

Instructions

In the following question, out of the given four alternatives, select the one which best expresses the meaning of the given word.

Question 55

Munificent

- A Stingy
- B Generous
- C Careful
- D Sparse

Answer: B

Question 56

Fledgling

- A Wild
- B Apprentice
- C Fugitive
- D Ancient

Answer: B

Instructions

In the following question, out of the given four alternatives, select the one which is opposite in meaning of the given word.

Question 57

Squall

- A Wind
- B Scream
- C Cry
- D Peace

Answer: D

SSC CHSL Study Material

Question 58

Inquisite

- A Examine
- B Interrogate
- C Dig
- D Ignore

Answer: D

Instructions

For the following questions answer them individually

Question 59

Rearrange the parts of the sentence in correct order.

Pablo Picasso

P : showed his truly

Q : a very young age

R : exceptional talent from

- A RQP
- B PQR
- C PRQ
- D RPQ

Answer: C

Question 60

A sentence has been given in Active/Passive Voice. Out of the four given alternatives, select the one which best expresses the same sentence in Passive/Active Voice.

Someone has collected the papers.

- A The papers have been collected by someone.
- B The papers are collected by someone.
- C The papers are being collected.
- D The papers is collected by someone.

Answer: A

SSC CHSL Free App

Question 61

A sentence has been given in Direct/Indirect Speech. Out of the four given alternatives, select the one which best expresses the same sentence in Indirect/Direct Speech.

Mr. Pattinson said, "I brought a chocolate for you."

- A Mr. Pattinson brought a chocolate for me.
- B Mr. Pattinson said that he had brought a chocolate for me.
- C A chocolate was brought by Mr. Pattinson for me.
- D Mr. Pattinson said he brought a chocolate for me.

Answer: B

Question 62

In the following question, a word has been written in four different ways out of which only one is correctly spelt. Select the correctly spelt word.

- A Exipberamce
- B Exuberance
- C Axuberence
- D Exubereance

Answer: B

Instructions

In the following passage, some of the words have been left out. Read the passage carefully and select the correct answer for the given blank out of the four alternatives.

In order to reason _____ it is not merely necessary to have a good intellect. An athlete may have the proper _____, good framework, and symmetrical muscles, but he cannot expect to cope _____ others of his kind unless he has learned to develop _____ muscles and to use them to the best advantage. And, in the same way, the man who wishes to reason correctly must develop his intellectual faculties and must also learn the art _____ using them to the best advantage.

Question 63

In order to reason _____ it is not merely

- A correct
- B correction
- C correctness
- D correctly

Answer: D

Daily Free SSC Practice Set

Question 64

have the proper _____, good framework

- A proportional
- B proportionally
- C proportioned
- D proportions

Answer: D

Question 65

expect to cope _____ others of his kind

- A by
- B with
- C thus
- D so

Answer: B

Question 66

to develop _____ muscles

- A this
- B that
- C them
- D those

Answer: D

Free SSC Study Material (18,000 Solved Questions)

Question 67

learn the art _____ using them to the

- A for
- B of
- C from
- D off

Answer: B

Instructions

In the following question, out of the four alternatives, select the alternative which best expresses the meaning of the idiom/phrase.

Question 68

Every dog has his day

- A The weakest will become the strongest, that is the cycle of life.
- B Everyone will have good luck at some point in their lives.
- C Loyalty will not go unrewarded.
- D Every person has a talent, and one will discover it one day.

Answer: B

Question 69

I can't think straight

- A Accept that the puzzle is too difficult for you.
- B Faced with a dilemma.
- C Cannot think rationally due to being overwhelmed with emotion.
- D Ask for advice on a difficult problem.

Answer: C

1500+ Very Important Free SSC Solved Questions

Instructions

In the following question, out of the four alternatives, select the alternative which is the best substitute of the words/sentence.

Question 70

Regard something as being due to a cause

- A Adventitious
- B Superfluous
- C Incidental
- D Ascribe

Answer: D

Question 71

Showing poor taste and quality

- A Savour
- B Pike
- C Tacky
- D Exquisite

Answer: C

Instructions

In the following question, out of the four alternatives, select the alternative which will improve the bracketed part of the sentence. In case no improvement is needed, select "no improvement".

Question 72

The cost of a cylinder then (was) about ₹18.

- A is
- B are
- C were
- D no improvement

Answer: D

SSC Exam Update Videos & Free Study Material (YouTube Channel)

Question 73

Great personalities (has attained) their heights by doing things differently

- A have attained
- B have attain

- C have attaining
- D no improvement

Answer: A

Instructions

For the following questions answer them individually

Question 74

The question below consists of a set of labelled sentences. Out of the four options given, select the most logical order of the sentences to form a coherent paragraph.

With global warming on
A-the rise, we have to do
B-save the environment
C-every bit that we can to

- A ABC
- B ACB
- C CAB
- D BAC

Answer: B

Question 75

In the following question, four words are given out of which one word is correctly spelt. Select the correctly spelt word.

- A annexations
- B anexations
- C annexations
- D anexeations

Answer: C

Latest Job Updates on Telegram - Join here

General Awareness

Instructions

For the following questions answer them individually

Question 76

Who among the following has classified money in to two types on the basis of its nature?

- A John Maynard Keynes
- B Adam Smith
- C Karl Marx
- D Milton Friedman

Answer: A

Join SSC Daily Quiz Telegram Group

Question 77

SIDO is related to the development of which of the following?

- A Small industry
- B Steel industry
- C Software industry
- D Sugar industry

Answer: A

Question 78

Bahmani ruler Tajuddin Firuz married the daughter of which of the following Vijayanagara rulers?

- A Harihar II
- B Devaraya I
- C Devaraya II
- D Krishnadevaraya

Answer: B

Question 79

In whose reign, the office of the Vakil was abolished?

- A Akbar
- B Jahangir
- C Shah Jahan
- D Aurangzeb

Answer: C

25 SSC CHSL Mocks for just Rs. 149

Question 80

Angel Falls is situated on which river?

- A Amazon
- B Orinoco
- C Caroni
- D Parana

Answer: C

Question 81

The southern boundary of India's mainland is _____.

- A 6° 4 N
- B 7° 4 N
- C 8° 4 N
- D 6° 8 N

Answer: C

Question 82

Jain literature is also called as _____.

- A Pitaka
- B Agam
- C Kalpa
- D Sutt

Answer: B

SSC CHSL Free Mock Test

Question 83

In a bid to boost their bilateral strategic partnership and to increase defence co-operation, India and which of the following countries held their inaugural Foreign Secretaries and Defence Secretaries dialogue in New Delhi on December 12, 2017?

- A Japan
- B Singapore
- C Australia
- D South Africa

Answer: C

Question 84

In January 2018, Dr. Vinod Paul became first Indian to be awarded prestigious Ihsan Dogramaci Family Health Foundation Prize by World Health Organisation (WHO). He is a member of _____.

- A NITI Aayog
- B UPSC
- C Lok Sabha
- D Rajya Sabha

Answer: A

Question 85

Nepali language is written in which script?

- A Uchen
- B Tirhuta
- C Devanagari
- D No option is correct.

Answer: C

SSC CHSL Previous Papers (DOWNLOAD PDF)

Question 86

Which of the following statements is CORRECT?

- A NaCl has same equivalent weight and molecular weight.
- B H₂SO₄ has same equivalent weight and molecular weight.
- C CaCl₂ has same equivalent weight and molecular weight.
- D Na₂SO₄ has same equivalent weight and molecular weight

Answer: A

Question 87

Which of the following wave CANNOT propagate in a vacuum?

- A X-rays
- B Radio waves
- C UV-rays
- D Ultrasonic waves

Answer: D

Question 88

Which among the following is NOT a level of Government in India?

- I. Local level government
- II. State level government
- III. National level government

- A Only I
- B Only II
- C Only III
- D No option is correct.

Answer: D

SSC CGL Previous Papers (DOWNLOAD PDF)

Question 89

The idea of people's participation in the Panchayati Raj System extends to how many other levels?

- A 1
- B 2
- C 4
- D 5

Answer: B

Question 90

In sexual reproduction the male gametes are generally _____.

- A Only motile
- B Only small
- C Both motile and small
- D Only food stores

Answer: C

Question 91

Which tissue provides support to plants and also stores food?

- A Parenchyma
- B Collenchyma
- C Sclerenchyma
- D No option is correct.

Answer: A

SSC CGL Free Mock Test (Latest Pattern)

Question 92

Where was the India's first 'All India Institute of Ayurveda (AIIA)' inaugurated on 'Ayurveda Day', 17th October 2017?

- A Mumbai
- B Dehradun
- C New Delhi
- D Bangalore

Answer: C

Question 93

Which region of India is set to get the country's first ever 'Air Dispensary'?

- A Eastern Ghats
- B Northeastern states
- C Coastal plains
- D Jammu and Kashmir

Answer: B

Question 94

Which expert committee has been constituted by Reserve Bank of India to look into the issues relating to classification of bad loans, effectiveness of audits and rising incidents of frauds?

- A Vinay Sheel Oberoi Committee
- B N. Gopaldaswami Committee
- C Y. H. Malegam Committee
- D N. Chandrashekar Committee

Answer: C

SSC CHSL Important Questions and Answers (Download PDF)

Question 95

On 24 January 2018, the Ministry of Women and Child Development launched a Management Information System (MIS) portal for the _____.

- A Scheme for Adolescent Girls
- B Scheme for Widow women
- C Scheme for Acid attack victims
- D Anganwadi Services Training Programme

Answer: D

Question 96

What is the heat released by a heating filament rated 24 W when it is kept on for 6 seconds?

- A 4
- B 144
- C 72
- D 8

Answer: B

Question 97

When the vibrating object moves backwards, it creates a region of low pressure in the medium called _____.

- A elongation
- B perpetuation
- C gyration
- D rarefaction

Answer: D

SSC CHSL Study Material

Question 98

Many marine animals use _____ dissolved in sea-water to make their shells.

- A acids
- B alkalis
- C silica
- D carbonates

Answer: D

Question 99

Which of the statements given below are correct?

- A) Zhansaya Abdumalik won the Chess 2017 Women's World Junior Chess Championship.
- B) In 2017, Marc Marquez raced in MotoGP for Yamaha.
- C) Zhu Yuling won the Tennis 2017 Wimbledon Championships Women's Singles.

- A Only A
- B Both A and C
- C Both B and C
- D No option is correct.

Answer: A

Question 100

In HTML, _____ attribute is used for merging of two or more adjacent columns.

- A CELLPADDING
- B CELLSPACING
- C ROWSPAN
- D COLSPAN

Answer: D

SSC CHSL Free App

25 SSC CHSL Mocks for just Rs. 149

SSC CHSL Free Mock Test

SSC CHSL Previous Papers (DOWNLOAD PDF)

SSC CGL Previous Papers (DOWNLOAD PDF)

SSC CGL Free Mock Test (Latest Pattern)

SSC CHSL Important Questions and Answers (Download PDF)

SSC CHSL Study Material

SSC CHSL Free App

Daily Free SSC Practice Set

Free SSC Study Material (18,000 Solved Questions)

1500+ Very Important Free SSC Solved Questions

SSC Exam Update Videos & Free Study Material (YouTube Channel)

Latest Job Updates on Telegram - Join here

Join SSC Daily Quiz Telegram Group