



SSC MTS 21st August 2019 Shift-2

All rights reserved. No part of this publication may be reproduced, distributed, or transmitted in any form or by any means, electronic, mechanical, photocopying, recording or otherwise, or stored in any retrieval system of any nature without the permission of cracku.in, application for which shall be made to support@cracku.in

Instructions

For the following questions answer them individually

Question 1

Select the correctly spelt word.

- A Reverence
- B Reverence
- C Reverence
- D Reverence

Answer: A

SSC CHSL Previous Papers (DOWNLOAD PDF)

Question 2

Select the most appropriate meaning of the given idiom.

Too close to call

- A very close to heart
- B Winning a competition
- C A very narrow margin
- D Huddled together

Answer: C

Question 3

Select the most appropriate synonym of the given word.

Impious

- A Irreligious
- B Devout
- C Loyal
- D Skilled

Answer: A

Question 4

Select the most appropriate option to substitute the underlined segment in the given sentence. If there is no need to substitute it, select No improvement.

Tommy's eyes grew wide on a sight of the new bicycle.

- A at a sight of
- B on the sight of
- C No improvement

D at the sight of

Answer: D

SSC Stenographer Previous Papers (Download PDF)

Question 5

Select the correctly spelt word.

A Ninetteen

B Ninneeteen

C Nineteen

D Ninteen

Answer: C

Question 6

Select the most appropriate option to substitute the underlined segment in the given sentence. If there is no need to substitute it, select No improvement.

Greyhounds do not make good watchdogs but they are very gentle with children.

A more gentle to

B very gentler with

C No improvement

D much gentle with

Answer: C

Question 7

Select the most appropriate antonym of the word.

Glee

A Joy

B Woe

C Mirth

D Fun

Answer: B

SSC GD Constable Previous Papers

Question 8

Select the most appropriate option to substitute the underlined segment in the given sentence. If there is no need to substitute it, select No improvement.

It has been announcing that the bus will be late by an hour.

A It has announced

- B No improvement
- C It has been announced
- D It is announcing

Answer: C

Question 9

Identify the segment in the sentence which contains the grammatical error.

The travel agent is making the arrangements from my trips.

- A is making
- B The travel agent
- C the arrangements
- D from my trips

Answer: D

Instructions

In the following passage some words have been deleted. Fill in the blanks with the help of the alternatives given. Select the most appropriate option for each blank.

Comprehension:

Bacteria are extremely (1)_____ living things. While we measure our own sizes in inches or centimetres, bacterial size is measured in (2)_____. One micron is a thousandth of a millimetre, a pinhead is about a millimetre (3)_____. Rod shaped bacteria are usually from two to four microns (4)_____, while rounded ones are generally one micron in (5)_____.

Question 10

Select the most appropriate option to fill in blank No.1.

- A ugly
- B small
- C clean
- D dirty

Answer: B

SSC MTS Previous Papers (DOWNLOAD PDF)

Question 11

Select the most appropriate option to fill in blank No.2.

- A feet
- B kilometres
- C metres
- D microns

Answer: D

Question 12

Select the most appropriate option to fill in blank No.3.

- A Aside
- B Beneath
- C Across
- D Beside

Answer: C

Question 13

Select the most appropriate option to fill in blank No.4.

- A long
- B tall
- C short
- D deep

Answer: A

[SSC CGL Previous Papers \(DOWNLOAD PDF\)](#)

Question 14

Select the most appropriate option to fill in blank No.5.

- A weight
- B height
- C depth
- D diameter

Answer: D

Instructions

For the following questions answer them individually

Question 15

Select the most appropriate word to fill in the blank and make a meaningful sentence.

The diamond necklace is too _____ for me.

- A extravagant
- B austere
- C luscious
- D insufficient

Answer: A

Question 16

Select the most appropriate meaning of the given idiom.

Get someone's goat

- A To hurt someone
- B To irritate someone
- C To cheat someone
- D To abuse someone

Answer: B

SSC CGL Free Mock Test (Latest Pattern)

Question 17

Select the most appropriate word for the given group of words.

One who collects stamps

- A Geologist
- B Conjuror
- C Curator
- D Philatelist

Answer: D

Question 18

Select the most appropriate option to fill in the blank and make a grammatically correct sentence.

There was a heated discussion _____ two members of the club.

- A of
- B among
- C between
- D in

Answer: C

Question 19

Select the most appropriate antonym of the word.

Attract

- A Praise
- B Lure
- C Repel
- D Charm

Answer: C

SSC CHSL Free Mock Test (Latest Pattern)

Question 20

Select the most appropriate synonym of the given word.

Prodigy

- A Tranquil
- B Anger
- C Plight
- D Genius

Answer: D

Question 21

Select the most appropriate option to fill in the blank and make a grammatically correct sentence.

It was _____ honour for Seema to be selected as a teacher trainer.

- A a
- B an
- C No article
- D the

Answer: B

Instructions

Identify the segment in the sentence which contains the grammatical error.

Question 22

Seema was sprinkled the cashews over the pie to garnish it.

- A Seema was sprinkled
- B the cashews
- C to garnish it
- D over the pie

Answer: A

SSC Stenographer Previous Papers (Latest Pattern)

Question 23

Pallavi was relaxing in the beach at this time yesterday.

- A relaxing in the
- B time yesterday
- C beach at this

D Pallavi was

Answer: A

Instructions

For the following questions answer them individually

Question 24

Select the most appropriate word to fill in the blank and make a meaningful sentence.

The ISRO team is working round the clock to _____ Chandrayaan-2.

A introduce

B launch

C navigate

D steer

Answer: B

Question 25

Select the most appropriate word for the given group of words.

A large number of fish swimming together

A Herd

B Pack

C Shoal

D Horde

Answer: C

SSC GD Constable Free Mock Test (Latest Pattern)

Reasoning

Instructions

For the following questions answer them individually

Question 26

Five persons are standing in one line facing North. One of the two persons at extreme end is a painter and the other is a basketball player. A lawyer is to right of a student. A dancer is to the left of the basketball player. What is the position of the lawyer from the left?

A 4th

B 2nd

C 3rd

D 5th

Answer: C

SSC MTS Free Mock Test (Latest Pattern)

Question 27

In a certain code language, 'FLAG' is written as 'KQFL'. What will be the code for 'TRUCK' in that code language?

- A XWAJR
- B YWZHP
- C YWAHR
- D VWXLR

Answer: B

Question 28

Read the given statements and conclusions carefully. Assuming that the information given in the statements is true, even if it appears to be at variance with commonly known facts, decide which of the given conclusions logically follow(s) from the statements.

Statements:

All ships are butterflies.

Some aeroplanes are butterflies.

Conclusions:

I. All ships are aeroplanes.

II. Some butterflies are ships.

- A Both conclusions I and II follow
- B Only conclusion II follows
- C Neither conclusion I nor II follows
- D Only conclusion I follows

Answer: B

Question 29

If DBFEI is coded as 33568, then the code for EFIBB is _____.

- A 12358
- B 41325
- C 65112
- D 47831

Answer: D

SSC CPO Free Mock Test (Latest Pattern)

Question 30

Select the number that will replace the question mark.

11	11	11
27	9	?
4	6	9

- A 5
- B 3

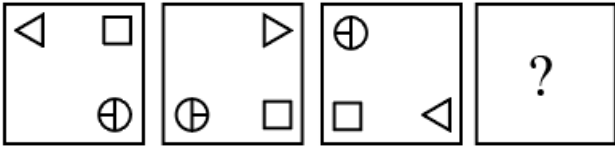
C 9

D 6

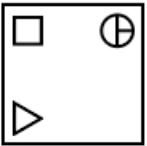
Answer: B

Question 31

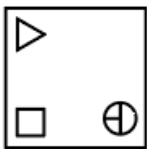
Which of the following answer figures completes the series?



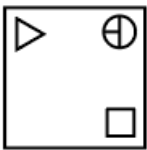
A



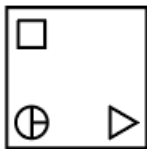
B



C



D



Answer: A

Question 32

In a certain code language, 'PARROT' is written as 'RYTPQR'. What will be the code for 'BEHOLD' in that code language?

A EDTMNB

B DCJMNB

C EDTNOC

D DESNOC

Answer: B

SSC MTS Free Preparation App

Question 33

Six performers Akash, Bishal, Nisha, Diksha, Esha and Firoz will perform on one day each of six days of the week starting from Monday and ending on Saturday. Nisha will perform on a Tuesday. Akash, Firoz and Bishal will perform one after the other in the same order. Diksha will not perform on a Monday or a Wednesday. How many performers perform after Akash?

- A 2
- B 4
- C 3
- D 1

Answer: C

Question 34

Choose the option which is related to the third term in the way second term is related to the first term.
Cockroaches : knives :: Sheep : ?

- A foal
- B Calf
- C larva
- D lamb

Answer: D

Question 35

Which two numbers need to be interchanged to make the given equation correct?

$$16 \times 1792 \div 7 + 9 - 15 = 778$$

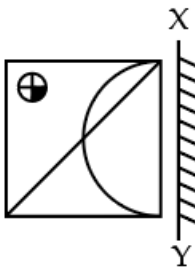
- A 15, 9
- B 16, 7
- C 16, 15
- D 16, 9

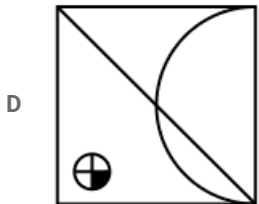
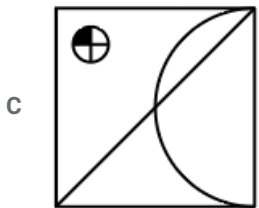
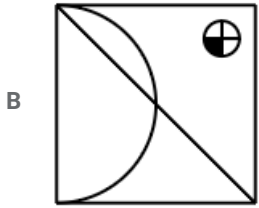
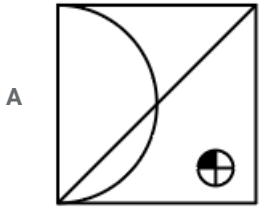
Answer: B

285 SSC Mocks - Just RS. 249

Question 36

If a mirror is placed on the line XY, then which of the answer figures will be the right mirror image of the given figure?





Answer: B

Question 37

Select the option that is related to the third term in the same way as the second term is related to the first term.
Day : Night :: Dawn : ?

A Sunset

B Dusk

C Morning

D Sunrise

Answer: B

Question 38

Select the option that is related to the third term in the same way as the second term is related to the first term.
52 : 65 :: 76 : ?

A 85

B 105

C 115

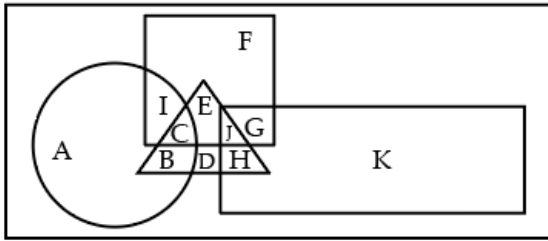
D 95

Answer: D

SSC Exam Free Videos (Youtube)

Question 39

In the following figure, triangle represents teachers, square represents fathers, circle represents poets and rectangle represents Americans. Which set of letters represents 'fathers who are NOT poets'?



- A GEJ
- B ICEFGJ
- C EFGJ
- D BDGF

Answer: C

Question 40

Select the option that is related to the third term in the same way as the second term is related to the first term.

CIN : GMR :: LUV : ?

- A PYZ
- B SZA
- C QXY
- D RZA

Answer: A

Question 41

Which two signs need to be interchanged to make the given equation correct?

$$27 - 3 \times 2 \div 13 + 9 = 14$$

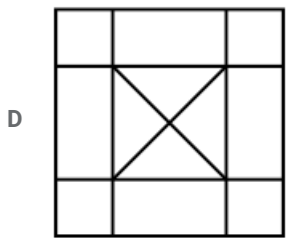
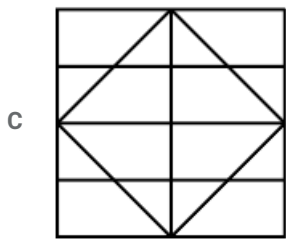
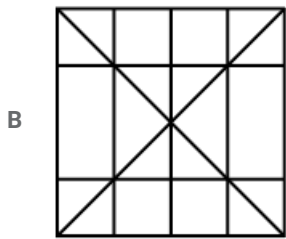
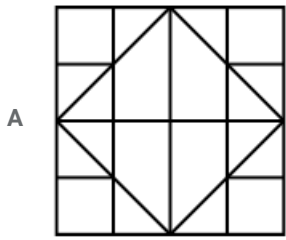
- A $\div, +$
- B \times, \div
- C $-, \div$
- D $-, \times$

Answer: C

SSC Study Material

Question 42

Select the option in which the given figure is embedded. (Rotation is not allowed)



Answer: A

Question 43

Select the term that will come next in the following series.

GN, MT, SZ, ____

A XE

B ZG

C YF

D WD

Answer: C

Question 44

Sahiba, Trishla, Lakshya, Vanshika and Manish are sitting on a bench. Manish is immediately between Trishla and Lakshya. Lakshya is to the left of Vanshika who is not at the end. Who is to the left of Sahiba?

A Trishla

B Manish

C Vanshika

D Lakshya



Answer: C

SSC Daily Practice Set

Question 45

Select the correct option that will complete the series.

7, 25, 79, 241, _____

A 439

B 380

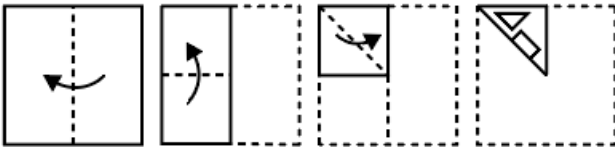
C 652

D 727

Answer: D

Question 46

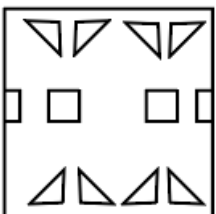
A piece of paper is folded and cut as shown below in the question figures. Select from the given answer figures, how it will appear when unfolded.




A




B



C





Answer: C

Question 47

Select the correct option that will complete the series.

8, 27, 64, 125, ____

A 343

B 280

C 250

D 216

Answer: D

SSC GK Free Tests

Question 48

In a certain code language, '98563' is written as '32896'. What will be the code for '72104' in that code language?

A 15437

B 21362

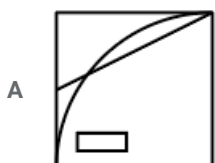
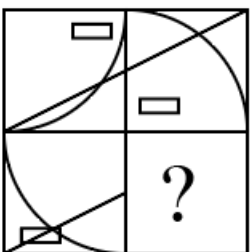
C 15495

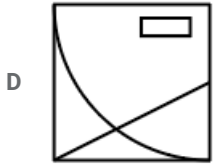
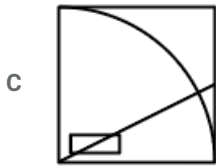
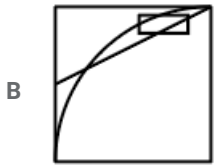
D 24650

Answer: A

Question 49

Which answer figure will complete the pattern in the question figure?





Answer: B

Question 50

Read the given statements and conclusions carefully. Assuming that the information given in the statements is true, even if it appears to be at variance with commonly known facts, decide which of the given conclusions logically follow(s) from the statements.

Statements:

All peacocks are swans.

All parrots are swans.

Conclusion I : Some parrots are peacocks.

Conclusion II : Some swans are peacocks.

Conclusion III : Some swans are parrots.

A All conclusions I, II and III follow

B Only conclusion I and II follows

C Only conclusion I and III follows

D Only conclusion II and III follows

Answer: D

SSC GK Questions

Quant

Instructions

For the following questions answer them individually

Question 51

The Table given below shows the number of three different denomination of notes in four different bank ATMs (SBI, ICICI, HDFC and AXIS).

Bank ATM	Number of 2000 notes	Number of 500 notes	Number of 200 notes
SBI	250	300	150
ICICI	225	200	175
HDFC	200	150	100
AXIS	100	150	250

Taking all the four banks together, the total number of 200 denomination notes is how much less than the total number of 2000 denomination notes?

- A 175
- B 100
- C 150
- D 125

Answer: B

Current Affairs Question and Answers (Download PDF)

Question 52

A, B and C can do a work in 12, 15 and 20 days respectively. In how many days, working together they can complete the same work?

- A 6 days
- B 5 days
- C 7.5 days
- D 4 days

Answer: B

Question 53

If 40% of $\frac{2}{5}$ of a number is 24, then the number is:

- A 148
- B 150
- C 154
- D 136

Answer: B

Explanation:

$$\frac{40}{100} \times \frac{2}{5} \times X = 24$$

$$\frac{2}{5} \times \frac{2}{5} \times X = 24$$

$$\frac{4}{25} \times X = 24$$

$$X = 150$$

Question 54

A man travels 75 km at speed 25 km/h and next 60 km at 20 km/h and there after travel 90 km at 15 km/h. His average speed is:

- A 20.25 km/h
- B 18.75 km/h
- C 15 km/h
- D 25.5 km/h

Answer: B

Daily and Monthly Current Affairs (Download PDF)

Question 55

The radius of a circle is equal to length of the rectangle. The circumference of the circle and breadth of the rectangle is 132 cm and 20 cm respectively. The diagonal of the rectangle is: (Take $\pi = \frac{22}{7}$)

- A 28 cm
- B 27 cm
- C 29 cm
- D 25 cm

Answer: C

Question 56

A solid metal cuboid of $343 \text{ cm} \times 49 \text{ cm} \times 7 \text{ cm}$ is melted and cubes of edge 7 cm are formed. The sum of surface area (in cm^2) of total number of cubes formed is:

- A 10842
- B 100842
- C 16807
- D 120506

Answer: B

Question 57

The Table given below shows the number of three different denomination of notes in four different bank ATMs (SBI, ICICI, HDFC and AXIS).

Bank ATM	Number of 2000 notes	Number of 500 notes	Number of 200 notes
SBI	250	300	150
ICICI	225	200	175
HDFC	200	150	100
AXIS	100	150	250

In AXIS bank ATM, the amount of 500 denomination is what percent of total amount of 2000 denomination?

- A 37.5%
- B 35%
- C 32.5%
- D 42%

Answer: A

SSC CHSL Previous Papers (DOWNLOAD PDF)

Question 58

If $a : b = 2 : 3$ and $b : c = 2 : 3$, then what is the value of

$$(3a^2 + b^2 + c^2) : (a^2 + 2b^2 + c^2)?$$

- A 169 : 165
- B 5 : 7
- C 165 : 169
- D 7 : 5

Answer: C

Question 59

A man bought a bike and a car for ₹500000. He sold the bike at a gain of 20% and the car at a loss of 10%, thereby gaining 5% on whole. The cost (in ₹) of the bike is:

- A 150000
- B 180000
- C 200000
- D 250000

Answer: D

Question 60

H.C.F and L.C.M of two numbers is 37 and 444 respectively. If one number is 111, the other number is:

- A 148
- B 74
- C 111
- D 333

Answer: A

SSC Stenographer Previous Papers (Download PDF)

Question 61

The average number of pages of nine books is 400. If the average number of pages of the first five books is 430 and that of last five books is 380, then what is the number of pages of the fifth book?

- A 450
- B 420
- C 440
- D 430

Answer: A

Question 62

The length, breadth and height of a cuboid are 6 cm, 8 cm & 10 cm respectively. Its volume(in cm^3) is:

- A 960
- B 480
- C 256
- D 128

Answer: B

Question 63

By paying ₹20 less of the marked price of an article, a man gets 25% discount. The total amount that he has paid (in ₹) is:

- A 80
- B 60
- C 50
- D 20

Answer: B

SSC GD Constable Previous Papers

Question 64

The approximate value of $(4488 \div 11.01 - 7.98) \div 15.99$ is:

- A 2.5
- B 26
- C 2.6
- D 25

Answer: D

Explanation:

$$\frac{4488}{11.01} - 7.98$$

15.99

$$\frac{4488}{11} - 8$$

16

$$\frac{408 - 8}{16}$$

$$\frac{400}{16}$$

25

Question 65

The average marks of 30 students is 65; 36 students is 35 and 34 students is 45. The average marks for all the students is:

- A 45.3
- B 45.7

C 46.4

D 47.4

Answer: D

Question 66

The value of $\sqrt[3]{\frac{1}{316} + \frac{1}{2} - \frac{3}{4}}$ =

A $\frac{3}{14}$

B 1

C $\frac{1}{2}$

D $\frac{1}{14}$

Answer: C

SSC MTS Previous Papers (DOWNLOAD PDF)

Question 67

What amount will be ₹1440 in 4 years at 5% simple interest?

A ₹1240

B ₹1200

C ₹1080

D ₹1180

Answer: B

Question 68

A retailer bought 22 kg of rice at ₹35 per kg and 13 kg of rice at ₹30 per kg. What profit did he get when he mixed the two varieties together and sold it at ₹40 per kg? (correct to nearest integer)

A 25

B 21

C 18

D 20

Answer: B

Question 69

The Table given below shows the number of three different denomination of notes in four different bank ATMs(SBI, ICICI, HDFC and AXIS).

Bank ATM	Number of 2000 notes	Number of 500 notes	Number of 200 notes
SBI	250	300	150
ICICI	225	200	175
HDFC	200	150	100
AXIS	100	150	250

What is the ratio of total amount in ICICI bank ATM in 500 denomination to the total amount in ICICI bank ATM in 200 denomination?

- A 20 : 17
- B 20 : 7
- C 10 : 3
- D 10 : 7

Answer: B

SSC CGL Previous Papers (DOWNLOAD PDF)

Question 70

Thrice of a number is 24 more than one-third of it. The number is:

- A 9
- B 15
- C 8
- D 12

Answer: A

Question 71

The difference between simple and compound rate of interest on a certain sum of money for 2 years at 20% rate of interest is ₹200. The amount is:

- A ₹4500
- B ₹4000
- C ₹3000
- D ₹5000

Answer: D

Question 72

The mode of the given data 2, 5, 5, 7, 2, 6, 8, 6, 9, 6 is:

- A 7
- B 6

C 5

D 2

Answer: B

SSC CGL Free Mock Test (Latest Pattern)

Question 73

The ratio of the present ages of a mother and a son is 4 : 1. Fourteen years from now, the ratio of their ages will be 2 : 1 The present age (in years) of mother is:

A 24

B 28

C 36

D 32

Answer: B

Question 74

A and B together are supposed to do $\frac{13}{15}$ of the work and B and C together $\frac{11}{20}$ of the work. If difference of wages of A and C is ₹7600, then the total wages of A and C is:

A ₹24000

B ₹56000

C ₹18000

D ₹36000

Answer: A

Question 75

A bus covers a distance of 10 km in 12 minutes. If its speed is decreased by 25 km/h, then the time (in minutes) taken by the bus to cover the same distance is:

A 13

B 15

C 36

D 24

Answer: D

SSC CHSL Free Mock Test (Latest Pattern)

General knowledge

Instructions

For the following questions answer them individually

Question 76

Mauryan Pillar Capital found at Sarnath is popularly known as ____.

- A Lion Capital
- B Elephant Capital
- C Bull Capital
- D Horse Capital

Answer: A

SSC Stenographer Previous Papers (Latest Pattern)

Question 77

Which international organisation governs basketball in the world?

- A RBA
- B NBA
- C FIBA
- D IBA

Answer: C

Question 78

The martial dance form of Punjab is ____.

- A Dagua
- B Panga
- C Bagaa
- D Lagaa

Answer: C

Question 79

Which of the following is a Perennial River System in India?

- A Tapi
- B Tapho
- C Indus
- D Krishna

Answer: C

SSC GD Constable Free Mock Test (Latest Pattern)

Question 80

Which mosquito carries the parasite of Malaria?

- A Female Anopheles
- B Female Aedes Aegypti
- C Male Anopheles
- D Male Aedes Aegypti

Answer: A

Question 81

11-degree channel divides which of the following group of islands?

- A Andaman and Nicobar
- B Maldives and Lakshadweep
- C Aminidive and Canannore
- D Minicoy and Lakshadweep

Answer: C

Question 82

Which Central Agency is responsible for promotion of co-operative marketing of agricultural produce to benefit the farmers?

- A FCI
- B RBI
- C SEBI
- D NAFED

Answer: D

SSC MTS Free Mock Test (Latest Pattern)

Question 83

Kanthuri Festival is celebrated in which state of India?

- A Telangana
- B Tamil Nadu
- C Kerala
- D Karnataka

Answer: B

Question 84

In which part of excretory system of human beings is urine stored, before finally being ejected out?

- A Bowmans Capsule
- B Urethra
- C Urinary Bladder
- D Ureter

Answer: C

Question 85

In which case, Right to livelihood was established as part of Right to life under Article 21 of the Constitution?

- A N. Nagaraj v/s VOI Case
- B Olga Tellis v/s Bombay Municipal Corporation
- C Maneka Gandhi v/s VOI Case
- D Shankari Prasad Case

Answer: B

SSC CPO Free Mock Test (Latest Pattern)

Question 86

Wings of Fire' is an autobiography of ____.

- A Jawaharlal Nehru
- B Mahatma Gandhi
- C Bhagat Singh
- D Dr. A. P. J. Abdul Kalam

Answer: D

Question 87

Name the manufacturer of the fruit-filled, friendly punch RoohAfza in India.

- A Nestle India
- B Hamdard Laboratories (India)
- C Dabur India
- D Glaxo Smithkline Pharmaceuticals Ltd

Answer: B

Question 88

The Narrow Zone of contact between land, air and water is called ____.

- A Hydrosphere
- B Biosphere

- C Lithosphere
- D Atmosphere

Answer: B

SSC MTS Free Preparation App

Question 89

"Any body that is completely or partially submerged in a fluid (gas or liquid) at rest is acted upon by an upward or buoyant force, the magnitude of which is equal to the weight of the fluid displaced by the body." Which is this law?

- A Archimedes' Principle
- B Boyle's Law
- C Charles' Law
- D Newton's Second Law of Motion

Answer: A

Question 90

Right against exploitation is a _____.

- A Fundamental Right
- B Legal Right
- C Law
- D Constitutional Right

Answer: A

Question 91

Which chamber of human heart receives oxygen-rich blood from lungs?

- A Left Atrium
- B Right Ventricle
- C Right Atrium
- D Left Ventricle

Answer: A

285 SSC Mocks - Just RS. 249

Question 92

Who was the first Mughal Emperor in India?

- A Humayun
- B Akbar

C Shah Jahan

D Babar

Answer: D

Question 93

After which battle did East India Company start appointing Residents in Indian States?

A Battle of Haldighati

B Battle of Plassey

C Battle of Buxar

D Battle of Panipat III

Answer: C

Question 94

Who has to resign if 'NO-Confidence' Motion is passed in the Lok Sabha?

A President

B Council of Minister

C Speaker of Lok Sabha

D Leader of Opposition

Answer: B

SSC Exam Free Videos (Youtube)

Question 95

Who was honoured with the first ever Philip Kotler Presidential Award?

A Rajnath Singh

B Amit Shah

C Arun Jaitley

D Narendra Modi

Answer: D

Question 96

Usain Bolt is associated with which sport?

A Canoe Sprint

B Gymnastics

C Boxing

D Athletics

Answer: D

Question 97

English Education Act 1835 was based on report of which commission?

- A Henry Colebrooke
- B Woods Despatch
- C Thomas Babington
- D Macaulay's Minute

Answer: D

SSC Study Material

Question 98

Which Central agency manages the public debt of Central and State government?

- A SEBI
- B FICCI
- C RBI
- D IRDA

Answer: C

Question 99

"A Comparison between Women and Men" is a book written by _____.

- A Jyotiba Phule
- B Tarabai Shinde
- C Begum Rokeya Sakhawat Hossain
- D Pandita Ramabai

Answer: B

Question 100

Image formed by Plane Mirror is always _____.

- A Virtual and Erect
- B Real and Erect
- C Virtual and Inverted
- D Real and Inverted

Answer: A

[SSC CHSL Prevoius Papers \(DOWNLOAD PDF\)](#)

[SSC Stenographer Previous Papers \(Download PDF\)](#)

[SSC GD Constable Previous Papers](#)

[SSC MTS Previous Papers \(DOWNLOAD PDF\)](#)

[SSC CGL Previous Papers \(DOWNLOAD PDF\)](#)

[SSC CGL Free Mock Test \(Latest Pattern\)](#)

[SSC CHSL Free Mock Test \(Latest Pattern\)](#)

[SSC Stenographer Previous Papers \(Latest Pattern\)](#)

[SSC GD Constable Free Mock Test \(Latest Pattern\)](#)

[SSC MTS Free Mock Test \(Latest Pattern\)](#)

[SSC CPO Free Mock Test \(Latest Pattern\)](#)

[SSC MTS Free Preparation App](#)

[285 SSC Mocks - Just RS. 249](#)

[SSC Exam Free Videos \(Youtube\)](#)

[SSC Study Material](#)

[SSC Daily Practice Set](#)

[SSC GK Free Tests](#)

[SSC GK Questions](#)

[Current Affairs Question and Answers \(Download PDF\)](#)

[Daily and Monthly Current Affairs \(Download PDF\)](#)

