



SSC MTS 13th August 2019 Shift-3

All rights reserved. No part of this publication may be reproduced, distributed, or transmitted in any form or by any means, electronic, mechanical, photocopying, recording or otherwise, or stored in any retrieval system of any nature without the permission of cracku.in, application for which shall be made to support@cracku.in

Instructions

For the following questions answer them individually

Question 1

Select the correctly spelt word.

- A Administrator
- B Administrator
- C Administratur
- D Aministretor

Answer: B

SSC CHSL Prevoius Papers (DOWNLOAD PDF)

Question 2

Identify the segment in the sentence which contains the grammatical error from the given options.

There is no point of arguing over something so unimportant.

- A over something
- B There is no
- C point of arguing
- D so unimportant

Answer: C

Question 3

Select the most appropriate word to fill in the blank and make a meaningful sentence.

Searching frantically to find all the hidden jewels and cash, the burglars proceeded to _____ the entire house.

- A pry
- B ransack
- C seek
- D poach

Answer: B

Question 4

Select the antonym of the given word.

Coarse

- A Ragged
- B Attractive
- C Smooth
- D Shiny

Answer: C

SSC Stenographer Previous Papers (Download PDF)

Question 5

Select the most appropriate option to fill in the blank and make a grammatically correct sentence.
I'm short _____ funds at the moment so can I pay you back next week?

- A of
- B in
- C off
- D at

Answer: A

Question 6

Select the most appropriate option to substitute the underlined segment in the given sentence. If there is no need to substitute it, select 'No substitution required'.

It's fascinating to watch how a baby changes and develops over time.

- A No substitution required
- B change and develop
- C changing and developing
- D changed and developed

Answer: A

Question 7

Select the correctly spelt word.

- A Beautifuli
- B Beautifuly
- C Beautifully
- D Beatefully

Answer: C

SSC GD Constable Previous Papers

Question 8

Select the most appropriate option to fill in the blank and make a grammatically correct sentence.
The quality of public health care _____ on the amount of money allocated to it.

- A dependent
- B depending
- C depends

D depend

Answer: C

Question 9

Select the most appropriate option to substitute the underlined segment in the given sentence. If there is no need to substitute it, select 'No substitution required'.

You can buy a plastic cover to put into your computer if you're worried about dust.

A put above

B No substitution required

C put onto

D put over

Answer: D

Question 10

Select the most appropriate word to fill in the blank and make a meaningful sentence.

The teacher was highly _____ with my essay.

A afflicted

B interested

C damaged

D impressed

Answer: D

SSC MTS Previous Papers (DOWNLOAD PDF)

Question 11

Select the antonym of the given word.

Notorious

A Efficient

B Popular

C Optimistic

D Infamous

Answer: B

Question 12

Identify the segment in the sentence which contains the grammatical error from the given options.

If you play your cards right, the job could be your when she leaves.

A the job could be your

B If you play

C when she leaves

D your cards right

Answer: A

Instructions

In the following passage some words have been deleted. Fill in the blanks with the help of the alternatives given. Select the most appropriate option for each blank.

Comprehension:

A helicopter can do many things that an aeroplane cannot. It can (1)_____ straight up or straight down, or sideways. It can hover over one spot, like a hawk (2)_____ the air, and it can (3)_____ or land in a very small space. A helicopter has no wings but it (4)_____ a set of blades that whirl .Because of this, it is called a "whirly-bird", and the air over the (5)_____ blades gives the lift needed to make the machine fly.

Question 13

Select the most appropriate option to fill in blank No.1.

- A flying
- B flew
- C flow
- D fly

Answer: D

SSC CGL Previous Papers (DOWNLOAD PDF)

Question 14

Select the most appropriate option to fill in blank No.2.

- A onto
- B in
- C on
- D into

Answer: B

Question 15

Select the most appropriate option to fill in blank No.3.

- A take off
- B take out
- C take up
- D take over

Answer: A

Question 16

Select the most appropriate option to fill in blank No.4.

- A had
- B having
- C has
- D have

Answer: C

SSC CGL Free Mock Test (Latest Pattern)

Question 17

Select the most appropriate option to fill in blank No.5.

- A pushing
- B pulling
- C circling
- D whirling

Answer: D

Instructions

For the following questions answer them individually

Question 18

Select the synonym of the given word.

Swift

- A Slow
- B Harsh
- C Quick
- D Turn

Answer: C

Question 19

Select the meaning of the given idiom.

To be tight-lipped

- A To keep quiet
- B To keep records
- C To keep up the spirit
- D To keep a fast

Answer: A

SSC CHSL Free Mock Test (Latest Pattern)

Question 20

Select the most appropriate option to substitute the underlined segment in the given sentence. If there is no need to substitute it, select 'No substitution required'.

She has decided on to do a Chinese language course.

- A No substitution required
- B on doing
- C on to doing
- D to doing

Answer: B

Question 21

Select the word which means the same as the group of words given.

A person who loves money and hates spending it

- A Investor
- B Miser
- C Banker
- D Lender

Answer: B

Question 22

Select the meaning of the given idiom.

Hang one's head

- A To be ashamed
- B To be proud
- C To punish
- D To be greedy

Answer: A

SSC Stenographer Previous Papers (Latest Pattern)

Question 23

Select the synonym of the given word.

Massive

- A Huge
- B Weak
- C Tiny
- D Strong

Answer: A

Question 24

Select the word which means the same as the group of words given.
One who loses temper very soon

- A Temporal
- B Argumentative
- C Tampered
- D Hot-headed

Answer: D

Question 25

Identify the segment in the sentence which contains the grammatical error from the given options.
I couldn't hear what was she saying due to the planes taking off.

- A planes taking off.
- B what was she saying
- C I couldn't hear
- D due to the noise of the

Answer: B

SSC GD Constable Free Mock Test (Latest Pattern)

Reasoning

Instructions

For the following questions answer them individually

Question 26

Select the correct mirror image of the given letter-number cluster when the mirror is placed below the cluster.

R Y 9 4 k m S

- A 2 m k t e Y R
- B K Y d t k m 2
- C K Y d t k m 2
- D K Y d t k m 2

Answer: D

SSC MTS Free Mock Test (Latest Pattern)

Question 27

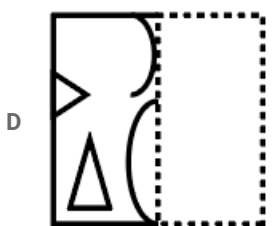
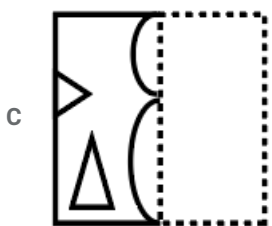
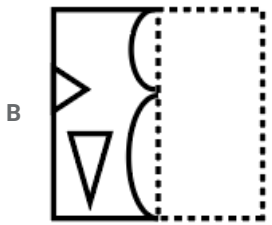
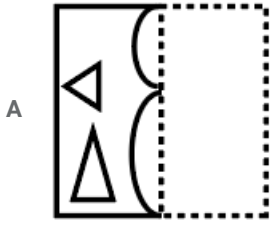
Select the letter Cluster that can replace the question mark (?) in the following series.
QKR, UOV, YSZ, CWD, ?

- A GAH
- B FZG
- C GAI
- D FBH

Answer: A

Question 28

A figure of transparent sheet with a pattern is given below. Figure out from amongst the four options as to how the pattern would appear when the transparent sheet is folded at the dotted line.



Answer: C

Question 29

In a code language, if 'VISUAL' is written as '22181942212', then how will 'DETOX' be written in that language?

- A 310301524
- B 410203024
- C 405302022
- D 420204024

Answer: B

SSC CPO Free Mock Test (Latest Pattern)

Question 30

Select the option that is related to the third number in the same way as the second number is related to the first number.
17 : 306 :: 21 : ?

- A 459
- B 462
- C 460
- D 464

Answer: B

Question 31

Which two signs and two numbers should be interchanged to make the given equation correct?

$$45 - 87 \times 20 \div 5 + 29 = 50$$

- A 20 and 29, \div and \times
- B 29 and 45, $+$ and \div
- C 20 and 29, \div and $+$
- D 45 and 5, \times and $-$

Answer: A

Question 32

In a code language, if 'CAMPER' is written as '314567', and 'SORE' is written as '8976', then how will 'CEASE' be written in that language?

- A 36286
- B 36186
- C 34186
- D 86315

Answer: B

SSC MTS Free Preparation App

Question 33

Among five rods P, Q, R, S and T, S is lengthier than T. R is shorter than P. Q is lengthier than S. P is lengthier than only one rod. Which rod is second lengthiest among all the rods?

- A S
- B T
- C P
- D Q

Answer: A

Question 34

'Magician' is related to 'Magic' in the same way as 'Joker' is related to '_____'.


- A Ball
- B Movie
- C Comedy
- D Stage

Answer: C

Question 35

Total 42 students are standing in a line facing east. Neha's position is 16^{th} from the right end. Vinita is standing at 26^{th} position from the left. If Mangala is standing at the 7^{th} place to the right of Neha, what is Mangala's position from the left end of the row?

- A 34^{th}
- B 33^{rd}
- C 35^{th}
- D 32^{nd}

Answer: A

285 SSC Mocks - Just RS. 249

Question 36

In a code language, 'FRESH' is written as 'UIVHS'. How will 'DOUGH' be written as in that language?

- A VKFHS
- B UKERT
- C WKGSS
- D WLFTS

Answer: D

Question 37

Two statements are given, followed by four conclusions in the options. Assuming the statements to be true, even if they seem to be at variance with commonly known facts, decide which conclusion logically follows from the statements.

Statements:

All gifts are prizes.

Some gifts are objects.

- A All prizes are gifts.
- B Some gifts are not prizes.
- C No object is prize.
- D Some objects are prizes.

Answer: D

Question 38

Which number will replace the question mark (?) in the following series?

15, 32, 55, ?, 127, 180



- A 85
- B 84
- C 86
- D 87

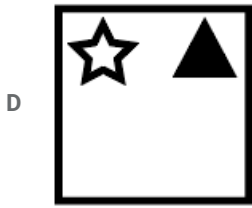

Answer: C

SSC Exam Free Videos (Youtube)

Question 39

Select the figure that will come next in the following figure series.





Answer: D

Question 40

If 'A' stands 'addition', B stands for 'division', C stands for 'subtraction' and D stands for 'multiplication', then what is the value of the following equation?

$$4 \text{ D } (3 \text{ A } 1) \text{ C } 5 \text{ A } (6 \text{ B } 2) \text{ C } 7$$

A 12

B 7

C 17

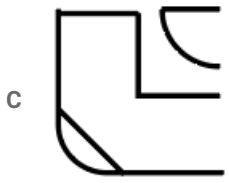
D 5

Answer: B

Question 41

Which of the following option figure will complete the pattern in the figure given below?





Answer: A

SSC Study Material

Question 42

Select the set in which the numbers are related in the same way as are the numbers of the following set.
7, 18, 126

A 12, 80, 320

B 8, 21, 148



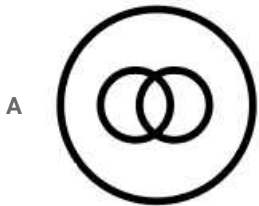
C 10, 20, 200

D 11, 30, 340

Answer: C

Question 43

Select the Venn diagram that best illustrates the relationship between the following classes.
Scooters, Vehicles, Auto-rickshaws



Answer: D

Question 44

The houses of eight persons A, B, C, D, E, F, G and H are located in two rows of four houses each. Both rows are facing each other. E's house is between F and G's house. B and H's houses are at corners. B's house is diagonally located to C's house. A's house is facing B's house. Whose house is located between C's and H's house?

- A A
- B G
- C B
- D D

Answer: D

SSC Daily Practice Set

Question 45

In a code language, 'TEMPER' is written as 'OGVTGR', how would 'FRIEND' be written in that language?

- A ITGFPG
- B KTHFPG
- C JSHFPG
- D KTHGOG

Answer: B

Question 46

Three statements are given, followed by three conclusions numbered I, II and III. Assuming the statements to be true, even if they seem to be at variance with commonly known facts, decide which of the conclusions logically follow(s) from the statements.

Statements:

- I. All markers are pens.
- II. No pen is pencil.
- III. Some pens are sharpeners.

Conclusions:

- I. Some pens are markers.
- II. No marker is pencil.
- III. No marker is sharpener.

- A Conclusions I and II follow.
- B Conclusions II and III follow.
- C Either conclusion I or II follow.
- D Conclusions I and III follow.

Answer: A

Question 47

Select the word-pair in which the two words are related in the same way as are the two words in the following word-pair.
Phone : Telecommunication

- A Newspaper : Magazine
- B Bus : Transportation
- C Refrigerator : Snow
- D Geyser : Water

Answer: B

SSC GK Free Tests

Question 48

Select the option that is related to the third letter-cluster in the same way as the second letter-cluster is related to the first letter-cluster.

HKRC : ENOF :: SRYK : ?

- A OTVM
- B PVUN
- C PUVN
- D OUVN

Answer: C

Question 49

Select the option figure which contains the given question figure embedded in it as its part. (Rotation is not allowed)



A



B



C



Question 53

The heights of students are given in cm as 161, 190, 185, 163, 172, 180, 162. The median height of the student is:

- A 131
- B 172
- C 170
- D 180

Answer: B

Question 54

The Table shows the number of articles sold by six different sellers (A, B, C, D, E and F) to two different shopkeepers P and Q. Some articles are purchased by other sellers also. Total articles purchased by shopkeepers P and Q is 300 and 500 respectively.

| Seller | P | Q |
|--------|----|----|
| A | 45 | 56 |
| B | 53 | 49 |
| C | 28 | 44 |
| D | 38 | 38 |
| E | 35 | 65 |
| F | 55 | 60 |

Total number of articles sold by seller C to shopkeeper Q is what percent of total number of articles sold by seller F to shopkeeper P?

- A 80%
- B 84%
- C 75%
- D 78%

Answer: A

Daily and Monthly Current Affairs (Download PDF)

Question 55

What is the least number of square tiles required to pave the floor of a room 15m 17cm long and 9m 43cm broad?

- A 851
- B 841
- C 840
- D 830

Answer: A

Question 56

Let $\triangle ABC$ and $\triangle ABD$ be on the same base AB and between the same parallels AB and CD. Then the relation between areas of $\triangle ABC$ and $\triangle ABD$ will be:

- A $\text{Area}(\triangle ABC) = \frac{1}{2} \text{Area}(\triangle ABD)$

B $\text{Area}(\triangle ABC) = \text{Area}(\triangle ABD)$

C $\text{Area}(\triangle ABD) = \frac{1}{3} \text{Area}(\triangle ABC)$

D $\text{Area}(\triangle ABD) = \frac{1}{2} \text{Area}(\triangle ABC)$

Answer: B

Question 57

Out of four numbers the average of the first three is 16 and that of the last three is 15. If the last number is 21 then the first number is:

A 28

B 22

C 21

D 24

Answer: D

SSC CHSL Previous Papers (DOWNLOAD PDF)

Question 58

The Table shows the number of articles sold by six different sellers (A, B, C, D, E and F) to two different shopkeepers P and Q. Some articles are purchased by other sellers also. Total articles purchased by shopkeepers P and Q is 300 and 500 respectively.

| Seller | P | Q |
|--------|----|----|
| A | 45 | 56 |
| B | 53 | 49 |
| C | 28 | 44 |
| D | 38 | 38 |
| E | 35 | 65 |
| F | 55 | 60 |

What is the difference between total articles sold to P and Q by all the sellers other than A, B, C, D, E and F?

A 162

B 142

C 152

D 172

Answer: B

Question 59

A contractor takes a contract to complete a road in 60 days and employed 105 labours. After 25 days, he found that one third work is completed. How many more labours he requires to complete the remaining work in time?

A 45

B 150

C 75

D 105

Answer: A

Question 60

A sum of ₹50,000 is lent partly at 4% and remaining at 5% per annum. If the yearly simple interest on the average is 4.6%, the two parts are:

- A ₹22500, ₹27500
- B ₹15000, ₹35000
- C ₹20000, ₹30000
- D ₹25000, ₹25000

Answer: C

SSC Stenographer Previous Papers (Download PDF)

Question 61

The Table shows the number of articles sold by six different sellers (A, B, C, D, E and F) to two different shopkeepers P and Q. Some articles are purchased by other sellers also. Total articles purchased by shopkeepers P and Q is 300 and 500 respectively.

| Seller | P | Q |
|--------|----|----|
| A | 45 | 56 |
| B | 53 | 49 |
| C | 28 | 44 |
| D | 38 | 38 |
| E | 35 | 65 |
| F | 55 | 60 |

What is the average number of articles sold to shopkeeper P by the sellers A, B, C and D together?

- A 42
- B 41
- C 44
- D 43

Answer: B

Question 62

Each wheel of a bus is making 7 revolutions per second. If the diameter of a wheel is 56 cm, then the speed of the bus (in cm/sec) would be:

- A 616
- B 1232
- C 1000
- D 176

Answer: B

Question 63

A and B together can complete some work in 36 days, B and C together can complete the same work in 60 days, A and C together can complete the same work in 45 days. In how many days, B alone can complete the same work?

- A 180 days
- B 60 days
- C 100 days
- D 90 days

Answer: D

SSC GD Constable Previous Papers

Question 64

A sold his pen at a profit of ₹13. He calculated the profit percentage on selling price and found it to be 20%. The cost price (in ₹) of the pen is:

- A 52
- B 65
- C 39
- D 13

Answer: A

Question 65

$$\sqrt{\frac{25.60}{72.90}} + \sqrt{\frac{0.10}{8.10}} = ?$$

- A $\frac{27}{30}$
- B $\frac{27}{20}$
- C $\frac{19}{27}$
- D $\frac{27}{28}$

Answer: C

Explanation:

$$\sqrt{\frac{25.60 \cdot 10}{72.90 \cdot 10}} + \sqrt{\frac{0.10 \cdot 10}{8.10 \cdot 10}}$$

$$16/27 + 1/9$$

$$(16+3)/27$$

$$19/27$$

Question 66

The ratio of cost price and selling price of an article is c : d. If d is 150% of c then the percentage of profit on cost price is:

- A 150%

- B 50%
C 100%
D 75%

Answer: B

SSC MTS Previous Papers (DOWNLOAD PDF)

Question 67

In an office, there are 216 tables and 264 chairs. If $\frac{1}{6}$ of the tables and $\frac{1}{4}$ of the chairs are broken then how many people can work in the office if each person requires one table and one chair?

- A 180
B 186
C 100
D 198

Answer: A

Question 68

If three numbers are in the ratio 2 : 3 : 5 and the twice of their sum is 200. The square of the largest of three numbers is:

- A 2500
B 1000
C 625
D 2250

Answer: A

Question 69

What is the difference between 0.9 and 0.9%?

- A 0.981
B 0.891
C 0.198
D 8.91

Answer: B

SSC CGL Previous Papers (DOWNLOAD PDF)

Question 70

If $l : m : n = 1 : 2 : 4$, then $\sqrt{5l^2 + m^2 + n^2}$ is equal to:

- A $4n$

- B 5l
- C 2m
- D 5

Answer: B

Question 71

A man invested a sum of money at compound interest. It amounted to ₹12100 in two years and to ₹13310 in three years. The rate of interest per annum is:

- A 11%
- B 9.5%
- C 12.5%
- D 10%

Answer: D

Question 72

Two trains each having a length of 160 meters moving in opposite direction crossed each other in 9 seconds. If one train crossed a 200-metre-long platform in 18 seconds, then the ratio of their speeds is:

- A 2 : 3
- B 9 : 7
- C 5 : 8
- D 3 : 4

Answer: B

SSC CGL Free Mock Test (Latest Pattern)

Question 73

How many cubes with a side 10 cm can be cut out of a cube having side of 10 metre?

- A 10,000
- B 1,00,00,000
- C 1,00,000
- D 10,00,000

Answer: D

Question 74

A man goes to a place on car at speed of 160 km/h and comes back at lower speed. If the average speed is 64 km/h in total, then the return speed (in km/h) is:

- A 25

B 80

C 40

D 60

Answer: C

Question 75

Compute $(15 + 3 \times 1.1) \div 0.0003$

A 61000

B 122000

C 16100

D 30500

Answer: A

Explanation:

$(15+3.3)/0.0003$

$18.3/0.0003$

$183000/3$

61000

SSC CHSL Free Mock Test (Latest Pattern)

General knowledge

Instructions

For the following questions answer them individually

Question 76

With reference to the development of a country, which of the following countries is associated to the Gross National Happiness?

A Bhutan

B Belgium

C Bangladesh

D Indonesia

Answer: A

SSC Stenographer Previous Papers (Latest Pattern)

Question 77

Which Central agency issues currency notes on behalf of Central Government?

A IRDA

B SEBI

C Reserve Bank of India

D State Bank of India

Answer: C

Question 78

Who maintains Buffer Stock of Food Grains in India?

A NAFED

B FICCI

C Ministry of Agriculture

D FCI

Answer: D

Question 79

Which of the following is associated to the Sanskrit Mahabharata?

A Gitagovinda

B Yuddha Kanda

C Shanti Parva

D Kathasaritsagar

Answer: C

SSC GD Constable Free Mock Test (Latest Pattern)

Question 80

Anthrax is caused by :

A Virus

B Bacteria

C Fungus

D Protozoa

Answer: B

Question 81

Hypothalamus is part of which organ of the Human body?

A Brain

B Heart

C Spinal Cord

D Liver

Answer: A

Question 82

Which team won Asia Cup 2018 held in UAE?

- A Sri Lanka
- B India
- C Pakistan
- D Bangladesh

Answer: B

SSC MTS Free Mock Test (Latest Pattern)

Question 83

Which of the following is a harvest festival of India?

- A Darpka Teshi
- B Lohri
- C Teej
- D Bonalu

Answer: B

Question 84

In which Congress Session, was the demand for 'Purna Swaraj' adopted?

- A Karachi Session
- B Surat Session
- C Kanpur Session
- D Lahore Session

Answer: D

Question 85

Who among the following Indian has NOT received the 'Nobel Prize'?

- A Mother Teresa
- B Kailash Satyarthi
- C Amartya Sen
- D Dr. A.P.J Abdul Kalam

Answer: D

SSC CPO Free Mock Test (Latest Pattern)

Question 86

Trimbakeshwar is the source of which of the following rivers?

- A Godavari
- B Kaveri
- C Krishna
- D Mahanadi

Answer: A

Question 87

'My Life, My Mission' is an autobiography of _____.

- A Baba Ramdev
- B Guru Ram Rahim
- C Ratan Tata
- D Mahatma Gandhi

Answer: A

Question 88

Who conducts the elections of Lok Sabha in India?

- A Election Commission
- B Union Public Service Commission
- C Delimitation Commission
- D Parliament

Answer: A

SSC MTS Free Preparation App

Question 89

Which act of British Parliament transferred the powers of the East India Company to British Crown?

- A Charter Act, 1853
- B Charter Act, 1835
- C Govt of India Act, 1858
- D Charter Act, 1818

Answer: C

Question 90

The Chaiturgarh Fort in Korba, Chhattisgarh is home to a famous and unique temple. Which is that temple?

- A Adi Shankaracharya temple
- B Varaha Murthy temple
- C Yudhistira temple
- D Mahishasur Mardini temple

Answer: D

Question 91

Which of the following awards is given to recognise players 'Lifetime Achievement in Sports'?

- A Dronacharya Award
- B Dhyan Chand Award
- C Rajiv Gandhi Khel Ratna
- D Arjuna Award

Answer: B

285 SSC Mocks - Just RS. 249

Question 92

Who has been appointed as Chief of RAW on June 26, 2019?

- A Arvind Kumar
- B Mohan Ranade
- C Alok Vardhan
- D Samant Goel

Answer: D

Question 93

India is separated from Sri Lanka by ____.

- A Palk Strait
- B 9° Channel
- C 10° Channel
- D Dover Strait

Answer: A

Question 94

What is the colour of copper sulphate?

- A Colourless
- B Blue

C Black

D Red

Answer: B



SSC Exam Free Videos (Youtube)

Question 95

Which of the following rivers drains into the Bay of Bengal?

A Krishna

B Sutlej

C Tapi

D Narmada

Answer: A

Question 96

Which of the following is NOT a Federal country?

A Canada

B Brazil

C China

D Australia

Answer: C

Question 97

Forming of Association in India is _____.

A Fundamental Right

B Legal Right

C Natural Right

D Constitutional Right

Answer: A

SSC Study Material

Question 98

The archaeological site of Koldihwa is located at:

A Maharashtra

B Bihar

C Uttar Pradesh

D Madhya Pradesh

Answer: C

Question 99

Which of the following pairs of Base-Source are correctly matched?

A Calcium Hydroxide - Soap

B Sodium Hydroxide - Milk of magnesia

C Ammonium Hydroxide - Window cleaner

D Magnesium Hydroxide - Lime water

Answer: C

Question 100

Process of Coating of iron with zinc to protect it from rusting is known as _____.

A Sedimentation

B Neutralisation

C Galvanisation

D Salinization

Answer: C

SSC Daily Practice Set

[SSC CHSL Previous Papers \(DOWNLOAD PDF\)](#)

[SSC Stenographer Previous Papers \(Download PDF\)](#)

[SSC GD Constable Previous Papers](#)

[SSC MTS Previous Papers \(DOWNLOAD PDF\)](#)

[SSC CGL Previous Papers \(DOWNLOAD PDF\)](#)

[SSC CGL Free Mock Test \(Latest Pattern\)](#)

[SSC CHSL Free Mock Test \(Latest Pattern\)](#)

[SSC Stenographer Previous Papers \(Latest Pattern\)](#)

[SSC GD Constable Free Mock Test \(Latest Pattern\)](#)

[**SSC MTS Free Mock Test \(Latest Pattern\)**](#)

[**SSC CPO Free Mock Test \(Latest Pattern\)**](#)

[**SSC MTS Free Preparation App**](#)

[**285 SSC Mocks - Just RS. 249**](#)

[**SSC Exam Free Videos \(Youtube\)**](#)

[**SSC Study Material**](#)

[**SSC Daily Practice Set**](#)

[**SSC GK Free Tests**](#)

[**SSC GK Questions**](#)

[**Current Affairs Question and Answers \(Download PDF\)**](#)

[**Daily and Monthly Current Affairs \(Download PDF\)**](#)