



## SSC MTS 9th August 2019 Shift-2

All rights reserved. No part of this publication may be reproduced, distributed, or transmitted in any form or by any means, electronic, mechanical, photocopying, recording or otherwise, or stored in any retrieval system of any nature without the permission of cracku.in, application for which shall be made to [support@cracku.in](mailto:support@cracku.in)

**Instructions**

For the following questions answer them individually

**Question 1**

Select the most appropriate option to substitute the underlined segment in the given sentence. If there is no need to substitute it, select 'No substitution required'.

The detectives searched the house from top to bottom, but find any sign of the stolen goods.

- A No substitution required
- B while finding no sign
- C despite found any sign
- D but found no sign

**Answer:** D

**SSC CHSL Previous Papers (DOWNLOAD PDF)**

**Instructions**

Identify the segment in the sentence which contains the grammatical error from the given options.

**Question 2**

When they started, they had great ideas but lack the business know-how.

- A When they started
- B they had great ideas
- C but lack
- D the business know-how

**Answer:** C

**Question 3**

Its a good idea to read up on a company before going for an interview.

- A before going for
- B Its a good idea to
- C an interview
- D read up on company

**Answer:** B

**Instructions**

For the following questions answer them individually

**Question 4**

Select the antonym of the given word.

**Delicate**

- A Flimsy

- B Feeble
- C Fragile
- D Firm

Answer: D

## SSC Stenographer Previous Papers (Download PDF)

### Question 5

Select the most appropriate option to substitute the underlined segment in the given sentence. If there is no need to substitute it, select 'No substitution required'.

Suresh thought of a splendid idea to celebrate his parents' anniversary

- A think about a
- B No substitution required
- C thought of
- D thought at the

Answer: B

### Question 6

Select the synonym of the given word.

**Impolite**

- A Intelligent
- B Brave
- C Rude
- D Irrelevant

Answer: C

### Question 7

Select the meaning of the given idiom.

**All and sundry**

- A By all means
- B All eager
- C All included
- D All in agreement

Answer: C

## SSC GD Constable Previous Papers

**Question 8**

Select the synonym of the given word.

Remember

- A Recall
- B Retell
- C Review
- D Reign

**Answer: A**

**Instructions**

Select the correctly spelt word.

**Question 9**

- A Supplimantry
- B Supplimentry
- C Supplementary
- D Supplemantry

**Answer: C**

**Question 10**

- A Lubrisent
- B Lubricant
- C Lubrecant
- D Lubricent

**Answer: B**

**SSC MTS Previous Papers (DOWNLOAD PDF)**

**Instructions**

For the following questions answer them individually

**Question 11**

Select the most appropriate word to fill in the blank and make a meaningful sentence.

Owing to all the recent negative turn of events in her life, she strongly felt \_\_\_\_\_ forces must be at work.

- A helpful
- B evil
- C angelic
- D haunting

**Answer: B**

**Question 12**

Identify the segment in the sentence which contains the grammatical error from the given options.  
For most citizens today, liberty meant the freedom to practise their religious or political beliefs.

- A For most citizens today
- B practise their religious
- C liberty meant the freedom to
- D or political beliefs

**Answer:** C

**Question 13**

Select the most appropriate option to fill in the blank and make a grammatically correct sentence.  
The driver of the car probably holds the key to \_\_\_\_\_ the crime.

- A solving
- B solves
- C solved
- D solution

**Answer:** A

**SSC CGL Previous Papers (DOWNLOAD PDF)**

**Question 14**

Select the antonym of the given word.  
Adamant

- A Coherent
- B Stubborn
- C Stupid
- D Flexible

**Answer:** D

**Question 15**

Select the meaning of the given idiom.  
Chip off the old block

- A Resembling parents
- B Having interest in antique furniture
- C Having old fashioned values
- D Looking after parents

**Answer:** A

**Question 16**

Select the most appropriate word to fill in the blank and make a meaningful sentence.  
His old car \_\_\_\_\_ on the highway.

- A broke up
- B broke out
- C broke in
- D broke down

**Answer: D**

**SSC CGL Free Mock Test (Latest Pattern)**

**Question 17**

Select the most appropriate option to substitute the underlined segment in the given sentence. If there is no need to substitute it, select 'No substitution required'.

For the past six months, she is searching for a job.

- A had been searching
- B No substitution required
- C has searching
- D has been searching

**Answer: D**

**Instructions**

Select the word which means the same as the group of words given

**Question 18**

An introduction to a book usually stating its purpose

- A Bibliography
- B Preface
- C Epilogue
- D Acknowledgment

**Answer: B**

**Question 19**

A contest between two people to settle a point of honour

- A dual
- B duel
- C duo
- D duet

Answer: B

## SSC CHSL Free Mock Test (Latest Pattern)

### Instructions

For the following questions answer them individually

### Question 20

Select the most appropriate option to fill in the blank and make a grammatically correct sentence.

You are sure to \_\_\_\_ if you don't keep to the path.

- A get lose
- B got lost
- C get lost
- D got lose

Answer: C

### Instructions

In the following passage some words have been deleted. Fill in the blanks with the help of the alternatives given. Select the most appropriate option for each blank.

### Comprehension:

It was when she started reading books as a child that Dervla Murphy, Ireland's foremost travelwriter, first developed (1)\_\_\_\_\_ interest in and love for travel. Her father was the county librarian in Waterford, and Dervla had (2)\_\_\_\_\_ to a wide variety of books which (3)\_\_\_\_\_ her imagination for distant lands and her determination (4)\_\_\_\_\_ see them for herself. Even as a child she would cycle widely in her native Waterford, and as a young adult she (5)\_\_\_\_\_ cycling trips to Europe whenever possible.

### Question 21

Select the most appropriate option to fill in blank No.1.

- A a
- B one
- C the
- D an

Answer: D

### Question 22

Select the most appropriate option to fill in blank No.2

- A ascent
- B access
- C assess
- D assent

Answer: B

## SSC Stenographer Previous Papers (Latest Pattern)

### Question 23

Select the most appropriate option to fill in blank No.3.

- A fired
- B blew
- C grew
- D raised

Answer: A

### Question 24

Select the most appropriate option to fill in blank No.4.

- A at
- B for
- C to
- D of

Answer: C

### Question 25

Select the most appropriate option to fill in blank No.5.

- A has made
- B is making
- C makes
- D made

Answer: D

## SSC GD Constable Free Mock Test (Latest Pattern)

### Reasoning

#### Instructions

For the following questions answer them individually

### Question 26

Select the option that is related to the third number in the same way as the second number is related to the first number.

14 : 68 :: 16 : ?

- A 87
- B 78
- C 95



D 26

Answer: B

## SSC MTS Free Mock Test (Latest Pattern)

Question 27

Select the number that can replace the question mark (?) in the following series.

11, 14, 31, 14, 16, 34, 17, 18, 37, ?, 20, ?

A 21, 41

B 20, 41

C 21, 40

D 20, 40

Answer: D

Question 28

In the following question, select the number which can be placed at the sign of question mark (?) from the given alternatives.

6	7	3
5	?	5
4	9	8
34	30	23

A 3

B 4

C 6

D 2

Answer: A

Question 29

In a certain code language, 'FORT' is written as '56', 'MAN' is written as '25'. What is the code for 'CALF' in that code language?

A 21

B 22

C 25

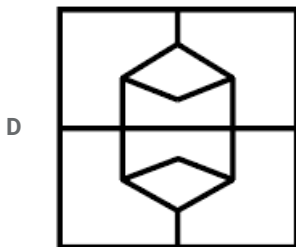
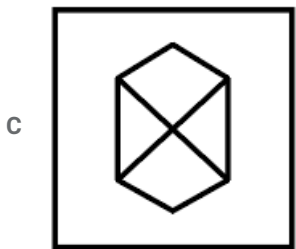
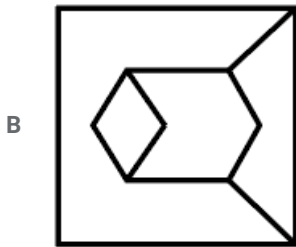
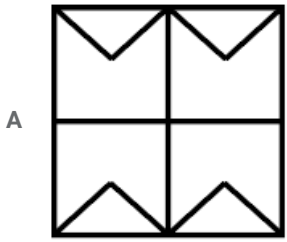
D 19

Answer: D

## SSC CPO Free Mock Test (Latest Pattern)

Question 30

From the given answer figures, select the one in which the question figure is hidden/embedded.

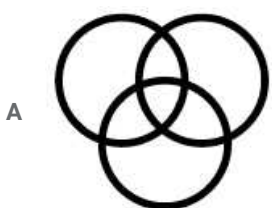


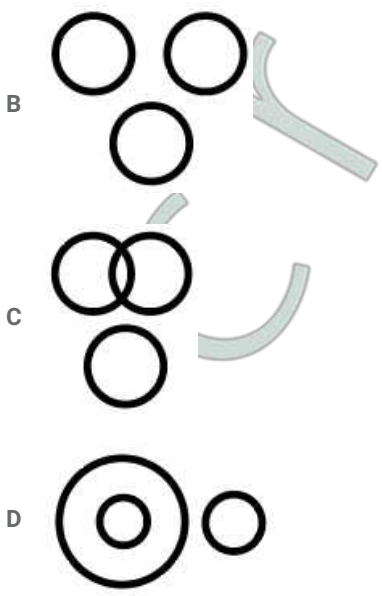
Answer: D

Question 31

Identify the Venn diagram that best represents the relationship between the given classes.

Fathers, Uncles, Aunts





Answer: C

Question 32

In the following question below are given some statements followed by some conclusions based on those statements. Taking the given statements to be true even if they seem to be at variance from commonly known facts. Read all the conclusions and then decide which of the given conclusion logically follows the given statements.

Statements:

- I. No K is L.
- II. Some L are M.
- III. All M are G.

Conclusions:

- I. Some G are L.
- II. Some M are L.
- III. No L is K.

- A Only conclusion I follows.
- B All conclusions I, II and III follow.
- C Neither conclusion follows
- D Both conclusions II and III follow

Answer: B

**SSC MTS Free Preparation App**

Question 33

In the following question, select the figure which can be placed at the sign of question mark (?) from the given alternatives?



A

		P
	L	
J		R

B

		P
	T	
R		J

C

		P
	L	
R		J

D

		P
	T	
J		R

Answer: D

**Question 34**

In a certain code language, 'ALGAES' is written as 'XJFLQF'. What is the code for 'ROBUST' in that code language?

A YXZGTW

B ZYAHUX

C ZYBUHX

D YYZGTW

Answer: A

**Question 35**

In a certain code language, 'TABLE' is written as 'ATBEL'. What is the code for 'CHAIR' in that code language?

A CHARI

B HCAIR

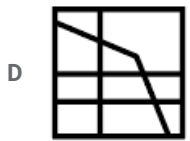
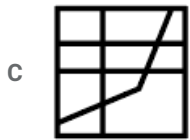
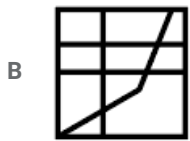
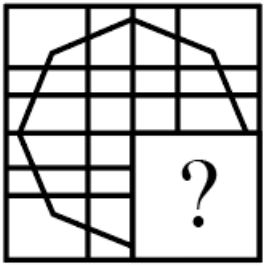
C HCARI

D RIAHC

Answer: C

Question 36

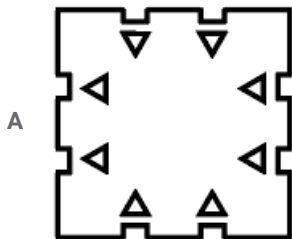
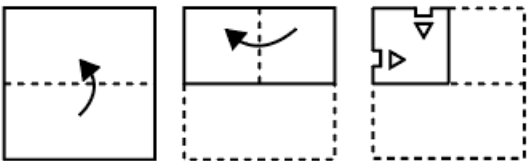
Which answer figure will complete the pattern in the question figure?

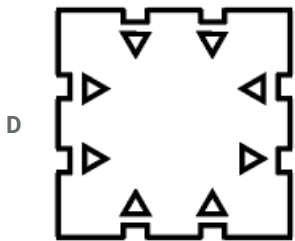
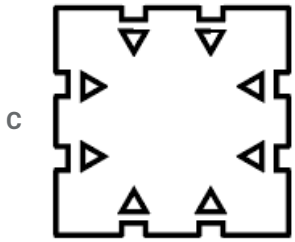
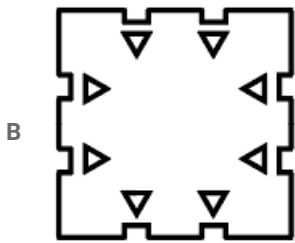


Answer: C

Question 37

A piece of paper is folded and punched as shown below in the question figures. From the given answer figures, indicate how it will appear when opened ?





Answer: C

Question 38

Select the option that is related to the third term in the same way as the second term is related to the first term.  
Court : Tennis :: Rink : ?

- A Golf
- B Skating
- C Cricket
- D Chess

Answer: B

SSC Exam Free Videos (Youtube)

Question 39

Select the Letter Cluster that can replace the question mark (?) in the following series  
ROB, URE, XUH, ?, DAN

- A BYL
- B AYK
- C AXK
- D BXL

Answer: C

**Question 40**

By interchanging which two signs the equation will be correct?

$$9 - 11 + 26 \div 78 \times 27 = 11$$

- A  $-$  and  $\times$
- B  $\times$  and  $\div$
- C  $-$  and  $+$
- D  $+$  and  $\div$

Answer: C

**Question 41**

In the following question below are given some statements followed by some conclusions based on those statements. Taking the given statements to be true even if they seem to be at variance from commonly known facts. Read all the conclusions and then decide which of the given conclusion logically follows the given statements.

Statements:

- I. Some onion are tomato.
- II. No tomato is potato.

Conclusions:

- I. Some potato are onion.
- II. No potato is tomato.

- A Only conclusion I follows.
- B Only conclusion II follows
- C Neither conclusion follow
- D Both conclusion I and II follows.

Answer: B

**SSC Study Material**

**Question 42**

In a certain code language, 'FISHES' is written as '69198519', 'BODY' is written as '215425'. What is the code for 'LEAD' in that code language?

- A 121514
- B 12514
- C 215412
- D 12511

Answer: B

**Question 43**

Five balls L1, L2, L3, L4 and L5 are kept one above the other (not necessarily in the same order). L1 is just above L5 and just below L4. L2 is just above L3 and just below L5. How many balls are above L2?

- A 2

B 3

C 4

D 1

Answer: B

**Question 44**

Six sellers G, H, J, K, C and M are sitting around a circular table facing towards the centre (not necessarily in the same order). M is second to the left of C. H is to the immediate right of G. K is second to the right of J. C is to the immediate left of K. Which of the following pair of sellers represents the immediate neighbours of J and G

A CK, HM

B CM, HM

C KH, MC

D CM, KH

Answer: D

**SSC Daily Practice Set**

**Question 45**

Select the option that is related to the third term in the same way as the second term is related to the first term.  
Green : Colour :: Cricket : ?

A Ball

B Bat

C Game

D Hockey

Answer: C

**Question 46**

By interchanging which two signs the equation will be correct?

$$6 \div 3 \times 5 - 15 + 4 = 9$$

A  $-$  and  $\div$

B  $\div$  and  $+$

C  $\div$  and  $\times$

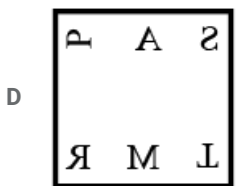
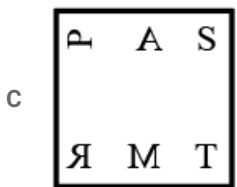
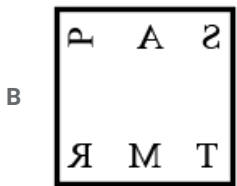
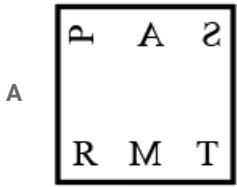
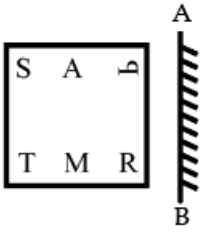
D  $+$  and  $-$

Answer: A



Question 47

If a mirror is placed on the line AB, then which of the answer figures is the right image of the given figure?



Answer: B

SSC GK Free Tests

Question 48

Select the number that can replace the question mark (?) in the following series.  
3, 3, 6, 24, 192, ?

A 3072

B 1536

C 4992

D 2688

Answer: A

**Question 49**

Select the option in which the letters share the same relationship as that shared by the given pair of letters.  
ROJ : TQL :: ?

- A JAN : LCL
- B ORF : QPH
- C TUE : VWG
- D AND : CLB

Answer: C

**Question 50**

Six toys T1, T2, T3, T4, T5 and T6 are kept around a circular path (not necessarily in the same order). T4 is second to the left of T6. T5 is to the immediate left of T2. T1 is second to the right of T3. T3 is to the immediate right of T4. If we start counting the number of toys towards the left of T5, then how many toys are kept between T6 and T5?

- A 2
- B 0
- C 3
- D 1

Answer: A

**SSC GK Questions**

**Quant**

**Instructions**

For the following questions answer them individually

**Question 51**

Shuarya marked an article at 40% above its cost price. He sells it after allowing a discount of 15%. The profit percentage of the article is:

- A 20%
- B 17%
- C 19%
- D 15%

Answer: C

**Current Affairs Question and Answers (Download PDF)**

**Question 52**

If speed of stream is 20% of the speed of boat in still water and it covers 120 km upstream in 150 minutes, then what is the downstream speed of the boat?

- A 75 km/h

B 72 km/h

C 80 km/h

D 64 km/h

Answer: B

**Question 53**

In a 100m race 64 A beats B by 10 m and B beats C by 10 m. By what distance does A beat C (in m)?

A 19

B 18

C 20

D 21

Answer: A

**Question 54**

Working together A and B can complete a work in 12 days. They work together for 9 days after which B leaves. If A finishes the remaining work in 5 days, then the number of days that B alone would take to complete the work is:

A 12

B 24

C 30

D 15

Answer: C

## Daily and Monthly Current Affairs (Download PDF)

**Question 55**

Set A contains seven numbers and the average of these numbers is 41. Set B contains five numbers and the average of these numbers is 44. The overall average of both the sets is:

A 42.75

B 42.25

C 41.75

D 42.5

Answer: B

**Question 56**

The simple interest on a sum of money for 2 years at certain rate of interest is ₹320. The compound interest, compounded annually on the same sum for the same duration and at the same rate of interest is ₹384. The sum (in ₹) is:

A 400

B 250

C 200

D 309

Answer: A

Question 57

In an exam, A gets 20% less than the passing marks and B gets 20% more than passing marks. If the sum of marks obtained by A and B is equal to maximum marks, what is the ratio of passing marks to maximum marks?

A 1 : 4

B 1 : 1

C 2 : 1

D 1 : 2

Answer: D

## SSC CHSL Previous Papers (DOWNLOAD PDF)

Question 58

If 20% of the goods are sold at 50% profit, 40% of the goods at 20% loss, 20% of the goods at 5% loss and the remaining at no loss or no profit, then the overall profit percentage is:

A 5%

B 8%

C 4%

D 1%

Answer: D

Question 59

A sum doubles in seven years at simple interest. In how many years will the sum become five times the original sum?

A 35

B 21

C 28

D 30

Answer: C

Question 60

If in triangle, angles are in the ratio 1 : 1 : 2 and the length of its longest side is  $6\sqrt{2}$  cm, then what is the Area (in  $\text{cm}^2$ ) of the triangle?

A  $18\sqrt{2}$

B 18

C 36

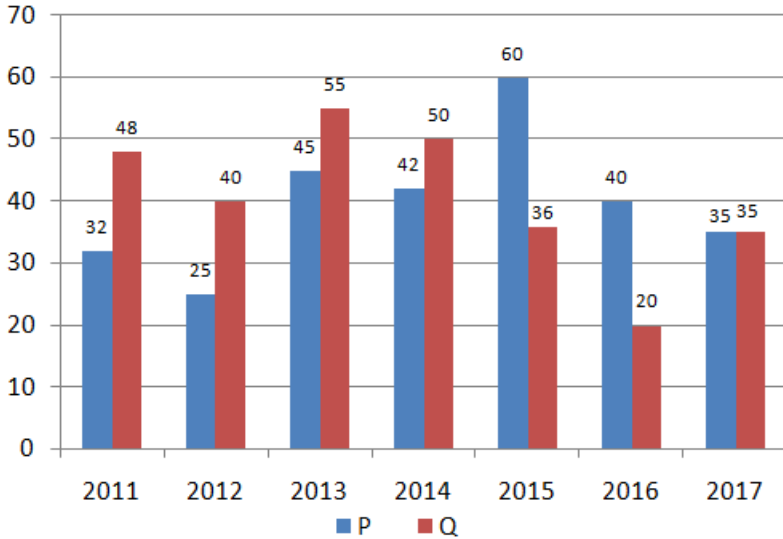
D  $36\sqrt{2}$

Answer: B

## SSC Stenographer Previous Papers (Download PDF)

### Question 61

The Bar graph shows the profit (Rupees in Lakhs) earned by two companies p and q during the period 2011 to 2017.



In which year company P earns the maximum profit as compared to the previous year?

A 2013

B 2016

C 2017

D 2015

Answer: A

### Question 62

If 40% of x equal 50% of y, then y : x is:

A 4 : 5

B 3 : 2

C 2 : 3

D 5 : 4

Answer: A

### Question 63

A contractor takes a contract to complete a road in 60 days and employed 70 labours. After 25 days, he found that one fourth work is completed. How many more labours he requires to complete the remaining work in time?

A 90

- B 82
- C 80
- D 85

Answer: C

## SSC GD Constable Previous Papers

### Question 64

If  $x \times y$  denotes H.C.F of  $x$  and  $y$  and  $x @ y$  denotes LCM of  $x$  and  $y$ , then the value of  $(72 \times 84) @ 144$  is:

- A 144
- B 504
- C 210
- D 420

Answer: A

### Question 65

The marks of Nine students in ascending order for a test are given below with Median as 34, the value of  $k$  is:  
12, 16,  $k$ , 28,  $k+5$ , 32, 39, 47, 53.

- A 29
- B 27
- C 30
- D 32

Answer: A

### Question 66

A room is in the shape of cube and the length of the longest rod placed in it is  $21\sqrt{3}$  cm. The area of the floor is:

- A  $441 \text{ cm}^2$
- B  $144 \text{ cm}^2$
- C  $169 \text{ cm}^2$
- D  $961 \text{ cm}^2$

Answer: A

## SSC MTS Previous Papers (DOWNLOAD PDF)

### Question 67

A fraction is such that the numerator is five less than the denominator. Also four times the numerator is one more than the denominator. The fraction is:

- A  $\frac{4}{7}$
- B  $\frac{3}{8}$
- C  $\frac{7}{12}$
- D  $\frac{2}{7}$

Answer: D

**Question 68**

The value of  $(3576 + 4286 + 6593) \div (201 + 105 + 107)$  is:

- A 35
- B 31
- C 22
- D 18

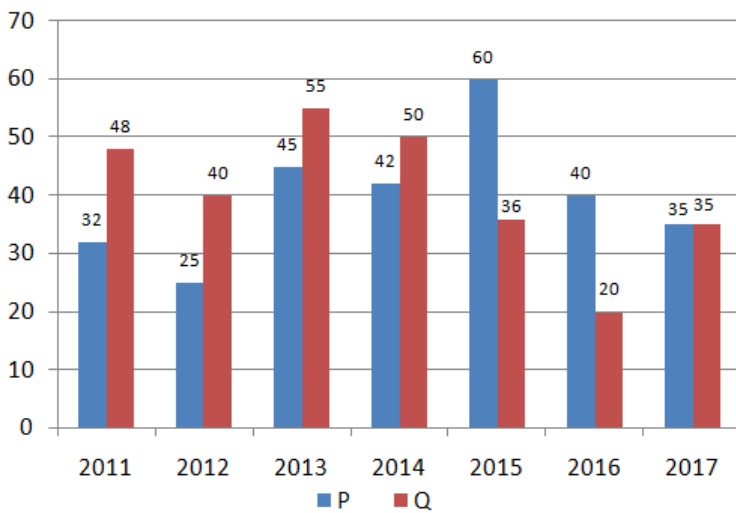
Answer: A

**Explanation:**

$$\begin{aligned} & (3576+4286+6593)/(201+105+107) \\ & =14455/413 \\ & =35 \end{aligned}$$

**Question 69**

The Bar Graph shows the Profit (Rupees in Lakhs) earned by two companies P and Q during the period 2011 to 2017.



The ratio of average profit during the given period for Company P to Company Q is:

- A 284 : 257
- B 257 : 284
- C 284 : 279
- D 279 : 284

Answer: D

## SSC CGL Previous Papers (DOWNLOAD PDF)

Question 70

If height of a circular cone is decreased by 10% and its radius is increased by 10%, then what will be the change in its volume?

- A Decreases by 8.9%.
- B Decreases by 3.2%.
- C Increases by 8.9%.
- D Increases by 3.2%.

Answer: C

Question 71

Average of 11 numbers is 32. If the average of first six numbers is 26 and the average of last six numbers is 36 then what is the value of the sixth number?

- A 20
- B 26
- C 32
- D 30

Answer: A

Question 72

Amar, Bhavan, Chetan and Dinesh have a total of ₹150 with them. Amar has one-fourth of the total amount with the others. The amount with Amar (in ₹) is:

- A 37.5
- B 30
- C 25
- D 20

Answer: B

## SSC CGL Free Mock Test (Latest Pattern)

Question 73

The value of  $x$

$45 \times x = 25\% \text{ of } 900$  is:

- A 16.2
- B 4
- C 500
- D 5



Answer: D

Explanation:

$$45 * x = 25 * 900 / 100$$

$$45 * x = 225$$

$$x = 225 / 45$$

$$x = 5$$

Question 74

A shopkeeper sold an article for ₹180 by making a profit of 20%. The shopkeeper offered a discount of ₹30 on the marked price. How much percent above the cost price the article is marked?

A 30%

B 35%

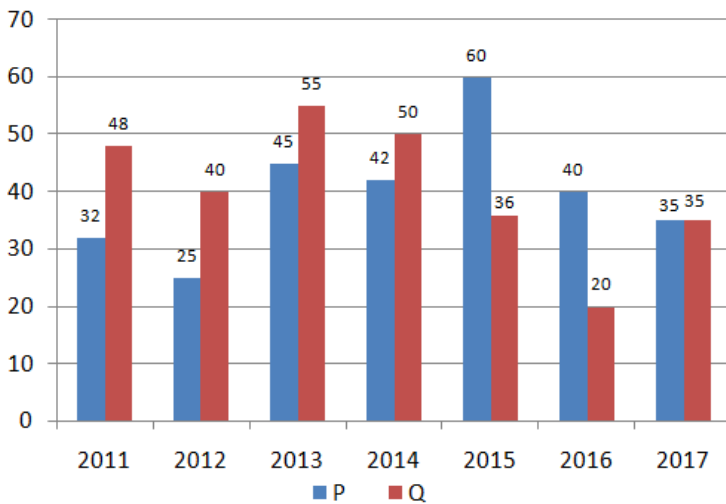
C 40%

D 25%

Answer: C

Question 75

The Bar Graph shows the Profit (Rupees in Lakhs) earned by two companies P and Q during the period 2011 to 2017.



In which year the profit of two companies, taken together, is maximum:

A 2014

B 2015

C 2013

D 2017

Answer: C

## SSC CHSL Free Mock Test (Latest Pattern)

### General knowledge

Instructions

For the following questions answer them individually

**Question 76**

In which of the following states is Kandla port situated?

- A Goa
- B Gujarat
- C Odisha
- D Maharashtra

**Answer: B**

## SSC Stenographer Previous Papers (Latest Pattern)

**Question 77**

Lavani is a folk dance of which of the following states of India?

- A Rajasthan
- B Jharkhand
- C Gujarat
- D Maharashtra

**Answer: D**

**Question 78**

In which of the following period Ostriches were found in India?

- A Palaeolithic Period
- B Neolithic Period
- C Mesolithic Period
- D Megalithic Period

**Answer: A**

**Question 79**

Who among the following was called as 'Ajatshatru' by Gandhiji?

- A Lala Lajpat Rai
- B Bal Gangadhar Tilak
- C Bhagat Singh
- D Dr. Rajendra Prasad

**Answer: D**

## SSC GD Constable Free Mock Test (Latest Pattern)

**Question 80**

**Who among the following was greatest ruler of Pratihara Dynasty?**

- A Nagabhata
- B Ramabhadra
- C Mihir Bhoja
- D Samantasena

**Answer: C**

**Question 81**

**Who is the writer of 'Revolution 2020'?**

- A Chetan Bhagat
- B Amish Tripathi
- C Ravindra Singh
- D Vikram Seth

**Answer: A**

**Question 82**

**Which of the following is NOT a process of water cycle?**

- A Ammonification
- B Transpiration
- C Evaporation
- D Condensation

**Answer: A**

**SSC MTS Free Mock Test (Latest Pattern)**

**Question 83**

**Which of the Article of Indian Constitution tells about the election of President?**

- A Article 51A
- B Article 54
- C Article 51
- D Article 53

**Answer: B**

**Question 84**

**Which of the following element is found in the Balaghat Mines of Madhya Pradesh?**

- A Gold
- B Zinc
- C Copper
- D Graphite

**Answer: C**

**Question 85**

**Which of the following award is NOT given by Madhya Pradesh Government?**

- A Kishore Kumar Award
- B Rani Laxmi Bai Award
- C Kalidas Samman
- D Lata Mangeshkar Award

**Answer: B**

**SSC CPO Free Mock Test (Latest Pattern)**

**Question 86**

**Which city will be host of Summer Olympic 2020?**

- A Tokyo
- B Paris
- C London
- D Beijing

**Answer: A**

**Question 87**

**Who is the founder of Indian Overseas Bank?**

- A M. Chidambaram Chettyar
- B V. G. Kale
- C Devkaran Nanjee
- D Rana Kapoor

**Answer: A**

**Question 88**

**The Khurda Uprising took place in the year:**

- A 1817
- B 1822

C 1917

D 1875

Answer: A

## SSC MTS Free Preparation App

### Question 89

Which of the following cricket playing nations secured the Test Championship title for a third successive year in March 2019?

A India

B South Africa

C Australia

D England

Answer: A

### Question 90

Which of the following energy is NOT from sea?

A Wave Energy

B Geothermal Energy

C Ocean Thermal Energy

D Tidal Energy

Answer: B

### Question 91

Who built the Sheesh Mahal in Patiala?

A Yadavindra Singh

B Baba Ala Singh Sidhu

C Maharaja Narinder Singh

D Bhalindra Singh

Answer: C

## 285 SSC Mocks - Just RS. 249

### Question 92

Which of the following is NOT a characteristic of sound wave?

A Velocity

B Nature

C Wavelength

D Amplitude

Answer: B

Question 93

Where was the first International Earth Summit held?

A New York

B Johannesburg

C Rio de Janeiro

D Stockholm

Answer: C

Question 94

What is the symbol of element Lead?

A S

B Ag

C Pb

D K

Answer: C

## SSC Exam Free Videos (Youtube)

Question 95

Which of the following Country is NOT a member of World Trade Organization?

A Israel

B Iran

C Guinea

D Norway

Answer: B

Question 96

What should be the investment of Micro enterprises in plant & machinery (Manufacturing Sector)?

A Between twenty five lakh and fifty lakh

B More than fifty lakh

C More than twenty five lakh

D Not more than twenty five lakh

Answer: D

**Question 97**

**Where is Tansen Samaroh celebrated?**

- A Gwalior
- B Indore
- C Jabalpur
- D Bhopal

**Answer: A**

**SSC Study Material**

**Question 98**

**Who among the following suggested that life must have developed from simple inorganic molecule?**

- A Gregor Mendel
- B J.B.S. Haldane
- C Charles Darwin
- D Stanley L. Miller

**Answer: B**

**Question 99**

**As of June 2019, who is the Human Resource Development (HRD) Minister of India?**

- A Smriti Zubin Irani
- B Piyush Goel
- C Ramesh Pokhriyal
- D Ramvilas Paswan

**Answer: C**

**Question 100**

**Who was the President of India during the State of Emergency (1975-77)?**

- A Shri Neelam Sanjiva Reddy
- B Dr. Zakir Hussain
- C Giani Zail Singh
- D Dr. Fakhruddin Ali Ahmed

**Answer: D**

**SSC Daily Practice Set**

[SSC CHSL Previous Papers \(DOWNLOAD PDF\)](#)

[SSC Stenographer Previous Papers \(Download PDF\)](#)

[SSC GD Constable Previous Papers](#)

[SSC MTS Previous Papers \(DOWNLOAD PDF\)](#)

[SSC CGL Previous Papers \(DOWNLOAD PDF\)](#)

[SSC CGL Free Mock Test \(Latest Pattern\)](#)

[SSC CHSL Free Mock Test \(Latest Pattern\)](#)

[SSC Stenographer Previous Papers \(Latest Pattern\)](#)

[SSC GD Constable Free Mock Test \(Latest Pattern\)](#)

[SSC MTS Free Mock Test \(Latest Pattern\)](#)

[SSC CPO Free Mock Test \(Latest Pattern\)](#)

[SSC MTS Free Preparation App](#)

[285 SSC Mocks - Just RS. 249](#)

[SSC Exam Free Videos \(Youtube\)](#)

[SSC Study Material](#)

[SSC Daily Practice Set](#)

[SSC GK Free Tests](#)

[SSC GK Questions](#)

[Current Affairs Question and Answers \(Download PDF\)](#)

[Daily and Monthly Current Affairs \(Download PDF\)](#)



