



**IBPS Clerk 14-Dec-2013**

All rights reserved. No part of this publication may be reproduced, distributed, or transmitted in any form or by any means, electronic, mechanical, photocopying, recording or otherwise, or stored in any retrieval system of any nature without the permission of cracku.in, application for which shall be made to [support@cracku.in](mailto:support@cracku.in)

## General Awareness

### Instructions

For the following questions answer them individually

#### Question 1

**Derivatives Contract which gives the buyer/holder of the contract the right (but not the obligation) to buy/sell the underlying asset at a predetermined price within or at end of a specified period is known as**

- A Futures Contract
- B Option Contract
- C Index Futures contract
- D Mini Derivative Contract
- E None of these

**Answer: B**

**Take 4 Free IBPS Clerk Mock Tests (With Solutions)**

#### Question 2

**The first Yash Chopra Memorial Award has been given to**

- A A.R. Rahman
- B Lata Mangeshkar
- C Amitabh Bachchan
- D Rishi Kapoor
- E Gulzar

**Answer: B**

#### Question 3

**CASA ratio of bank indicate the**

- A Bank's deposits
- B Bank's Non Performing Assets
- C Bank's liabilities
- D Bank's base rate
- E Bank's total assets

**Answer: A**

#### Question 4

**The process by which LIC holder can transfer all rights, title and interest under a policy contract to any third person is known as**

- A Subrogation

- B Escrow
- C Mortgage
- D Assignment
- E Nomination

**Answer: D**

## IBPS Clerk Previous Papers (Download PDF)

### Question 5

In order to promote no frills accounts as part of basic banking, the Reserve Bank of India, in August 2012, advised banks to rechristen it as

- A Basic Saving Account
- B Basic Deposit Account
- C Basic Account
- D Basic Savings Bank Deposit Account
- E None of these

**Answer: D**

### Question 6

The UIDAI has set a target of enrolment for how many people for Aadhaar Numbers till end of 2014?

- A 25 crore people
- B 48 crore people
- C 50 crore people
- D 60 crore people
- E 72 crore people

**Answer: D**

### Question 7

Equity share is also known as

- A Shareholder equity
- B Stockholder's equity
- C Share capital
- D Net worth
- E All 'of these

**Answer: E**

## IBPS Clerk Important Questions PDF

Question 8

Fixed Deposit is also referred to as

- A Time Deposit
- B Recurring Deposit
- C Demand Deposit
- D Static Deposit
- E All of the above

Answer: A

Question 9

With which sports is Deepak Lathore associated'?

- A Basketball
- B Athletics
- C Weightlifting
- D Squash
- E Wrestling

Answer: C

Question 10

What is the minimum age required to become a member of the Rajya Sabha?

- A 21 years
- B 25 years
- C 30 years
- D 32 years
- E 35 years

Answer: C

Question 11

Microcredit concentrates on

- A Small loans
- B Women
- C Rural areas

IBPS Clerk Free Preparation App

- D Poor people
- E All of these

**Answer: E**

**Question 12**

**Which of the following is a receipt, declaring ownership of shares of a foreign company, which can be listed in India and traded in rupees?**

- A ADR
- B GDR
- C IDR
- D ED R
- E None of these

**Answer: C**

**Question 13**

**NABARD Is responsible for regulating and supervising**

- A Securities market in India
- B Bank rates of scheduled commercial banks in India
- C Cooperatives
- D Regional Rural Banks
- E Only 3 and 4

**Answer: E**

**Free Banking Study Material (15000 Solved Questions)**

**Question 14**

**Arrangement of bank selling insurance product acting as agent of respective companies is called**

- A Bancassurance
- B Outsourcing
- C Delegation
- D Proxy Insurance
- E Shadow Insurance

**Answer: A**

**Question 15**

**BCSBI aims to plan, evolve, prepare, develop, promote and publish comprehensive Codes and Standards for banks, for providing for fair treatment to their customers. Which of the following codes has been evolved by it?**

- A Code of Bank's Commitment to Customers
- B Code of Bank's Commitment to Micro and Small Enterprises
- C Code of Bank's Commitment to Financial Inclusion
- D Both 1 and 2
- E Both 2 and 3

**Answer: D**

**Question 16**

**World Food Day is observed on**

- A 5 September
- B 21 September
- C 16 October
- D 19 November
- E 3 December

**Answer: C**

## **IBPS Clerk Free Online Coaching**

**Question 17**

**The Aclhaar-enabled payment systems (AEPS) is a bank-led model that facilitates banking facilities by allowing transactions at Point of Sale through the business correspondent (BC) using the Aadhaar authentication number. Adhaarenabled basic types of banking transactions 'do not' include**

- A Balance enquiry
- B Cash withdrawal
- C Online payment
- D Cash deposit
- E Aadhaar to Aadhaar funds transfer

**Answer: C**

**Question 18**

**Which of the following is Asia's largest residential university?**

- A Nalanda University
- B University of Delhi
- C Banaras Hindu University
- D Jamnia Milia Islamia
- E Jawaharlal Nehru University

**Answer: C**

**Question 19**

**Which of the following banks/ ministries/bodies is the Lender of last resort in India?**

- A World Bank
- B Reserve Bank of India
- C Union Ministry of Finance
- D Planning Commission
- E International Monetary Fund

**Answer: B**

**Question 20**

**For expanding access to banking services, the Reserve Bank of India has advised banks to open branches with minimum infrastructure support of 8 to 10 BC units at a reasonable 3-4 km. Such branches are known as**

- A White Label ATMs
- B Ultra Small Branches
- C Banking Kiosks
- D CBS Terminals
- E ICT Hubs

**Answer: B**

**Question 21**

**According to the Income Tax Act of 1961, the age of Super Senior Citizens should be**

- A 62 years
- B 70 years
- C 80 years
- D 88 years
- E 95 years

**Answer: C**

**Question 22**

**Who has authored the book, titled 'The Lowland'?**

- A Khushwant Singh
- B Vikram Seth
- C Chelan Bhagat
- D Jhumpa Lahiri

E Jeet Thayil

Answer: D

## Daily Free Banking Online Test

### Question 23

Who, at present, is the Chief Election Commissioner of India?

- A V.S. Sampath
- B S.Y. Qureshi
- C Navin Chawla
- D N. Gopaldaswamy
- E Achal Kumar Jyoti

Answer: E

### Question 24

When Criminals use an innocent person's details to open or use an account to carry out financial transactions, it is known as

- A Money Laundering
- B Phishing
- C Identity Theft
- D Real Time gross Settlement
- E Insinuation

Answer: C

### Question 25

Where is the headquarters of the United Nations Organization located?

- A Rome
- B Brussels
- C Geneva
- D New York
- E Paris

Answer: D

## Download IBPS Clerk General Knowledge PDF

### Question 26

As per the announcements made in Union Budget 201314, a person taking a loan for his first home from a bank or a housing finance corporation (HFC) up to Rs 25 lakh from April I. 2013 to March 2014, will be entitled to an additional deduction of interest of ,



- A Rs. 75,000
- B Rs. 1 lakh
- C Rs. 1.5 lakh
- D Rs. 2 lakhs
- E Rs. 2.6 lakh

**Answer: B**

**Question 27**

**Where was the 8<sup>th</sup> National Conference on Krishi Vigyan Kendra 2013 held?**

- A Chandigarh
- B Bangalore
- C Kolkata
- D Patna
- E Jodhpur

**Answer: B**

**Question 28**

**The Reserve Bank of India has made it mandatory for banks to lend at least 40 per cent of their credit to select sectors such as agriculture, Micro and Small Enterprises, other weaker sections, etc. Which banks have to lend at least 40 per cent of their total net credit to priority sectors?**

- A Scheduled Commercial Banks
- B Foreign Banks
- C NABARD
- D IRDA
- E All of the above

**Answer: A**

**200+ Free GK Tests for Banking exams**

**Question 29**

**What is the term for a bank without any branch network that offers its services remotely?**

- A Virtual Bank
- B Direct Bank
- C Lending Institution
- D Indirect Bank
- E Online Bank

**Answer: B**

**Question 30**

With reference to Indian Banking sector, which of the following is the most appropriate expanded form of EMI?

- A Estimated Monthly Installment
- B Extended Matching Items
- C Equated Monthly Installment.
- D Enterprise Manufacturing Intelligence
- E Easy Monthly Installment

**Answer: C**

**Question 31**

Which term is used for banking in which banking institutions execute transactions directly with consumers, rather than corporations or other banks?

- A Merchant Banking
- B Collateral Banking
- C Retail Banking
- D Bulk Banking
- E Direct Banking

**Answer: C**

## 100 Free IBPS Clerk Computer Awareness Tests

**Question 32**

As per the 2011 Census, which state of India has the lowest density?

- A Mizoram
- B Jammu and Kashmir
- C Arunachal Pradesh
- D Tripura
- E Nagaland

**Answer: C**

**Question 33**

With which state of India is the Cheraw Dance associated?

- A Assam
- B Tripura

- C Meghalaya
- D Mizoram
- E Rajasthan

**Answer: D**

**Question 34**

**The Direct Benefit Transfer Scheme is targeted at the people**

- A Affected by Uttarakhand landslides
- B Affected by communal riots
- C Living below the poverty line
- D Suffering from acute starvation
- E Belonging to Other Backward Classes

**Answer: C**

**200+ Banking Previous Papers (Download PDF)**

**Question 35**

**Which, among the following, is not identified as a minority community in India?**

- A Buddhists
- B Hinduism
- C Muslims
- D Zoroastrians
- E Sikhs

**Answer: B**

**Question 36**

**Which of the following bodies recently expressed concern over unregistered investment advisors spread across the country and brought out the Investment Advisers Regulations 2013?**

- A Reserve Bank of India
- B IRDA
- C SEBI
- D NABARD
- E CII

**Answer: C**

**Question 37**

**EFTPOS (electronic funds transfer at point of sale) is based on**

- A .SMS Alerts
- B Debit Cards
- C Credit. Cards
- D Both 1 and 2
- E Both 2 and 3

**Answer: E**

## Latest Job Updates on Telegram - Join here

### Question 38

In a circular issued by the Reserve Bank of India on 9 April 2010, Banks were advised to switch over to which system for calculation of their lending rates with effect from July 1, 2010?

- A Prime Lending Rate System
- B Base Rate System
- C Marginal Liquidity Facility System
- D Statutory Liquidity Ratio system
- E Benchmark Rate System

**Answer: B**

### Question 39

Which Bollywood actress, in October 2013, was honoured in the House of Commons for her contribution to the global entertainment?

- A Aishwarya Rai Bachchan
- B Sharmila Tagore
- C Kareena Kapoor
- D Waheeda Rehman
- E Shabana Azmi

**Answer: C**

### Question 40

Part of company's earning or profit which is paid out to share holders is known as

- A Premium
- B Dividend
- C Bonus
- D Sum Assured
- E Return

**Answer: B**

**Explanation:**  
COMPUTER KNOWLEDGE

## Take 4 Free IBPS Clerk Mock Tests (With Solutions)

### Computer Knowledge

**Instructions**

For the following questions answer them individually

**Question 41**

The advantage of a LAN is

- A Sharing peripherals
- B Backing up your data
- C Saving all your data
- D Accessing the Web
- E Automatic printing of data

**Answer: A**

## IBPS Clerk Previous Papers (Download PDF)

**Question 42**

Of the 5 words listed below, which one is the odd one out ?

- A Applications
- B Peripherals
- C Programs
- D Software
- E Operating System

**Answer: B**

**Question 43**

What type of device is a computer printer ?

- A Input
- B Input/Output
- C Software
- D Storage
- E Output

**Answer: E**

**Question 44**

What is the biggest number you can get with 8 bits ?

- A 256
- B 128
- C 1000
- D 255
- E 1024

Answer: D

## IBPS Clerk Important Questions PDF

**Question 45**

What type of device is a digital camera ?

- A Input
- B Output
- C Software
- D Storage
- E Input/Output

Answer: E

**Question 46**

Which of the following do mains is used by for-profit businesses?

- A .com
- B .cdu
- C .mil
- D .net
- E .org

Answer: A

**Question 47**

WAN stands for

- A Wired Area Network
- B Wide Area Network
- C Wide Array Net
- D Wireless Area Network

E Wanted Area Network

Answer: B

## IBPS Clerk Free Preparation App

### Question 48

What are lists of programs waiting to be run called ?

- A Shells
- B The background
- C Queues
- D Page frames
- E Lists

Answer: C

### Question 49

An example of peripheral equipment is the -

- A printer
- B CPU
- C spreadsheet
- D microcomputer
- E ALU

Answer: A

### Question 50

Which of the following commercial software products are examples of operating system software and application software, respectively ?

- A Microsoft Windows XP and Microsoft Word
- B Microsoft Office XP and Microsoft Windows XP
- C MS DOS and Microsoft Windows XP
- D UNIX and LINUX
- E UNIX and Java

Answer: A

## Free Banking Study Material (15000 Solved Questions)

### Question 51

.....are attempts by individuals to obtain confidential information from you by falsifying their identity.

- A Phishing trips
- B Computer viruses
- C Spyware scams
- D Viruses
- E Phishing scams

**Answer: A**

**Question 52**

**Why is it unethical to share copyrighted files with your friends?**

- A It is not unethical, because it is legal.
- B It is unethical because the files are being given for free.
- C Sharing copyrighted files without permission breaks copyright laws.
- D It is not unethical because the files are being given for free.
- E It is not unethical - anyone can access a computer

**Answer: C**

**Question 53**

**Which of the following can be used to select the entire document?**

- A CTRL + A
- B ALT + F5
- C SHIFT + A
- D CTRL + K
- E CTRL + H

**Answer: A**

**IBPS Clerk Free Online Coaching**

**Question 54**

**The system unit –**

- A coordinates input and output devices
- B is the container that houses electronic components
- C is a combination of hardware and software
- D controls and manipulates data
- E does the arithmetic operations

**Answer: B**



**Question 55**

The simultaneous processing of two or more programs by multiple processors is

- A multiprogramming
- B multitasking
- C time-sharing
- D multiprocessing
- E None of these

**Answer: D**

**Question 56**

The device which helps you to communicate with computer is called

- A Input device
- B Output device
- C Software device
- D Storage device
- E None of these

**Answer: B**

**Question 57**

In order to avoid memorising e-mail address you should use

- A Browser
- B Search engine
- C List of Birth date
- D Phonebook
- E Address book

**Answer: E**

**Question 58**

The devices which store information and that are used by computer for its functioning are called :

- A Input devices
- B Output devices
- C Software devices
- D Storage devices
- E None of these

**Answer: D**

**Question 59**

Which among the following is not such an operation which can be carried out on objects in graphic programme?

- A Spell check
- B Change size
- C Move
- D Delete
- E None of these

**Answer: A**

**Daily Free Banking Online Test**

**Question 60**

A hardware device which converts data into meaningful information is called

- A Protector
- B Output device
- C Input device
- D Program
- E Processor

**Answer: E**

**Question 61**

Which process checks to ensure the components of the computer are operating and connected properly? .

- A Booting
- B Processing
- C Saving
- D Editing
- E Starting

**Answer: A**

**Question 62**

A means of capturing an image (drawing or photo) so that it can be stored on a computer is-

- A Modem
- B Software
- C Scanner
- D Keyboard

E Mouse

Answer: C

## Download IBPS Clerk General Knowledge PDF

Question 63

An error in a computer program

- A Crash
- B Power Failure
- C Bug
- D Virus
- E Fatal error

Answer: C

Question 64

Access control based on a person's fingerprints is an exam, pie of -

- A biometric identification
- B characteristic identification
- C characteristic security
- D fingerprint security
- E logistics

Answer: A

Question 65

The patterns of printed lines on most products are called

- A prices
- B striping
- C scanners
- D OCR
- E bareodes

Answer: E

## 200+ Free GK Tests for Banking exams

Question 66

Most mail programs automatically complete the following two parts in an e-mail

- A From : and Body :
- B From: and Date :
- C From: and To :
- D From: and Subject:
- E None of these

**Answer: B**

**Question 67**

**The computer's capability of distinguishing spoken words is called**

- A voice analysis
- B speech acknowledgement
- C voice recognition
- D speech interpretation
- E vocalisation

**Answer: C**

**Question 68**

**Which of the following is an advantage of mounting an application on the Web ?**

- A the possibility of 24-hour access for users
- B creating a system that can extend globally
- C standardizing the design of the interface
- D All of these
- E None of these

**Answer: D**

## **100 Free IBPS Clerk Computer Awareness Tests**

**Question 69**

**The first page of a Web site is called the**

- A Homepage
- B Index
- C Java Script
- D Book mark
- E Intro Page

**Answer: A**

**Question 70**

**ERP is an acronym for**

- A Enterprise Retirement Planning
- B Enterprise Relationship Planning
- C Enterprise Resource Planning
- D Enterprise Reorder Planning
- E Enterprise Retention Planning

**Answer: C**

**Question 71**

**Origin of internet can be tracked from**

- A ARPAnet
- B Radio networks
- C Satellite networks
- D Indian army networks
- E Air Force networks

**Answer: A**

**200+ Banking Previous Papers (Download PDF)**

**Question 72**

**To connect networks of similar protocols,..... are used**

- A Routers
- B Bridges
- C Gateways
- D Dial-up routers
- E None of these

**Answer: B**

**Question 73**

**Decimal equivalent of  $(1111)_2$**

- A 11
- B 10
- C 1
- D 15

E 13

Answer: D

Question 74

..... is one reason for problems of data integrity

- A Data availability constraints
- B Data inconsistency
- C Security constraints
- D Unauthorized access of data
- E Data redundancy

Answer: E

**Latest Job Updates on Telegram - Join here**

Question 75

Dr. E.F. Codd represented rules that a database must obey if it has to be considered truly relational.

- A 10
- B 8
- C 12
- D 6
- E 5

Answer: C

Question 76

">" symbol in DOS commands is use to

- A Compare two values
- B Redirect input
- C Redirect output
- D Filter data
- E None of these

Answer: C

Question 77

System proposal is prepared in .....phase of SDLC

- A Conception
- B Initiation

- C Analysis
- D Design
- E constructor

**Answer: B**

## Take 4 Free IBPS Clerk Mock Tests (With Solutions)

### Question 78

#### A data warehouse

- A Contains numerous naming conventions and formats
- B Is organized around important subject areas
- C Contains only current data
- D Can be updated by end users
- E Explains some observed event or condition

**Answer: B**

### Question 79

#### Which of these is considered intelligent CASE tool

- A Toolkit
- B Methodology companion
- C Workbench
- D Upper CASE
- E Lower CASE

**Answer: C**

### Question 80

#### Super computer developed by Indian scientists

- A Param
- B Super301
- C Compaq Presario
- D Cray YMP
- E Blue Gene

**Answer: A**

#### Explanation:

ENGLISH LANGUAGE

# IBPS Clerk Previous Papers (Download PDF)

## English

### Instructions

In each of these questions, two sentences and (II) are given. Each sentence has a blank in it. Five words a: b: c: d: and e: are suggested. Out of these, only one fits at both the places in the context of each sentence. Number of that word is the answer.

### Question 81

- I. Future generations will be left with a..... of pollution and destruction.  
II. They each received a .....of \$ 10000.

- A legacy
- B sum
- C fortune
- D amount
- E inheritable

Answer: A

## IBPS Clerk Important Questions PDF

### Question 82

- I. He was \_\_\_\_\_ in britiOng about an end to the con  
II. Mr. Had Prasad Chaurasia is art exponent of ..... music.

- A instrument
- B instrumental
- C keen
- D instructor
- E popular

Answer: B

### Question 83

- I. Many .....men remarry and have second families.  
II. When he was depressed. he felt utterly..... from reality

- A divided
- B separate
- C disturbed
- D divorced
- E destined

Answer: D



**Question 84**

- I. Most of our employees get .....abroad at some stage.  
II. The aircraft and its crew were..... missing.

- A announced
- B arrested
- C sent
- D posted
- E stationed

**Answer: D**

**IBPS Clerk Free Preparation App**

**Question 85**

- I. He admired his..... in the mirror.  
II. The article is an accurate..... of events that day.

- A reflection
- B description
- C imagery
- D photograph
- E mirage

**Answer: A**

**Instructions**

In each question below, four words printed in bold type are given. These are numbered a, b, c: and d:. One of these words printed in bold may either be wrongly spelt or inappropriate in the context of the sentence, Find out the word that is inappropriate or wrongly spelt, if any. The number of that word is your answer. If all the words printed in bold are correctly spelt and appropriate in the context of the sentence then mark e: i.e. All Correct' as your answer.

**Question 86**

Only the goalkeeper's (a)/ reflexes (b)7 stopped the ball (c)/ from going in.(d)/All Correct (e)

- A Only the golkeeper's
- B reflexes
- C 7 stopped the ball
- D from going in.
- E All Correct

**Answer: A**

**Question 87**

He has (a)/ refrain (b)/ from criticizing (c)/ the government (d)/ in the public. All Correct (e)

- A He has a
- B refrain
- C from criticizing
- D the government
- E All Correct

**Answer: B**

## Free Banking Study Material (15000 Solved Questions)

### Question 88

Co save his own skull (a)/ he lied and blamed (b)/the accident (c)/ on his friend. (d)/ All Correct (e)

- A Co save his own skull
- B he lied and blamed
- C the accident
- D on his friend
- E All Correct

**Answer: A**

### Question 89

He was badly (a)/ shaken (b)/ by the news (c)/ of her dead. (d)/ All Correct(e)

- A He was badly
- B shaken
- C by the news
- D of her dead
- E All Correct

**Answer: D**

### Question 90

We lost (a)/ our way (b)/in the laybarinth (c)/ of streets. (d)/ A! Correct (e)

- A We lost
- B our way
- C in the laybarinth
- D of streets
- E All Correct

**Answer: C**

## IBPS Clerk Free Online Coaching

### Instructions

Read each sentence to find out whether there is any grammatical error in it. The error if any will be in one part of the sentence, the number of that part will be the answer. If there is no error, the answer is e: i.e. 'No error'. (Ignore the errors of punctuation, if any.)

### Question 91

Let's wait and see (a)/ how the land (b)/ laid before (c)/ we do anything. (d)/ No error (e)

- A Let's wait and see
- B how the land
- C laid before
- D we do anything
- E No error

Answer: C

### Question 92

In ancient Greece (a)/ a messenger ran from Marathon (b)/ to Athens with the news of (c)/ a victory of the persians. (d)/ No error (e)

- A In ancient Greece
- B a messenger ran from Marathon
- C to Athens with the news of
- D a victory of the persians
- E No error

Answer: D

### Question 93

Grammar information enables (a)/ students to map a (b)/ structure of a foreign (c)/ language onto their own. (d)/ No error (e)

- A Grammar information enables
- B students to map a
- C structure of a foreign
- D language onto their own
- E No error

Answer: B

### Question 94

Their wedding (a)/ turned out to be (b)/ quite (c)/ an occasion. (d)/ No error (e)

- A Their wedding a

- B turned out to be
- C quite
- D an occasion
- E No error

Answer: E

**Question 95**

I may be stated (a)/ the obvious but (b)/ without more-money the (c)/ project cannot survive. (d)/ No error (e)

- A I may be stated
- B the obvious but
- C without more-money the
- D project cannot survive
- E No error

Answer: A

**Instructions**

Rearrange the following six sentences/ group of sentences

(A), (B), (C), (D), (E) and (F) in the proper sequence to form a meaningful

paragraph: then answer the questions given below them. The storm-given the name Hercules-closed major roads with snowdrifts.

A fierce winter storm brought dangerous glacial temperature in New York on Friday. Weather experts said the wind chill temperature would plummet to -25' in New York. With more than 24 inches of snow falling in the city, a state of emergency was declared. More than 4000 international and domestic flights were also cancelled.

**Question 96**

Indeed storms are disastrous. Which of the following should be the **FIRST** sentence after The rearrangement ?

- A E
- B B
- C D
- D C
- E F

Answer: B

## Daily Free Banking Online Test

**Question 97**

Which of the following should be the **FOURTH** sentence after the rearrangement?

- A D
- B F
- C B

D E

E C

Answer: D

Question 98

Which of the following should be the FIFTH sentence after the rearrangement?

A E

B D

C B

D C

E F

Answer: D

Question 99

Which of the following should be the SIXTH (LAST) sentence after the rearrangement?

A A

B D

C F

D E

E C

Answer: C

[Download IBPS Clerk General Knowledge PDF](#)

Question 100

Which of the following should be the SECOND sentence after the rearrangement '?

A A

B D

C F

D B

E C

Answer: B

**Instructions**

Read the following passage carefully and answer the questions given below it. Certain words have been printed in bold to help you locate them while answering some of the questions. Internet banking is the teen used for new age banking system. Internet banking is also called as online banking and it is an outgrowth of PC banking. Internet banking uses the internet as the delivery channel by which to conduct banking activity, for example, transferring

funds. paying bills. viewing checking and savings account balances, paying mortgages and purchasing financial instruments and certificates of deposits. Internet banking is a result of explored possibility to use internet application in one of the various domains of commerce. It is difficult to infer whether the internet tool has been applied for convenience of bankers or for the customers' convenience. But ultimately it contributes in increasing the efficiency of the banking operation as well providing more convenience to customers. Without

even interacting with the bankers, customers **transact** from one corner of the country to another corner. There are many advantages of online banking. It is convenient, it isn't bound by operational timings, there are no geographical barriers and the services can be offered at a **minuscule** cost. Electronic banking has experienced explosive growth and has transformed traditional practices in banking. Private Banks in India were the first to implement internet banking services in the banking industry. Private Banks, due to late entry into the industry, understood that the establishing network in remote corners of the country is a very difficult task. It was clear to them that the only way to stay connected to the customers at any place and at any time is through Internet applications. They took the internet applications as a weapon of competitive advantage to corner the great **monoliths** like State Bank of India, Indian Bank etc. Private Banks are pioneer in India to explore the **versatility** of internet applications in delivering services to customers. Several studies have attempted to assess the relative importance of B2E and B2C business domains. There is wide difference in estimates of volume of business transacted over Internet and its components under B2C and B2B. However, most studies agree that volume of transactions in B2B domain far exceeds that in B2C. This is expected result. There is also a growing opinion that the future of e-business lies in B2B domain, as compared to B2C. This has several reasons, like low penetration of PCs to households, low bandwidth availability etc., in a large part of the world. The success of B2C ventures depends to a large extent on the shopping habits of people in different parts of the world. A survey sponsored jointly by Confederation of Indian Industries and Infrastructure Leasing and Financial Services on e-commerce in India in 2010 the following observations. 62% of PC owners and 75% of PC non-owners but who have access to Internet would not buy through the net, as they were not sure of the product offered. The same study estimated the size of B2B business in India by the year 2011 to be varying, between Rs. 1250 billion to Rs. 1500 billion. In a recent study done by Arthur Anderson, it has been estimated that 84% of total e-business revenue is generated from B2B segment and the growth prospects in this segment are substantial. It has estimated the revenues to be anywhere between US \$ 8.1 trillion to over US \$ 21 trillion within the next three years (2014).

#### Question 101

Which bank(s) is/are pioneer in India to explore the versatility of Internet banking in serving customers ?

- A State Bank of India
- B Indian Bank
- C Public Sector Banks
- D Private Banks
- E None of these

Answer: D

#### Question 102

Which of the following is not an advantage of online banking ?

- A It is convenient.
- B It is bound by operational timings.
- C The services can be offered at a minimum cost.
- D There is no geographical barrier.
- E None of these

Answer: B

**200+ Free GK Tests for Banking exams**

**Question 103**

What percentage of PC non-owners but who have access to Internet would not prefer to buy through the net. as they are not sure of the product offered ?

- A 75%
- B 62%
- C 84%
- D 76%
- E None of these

**Answer: A**

**Question 104**

Which type of activities are performed by internet banking ?

- A Paying bills
- B Transferring funds
- C Paying mortgages
- D Purchasing financial instruments and certificates of deposits
- E None of these

**Answer: E**

**Question 105**

What estimate was made by confederation of Indian industries regarding the size of B2B business in India by the year 2011?

- A Between Rs. 250 billion to Rs. 500 billion
- B Between Rs. 1250 billion to Rs. 1500 billion
- C Between Rs. 850 billion to Rs. 1050 billion
- D Between S 8.7 trillion to S 21 trillion
- E None of these

**Answer: B**

## 100 Free IBPS Clerk Computer Awareness Tests

**Instructions**

Choose the word which is most similar in meaning to the word printed in bold as used in the passage.

**Question 106**

**Versatility**

- A multi-utility
- B vesicle

- C dullness
- D necessity
- E meanness

**Answer: A**

**Question 107**

**Monoliths**

- A large block of stone
- B large organisations
- C monopoly
- D dwarfs
- E niche

**Answer: B**

**Question 108**

**TRANSACT**

- A do business
- B tranquillize
- C transcend
- D exceed
- E transfer

**Answer: A**

**200+ Banking Previous Papers (Download PDF)**

**Instructions**

Choose the word which is most opposite in meaning to the word printed in bold as used in the passage.

**Question 109**

**Substantial**

- A meagre
- B considerable
- C large
- D submissive
- E sufficient

**Answer: A**



**Question 110**

**Minuscule**

- A small
- B minimum
- C minute
- D large
- E maximuin

**Answer: D**

**Instructions**

The following passage there are blank each of which has been numbered. These number are printed below the passage and against each, five word are suggested. one of which fits the blank appropriately. find out the appropriate word in each case.

Trust is a (1) relationship concept that needs clarification because researchers (2) disciplines have defined it in so many different ways . A typology of trust types would make it easier to (3) and communicate results. and would be especially valuable if the types of trust related to one another. The typology should be interdisciplinary (4) many disciplines resarch e-commeree. this paper (5) a parsimoniuous interdisciplinary typoligy and relates trust construts to ecommeree consumer action. defining both conceptual -level and operational- level trust constructs. conceptual -level constructs consist (6) disposition to trust (primarily from psychology), institution-based trust (from sociology), and trusting (7) and trusting intentions (primarily from social psychology). Each construct is (8) into measurable subconstn\_icts, and the typology shows how trust constructs relate (9) already existing Internet relationship constructs. The effects of Web vendor interventions on consumer behaviours are posited to be (10) mediated by consumer trusting beliefs and trusting intentions in the e-vendor.

**Question 111**

(1)

- A vital
- B close
- C important
- D low
- E proximate

**Answer: A**

**[Latest Job Updates on Telegram - Join here](#)**

**Question 112**

(2)

- A along
- B around
- C across
- D above
- E over and above

**Answer: C**

**Question 113**

(3)

- A compose
- B compare
- C comparison
- D comparing
- E spare

**Answer: B**

**Question 114**

(4)

- A but
- B that .
- C which
- D because
- E as if

**Answer: D**

**Take 4 Free IBPS Clerk Mock Tests (With Solutions)**

**Question 115**

(5)

- A justifies
- B clarifies
- C denies
- D regards
- E registers

**Answer: A**

**Question 116**

(6)

- A in
- B of
- C for
- D with

E by

**Answer: B**

**Question 117**

(7)

A disbeliefs

B beliefs

C ways

D means

E measures

**Answer: B**

## IBPS Clerk Previous Papers (Download PDF)

**Question 118**

(8)

A decomposed

B decomposing

C deposed

D divided

E distributed

**Answer: A**

**Question 119**

(9)

A with

B in

C by

D of

E to

**Answer: E**

**Question 120**

(10)

A partially

B legally

- C generally
- D illegally
- E gradually

Answer: A

## IBPS Clerk Important Questions PDF

### Quant

#### Instructions

For the following questions answer them individually

#### Question 121

The ratio of monthly salaries of two persons, A and B is 8 : 7. If the salary of A is increased by 20% and that of B by 10%, the new ratio becomes 96 : 77. What is A's salary ?

- A Rs. 800
- B Rs. 700
- C Rs. 750
- D Cannot be determined
- E None of these

Answer: D

#### Explanation:

Let the salary of A be "a" and the salary of B is "b"

$$\frac{a}{b} = \frac{8}{7}$$

Now, After 20% increment, salary of A becomes 1.2a

and after increment of 10%, salary of B becomes 1.1b

Given that  $\frac{1.2a}{1.1b} = \frac{96}{77}$ , this implies that  $\frac{a}{b} = \frac{8}{7}$

As both the equations are giving same ratio and in no way the exact values of A and B can be found out .

Hence Option D is the correct answer

## IBPS Clerk Free Preparation App

#### Question 122

Simple interest on a certain sum at 7 p.c.p.a for four years is Rs. 3584. What will be the compound interest on the same principal at 4 p.c.p.a. in two years ?

- A Rs. 1054.48
- B Rs. 1044.48
- C Rs. 1044.84
- D Rs. 1064.84
- E None of these

**Answer: B**

**Explanation:**

Let the principal amount be P and given that R = 7%/ annum and T = 4 years, S.I for 4 years = Rs 3584

$$\text{S.I.} = \frac{P \times R \times T}{100} = \frac{P \times 7 \times 4}{100} = 3584$$

P = Rs 12800

Now, to calculate the C.I rate of interest has been changed to 4%/ annum and time period to 2 years

$$\text{C.I.} = P \left(1 + \frac{4}{100}\right)^2 - P$$

$$= 12800(1.0816 - 1)$$

$$= 12800 \times 0.0816$$

= Rs. 1044.48

**Question 123**

The cost of pure milk is Rs. 16 per litre. On adding water, the mixture is sold at Rs. 15/litre. In this way the milkman earns 25% profit. What is the ratio of milk and water in the mixture ? Assume the cost of water be Rs 0

- A 3 : 1
- B 7 : 25
- C 15 : 1
- D 1 : 15
- E None of these.

**Answer: A**

**Explanation:**

As the Milkman is making 25% profit on selling milk and water solution at Rs 15, the Cost price of water and Milk solution is  $\frac{15}{1.25} = \text{Rs } 12$

let the amount of pure milk be x litre and amount of water mixed with it be y litre.

So using,  $\frac{16x}{x+y} = 12$

$$\frac{x}{y} = \frac{3}{1}$$

**Question 124**

Four persons - M, N, O and P-distributed a sum of Rs. 44352 among themselves. M got 3/8 th of total amount. N got 1/6 th part of the remaining amount. Thereafter, the remaining amount was divided between O and P in the ratio 3 : 2. The amount received by P is :

- A Rs. 9648
- B Rs. 9848
- C Rs. 9884
- D Rs. 9240
- E Rs. 9270

**Answer: D**

**Explanation:**

Total amount = Rs 44352

$$\text{M's share} = \frac{3}{8} \times 44352 = \text{Rs } 16632$$

Remaining amount =  $44352 - 16632 = \text{Rs } 27720$

N's Share =  $\frac{1}{6} \times 27720 = \text{Rs } 4620$

Remaining amount =  $27720 - 4620 = \text{Rs } 23100$

Ratio in which the remaining amount is divided between O: P = 3:2

P's share =  $\frac{2}{5} \times 23100 = \text{Rs } 9240$

## Free Banking Study Material (15000 Solved Questions)

### Question 125

Three persons A, B and C start a business with 12800, 16800 and 9600 respectively. At the end of the year. B received Rs. 13125 as share in total profit. What is the share of Mr. C in the profit ?

- A Rs. 7850
- B Rs. 7550
- C Rs. 7500
- D Rs. 8500
- E None of these

**Answer:** C

#### Explanation:

Given that A, B and C start a business with 12800, 16800 and 9600 respectively. Time period for which all of them remain invested = 12 months

So division of profits would be in the ratio  $(12800 \times 12) : (16800 \times 12) : (9600 \times 12)$

A : B : C = 16 : 21 : 12

let the profit be Rs P

Given that share of B is Rs 13125

$$\frac{21}{49}XP = 13125$$

$$P = 30625$$

$$\text{Share of C} = \frac{12}{49} \times 30625 = \text{Rs } 7500$$

### Question 126

One-third of a diagonal of a square is  $3\sqrt{2}$  units. What is the measure of the side of the square ?

- A 6 units
- B 3 units
- C 18 units
- D 9 units
- E None of these

**Answer:** D

#### Explanation:

If the length of side of a square is b units then length of diagonal is  $\sqrt{2}b$

$$\frac{\sqrt{2}b}{3} = 3\sqrt{2}$$

b = 9

**Question 127**

56 men can do a job in 14 days. How many additional men are required to do the same job in 8 days?

- A 42
- B 24
- C 52.
- D 25
- E None of these

**Answer: A**

**Explanation:**

Let the extra men required be M

using the formula

$$\frac{M_1 D_1}{W_1} = \frac{M_2 D_2}{W_2}$$

$$\frac{56 \times 14}{W} = \frac{8(M+14)}{W}$$

$$M + 56 = 98$$

$$M = 42 \text{ men}$$

## IBPS Clerk Free Online Coaching

**Question 128**

A shopkeeper has goods of worth 6000. He sold half of the goods at a gain of 12%. At what profit percent should he sell the remaining half of the stock so that he gets 18% profit on the whole ?

- A 25%
- B 24%
- C 18%
- D 21%
- E None of these

**Answer: B**

**Explanation:**

total cost price of goods = Rs 6000

Cost price of half goods = Rs 3000

Selling prices of half goods =  $1.12 \times 3000 = \text{Rs } 3360$

Total profit assumed is 18 % which means total selling price should be =  $1.18 \times 6000 = \text{Rs } 7080$

Selling price if remaining half items =  $7080 - 3360 = \text{Rs } 3720$

Profit percent for another half =  $\frac{3720 - 3000}{3000} \times 100$

= 24 %

**Question 129**

A 210 metre long train crosses a man running at 9 kmph in opposite direction in 6 seconds. Find the speed of the train.

- A 98 kmph
- B 97 kmph
- C 107 kmph
- D 117 kmph
- E None of these

**Answer: D**

**Explanation:**

let the speed of train be a km/hr

As both man and train are moving towards each other and hence the relative speed will be  $(a+9)$  km/hr =  $(a + 9) \times \frac{5}{18}$

Length of Train = 210 m

Time taken = 6 sec

using Distance = Speed x Time

$$210 = (a + 9) \times \frac{5}{18} \times 6$$

$$a = (126 - 9) = 117 \text{ km/hr}$$

**Question 130**

**Average score of a cricketer in 13 matches is 42 runs. if the average score in the first five matches be 54 runs, what is the average score in the last eight matches ?**

- A 36.5
- B 34.5
- C 35.4
- D 38.5
- E None of these

**Answer: B**

**Explanation:**

$$\text{Average} = \frac{\text{TotalRuns}}{\text{NumberofMatches}}$$

Overall Average runs = 42

Total Matches = 13

Total Runs =  $42 \times 13 = 546$

Now , Average runs in 5 matches = 54

total run in first 5 matches =  $54 \times 5 = 270$

Total Runs in last 8 matches =  $546 - 270 = 276$

$$\text{Average of last 8 matches} = \frac{276}{8} = 34.5$$

hence the answer is option B

**Question 131**

**The perimeter of a rectangle whose length is 6 metre more than its breadth is 84 metre. What is the area of the triangle whose base is equal to the diagonal of the rectangle and height is equal to the length of the rectangle ?**



- A 360 sq. metre
- B 380 sq. metre
- C 360 metre
- D 400 sq. metre
- E None of these

**Answer:** A

**Explanation:**

Let the base of rectangle be  $y$ , then its length will be  $= y+6$

perimeter of triangle = 84

$$2(\text{length} + \text{breadth}) = 84$$

$$2(2y + 6) = 84$$

$$2y + 6 = 42$$

$$y = 18 \text{ m}$$

length of rectangle = height of triangle =  $18 + 6 = 24 \text{ m}$

$$\text{Diagonal of rectangle} = \text{base of Triangle} = \sqrt{(24)^2 + (18)^2} = 30$$

$$\text{Area of Triangle} = \frac{1}{2} \times 30 \times 24$$

$$\text{Area of Triangle} = 360 \text{ sq m}$$

**Question 132**

**Due to decrease of 10% in the price of tea per kg, a consumer buys 250gm of tea more than before for Rs. 270. What is the original price of tea ?**

- A 130/kg
- B 120/kg
- C 115/kg
- D 140/kg
- E None of these

**Answer:** B

**Explanation:**

Let the original price of tea be  $a$  Rs per kg and original weight of tea bought by consumer be  $b$  kg

$$a \times b = 270 \text{ (let this equation be 1)}$$

Now due to decrease in price by 10 percent the new prices become 0.9 times the original and as a result consumption increases by 0.25 kg without spending any extra money .

$$\text{So, } 0.9a \times (b+0.25) = 270 \text{ (let this equation be 2)}$$

From equation 1 and 2

$$0.9ab + 0.225a = 270$$

$$0.225a = 270 - 243$$

$$a = 120/\text{kg}$$

**Instructions**

What will come in place of the question mark (?) in the following questions ?

**Question 133**

$$(34.5 \times 14 \times 42) \div 2.8 = ?$$

- A 7445
- B 7425
- C 7245
- D 7435
- E None of these

**Answer:** C

**Explanation:**

Using BODMAS Rule, first solve the brackets and then do the division

$$(34.5 \times 14 \times 42) \div 2.8$$

$$20286 \div 2.8$$

$$= 7245$$

**Daily Free Banking Online Test**

**Question 134**

$$-676.76 + 1237.87 + 897.34 - ? = 1294.25$$

- A 168.2
- B 164.2
- C 154.2
- D 164.8
- E None of these

**Answer:** B

**Explanation:**

Let the missing number be x

$$-676.76 + 1237.87 + 897.34 - x = 1294.25$$

$$1458.45 - 1294.25 = x$$

$$x = 164.2$$

**Question 135**

$$\frac{3}{8} \text{ of } (4624 \div (564 - 428)) = ?$$

- A 11.75
- B 12.57
- C 21.75
- D 12.75
- E None of these

Answer: D

Explanation:

$$\frac{3}{8} \text{ of } (4624 \div (564 - 428))$$

using BODMAS rule

$$= \frac{3}{8} \times (4624 \div 136)$$

$$= \frac{3}{8} \times 34$$

$$= 12.75$$

Question 136

$$4\frac{1}{2} + (1 \div 2\frac{8}{9}) - 3\frac{1}{13} = ?$$

A 23/13

B 25/13

C 26/13

D 27/13

E None of these

Answer: A

Explanation:

Let the number be y

$$4\frac{1}{2} + (1 \div 2\frac{8}{9}) - 3\frac{1}{13} = ?$$

$$\frac{9}{2} + (1 \div \frac{26}{9}) - \frac{40}{13}$$

$$\frac{9}{2} + \frac{9}{26} - \frac{40}{13}$$

$$\frac{117+9-80}{26}$$

$$\frac{46}{26}$$

$$\frac{23}{13}$$

**Download IBPS Clerk General Knowledge PDF**

Question 137

$$(216)^4 \div (36)^4 \times 6^5 = (6)^?$$

A 8

B 6

C 7

D 9

E 11

Answer: D

Explanation:

Let the missing number be y

$$(216)^4 \div (36)^4 \times y = (6)^?$$

Using BODMAS Rule

$$6^4 \times 6^5 = (6)^?$$

$$x = 9$$

Hence option D is correct.

**Question 138**

$$456 \div 24 \times 38 - 958 + 364 = ?$$

A 228

B 124

C 128

D 138

E 145

**Answer: C**

**Explanation:**

$$456 \div 24 \times 38 - 958 + 364$$

Using BODMAS rule

$$= ((456 \div 24) \times 38) - 958 + 364$$

$$= (19 \times 38) - 594$$

$$= 722 - 594 = 128$$

**Question 139**

$$3_{17}^6 \div 2_{34}^7 - 1_{25}^9 = (?)^2$$

A  $\frac{2}{5}$

B  $\frac{3}{5}$

C  $\frac{5}{2}$

D  $\frac{5}{3}$

E  $\frac{4}{7}$

**Answer: A**

**Explanation:**

Let the missing number be y

$$3_{17}^6 \div 2_{34}^7 - 1_{25}^9 = (y)^2$$

$$3_{17}^6 = \frac{57}{17}$$

$$2_{34}^7 = \frac{75}{34}$$

$$1_{25}^9 = \frac{34}{25}$$

using BODMAS rule

$$\frac{57}{17} \div \frac{75}{34} - \frac{34}{25}$$

$$\frac{38}{25} - \frac{34}{25}$$
$$= \frac{4}{25} = (y)^2$$
$$y = \frac{2}{5}$$

## 200+ Free GK Tests for Banking exams

### Question 140

$$(973 \div 14) \div 5 \times 11 = ?$$

- A 152.2
- B 152.9
- C 159.2
- D 195.2
- E None of these

**Answer:** B

### Explanation:

This question is checking the concept of BODMAS rule.

$$(973 \div 14) \div 5 \times 11 = 69.5 \div 5 \times 11 = 13.9 \times 11 = 152.9$$

Hence option B is correct

### Question 141

$$\frac{\sqrt{4356} \times \sqrt{?}}{\sqrt{6084}} = 11$$

- A 196
- B 125
- C 169
- D 225
- E 81

**Answer:** C

### Explanation:

Let the missing number be y

$$\frac{\sqrt{4356} \times \sqrt{?}}{\sqrt{6084}} = 11$$

$$= \frac{66 \times \sqrt{y}}{78} = 11$$

$$= \sqrt{y} = 13$$

$$y = 169$$

Hence the option C is correct

### Question 142

$$(43)^2 + 841 = (?)^2 + 1465$$

- A 15
- B 65
- C 45
- D 35
- E 25

**Answer:** D

**Explanation:**

Let the missing number be y

$$1849 + 841 = (y)^2 + 1465$$

$$(y)^2 = 1225$$

$$y = 35$$

Hence option D is correct

## 100 Free IBPS Clerk Computer Awareness Tests

**Question 143**

$$4\frac{1}{2} + (1 \div 2\frac{8}{9}) - 3\frac{1}{13} = ?$$

- A  $\frac{23}{13}$
- B  $\frac{13}{23}$
- C  $\frac{25}{13}$
- D  $\frac{25}{26}$
- E None of these

**Answer:** A

**Explanation:**

Let the number be y

$$4\frac{1}{2} + (1 \div 2\frac{8}{9}) - 3\frac{1}{13} = ?$$

$$\frac{9}{2} + (1 \div \frac{26}{9}) - \frac{40}{13}$$

$$\frac{9}{2} + \frac{9}{26} - \frac{40}{13}$$

$$\frac{117+9-80}{26}$$

$$\frac{46}{26}$$

$$\frac{23}{13}$$

**Question 144**

$$((441)^{\frac{1}{2}} \times 207 \times (343)^{\frac{1}{3}}) \div ((14)^2 \times (529)^{\frac{1}{2}}) = ?$$

- A 5.75
- B 6.75

C 7.75

D 6.25

E 6.50

**Answer: B**

**Explanation:**

$$= ((441)^{1/2} \times 207 \times (343)^{1/3} \div ((14)^2 \times (529)^{1/2})$$

$$= (21 \times 207 \times 7 \div (196 \times 23))$$

Using BODMAS rule

$$\frac{30429}{4508}$$

$$= 6.75$$

Hence option B is correct

**Question 145**

$$(1097.63 + 2197.36 - 2607.24) \div 3.5 = ?$$

A 196.5

B 186.5

C 196.75

D 200.5

E 136.5

**Answer: A**

**Explanation:**

$$=(1097.63 + 2197.36 - 2607.24) \div 3.5$$

Using BODMAS rule

$$= 687.75 \div 3.5$$

$$= 196.5$$

Hence option A is correct

## 200+ Banking Previous Papers (Download PDF)

**Question 146**

$$(\sqrt{7744} \times 11^2) \div 2^3 = (?)^3$$

A 121

B 11

C 9

D 12

E 17

**Answer: B**

**Explanation:**

Let the missing number be y

$$(\sqrt{7744 \times 11^2}) \div 2^3 = (?)^2$$

$$\frac{88 \times 11}{8} = (y)^2$$

$$121 = (y)^2$$

$$y = 11$$

Hence the correct option is B

**Question 147**

$$3^3 \times 6^{12} - 2^{16} \times 3^{\frac{1}{2}} = ?$$

A 16

B 12

C 14

D 18

E 17

**Answer: C**

**Explanation:**

$$3^3 \times 6^{12} - 2^{16} \times 3^{\frac{1}{2}}$$

$$\frac{27}{8} \times \frac{77}{12} - \frac{35}{16} \times \frac{7}{2}$$

$$\frac{77 \times 27}{96} - \frac{35 \times 7}{32}$$

$$= 21.656 - 7.656$$

$$= 14$$

Hence option C is correct

**Instructions**

What will come in place of the question mark (?) in the following number series ?

**Question 148**

960, 839, 758, 709, ?, 675

A 698

B 694

C 684

D 648

E 680

**Answer: C**

**Explanation:**

Let the missing number be y

$$960 - 839 = 121 = (11)^2$$

$$839 - 758 = 81 = (9)^2$$

$$758 - 709 = 49 = (7)^2$$



here we can see the pattern of squares of decreasing odd numbers as the difference of two consecutive numbers . So,

$$709 - y = (5)^2 = 25$$

$$y = 684$$

## Latest Job Updates on Telegram - Join here

### Question 149

3, ?, 14, 55, 274, 1643

- A 5
- B 6
- C 7
- D 8
- E None of these

**Answer:** A

#### Explanation:

Let the missing number be y

here the pattern is

$$55 = 14 \times 4 - 1$$

$$274 = 55 \times 5 - 1$$

$$1643 = 274 \times 6 - 1$$

so

$$y = 3 \times 2 - 1 = 5$$

### Question 150

36, 38.8, 42.8, ?, 54.4, 62

- A 46
- B 48
- C 45
- D 48.2
- E 49.4

**Answer:** B

#### Explanation:

$$38.8 - 36 = 2.8$$

$$42.8 - 38.8 = 4$$

$$y - 42.8 =$$

$$54.4 - y =$$

$$62 - 54.4 = 7.6$$

Here we can sense that the difference between consecutive numbers is increasing by 1.2 so,

$$y - 42.8 = 5.2$$

$$y = 48$$

lets check this value in

$$54.4 - 48 = 6.6$$

$$5.2 + 1.2 = 6.6 \text{ (hence our theory got proved)}$$

Correct answer is B

**Question 151**

**37, ?, 103, 169, 257, 367**

A 49

B 46

C 56

D 59

E 69

**Answer: D**

**Explanation:**

let the missing number be y

$$y - 37 = ?$$

$$103 - y = ?$$

$$169 - 103 = 66 = 11 \times 6$$

$$257 - 169 = 88 = 11 \times 8$$

$$367 - 257 = 110 = 11 \times 10$$

As we can see that the difference is the even multiple of 11 and the even factor is getting increased by 2 every time.

$$\text{so } y - 37 = 11 \times 2$$

$$y = 59$$

$$103 - 59 = 44 = 11 \times 4 \text{ (hence our theory got proved.)}$$

So the answer is option D

**Take 4 Free IBPS Clerk Mock Tests (With Solutions)**

**Question 152**

**4, 6, 12, ?, 90, 315**

A 25

B 27

C 30

D 45

E None of these

**Answer: C**

**Explanation:**

Let the missing number be y

Now we can see that ,

$$6 = 4 \times 1.5$$

$$12 = 6 \times 2$$

$$y = 12 \times 2.5 = 30$$

$$90 = 30 \times 3$$

$$315 = 90 \times 3.5$$

The given pattern is that the multiplying factor is increasing by 0.5 for every term when going from left to right.

Hence, answer is option C

### Instructions

In the following table, the number of pages printed by 6 printers in 5 weeks has been given. Read the following table carefully and answer the questions.

Printer/Week	A	B	C	D	E	F
First	664	618	628	552	638	419
Second	569	441	519	438	621	437
Third	440	614	503	527	541	742
Fourth	256	563	347	651	412	321
Fifth	717	429	598	582	319	693

### Question 153

What is the average number of pages printed by all printers in the first week ?

- A 586.5
- B 540
- C 545.4
- D 546.5
- E 548

Answer: A

### Explanation:

Total no. of pages printed by all printers in first week =  $664+618+628+552+638+419 = 3519$

Required average =  $3519/6 = 586.5$

### Question 154

What is the average number of pages printed by printer C taking all the weeks together ?

- A 529
- B 519
- C 591
- D 592
- E 539

Answer: B

### Explanation:

Total no. of pages printed by C in all weeks =  $628+519+503+347+598 = 2595$

Average of pages printed by C =  $2595/5 = 519$

## IBPS Clerk Previous Papers (Download PDF)

### Question 155

In which week was the number of printed pages maximum?

- A First
- B Second
- C Third
- D Fourth
- E Fifth

**Answer:** A

### Explanation:

Number of pages printed in each week :

I -  $664+618+628+552+638+419 = 3519$  (MAXIMUM)

II -  $569+441+519+438+621+437 = 3025$

III -  $440+614+503+527+541+742 = 3367$

IV -  $256+563+347+651+412+321 = 2550$

V -  $717+429+598+582+319+693 = 3338$

### Question 156

The difference between the pages printed by printers A and E in the second week is

- A 46
- B 42
- C 62
- D 52
- E None of these

**Answer:** D

### Explanation:

Pages printed by A in second week = 569

Pages printed by E in second week = 621

Required difference =  $621-569 = 52$

### Question 157

The difference between the total pages printed by printers B and C (all weeks taken together) is

- A 65
- B 70
- C 66
- D 77

E None of these

**Answer: B**

**Explanation:**

Total pages printed by printer B =  $618+441+614+563+429 = 2665$

Total pages printed by printer C =  $628+519+503+347+598 = 2595$

Required difference =  $2665-2595 = 70$

## IBPS Clerk Important Questions PDF

**Instructions**

For the following questions answer them individually

**Question 158**

**Pipe A can fill a tank in 8 hours while another pipe B can fill it in 16 hours. A third pipe C can empty the full tank in 32 hours. All three pipes are opened simultaneously. In what time will an empty tank be filled ?**

A 5.5 hours

B 6 hours

C 6.4 hours

D 7 hours

E 7.2 hours

**Answer: C**

**Explanation:**

Pipe A 1 hour work =  $1/8$

Pipe B 1 hour work =  $1/16$

Pipe C 1 hour work =  $- 1/32$

Here negative sign shows that it is doing negative work

Now when all pipes are opened simultaneously then 1 hour combined work =  $1/8 + 1/16 - 1/32$

=  $5/32$

So time taken by all pipes to fill the tank =  $32/5$  hours = 6.4 hours

**Question 159**

**A and B are two numbers. Six times square of B is 540 more than square of A. The ratio of A and B is 3 : 2. Find the number B?**

A 12

B 18

C 14

D 21

E None of these

**Answer: A**

**Explanation:**

As the ratio A:B is given as 3:2, let's assume that A is  $3y$  and B is  $2y$

It is given that  $6(2y)^2 = 540 + (3y)^2$

$$24(y)^2 - 9(y)^2 = 540$$

$$15(y)^2 = 540$$

$$(y)^2 = 36$$

$$y = 6$$

$$\text{hence } B = 2y = 2 \times 6 = 12$$

#### Question 160

Eight years ago, the age of Vishal was four times that of Shekhar's. After 8 years, Vishal's age will be twice of Shekhar's age. Vishal's present age is

- A 40 years
- B 28 years
- C 30 years
- D 32 years
- E None of these

**Answer:** A

#### Explanation:

Let V and S be Vishal's and Shekhar's present age.

$$V - 8 = 4(S - 8) \dots (1)$$

$$V + 8 = 2(S + 8) \dots (2)$$

$$V = 2(S + 8) - 8 \dots (3)$$

Put Eq(3) in Eq(1).

$$2(S + 8) - 8 - 8 = 4(S - 8)$$

$$2S + 16 - 16 = 4S - 32$$

$$4S - 2S = 32$$

$$2S = 32$$

$$S = 16$$

Put the value of S in Eq.(3)

$$V = 2(16 + 8) - 8 = 48 - 8 = 40$$

On solving we can say that V = 40 years and S = 16 years. Hence, option A is the correct answer.

## IBPS Clerk Free Preparation App

### Reasoning

#### Instructions

Study the following information carefully and answer the questions given below :

Seven persons – A, B, C, D, E, F and G – are standing in a straight line facing north at equal distances but not necessarily in the same order. Each of them is a different professional viz, Actor, Reporter, Doctor, Engineer, Lawyer, Teacher and Painter but not necessarily in the same order. G is standing at the fifth position to the left of C. Reporter is standing at the third position to the right of G. F is standing at the fifth position to the right of A. E is standing second to the left of B. Engineer is standing the second position to the left of D. Three persons are sitting between Engineer and Painter. Doctor is to the immediate left of Engineer. Lawyer is to the immediate right of teacher.

#### Question 161

Now many persons are there to the left of Reporter ?

- A None
- B One
- C Two
- D Three
- E More than three

**Answer: E**

**Explanation:**

First of all it is given that G is standing at the fifth position to left of C So, only the following cases are possible

\_ G \_ \_ \_ \_ C

G \_ \_ \_ \_ C \_

Given that reporter is standing at the third position to the right of G So, considering previous 2 cases the following cases are possible :

\_ G \_ \_ (Rep) \_ C

G \_ \_ (Rep) \_ C \_

Now F is standing at 5th position to right of A, so the following cases are possible

A G \_ \_ (Rep) F C

G A \_ (Rep) \_ C F

Now E is standing 2nd to left of B, So,

A G E \_ B(Rep) F C

G A E (Rep) B C F

Engineer is standing 2nd to left of D

A G(Eng) E D B(Rep) F C

G A(Eng) E D(Rep) B C F

Doctor is to the immediate left of Engineer So,

A(Doc) G(Eng) E D B(Rep) F C

G(Doc) A(Eng) E D(Rep) B C F

Three persons are sitting between Engineer and Painter. SO,

A(Doc) G(Eng) E D B(Rep) F(Painter) C

G(Doc) A(Eng) E D(Rep) B C(Painter) F

Lawyer is to the immediate right of teacher.. So,

A(Doc) G(Eng) E(Teacher) D(Lawyer) B(Rep) F(Painter) C(Actor) - Desired Result

G(Doc) A(Eng) E D(Rep) B C(Painter) F -Not Possible in this Case

## Free Banking Study Material (15000 Solved Questions)

**Question 162**

**Which of the following pairs of persons are sitting at the extreme ends ?**

- A A and Actor
- B Engineer and C

- C Doctor and F
- D F and Lawyer
- E Teacher and Doctor

**Answer: A**

**Explanation:**

First of all it is given that G is standing at the fifth position to left of C So, only the following cases are possible

\_ G \_ \_ \_ C

G \_ \_ \_ C \_

Given that reporter is standing at the third position to the right of G So, considering previous 2 cases the following cases are possible :

\_ G \_ \_ (Rep) \_ C

G \_ \_ (Rep) \_ C \_

Now F is standing at 5th position to right of A, so the following cases are possible

A G \_ \_ (Rep) F C

G A \_ (Rep) \_ C F

Now E is standing 2nd to left of B, So,

A G E \_ B(Rep) F C

G A E (Rep) B C F

Engineer is standing 2nd to left of D

A G(Eng) E D B(Rep) F C

G A(Eng) E D(Rep) B C F

Doctor is to the immediate left of Engineer So,

A(Doc) G(Eng) E D B(Rep) F C

G(Doc) A(Eng) E D(Rep) B C F

Three persons are sitting between Engineer and Painter . SO,

A(Doc) G(Eng) E D B(Rep) F(Painter) C

G(Doc) A(Eng) E D(Rep) B C(Painter) F

Lawyer is to the immediate right of teacher. . So,

A(Doc) G(Eng) E(Teacher) D(Lawyer) B(Rep) F(Painter) C(Actor) - Desired Result

G(Doc) A(Eng) E D(Rep) B C(Painter) F -Not Possible in this Case

**Question 163**

**Who among the following is sitting exactly in the middle of the row ?**

- A Doctor
- B F
- C Lawyer
- D B
- E Teacher

**Answer: C**

**Explanation:**



First of all it is given that G is standing at the fifth position to left of C So, only the following cases are possible

\_ G \_ \_ \_ C

G \_ \_ \_ C \_

Given that reporter is standing at the third position to the right of G So, considering previous 2 cases the following cases are possible :

\_ G \_ \_ (Rep) \_ C

G \_ \_ (Rep) \_ C \_

Now F is standing at 5th position to right of A, so the following cases are possible

A G \_ \_ (Rep) F C

G A \_ (Rep) \_ C F

Now E is standing 2nd to left of B, So,

A G E \_ B(Rep) F C

G A E (Rep) B C F

Engineer is standing 2nd to left of D

A G(Eng) E D B(Rep) F C

G A(Eng) E D(Rep) B C F

Doctor is to the immediate left of Engineer So,

A(Doc) G(Eng) E D B(Rep) F C

G(Doc) A(Eng) E D(Rep) B C F

Three persons are sitting between Engineer and Painter . SO,

A(Doc) G(Eng) E D B(Rep) F(Painter) C

G(Doc) A(Eng) E D(Rep) B C(Painter) F

Lawyer is to the immediate right of teacher. . So,

A(Doc) G(Eng) E(Teacher) D(Lawyer) B(Rep) F(Painter) C(Actor) - Desired Result

G(Doc) A(Eng) E D(Rep) B C(Painter) F -Not Possible in this Case

#### Question 164

Who among the following is sitting second to the right of Teacher ?

A Painter

B B

C A

D Actor

E Lawyer

**Answer: B**

#### Explanation:

First of all it is given that G is standing at the fifth position to left of C So, only the following cases are possible

\_ G \_ \_ \_ C

G \_ \_ \_ C \_

Given that reporter is standing at the third position to the right of G So, considering previous 2 cases the following cases are possible :

\_ G \_ \_ (Rep) \_ C

G \_ \_ (Rep) \_ C \_

Now F is standing at 5th position to right of A, so the following cases are possible

A G \_ \_ (Rep) F C

G A \_ (Rep) \_ C F

Now E is standing 2nd to left of B, So,

A G E \_ B(Rep) F C

G A E (Rep) B C F

Engineer is standing 2nd to left of D

A G(Eng) E D B(Rep) F C

G A(Eng) E D(Rep) B C F

Doctor is to the immediate left of Engineer So,

A(Doc) G(Eng) E D B(Rep) F C

G(Doc) A(Eng) E D(Rep) B C F

Three persons are sitting between Engineer and Painter. SO,

A(Doc) G(Eng) E D B(Rep) F(Painter) C

G(Doc) A(Eng) E D(Rep) B C(Painter) F

Lawyer is to the immediate right of teacher. . So,

A(Doc) G(Eng) E(Teacher) D(Lawyer) B(Rep) F(Painter) C(Actor) - Desired Result

G(Doc) A(Eng) E D(Rep) B C(Painter) F -Not Possible in this Case

## IBPS Clerk Free Online Coaching

### Question 165

Who among the following are the immediate neighbours of Painter ?

- A Actor and Teacher
- B B and Lawyer
- C B and Engineer
- D Reporter and C
- E Doctor and Lawyer

**Answer:** D

### Explanation:

First of all it is given that G is standing at the fifth position to left of C So, only the following cases are possible

\_ G \_ \_ \_ C

G \_ \_ \_ C \_

Given that reporter is standing at the third position to the right of G So, considering previous 2 cases the following cases are possible :

\_ G \_ \_ (Rep) \_ C

G \_ \_ (Rep) \_ C \_

Now F is standing at 5th position to right of A, so the following cases are possible

A G \_ \_ (Rep) F C

G A \_ (Rep) \_ C F

Now E is standing 2nd to left of B, So,

A G E \_ B(Rep) F C

G A E (Rep) B C F

Engineer is standing 2nd to left of D

A G(Eng) E D B(Rep) F C

G A(Eng) E D(Rep) B C F

Doctor is to the immediate left of Engineer So,

A(Doc) G(Eng) E D B(Rep) F C

G(Doc) A(Eng) E D(Rep) B C F

Three persons are sitting between Engineer and Painter . SO,

A(Doc) G(Eng) E D B(Rep) F(Painter) C

G(Doc) A(Eng) E D(Rep) B C(Painter) F

Lawyer is to the immediate right of teacher. . So,

A(Doc) G(Eng) E(Teacher) D(Lawyer) B(Rep) F(Painter) C(Actor) - Desired Result

G(Doc) A(Eng) E D(Rep) B C(Painter) F -Not Possible in this Case

### Instructions

Study the following information carefully and answer the questions given below : Point A is 11 metre to the north of point B. Point C is 11 metre to the east of point B. Point D is 5 metre to the north of point C. Point E is 7 metre to the west of the point D. Point F is 9 metre to the north of point E. Point G is 4 metre to the west of point F.

### Question 166

**Point. D Is in which direction with respect to point F ?**

A North-East

B South-East

C South

D North-West

E East

**Answer: B**

### Explanation:

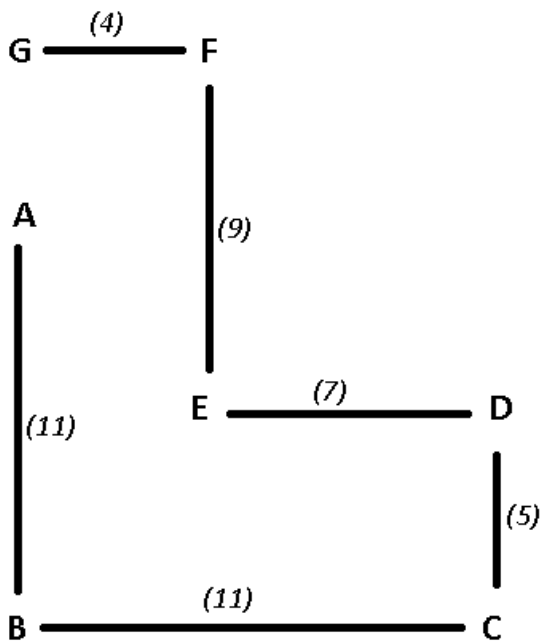
E is 7m to the west of D.

F is 9m to the north of point E. As G is 4m to the west of F.

=> G, A and B are collinear in that order and the distance between G and A is 3m.

Based on the above conditions, The points after plotted on a graph will be :

The numbers in the brackets are the distances between two points.



Point D is in south-east direction with respect to point F.

Thus, Ans - (B)

**Question 167**

Which of the following three points lie in a straight line ?

- A A, E and D
- B F, E and C
- C G, F and B
- D G, A and B
- E None of these.

**Answer:** D

**Explanation:**

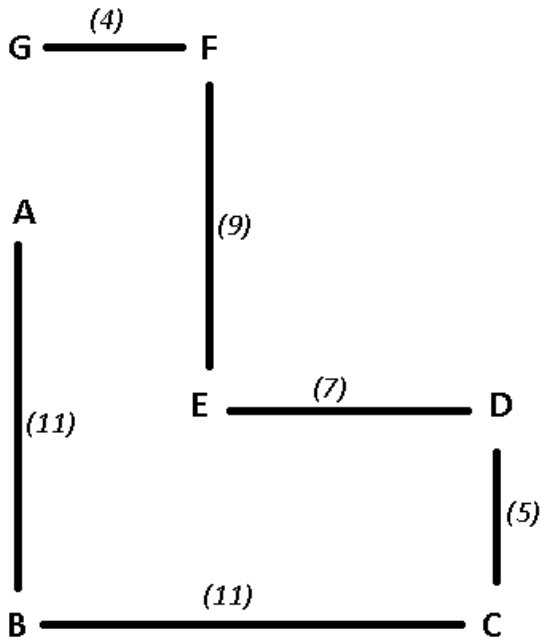
E is 7m to the west of D.

F is 9m to the north of point E. As G is 4m to the west of F.

=> G, A and B are collinear in that order and the distance between G and A is 3m.

Based on the above conditions, The points after plotted on a graph will be :

The numbers in the brackets are the distances between two points.



Clearly, G, A and B are collinear i.e. lie on a straight line.

Thus, Ans - (D)

**Instructions**

Study the following information carefully and answer the questions given below Among six persons – K, L, M, N, O and P— each lives on a different floor of a building having six floors numbered one to six (the ground floor is numbered 1, the floor above it is numbered 2 and so on and the topmost floor is numbered 6). L lives on an even numbered floor. L lives on a floor immediately below K's floor and immediately above M's floor. P lives on a floor immediately above N's floor. P lives on an even numbered floor. O does not live on floor number 4.

**Question 168**

Who amongst the following live on the floors exactly between K and P?

- A O and L
- B I, and N
- C L and M
- D M and N
- E M and O

**Answer: C**

**Explanation:**

Let the floors be :

- 6
- 5
- 4
- 3
- 2
- 1

It is given that L lives on an even numbered floor, so possible cases are:

- 6 - L

5  
4  
3  
2  
1

OR

6  
5  
4-L  
3  
2  
1

OR

6  
5  
4  
3  
2-L  
1

Now, L lives on a floor immediately below K's floor and immediately above M's floor, So out of the above three only last two cases are possible. i.e

6  
5-K  
4-L  
3-M  
2  
1

OR

6  
5  
4  
3-K  
2-L  
1-M

Now, P lives on a floor immediately above N's floor. P lives on an even numbered floor. So possible case is

6  
5-K  
4-L  
3-M  
2-P  
1-N

OR

- 6-P
- 5-N
- 4
- 3-K
- 2-L
- 1-M

It is given that O does not live on floor 4, So, the answer is

- 6-O
- 5-K
- 4-L
- 3-M
- 2-P
- 1-N

**Question 169**

**On which floor does O live ?**

- A** 6th
- B** 2nd
- C** 3rd
- D** 5th
- E** Cannot be determined

**Answer: A**

**Explanation:**

Let the floors be :

- 6
- 5
- 4
- 3
- 2
- 1

It is given that L lives on an even numbered floor, so possible cases are:

- 6 - L
- 5
- 4
- 3
- 2
- 1

OR

- 6
- 5
- 4-L

- 3
- 2
- 1
- OR
- 6
- 5
- 4
- 3
- 2-L
- 1

Now, L lives on a floor immediately below K's floor and immediately above M's floor , So out of the above three only last two cases are possible. i.e

- 6
- 5-K
- 4-L
- 3-M
- 2
- 1

OR

- 6
- 5
- 4
- 3-K
- 2-L
- 1-M

Now, P lives on a floor immediately above N's floor. P lives on an even numbered floor . So possible case is

- 6
- 5-K
- 4-L
- 3-M
- 2-P
- 1-N
- OR
- 6-P
- 5-N
- 4
- 3-K
- 2-L
- 1-M

It is given that O does not live on floor 4, So,the answer is

- 6-O
- 5-K



- 4-L
- 3-M
- 2-P
- 1-N

**Question 170**

Who amongst the following does live on 5th floor ?

- A O
- B M
- C N
- D K
- E Cannot be determined

**Answer: D**

**Explanation:**

Let the floors be :

- 6
- 5
- 4
- 3
- 2
- 1

It is given that L lives on an even numbered floor, so possible cases are:

- 6 - L
- 5
- 4
- 3
- 2
- 1
- OR
- 6
- 5
- 4-L
- 3
- 2
- 1
- OR
- 6
- 5
- 4
- 3
- 2-L

1

Now, L lives on a floor immediately below K's floor and immediately above M's floor, So out of the above three only last two cases are possible. i.e

6

5-K

4-L

3-M

2

1

OR

6

5

4

3-K

2-L

1-M

Now, P lives on a floor immediately above N's floor. P lives on an even numbered floor. So possible case is

6

5-K

4-L

3-M

2-P

1-N

OR

6-P

5-N

4

3-K

2-L

1-M

It is given that O does not live on floor 4, So, the answer is

6-O

5-K

4-L

3-M

2-P

1-N

**Daily Free Banking Online Test**

**Instructions**

Each of the questions below consists of a question and two statements numbered 1 and II given below it. You have to decide whether the data provided in the statements are sufficient to answer the question. Read both the statements and—

- a: if the data in statement **I alone** are sufficient to answer the question, while the data in statement **II alone** are not sufficient to answer the question.
- b: if the data in statement **II alone** are sufficient to answer the question, while the data in statement **I alone** are not sufficient to answer the question.
- c: if the data **either** in statement **I alone** or in statement **II alone** are sufficient to answer the question.
- d: if the data given in both the statements **I and II together** are not sufficient to answer the question, and
- e: if the data in both the statements **I and II together** are necessary to answer the question.

**Question 171**

**Is D the mother of S ?**

**I. L is the husband of D. L has only three children.**

**II. N is the brother of S and P. P is the daughter of L**

- A** if the data in statement **I alone** are sufficient to answer the question, while the data in statement **II alone** are not sufficient to answer the question.
- B** if the data in statement **II alone** are sufficient to answer the question, while the data in statement **I alone** are not sufficient to answer the question.
- C** if the data **either** in statement **I alone** or in statement **II alone** are sufficient to answer the question.
- D** if the data given in both the statements **I and II together** are not sufficient to answer the question
- E** if the data in both the statements **I and II together** are necessary to answer the question.

**Answer: E**

**Explanation:**

Clearly, **I alone** and **II alone** are not sufficient since there is no data about **S and D** in **I & II** respectively.

**I & II** : **L** is the husband of **D**, => **D** is female and they have 3 children.

Since **P** is the daughter of **L** and **N** is the brother of **S** and **P**

∴ **N, S** and **P** are siblings and are children of **L** and **D**.

Thus, **D** is the mother of **S**.

**Thus, I & II together are sufficient.**

**Question 172**

**How many students are there in the class ?**

**I. There are more than 20 but less than 27 students in the class.**

**II. There are more than 24 but less than 31 students in the class. When the students are divided into groups, each group contains five students.**

- A** if the data in statement **I alone** are sufficient to answer the question, while the data in statement **II alone** are not sufficient to answer the question.
- B** if the data in statement **II alone** are sufficient to answer the question, while the data in statement **I alone** are not sufficient to answer the question.
- C** if the data **either** in statement **I alone** or in statement **II alone** are sufficient to answer the question.
- D** if the data given in both the statements **I and II together** are not sufficient to answer the question.
- E** if the data in both the statements **I and II together** are necessary to answer the question.

**Answer: E**

**Explanation:**

**I** : No. of students can be = 21,22,23,24,25,26

Thus, I alone is **not** sufficient.

II : No. of students is multiple of 5 and is between 24 and 31

=> No. of students = 25,30

Thus, II alone is **not** sufficient.

I & II : From above two conclusions, only common number is 25

=> No. of students = 25

**Thus, I & II together are sufficient.**

#### Question 173

Among J, K, L, M and N, each has different height. Who amongst them is the second tallest ?

I. N is taller than M and K. K is shorter than M.

II. L is taller than N. J is not the tallest.

- A** if the data in statement I alone are sufficient to answer the question, while the data in statement II alone are not sufficient to answer the question.
- B** if the data in statement II alone are sufficient to answer the question. while the data in statement I alone are not sufficient to answer the question.
- C** if the data either in statement I alone or in statement II alone are sufficient to answer the question.
- D** if the data given in both the statements I and II together are not sufficient to answer the question
- E** if the data in both the statements I and II together are necessary to answer the question.

**Answer: D**

#### Explanation:

Since, there is no information about all people in each statement. Thus, each statement alone is insufficient.

I & II : From 1, we get :  $N > M > K$

From 2, we get :  $L > N$

Combining the above two conditions, we get :  $L > N > M > K$ .

It is known that J is not the tallest. Thus, J can take any position between L & N or N & M or N & K.

Thus, we cannot determine the 2nd tallest person.

**Thus, I & II together are not sufficient.**

## Download IBPS Clerk General Knowledge PDF

#### Question 174

Five persons - A, B, C, D and E- are sitting in a circle facing the centre. Who is sitting to the immediate left of D?

I. C is sitting second to the left of A. B and D are immediate neighbours of each other.

II. D is sitting to the immediate left of B. E is not an immediate neighbour of D and B.

- A** if the data in statement I alone are sufficient to answer the question, while the data in statement II alone are not sufficient to answer the question.
- B** if the data in statement II alone are sufficient to answer the question. while the data in statement I alone are not sufficient to answer the question.
- C** if the data either in statement I alone or in statement II alone are sufficient to answer the question.
- D** if the data given in both the statements I and II together are not sufficient to answer the question

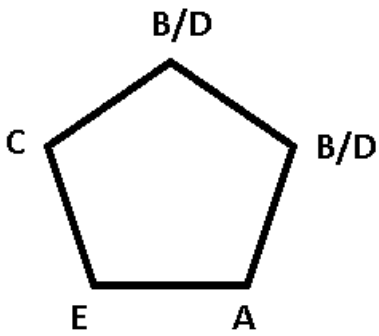
E if the data in both the statements I and II together are necessary to answer the question.

Answer: E

Explanation:

I : C is sitting second to the left of A. B and D are immediate neighbours of each other.

The arrangement will be :

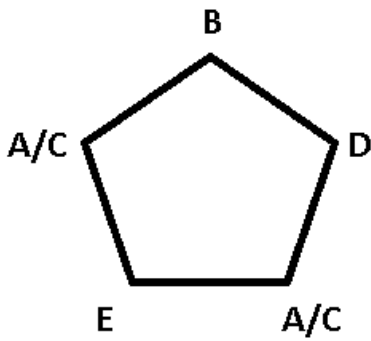


Since, we can't find the specific position of D, we cannot find who's sitting left of him.

Thus, I alone is insufficient.

II : D is sitting to the immediate left of B. E is not an immediate neighbour of D and B

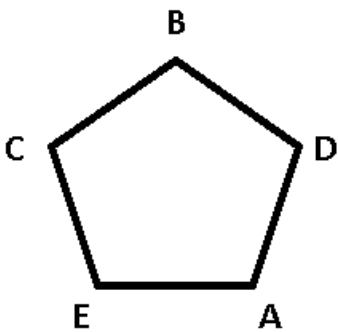
The arrangement will be :



Either A or C is sitting to the immediate left of D.

Thus, II alone is insufficient.

I & II : Combining the above two, we get the arrangement :



Thus, A is sitting to the immediate left of D.

Thus, I & II together are sufficient.

**Question 175**

How is 'cost' written in a code language ?

I. 'tell me the cost' is written as '@ 0 # 9' and 'cost was very high' is written as '& 6 # 1' in that code language.

II. 'some cost was discount' is written as '1 8 7 #' and 'some people like discount' is written as '8 7 5 9,6' in that code language.

- A if the data in statement I alone are sufficient to answer the question, while the data in statement II alone are not sufficient to answer the question.
- B if the data in statement II alone are sufficient to answer the question. while the data in statement I alone are not sufficient to answer the question.
- C if the data either in statement I alone or in statement II alone are sufficient to answer the question.
- D if the data given in both the statements I and II together are not sufficient to answer the question
- E if the data in both the statements I and II together are necessary to answer the question.

**Answer: A**

**Explanation:**

I : The common word is cost.

=> Cost is coded as '#'.

Thus, I alone is sufficient.

II : The common word is discount coded as '7', thus we can't find the code of cost.

Thus, II alone is not sufficient.

**Instructions**

In these questions, relationship between different elements is shown in the statements. These statements are followed by two conclusions. Mark if answer

- a: Only conclusion I follows.
- b: Only conclusion II follows.
- c: Either conclusion I or II follows.
- d: Neither conclusion I nor II follows.
- e: Both conclusions and II follow.

**Question 176**

**Statements**

$K > I \geq T \geq E$ ;

$O < R < K$

**Conclusions**

I.  $R < E$

II.  $O < T$

- A Only conclusion I follows.
- B Only conclusion II follows.
- C Either conclusion I or II follows.
- D Neither conclusion I nor II follows.
- E Both conclusions and II follow.

**Answer: D**

**Explanation:**

Statements :

$K > I \geq T \geq E$  and  $K > R > O$

Conclusions :

$R < E$  [not true]

$O < T$  [not true]

Thus, neither of the conclusions are true.

## 200+ Free GK Tests for Banking exams

### Question 177

**Statements**

$B > A > S < I > C > L < Y$

**Conclusions**

I.  $B > L$

II.  $A > Y$

A Only conclusion I follows.

B Only conclusion II follows.

C Either conclusion I or II follows.

D Neither conclusion I nor II follows.

E Both conclusions and II follow.

**Answer: D**

**Explanation:**

Statements :

$B > A > S$  and  $I > S$  and  $I > C > L$  and  $Y > L$

Conclusions :

$B > L$  [not true]

$A > Y$  [not true]

Thus, neither of the conclusions are true.

### Question 178

**Statements**

$C < L < O = U = D \geq S > Y$

**Conclusions**

I.  $O > Y$

II.  $C < D$

A Only conclusion I follows.

B Only conclusion II follows.

C Either conclusion I or II follows.

D Neither conclusion I nor II follows.

E Both conclusions and II follow.

**Answer: E**

**Explanation:**

Statements :

$O = U = D \geq S > Y$  and  $O = U = D > L > C$

Conclusions :

$O > Y$  [true]

$C < D$  [true]

Thus, both the conclusions are true.

**Question 179**

**Statements**

I.  $B > R > E > A > K$ ;

II.  $H > A > S$

**Conclusions**

I.  $H > K$

II.  $S < R$

A Only conclusion I follows.

B Only conclusion II follows.

C Either conclusion I or II follows.

D Neither conclusion I nor II follows.

E Both conclusions I and II follow.

**Answer: E**

**Explanation:**

H is greater than A which in turn is greater than K. Hence, H is greater than K.

Conclusion 1 is correct.

S is less than A which in turn is less than R.

Hence, S is less than R.

Conclusion 2 is also correct. Both the conclusions 1 and 2 are correct. Hence, option E is the right answer.

## 100 Free IBPS Clerk Computer Awareness Tests

**Question 180**

**Statements**

$J = A ; C \geq K \geq S \geq A$

**Conclusions**

I.  $C > J$

II.  $C = J$

A Only conclusion I follows.

B Only conclusion II follows.

C Either conclusion I or II follows.

D Neither conclusion I nor II follows.

E Both conclusions and II follow.

**Answer: C**

**Explanation:**

Combining the above statements, we get :



$$C \geq K \geq S \geq A = J$$

$$\Rightarrow C \geq J$$

Conclusions :

Thus, either  $C > J$  or  $C = J$

Either conclusion I or II is true.

### Instructions

In each of the questions/set of questions below are given two statements followed by two conclusions numbered I and II. You have to assume everything in the statements to be true even if they seem to be at variance from commonly known facts and then decide which of the two given conclusions logically follows from the information given in the statement.

- a: if only conclusion I follows.
- b: if only conclusion II follows.
- c: if either conclusion I or conclusion II follows.
- d: if neither conclusion I nor conclusion II follows.
- e: if both conclusions I and II follow.

### Question 181

#### Statements

All alphabets are numbers.

Some alphabets are digits.

#### Conclusions

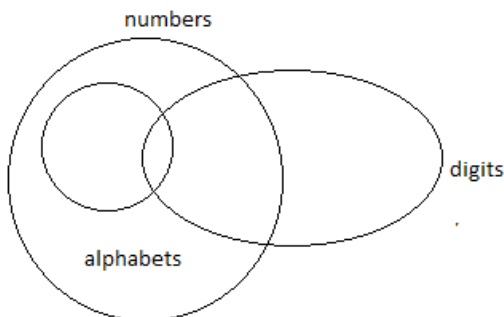
- I. At least some digits are numbers.
- II. No digit is a number.

- A if only conclusion I follows.
- B if only conclusion II follows.
- C if either conclusion I or conclusion II follows.
- D if neither conclusion I nor conclusion II follows.
- E if both conclusions I and II follow.

**Answer:** A

#### Explanation:

from the above statements we can draw the following venn diagram



and hence only conclusion 1 can be concluded

Question 182

Statements

Some squares are circles.

Some circles are rectangles.

Conclusions

I. At least some rectangles are squares.

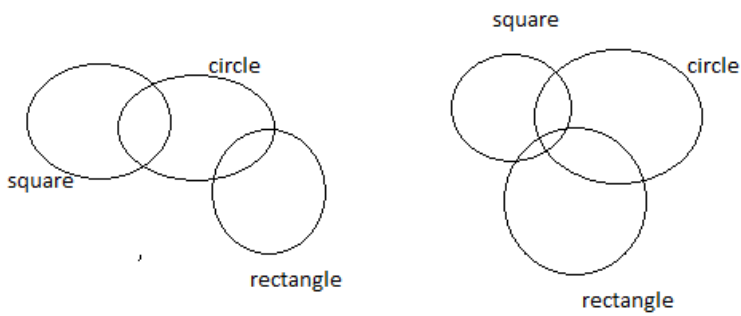
II. No rectangle is a square.

- A if only conclusion I follows.
- B if only conclusion II follows.
- C if either conclusion I or conclusion II follows.
- D if neither conclusion I nor conclusion II follows.
- E if both conclusions I and II follow.

Answer: C

Explanation:

following venn can be drawn based on above statements



so either of the given conclusion will be true

**200+ Banking Previous Papers (Download PDF)**

Question 183

Statements

No office is a palace.

All colleges are palace.

Conclusions

I. All palace are colleges.

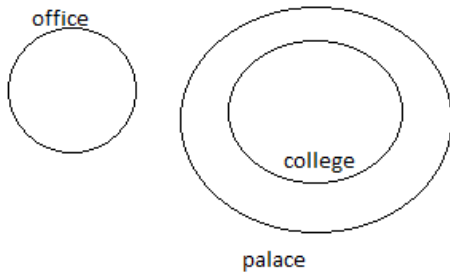
II.No college is an office.

- A if only conclusion I follows.
- B if only conclusion II follows.
- C if either conclusion I or conclusion II follows.
- D if neither conclusion I nor conclusion II follows.
- E if both conclusions I and II follow.

Answer: B

**Explanation:**

following venn can be drawn from the above statement



so only conclusion 2 is true

**Question 184**

**Statements**

All mountains are rivers.

All rivers are lakes.

**Conclusions**

I. All mountains are lakes.

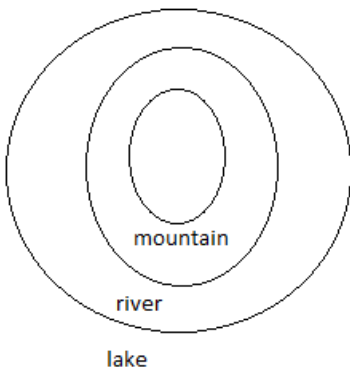
II. At least some lakes are rivers.

- A if only conclusion I follows.
- B if only conclusion II follows.
- C if either conclusion I or conclusion II follows.
- D if neither conclusion I nor conclusion II follows.
- E if both conclusions I and II follow.

**Answer: E**

**Explanation:**

following venn can be drawn from the above statements



and hence both conclusion can be concluded

**Question 185**

**Statements**

Some wins are losses.  
All trophies are losses.

**Conclusions**

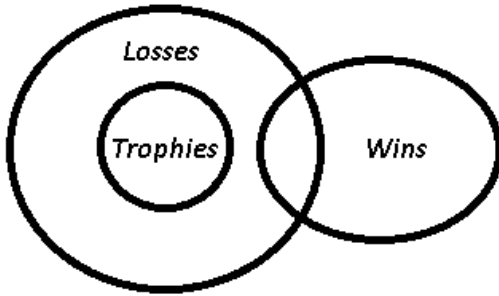
I. All trophies are wins.  
II. All losses are trophies.

- A if only conclusion I follows.
- B if only conclusion II follows.
- C if either conclusion I or conclusion II follows.
- D if neither conclusion I nor conclusion II follows.
- E if both conclusions I and II follow.

**Answer: D**

**Explanation:**

The venn diagram for above statements is :



**Conclusions**

I. All trophies are wins = false  
II. All losses are trophies = false

Thus, neither conclusion I nor conclusion II follows.

=> Ans - (D)

[Latest Job Updates on Telegram - Join here](#)

**Instructions**

Study If following information carefully an answer the questions given below

In a certain code language

'very large risk associated' written as 'nu ta ro gi'

'risk is very low' is written 'gi se nu mi'

'is that also associated' is written as 'ta mi po fu'

Inherent risk also damagin is written as 'fu nu di yu'.

**Question 186**

Which of the following is it code of 'damaging'?

- A di
- B yu
- C nu
- D either di or yu

E None of these

**Answer: D**

**Explanation:**

From conditions I & IV, the only common word is 'risk' coded as 'nu'

From III & IV, there is only one common word, i.e., 'also' - tu

=> From IV, there are still two words left, 'inherent' & 'damaging' either coded as 'di' or 'yu'

Thus, damaging is either coded as 'di' or 'yu'.

**Question 187**

**Which of the following may represent 'risk is very large' ?**

A gi mi nu ro

B nu gi ta se

C nu ro se yu

D ro gi di nu

E None of these

**Answer: A**

**Explanation:**

From conditions I & IV, the only common word 'risk' - **nu**

=> From I & II, the code for 'very' - **gi**

=> From I, there are still two words left 'large' & 'associated' either coded as 'to' or 'ro'

=> Code for 'large' - **to / ro**

From II & III, we get the code for 'is' - **mi**

=> risk is very large - gi mi nu ro

**Question 188**

**Which of the following is the code of 'associated' ?**

A nu

B po

C ta

D fu

E gi

**Answer: C**

**Explanation:**

From statements 1 and 3, we can see that 'associated' is the only common word and 'ta' is the only common code. Hence, 'associated' must have been represented by 'ta'.

Option C is the right answer.

**Take 4 Free IBPS Clerk Mock Tests (With Solutions)**

**Question 189**

**What would be the code for 'inherent large risk' ?**

- A yu ro nu
- B di ro nu
- C yu fu ro
- D di to se
- E Cannot be determined

**Answer: E**

**Explanation:**

From conditions I & IV, the only common word 'risk' - **nu**

=> From conditions I & II, code for 'very' - **gi**

Now, from I, code for 'large' - **ro**

From conditions III & IV, the only common word is 'also' - **tu**

Now, from IV, there are two words left 'inherent' & 'damaging' coded as either 'di' or 'yu'

Thus, inherent can be coded as '**di**' or '**yu**'

=> Code for inherent large risk is either the combination of 'nu ro di' or 'nu ro yu'.

Since, both of these are present in the given options. Thus, the code cannot be determined.

**Question 190**

**Which of the following may represent low risk associated industry' ?**

- A ta nu gi ro
- B ta hi nu se
- C mi ta se fu
- D di gi ta po
- E po gi se di

**Answer: B**

**Explanation:**

'ta' represents associated ( from statements 1 and 3) and 'nu' represents 'risk' ( From statements 1,2 and 4). 'low' is represented by 'se' ( Using statements 1,2 and 3- by eliminating 'is' and 'very'). Since the term 'industry' has not been used in the sentences, the code for it must be something that has not been used still now.

Option B suits the condition. Hence, option B is the right answer.

**Instructions**

Study the following information carefully answer the questions given below :

C E B A C D B C D A C E D E D C A B A D A C E D U B A N B D

**Question 191**

**How many such Ds are there in the above arrangement each of which is immediately preceded by a consonant and also immediately followed by a vowel ?**

- A None
- B One

- C Two
- D Three
- E More than three

**Answer: B**

**Explanation:**

We need to find the number of **D's** immediately preceded by a consonant and immediately followed by a vowel.

=> (consonant) D (vowel)

There is only one such 'D' i.e. 9th from the left end (CDA).

Ans - (B)

## IBPS Clerk Previous Papers (Download PDF)

**Question 192**

How many Ds are there in the above arrangement ?

- A Four
- B Three
- C Five
- D Seven
- E Six

**Answer: D**

**Explanation:**

There are 7 D's in the above arrangement.

Ans - (D)

**Question 193**

If all the Bs are deleted from the above arrangement, which of the following will be eleventh from the left end ?

- A D
- B C
- C E
- D A
- E None of these

**Answer: A**

**Explanation:**

If all the B's are removed from the above arrangement, the new arrangement will be :

C E A C D C D A C E D E D C A A D A C E D U A N D

11th word from left end = D

**Question 194**

How many such As are there in the above arrangement each of which is immediately preceded by B and also immediately followed by a consonant ?

- A None
- B One
- C Two
- D Three
- E More than three

**Answer:** D

**Explanation:**

We need to find the number of A's immediately preceded by B and immediately followed by a consonant.

=> B A (consonant)

There are 3 such A's i.e. BAC, BAD, BAN.

## IBPS Clerk Important Questions PDF

**Question 195**

Which of the following is ninth to the right of the 22nd from the right end of the above arrangement ?

- A A
- B C
- C B
- D D
- E E

**Answer:** C

**Explanation:**

22nd letter from the right end = D [CDA]

9th letter to the right of D = B

**Instructions**

Study the following information carefully and answer the questions given below

Eight people – S, T, U, V, W, X, Y and Z – are sitting around a circle but not necessarily in the same order. Two of them S and T are facing towards the centre while other people are facing towards the outside. Y sits second to the left of W. S sits second to the left of Y. Only one person sits between S and Z. T sits to the immediate right of S. T is not an immediate neighbour of Y. V is not an immediate neighbour of Y. Both the immediate neighbours of X face towards the outside.

**Question 196**

What is the position of X with respect to S ?

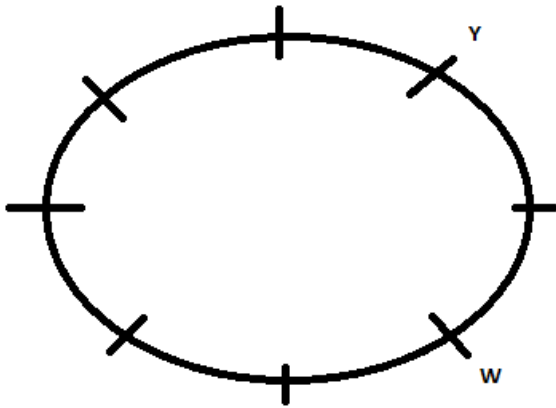
- A Third to the right
- B Fourth to the left
- C Third to the left
- D Fourth to the right
- E Second to the right

**Answer:** C

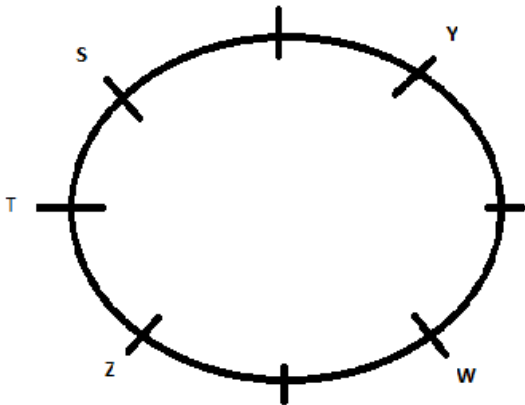


**Explanation:**

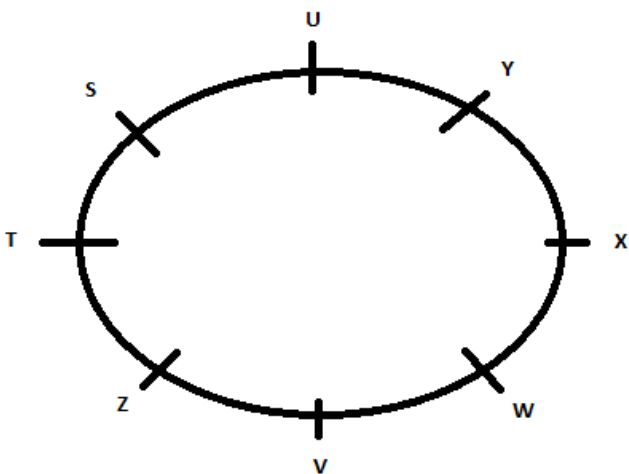
Given that S and T are facing towards the center while other people are facing towards the outside and Y sits second to the left of W. So the possible arrangement is :



Now it is given that S sits second to the left of Y. Only one person sits between S and Z. T sits to the immediate right of S. So the possible arrangement is :



Now , it is given that T is not an immediate neighbor of Y. V is not an immediate neighbor of Y. Both the immediate neighbors of X face towards the outside. So the possible outcome is



S and T are facing inwards and all other are facing outside

**Question 197**

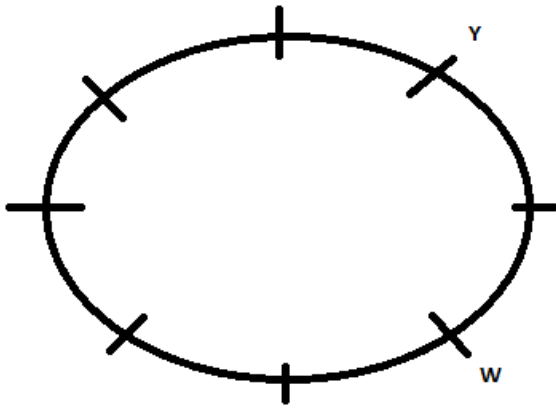
Who sits to the immediate left of Z ?

- A T
- B W
- C S
- D X
- E V

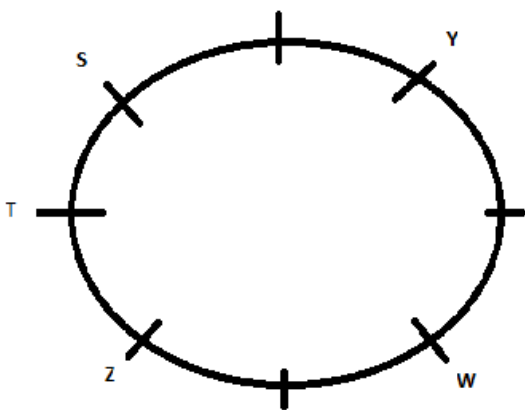
Answer: E

**Explanation:**

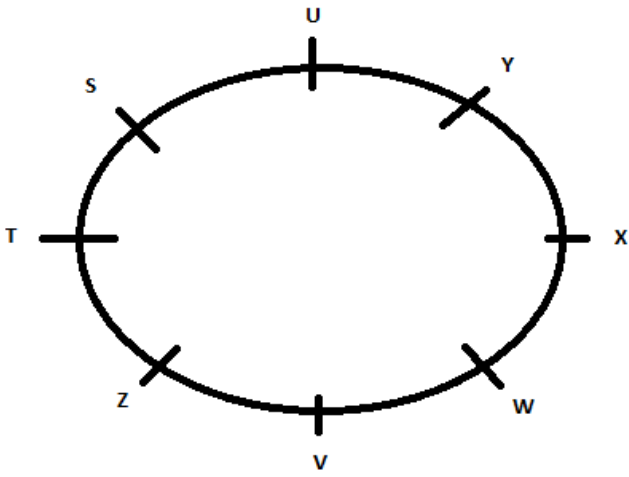
Given that S and T are facing towards the center while other people are facing towards the outside and Y sits second to the left of W. So the possible arrangement is :



Now it is given that S sits second to the left of Y. Only one person sits between S and Z. T sits to the immediate right of S. So the possible arrangement is :



Now , it is given that T is not an immediate neighbor of Y. V is not an immediate neighbor of Y. Both the immediate neighbors of X face towards the outside. So the possible outcome is



S and T are facing inwards and all other are facing outside

### IBPS Clerk Free Preparation App

Question 198

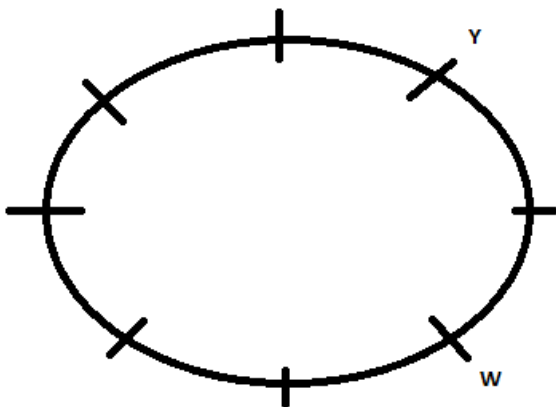
Which of the following pairs represents the immediate neighbours of W ?

- A V and X
- B V and Z
- C X and Y
- D Z and T
- E S and U

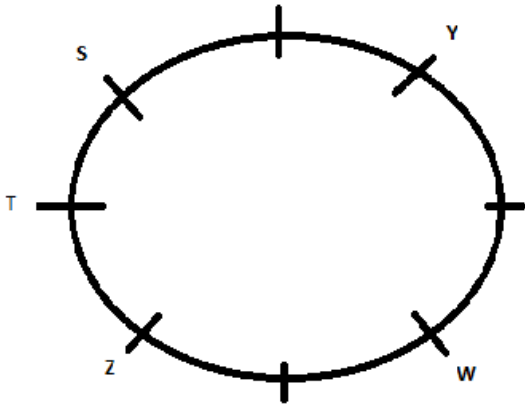
Answer: A

Explanation:

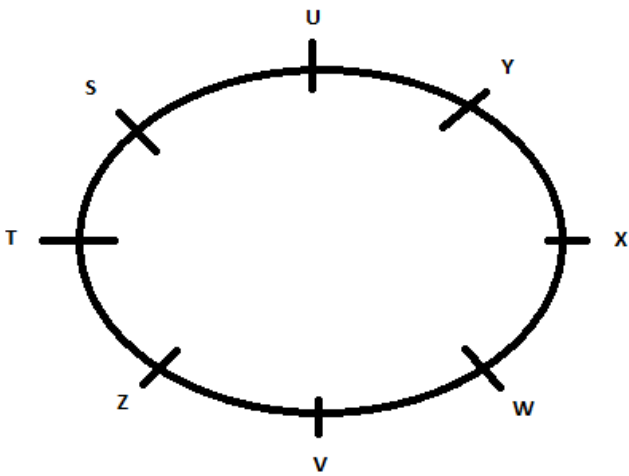
Given that S and T are facing towards the center while other people are facing towards the outside and Y sits second to the left of W. So the possible arrangement is :



Now it is given that S sits second to the left of Y. Only one person sits between S and Z. T sits to the immediate right of S. So the possible arrangement is :



Now, it is given that T is not an immediate neighbor of Y. V is not an immediate neighbor of Y. Both the immediate neighbors of X face towards the outside. So the possible outcome is



S and T are facing inwards and all other are facing outside

**Question 199**

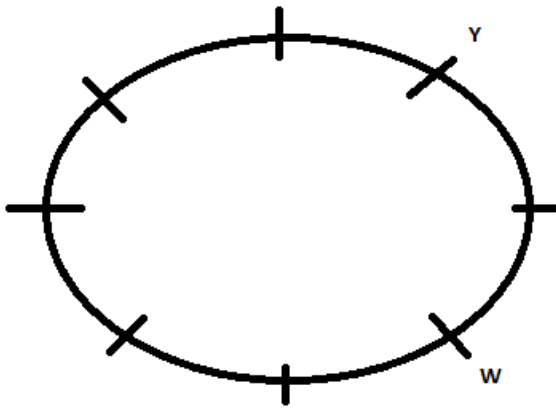
**What is the position of U with respect to W ?**

- A Second to the left
- B Fifth to the right
- C Sixth to the left
- D Third to the right
- E Fifth to the left

**Answer: B**

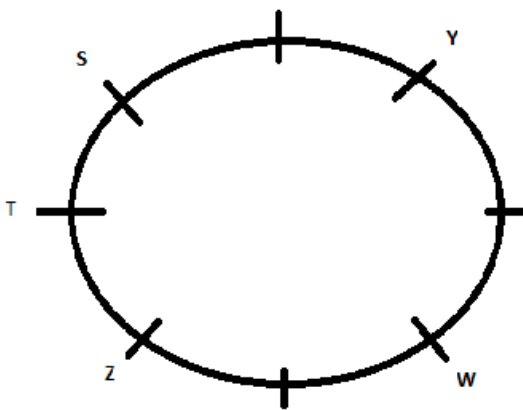
**Explanation:**

Given that S and T are facing towards the center while other people are facing towards the outside and Y sits second to the left of W. So the possible arrangement is :

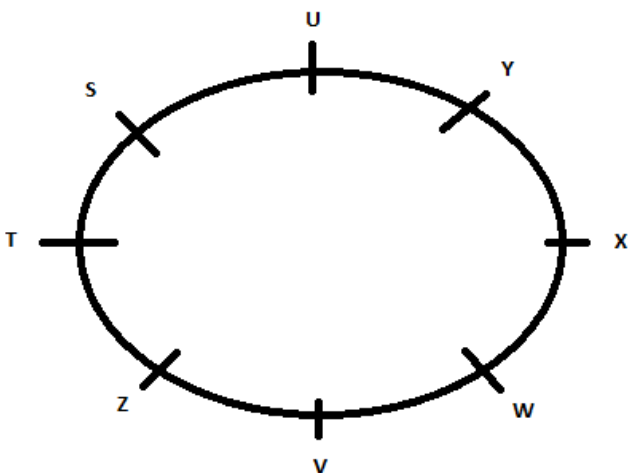


Now it is given that S sits second to the left of Y. Only one person sits between S and Z. T sits to the immediate right of S. So the possible arrangement is

:



Now, it is given that T is not an immediate neighbor of Y. V is not an immediate neighbor of Y. Both the immediate neighbors of X face towards the outside. So the possible outcome is



S and T are facing inwards and all other are facing outside

**Question 200**

How many people sit between U and V ?

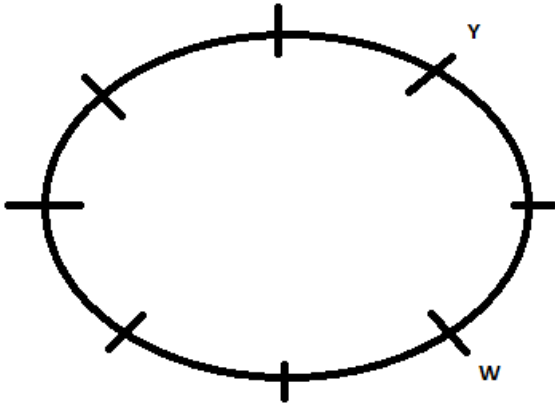
A Two

- B Four
- C One
- D Three
- E Five

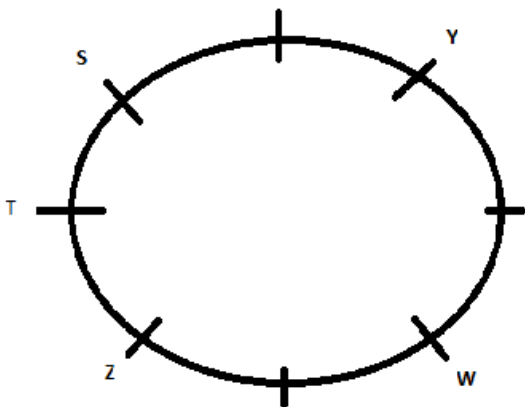
Answer: D

**Explanation:**

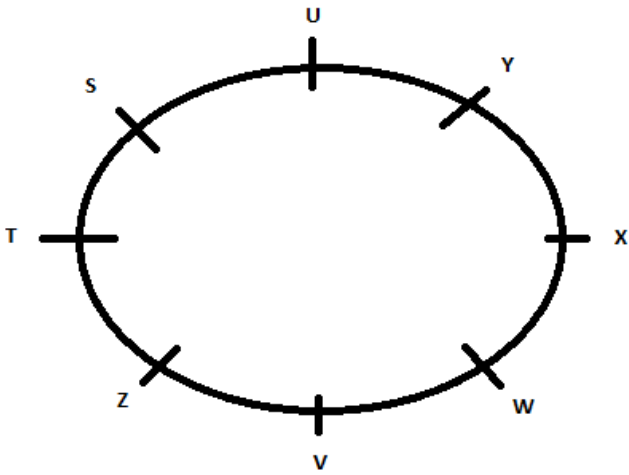
Given that S and T are facing towards the center while other people are facing towards the outside and Y sits second to the left of W. So the possible arrangement is :



Now it is given that S sits second to the left of Y. Only one person sits between S and Z. T sits to the immediate right of S. So the possible arrangement is :



Now , it is given that T is not an immediate neighbor of Y. V is not an immediate neighbor of Y. Both the immediate neighbors of X face towards the outside. So the possible outcome is



S and T are facing inwards and all other are facing outside

[Free Banking Study Material \(15000 Solved Questions\)](#)

[Take 4 Free IBPS Clerk Mock Tests \(With Solutions\)](#)

[IBPS Clerk Previous Papers \(Download PDF\)](#)

[IBPS Clerk Important Questions PDF](#)

[IBPS Clerk Free Preparation App](#)

[Free Banking Study Material \(15000 Solved Questions\)](#)

[IBPS Clerk Free Online Coaching](#)

[Daily Free Banking Online Test](#)

[Download IBPS Clerk General Knowledge PDF](#)

[200+ Free GK Tests for Banking exams](#)

[100 Free IBPS Clerk Computer Awareness Tests](#)

[200+ Banking Previous Papers \(Download PDF\)](#)

[Latest Job Updates on Telegram - Join here](#)