



SSC CPO 16th-March-2019-Shift-1

All rights reserved. No part of this publication may be reproduced, distributed, or transmitted in any form or by any means, electronic, mechanical, photocopying, recording or otherwise, or stored in any retrieval system of any nature without the permission of cracku.in, application for which shall be made to support@cracku.in

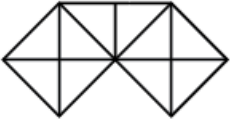
Reasoning

Instructions

For the following questions answer them individually

Question 1

How many triangles are there in the following figure?



A 20

B 21

C 19

D 24

Answer: B

Explanation:

Each square shape has total of 8 triangles.

2 square's contain total of 16 triangles.

Other part than Square has 3 triangles and that part joined to 2 squares has 2 large triangles.

So, total number of triangles = $16 + 3 + 2 = 21$.

B is correct choice.

200 SSC Mocks for just Rs. 249 - Enroll now

Question 2

Three of the following four words are alike in a certain way and one is different. Find the odd one out.

A Stationery

B Eraser

C Pen

D Paper

Answer: A

Explanation:

Eraser, Pen and Paper uses for purpose of study.

Stationery is not in same category.

So, A is correct choice.

Question 3

Select the option that is related to the third term in the same way as the second term is related to the first term.

FLOWER : UOLDVI :: JASMINE :

A QZGNRMV

B QZHMRNV

C QAHNRMV

D QZHNRMV

Answer: D

Explanation:

Using conversion table,

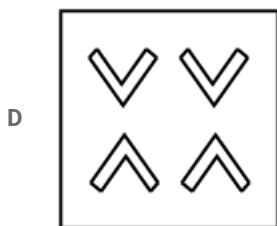



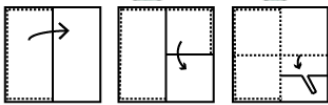
$$FLOWER : UOLDVI \rightarrow F + U = L + O = O + L = W + D = E + V = R + I = 27.$$

$$\text{Similarly, } JASMINE : QZHNRMV \rightarrow J + Q = A + Z = S + H = M + N = I + R = N + M = E + V = 27.$$

So, D is correct choice.

Question 4

The sequence of folding a piece of square paper and the manner in which the folded paper has been cut is shown. How would this paper look when unfolded?



Answer: C

Explanation:

After cut two reverse arrow will appear on the paper.

C is correct choice.

SSC CHSL Previous Papers (DOWNLOAD PDF)

Question 5

Kunal's house is located to the south of a coffee shop. There is a park to the east of the coffee shop. The local market is to the north of the park. If the distance of the market from the park is equal to the distance of the coffee shop from Kunal's house, in which direction is the market with respect to the coffee shop?

- A West
- B South-East
- C North-East
- D South-West

Answer: C

Explanation:



C is correct choice.

Question 6

Two statements are given, followed by two conclusions I and II. Assuming these statements to be true, even if they seem to be at variance with commonly known facts, decide which of the given conclusions logically follow(s) from the statements.

Statements:

All executives are humble people.

All humble people are rich.

Conclusions:

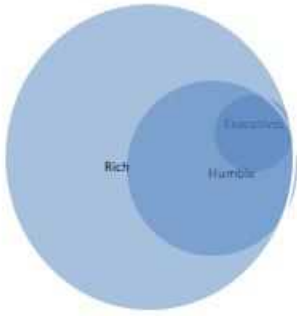
I. All executives are rich.

II. All humble people are executives.

- A Only conclusion I follows.
- B Only conclusion II follows.
- C Neither conclusion I nor II follows.
- D Both conclusions I and II follow.

Answer: A

Explanation:



So, it is clear that all Executives are Rich but all Humble People are not Executives.
So, option A is correct.

Question 7

Select the number-pair in which the two numbers are related in the same way as are the two numbers of the given number pair.
11 : 242

- A 15 : 375
- B 5 : 52
- C 8 : 128
- D 9 : 729

Answer: C

Explanation:

$$11 : 242 \rightarrow 2 \times 11^2 = 242.$$

$$\text{Similarly, } 8 : 128 \rightarrow 2 \times 8^2 = 128.$$

So, option C is correct.

SSC CHSL Free Mock Test (Latest Pattern)

Question 8

Select the word-pair in which the two words are related in the same way as are the two words in the given word-pair.
Surgeon : Scalpel

- A Tailor : Shirt
- B Doctor : Hospital
- C Navy : Lieutenant
- D Sculptor : Chisel

Answer: D

Explanation:

A scalpel is a small blade that is used by a surgeon.

Similarly, Sculptor uses chisel to cut stones.

D is correct.

Question 9

Three of the following four numbers are alike in a certain way and one is different. Identify the different one.

- A 8
- B 34
- C 64
- D 16

Answer: B

Explanation:

$8 = 2^3, 16 = 2^4, 64 = 2^6$ but $34 = 2 \times 17$.

So, B is correct choice.

Question 10

Which letter-cluster will replace the question mark (?) in the following series?

CFZ, EGX, HIU, JLS, MPP, ?

- A NTO
- B OTN
- C MSN
- D OUN

Answer: D

Explanation:

Using conversion table,

$CFZ = 3 + 6 + 26 = 35, EGX = 5 + 7 + 24 = 36, HIU = 8 + 9 + 21 = 38, JLS = 10 + 12 + 19 = 41, MPP = 13 + 16 + 16 = 45$

So, 35,36,38,41,45 is in a series. Next number should be 50.

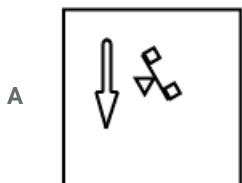
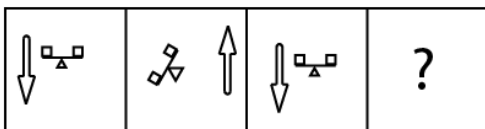
So, $OUN = 15 + 21 + 14 = 50$.

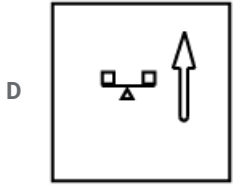

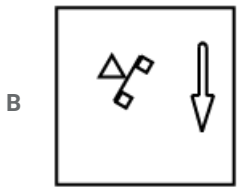
D is correct choice.

Free SSC Study Material (18,000 Solved Questions)

Question 11

Select the option that will come next in the given series.





Answer: C

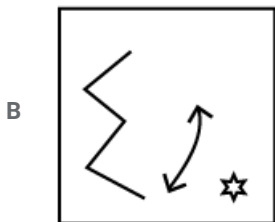
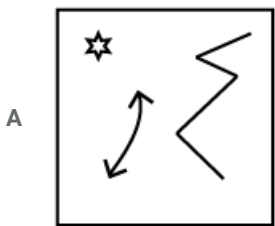
Explanation:

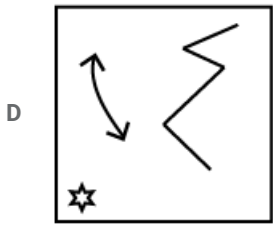
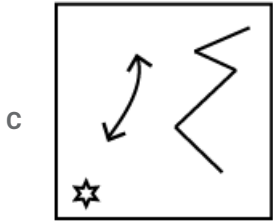
In the given series, 1st image is appear on 3rd section ,
similarly, 2nd image will appear on 4th section.

C is correct choice.

Question 12

Select the correct mirror image of the given figure, when the mirror is placed at the right side.





Answer: C

Explanation:

Image will appear reverse on mirror.

Arrow will move to the left side, star will appear on left bottom side of the image and zic-zac curve will appear on the right side.

So, option C is correct choice.

Question 13

Select the number-pair in which the two numbers are related in the same way as are the two numbers of the given number pair.

343 : 512

A 1009:1331

B 27 : 125

C 216 : 729

D 8 : 27

Answer: D

Explanation:

343:512 is a perfect cube set of 7 and 8.

Similarly, 8:27 is a perfect cube set of 2 and 3.

Option D is correct.

SSC CPO Free Mock Test (Latest Pattern)

Question 14

Among the following four words, three are similar in one specific way and one is odd. Select the odd word.

A Habitat

B Stable

C Den

D Barn

Answer: A

Explanation:

Stable , Den and Barn is used for animals or corps.

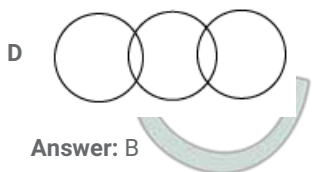
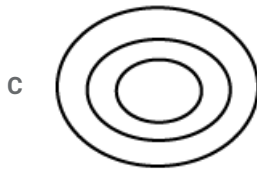
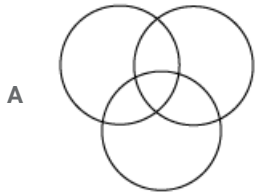
But a Habitat is a place to stay for humans.

So, option A is correct.

Question 15

Select the Venn diagram that represents the correct relationship between the following classes.

Cat, Mammal, Parrot



Answer: B

Explanation:

Cats are Mammals . But Parrots are not mammals, they are Aves.

So, Option B is in correct order.

Question 16

Three of the following four numbers are alike in a certain way and one is different. Identify the different one.

A 396

B 792

C 571

D 451

Answer: C

Explanation:

rather than 571 , other numbers are composite numbers.

C is correct choice.

Question 17

If $A = 2$ and $C = 4$, then **PARTICLE** =

- A 172172094136
- B 1621820104136
- C 1721921104136
- D 172192094126

Answer: C

Explanation:

In conversion table $A = 1$ and $C = 3$.

By logic, $A = 1 + 1 = 2$ and $C = 3 + 1 = 4$.

So, $P = 17, A = 2, R = 19, T = 21, I = 10, C = 4, L = 13, E = 6$.

So, option C is correct choice.

Question 18

Three of the following four number-pairs are alike in a certain way and one is different. Identify the different one.

- A 14 : 3
- B 7 : 6
- C 12 : 4
- D 21 : 2

Answer: C

Explanation:

Every number pair is a pair of one prime number and one composite number.

But 12:4 is a pair of composite number.

C is correct choice.

Question 19

Select the option that will come next in the given series.

\oplus \wedge	\times	\oplus \wedge	\boxtimes	\times	\boxtimes \oplus	\wedge	?
----------------------	----------	----------------------	-------------	----------	-------------------------	----------	---

A

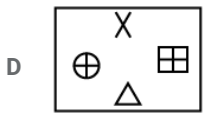
\boxtimes	\wedge	\oplus
\times		

B

\oplus	\wedge	\boxtimes
\times		

C

\boxtimes	\wedge	\times
\oplus		



Answer: A

Explanation:

Given image is rotated anti-clockwise starting from squared shape.

So, image in Option A will be the resultant image.

A is correct choice.

1500 + Free Must Solved SSC Questions (With Solutions)

Question 20

Which number will replace the question mark (?) in the following series?

3, ?, 101, 10202

- A 95
- B 10
- C 100
- D 99

Answer: B

Explanation:

$$3^2 + 1 = 10, 10^2 + 1 = 101, 101^2 + 1 = 10202.$$

So, option B is correct.

Question 21

'Month' is related to 'March' in the same way as 'Season' is related to '

- A Year
- B Festival
- C Spring
- D Week

Answer: C

Explanation:

March is a month and Spring is a season.

So, option C is correct.

Question 22

Find out the two signs to be interchanged for making following equation correct.

$$\frac{1}{4} \div \frac{1}{64} - 5 + 45 \times 120 = 5$$

- A + and ×
- B × and -

C + and -

D - and \div

Answer: B

Explanation:

If we interchange \times and $-$ sign,

$$\frac{1}{4} \div \frac{1}{64} \times 5 + 45 - 120$$

$$= \frac{1}{4} \times \frac{64}{1} \times 5 + 45 - 120$$

$$= 16 \times 5 + 45 - 120$$

$$= 80 + 45 - 120$$

$$= 125 - 120$$

$$= 5.$$

So, Option B is correct.

SSC CGL Free Mock Test (Latest Pattern)

Question 23

Select the option that is related to the fourth term in the same way as the first term is related to the second term.

FHK : KMP :: : UWZ

A PRV

B PRU

C PSU

D ORU

Answer: B

Explanation:

Using conversion table,

$$FHK : KMP \rightarrow F + 5 = K, H + 5 = M, K + 5 = P.$$

$$\text{Similarly, } P + 5 = U, R + 5 = W, U + 5 = Z.$$

So, PRU is correct answer.

Question 24

Two statements are given, followed by two conclusions I and II. Assuming these statements to be true, even if they seem to be at variance with commonly known facts, decide which of the given conclusions logically follow(s) from the statements.

Statements:

Some bed sheets are towels.

Some towels are pillows.

Conclusions:

I. Some pillows are bed sheets.

II. No pillow is a bed sheet.

A Only conclusion I follows.

B Only conclusion II follows.

C Neither conclusion I nor II follows.

D Either conclusion I or II follows.

Answer: D

Explanation:



Figure 1

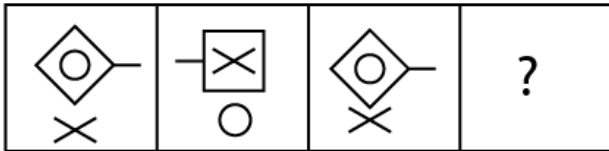


Figure 2

So, both the figure is possible by the given conditions.
So, either conclusion 1 is true or conclusion 2.
So, Option D is correct.

Question 25

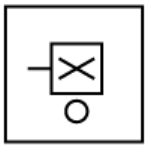
Select the option that will come next in the given series.



A



B



C



D



Answer: B

Explanation:

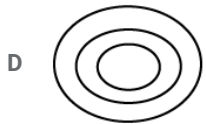
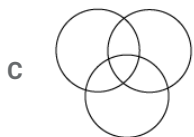
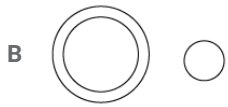
First image repeated in 3rd section ,then second image should be repeated in 4th section.

So,Option B is correct choice.

SSC CGL Previous Papers (DOWNLOAD PDF)

Question 26

Select the Venn diagram that represents the correct relationship between the following classes.
World, Asia, Nepal



Answer: D

Explanation:

Nepal is in Asia and Asia is in the World .

So, inner circle represent Nepal, then outer Circle over it should be indicate Asia and outer most circle is for World.

So, Option D is right choice .

Question 27

Which letter will replace the question mark ('?') in the following series?

C, F, K, R, A, ?

A J

B I

C M

D L

Answer: D

Explanation:

Every letter is a distance by 3,5,7,9 correspondingly.

So, next letter should be a distance of 11.

next letter should be "L".

Option D is correct.

Question 28

Which two signs should be interchanged to make the following equation correct?

$$7 \times 2 + 5 - 16 \div 4 = 13$$

A \times and $+$

B \div and \times

C \div and $+$

D \times and $-$

Answer: A

Explanation:

If you interchange \times and $+$, the equation will become,

$$7 + 2 \times 5 - 16 \div 4$$

$$= 7 + 2 \times 5 - 4$$

$$= 7 + 10 - 4$$

$$= 17 - 4$$

$$= 13.$$

Option A is correct.

Daily Free SSC Practice Set

Question 29

In a certain code language, CADET is written as 31457. How will DEFER be written as in the same language?

A 45769

B 45678

C 45659

D 35658

Answer: C

Explanation:

$C = 3, A = 1, D = 4, E = 5, F = 6$. (by using conversion table)

So, CADET is coded as 31457, in same way DEFER will coded as 45659.

So, option C is correct.

Question 30

Select the correct alternative to indicate the arrangement of the following words in a logical and meaningful order.

1. Classes
2. Entrance Exam
3. Result
4. Admission
5. Graduation
6. Job

A 6, 2, 5, 4, 3, 1

B 5, 2, 6, 4, 3, 1

C 2, 3, 4, 1, 5, 6

D 2, 3, 4, 1, 6, 5

Answer: C

Explanation:

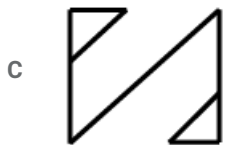
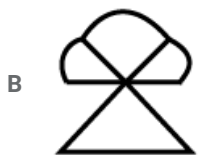
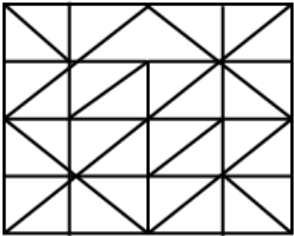
Right order should be,

Entrance Exam → *Result* → *Admission* → *Classes* → *Graduation* → *Job*.

Option C is correct.

Question 31

Select the option that is embedded in the following figure.



Answer: C

Explanation:

Image in Option C can be extract from the middle of the given image.

So, Option C is correct choice.

General Science Notes (Download PDF)

Question 32

Select the pair which has the same relation between the words as the relation between the words of given pair.

Horse : gallop

A Mouse : pit

B Bird : fly

C Elephant : gigantic

D Lion : roar

Answer: B

Explanation:

Horse run at the pace of gallop.

Similarly, Bird fly under the sky.

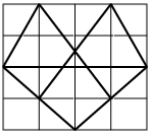
So, option B is correct.

Question 33

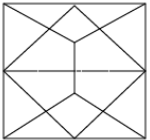
Select the option in which the given figure is embedded.



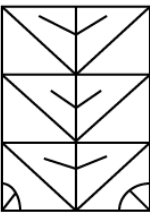
A



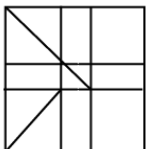
B



C




D



Answer: A

Explanation:



Now, if we extract the red deep line



If we cut right lower section from the image of Option A we will get above section.

Option A is correct choice.

Question 34

Three of the following four number-pairs are alike in a certain way and one is different. Identify the different one.

A 54 : 64

B 28 : 32

C 119 : 136

D 91 : 104

Answer: A

Explanation:

$28 : 32 \rightarrow 4 \times 7 : 4 \times 8$, $119 : 136 \rightarrow 17 \times 7 : 17 \times 8$, $91 : 104 \rightarrow 13 \times 7 : 13 \times 8$.

but, 54:64 is not in the same pattern.

A is correct choice.

SSC Stenographer Previous Papers (DOWNLOAD PDF)

Question 35

Which number will replace the question mark (?) in the following series?

0.15, 0.20, 0.30, 0.45, 0.65, ?

A 0.90

B 0.80

C 0.95

D 0.85

Answer: A

Explanation:

$0.15 + 0.05 = 0.20 \rightarrow 0.20 + 0.05 \times 2 = 0.30 \rightarrow 0.30 + 0.05 \times 3 = 0.45 \rightarrow 0.45 + 0.05 \times 4 = 0.65 \rightarrow 0.65 + 0.05 \times 5 = 0.90$

So, Option A is correct .

Question 36

Identify the number that does NOT belong in the given series.

2, 6, 6, 10, 8, 12, 12, 15, 14, 18

A 18

B 12

C 15

D 8

Answer: C

Explanation:

It is an alternative series.

(2,6,8,12,14) and (6,10,12,15,18).

every series is added by (+4,+2,+4,+2).

So, it should be (6,10,12,16,18).

So, 15 is not belong to series.

Option C is correct.

Question 37

'Temperature' is related to 'Degree' in the same way as 'Time' is related to '.....'

- A Litre
- B Metre
- C Newton
- D Seconds

Answer: D

Explanation:

Degree is unit of Temperature and Second is unit of Time.

So, Option D is correct.

SSC Stenographer Previous Papers (Latest Pattern)

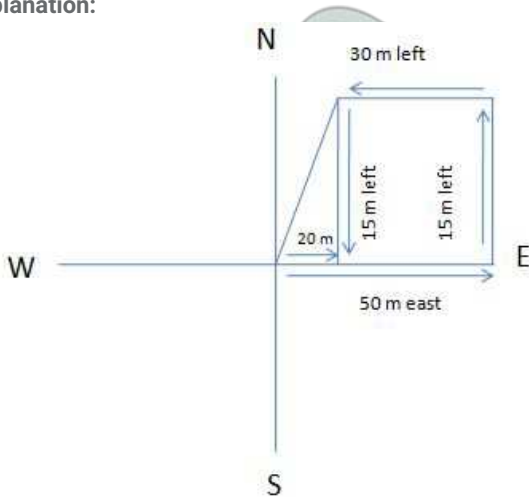
Question 38

Arjun starts walking towards the east. After walking 50 m, he turns to his left and walks 15 m. From there, he again turns to his left and walks 30 m. Finally, he turns to his left one last time and walks 15 m. How far is he from the starting point?

- A 40 m
- B 10 m
- C 30 m
- D 20 m

Answer: D

Explanation:



So, he is $(50-20)m = 30$ m far from starting point. So, Option D is correct.

Question 39

If ' \div ' means ' \times ', ' \times ' means '+', '+' means '-' and '-' means ' \div ', then what will be the value of the following expression?

$$16 \times 3 + 5 - 2 \div 4$$

- A 7
- B 9
- C 10

D 19

Answer: B

Explanation:

By rearranging the equation we get,

$$\begin{aligned}16 + 3 - 5 \div 2 \times 4. \\= 16 + 3 - 2.5 \times 4 \\= 16 + 3 - 10 \\= 19 - 10 \\= 9.\end{aligned}$$

So, option B is correct.

Question 40

In a code language, CERTAIN is written as DFSUBJO. How will SUMMER be written as in that language?

- A RVNNFS
- B TUNMFS
- C TVNNFT
- D TVNNFS

Answer: D

Explanation:

CERTAIN $\rightarrow C + 1 = D, E + 1 = F, R + 1 = S, T + 1 = U, A + 1 = B, I + 1 = J, N + 1 = O \rightarrow$
DFSUBJO. (using conversion table)

SUMMER $\rightarrow S + 1 = T, U + 1 = V, M + 1 = N, M + 1 = N, E + 1 = F, R + 1 = S \rightarrow$ *TVNNFS*.

So, option D is correct.

SSC CGL Tier-2 Previous Papers PDF

Question 41

Select the set of numbers that is similar to the following set of numbers.

(25, 144, 47)

- A (16, 82, 23)
- B (9, 72, 8)
- C (15, 96, 340)
- D (19, 78, 20)

Answer: D

Explanation:

$$(25, 144, 47) \rightarrow 25 \times 2 + 47 \times 2 = 144.$$

$$(16, 82, 23) \rightarrow 16 \times 2 + 23 \times 2 \neq 82.$$

$$(9, 72, 8) \rightarrow 9 \times 2 + 8 \times 2 \neq 72.$$

$$(15, 96, 340) \rightarrow 15 \times 2 + 340 \times 2 \neq 96.$$

$$(19, 78, 20) \rightarrow 19 \times 2 + 20 \times 2 = 78.$$

So, Set in option D only match the pattern.

So, Option D is correct.

Question 42

Select the option that is related to the third number in the same way as the second number is related to the first number.

16 : 68 :: 28 :

A 119

B 49

C 346

D 77

Answer: A

Explanation:

$$16:68 \rightarrow (4*4)*4+4=68$$

$$28:119 \rightarrow (4*7)*4+7=119$$

So, Option A is correct choice.

Question 43

Select the correct alternative to indicate the arrangement of the following words in a logical and meaningful order.

1. Hour
2. Month
3. Second
4. Days
5. Minute
6. Week

A 6, 2, 5, 4, 3, 1

B 3, 5, 1, 4, 6, 2

C 2, 3, 4, 1, 5, 6

D 2, 3, 4, 1, 6, 5

Answer: B

Explanation:

Following should be the proper way,

Second → *Minute* → *Hour* → *Days* → *Week* → *Month*.

So, option B is correct.

SSC Exam Free Videos (Youtube)

Question 44

Three of the following four letter-clusters are alike in a certain way and one is different. Find the odd one out.

- A KMPT
- B OQSV
- C QSVZ
- D EGJN

Answer: B

Explanation:

$KMPT \rightarrow K + 2 = M, M + 3 = P, P + 4 = T.$ (by using conversion table)

$OQSV \rightarrow O + 2 = Q, Q + 2 = S, S + 3 = V.$

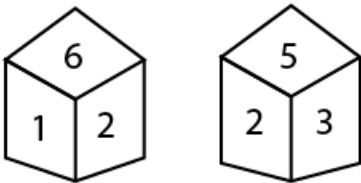
$QSVZ \rightarrow Q + 2 = S, S + 3 = V, V + 4 = Z.$

$EGJN \rightarrow E + 2 = G, G + 3 = J, J + 4 = N.$

So, option B is correct choice.

Question 45

Two positions of the same dice are shown. What will be the number opposite '3'?



- A 4
- B 6
- C 2
- D 1

Answer: B

Explanation:

From both the image, it is clear that 1, 2 & 3 are in conjugate side of the dice. But 5 and 6 are conjugate to each other.

So, 6 must appear opposite of 3 as 1 appearing left side of 2.

Option B is correct choice.

Question 46

Select the set of numbers that is similar to the following set of numbers.

(4, 24, 214)

- A (8, 81, 721)
- B (3, 27, 81)
- C (2, 26, 125)
- D (5, 35, 341)

Answer: D

Explanation:

$(4, 24, 214) \rightarrow 214 = (2 + 1 + 4) - 1 = 6, 6 \times 4 = 24.$

Similarly,

$$(8, 81, 721) \rightarrow 721 = (7 + 2 + 1) - 1 = 9, 9 \times 8 \neq 81.$$

$$(3, 27, 81) \rightarrow 81 = (8 + 1) - 1 = 8, 8 \times 3 \neq 27.$$

$$(2, 26, 125) \rightarrow 125 = (1 + 2 + 5) - 1 = 7, 7 \times 2 \neq 26.$$

$$(5, 35, 341) \rightarrow 341 = (3 + 4 + 1) - 1 = 7, 7 \times 5 = 35.$$

So, option D is correct.

SSC Study Material

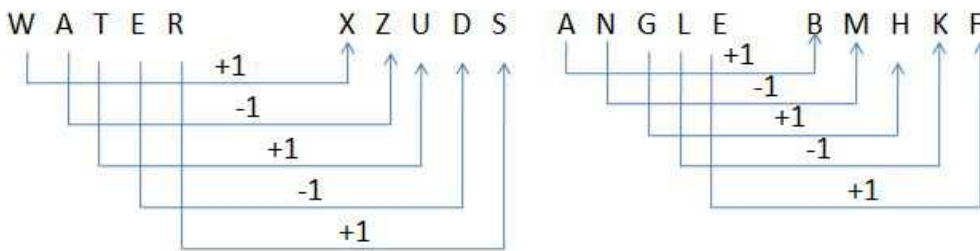
Question 47

If in a certain code, WATER is written as XZUDS, then which word will be coded as BMHKF?

- A CLING
- B ALIEN
- C EARTH
- D ANGLE

Answer: D

Explanation:



So, option D is correct choice.

Question 48

Three of the following four letter-clusters are alike in a certain way and one is different. Find the odd one out.

- A SWYBE
- B HKNQT
- C CFILO
- D QTWZC

Answer: A

Explanation:

$SWYBE \rightarrow S + 4 = W, W + 2 = Y, Y + 3 = B, B + 3 = E.$ (using conversion table)

But, $HKNQT \rightarrow H + 3 = K, K + 3 = N, N + 3 = Q, Q + 3 = T.$

$CFILO \rightarrow C + 3 = F, F + 3 = I, I + 3 = L, L + 3 = O.$

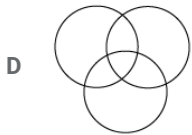
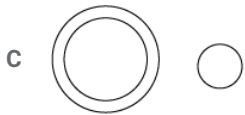
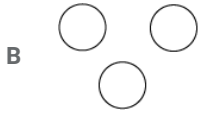
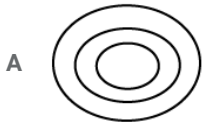
$QTWZC \rightarrow Q + 3 = T, T + 3 = W, W + 3 = Z, Z + 3 = C.$

Last three are in a pattern of three letter gap, but letter in option does not follow it.

So, option A is correct choice.

Question 49

Select the Venn diagram that represents the correct relationship between the following classes.
Females, Mothers, Fathers



Answer: C

Explanation:

All females are mother but father don't have such direct relation with either female or mother. So, Diagram in C is right answer.

SSC Daily Practice Set

Question 50

Select the correct mirror image of the given image, when the mirror is placed at the right side.

EFR195uh

A **hu591RF3**

B **hu291RF3**

C **hFR192uh**

D **hFR192uh**

Answer: C

Explanation:

Each & every letter and number will move upside down and Side by side.

So, Object in option C is the correct answer.

SSC GK Free Tests

General knowledge

Instructions

For the following questions answer them individually

Question 51

Name the 'Father of Indian Economic Reforms'.

- A Narendra Modi
- B PV Narasimha Rao
- C Yashwant Sinha
- D Manmohan Singh

Answer: B

Current Affairs Question and Answers (Download PDF)

Question 52

Iron boils at about degree Celsius.

- A 3861
- B 2861
- C 2181
- D 3182

Answer: B

Question 53

The Chipko movement is associated with:

- A Sustainable development
- B Transparency in public life
- C Afforestation
- D Preventing the felling of trees

Answer: D

Question 54

Adults with an annual income between can avail of a housing loan under the Pradhan Mantri Awas Yojana.

- A 6 and 15 lakhs
- B 6 and 18 lakhs
- C 6 and 25 lakhs
- D 6 and 21 lakhs

Answer: B

Daily and Monthly Current Affairs (Download PDF)

Question 55

'Capra aegagrus hircus' is commonly known as

- A Dog
- B Cow
- C Goat
- D Hen

Answer: C

Question 56

As head of a reputed advertising agency, created iconic advertisements for Surf detergent, Liril bath soap, Bajaj scooters and Cherry Blossom shoe polish.

- A Gerson da Cunha
- B Prahlad Kakkar
- C Alyque Padamsee
- D Prason Joshi

Answer: C

Question 57

Navakalevara is a ritual that takes place in a temple in

- A Tirupati
- B Shirdi
- C Jagannath Puri
- D Sabrimala

Answer: C

Question 58

Guru is known as the cobbler saint.

- A Ayya Vaikundar
- B Jiva Goswami
- C Ravidas
- D Narahari

Answer: C

SSC Free Preparation App

Question 59

Which is the seventh largest country in the world by land area?

- A Australia
- B Argentina
- C Brazil
- D India

Answer: D

Question 60

Who started the temple entry movement in 1927?

- A Vinobha Bhave
- B Medha Patkar
- C Mahatma Gandhi
- D Bhimrao Ambedkar

Answer: D

200 SSC Mocks for just Rs. 249 - Enroll now

Question 61

As per the Guinness World Records, which of the following was the world's richest temple in 2011?

- A Jagannath Temple
- B Tirumala Tirupati Venkateswara Temple
- C Sree Padmanabha Swami Temple
- D Siddhi Vinayak Temple

Answer: C

Question 62

Name the long-haired mammals found throughout the Himalayan region.

- A Heifer
- B Bison
- C Ox
- D Yak

Answer: D

Question 63

..... is known as the 'Father of Indian Ornithology'.

- A John James Audubon
- B Konrad Lorenz
- C Salim Ali
- D Allan Octavian Hume

Answer: D

SSC CHSL Previous Papers (DOWNLOAD PDF)

Question 64

Sunita Williams, renowned astronaut of Indian origin, spent a record of days in space.

- A 150
- B 195
- C 175
- D 200

Answer: B

Question 65

The inaugural session of the Supreme Court of India took place on

- A 26th January 1950
- B 28th January 1950
- C 29th January 1950
- D 31st January 1950

Answer: B

Question 66

At what temperature does iron melt?

- A 1638°C
- B 1538°C
- C 1583°C
- D 1683°C

Answer: B

SSC CHSL Free Mock Test (Latest Pattern)

Question 67

Sound cannot travel through

- A fire
- B soil
- C water
- D vacuum

Answer: D

Question 68

Which of the following creatures use ultrasonic sound to catch their prey?

- A Hawks
- B Bats
- C Cats
- D Dogs

Answer: B

Question 69

Who hoists the national flag at the Red Fort on Independence Day?

- A Chief Justice
- B Prime Minister
- C Governor
- D President

Answer: B

Free SSC Study Material (18,000 Solved Questions)

Question 70

Which cricketer made his Test debut in Karachi at the age of 16?

- A Hardik Pandya
- B Rahul Dravid
- C Sachin Tendulkar
- D Shanthakumaran Sreesanth

Answer: C

Question 71

..... was the Chief Justice of India from January 1950 to November 1951.

- A Bijan Kumar Mukherjee
- B Mehr Chand Mahajan

- C Harilal Jekisundas Kania
- D Bhuvaneshwar Prasad Sinha

Answer: C

Question 72

The world's largest cricket stadium is being built in which state of India?

- A Gujarat
- B Chandigarh
- C West Bengal
- D Maharashtra

Answer: A

SSC CPO Free Mock Test (Latest Pattern)

Question 73

Currency printing press of India is NOT located in

- A Kochi
- B Mysore
- C Salboni
- D Dewas

Answer: A

Question 74

The pH of pure water (H_2O) is at 25 degree Celsius.

- A 8
- B 7
- C 9
- D 6

Answer: B

Question 75

'Megaptera novaeangliae' is commonly known as

- A Bumblebee
- B Tree frog
- C African wild cat
- D Humpback whale

Answer: D

SSC CPO Previous Papers

Question 76

Who said the following words?

"A flag is a necessity for all nations. Millions have died for it."

- A Sarojini Naidu
- B Jawaharlal Nehru
- C Bhikaji Cama
- D Mahatma Gandhi

Answer: D

Question 77

Which of the following is NOT a popular Gharana (styles) of Hindustani classical music?

- A Patiala Gharana
- B Gwalior Gharana
- C Mewati Gharana
- D Rajwadi Gharana

Answer: D

Question 78

NASA launched the world's smallest and lightest satellite, KalamSat on 22 June 2017 devised by 18-year-old and his team from Tamil Nadu.

- A Sharook Rashid
- B Khursheed Rifath
- C Rifath Sharook
- D Salman Rashid

Answer: C

1500 + Free Must Solved SSC Questions (With Solutions)

Question 79

..... of Kenya won the Mumbai Marathon, 2019

- A Akalnew Shurnet
- B Aychew Bantie
- C Cosmas Lagat
- D Birke Debele

Answer: C

Question 80

'Canis lupus' is commonly known as

- A Gray wolf
- B Goat
- C Hen
- D Cow

Answer: A

Question 81

The first Invasion of Muhammad Ghori was in when he attacked Multan.

- A 1287 AD
- B 1475 AD
- C 1089 AD
- D 1175 AD

Answer: D

SSC CGL Free Mock Test (Latest Pattern)

Question 82

India holds the position in the production of cows' milk as of January 2018.

- A Second
- B Fourth
- C First
- D Third

Answer: A

Question 83

The minimum age criteria for appointment as the Vice President of India is

- A 21
- B 30
- C 35
- D 25

Answer: C

Question 84

The dance form Dandya is synonymous with

- A Navratri
- B Onam
- C Bihu
- D Ganesh Chaturthi

Answer: A

SSC CGL Previous Papers (DOWNLOAD PDF)

Question 85

Apart from the first edition, New Delhi also hosted the edition of the Asian Games.

- A 7th
- B 9th
- C 8th
- D 11th

Answer: B

Question 86

After 1994, how many sessions of the Rajya Sabha are usually held in a year?

- A four
- B three
- C two
- D six

Answer: B

Question 87

As of AY 2019-20, what is the rate of income tax payable by an Indian national over the age of 80 years, earning an annual income up to ₹ 5,00,000?

- A 20%
- B 5%
- C 0%
- D 30%

Answer: C

Daily Free SSC Practice Set

Question 88

India's ace shuttler and Rio Olympics silver medallist was ranked seventh on Forbes' list 2018 of highest-earning women sportspersons in the world.

- A Sania Mirza
- B Saina Nehwal
- C Santosh Yadav
- D PV Sindhu

Answer: D

Question 89

Who was the economist who wrote the book 'Small is beautiful'?

- A David Ricardo
- B Amartya Sen
- C Karl Marx
- D E. F. Schumacher

Answer: D

Question 90

Who wrote the book 'The Audacity of Hope'?

- A Bill Clinton
- B Bill Gates
- C George Bush
- D Barack Obama

Answer: D

General Science Notes (Download PDF)

Question 91

In January 2019, NASA's Transiting Exoplanet Survey Satellite (TESS) discovered its third small exoplanet, named HD 21749b in the constellation

- A Lupus
- B Lacerta
- C Reticulum
- D Antlia

Answer: C

Question 92

Who is known as the 'Father of Indian Nuclear Programme'?

- A Vikram Sarabhai
- B CV Raman
- C Homi Jehangir Bhabha
- D APJ Abdul Kalam

Answer: C

Question 93

Shivaji's son from Saibai was named

- A Shahaji
- B Shahu
- C Sambhaji
- D Bajirao

Answer: C

SSC Stenographer Previous Papers (DOWNLOAD PDF)

Question 94

Under Article of the Constitution of India, the quorum to constitute a sitting of the House is one-tenth of the total number of Members of the House.

- A 102
- B 100
- C 103
- D 101

Answer: B

Question 95

Calcutta became the capital of British India in

- A 1765
- B 1727
- C 1756
- D 1772

Answer: D

Question 96

Who founded the Servants of India Society in 1905?

- A Sayid Ahmed Khan
- B Annie Besant
- C Gopal Krishna Gokhale
- D Raja Ram Mohan Roy

Answer: C

SSC Stenographer Previous Papers (Latest Pattern)

Question 97

With which of the following games is the Deodhar Trophy associated?

- A Hockey
- B Football
- C Cricket
- D Golf

Answer: C

Question 98

In pre-independent India, the British moved the capital of India from Calcutta to Delhi in

- A 1911
- B 1913
- C 1924
- D 1921

Answer: A

Question 99

The waterfalls in Chhattisgarh are also known as the Niagara Falls of India.

- A Hebbe
- B Dudhsagar
- C Magod
- D Chitrakoot

Answer: D

SSC CGL Tier-2 Previous Papers PDF

Question 100

The Nehru-Liaquat Pact was signed in

- A 1948
- B 1947
- C 1949
- D 1950

Answer: D

SSC Exam Free Videos (Youtube)

Quant

Instructions

For the following questions answer them individually

Question 101

A square cardboard with side 3 m is folded through one of its diagonal to make a triangle. The height of the triangle is:

- A $\frac{3}{\sqrt{2}}$ m
- B $2\sqrt{3}$ m
- C $3\sqrt{2}$ m
- D $\frac{2}{\sqrt{3}}$ m

Answer: A

SSC Study Material

Question 102

What percentage of ₹ 124 is ₹ 49.60?

- A 250
- B 16
- C 123
- D 40

Answer: D

Question 103

$\sin 18^\circ - \cos 72^\circ$ is equal to:

- A $\frac{1}{2}$
- B 0
- C 2
- D 1

Answer: B

Question 104

The surface area of a cube is 1176 cm^2 . Its volume is:

- A 3486 cm^3
- B 3206 cm^3
- C 2744 cm^2
- D 3964 cm^3

Answer: C

SSC Daily Practice Set

Question 105

A boy is standing near a pole which is 2.7 m high and the angle of elevation is 30° . The distance of the boy from the pole is ($\sqrt{3} = 1.73$):

- A 4.68 m
- B 4.63 m
- C 4.53 m
- D 4.42 m

Answer: A

Question 106

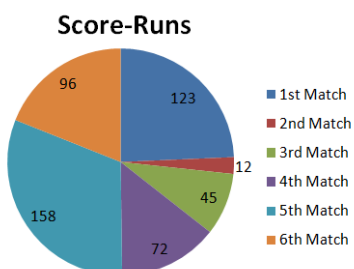
Find the inner surface area of four walls of a rectangular room with length 7 m breadth 5 m and height 3.5 m

- A 168 m^2
- B 84 m^2
- C 126 m^2
- D 42 m^2

Answer: B

Question 107

The given pie-chart shows runs scored by A in 6 matches.



In the given pie-chart. if A scored a century in matches 4 and 6, What would have been her average score?

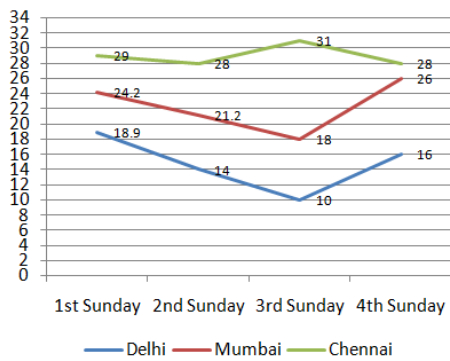
- A 89.7
- B 93.4
- C 91.2
- D 84.5

Answer: A

SSC GK Free Tests

Question 108

The line graph shows the temperature on four Sundays of three cities.



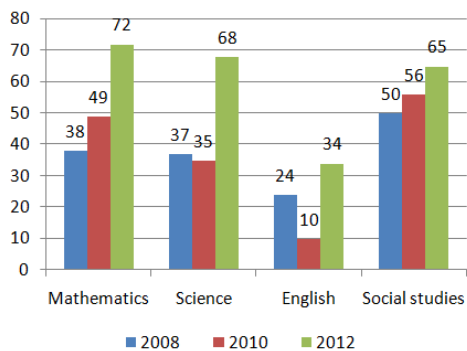
In the given line graph, what was the difference in temperature between Delhi and Mumbai on the 2nd Sunday?

- A 13
- B 17.2
- C 7.2
- D 21

Answer: C

Question 109

The given bar chart shows number of marks scored by a student in each subject in three years:



In the given bar-chart. what is the percentage increase in marks in Mathematics in 2012 compared to 2008?(round off)

- A 89
- B 100
- C 95

D 92

Answer: A

Question 110

On dividing a number by 38, the quotient is 24 and the remainder is 13, the number is:

A 956

B 904

C 925

D 975

Answer: C

Current Affairs Question and Answers (Download PDF)

Question 111

A can do a work in 12 days and B can do same work in 18 days. After 5 days of working together, how much work will be left?

A $\frac{7}{25}$

B $\frac{11}{36}$

C $\frac{5}{13}$

D $\frac{5}{12}$

Answer: B

Question 112

A customer gets a discount of ₹90 which is 12%. The selling price is:

A ₹770

B ₹540

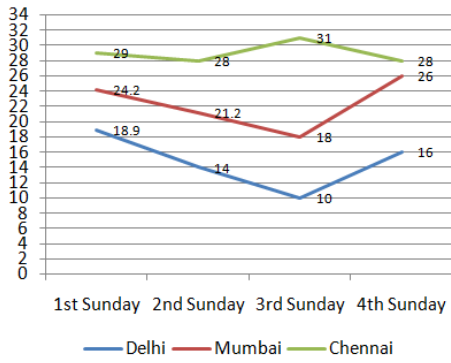
C ₹660

D ₹580

Answer: C

Question 113

The line graph shows the temperature on four Sundays of three cities.



In the given line graph, when was the maximum temperature recorded in Delhi?

- A 1st Sunday
- B 2nd Sunday
- C 4th Sunday
- D 3rd Sunday

Answer: A

Daily and Monthly Current Affairs (Download PDF)

Question 114

If $a^3 - b^3 = 208$ and $a - b = 8$, then $(a + b)^2 - ab$ is equal to:

- A 42
- B 38
- C 52
- D 26

Answer: D

Question 115

The base of an isosceles triangle is 6 cm and its perimeter is 16 cm. Its area is:

- A 11 cm²
- B 12 cm²
- C 9 cm²
- D 10 cm²

Answer: B

Question 116

If the compound interest @ 10% p.a compounded half-yearly for $1\frac{1}{2}$ years is ₹2,522. The principal amount is:

- A ₹16,000
- B ₹15,400
- C ₹18,500
- D ₹20,000

Answer: A

SSC Free Preparation App

Question 117

$\frac{14-6 \times 2}{15 \div 3+3}$ is equal to:

- A $\frac{1}{4}$
- B 2
- C $\frac{4}{5}$
- D $\frac{2}{65}$

Answer: A

Question 118

At a certain time of a day a tree 5.4 m height casts a shadow of 9 m. If a pole casts a shadow of 13.5 m at the same time, the height of the pole is:

- A 6.3 m
- B 9.9 m
- C 7.2 m
- D 8.1 m

Answer: D

Question 119

Three partners A, B and C, share profits and losses in the ratio of 3 : 4 : 7. If the profit for the year before charging 30% tax is ₹1,10,166 what is B's share of profit after tax?

- A ₹22,033.20
- B ₹24,673.10
- C ₹31,476
- D ₹9,442.80

Answer: A

200 SSC Mocks for just Rs. 249 - Enroll now

Question 120

The shadow of a tower, when the angle of elevation of the sun is 60° is found to be 15 m shorter than when it is 45° . The height of the tower is:

- A 26.5 m
- B 35.5 m
- C 41.5 m
- D 20.5 m

Answer: B

Question 121

ABCD is a cyclic quadrilateral such that AB is a diameter of the circle circumscribing it and angle $ADC = 142^\circ$. Then angle BAC is equal to:

- A 60°
- B 40°
- C 52°
- D 50°

Answer: C

Question 122

One tap can fill a tank in 3 hours and a leak can empty the tank in 5 hours. If the tap and the leak (which was half closed) were left open, how long will it take for the tank to fill?

- A $4\frac{2}{7}$ hours
- B $7\frac{1}{2}$ hours
- C $5\frac{1}{3}$ hours
- D $6\frac{2}{3}$ hours

Answer: A

SSC CHSL Previous Papers (DOWNLOAD PDF)

Question 123

$\frac{64}{25}$ converted to percentage is:

- A 25.6
- B 256
- C 0.256
- D 2.56

Answer: B

Question 124

Pipe A can fill a cistern in 4 hours and another pipe B is installed. Both the pipes together fill the cistern in $2\frac{1}{2}$ hours. How long will it take for B alone to fill the cistern?

- A $6\frac{2}{3}$ hours
- B 5 hours
- C $5\frac{1}{6}$ hours
- D $6\frac{3}{8}$ hours

Answer: A

Question 125

If the cost price of 4 chairs is equal to selling price of 3 chairs, then the profit or loss percentage is:

- A $6\frac{2}{3}$ hours
- B 20%
- C $16\frac{2}{3}$ %
- D 25%

Answer: A

SSC CHSL Free Mock Test (Latest Pattern)

Question 126

A, B and C start walking together from a point. Their steps measure 42 cm, 56 cm and 64 cm respectively. What is the minimum distance they should walk so that each takes exact number of steps?

- A 13.44 m
- B 14.06 m
- C 14.58 m
- D 15.60 m

Answer: A

Question 127

The students of a class donated ₹3,481 towards relief fund. Each student donated an amount equal to the number of students in the class. The number of students in the class is:

- A 49
- B 59
- C 61
- D 51

Answer: B

Question 128

The average of all prime numbers between 21 and 50 is(round off to one decimal number):

- A 32.9
- B 35.9
- C 33.7
- D 34.8

Answer: B

Free SSC Study Material (18,000 Solved Questions)

Question 129

The area of a parallelogram is 338 m^2 . If its altitude is twice the corresponding base, its base is:

- A 13
- B 14
- C 28
- D 26

Answer: A

Question 130

A bought 38 kg rice @ ₹54.50/kg, 45 kg rice @ ₹62/kg and 55 kg rice @ ₹48/kg. He sold the mixture @ ₹65/kg. His profit or loss percentage is:

- A Loss 1.04
- B Profit 16.8
- C Loss 1.7
- D Profit 19.6

Answer: D

Question 131

The product of HCF and LCM of two numbers is 3321. If one of the numbers is 369, the HCF of the numbers is:

- A 3
- B 21
- C 9
- D 27

Answer: C

Question 132

A and B can finish a work together in 30 days. B and C can finish the same work together in 24 days and A and C can finish the work together in 40 days. If all three work together, how long will it take them to complete the work?

- A 15 days
- B 10 days
- C 20 days
- D 5 days

Answer: C

Question 133

In what time will a sum double itself at 8% p.a simple interest?

- A 5 years
- B 6 years
- C 8 years
- D 12.5 years

Answer: D

Question 134

If $x - \frac{1}{x} = 3\sqrt{2}$, then $x^2 + \frac{1}{x^2}$ is equal to:

- A 52
- B 56
- C 20
- D 46

Answer: C

SSC CPO Previous Papers

Question 135

The number 45789 is divisible by which of the single digit numbers:

- A Only by 9
- B Only by 3 and 9
- C Only by 3
- D Only by 3 and 7

Answer: C

Question 136

$(24 \div 6 - 2) + (3 \times 2 + 4)$ is equal to:

- A 24
- B 16
- C 20
- D 12

Answer: D

Question 137

If $5 \cos \theta - 12 \sin \theta = 0$, the value of $\frac{2 \sin \theta + \cos \theta}{\cos \theta - \sin \theta}$ is:

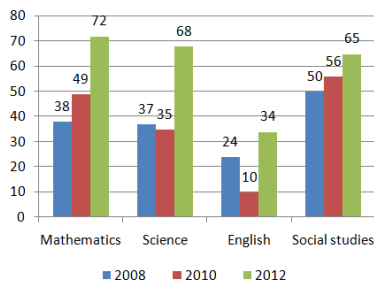
- A $1 \frac{75}{119}$
- B $3 \frac{1}{7}$
- C $2 \frac{34}{35}$
- D $3 \frac{2}{3}$

Answer: B

1500 + Free Must Solved SSC Questions (With Solutions)

Question 138

The given bar chart shows number of marks scored by a student in each subject in three years:



In the given bar-chart, if number of marks in Social Studies in year 2012 is 13% of the school strength, the number of students is:

- A 400
- B 540
- C 500
- D 580

Answer: C

Question 139

PA and PB are two tangents to a circle with centre O, from a point P outside the circle. A and B are points on the circle. If $\angle OAB = 35^\circ$, then $\angle APB$ is equal to:

- A 35°
- B 70°

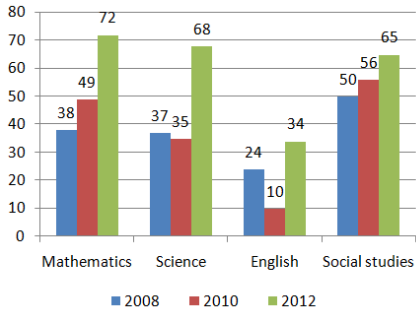
C 25°

D 20°

Answer: B

Question 140

The given bar chart shows number of marks scored by a student in each subject in three years:



In the given bar-chart, in which subject was the lowest marks scored in 2010?

A Social studies

B Mathematics

C English

D Science

Answer: C

SSC CGL Free Mock Test (Latest Pattern)

Question 141

A train travels at a speed of 76 km/h. If it crosses a pole in 36 seconds. the length of the train is:

A 720 m

B 675 m

C 760 m

D 630 m

Answer: C

Question 142

A saves 12% of her income. If she spends ₹2,16,128, her total income is:

A ₹2,42,063

B ₹2,45,600

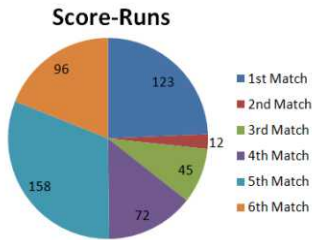
C ₹2,48,000

D ₹2,43,560

Answer: B

Question 143

The given pie-chart shows runs scored by A in 6 matches.



In the given pie-chart, what is the increase or decrease in score in match 4 as compared to match 2?

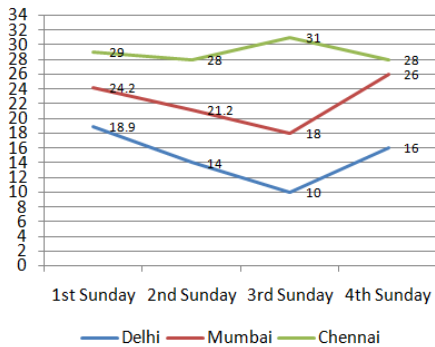
- A +27
- B -27
- C -60
- D +60

Answer: D

SSC CGL Previous Papers (DOWNLOAD PDF)

Question 144

The line graph shows the temperature on four Sundays of three cities.



In the given line graph, what was the average temperature on the 3rd Sunday in all the three cities? (rounded to first decimal)

- A 24
- B 23
- C 19.7
- D 25.4

Answer: C

Question 145

If an airplane covers a distance of 980 km in 35 minutes, then what time it will take to cover a distance of 1470 km.

- A $\frac{1}{2}$ hour
- B $\frac{1}{8}$ hours
- C $\frac{7}{8}$ hour

D $1\frac{1}{6}$ hours

Answer: C

Question 146

If $(2x - 5)^3 + (x + 2)^3 + (3x - 9)^3 = (2x - 5)(3x - 9)(3x + 6)$, then what is the value of x ?

A 7

B 2

C 18

D 5

Answer: B

Daily Free SSC Practice Set

Question 147

The average height of 12 students of a class is 132.5 cm. If one more student joins, the average height becomes 131.2 cm. The height of the new student is:

A 112.7 cm

B 122.3 cm

C 115.6 cm

D 128.5 cm

Answer: C

Question 148

The liquid in a container is sufficient to paint an area of 11.28 m^2 . How many boxes of dimension $30 \text{ cm} \times 25 \text{ cm} \times 12 \text{ cm}$ can be painted with the liquid in this container?

A 40

B 24

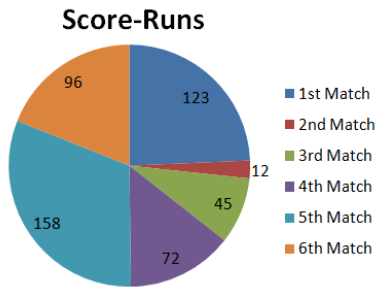
C 32

D 12

Answer: A

Question 149

The given pie-chart shows runs scored by A in 6 matches.



In the given pie-chart. what is the average runs scored in all matches? (rounded off)

- A 85
- B 90
- C 88
- D 84

Answer: D

General Science Notes (Download PDF)

Question 150

Find the weight of a solid cylinder of height 35 cm and radius 14 cm, if the material of the cylinder weighs 8 gm/cm^3 .

- A 172.48 kg
- B 160 kg
- C 177.44 kg
- D 166 kg

Answer: A

SSC Stenographer Previous Papers (DOWNLOAD PDF)

English

Instructions

For the following questions answer them individually

Question 151

Select the most appropriate meaning of the given idiom.

It's Greek to me

- A incomprehensible
- B incredible
- C intangible
- D inevitable

Answer: A

SSC Stenographer Previous Papers (Latest Pattern)

Question 152

Select the most appropriate word for the given group of words.
a person who advocates complete political or social change

- A fanatic
- B hero
- C radical
- D leader

Answer: C

Question 153

Select the antonym of the given word.
RESTRICTED

- A banned
- B barred
- C unmanned
- D unbounded

Answer: D

Question 154

Identify the segment in the sentence, which contains the grammatical error.

Though paper has been the dominant medium for print, the British parliament had managed valiantly to hold back the paper tide for over half a millennium.

- A to hold back the paper tide
- B Though paper has been
- C Parliament had managed
- D the dominant medium for print

Answer: C

SSC CGL Tier-2 Previous Papers PDF

Question 155

Identify the segment in the sentence, which contains the grammatical error.

In 2016, after some unseemly back-and-forth to the Commons and Lords, it was decided that Acts of Parliament should no longer be printed on calfskin.

- A should no longer be printed on calfskin

- B after some unseemly back-and-forth
- C it was decided
- D to the Commons and Lords

Answer: D

Question 156

Select the most appropriate option to substitute the underlined segment in the given sentence. If there is no need to substitute it, select No substitution required.

It makes no difference to overall health whether you lose weight slow or quick, according to new research by York University.

- A No substitution required
- B whether you lose weight slow or quickly
- C whether you lose weight slowly or quickly
- D whether you lose weight slowly or quick

Answer: C

Question 157

Select the synonym of the given word.

CONTRAVENTE

- A brake
- B broach
- C flaunt
- D breech

Answer: D

SSC Exam Free Videos (Youtube)

Question 158

Select the most appropriate words to fill in the blanks.

For years Indians looking for meaty have been stuck with the soya nuggets.

- A substitutes; ubiquitous
- B alternates; global
- C Substitutes; regional
- D alternative; zonal

Answer: A

Question 159

Select the synonym of the given word.

LYRICAL

- A brilliant
- B musical
- C prosaic
- D overwhelming

Answer: B

Question 160

Select the most appropriate word for the given group of words.
an arrangement of flowers that is usually given as a present

- A bouquet
- B cluster
- C wreath
- D bunch

Answer: A

SSC Study Material

Question 161

Select the most appropriate option to substitute the underlined segment in the given sentence. If there is no need to substitute it, select No substitution required.

We really need to look at interventions who focus in long-term weight management that can achieve sustained weight loss at the recommended one to two pounds per week.

- A that focus on long-term
- B No substitution required
- C that focus with long-term
- D whom focus on long-term

Answer: A

Instructions

Read the following passage and answer the questions given after it.

Passage:

Sedentary lifestyles are killing us – we need to build activity into our everyday lives, not just leave it for the gym. Google searches relating to physical fitness peak in January. Many people even trawl the web to find out about “desk exercises” and “workouts on the go” in case they are too busy to use their new gym memberships.

Our relationship with exercise is complicated. Reports from the UK and the US show it is something we persistently struggle with. As the new year rolls around, we anticipate having the drive to behave differently and become regular exercisers, even in the knowledge that we will probably fail to do so. Why do we want to exercise? What do we expect it to do for us? We all know we are supposed to be exercising, but hundreds of millions of us can't face actually doing it. It is just possible that the problem lies at the heart of the idea of exercise itself.

Exercise is movement of the muscles and limbs for a specific outcome, usually to enhance physical fitness. As such, for most of us, it is an optional addition to the working day – yet another item on a long list of responsibilities alongside the fulfilment of parental duties or earning money to put food on the table. But because the principal beneficiaries of exercises are we ourselves, it is one of the easiest chores to shirk. At the end of the working day, millions of us prefer to indulge in sedentary leisure activities instead of what we all think

is good for us: a workout.

Fitness crazes are like diets: if any of them worked, there wouldn't be so many. CrossFit, the intensely physical, communal workout incorporating free weights, squats, pull-ups and so forth, is still less than 20 years old. Spin classes — vigorous group workouts on stationary bikes — have only been around for about 30. Aerobics was a craze about a decade before that, although many of its highenergy routines had already been around for a while. Before that, there was the jogging revolution, which began in the US in the early 1960s. The Joggers Manual, published in 1963 by the Oregon Heart Foundation, was a leaflet of about 200 words that sought to address the postwar panic about sedentary lifestyles by encouraging an accessible form of physical activity, explaining that “jogging is a bit more than a walk”. The jogging boom took a few years to get traction, hitting its stride in the mid- to late-80s, but it remains one of the most popular forms of exercise, now also in groups.

The exercise craze that dominated the 1950s was, oddly, not even an exercise. The vibrating exercise belt promised users could achieve effortless weight loss by having their midriffs violently jiggled. It didn't work, but you can still find similar machines available for purchase today.

Question 162

Why do most people make exercise their last priority?

- A It does not help in earning their livelihood.
- B It is an added responsibility besides looking after the family.
- C The main beneficiaries of exercise are people themselves.
- D They prefer to indulge in sedentary leisure activities.

Answer: C

Question 163

Which of the following does not classify as an exercise?

- A High-energy Aerobics routines
- B Using midriff vibrating belt
- C Workouts on stationary bikes
- D Squats and pull-ups

Answer: B

SSC Daily Practice Set

Question 164

Why do Google searches related to physical fitness peak in January?

- A It is the time to renew gym membership.
- B It is a common new year resolution.
- C In the new year people want to look slim and trim.
- D The cold weather encourages people to exercise.

Answer: B

Question 165

The sentence — “Exercise is movement of the muscles and limbs for a specific outcome, usually to enhance physical fitness”

- A defines exercise
- B devalues exercise
- C defends exercise
- D describes exercise

Answer: A

Question 166

Which expression means the same as 'an intense and widely shared enthusiasm for something, especially one that is short-lived; a craze.'

- A Mania
- B Fad
- C Phase
- D Obsession

Answer: B

SSC GK Free Tests

Instructions

For the following questions answer them individually

Question 167

Select the wrongly spelt word.

- A admiration
- B adroit
- C administration
- D adreneline

Answer: D

Question 168

Select the most appropriate word for the given group of words.

a person who has an unnatural anxiety about one's own health typically involving imagined symptoms of illness.

- A nymphomaniac
- B hypochondriac
- C neurotic
- D psychotic

Answer: B

Question 169

Select the most appropriate meaning of the given idiom.
to give someone the cold shoulder

- A ignore or show indifference
- B deny someone comforting clothes
- C serve cold meat to someone
- D bury someone in freezing cold

Answer: A

Current Affairs Question and Answers (Download PDF)

Question 170

Select the wrongly spelt word.

- A ingratitude
- B ingredeints
- C indigenous
- D engraving

Answer: B

Question 171

Select the antonym of the given word.
COMPROMISE

- A dissent
- B agreement
- C disturbance
- D treaty

Answer: A

Question 172

Select the synonym of the given word.
MEMOIR

- A diary
- B episode
- C anecdote
- D story

Answer: A

Daily and Monthly Current Affairs (Download PDF)

Question 173

Identify the segment in the sentence, which contains the grammatical error.

The Natural History of Selbome, records the importance of the earthworm to soil and describe an England unspoiled by the Industrial Revolution.

- A describe an England
- B unspoiled by the Industrial Revolution
- C records the importance
- D of the earthworm to soil

Answer: A

Question 174

Identify the segment in the sentence, which contains the grammatical error.

It seems that authors' creativity is not restrict to their work and happily overflows into their names too.

- A happily overflows
- B authors' creativity
- C into their names too
- D restrict to their work

Answer: D

Question 175

Select the synonym of the given word.

EXASPERATING

- A exhausting
- B saddening
- C exalting
- D frustrating

Answer: D

SSC Free Preparation App

Question 176

Select the most appropriate meaning of the given idiom.

put one's cards on the table

- A to be able to continue
- B to be honest
- C to accept defeat

D to deal a game of cards

Answer: B

Question 177

Select the most appropriate words to fill in the blanks.

Telemedicine is the delivery of clinical services across and IT devices. It's a subset of a wider care originally developed for doctors to be able to patients living in rural and remote areas.

A telephone; virtual; diagnose

B telephones; actual; discharge

C telecoms; virtual; treat

D telecom; visual; admit

Answer: C

Question 178

Select the synonym of the given word.

ENIGMATIC

A inquisitive

B resolute

C purgative

D mysterious

Answer: D

200 SSC Mocks for just Rs. 249 - Enroll now

Question 179

Select the most appropriate word for the given group of words.

to send back a criminal or an unwanted person to the country of his/her origin.

A excavate

B exile

C export

D extradite

Answer: D

Question 180

Select the most appropriate meaning of the given idiom.

be the Devil's advocate

A to present a counter argument just for the sake of it

B to present an argument in favor of a well-known evil man

C to represent an accused in a murder trial

D to represent the devil as an advocate in witch trials

Answer: A

Instructions

In the following passage some words have been deleted. Fill in the blanks with the help of the alternatives given. Select the most appropriate option for each number.

Passage:

A massive fire in Chennai destroyed 184 cars (1) to a private cab aggregator. (2) blaze is suspected to have been triggered (3) tall dried grass caught fire from a discarded (4) cigarette butt, said a rescue services (5).

Question 181

Select the most appropriate option to fill in blank No.1.

- A belonged
- B belongs
- C were belonging
- D belonging

Answer: D

SSC CHSL Previous Papers (DOWNLOAD PDF)

Question 182

Select the most appropriate option to fill in blank No.2.

- A One
- B The
- C Some
- D A

Answer: B

Question 183

Select the most appropriate option to fill in blank No.3.

- A of
- B until
- C after
- D by

Answer: C

Question 184

Select the most appropriate option to fill in blank No.4.

- A smoking

- B lighting
- C firing
- D smouldering

Answer: D

SSC CHSL Free Mock Test (Latest Pattern)

Question 185

Select the most appropriate option to fill in blank No.5.

- A special
- B victim
- C official
- D culprit

Answer: C

Instructions

For the following questions answer them individually

Question 186

Select the most appropriate option to substitute the underlined segment in the given sentence. If there is no need to as substitute it, select No substitution required.

A simple life of freedom and happiness is one of the more difficult thing to achieve.

- A No substitution required
- B one of the most difiicult things to achieve.
- C one of the most difiicult thing to achieve.
- D one of the more difiicult things to achieve.

Answer: B

Question 187

Select the most appropriate meaning of the given idiom.
get a taste of your own medicine

- A be given the medicine meant for others
- B be treated by the same doctor
- C be given the same treatment that you have given to others
- D make, taste and take medicines for others

Answer: C

Free SSC Study Material (18,000 Solved Questions)

Question 188

Select the wrongly spelt word.

- A existensial
- B ecstatic
- C extortion
- D extensive

Answer: A

Question 189

Select the most appropriate words to fill in the blanks.

At the back of the eye there are light-sensitive which connect to a small patch of brain tissue. They also to areas of the brain that mood and alertness.

- A cells; link; adjust
- B cells; join; adjust
- C cells; link; regulate
- D muscle; link; regulate

Answer: C

Question 190

Select the most appropriate option to substitute the underlined segment in the given sentence. If there is no need to substitute it, select No substitution required.

I sometimes pass a delivery man wheeling a large handcart of Japanese food. The cart bears a striking message: 'Creating a world where everyone believes in their own authenticity.'

- A No substitution required
- B Creating a world whereas everyone believes in their own authenticity
- C Been created a world where everyone believes in their own authenticity
- D Created a world where everyone believes in their own authenticity

Answer: A

SSC CPO Free Mock Test (Latest Pattern)

Question 191

Select the antonym of the given word.

PERPETRATE

- A prevent
- B commit
- C react
- D perpetuate

Answer: A

Question 192

Select the most appropriate words to fill in the blanks.

People from societies go to bed and wake up several hours earlier than people in countries do and seem to sleep better than the

- A traditional; developed; later
- B modern ; developed; latter
- C modern; undeveloped; later
- D traditional; developed; latter

Answer: D

Question 193

Select the wrongly spelt word.

- A exclamation
- B eccentricity
- C exscitement
- D expenditure

Answer: C

SSC CPO Previous Papers

Question 194

Select the most appropriate option to substitute the underlined segment in the given sentence. If there is no need to substitute it, select No substitution required.

Just as technology has changed the way we shop, book a taxi, hold business meetings, and even find a parking spot, so too is it transforming the way we accessed healthcare, wherever we are in the world.

- A so too was it transforming the way we accessed healthcare
- B No substitution required
- C so too is it transforming the way we access healthcare
- D so too had it transformed the way we access healthcare

Answer: C

Question 195

Select the antonym of the given word.

RECOVERED

- A lost
- B last
- C latest

D leased

Answer: A

Question 196

Select the most appropriate words to fill in the blanks.

Even on an overcast winter's day, it is at least 10 times outside than in a standard office. By to work and getting outdoors at lunchtime, we can begin to reconnect with the light.

A brightest; walking

B brighter; walking

C brighter; walk

D bright; walk

Answer: B

1500 + Free Must Solved SSC Questions (With Solutions)

Question 197

Select the wrongly spelt word.

A furios

B frenzied

C freeze

D fractional

Answer: A

Question 198

Select the antonym of the given word.

THREATEN

A criticize

B compete

C coax

D commend

Answer: D

Question 199

Select the most appropriate word for the given group of words.

a table or flat surface where offerings are made to a deity

A sanctorum

B pew

C altar

D stone

Answer: C

[SSC CGL Free Mock Test \(Latest Pattern\)](#)

Question 200

Identify the segment in the sentence, which contains the grammatical error.

To be interested in the changing seasons is a happy state of mind than to be hopelessly in love with spring.

A To be interested

B a happy state of mind

C hopelessly in love with spring

D in the changing seasons

Answer: B

[SSC CGL Previous Papers \(DOWNLOAD PDF\)](#)

[200 SSC Mocks for just Rs. 249 - Enroll now](#)

[SSC CHSL Previous Papers \(DOWNLOAD PDF\)](#)

[SSC CHSL Free Mock Test \(Latest Pattern\)](#)

[Free SSC Study Material \(18,000 Solved Questions\)](#)

[SSC CPO Free Mock Test \(Latest Pattern\)](#)

[SSC CPO Previous Papers](#)

[1500 + Free Must Solved SSC Questions \(With Solutions\)](#)

[SSC CGL Free Mock Test \(Latest Pattern\)](#)

[SSC CGL Previous Papers \(DOWNLOAD PDF\)](#)

[Daily Free SSC Practice Set](#)

[General Science Notes \(Download PDF\)](#)

[SSC Stenographer Previous Papers \(DOWNLOAD PDF\)](#)

SSC Stenographer Previous Papers (Latest Pattern)

SSC CGL Tier-2 Previous Papers PDF

SSC Exam Free Videos (Youtube)

SSC Study Material

SSC Daily Practice Set

SSC GK Free Tests

Current Affairs Question and Answers (Download PDF)

Daily and Monthly Current Affairs (Download PDF)

SSC Free Preparation App