



RRB JE 29th May 2019 Shift-1

All rights reserved. No part of this publication may be reproduced, distributed, or transmitted in any form or by any means, electronic, mechanical, photocopying, recording or otherwise, or stored in any retrieval system of any nature without the permission of cracku.in, application for which shall be made to support@cracku.in

RRB JE 29th May 2019 Shift-1

Instructions

For the following questions answer them individually

Question 1

Which of the following separation techniques is applied for separation of sodium chloride from its solution in water?

- A Sublimation
- B Filtration
- C Evaporation
- D Centrifugation

Answer: C

RRB NTPC Free Mock Tests

Question 2

Under which plan did the Government introduce an agricultural strategy which gave rise to Green Revolution?

- A Third Five-Year Plan
- B Second Five-Year Plan
- C Fourth Five-Year Plan
- D Sixth Five-Year Plan

Answer: C

Question 3

Compare the weight of an object on the Moon and the weight of it on the Earth.

- A The object weighs its original weight on the Earth and its weight is Zero on the Moon
- B The object weighs more on the Moon than on the Earth
- C The object weighs lesser on the Moon than on the Earth
- D The object weighs the same on the Moon and on the Earth

Answer: C

Question 4

Which city in Uttar Pradesh is famous for 'Glass Bangles' industry?

- A Moradabad
- B Aligarh
- C Agra
- D Firozabad

Answer: D

RRB JE Previous Papers (Download Pdf)

Question 5

The cell body of a neuron is called-

- A Perikaryon
- B Soma
- C Dendron
- D Schwann cell

Answer: B

Question 6

Find the ODD one out from the given options.

- A H
- B N
- C K
- D Z

Answer: C

Question 7

Fort William in India is located on the river banks of-

- A Chenab
- B Hooghly
- C Godavari
- D Yamuna

Answer: B

RRB JE Free Mock Test

Question 8

A goods train runs at a speed of 72 km/hr and crosses a 250 m long platform in 26 seconds. What is the length of the goods train?

- A 230 m
- B 240 m
- C 260 m
- D 270 m

Answer: D

Question 9

In two similar triangles, ratio of their corresponding sides is 1 : 3 and the area of the larger triangle is 72 cm^2 . then find the area of the smaller triangle.

- A 8 cm^2
- B 14 cm^2
- C 18 cm^2
- D 9 cm^2

Answer: A

Question 10

On which of the following factors, does the frictional force on an object in a fluid depend upon?

- A Nature of the fluid
- B Shape of the object
- C Speed with respect to the fluid
- D All of the options

Answer: D

Daily Free RRB Online Test

Question 11

Find the wrong number in the given series.
428, 413, 398, 384, 368, 353

- A 398
- B 384
- C 428
- D 353

Answer: B

Question 12

Which number will best complete the relationship given below ?
 $7 : 350 :: 8 : ?$

- A 540
- B 530
- C 510
- D 520

Answer: D

Question 13

Which of the following describes how electrons are put into orbitals in a particular order for filling?

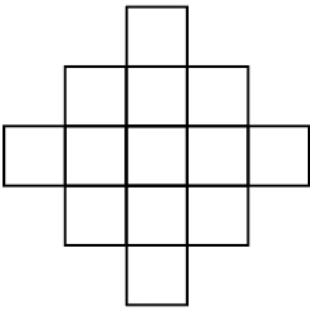
- A Aufbau principle
- B Pauli's exclusion principle
- C Hund's rule
- D Wiswesser rule

Answer: A

RRB Group-D Previous Papers

Question 14

How many squares are there in the given figure ?



- A 18
- B 16
- C 15
- D 10

Answer: A

Question 15

_____ can fix nitrogen from air on its own.

- A Maize
- B Legumes
- C Wheat
- D Tubers

Answer: B

Question 16

16 January 2007 was Tuesday. What day of the week was 16 January 2008?

- A Monday

- B Tuesday
- C Sunday
- D Wednesday

Answer: D

RRB Free Videos (You Tube Channel)

Question 17

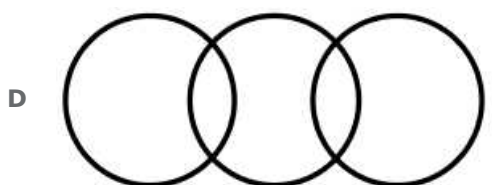
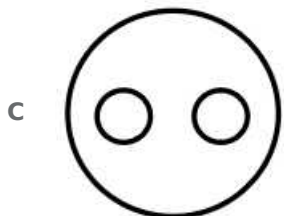
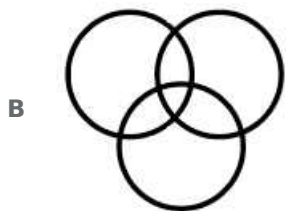
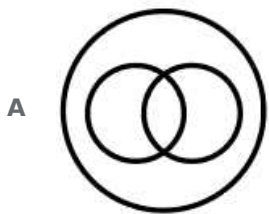
Ages of a brother and sister are in the ratio 4 : 3. After 3 years, the sister will be twice as old as she is now. How old is the brother now?

- A 4 years
- B 8 years
- C 6 years
- D 12 years

Answer: A

Question 18

Choose the figure that best represents the relationship among the classes given below.
Oil, Wick, Lamp



Answer: C

Question 19

Escherichia coli occurs in -

- A** Water
- B** Soil
- C** Milk
- D** Intestine of man

Answer: D

20 RRB NTPC Mocks-Tests Rs.149

Question 20

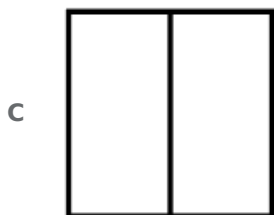
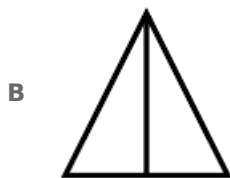
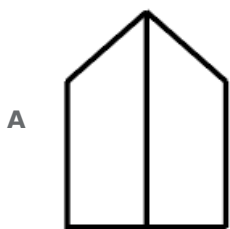
Ragu walks straight from his home to reach a busstop. After walking for some distance, he turns left and reaches the bus stop which is in the east. Find the direction of the bus stop from his home ?

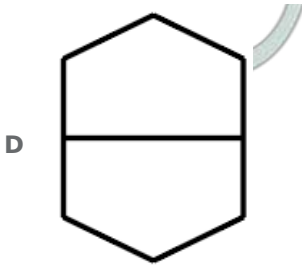
- A** South east
- B** North east
- C** North west
- D** South west

Answer: A

Question 21

Find the ODD one out from the given options.





Answer: D

Question 22

Which of the following countries has received the ICC Test Championship mace for third consecutive year on April 1, 2019?

- A Australia
- B India
- C South Africa
- D England

Answer: B

10 RRB JE Mocks-Tests Rs.117

Question 23

Out of 5 cards with numbers 1, 2, 3, 4, 5, two are picked at random one after the other. What is the probability that the number in the second card is odd?

- A $\frac{3}{4}$
- B $\frac{3}{10}$
- C $\frac{1}{6}$
- D $\frac{3}{5}$

Answer: D

Question 24

Which branch of Zoology is closely related to the study of Sociology of Human race ?

- A Anthropology
- B Physiology
- C Embryology
- D Zoogeography

Answer: A

Question 25

If 'BROTHER' is coded as 86, 'FATHER' is coded as 58 and 'SISTER' is coded as 90, then how will 'MOTHER' be coded in that language?

- A 73
- B 83
- C 52
- D 79

Answer: D

RRB General Science Notes (Download Pdf)

Question 26

To test for divisibility of a number by 24, we should test the divisibility of the number by

- A 8
- B 3
- C 4 and 12
- D Both 8 and 3

Answer: D

Question 27

In which of the following sports is the word 'libero' used?

- A Volleyball
- B Softball
- C Basketball
- D Handball

Answer: A

Question 28

The white liquid that oozes out of wounds is called-

- A Paste
- B Plasma
- C Pus
- D Saliva

Answer: C

RRB GK Material (Download Pdf)

Question 29

$PbO_2 + 4HCl \rightarrow PbCl_2 + 2H_2O + Cl_2$, the substance undergoing oxidation is _____.

- A Lead chloride
- B Lead dioxide
- C Hydrochloric acid
- D Hydrogen

Answer: C

Question 30

**Find the wrong number in the following series.
3, 6, 12, 27, 48, 96**

- A 6
- B 27
- C 12
- D 48

Answer: B

Question 31

Earth belongs to which type of celestial body?

- A Star
- B Comet
- C Planet
- D Satellite

Answer: C

RRB NTPC Previous Papers (Download PDF)

Question 32

In this question, two statements are given followed by two conclusions. Choose the conclusion(s) which best fit(s) logically.

Statements:

- 1) All books are toys.
- 2) No toy is black.

Conclusions:

- I. No book is black.
- II. Some books are black.

- A Only conclusion II follows
- B Neither conclusion I nor II follows
- C Only conclusion I follows
- D Both conclusions I and II follow

Answer: C

Question 33

By selling an article, Madan earned a profit equal to one-fourth of the price he bought it. If he sold it for Rs.375, what was the cost price?

- A Rs.350
- B Rs.312.50
- C Rs.281.75
- D Rs.300

Answer: D

Question 34

A set-up of having a large number of wind turbines working at a place to generate electrical energy on a large scale is called a-

- A Farm house
- B Wind energy farm
- C Turbine farm
- D Electrical farm

Answer: B

Join Competitive Exam Updates Telegram Group

Question 35

Which of the following mobile apps won the Digital India Award 2018 under Best Mobile App category ?

- A Skill Pill
- B Moodle Mobile
- C ePathshala
- D E.Learning Age

Answer: C

Question 36

Which number will best complete the relationship given below?

4 : 64 :: 6 : ?

- A 187
- B 216
- C 223
- D 219

Answer: B

Question 37

In which of the following states of India is Sriharikota situated ?

- A** Arunachal Pradesh
- B** Tamil Nadu
- C** Bihar
- D** Andhra Pradesh

Answer: D

RRB NTPC Free Mock Tests

Question 38

Dendrimers are nano-sized, radially symmetric molecules used in-

- A** Health and pharmaceutical industry
- B** Telecommunication industry
- C** Defence industry
- D** Automobile industry

Answer: A

Question 39

A contractor under takes to repair loads with 120 men in 124 days. After 64 days, as $\frac{2}{3}$ of the work has been over already. He withdraws some men as surplus. If the work is completed in time, how many men were removed ?

- A** 56
- B** 72
- C** 40
- D** 64

Answer: A

Question 40

Where did the first battle of Panipat take place?

- A** Jammu and Kashmir
- B** Haryana
- C** Punjab
- D** Rajasthan

Answer: B

RRB JE Previous Papers (Download Pdf)

Question 41

Which of these is NOT fought with bare palms?

- A Karate
- B Boxing
- C Judo
- D Wrestling

Answer: B

Question 42

In periodic table, valence electrons are indicated by-

- A Period number
- B Group number
- C Shell number
- D Atomic mass

Answer: B

Question 43

Pipes P and Q can fill a tank in 20 and 16 hours respectively. Pipe Q alone was opened for $\frac{1}{4}$ of time and later P also was opened. In how many hours was the tank filled?

- A 16 hours
- B 10 hours
- C 18 hours
- D 12 hours

Answer: B

RRB JE Free Mock Test

Question 44

The sum of the digits of a two-digit number is 9 less than the number. Which of the following digits is at ten's place of the number ?

- A 2
- B 4
- C 5
- D 1

Answer: D

Question 45

Two numbers are in the ratio 4 : 5 and their LCM is 100. What is their difference?

- A 25
- B 5
- C 20
- D 10

Answer: B

Question 46

In which type of waves do the vibrations move parallel to the direction of travelling of wave ?

- A Transverse
- B Longitudinal
- C Surface
- D Microwaves

Answer: B

Daily Free RRB Online Test

Question 47

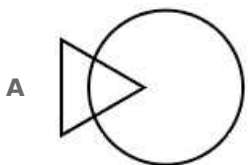
P and Q run around a circular track of 240 m at 15 m/min and 20 m/min speeds respectively. If they start running simultaneously, after what time will they meet again at the starting point?

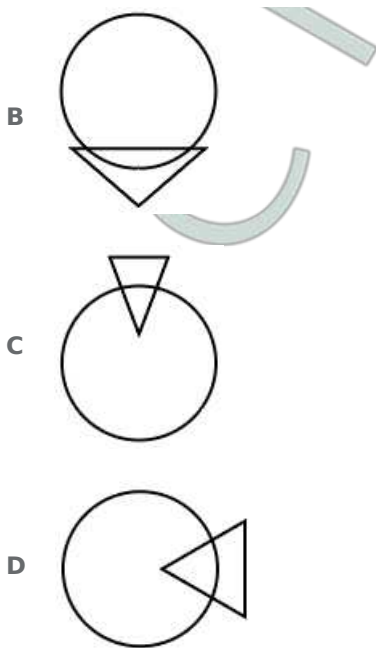
- A 30 minutes
- B 25 minutes
- C 36 minutes
- D 48 minutes

Answer: D

Question 48

Find the ODD one out from the given options.





Answer: B

Question 49

Find the least number that should be added to 2497 so that the sum is divisible by 5, 6, 4 and 3.

- A 23
- B 33
- C 37
- D 13

Answer: A

RRB Group-D Previous Papers

Question 50

Covalent bonds are formed by the between two atoms.

- A Transfer of protons
- B Transfer of electrons
- C Sharing of electrons
- D Sharing of protons

Answer: C

Question 51

Every positive integer > 0 can be expressed as a product of $2^n (n \geq 0)$ and another _____.

- A Prime number
- B Odd number
- C Both Even number and Prime number

D Even number

Answer: B

Question 52

What is the chemical symbol for Sulphur ?

A Su

B Se

C S

D Si

Answer: C

RRB Free Videos (You Tube Channel)

Question 53

A submarine emits a SONAR pulse which returns from an under water cliff in 2 s. If the speed of sound in sea water is 1500 m/s, how far away is the cliff?

A 4000 m

B 1500 m

C 3000 m

D 2000 m

Answer: B

Question 54

Which of the following cities was named the best city to live in India for the fifth consecutive year ?

A Delhi

B Chennai

C Bengaluru

D Hyderabad

Answer: D

Question 55

Which of the following statements are sufficient to find the age of A if:

(i) The ratio of A and B's ages was 2 : 1 five years back.

(ii) The ratio of age at present is 11 : 6.

(iii) The ratio of age 20 years back was 7 : 2.

A Any two of statements (i), (ii) and (iii)

B Statement (i) only

C Statement (iii) only

D Statement (ii) only

Answer: A

20 RRB NTPC Mocks-Tests Rs.149

Question 56

The backbone is also known as-

- A Ribs
- B Thorax
- C Spine
- D Femur

Answer: C

Question 57

Which of these representations does NOT indicate changes over a period of time ?

- A Bar graphs
- B Frequency polygon
- C Histogram
- D Pie chart

Answer: D

Question 58

If in a certain language 'EXIST' is coded as 'ESIXT', how is 'PLUTO' coded in that language ?

- A PULTO
- B PTULO
- C OLUTP
- D PTUOL

Answer: B

10 RRB JE Mocks-Tests Rs.117

Question 59

In a certain code, 'ABC DEF' is written as 'ZYX WVU'. How would 'PASS' be written in that code?

- A WZHH
- B KHZZ
- C KZHH
- D KMHH

Answer: C

Question 60

A sector of a circle of radius 21 cm and central angle 120° is folded into a cone. Radius of the cone thus obtained is:

- A** 7 cm
- B** 21 cm
- C** 42 cm
- D** 7.5 cm

Answer: A

Question 61

**Which of the following will best complete the relationship given below ?
RPM : IGD :: XVS : ?**

- A** NIL
- B** ILN
- C** OMJ
- D** JMO

Answer: C

RRB General Science Notes (Download Pdf)

Question 62

On a certain sum, the Compound Interest and Simple Interest at some rate per cent are Rs.696.30 and Rs.660 respectively in 2 years. Find the sum.

- A** Rs.3600
- B** Rs.4000
- C** Rs.3300
- D** Rs.3000

Answer: D

Question 63

In this question, two statements are given followed by two conclusions. Choose the conclusion(s) which best fit(s) logically.

Statements:

- 1) Some players are spectators.**
- 2) No player is a theatre.**

Conclusions:

- I. No spectators are theatres.**
- II. All spectators being theatres is a possibility.**

- A** Both conclusions I and II follow

- B Only conclusion II follows
- C Neither conclusion I nor II follows
- D Only conclusion I follows

Answer: C

Question 64

Simplify: $8\frac{1}{3} \div 3 - \frac{1}{10}$ of $2\frac{1}{2} + \frac{17}{4}$


- A 9
- B 1
- C $\frac{7}{2}$
- D $\frac{5}{4}$

Answer: A

RRB GK Material (Download Pdf)

Question 65

Choose from the alternatives the figure that best completes the pattern given below.



- A
- B
- C

D



Answer: C

Question 66

Which mirror is used in a solar furnace?

- A Convex mirror
- B Plane mirror
- C Concave mirror
- D Spherical mirror

Answer: C

Question 67

If the potential difference across the ends of a conductor is doubled, what happens to the current flowing through it ?

- A It gets doubled
- B It gets halved
- C It gets quadrupled
- D It gets decreased

Answer: A

RRB NTPC Previous Papers (Download PDF)

Question 68

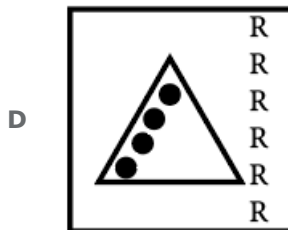

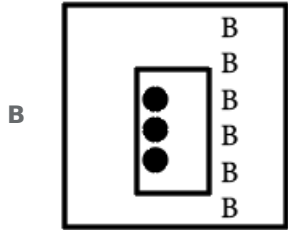
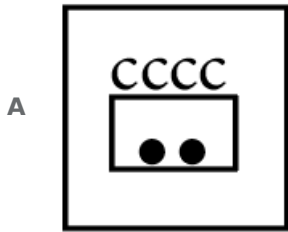
Which of the following bird's egg is the smallest?

- A Hummingbird
- B Swallow
- C Nightingale
- D Sparrow

Answer: A

Question 69

Find the ODD one out from the given options.



Answer: D

Question 70

If $\frac{(x-y)}{5} = \frac{(y-z)}{3} = \frac{(z-x)}{2}$, then which of these is TRUE?

A $x^2 + y^2 + z^2 = 2xyz$

B $x = y = z$

C $xyz = 30$

D $x + y + z = 0$

Answer: B

Join Competitive Exam Updates Telegram Group

Question 71

What constitutes the major part of the human body?

A Fat

B Water

C Proteins

D Plasma

Answer: B

Question 72

A man sold 18 cots for Rs.16800, gaining there by the cost price of 3 cots. Find the cost price of a cot.

A Rs.650

B Rs.750

C Rs.700

D Rs.800

Answer: D

Question 73

Dinesh walked 6 km towards east from his home and took three times left turn. Which direction he is facing now?

A South

B East

C North

D West

Answer: A

RRB NTPC Free Mock Tests

Question 74

If $296 = x\%$ of 3700, then what is the value of 'x'?

A 8

B 11

C 10

D 13

Answer: A

Question 75

If $\sqrt{7} = 2.6457$ and $\sqrt{3} = 1.732$, then find the value of $\frac{1}{\sqrt{7}-\sqrt{3}}$

A 1.0844

B 1.944

C 1.0944

D 1.009

Answer: C

Question 76

Find the missing number in the following series.
2, 4, 3, (...), 5, 10

A 9

B 4

C 6

D 7

Answer: C

RRB JE Previous Papers (Download Pdf)

Question 77

Which of the following is basic in nature?

A H_2SO_4

B $NaOH$

C HCl

D HNO_3

Answer: B

Question 78

What is the scattering of light by particles in its path called as?

A C.V Raman effect

B Light effect

C Newton effect

D Tyndall effect

Answer: D

Question 79

One day Rajesh left home and cycled 10 km southwards, and then he turned right and cycled 5 km; again he turned right and cycled 10 km. Then again he turned left and cycled 10 km to reach point P. How many kilometers will he have to cycle to reach his home straight from point P?

A 25 km

B 20 km

C 10 km

D 15 km

Answer: D

RRB JE Free Mock Test

Question 80

The ratio of Simple Interest earned by equal amounts in two different schemes at the same rate for 6 years and 10 years respectively is:

A 3 : 4

B 3 : 5

C 4 : 3

D 4 : 5

Answer: B

Question 81

In this question, a statement is given followed by three conclusions. Choose the conclusion(s) which best fit(s) logically.

Statement:

$$J \geq E > K = T; D \leq E$$

Conclusions:

I. $J > D$

II. $J \geq D$

III. $E > T$

A Only conclusion I is true

B Only conclusion I and III are true

C Only conclusion I and II are true

D Only conclusions II and III are true

Answer: D

Question 82

What is the chemical formula of Plaster of Paris?

A $CaSO_4$

B $CaSO_4 \cdot 2H_2O$

C $CaSO_4 \cdot \frac{1}{2}H_2O$

D $CaSO_4 \cdot H_2O$

Answer: C

Daily Free RRB Online Test

Question 83

Express 5.025 as a fraction:

- A $5\frac{1}{4}$
- B $\frac{203}{40}$
- C $5\frac{1}{40}$
- D $5\frac{1}{8}$

Answer: C

Question 84

Read the following information carefully and answer the question given below.

Eight friends-P, Q, R, S, T, U, V and W are sitting around a square table in such a way that four of them sit at four corners of the square while four sit in the middle of each of the four sides. The ones who sit at the four corners face the center while those who sit in the middle of the sides face outside. P, who faces the center, sits third to the right of U. T, who faces the center, is not an immediate neighbour of U. Only one person sits between U and V. S sits second to the right of Q. Q faces the center. R is not an immediate neighbour of P. Who among the following is facing outside ?

- A S
- B Q
- C P
- D V

Answer: D

Question 85

'Protection of Life And Personal Liberty' comes under the Article of the Indian Constitution.

- A 20
- B 21
- C 19
- D 22

Answer: B

RRB Group-D Previous Papers

Question 86

A pipe is 3 times faster than another pipe Q and takes 32 minutes less than pipe to fill a cistern. In what time will the cistern be full if both pipes are opened together?

- A 8 minutes
- B 10 minutes
- C 12 minutes

D 6 minutes

Answer: C

Question 87

Each side of a square is increased by 20%. What is the percentage change in area?

A 400%

B 48%

C 20%

D 44%

Answer: D

Question 88

Read the following information carefully and answer the question given below.

Eight friends—D, E, F, G, H, I, J and K are sitting around a circular table facing the centre. Each one of them likes different brands of bikes—Yamaha, TVS, Royal Enfield, Jawa, Harley-Davidson, Bajaj, Honda and Suzuki, but not necessarily in the same order.

D sits third to the right of the person who likes Suzuki. D does not like Royal Enfield. H is not an immediate neighbour of K. F sits on the immediate right of the person who likes Royal Enfield. Neither D nor K likes Harley-Davidson or a TVS. The person who likes Harley-Davidson is not an immediate neighbour of the person who likes Suzuki. The person who likes Yamaha sits second to the left of H. The person who likes Yamaha is an immediate neighbour of the both persons who like Bajaj and Honda. Person who likes Honda sits third to the right of E. E does not like Harley-Davidson. I is not an immediate neighbour of D. J is not an immediate neighbour of the person who likes Yamaha. Only two people sit between the person who likes Honda and K. The persons who like Harley-Davidson and the TVS are immediate neighbours of each other.

Which of the following is CORRECTLY matched?

A H - TVS

B E - Jawa

C J - Harley-Davidson

D D - Bajaj

Answer: C

RRB Free Videos (You Tube Channel)

Question 89

What does phototropism mean?

A Union between unequal gametes

B Movement of plants towards light

C Movement of the plant towards water and moisture

D Specialised protoplasm from which arises a cilia

Answer: B

Question 90

Which of these tennis tournaments is a team event?

- A Australian Open
- B Davis Cup
- C Wimbledon
- D German Open

Answer: B

Question 91

Simplify: $16.5 - 16.5 \div 2.2 + 3 \times 5$

- A 22.5
- B 33
- C 12.25
- D 24

Answer: D

20 RRB NTPC Mocks-Tests Rs.149

Question 92

The length of a rectangular plot is 20 m more than its breadth. If the cost of fencing the plot at Rs.26.50 per metre is Rs.5300, what is the length of the plot in metres ?

- A 120 m
- B 40 m
- C 60 m
- D 50 m

Answer: C

Question 93

What is the minimum age required to be the President of India?

- A 40 Years
- B 37 years
- C 35 Years
- D 38 Years

Answer: C

Question 94

What is the probability of getting exactly one head when a coin is tossed twice?

A 3
4

B 1
2

C 1
4

D 1

Answer: B

10 RRB JE Mocks-Tests Rs.117

Question 95

Major Aerosol pollutant in jet plane emission is-

- A Sulphur dioxide
- B Carbon monoxide
- C Methane
- D Fluoro carbon

Answer: D

Question 96

Non-metals are bad conductors of electricity EXCEPT-

- A Sulphur
- B Graphite
- C Hydrogen
- D Nitrogen

Answer: B

Question 97

The nucleus of an atom contains-

- A Protons and neutrons
- B Protons
- C Neutrons
- D Electrons

Answer: A

RRB General Science Notes (Download Pdf)

Question 98

How much negative charge does an electron possess?

- A $1.8 \times 10^{-19}C$
- B $1.6 \times 10^{-19}C$
- C $1.4 \times 10^{-21}C$
- D $1.6 \times 10^{-23}C$

Answer: B

Question 99

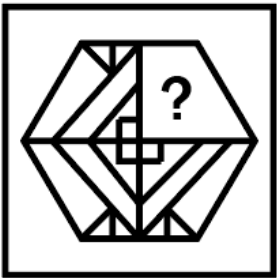
In human body, cells contain -

- A 21 pairs of chromosomes
- B 22 pairs of chromosomes
- C 20 pairs of chromosomes
- D 23 pairs of chromosomes

Answer: D

Question 100

Choose from the alternatives the figure that best completes the pattern given below.



- A
- B
- C
- D

Answer: D



RRB GK Material (Download Pdf)

RRB NTPC Free Mock Tests

RRB JE Previous Papers (Download Pdf)

RRB JE Free Mock Test

Daily Free RRB Online Test

RRB Group-D Previous Papers

RRB Free Videos (You Tube Channel)

20 RRB NTPC Mocks-Tests Rs.149

10 RRB JE Mocks-Tests Rs.117

RRB General Science Notes (Download Pdf)

RRB GK Material (Download Pdf)

RRB NTPC Previous Papers (Download PDF)

Join Competitive Exam Updates Telegram Group