



SSC MTS 13th August 2019 Shift-2

All rights reserved. No part of this publication may be reproduced, distributed, or transmitted in any form or by any means, electronic, mechanical, photocopying, recording or otherwise, or stored in any retrieval system of any nature without the permission of cracku.in, application for which shall be made to support@cracku.in

Instructions

For the following questions answer them individually

Question 1

Select the most appropriate word to fill in the blank and make a meaningful sentence.
Nowadays, digital services have made our cash transactions easier and _____.

- A softer
- B smoother
- C heavier
- D dearer

Answer: B

SSC CHSL Previous Papers (DOWNLOAD PDF)

Question 2

Select the most appropriate word for the given group of words.
The decision that is given by the jury or judge at the end of a trial

- A Accusation
- B Punishment
- C Allegation
- D Verdict

Answer: D

Question 3

Identify the segment in the sentence which contains the grammatical error from the given options.
Outside the cinema hall, there was queue of people waiting to see the movie.

- A there was queue of
- B people waiting
- C to see the movie
- D Outside the cinema hall

Answer: A

Question 4

Select the most appropriate word for the given group of words.
An extremely large mass of ice which moves very slowly, often down a mountain valley

- A Mirage
- B Glacier
- C Island

D Ocean

Answer: B

SSC Stenographer Previous Papers (Download PDF)

Question 5

Select the most appropriate option to fill in the blank and make a grammatically correct sentence.
Robert and Rooney aren't very good friends although they _____ each other for a long time.

A have known

B are knowing

C has known

D knew

Answer: A

Question 6

Select the most appropriate word to fill in the blank and make a meaningful sentence.
When I returned home from work I found my son weeping _____.

A sweetly

B bitterly

C calmly

D gently

Answer: B

Question 7

Select the most appropriate antonym of the word.
ILLUSION

A Fantasy

B Hallucination

C Mirage

D Reality

Answer: D

SSC GD Constable Previous Papers

Question 8

Select the most appropriate option to substitute the underlined segment in the given sentence. If there is no need to substitute it, select **No improvement**.

The fire spread through the building very quick but fortunately nobody was injured.

A spreads through the building quickly

- B spread through the building very quickly
- C spreading through building very quick
- D No improvement

Answer: B

Instructions

In the following passage some words have been deleted. Fill in the blanks with the help of the alternatives given. Select the most appropriate option for each blank.

Comprehension:

The house - the only one in the entire valley sat on the crest of a low hill. From this height one (1) _____ see the river and the field of ripe corn dotted with the flowers that (2) _____ promised a good harvest. The only thing the earth (3) _____ was a downpour or at least a shower. Throughout the morning Paul - who (4) _____ his fields intimately (5) _____ done nothing else but watch the sky towards the north-east.

Question 9

Select the most appropriate option to fill in blank No.1

- A need
- B ought
- C must
- D could

Answer: D

Question 10

Select the most appropriate option to fill in blank No.2

- A hardly
- B always
- C never
- D rarely

Answer: B

SSC MTS Previous Papers (DOWNLOAD PDF)

Question 11

Select the most appropriate option to fill in blank No.3

- A needed
- B prayed
- C displayed
- D longed

Answer: A

Question 12

Select the most appropriate option to fill in blank No.4

- A knowing
- B known
- C know
- D knew

Answer: D

Question 13

Select the most appropriate option to fill in blank No.5

- A have
- B having
- C had
- D is

Answer: C

SSC CGL Previous Papers (DOWNLOAD PDF)

Instructions

For the following questions answer them individually

Question 14

Select the most appropriate meaning of the given idiom.

Forty winks

- A A short nap during the day
- B To blink repeatedly
- C To keep awake
- D A sound sleep at night

Answer: A

Question 15

Identify the segment in the sentence which contains the grammatical error from the given options.

A friend of mine is working as a photographer of the local newspaper.

- A A friend of mine
- B the local newspaper
- C is working as a
- D photographer of

Answer: D

Question 16

Select the most appropriate meaning of the given idiom.
It's raining cats and dogs

- A To rain very heavily
- B To rain continuously
- C To rain mildly
- D To rain at regular intervals

Answer: A

SSC CGL Free Mock Test (Latest Pattern)

Question 17

Identify the segment in the sentence which contains the grammatical error from the given options.
The essay is divided into five paragraphs and every of these has seven sentences.

- A has seven sentences
- B into five paragraphs
- C The essay is divided
- D and every of these

Answer: D

Question 18

Select the most appropriate option to substitute the underlined segment in the given sentence. If there is no need to substitute it, select **No improvement**.

Robert told me about his new job, which he's enjoying very much.

- A No improvement
- B which he enjoying
- C that which he's enjoyed
- D which he had enjoy

Answer: A

Instructions

Select the most appropriate synonym of the given word.

Question 19

CALM

- A Violent
- B Peaceful
- C Windy
- D Stormy

Answer: B

SSC CHSL Free Mock Test (Latest Pattern)

Question 20

RELEVANT

- A Unconnected
- B Applicable
- C Inapplicable
- D Unrelated

Answer: B

Instructions

For the following questions answer them individually

Question 21

Select the correctly spelt word.

- A Develop
- B Diffrence
- C Discribe
- D Disappear

Answer: D

Question 22

Select the most appropriate option to substitute the underlined segment in the given sentence. If there is no need to substitute it, select No improvement.

I asked two pedestrians the way to the station, and neither of them couldn't help me.

- A and either them couldn't
- B No improvement
- C but neither of them could
- D but none of they could

Answer: C

SSC Stenographer Previous Papers (Latest Pattern)

Question 23

Select the most appropriate option to fill in the blank and make a grammatically correct sentence.

Children are not allowed to use the swimming pool _____ they are accompanied by an adult.

- A unless
- B at least

C if only

D in case

Answer: A

Question 24

Select the most appropriate antonym of the word.
DIMINISH

A Increase

B Decrease

C Shrink

D Decline

Answer: A

Question 25

Select the correctly spelt word.

A Discipline

B Disastrous

C Diractory

D Dormitory

Answer: A

SSC GD Constable Free Mock Test (Latest Pattern)

Reasoning

Instructions

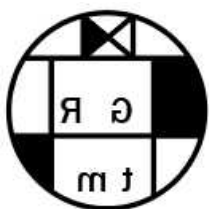
For the following questions answer them individually

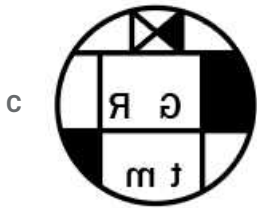
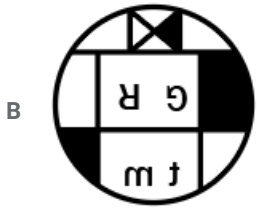
Question 26

Select the correct mirror image of the given figure when the mirror is placed to the right of the figure.



A





Answer: C

SSC MTS Free Mock Test (Latest Pattern)

Question 27

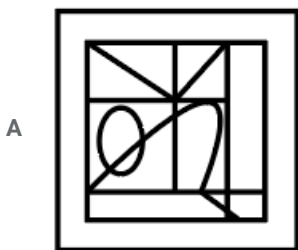
Which of the following letter cluster will replace the question mark (?) to complete the given series?
PTX, AEI, LPT, ?

- A XAE
- B WZE
- C XAD
- D WAE

Answer: D

Question 28

Select the option figure which contains the given question figure embedded in it as its part. (Rotation is not allowed)



C 57

D 54

Answer: A

Question 31

'Jharkhand' is related to 'State' in the same way as 'Lakshwadeep' is related to '_____':

A Punjab

B Union Territory

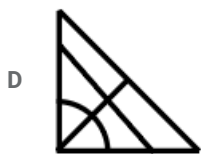
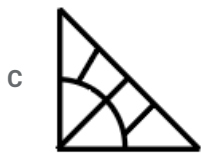
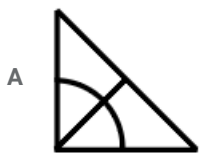
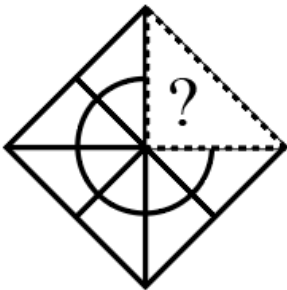
C Ranchi

D District

Answer: B

Question 32

Which of the following option figure will complete the pattern in the figure given below?



Answer: A

Question 33

In a code language, if 'REPAIR' is written as '18101621818', then how will 'GALAXY' be written in that language?

- A 721212425
- B 721222425
- C 711212425
- D 611212324

Answer: B

Question 34

In a code language, if 'CLASS' is written as '24152688', then how will 'MORPH' be written in that language?

- A 151291119
- B 141291119
- C 131291018
- D 141181118

Answer: B

Question 35

In a code language, 'people are confident' is written as 'lur bur duk', 'we are helpful' is written as 'kur duk sur', 'we have cars' is written as 'sur mur jur' and 'people have honesty' is written as 'lur jur nur'. What is the code for 'confident'?

- A bur
- B duk
- C jur
- D lur

Answer: A

285 SSC Mocks - Just RS. 249

Question 36

Amrit is elder than Vikrant. Shanaz is elder than Joya. Ketan is younger than Joya. Vikrant is elder than Shanaz. Who is the youngest in the group?

- A Shanaz
- B Ketan
- C Joya
- D Vikrant

Answer: B

Question 37

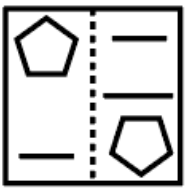
Eight friends P, Q, R, S, T, U, V and W are sitting around a circular table at equal distances from each other. U is sitting extremely opposite to P. S is between V and Q. R is between U and W. P is sitting to the immediate right of Q. Who is sitting between P and W?

- A U
- B T
- C V
- D Q

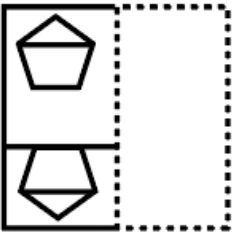
Answer: B

Question 38

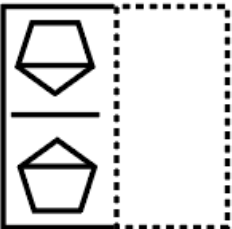
A figure of transparent sheet with a pattern is given below. Figure out from amongst the four options as to how the pattern would appear when the transparent sheet is folded at the dotted line.



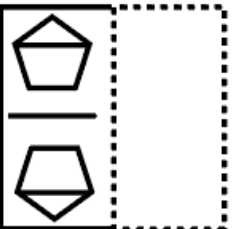
A



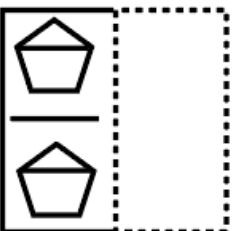
B



C



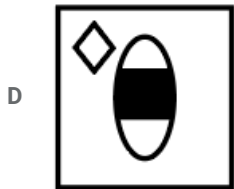
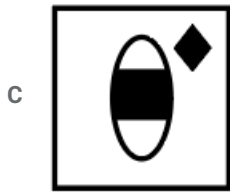
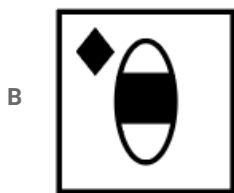
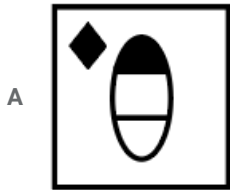
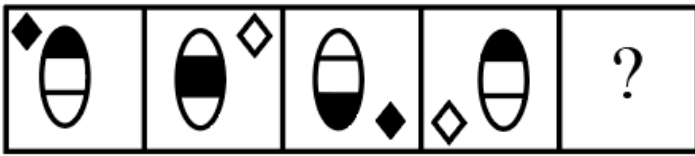
D



Answer: C

Question 39

Select the figure that will come next in the following figure series.



Answer: B

Question 40

Select the word pair in which the two words are related in the same way as the word pair given below.

Skin : Eczema

A Kidney : Diabetes

B Lungs : oxygen

C Eyes : Cataract

D Heart : Blood

Answer: C

Question 41

Three statements are given, followed by three conclusions numbered I, II and III. Assuming the statements to be true, even if they seem to be at variance with commonly known facts, decide which of the conclusions logically follow(s) from the statements.

Statements:

Some plants are leaves.

All leaves are twigs.

No twig is banana.

Conclusions:

I. Some plants are bananas.

II. Some twigs are leaves.

III. Some bananas are leaves.

- A Only conclusion III follows
- B Conclusions I and II follow
- C Only conclusion II follows
- D Conclusions II and III follow

Answer: C

SSC Study Material

Question 42

Select the option that is related to the third number in the same way as the second number is related to the first number.

12 : 121 :: 10 : ?

- A 64
- B 81
- C 112
- D 91

Answer: B

Question 43

Select the option that is related to the third letter-cluster in the same way as the second letter-cluster is related to the first letter-cluster.

PECL : OFHS :: QTJM : ?

- A PNVT
- B ONVS
- C PMWT
- D OMWS

Answer: C

Question 44

In a code language, 'LANTERN' is written as 'AELNNRT'. How will 'POSITIVE' be written as in that language?

- A IIEPOSTV

- B EIIOPTVS
- C ISOPEVIT
- D EIIOPSTV

Answer: D

SSC Daily Practice Set

Question 45

Which number will replace the question mark (?) in the following series?
105, 106, 114, 141, ?

- A 207
- B 208
- C 205
- D 206

Answer: C

Question 46

Select the set in which the numbers are related in the same way as are the numbers of the following set.
5, 30, 40

- A 4, 25, 32
- B 6, 42, 49
- C 8, 72, 88
- D 7, 56, 77

Answer: C

Question 47

Six persons A, B, C, D, E and F are sitting in a line. E is between D and F. A is second to the right of F. C is at extreme right. Who is sitting at second place to the left of C?

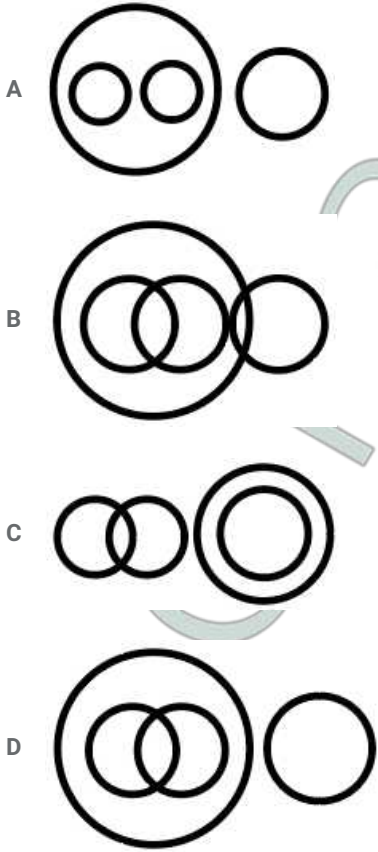
- A D
- B A
- C B
- D F

Answer: C

SSC GK Free Tests

Question 48

Select the Venn diagram that best illustrates the relationship between the following classes.
Mothers, Fathers, Daughters, Women



Answer: D

Question 49

Which two signs and two numbers should be interchanged to make the given equation correct?

$$28 + 4 \times 16 \div 5 - 17 = 127$$

- A 4 and 5, + and \times
- B 28 and 16 + and \div
- C 4 and 5, + and -
- D 28 and 5, \div and \times

Answer: A

Question 50

If 'A' stands 'addition', B stands for 'division', C stands for 'subtraction' and D stands for 'multiplication, then what is the value of the following equation?

$$25 D 13 A 82 C 132 B 11 = ?$$

- A 395
- B 415
- C 375
- D 253

Answer: A

SSC GK Questions

Quant

Instructions

For the following questions answer them individually

Question 51

Parikh sold his pen at a profit of ₹11. He calculated the profit percentage on selling price and found it to be 25%. The cost price (in ₹) of the pen is:

- A 33
- B 24
- C 36
- D 44

Answer: A

Current Affairs Question and Answers (Download PDF)

Question 52

After allowing a discount of 12.5%, shopkeeper makes a profit of 25% on a bag. At what percent higher than the cost price did he mark the bag? (correct to nearest integer)

- A 35%
- B 43%
- C 41%
- D 38%

Answer: B

Question 53

Age of A is 6 years more than three times the age of B. After three years, A's age will be 8 years more than twice the age of B. The average of present ages of A and (in years) is:

- A 12
- B 11
- C 14
- D 13

Answer: D

Question 54

A woman travelling at 130% of her usual speed reaches her office 12 minutes early. Her usual time to cover the journey is:

- A 0.52 hr
- B 0.48 hr

C 2 hrs

D 1 hr

Answer: A

Daily and Monthly Current Affairs (Download PDF)

Question 55

The value of $[12 \times 5 - \{200 - (501 + 247 - 386)\}] \div 2$ is:

A 162

B 161

C 111

D 82

Answer: C

Explanation:

$$(60 - (200 - (501 + 247 - 386))) / 2$$

$$(60 + 162) / 2$$

$$222 / 2$$

$$111$$

Question 56

If an article is sold at 23% profit instead of 14% profit, then the profit would be ₹189 more. What is the cost price?

A ₹2100

B ₹2105

C ₹2340

D ₹1800

Answer: A

Question 57

A can do a work in 15 days. B is 25% more efficient than A. In how many days, working together A and B will complete the same work?

A $\frac{21}{4}$

B $\frac{24}{5}$

C $\frac{20}{3}$

D $\frac{25}{7}$

Answer: C

SSC CHSL Previous Papers (DOWNLOAD PDF)

Question 58

The area of the sheet metal needed to make a box of size 7 cm × 8 cm × 9 cm is:

- A 382 cm²
- B 156 cm²
- C 412 cm²
- D 139 cm²

Answer: A

Instructions

The Table shows the Number of Laptops and Desktops manufactured by a company.

Year	2008	2009	2010	2011	2012
Laptops	14400	20500	12800	16400	18600
Desktops	12800	24700	19200	20200	14900

Question 59

What was the difference in the total number of Laptops and Desktops manufactured in 2009 to the total number of Laptops and Desktops manufactured in 2011?

- A 8600
- B 5600
- C 6800
- D 8200

Answer: A

Question 60

Approximately what was the percentage decrease in number of desktops manufactured in 2012 from 2011? (correct to nearest integer)

- A 30
- B 22
- C 28
- D 26

Answer: D

SSC Stenographer Previous Papers (Download PDF)

Instructions

For the following questions answer them individually

Question 61

A bag contains ten rupee, five rupee and two rupee notes in the ratio 10 : 5 : 2. The total value of five rupee notes in the bag is ₹84 more than that of two rupee notes. The total value of ten rupee notes in the bag (in ₹) is:

- A 350
- B 450
- C 300
- D 400

Answer: D

Question 62

The temperature in $^{\circ}C$ of 11 days recorded as follows:
29, 32, 30, 15, 21, 24, 23, 27, 26, 30, 33 the Median of the temperature is:

- A 27
- B 26
- C 23
- D 18

Answer: A

Question 63

The volume of prism is 308 cm^3 and height is 11 cm. The base area of prism is:

- A 21 cm^2
- B 14 cm^2
- C 28 cm^2
- D 22 cm^2

Answer: C

SSC GD Constable Previous Papers

Question 64

The average of 10 numbers is P and the average of 4 of these numbers is Q. If the average of remaining numbers is R then which of the following is correct:

- A $3P = 2Q + 4R$
- B $5P = 3Q + 2R$
- C $5P = 2Q + 3R$
- D $4P = 2Q + 3R$

Answer: C

Question 65

The Table shows the Number of Laptops and Desktops manufactured by a company.

Year	2008	2009	2010	2011	2012
Laptops	14400	20500	12800	16400	18600
Desktops	12800	24700	19200	20200	14900

What is the average number of laptops manufactured by a company from 2008 to 2012?

- A 13550
- B 16140
- C 16540
- D 14260

Answer: C

Question 66

If $a : b = 2 : 3$ and $b : c = 2 : 3$, then what is the value of $(3a^2 + b^2 - c^2) : (a^2 + 2b^2 - c^2)$?

- A 3 : 5
- B 4 : 5
- C 5 : 7
- D 3 : 7

Answer: D

SSC MTS Previous Papers (DOWNLOAD PDF)

Question 67

A sum doubles in 4 years at a certain rate of compound interest. In how many years does it amount to 8 times itself at the same rate?

- A 9
- B 12
- C 15
- D 6

Answer: B

Question 68

The largest three digit number that is exactly divisible by 6, 7 and 8 is:

- A 999
- B 168
- C 358
- D 840

Answer: D

Question 69

A mixture contains milk and water in the ratio (by volume) 5 : 3 and another mixture, of the same volume as that of the former, contains water and milk in the ratio (by volume) 1 : 3. In what ratio, two mixtures be mixed in order to obtain a new mixture consisting of milk and water in the ratio (by volume) 7 : 3 ?

- A 2 : 3
- B 3 : 4
- C 5 : 6
- D 3 : 2

Answer: A

SSC CGL Previous Papers (DOWNLOAD PDF)

Question 70

If 80% of X is 36 more than 60% of Y and 120% of X is equal to Y, then the difference between X and Y is:

- A 80
- B 100
- C 90
- D 60

Answer: C

Question 71

The diagonal of a square measures $6\sqrt{2}$ cm. The measure of the diagonal of a square whose area is twice that of the first square is:

- A 12 cm
- B $12\sqrt{2}$ cm
- C 6 cm
- D $6\sqrt{2}$ cm

Answer: A

Question 72

A boat takes 80 minutes to row 12 km upstream and 60 minutes to row 15 km downstream. How long will it take to row a distance of 36 km in still water?

- A 2 hours
- B 3 hours
- C 4 hours
- D 2.5 hours

Answer: B

SSC CGL Free Mock Test (Latest Pattern)

Question 73

A work can be completed by 35 workers in 30 days. If 5 workers leave after every 10 days then in how many days will the work be completed?

- A 35.5 days
- B 37.5 days
- C 40 days
- D 50 days

Answer: B

Question 74

A certain sum amounts to ₹20720 in four years and ₹24080 in six years at a certain rate of simple interest. The sum (in ₹) is:

- A 11000
- B 12000
- C 14000
- D 15000

Answer: C

Question 75

The value of $5^{\frac{1}{3}} \times 2^{\frac{1}{7}} \times 9^{\frac{2}{5}} \times 4^{\frac{3}{8}} \times 2^{\frac{6}{47}}$ is?

- A 1
- B 1000
- C 100
- D 10

Answer: B

Explanation:

$$16/3 \times 15/7 \times 47/5 \times 35/8 \times 100/47$$

$$=1000$$

SSC CHSL Free Mock Test (Latest Pattern)

General knowledge

Instructions

For the following questions answer them individually

Question 76

Which of the following countries hosted the first South Asian Games?

- A Nepal
- B India
- C Bangladesh
- D Pakistan

Answer: A

SSC Stenographer Previous Papers (Latest Pattern)

Question 77

The painting "Damayanthi" was painted by _____.

- A Raja Ravi Varma
- B Kalidas
- C Johann Zoffany
- D Abanindranath Tagore

Answer: A

Question 78

Who was the first Chief Justice of Independent India?

- A B.K. Mukherjee
- B S.R. Das
- C M. Patanjali Sastri
- D Harilal J. Kania

Answer: D

Question 79

Ajanta and Ellora caves are located in which state of India?

- A Goa
- B Madhya Pradesh
- C Bihar
- D Maharashtra

Answer: D

SSC GD Constable Free Mock Test (Latest Pattern)

Question 80

What condition is required to rust in iron?

- A Absence of O_2
- B presence of CO_2
- C Absence of H_2O
- D presence of O_2

Answer: D

Question 81

Which of the following pair of Tropical Grassland - Location is correct?

- A Campas - Venezuela
- B Los Llanos - Brazil
- C Savanna - Africa
- D Steppe - Greenland

Answer: C

Question 82

Who headed Provincial Constitution Committee?

- A Dr. Rajendra Prasad
- B Sardar Vallabh Bhai Patel
- C V.P Menon
- D Jawaharlal Nehru

Answer: B

SSC MTS Free Mock Test (Latest Pattern)

Question 83

Which of the following Prime Minister has served a term of 13 days?

- A Atal Bihari Vajpayee
- B Morarji Desai
- C Charan Singh
- D Jawaharlal Nehru

Answer: A

Question 84

The reaction between an acid and a base is known as ____.

- A Evaporation
- B Sublimation

- C neutralization
- D acidification

Answer: C

Question 85

The headquarters of the Indian Institute of Astrophysics is located in _____.

- A Shillong
- B Indore
- C Nainital
- D Bangalore

Answer: D

SSC CPO Free Mock Test (Latest Pattern)

Question 86

Who among the following has NOT received 'Bharat Ratna'?

- A Mahatma Gandhi
- B Pt. Jawaharlal Nehru
- C Atal Bihari Vajpayee
- D Sachin Tendulkar

Answer: A

Question 87

Salinity is the amount of salt in grams present in _____.

- A 1000 grams of water
- B 100 grams of water
- C 10000 grams of water
- D 10 grams of water

Answer: A

Question 88

Temple for Goddess Nishumbhasudini was built by _____.

- A Pallavas
- B Cholas
- C Gupta Dynasty
- D Muttaraiyar

Answer: B

SSC MTS Free Preparation App

Question 89

Who decides repo rate, reverse repo rate and bank rate?

- A SEBI
- B NABARD
- C Reserve Bank of India
- D SBI

Answer: C

Question 90

What is the Reverse Repo Rate as announced by the Reserve Bank of India in June 2019?

- A 6.00 per cent
- B 5.50 per cent
- C 5.75 per cent
- D 6.25 per cent

Answer: B

Question 91

In which year the Congress and the Muslim League signed the historic Lucknow pact?

- A 1915
- B 1906
- C 1916
- D 1917

Answer: C

285 SSC Mocks - Just RS. 249

Question 92

Susu Dolphin is found in waters of which river?

- A Jhelum
- B Indus
- C Chenab
- D Ganga

Answer: D

Question 93

As of June 2019, which of the following is NOT a Navratna Company?

- A Bharat Electronics Limited
- B Rashtriya Ispat Nigam Limited
- C Hindustan Petroleum Corporation Limited
- D Steel Authority of India Limited

Answer: D

Question 94

Poona Pact, 1932, was signed between _____.

- A Dr. B.R. Ambedkar and Mahatma Gandhi
- B Mahatma Gandhi and Viceroy Irvin
- C Dr. B.R. Ambedkar and Jawaharlal Nehru
- D Mahatma Gandhi and Mc Donald

Answer: A

SSC Exam Free Videos (Youtube)

Question 95

Who appoints Governor of the state in India?

- A PMO
- B Prime Minister
- C President
- D Cabinet Committee on Appointments

Answer: C

Question 96

Mosses, Lichens and small shrubs are found in which type of vegetation?

- A Mangrove
- B Tundra
- C Tropical Evergreen Forest
- D Coral Reefs

Answer: B

Question 97

Swaraj Party was formed by _____.

- A C.R. Das and Jawaharlal Nehru
- B C.R. Das and Motilal Nehru
- C Motilal Nehru and Sardar Vallabhbhai Patel
- D Subhas Chandra Bose and Jawaharlal Nehru

Answer: B

SSC Study Material

Question 98

Article 21-A was introduced by which Constitutional Amendment Act?

- A 93rd
- B 85th
- C 73rd
- D 86th

Answer: D

Question 99

Taiga forest are found in which of the following countries?

- A Brazil
- B Australia
- C Russia
- D India

Answer: C

Question 100

Who among the following is the highest wicket taker in the ICC World Cup 2019?

- A Trent Boult
- B Jofra Archer
- C Mitchell Starc
- D Jaspreet Bumrah

Answer: C

SSC Daily Practice Set

SSC CHSL Previous Papers (DOWNLOAD PDF)

[SSC Stenographer Previous Papers \(Download PDF\)](#)

[SSC GD Constable Previous Papers](#)

[SSC MTS Previous Papers \(DOWNLOAD PDF\)](#)

[SSC CGL Previous Papers \(DOWNLOAD PDF\)](#)

[SSC CGL Free Mock Test \(Latest Pattern\)](#)

[SSC CHSL Free Mock Test \(Latest Pattern\)](#)

[SSC Stenographer Previous Papers \(Latest Pattern\)](#)

[SSC GD Constable Free Mock Test \(Latest Pattern\)](#)

[SSC MTS Free Mock Test \(Latest Pattern\)](#)

[SSC CPO Free Mock Test \(Latest Pattern\)](#)

[SSC MTS Free Preparation App](#)

[285 SSC Mocks - Just RS. 249](#)

[SSC Exam Free Videos \(Youtube\)](#)

[SSC Study Material](#)

[SSC Daily Practice Set](#)

[SSC GK Free Tests](#)

[SSC GK Questions](#)

[Current Affairs Question and Answers \(Download PDF\)](#)

[Daily and Monthly Current Affairs \(Download PDF\)](#)