



## SSC MTS 19th August 2019 Shift-3

All rights reserved. No part of this publication may be reproduced, distributed, or transmitted in any form or by any means, electronic, mechanical, photocopying, recording or otherwise, or stored in any retrieval system of any nature without the permission of cracku.in, application for which shall be made to [support@cracku.in](mailto:support@cracku.in)

**Instructions**

For the following questions answer them individually

**Question 1**

Select the most appropriate word for the given group of words:

Rearing of silk worms

- A Horticulture
- B Agriculture
- C Sericulture
- D Pisciculture

**Answer:** C

**SSC CHSL Previous Papers (DOWNLOAD PDF)**

**Question 2**

Select the most appropriate antonym of the given word.

INFALLIBLE

- A Notorious
- B Flawless
- C Imperfect
- D Dependable

**Answer:** C

**Instructions**

In the following passage some words have been deleted. Fill in the blanks with the help of the alternatives given. Select the most appropriate option for each blank.

**Comprehension:**

A city is the (1)..... man's battleground where he fights for (2)..... There is a constant competition for jobs, houses and support services (3)..... health and education. This cut-throat competition results in lack of sensitivity (4)..... fellow-citizens and a feeling of hatred for (5)..... who are more successful.

**Question 3**

Select the most appropriate option to fill in blank No.1.

- A modern
- B historic
- C primitive
- D early

**Answer:** A

**Question 4**

Select the most appropriate option to fill in blank No.2.

- A win
- B live
- C death
- D survival

Answer: D

## SSC Stenographer Previous Papers (Download PDF)

### Question 5

Select the most appropriate option to fill in blank No.3.

- A like
- B dislike
- C unlike
- D likely

Answer: A

### Question 6

Select the most appropriate option to fill in blank No.4.

- A at
- B over
- C towards
- D along

Answer: C

### Question 7

Select the most appropriate option to fill in blank No.5.

- A those
- B these
- C their
- D them

Answer: A

## SSC GD Constable Previous Papers

### Instructions

For the following questions answer them individually

**Question 8**

Identify the segment in the sentence which contains the grammatical error.

I have no doubt / that Girish is / one of the most intelligent student / in the entire district.

- A that Girish is
- B in the entire district
- C I have no doubt
- D one of the most intelligent student

**Answer: D**

**Question 9**

Select the most appropriate antonym of the given word.

**REWARD**

- A Punish
- B Produce
- C Present
- D Praise

**Answer: A**

**Question 10**

Identify the segment in the sentence which contains the grammatical error.

After playing cricket/ till 2 o'clock / the children ate their lunch / and left to home.

- A the children ate their lunch
- B till 2 o'clock
- C After playing cricket
- D and left to home

**Answer: D**

**SSC MTS Previous Papers (DOWNLOAD PDF)**

**Question 11**

Select the most appropriate option to substitute the underlined segment. If there is no need to substitute it, select No improvement.

I would be eternally indebted from you if you could help me.

- A indebted in you
- B indebted to you
- C indebted for you
- D No improvement

**Answer: B**

**Question 12**

Identify the segment in the sentence which contains the grammatical error.

Had Rajani not taken / a cab to the station / she would have definitely / miss the train.

- A she would have definitely
- B Had Rajani not taken
- C miss the train
- D a cab to the station

**Answer: C**

**Question 13**

Select the wrongly spelt word.

- A Vessel
- B Kettle
- C Brittle
- D Parellel

**Answer: D**

**SSC CGL Previous Papers (DOWNLOAD PDF)**

**Question 14**

Select the most appropriate option to substitute the underlined segment. If there is no need to substitute it, select No improvement.

Bulbul is honest girl but she is also very rude.

- A Bulbul is an honest girl
- B Bulbul is very honest girl
- C No improvement
- D Bulbul is a honest girl

**Answer: A**

**Question 15**

Select the most appropriate synonym of the given word.

**DESTROY**

- A Assist
- B Preserve
- C Restore
- D Ruin

**Answer: D**

**Question 16**

Select the most appropriate word to fill in the blank and make a meaningful sentence.  
Suman found a hundred-rupee note ..... on the road.

- A lied
- B laying
- C lying
- D laid

**Answer: C**

**SSC CGL Free Mock Test (Latest Pattern)**

**Question 17**

Select the most appropriate meaning of the given idiom.  
To lose one's head

- A To be beheaded for disloyalty
- B To lose self control
- C To die valiantly in a war
- D To lose one's position

**Answer: B**

**Question 18**

Select the most appropriate synonym of the given word.  
POPULAR

- A Particular
- B untidy
- C Specific
- D Favourite

**Answer: D**

**Question 19**

Select the correctly spelt word.

- A Revenue
- B Ravanue
- C Ravenue
- D Reveanu

**Answer: A**

## SSC CHSL Free Mock Test (Latest Pattern)

### Question 20

Select the most appropriate option to fill in the blank and make a grammatically correct sentence.  
Maryam ..... to anyone as she was angry.

- A not spoke
- B did not spoken
- C did not spoke
- D did not speak

Answer: D

### Question 21

Select the most appropriate option to substitute the underlined segment. If there is no need to substitute it, select No improvement.  
She is extremely fond about chocolates and cookies.

- A No improvement
- B She is extremely fond for
- C She is extreme fond of
- D She is extremely fond of

Answer: D

### Question 22

Select the most appropriate meaning of the given idiom.  
**To spill the beans**

- A To give away a secret
- B To waste food items
- C To plan a strategy
- D To drop some food

Answer: A

## SSC Stenographer Previous Papers (Latest Pattern)

### Question 23

Select the most appropriate word for the given group of words:  
An account of a person's life written by self

- A Autobiography
- B Cartography
- C Biography

D Calligraphy

Answer: A

**Question 24**

Select the most appropriate word to fill in the blank and make a meaningful sentence.  
The doctor advised him to consume ..... water without any additive.

A pleasant

B plain

C potent

D precious

Answer: B

**Question 25**

Select the most appropriate option to fill in the blank and make a grammatically correct sentence.  
The players returned to the dilapidated hotel that them.

A was been allocated to

B were allocated to

C had allocated to

D was allocated to

Answer: D

## SSC GD Constable Free Mock Test (Latest Pattern)

### Reasoning

**Instructions**

For the following questions answer them individually

**Question 26**

Select the number that will replace the question mark.

4   16   63

7   35   ?

8   48   287 ▶

A 210

B 140

C 174

D 198

Answer: C

## SSC MTS Free Mock Test (Latest Pattern)



**Question 27**

Select the option that is related to the third term in the same way as the second term is related to the first term.  
 $64 : 512 :: 144 : ?$

- A 1728
- B 1618
- C 1788
- D 1548

**Answer: A**

**Question 28**

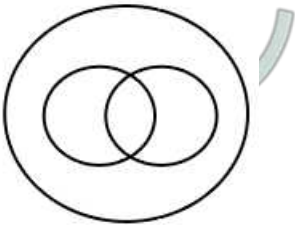
There are five cousins namely Ashish, Manish, Kailash, Daksh, and Lalit of different ages. All these cousins are arranged in the descending order of their ages. Ashish, brother of Kailash, is the second youngest and is 19 years old. Daksh, brother of Lalit, is between Kailash and Manish. Kailash is 42 years old and Ashish is 20 years younger than Daksh. Who among the following is the youngest?

- A Ashish
- B Daksh
- C Lalit
- D Manish

**Answer: C**

**Question 29**

The Venn diagram given in the question represents the relationship between the items given in which of the following options?



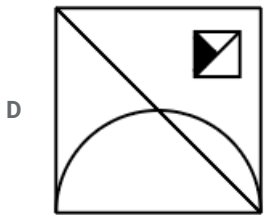
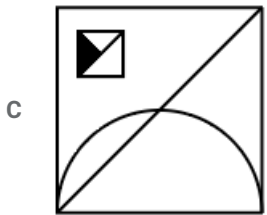
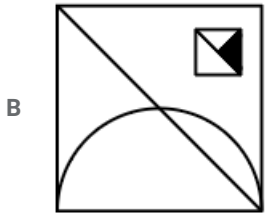
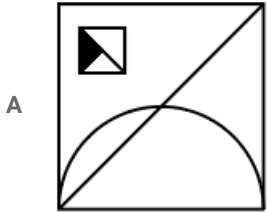

- A teachers, women and humans
- B mangoes, potatoes and vegetables
- C flowers, leaves and bees
- D cats, dogs and pets

**Answer: A**

**SSC CPO Free Mock Test (Latest Pattern)**

Question 30

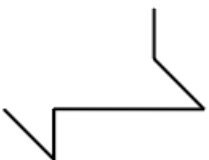
If a mirror is placed on the line XY, then which of the answer figures will be the right mirror image of the given figure?

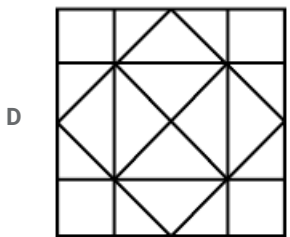
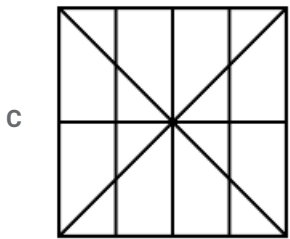
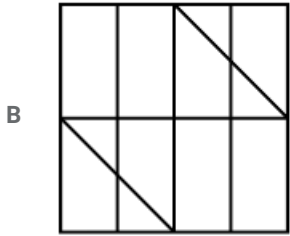
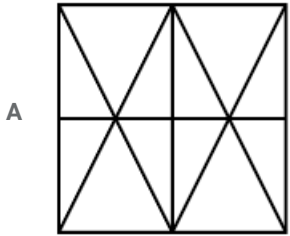


Answer: D

Question 31

Select the option in which the given figure is embedded. (Rotation is not allowed)





Answer: B

Question 32

Select the correct option that will complete the series.

441, 484, 529, 576, .....

A 641

B 630

C 610

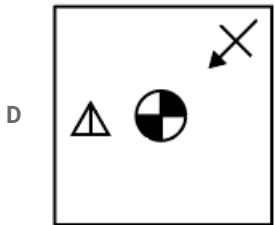
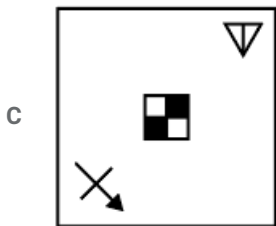
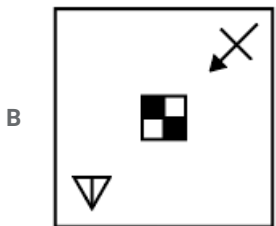
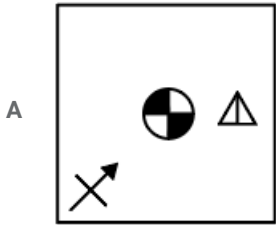
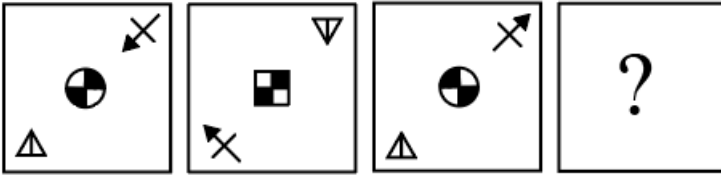
D 625

Answer: D

**SSC MTS Free Preparation App**

Question 33

Select the option figure that will come next in the following series.



Answer: C

Question 34

Which two numbers need to be interchanged to make the given equation correct?

$$96 \times 6 - 8 \div 2 + 3 = 768$$

A 6, 8

B 6, 3

C 2, 3

D 96, 8

Answer: A

Question 35

In a certain code language, '6532' is written as '3467'. What will be the code for '7915' in that code language?

A 2084

B 3939

C 1463

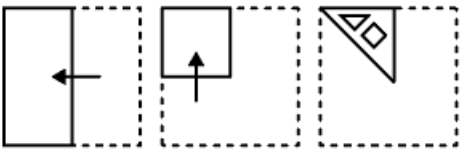
D 2658

Answer: A


### 285 SSC Mocks - Just RS. 249

Question 36


A piece of paper is folded and cut as shown below in the question figures. Select from the given answer figures, how it will appear when unfolded.




A




B



C



D



Answer: A

Question 37

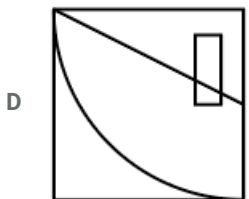
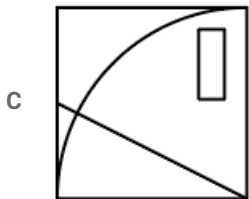
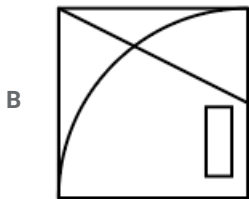
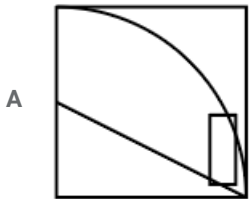
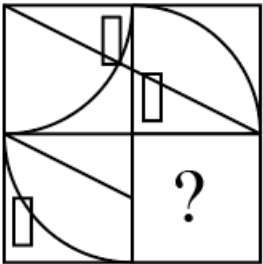
In a certain code language, 'CLAY' is written as 'FODB'. What will be the code for 'FROG' in that code language?

- A IMSK
- B JMOI
- C KMRI
- D IURJ

Answer: D

**Question 38**

Study the given pattern carefully and select the figure that will complete the pattern given in the question figure.



Answer: C

**SSC Exam Free Videos (Youtube)**

**Question 39**

There are five different cottages, M to Q in a row. M is to the right of N and Q is to the left of O and right of M. N is to the right of P. The first cottage from the left is .....

- A M
- B N
- C P
- D Q



Answer: C

**Question 40**

Read the given statements and conclusions carefully. Assuming that the information given in the statements is true, even if it appears to be at variance with commonly known facts, decide which of the given conclusions logically follow(s) from the statements.

**Statements:**

**All bears are tigers.**

**Some bears are lions.**

**Conclusion:**

**I: Some tigers are lions.**

**II: No lions are tigers.**

- A Both conclusions I and II follow
- B Neither conclusion I nor II follows
- C Only conclusion I follows
- D Only conclusion II follows

Answer: C

**Question 41**

Select the option that is related to the third word in the same way as the second word is related to the first word.

Teacher : Student :: Doctor : ?

- A Patient
- B Coat
- C Stethoscope
- D Hospital

Answer: A

## SSC Study Material

**Question 42**

Select the term that will come next in the following series.

CAY, FDB, IGE, .....

- A KJL
- B LJH
- C KIG
- D JHL

Answer: B

Question 43

Select the correct option that will complete the series.

13, 42, 129, 390, .....

- A 1220
- B 1173
- C 1179
- D 1170

Answer: B

Question 44

Read the given statements and conclusions carefully. Assuming that the information given in the statements is true, even if it appears to be at variance with commonly known facts, decide which of the given conclusions logically follow(s) from the statements.

Statements:

All pans are jugs.

No plates are jugs.

Conclusion:

I: Some pans are plates.

II : Some jugs are pans.

III : No pans are plates.

- A Only conclusion II and III follows
- B All conclusions I, II and III follow
- C Only conclusion I follows
- D Only conclusion I and III follows

Answer: A

## SSC Daily Practice Set

Question 45

Select the option that is related to the third term in the same way as the second term is related to the first term.

MRW : JOT :: QGP: ?

- A OGN
- B NPO
- C NGM
- D NDM

Answer: D

Question 46

Harmeet, Ishpreet, Jaspreet, Karpreet and Rashmeetaresitting on a bench facing North. Jaspreet is between Ishpreet and Rashmeeta. Harmeet is to the right of Ishpreet. Karpreet is not next to Rashmeeta. Who is to the right of Harmeet?



- A Karpreet
- B Ishpreet
- C Rashmeet
- D Jashpreet

Answer: A

**Question 47**

Select the option that is related to the third word in the same way as the second word is related to the first word.

Man : Boy :: Dog : ?

- A Puppy
- B Cub
- C Kennel
- D Bitch

Answer: A

## SSC GK Free Tests

**Question 48**

If DECEMBER is coded as 5354185213 and CONFIDENCE is coded as 9614153531454, then how will STAMPEDE be coded as?

- A 132101954516
- B 131201954510
- C 131201954516
- D 131201594510

Answer: C

**Question 49**

In a certain code language, 'SLAM' is written as 'OHWI'. What will be the code for 'NEST' in that code language?

- A RHID
- B JAOP
- C IAOP
- D IBMQ

Answer: B

**Question 50**

Which two signs need to be interchanged to make the given equation correct?

$$104 \div 8 + 6 - 9 \times 3 = 34$$

- A +, -

B  $\div, +$

C  $-, \times$

D  $+, \times$

Answer: A

## SSC GK Questions

### Quant

#### Instructions

For the following questions answer them individually

#### Question 51

A trader sells two articles for ₹9520 each, one at a profit of 12% and the other at a loss of 15%. His overall percentage loss (correct to one decimal place) is:

A 4.4

B 3.1

C 3.4

D 3.8

Answer: C

## Current Affairs Question and Answers (Download PDF)

#### Question 52

A person travels a certain distance at a speed of 18 km/h and returns to the starting point at 12 km/h. If he takes 2 hours 55 minutes for the whole journey, the distance one way is:

A 21 km

B 25 km

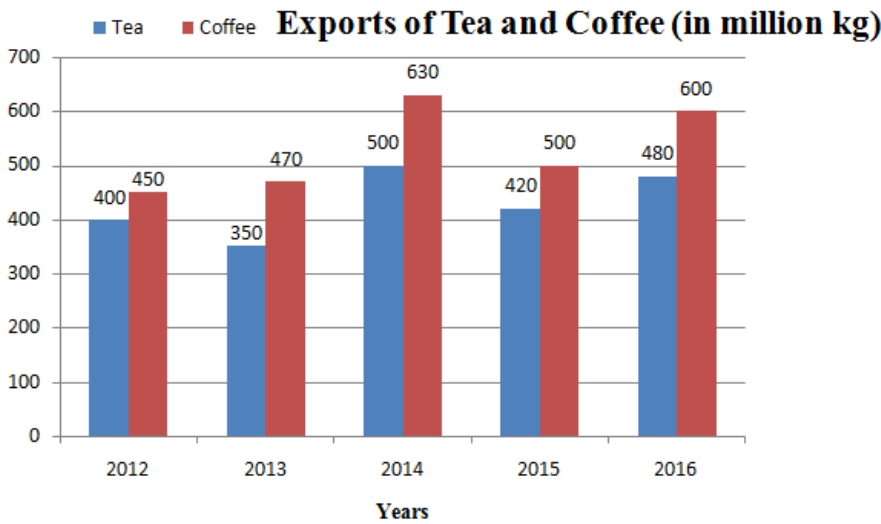
C 18 km

D 24 km

Answer: A

Question 53

The given Bar Graph presents the Export of Tea and Coffee (in million kg) for the years 2012 to 2016.



Total export of coffee is approximately what percent more than the total export of tea during the five years?

- A 23
- B 26
- C 28
- D 25

Answer: A

Question 54

What will be the compound interest on a sum of ₹31250, at 12% compound interest (interest compounded yearly) in  $2\frac{2}{3}$  years?

- A ₹11048
- B ₹11096
- C ₹11068
- D ₹11086

Answer: D

**Daily and Monthly Current Affairs (Download PDF)**

Question 55

Let  $x$  be the smallest number greater than 600 which gives the remainders 2, 3 and 4, when divided by 5, 6 and 7, respectively. The sum of digits of  $x$  is:

- A 14
- B 15
- C 13
- D 16

Answer: B

**Question 56**

A certain sum amounts to ₹12096 at 8% p.a. in  $5\frac{1}{2}$  years at simple interest. What will be the simple interest on the same sum at 10% p.a. in 8 years?

- A ₹6760
- B ₹6810
- C ₹6680
- D ₹6720

**Answer: D**

**Question 57**

An item is sold for ₹702 at a profit of ₹162. If an additional! profit of 10% is to be made, then the new selling price will be:

- A ₹756
- B ₹729
- C ₹810
- D ₹750

**Answer: A**

**SSC CHSL Prevoius Papers (DOWNLOAD PDF)**

**Question 58**

In an examination, the average score of students in a class who passed is 69 and that of who failed is 61. If the average score of all the students, who appeared in the examination is 66, then the percentage of students who passed is:

- A 37.5
- B 60
- C 62.5
- D 56

**Answer: C**

**Question 59**

A sum of ₹5200 is divided amongst A, B, C and D such that the ratio of shares of A and B is 2 : 3, that of B and C is 4: 5 and that of C and D is 1 : 2. What is the difference between the shares of B and D?

- A ₹1440
- B ₹1360
- C ₹1200
- D ₹1280

**Answer: A**

**Question 60**

A pipe can fill a tank in 18 hours. In how much time (in hours) will another pipe operating at one-third the efficiency of the first pipe fill a tank whose capacity is 50% of that of the first tank?

- A 36
- B 21
- C 45
- D 27

Answer: D

**SSC Stenographer Previous Papers (Download PDF)**

**Question 61**

The average of 20 numbers is 80. The average of first 10 numbers is 76.5 and that of next 7 numbers is 82. The 18<sup>th</sup> number is 3 more than the 19<sup>th</sup> number but 3 less than the 20<sup>th</sup> number. What is the average of 18<sup>th</sup> and 19<sup>th</sup> numbers?

- A 85
- B 88.5
- C 86
- D 85.5

Answer: D

**Question 62**

A train X travelling at 72 km/h crosses another train Y travelling at 63 km/h (in opposite direction) in 18 seconds. If the length of train Y is two-third the length of X, then length of train X is:

- A 300 m
- B 420 m
- C 405 m
- D 270 m

Answer: C

**Question 63**

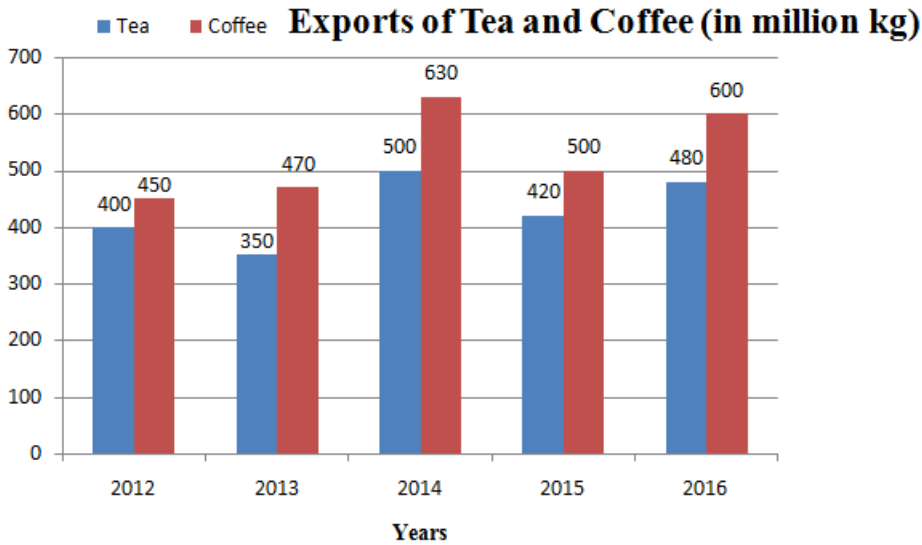
A sphere is inscribed in a cube. What is the ratio of the volume of the cube to the volume of the sphere?

- A  $6 : \pi$
- B  $8 : \pi$
- C  $11 : 2\pi$
- D  $9 : 2\pi$

Answer: A

Question 64

The given Bar Graph presents the Export of Tea and Coffee (in million kg) for the years 2012 to 2016.



What is the ratio of total export of tea in 2012, 2014 and 2015 to the total export of coffee in 2013 and 2014?

- A 10 : 9
- B 6 : 5
- C 9 : 10
- D 5 : 6

Answer: B

Question 65

A can do a piece of work in 15 days and B can do it in  $22\frac{1}{2}$  days. They worked together for 6 days and the remaining work was completed by C alone in 6 days. A, B and C together will do the same work in:

- A 8 days
- B 10 days
- C 6 days
- D 12 days

Answer: C

Question 66

The radius of a solid right circular cylinder is  $66\frac{2}{3}\%$  of its height. If height is h centimeters then its total surface area(in  $cm^2$ ) is:

- A  $\frac{20}{9} \pi h^2$
- B  $\frac{40}{9} \pi h^2$
- C  $\frac{44}{9} \pi h^2$
- D  $4\pi h^2$

Answer: A

## SSC MTS Previous Papers (DOWNLOAD PDF)

### Question 67

Let  $x$  be the median of data: 33, 42, 28, 49, 32, 37, 52, 57, 35, 41.

If 32 is replaced by 36 and 41 by 63, then the median of the data, so obtained, is  $y$ . What is the value of  $(x + y)$ ?

- A 78
- B 78.5
- C 79.5
- D 79

Answer: B

### Question 68

The value of  $(8 \div \frac{2}{3} \text{ of } \frac{4}{5}) \div (8 \times \frac{2}{3} \div \frac{4}{5})$  of  $(8 \div \frac{2}{3} \times \frac{4}{5})$  is:

- A  $21\frac{3}{5}$
- B  $7\frac{13}{16}$
- C 1
- D  $\frac{15}{64}$

Answer: D

### Question 69

What is the area (in  $\text{m}^2$ ) of a triangular field whose sides measure 25 m, 39 m and 56 m?

- A 210
- B 240
- C 420
- D 480

Answer: C

## SSC CGL Previous Papers (DOWNLOAD PDF)

### Question 70

A shopkeeper allows 10% discount on the marked price of an article and still makes a profit of 8%. If the marked price is ₹480, then what is the costprice (in ₹) of the article?

- A 350
- B 360
- C 420

D 400

Answer: D

Question 71

In a 60 liter solution of acid and water, the ratio of acid and water is 3 : 7. How much (in liter) acid is to be mixed in the solution so that the ratio of acid and water in the resulting solution is 1 : 2?

A  $6\frac{1}{2}$

B 6

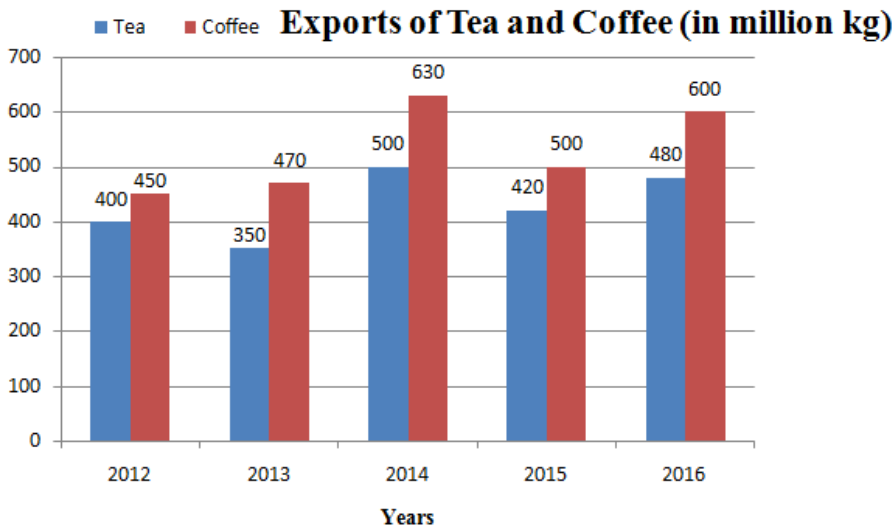
C 3

D 5

Answer: C

Question 72

The given Bar Graph presents the Export of Tea and Coffee (in million kg) for the years 2012 to 2016.



The number of years, in each of which the export of coffee is more than 20% as compared to the export of tea in that year is:

A 2

B 3

C 4

D 1

Answer: B

SSC CGL Free Mock Test (Latest Pattern)

Question 73

The value of  $165 - [135 - \{84 \div 4 \text{ of } 3 - (16 - 18 \div 3)\}]$  is:

A 81

B  $36\frac{1}{3}$



C 27

D 83

Answer: C

**Question 74**

If  $a : b = 2 : 3$ ,  $a : d = 3 : 4$ , and  $e : d = 3 : 5$ , then  $e : b = ?$

A 10 : 9

B 8 : 15

C 9 : 10

D 15 : 8

Answer: B

**Question 75**

In spite of an increase in price of a commodity by 20%, the overall expenditure on it increases by 12%. What is the percentage decrease in the quantity of commodity consumed?

A  $7\frac{1}{3}$

B  $7\frac{1}{2}$

C 8

D  $6\frac{2}{3}$

Answer: D

## SSC CHSL Free Mock Test (Latest Pattern)

### General knowledge

**Instructions**

For the following questions answer them individually

**Question 76**

Which of the following organism has a 2-Chambered heart?

A Humanbeings

B Sparrows

C Monkey

D Fishes

Answer: D

## SSC Stenographer Previous Papers (Latest Pattern)

**Question 77**

**Who is the Chairman of Monetary Policy Committee?**

- A Finance Minister of India
- B President of India
- C Governor of the Reserve Bank of India
- D Prime Minister of India

**Answer: C**

**Question 78**

**Who was awarded Sir Garfield Solers Trophy for ICC Cricketer of the year 2018?**

- A Steven Smith
- B Virat Kohli
- C Kane Williamson
- D Joe Root

**Answer: B**

**Question 79**

**State-owned Power Finance Corporation (PFC) completed the acquisition of majority stake in REC Ltd by transferring ..... crore to the government.**

- A ₹10,000
- B ₹12,000
- C ₹16,500
- D ₹14,500

**Answer: D**

**SSC GD Constable Free Mock Test (Latest Pattern)**

**Question 80**

**Who was felicitated with Japan's coveted 'Nikkei Asia Prize' for culture and community in 2018?**

- A Lal Krishna Advani
- B Bhupinder Hooda
- C Bindeshwar Pathak
- D Chetan Bhagat

**Answer: C**

**Question 81**

**Who has the final authority for making laws in India?**

- A Prime Minister
- B President
- C Parliament
- D Governor

**Answer: C**

**Question 82**

**What is the chemical name of Dry Ice?**

- A Oxidane
- B Nitrogen Oxide
- C Sulphur Dioxide
- D Carbon Oxide

**Answer: D**

**SSC MTS Free Mock Test (Latest Pattern)**

**Question 83**

**In which order were the states annexed by Britishers under Doctrine of Lapse?**

- A Nagpur - Satara - Jhansi
- B Udaipur - Jhansi-Nagpur
- C Jhansi - Satara - Nagpur
- D Satara - Udaipur - Jhansi

**Answer: D**

**Question 84**

**.....has been appointed as the Secretary General of United Nations on 1 January 2017.**

- A Ban Ki-moon
- B Antonio Guterres
- C Satya S. Tripathi
- D Michelle Bachelet

**Answer: B**

**Question 85**

**Which of these is the famous art form Karnataka that combines dance, music, dialogue, costume, make-up and stage techniques to create a unique experience?**

- A Yakshagana

- B Kalaripayattu
- C Kathakali
- D Ottam Thullal

Answer: A

## SSC CPO Free Mock Test (Latest Pattern)

### Question 86

The Mahalanobis Plan of development was adopted during which Five Year Plan?

- A Third
- B Fourth
- C First
- D Second

Answer: D

### Question 87

Who is the head of the State and is the highest formal authority in India?

- A Prime Minister
- B President
- C Parliament
- D Vice-President

Answer: B

### Question 88

Dendrites and Axon are parts of which cell?

- A Neuron
- B Nephron
- C White blood cell
- D Red blood cell

Answer: A

## SSC MTS Free Preparation App

### Question 89

In which city of India is the multi-art complex called Bharat Bhavan located? It was inaugurated by the then Prime Minister Mrs. Indira Gandhi in 1982.

- A Lucknow

- B Bhopal
- C Bangalore
- D Pune

**Answer: B**

**Question 90**

**Second Backward Classes Commission is also known as .....**

- A Mandal Commission
- B Tendulkar Commission
- C Nehru Commission
- D Ambedkar Commission

**Answer: A**

**Question 91**

**Son River which is one of the largest southern tributaries of Ganga originates in which state?**

- A Assam
- B West Bengal
- C Uttar Pradesh
- D Madhya Pradesh

**Answer: D**

**285 SSC Mocks - Just RS. 249**

**Question 92**

**Meenakshi Temple is located in which State?**

- A Andhra Pradesh
- B Kerala
- C Tamil Nadu
- D Karnataka

**Answer: C**

**Question 93**

**Who introduced Ryotwari System in India?**

- A Lord Irwin
- B Holt Mackenzie
- C Lord Cornwallis and Alexander Reed

D Alexander Reed and Thomas Munro

Answer: D

Question 94

Mirror used by dentist to see large images of teeth of patients is .....

- A ZigZag Mirror
- B Plane Mirror
- C Convex Mirror
- D Concave Mirror

Answer: D

### SSC Exam Free Videos (Youtube)

Question 95

Which of the following sport has NOT been played at the Olympics since 1900?

- A Cricket
- B Badminton
- C Hockey
- D Archery

Answer: A

Question 96

Himalayas run through how many states in India?

- A 7
- B 8
- C 5
- D 10

Answer: D

Question 97

Dhauladhar Range forms part of which Himatayas?

- A Lesser Himalayas
- B Greater Himalayas
- C Shiwaliks
- D Purvanchals

Answer: A

## SSC Study Material

### Question 98

What percent of energy is transmitted from one trophic level to another in a food chain?

- A 0.2
- B 0.1
- C 0.15
- D 0.05

Answer: B

### Question 99

Which of the following Traditional sports-State pair is INCORRECT?

- A Thang-ta - Manipur
- B Silambam - Madhya Pradesh
- C Mukna - Manipur
- D Gatka - Punjab

Answer: B

### Question 100

When did Alexander the Great die?

- A 323 BCE
- B 623 BCE
- C 423 BCE
- D 300 BCE

Answer: A

**SSC Daily Practice Set**

**SSC CHSL Previous Papers (DOWNLOAD PDF)**

**SSC Stenographer Previous Papers (Download PDF)**

**SSC GD Constable Previous Papers**

**SSC MTS Previous Papers (DOWNLOAD PDF)**

[SSC CGL Previous Papers \(DOWNLOAD PDF\)](#)

[SSC CGL Free Mock Test \(Latest Pattern\)](#)

[SSC CHSL Free Mock Test \(Latest Pattern\)](#)

[SSC Stenographer Previous Papers \(Latest Pattern\)](#)

[SSC GD Constable Free Mock Test \(Latest Pattern\)](#)

[SSC MTS Free Mock Test \(Latest Pattern\)](#)

[SSC CPO Free Mock Test \(Latest Pattern\)](#)

[SSC MTS Free Preparation App](#)

[285 SSC Mocks - Just RS. 249](#)

[SSC Exam Free Videos \(Youtube\)](#)

[SSC Study Material](#)

[SSC Daily Practice Set](#)

[SSC GK Free Tests](#)

[SSC GK Questions](#)

[Current Affairs Question and Answers \(Download PDF\)](#)

[Daily and Monthly Current Affairs \(Download PDF\)](#)