



## SSC MTS 13th August 2019 Shift-1

All rights reserved. No part of this publication may be reproduced, distributed, or transmitted in any form or by any means, electronic, mechanical, photocopying, recording or otherwise, or stored in any retrieval system of any nature without the permission of cracku.in, application for which shall be made to [support@cracku.in](mailto:support@cracku.in)

**Instructions**

For the following questions answer them individually

**Question 1**

Select the most appropriate option to substitute the underlined segment in the given sentence. If there is no need to substitute it, select No improvement.

The new traffic signals is not clear visible from a distance

- A are not clearly
- B is not clearly
- C are not clear
- D No improvement

**Answer: A**

**SSC CHSL Previous Papers (DOWNLOAD PDF)**

**Question 2**

Select the most appropriate word for the given group of words.

A large bundle bound for storage or transport

- A Bale
- B Bevy
- C Barrel
- D Bunch

**Answer: A**

**Question 3**

Select the most appropriate synonym of the given word.

**Fundamental**

- A Extra
- B Secondary
- C Basic
- D Trivial

**Answer: C**

**Question 4**

Select the correctly spelt word.

- A Essencial
- B Essentail
- C Essential

D Essensial

Answer: C

## SSC Stenographer Previous Papers (Download PDF)

### Instructions

Select the most appropriate option to substitute the underlined segment in the given sentence. If there is no need to substitute it, select No improvement.

### Question 5

Shakiba is a smallest of the two girls.

A the smaller

B more small

C No improvement

D the small

Answer: A

### Question 6

Rashi hasn't eaten everything from yesterday.

A anything since

B No improvement

C nothing along

D something for

Answer: A

### Instructions

For the following questions answer them individually

### Question 7

Select the most appropriate option to fill in the blank and make a grammatically correct sentence.

The vase broke ..... pieces when Simran dropped it.

A into

B from

C in

D among

Answer: A

## SSC GD Constable Previous Papers

### Question 8

Select the correctly spelt word.

- A Scientific
- B Scientefic
- C Sceintific
- D Scienctific

**Answer: A**

**Question 9**

Select the most appropriate antonym of the word.

**Confront**

- A Meet
- B Oppose
- C Encounter
- D Avoid

**Answer: D**

**Question 10**

Select the most appropriate meaning of the given idiom.

**Far cry from**

- A To be very different from
- B To be away from dear ones
- C To be sad about past things
- D To cry over small things

**Answer: A**

## SSC MTS Previous Papers (DOWNLOAD PDF)

**Question 11**

Select the most appropriate synonym of the given word.

**Detain**

- A Allow
- B Delay
- C Advance
- D Permit

**Answer: B**

**Instructions**

Select the most appropriate wordtofill in the blank and make a meaningful sentence.

**Question 12**

The development of real estate has ..... impacted the environment.

- A adversely
- B conveniently
- C positively
- D narrowly

**Answer: A**

**Question 13**

Be careful not to drop this glass case; it's very .....

- A fragile
- B smooth
- C rigid
- D hard

**Answer: A**

**SSC CGL Previous Papers (DOWNLOAD PDF)**

**Instructions**

For the following questions answer them individually

**Question 14**

Select the most appropriate meaning of the given idiom.

**Cry over spilt milk**

- A complain about being forced to drink milk
- B regret about something that happened and cannot be changed
- C cry too much over a petty issue
- D unnecessarily worry about the future

**Answer: B**

**Question 15**

Identify the segment in the sentence which contains the grammatical error.

**They have been living in Boston from ten years.**

- A been living
- B They have
- C from ten years
- D in Boston

**Answer: C**

**Question 16**

Select the most appropriate option to fill in the blank and make a grammatically correct sentence.  
London is ..... European city.

- A the
- B a
- C No article
- D an

**Answer: B**

**SSC CGL Free Mock Test (Latest Pattern)**

**Instructions**

Identify the segment in the sentence which contains the grammatical error.

**Question 17**

Sakshi is as smarter as any other child in the class.

- A in the class
- B any other child
- C Sakshi is
- D as smarter as

**Answer: D**

**Question 18**

Grandmother was knitting a sweater for his grand-daughter.

- A sweater for his
- B grand-daughter
- C Grandmother was
- D knitting a

**Answer: A**

**Instructions**

For the following questions answer them individually

**Question 19**

Select the most appropriate word for the given group of words.  
One who studies the evolution of mankind

- A Dermatologist
- B Anthropologist
- C Sociologist

D Archaeologist

Answer: B

## SSC CHSL Free Mock Test (Latest Pattern)

Question 20

Select the most appropriate antonym of the word.

Quell

A Entire

B Deny

C Reduce

D Agitate

Answer: D

Instructions

In the following passage some words have been deleted. Fill in the blanks with the help of the alternatives given. Select the most appropriate option for each blank.

**Comprehension:**

Rama was a naughty boy(1)..... lived in the village of Tenali. His mother did not (2)..... what to do with him since he (3)..... to study or do any work. One day (4)..... took him to see a Guru. She told the (5)..... man that she wanted him to take Rama under his guardianship.

Question 21

Select the most appropriate option to fill in blank No.1.

A who

B he

C that

D which

Answer: A

Question 22

Select the most appropriate option to fill in blank No.2.

A knowing

B knew

C know

D knows

Answer: C

## SSC Stenographer Previous Papers (Latest Pattern)

Question 23

Select the most appropriate option to fill in blank No.3.

- A reminded
- B wished
- C refused
- D denied

Answer: C

Question 24

Select the most appropriate option to fill in blank No.4.

- A he
- B she
- C her
- D they

Answer: B

Question 25

Select the most appropriate option to fill in blank No.5.

- A learned
- B lively
- C lonely
- D lazy

Answer: A

## SSC GD Constable Free Mock Test (Latest Pattern)

### Reasoning

#### Instructions

For the following questions answer them individually

Question 26

Select the option that is related to the fourth term in the same way as the first term is related to the second term.

DFIM : CEHL :: ? : KMPT

- A LNUQ
- B JLOS
- C LNQU
- D UVWL

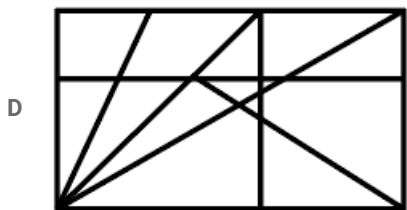
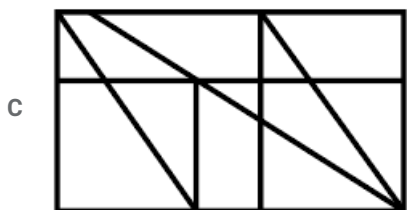
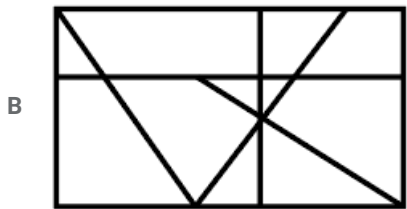
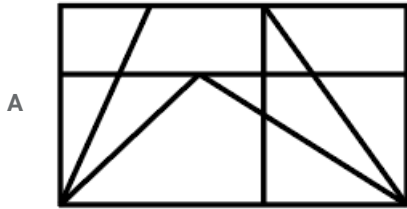


Answer: C

## SSC MTS Free Mock Test (Latest Pattern)

Question 27

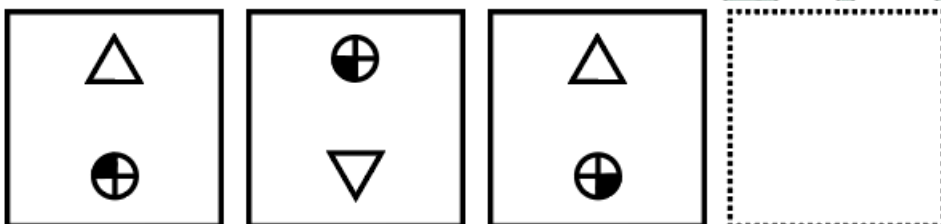
Select the option in which the given figure is embedded. (Rotation is not allowed)

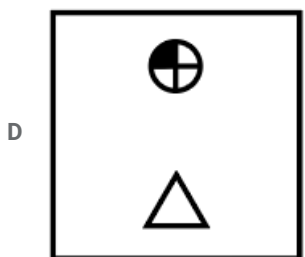
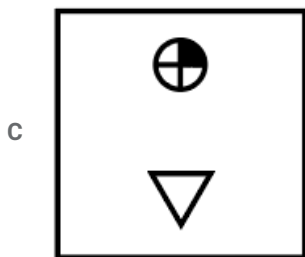
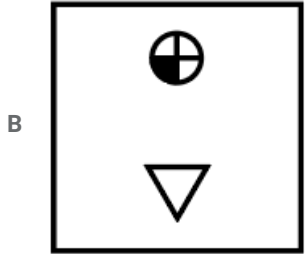
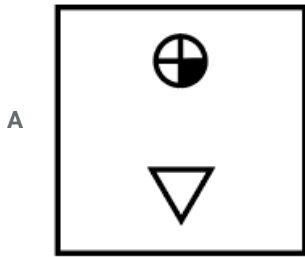


Answer: C

Question 28

Which of the following answer figure completes the series of the question figure?





Answer: C

Question 29

In a certain code language, if the word 'CLASSIFY' is coded as 'XOZHHRUB', then how is the word 'MODIFY' coded in that language?

A RUBNLW

B RUBNWL

C NLRUBW

D NLWRUB

Answer: D

## SSC CPO Free Mock Test (Latest Pattern)

Question 30

If in a certain code language 'HACB' is written as '8132', then how will 'DEFA' be written in that language?

A 4651

B 4156

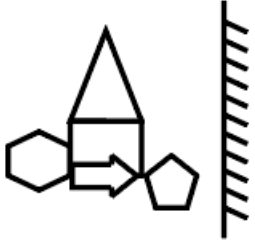
C 4561

D 5641

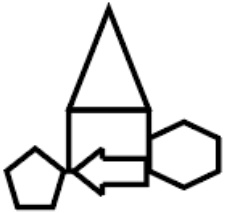
Answer: C

Question 31

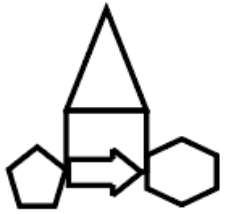
Choose the option that most closely resembles the mirror image of the given figure when mirror is placed at right side.



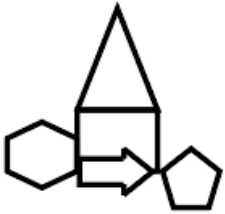
A



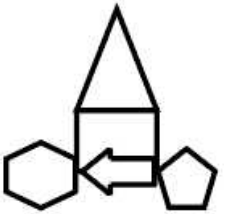
B



C



D



Answer: A

Question 32

If in a certain code language 'RUN' is written as '202316' and 'PEN' is written as '18716', then how will 'RANSOM' be coded in that language?

A 1841491315

B 18114191315

C 20114131915

D 20316211715

Answer: D

## SSC MTS Free Preparation App

### Question 33

Six friends A, B, C, D, E and F are standing in a row facing North. B is exactly in between and D. E is standing exactly in between A and C. A is not a neighbor of D and F. C is not a neighbor of D but immediate right of F. C is standing in between which of the following?

A E and F

B D and F

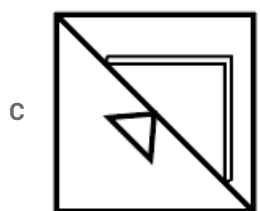
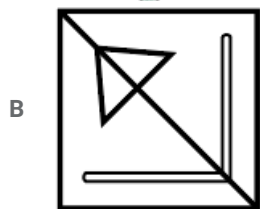
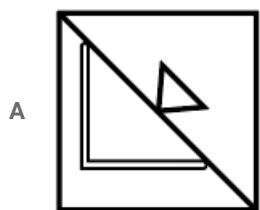
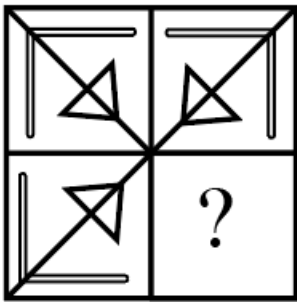
C E and B

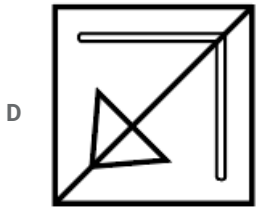
D A and E

Answer: A

### Question 34

Study the given pattern carefully and select the figure that will complete the pattern given in the question figure.





Answer: B

Question 35

Select the number that can replace the question mark (?) in the following series.  
423, 407, 439, 391, 455, ?

A 360

B 375

C 420

D 365

Answer: B

**285 SSC Mocks - Just RS. 249**

Question 36

Select the correct option that will fill in the blank and complete the series.  
10, 17, 26, 37, .....

A 50

B 54

C 49

D 52

Answer: A

Question 37

'Furniture' is related to 'Carpenter' in the same way as 'Garment' is related to '.....'!

A Black smith

B Tailor

C Cobbler

D Butcher

Answer: B

Question 38

In the following question, select the number which can be placed at the sign of question mark (?) from the given alternatives.

6	13	51
4	7	29
19	11	?

A 71

B 16

C 61

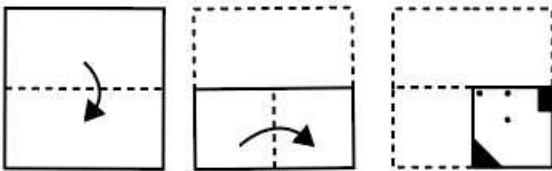
D 17

Answer: A


SSC Exam Free Videos (Youtube)

Question 39


A piece of paper is folded and cut as shown below in the question figures. Select from the given answer figures, how it will appear when unfolded.




A

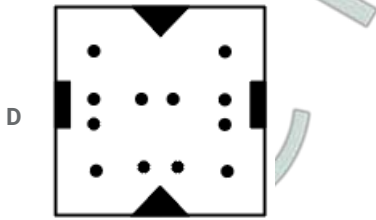


B



C





Answer: C

Question 40

Eight boys P, Q, R, S, T, U, V and W are sitting in a circular table.

P and Q are sitting in front of each other.

S is sitting second from the right of P and is sitting second to the right of Q.

T and W are sitting in front of each other.

R is sitting between P and V.

How many boys are sitting between U and V, when counted from the right of U?

A Four

B Two

C Five

D Three

Answer: B

Question 41

The statements below are followed by two conclusions labelled I and II. Assuming that the information in the statements is true, even if it appears to be at variance with generally established facts, decide which conclusion(s) logically and definitely follow(s) from the information given in the statements.

Statements:

I. Some cups are glasses.

II. No plate is cup as well as glass.

Conclusions:

I. Some cups are plates.

II. All glasses are not plates.

A Only conclusion II follows

B Either conclusion I or conclusion II follows.

C Neither conclusion I nor conclusion II follow.

D Only conclusion I follows

Answer: A

## SSC Study Material

Question 42

If the two signs, '+' and '×' and two numbers '2 and 8' are interchanged, what will be the value of the following equation?

$$4 \times 8 \div 2 = ?$$

A 15

B 14

C 16

D 8

Answer: C

**Question 43**

Compare the salary of employees B, R, G, A, and M in relation to each other:

M get more salary than A and G.

R's salary is less than three persons.

B's salary is the lowest.

Whose salary is the second lowest?

A R

B G

C A

D M

Answer: A

**Question 44**

Find out the two signs to be interchanged for making following equation correct:

$$6 \div 5 + 12 \times 4 - 7 = 26$$

A  $\div$  and  $\times$

B  $\div$  and  $-$

C  $+$  and  $-$


D  $+$  and  $\times$

Answer: A

## SSC Daily Practice Set

**Question 45**

Select the set of classes that best represents the given Venn diagram.



A Water, River, Dam

B Asia, India, Pune

C India, Mumbai, Delhi

D State, Sea, District

Answer: B



**Question 46**

'Candle' is related to 'Wick' in the same way as 'Pen' is related to '.....'

- A Inkpot
- B Nib
- C Light
- D Pencil

**Answer: B**

**Question 47**

If "LEMON' is coded as 'NCOMP", then 'MANGO' is coded as .....

- A RZPES
- B OYPEQ
- C NDRHP
- D OZRDS

**Answer: B**

## SSC GK Free Tests

**Question 48**

Select the option that is related to the fourth term in the same way as the first term is related to the second term.  
16 : 272 :: ? : 380

- A 21
- B 19
- C 23
- D 17

**Answer: B**

**Question 49**

Which letter will replace the question mark (?) in the following series?  
FLO ,H?Q, JPS, LRU

- A P
- B I
- C N
- D M

**Answer: C**

**Question 50**

Read the given statement and conclusions carefully and decide which of the conclusions logically follow(s) from the statement.

**Statement:**

Sama Veda is believed to be written around 200 BC.

**Conclusions:**

- I. Sama Veda is one of the oldest books in history.
- II. Sama Veda is the oldest book in history

- A Neither conclusion I nor conclusion II follow.
- B Only Conclusion I follows.
- C Either conclusion I or conclusion II follows.
- D Only Conclusions II follows.

**Answer: B**

**SSC GK Questions**

**Quant**

**Instructions**

For the following questions answer them individually

**Question 51**

Pipe A can fill a tank in 36 minutes and Pipe B can empty the tank in 45 minutes. If both the pipes are opened simultaneously, then the time (in hours) to fill the tank to half its capacity is:

- A 1.5
- B 2
- C 1.75
- D 1.25

**Answer: A**

**Current Affairs Question and Answers (Download PDF)**

**Question 52**

The Table shows the number of candidates appearing for an interview for a post in six Banks (H, I, J, K, L, M) and percentage of qualifying candidates.

Banks	Candidates Appearing	% of Candidates Qualifying
H	1500	14
I	2200	26
J	3000	17
K	980	20
L	1200	28
M	2500	21

The number of candidates who did not qualify in bank K was approximately what percent (correct to nearest integer) of the candidates who did not qualify in bank I?

- A 42
- B 44
- C 48
- D 51

Answer: C

**Question 53**

If  $4A = 6B = 5C$ ; then  $A : B : C$  is:

- A 15 : 10 : 12
- B 15 : 20 : 24
- C 24 : 20 : 15
- D 20 : 15 : 24

Answer: A

**Question 54**

A train travelling at the speed of 108 km/h crosses a pole in 32 seconds. The length (in m) of the train is:

- A 1024
- B 1240
- C 960
- D 1200

Answer: C

## Daily and Monthly Current Affairs (Download PDF)

**Question 55**

If LCM of two numbers is 231, HCF of two numbers is 11 and one number is 77, the other number is:

- A 33
- B 47
- C 37
- D 57

Answer: A

**Question 56**

Five years ago, the average age of four girls, was 7 years. A new girl is included then the average present age becomes 13 years. The present age of the new girl is:

- A 16 years

B 19 years

C 17 years

D 14 years

Answer: C

Question 57

Seventy eight is divided into two parts such that four times the first part and five times the second part are in the ratio 14 : 15. The first part is:

A 30

B 48

C 42

D 36

Answer: C

## SSC CHSL Previous Papers (DOWNLOAD PDF)

Question 58

The length, breadth and height of a cuboid are 18 cm, 24 cm and 4 cm respectively. The volume of cube is equal to the volume of given cuboid. The side of the cube is:

A 9 cm

B 12 cm

C 16 cm

D 8 cm

Answer: B

Question 59

A man is walking at a speed of 12 km per hour. After every kilometre, he takes rest for 4 minutes. How much time (in minutes) will he take to cover a distance of 8 kilometres?

A 60

B 68

C 64

D 72

Answer: B

Question 60

The median of the given data  $\frac{1}{2}, \frac{2}{7}, \frac{3}{4}, \frac{1}{3}, \frac{5}{8}$  is:

A  $\frac{3}{4}$

B  $\frac{1}{3}$

C  $\frac{2}{7}$

D  $\frac{1}{2}$

Answer: D

## SSC Stenographer Previous Papers (Download PDF)

### Question 61

A is twice as good at writing a novel as B. Together they can finish writing the novel in 24 days. In how many days can A alone write the novel?

A 32

B 18

C 36

D 24

Answer: C

### Question 62

The cost price of an article is ₹480. It is to be sold at a profit of 12.5%. What is the selling price of the article?

A ₹560

B ₹540

C ₹492.5

D ₹500

Answer: B

### Question 63

The simple interest on an amount of ₹2800 at the end of 3 years is ₹420. What would be the simple interest on an amount of ₹3200 for the same rate and the same period?

A ₹640

B ₹480

C ₹440

D ₹560

Answer: B

## SSC GD Constable Previous Papers

### Question 64

A buys water cooler at some price and sells it to B at 20% profit. B sells it to C at 10% profit. If C bought it for ₹6666, then the cost price for B is:

- A ₹5600
- B ₹6400
- C ₹6060
- D ₹5400

Answer: C

**Question 65**

If  $A : B = 3 : 4$ ,  $B : C = 2 : 3$ , the value of  $A + B : B + C : C + A$  is:

- A 3 : 4 : 6
- B 5 : 6 : 7
- C 7 : 5 : 6
- D 7 : 10 : 9

Answer: D

**Question 66**

The Table shows the number of candidates appearing for an interview for a post in six Banks (H, I, J, K, L, M) and percentage of qualifying candidates.

Banks	Candidates Appearing	% of Candidates Qualifying
H	1500	14
I	2200	26
J	3000	17
K	980	20
L	1200	28
M	2500	21

What was the respective ratio of the number of candidates who qualified in bank H to the number of candidates who qualified in bank L?

- A 5 : 6
- B 3 : 7
- C 2 : 5
- D 5 : 8

Answer: D

**SSC MTS Previous Papers (DOWNLOAD PDF)**

**Question 67**

What percent of 5.6 kg is 140 gram?

- A 1.8
- B 1.5

C 2.5

D 2

Answer: C

Question 68

A cone has a radius of 20 cm and height 21 cm, the total surface area (in  $\text{cm}^2$ ) of the cone is: (Take  $\pi = \frac{22}{7}$ )

A 3080

B 3240

C 2920

D 3160

Answer: A

Question 69

An item is marked 37.5% above the cost price. If a discount of 9.09% is allowed, then the profit percentage (correct to nearest integer) is:

A 10

B 25

C 20

D 15

Answer: B

### SSC CGL Previous Papers (DOWNLOAD PDF)

Question 70

The compound interest on an amount of ₹5120 at the rate of 12.5% (compounded annually) for 3 years is:

A ₹1960

B ₹2120

C ₹2280

D ₹2170

Answer: D

Question 71

The value of  $(2\frac{1}{6} + 1\frac{13}{18} - \frac{1}{6}) \times 16 \div 4$  is:

A  $41\frac{1}{72}$

B 42

C 63

D  $\frac{134}{9}$

Answer: D

Question 72

The volume of prism is  $288 \text{ cm}^3$  and height is 24 cm. The base area (in  $\text{cm}^2$ ) of the prism is:

A 14

B 15

C 10

D 12

Answer: D

SSC CGL Free Mock Test (Latest Pattern)

Question 73

A total of 57 sweets were distributed among 10 children such that each girl gets 6 sweets and each boy gets 5 sweets. The number of boys is:

A 6

B 4

C 5

D 3

Answer: D

Question 74

The value of x in the given equation  $23^2 + \sqrt{x} = 625$

A 9124

B 9216

C 9576

D 9028

Answer: B

Explanation:

$$529 + \sqrt{x} = 625$$

$$625 - 529 = \sqrt{x}$$

$$96 = \sqrt{x}$$

$$x = 96 \times 96$$

$$x = 9216$$



Question 75

The Table shows the number of candidates appearing for an interview for a post in six Banks (H, I, J, K, L, M) and percentage of qualifying candidates.

Banks	Candidates Appearing	% of Candidates Qualifying
H	1500	14
I	2200	26
J	3000	17
K	980	20
L	1200	28
M	2500	21

What was the average number of candidates who appeared for the interview in bank H, J and L together?

- A 2000
- B 1500
- C 1800
- D 1900

Answer: D

## SSC CHSL Free Mock Test (Latest Pattern)

### General knowledge

**Instructions**

For the following questions answer them individually

**Question 76**

Which of the following is NOT a communicable disease?

- A Chickenpox
- B Tuberculosis
- C Diabetes
- D Cholera

Answer: C

## SSC Stenographer Previous Papers (Latest Pattern)

**Question 77**

Which of the following rivers is NOT a part of Himalayan drainage system?

- A Godavari
- B Ganga
- C Brahmaputra
- D Indus

**Answer: A**

**Question 78**

Which Indian actor has been appointed as Brand Ambassador by 'Phone Pe' in March 2019?

- A Aamir Khan
- B Salman Khan
- C Amitabh Bachchan
- D Shahrukh Khan

**Answer: A**

**Question 79**

Which of the following pillars depict rock-cut pillars?

- A Gothic Pillars
- B Mauryan Pillars
- C Persian Pillars
- D Achamenian Pillars

**Answer: B**

## SSC GD Constable Free Mock Test (Latest Pattern)

**Question 80**

Pricing Policy of Minimum Support Price follows which approach?

- A Investment plus approach
- B Land plus approach
- C Loan plus approach
- D Cost plus approach

**Answer: D**

**Question 81**

What is the SI unit of momentum?

- A Kg m
- B Joule
- C Ampere
- D Kg m/sec

**Answer: D**

**Question 82**

What is the state of matter formed by cooling a gas of extremely low density to Super low temperatures?

- A Solid
- B Liquid
- C Plasma
- D Bose-Einstein Condensate

**Answer: D**

**SSC MTS Free Mock Test (Latest Pattern)**

**Question 83**

The famous Lingraja Temple is located in which city?

- A Bhubaneswar
- B Ujjain
- C Bhopal
- D Kolkata

**Answer: A**

**Question 84**

Which of the following is NOT a colour in the Olympic Ring?

- A Pink
- B Green
- C Red
- D Blue

**Answer: A**

**Question 85**

The decisions of the Supreme Court of India are binding on .....

- A All States & UT except J & K
- B All Courts in India
- C Territory of individual state
- D Only District Courts

**Answer: B**

**SSC CPO Free Mock Test (Latest Pattern)**

**Question 86**

**In the context of the Physical features of India, what is kayal?**

- A Alluvial floodplains in North East
- B Lake formed by tectonic activity
- C Thick deposits of glacial clay
- D Backwaters

**Answer: D**

**Question 87**

**Which part of human respiratory system provides surface for exchange of gases?**

- A Bronchi
- B Alveoli
- C Trachea
- D Bronchioles

**Answer: B**

**Question 88**

**Tropical Evergreen Forests are NOT found in which part of India?**

- A Andaman & Nicobar
- B North Eastern Region
- C Western Ghats
- D Eastern Ghats

**Answer: D**

**SSC MTS Free Preparation App**

**Question 89**

**Which is the highest Court of Appeal in India?**

- A Consumer Court
- B High Court
- C District Court
- D Supreme Court

**Answer: D**

**Question 90**

**During the reign of Iltutmish, special slaves were purchased for military service known as .....**

- A Muqtis
- B Iqtadar
- C Samanta
- D Bandagan

**Answer: D**

**Question 91**

**After the revolt of 1857, which of the following changes were NOT introduced by the British Government in India?**

- A Powers of East India Company was transferred to British Crown
- B Governor General of India became Viceroy of India
- C Secretary of State for India was appointed
- D Proportion of India Soldiers in the British army were increased

**Answer: D**

**285 SSC Mocks - Just RS. 249**

**Question 92**

**Which Education Commission argued that European learning would improve the moral character of Indians?**

- A Irwin Report
- B Wood's Despatch
- C Linlithgow Commission
- D Ramsay Macdonald Award

**Answer: B**

**Question 93**

**Which human organ is responsible for removing nitrogenous waste from the human body?**

- A Pancreas
- B Lungs
- C Kidney
- D Liver

**Answer: C**

**Question 94**

**Which of the following is NOT a weight division in boxing?**

- A Middle weight
- B Heavy weight

- C Light weight
- D Under weight

Answer: D

## SSC Exam Free Videos (Youtube)

### Question 95

Tripitaka is the holy book of which of the following religions?

- A Judaism
- B Buddhism
- C Islam
- D Jainism

Answer: B

### Explanation:

The sacred book of **Buddhism** is called the Tripitaka (called Tipitaka in Pali)

### Question 96

What is the amount allocated to Mahatma Gandhi National Rural Employment Guarantee Act (MGNREGA) Scheme in the Union Budget for 2019-20?

- A ₹60000 crore
- B ₹50000 crore
- C ₹70000 crore
- D ₹80000 crore

Answer: A

### Question 97

The famous cartoon character called 'Gattu' was created by the legendary cartoonist RK Laxman for which company?

- A Amul
- B Nirma
- C Asian Paints
- D Onida

Answer: C

## SSC Study Material

### Question 98

Right to Health is guaranteed to every citizen of India under which article?

- A Article 20

- B Article 21
- C Article 19
- D Article 21-A

**Answer: B**

**Question 99**

**Which film won Golden Peacock Award at IFFI 2018?**

- A Tumhari Sulu
- B Walking with the wind
- C Sealed lips
- D Donbass

**Answer: D**

**Question 100**

**First Indian woman to successfully scale Mount Makalu is .....**

- A Priyanka Mohite
- B Bhawana Kanth
- C Kami Rita Sherpa
- D Gauri Sawant

**Answer: A**

## **SSC Daily Practice Set**

**SSC CHSL Previous Papers (DOWNLOAD PDF)**

**SSC Stenographer Previous Papers (Download PDF)**

**SSC GD Constable Previous Papers**

**SSC MTS Previous Papers (DOWNLOAD PDF)**

**SSC CGL Previous Papers (DOWNLOAD PDF)**

**SSC CGL Free Mock Test (Latest Pattern)**

**SSC CHSL Free Mock Test (Latest Pattern)**

[\*\*SSC Stenographer Previous Papers \(Latest Pattern\)\*\*](#)

[\*\*SSC GD Constable Free Mock Test \(Latest Pattern\)\*\*](#)

[\*\*SSC MTS Free Mock Test \(Latest Pattern\)\*\*](#)

[\*\*SSC CPO Free Mock Test \(Latest Pattern\)\*\*](#)

[\*\*SSC MTS Free Preparation App\*\*](#)

[\*\*285 SSC Mocks - Just RS. 249\*\*](#)

[\*\*SSC Exam Free Videos \(Youtube\)\*\*](#)

[\*\*SSC Study Material\*\*](#)

[\*\*SSC Daily Practice Set\*\*](#)

[\*\*SSC GK Free Tests\*\*](#)

[\*\*SSC GK Questions\*\*](#)

[\*\*Current Affairs Question and Answers \(Download PDF\)\*\*](#)

[\*\*Daily and Monthly Current Affairs \(Download PDF\)\*\*](#)