



SSC MTS 19th August 2019 Shift-2

All rights reserved. No part of this publication may be reproduced, distributed, or transmitted in any form or by any means, electronic, mechanical, photocopying, recording or otherwise, or stored in any retrieval system of any nature without the permission of cracku.in, application for which shall be made to support@cracku.in

Instructions

For the following questions answer them individually

Question 1

Select the most appropriate synonym of the given word.

ANTHOLOGY

- A Legacy
- B Currency
- C Collection
- D Inheritance

Answer: C

SSC CHSL Previous Papers (DOWNLOAD PDF)

Question 2

Select the most appropriate meaning of the given idiom.

Get the ball rolling

- A To spin the ball
- B To start doing something
- C To have an active lifestyle
- D To cheer someone up

Answer: B

Question 3

Select the most appropriate antonym of the word.

ABUNDANT

- A Plentiful
- B Ample
- C Copious
- D Scarce

Answer: D

Question 4

Select the most appropriate option to substitute the underlined segment. If there is no need to substitute it, select No improvement
Emperor Ashoka have conquered Kalinga before he embraced Buddhism.

- A No Improvement
- B had conquered
- C was conquering

D has conquered

Answer: B

SSC Stenographer Previous Papers (Download PDF)

Question 5

Select the most appropriate synonym of the given word.

ABSOLVED

A Boycotted

B Punished

C Soolded

D Pardoned

Answer: D

Question 6

Select the correctly spelt word.

A Occurrence

B Occassion

C Ommision

D Ocoupasion

Answer: A

Question 7

Select the most appropriate option to substitute the underlined segment. If there is no need to substitute it, select No improvement
Whom you think, will be selected as the Head Boy of the school?

A Which you thought

B Whom you thinking

C No Improvement

D Whe do you think

Answer: D

SSC GD Constable Previous Papers

Question 8

Select the correctly spelt word.

A Pompus

B Possession

C Potantial

D Possibility

Answer: B

Question 9

Select the most appropriate word for the given group of words.
A person who is recovering after an illness or medical treatment.

A Athlete

B Convalescent

C Senile

D Altruist

Answer: B

Question 10

Identify the segment in the sentence which contains the grammatical error.
Platinum is costlier than any other metals found on earth.

A found on earth

B Platinum is

C any other metals

D costlier than

Answer: C

SSC MTS Previous Papers (DOWNLOAD PDF)

Question 11

Select the most appropriate option to fill in the blank and make a grammatically correct sentence.
Our neighbours threatened to call the police if we _____ stop the noise.

A hasn't

B haven't

C didn't

D don't

Answer: C

Question 12

Select the most appropriate antonym of the word.
TREACHEROUS

A Faithful

B Deceitful

C Distoyal

D Dangerous

Answer: A

Question 13

Select the most appropriate word to fill in the blank and make a meaningful sentence.
He was physically strong and became a climber of high rocky cliffs.

A daring

B timid

C fearful

D unwilling

Answer: A

SSC CGL Previous Papers (DOWNLOAD PDF)

Instructions

In the following passage some words have been deleted. Fill in the blanks with the help of the alternatives given. Select the most appropriate option for each blank.

Comprehension:

A century ago the process of choosing a career was a (1)..... matter than it is today. A boy often (2)..... in his father's footsteps. A girl learned (3)..... household skills that helped her to (4)..... a good wife and mother. Now-a-days (5)..... people grow up in a much freer society where they enjoy unlimited career opportunities.

Question 14

Select the most appropriate option to fill in blank No.1.

A simple

B simpler

C more simpler

D simplest

Answer: B

Question 15

Select the most appropriate option to fill in blank No.2.

A worked

B chased

C chose

D followed

Answer: D

Question 16

Select the most appropriate option to fill in blank No.3.

- A an
- B each
- C a
- D the

Answer: D

SSC CGL Free Mock Test (Latest Pattern)

Question 17

Select the most appropriate option to fill in blank No.4.

- A becomes
- B becoming
- C became
- D become

Answer: D

Question 18

Select the most appropriate option to fill in blank No.5.

- A young
- B old
- C sensible
- D mature

Answer: A

Instructions

For the following questions answer them individually

Question 19

Identify the segment in the sentence which contains the grammatical error. If no error then select 'No error'.

She wanted to bake a cake for both her brothers.

- A She wanted
- B No error
- C to bake a cake
- D for both her brothers

Answer: B

SSC CHSL Free Mock Test (Latest Pattern)

Question 20

Select the most appropriate word to fill in the blank and make a meaningful sentence.
He had his own line of thinking and would defend his views with ____.

- A conversion
- B conviction
- C convention
- D conversation

Answer: B

Question 21

Select the most appropriate option to substitute the underlined segment. If there is no need to substitute it, select No improvement
I courteously asked her where was she going but she did not reply.

- A was she gone
- B No improvement
- C she was going
- D will she go

Answer: C

Question 22

Select the most appropriate meaning of the given idiom.
A change of heart

- A To have a heart transplant
- B A change in one's opinion
- C To have a second opinion
- D To fail to fulfil a promise

Answer: B

SSC Stenographer Previous Papers (Latest Pattern)

Question 23

Select the most appropriate word for the given group of words.
The fear of being enclosed in a small space or room

- A Claustrophobia
- B Acrophobia
- C Aerophobia
- D Hydrophobia

Answer: A

Question 24

Select the most appropriate option to fill in the blank and make a grammatically correct sentence.
I was annoyed because the decision without my knowledge.

- A had made
- B was made
- C were made
- D was make

Answer: B

Question 25

Identify the segment in the sentence which contains the grammatical error.
He sat in his stool and shut his eyes to recollect what work he had for the day.

- A he had for the day
- B He sat in his stool
- C to recollect what work
- D and shut his eyes

Answer: B

SSC GD Constable Free Mock Test (Latest Pattern)

Reasoning

Instructions

For the following questions answer them individually

Question 26

- (i) Five boys A, B, C, D, E are sitting in a park in a circle.
- (ii) A is facing south-west and D is facing south-east.
- (iii) B and E are right opposite A and D respectively.
- (iv) C is equidistant between D and B.

Which direction is C facing?

- A South
- B West
- C North
- D East

Answer: D

SSC MTS Free Mock Test (Latest Pattern)

Question 27

Among A, B, C, D and E each having a different weight, D is heavier than A and E, while is lighter than C who is lighter than E. Who among them is the heaviest?

A C

B B

C A

D D

Answer: D

Question 28

Select the option that is related to the Fourth term in the same way as the first term is related to the second term.
Pinna : Ears :: ? : Eyes

A Vision

B Cornea

C Corns

D Anvil

Answer: B

Question 29

Which sequence of mathematical symbols can replace * in the given equation:
 $8 * 5 * 9 * 31$

A $\times, -, =$

B $-, =, \times$

C $=, \times, -$

D $-, \times, =$

Answer: A

SSC CPO Free Mock Test (Latest Pattern)

Question 30

Select the correct option that will complete the series.
15, 31, ?, 127, 255

A 51

B 47

C 63

D 89

Answer: C

Question 31

'Eraser' is related to the 'Stationery' in the same way as 'Saucer' is related to '.....'

- A Table
- B Football
- C Tea
- D Crockery

Answer: D

Question 32

The statements below are followed by two conclusions labelled I and II. Assuming that the information in the statements is true, even if it appears to be at variance with generally established facts, decide which conclusion(s) logically and definitely follow(s) from the information given in the statements.

Statements:

- I. All dens are hens.
- II. All pens are hens.
- III. All yens are hens.

Conclusions:

- I. Some pens are dens.
- II. Some yens are dens.

- A Only conclusion I follows
- B Either conclusion I or II follows
- C Only conclusion II follows
- D Neither Conclusion I nor II follows


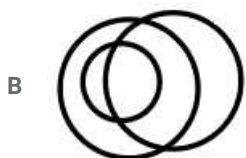
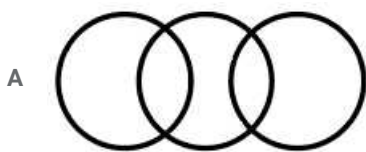
Answer: D

SSC MTS Free Preparation App

Question 33

Select the Venn diagram that best represents the given set of classes.

Silver, gold, jewellery



D



Answer: A

Question 34

Select the option that is related to the third term in the same way as the second term is related to the first term.
AJET : CHGR :: GKQN : ?

A IISL

B SIIL

C IILS

D ISIL

Answer: A

Question 35

Select the letter-Cluster that can replace the question mark(?) in the following series.
ACZ, EGV, HJS, JLQ, ?

A LMO

B LNO

C KNO

D KMP

Answer: D

285 SSC Mocks - Just RS. 249

Question 36

Select the option that is related to the third term in the same way as the second term is related to the first term.
4 : 60 :: 5 : ?

A 120

B 110

C 116

D 115

Answer: A

Question 37

In a certain code language, 'BREAK' is written as '23615455'. How is 'XEROX' written in that code language?

A 2410546024

B 2410546012

C 24105460120

D 24154610

Answer: C

Question 38

In a code language, 'CERTAIN' is written as 'XVIGZRM'. How will 'ACQUIRE' be written as in that language?

A ZXJFIRV

B ZXJFRVI

C ZXJFRIV

D ZXJRFIV

Answer: C

SSC Exam Free Videos (Youtube)

Question 39

In a certain code 'FAIL' is written as 'IFLA' and 'SOUL' is written as 'USLO'. How is 'DUST' written in that code?

A SOTU

B STDU

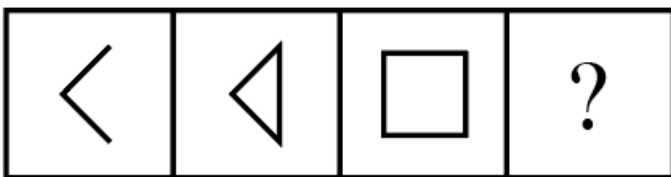
C STUD

D SDUT

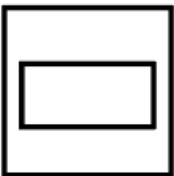
Answer: A

Question 40

Select the figure that will come next in the following series.

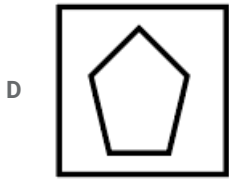


A



B





Answer: D

Question 41

If P denotes ' \div ', Q denotes '+', R denotes ' \times ' and S denotes '-', then what is the value of the following equation?
 $100\ S\ 12\ P\ 72\ R\ 6\ Q\ 5 = ?$

- A 105
- B 140
- C 134
- D 104

Answer: D

SSC Study Material

Question 42

In the following question, which of the two signs will be interchanged to get the correct equation?

$$119 - 21 \div 7 + 117 \times 3 = 11$$

- A \div and \times
- B $-$ and \times
- C $-$ and $+$
- D \div and $+$

Answer: A

Question 43

Choose the option that most closely resembles the mirror image of the given image when mirror is placed along the image as show below.

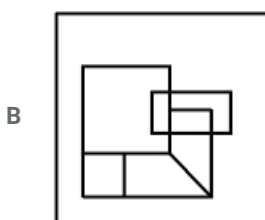
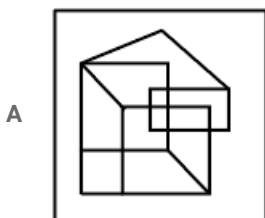
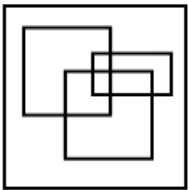


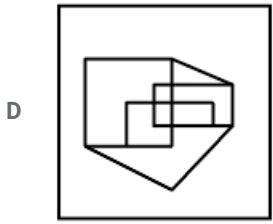
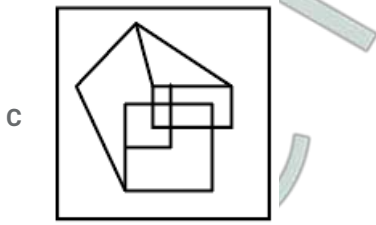


Answer: C

Question 44

Select the option in which the given figure is embedded. (Rotation is not allowed)





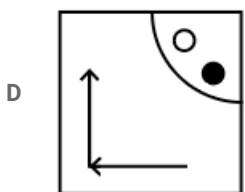
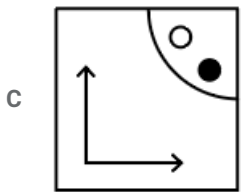
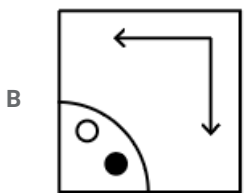
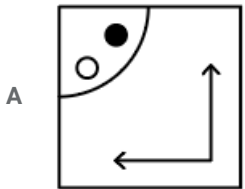
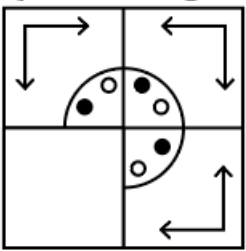
Answer: A

SSC Daily Practice Set

Question 45

Which answer figure will complete the pattern in the question figure?

Question Figure:



Answer: C

Question 46

Read the given statement and conclusions carefully and decide which of the conclusions logically follow(s) from the statement.

Statement:

A very large number of students love dancing in rain rather than studying in class.

Conclusion:

I: Rain keeps students healthy.

II: Dancing is a good Exercise.

- A Only conclusion I follows
- B Neither conclusion I nor II follows
- C Only conclusion II follows
- D Both conclusions I and II follow.

Answer: B

Question 47

Seven kids M, N, O, P, Q, R and S are standing in a row facing North. S is to the immediate right of P and to the immediate left of N. M is on the immediate right of O. M and P have one kid standing between them. Q and N have two Kids between them. P and R have also two Kids standing between them.

Who is exactly in the middle?


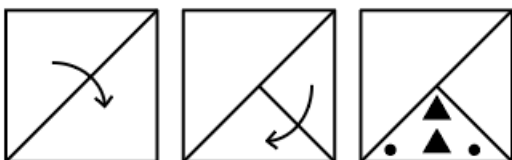
- A P
- B O
- C S
- D M

Answer: A


SSC GK Free Tests

Question 48

A square transparent sheet with a pattern is given. How will the pattern appear When the transparent sheet is folded and punched along the dotted Line?




B



C



D



Answer: B

Question 49

If HE = 41, COMA= 76 then HERE will be equal to:

A 56

B 72

C 58

D 62

Answer: B

Question 50

Select the correct option that will complete the series.

900, 450, 90, 45, 9, ?

A 6

B 3

C 4.5

D 2.5

Answer: C

SSC GK Questions

Quant

Instructions

For the following questions answer them individually

Question 51

What is the area of triangle having sides 35 cm, 84 cm and 91 cm?

- A 2160 cm^2
- B 1470 cm^2
- C 1880 cm^2
- D 1530 cm^2

Answer: B

Current Affairs Question and Answers (Download PDF)

Question 52

An amount is divided between Ram and Rabin in the ratio of 3 : 2. If Ram's share is ₹36000, then what is the total amount?

- A ₹60000
- B ₹72000
- C ₹90000
- D ₹40000

Answer: A

Question 53

A can do a work alone in 10 days. B can do the same work alone in 15 days. They start together but B leaves the job 2 days after start and A completes the remaining work alone. What is the total number of days in which the work is completed?

- A $\frac{17}{3}$
- B $\frac{13}{3}$
- C $\frac{31}{3}$
- D $\frac{26}{3}$

Answer: D

Question 54

A boat can travel 10 km upstream and 20 km downstream in 7 hours. It can travel 20 km upstream and 10 km downstream in 11 hours. What is the speed of boat in still water?

- A 4 km/h
- B 2 km/h
- C 6 km/h
- D 8 km/h

Answer: C

Daily and Monthly Current Affairs (Download PDF)

Question 55

The ratio between two given numbers is 9 : 7. If each number is increased by 6, then the ratio becomes 21 : 17. What is the difference between the two given numbers?

- A 16
- B 8
- C 4
- D 12

Answer: B

Question 56

Aditya can complete a work in 24 days alone. Raman can complete the same work in 45 days alone. In how many days can they together complete the work?

- A $\frac{720}{13}$
- B $\frac{1080}{43}$
- C $\frac{360}{23}$
- D $\frac{960}{33}$

Answer: C

Question 57

What is the value of:

$$\left(1 - \frac{3}{4}\right) + \frac{1}{2} \text{ of } \frac{6}{10} \\ \frac{2}{3} \div 10 + \left(1 - \frac{1}{5}\right) \text{ of } \frac{25}{16} ?$$

- A $\frac{33}{175}$
- B $\frac{47}{115}$
- C $\frac{29}{175}$
- D $\frac{49}{115}$

Answer: A

SSC CHSL Previous Papers (DOWNLOAD PDF)

Question 58

What is the value of

$$3 \div 3 \text{ of } 3 + 2 \div 4 + (4 \times 2 - 2) \div 12 + 4?$$

- A $\frac{12}{5}$
- B $\frac{16}{3}$

C $\frac{17}{6}$

D $\frac{14}{3}$

Answer: B

Question 59

The average weight of 13 students and their teacher is 24.5 kg. To the weight of the teacher is 31 kg. then what is the average weight of the 13 students?

A 23.5 kg

B 25 kg

C 24 kg

D 23 kg

Answer: C

Question 60

What is the difference between the mean and the median of the following data:

5, 7, 8, 13, 12, 14, 9, 2, 26, 10 ?

A 2.3

B 0.4

C 1.8

D 1.1

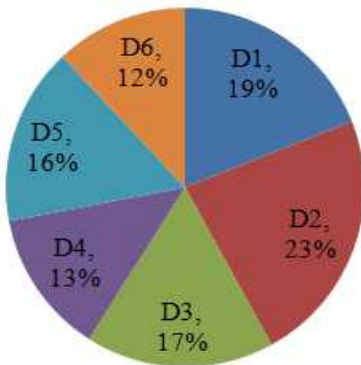
Answer: D

SSC Stenographer Previous Papers (Download PDF)

Question 61

The Pie chart given below presents the expenses incurred by different departments of a company. Each expense is shown as a percentage of total expenditure of the company.

The central angles shown in Pie chart are not as per any chosen scale



If the total expenses of the company is ₹20 lakhs, then what is the total expenses on departments D2, D4 and D5?

A ₹10,60,000

B ₹10,40,000

C ₹12,60,000

D ₹9,00,000

Answer: B

Question 62

Speed of a car is 20 m/s. How much distance (in km) will the car travel in 2.5 hours?

A 180

B 108

C 72

D 144

Answer: A

Question 63

The height and radius of the right circular cone is 4 cm and 3 cm respectively. What is the total surface area of the cone?

A $7\pi cm^2$

B $24\pi cm^2$

C $12\pi cm^2$

D $16\pi cm^2$

Answer: B

SSC GD Constable Previous Papers

Question 64

What is the HCF of 20, 250 and 120?

A 25

B 15

C 10

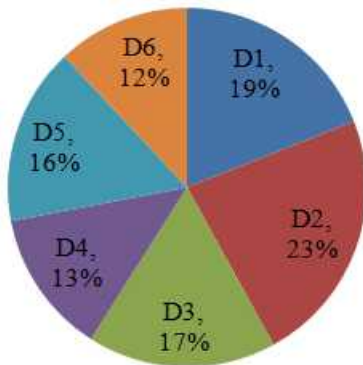
D 20

Answer: C

Question 65

The Pie chart given below presents the expenses incurred by different departments of a company. Each expense is shown as a percentage of total expenditure of the company.

The central angles shown in Pie chart are not as per any chosen scale



The expenses incurred by department D1 is approximately what percent of the expenses incurred by department D6?

- A 158.33%
- B 138.33%
- C 148.33%
- D 168.33%

Answer: A

Question 66

If the lateral surface area of the cube is 144 cm^2 , then what is the length of its side?

- A 4 cm
- B 5 cm
- C 8 cm
- D 6 cm

Answer: D

SSC MTS Previous Papers (DOWNLOAD PDF)

Question 67

A purchased an article for ₹1400. He sold it to B at 25% profit, B sold it to C at 20% profit, C sold it to D at 15% loss What is the cost price for D?

- A ₹2025
- B ₹1785
- C ₹1900
- D ₹1665

Answer: B

Question 68

The marked price of an article is $\frac{7}{5}$ of the cost price. If discount of 20% is given on the marked price, then what is the profit percentage?

- A 15%
- B 18%
- C 22%
- D 12%

Answer: D

Question 69

₹3600 becomes ₹4900 in 2 years when kept at compound interest (compounded annually). What is the rate of interest per annum?

- A $17\frac{1}{3}\%$
- B $15\frac{2}{3}\%$
- C $18\frac{1}{3}\%$
- D $16\frac{2}{3}\%$

Answer: D

SSC CGL Previous Papers (DOWNLOAD PDF)

Question 70

If $u + v = 84$ and $u - v = 4$, then $u : v$ is equal to:

- A 10 : 9
- B 10 : 11
- C 11 : 10
- D 9 : 10

Answer: C

Question 71

The sum of the cost prices of A and B is ₹1200, The sum of the selling prices of A and B is ₹1390. If the profits earned on A and B are 10% and 20% respectively, then what is the ratio of the cost prices of A and B?

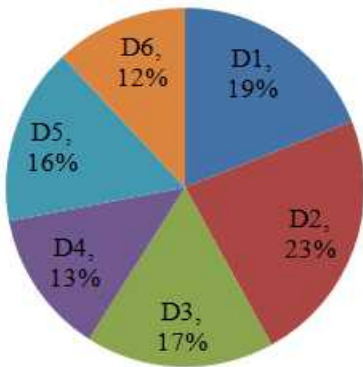
- A 7 : 13
- B 5 : 9
- C 5 : 7
- D 6 : 11

Answer: C

Question 72

The Pie chart given below presents the expenses incurred by different departments of a company. Each expense is shown as a percentage of total expenditure of the company.

The central angles shown in Pie chart are not as per any chosen scale



What is the difference between the central angles subtended by the segments D2 and D3?

- A 18.6°
- B 15.3°
- C 24.2°
- D 21.6°

Answer: D

SSC CGL Free Mock Test (Latest Pattern)

Question 73

What is the value of 12.5% of 30% of 1440?

- A 54
- B 50
- C 44
- D 64

Answer: A

Question 74

The average of a and b is 10, average of b and c is 12 and average of c and a is 15. What is the average of a, b and c?

- A 74
- B 37
- C $\frac{74}{3}$
- D $\frac{37}{3}$

Answer: D

Question 75

A sum is invested at simple interest. If the rate of interest is 20% per annum, then in how much time will it become double of itself?

- A 10 years
- B 4 years
- C 5 years
- D 8 years

Answer: C

SSC CHSL Free Mock Test (Latest Pattern)

General knowledge

Instructions

For the following questions answer them individually

Question 76

'Mushroom Rocks' are found in which type of physiographic area?

- A Coastal Plains
- B Plateau
- C Desert
- D Mountains

Answer: C

SSC Stenographer Previous Papers (Latest Pattern)

Question 77

The sole temple of Lord Brahma is located in which city of India?

- A Jaipur
- B Pushkar
- C Delhi
- D Udaipur

Answer: B

Question 78

Plants that don't have a well-differentiated body design are called

- A Gymnosperms
- B Thallophytes
- C Bryophytes

D Fungi

Answer: B

Question 79

Which of the following is NOT true regarding Payment bank?

A Credit cards can be issued

B No NRI deposits

C Priority sector lending is NOT mandatory

D CRR/SLR requirements must be fulfilled

Answer: A

SSC GD Constable Free Mock Test (Latest Pattern)

Question 80

Which of the following hills is NOT found in Indian Peninsular Plateau?

A Veliconda

B Javadi

C Lushai

D Nallamala

Answer: C

Question 81

In which part of modern India was the famous Battle of Plassey fought in 1757?

A Punjab

B Ladakh

C Rajasthan

D West Bengal

Answer: D

Question 82

Which of the following book is NOT written by Jawaharlal Nehru?

A An Autobiography

B The Broken Wing

C A Bunch of Old Letters

D The Discovery of india

Answer: B

SSC MTS Free Mock Test (Latest Pattern)

Question 83

Name the corporate giant that made a hostile attempt to take over the Bangalore-based IT firm Mindtree in March 2019.

- A Wipro
- B Genpact
- C Larsen & Toubro
- D Infosys

Answer: A

Question 84

Which director won the Best Director Award at Oscars 2019?

- A Spike Lee
- B Alfonso Cuaron
- C Yorgos Lanthimos
- D Adam McKay

Answer: B

Question 85

Which of the following subjects is NOT included in the Concurrent List?

- A Forests
- B Defence
- C Trade
- D Education

Answer: B

SSC CPO Free Mock Test (Latest Pattern)

Question 86

During the reign of which Viceroy, did the 'Salt March' take place?

- A Lord Bentinck
- B Lord Chelmsford
- C Lord Irwin
- D Lord Metcalfe

Answer: C

Question 87

Which reptile has a 4 chambered heart?

- A Crocodiles
- B King Cobra
- C Chameleon
- D Turtle

Answer: A

Question 88

Which Mughal Emperor built the Agra Fort?

- A Akbar
- B Aurangzeb
- C Jahangir
- D Shahjshan

Answer: A

SSC MTS Free Preparation App

Question 89

Bishop, Knight, King and Queen are terms associated which sport?

- A Tennis
- B Billiards
- C Chess
- D Badminton

Answer: C

Question 90

When the speed of any object exceeds the speed of sound, it is said to be travelling at

- A Supersonic speed
- B Sonic speed
- C Subsonic speed
- D Speed of 1 Mach

Answer: A

Question 91

Which organelle of cell has its own DNA and Ribosomes?

- A Chromoplasts
- B Mitechondica
- C Leucoplasts
- D Vacuoles

Answer: B

285 SSC Mocks - Just RS. 249

Question 92

Photosynthesis reaction occurs in the presence of

- A Nitrogen
- B Chlorophyll and Sunlight
- C Cadmium
- D Sulphur

Answer: B

Question 93

Who is generally referred to as the "Missile Man of India"?

- A Homi Bhabha
- B Dr. Rajendra Prasad
- C Dr. S. Radhakrishnan
- D Dr. A.P.J. Abdul Kalam

Answer: D

Question 94

Who founded Self Respect movement?

- A Mahatma Gandhi
- B E.V. Ramaswamy Naicker
- C DR. BR. Ambedkar
- D Jyotiba Phule

Answer: B

SSC Exam Free Videos (Youtube)

Question 95

Who won the Pro Kabaddi league 2018?

- A Bengaluru Bulls
- B Patna Pirates
- C Dabang Delhi KC
- D Haryana Steelers

Answer: A

Question 96

First hour of every Parliamentary sitting is slotted for

- A Point of order
- B Question hour
- C Zero hour
- D Discussing money bills

Answer: B

Question 97

Which of the following city is NOT located on the coast of Ganga river?

- A Varanasi
- B Kanpur
- C Allahabad
- D Jaipur

Answer: D

SSC Study Material

Question 98

At which rate does the RBI extend loans to Commercial Banks?

- A Penal rate
- B Bank rate
- C Reverse Repo rate
- D Repo rate

Answer: B

Question 99

Under which Article of the Indian Constitution is President's Rule applied in a State?

- A Article 350
- B Article 368

C Article 356

D Article 325

Answer: C

Question 100

Chaitya and Viharas were constructed for monks of which religion?

A Judaism

B Christianity

C Buddhism

D Hinduism

Answer: C

SSC Daily Practice Set

SSC CHSL Previous Papers (DOWNLOAD PDF)

SSC Stenographer Previous Papers (Download PDF)

SSC GD Constable Previous Papers

SSC MTS Previous Papers (DOWNLOAD PDF)

SSC CGL Previous Papers (DOWNLOAD PDF)

SSC CGL Free Mock Test (Latest Pattern)

SSC CHSL Free Mock Test (Latest Pattern)

SSC Stenographer Previous Papers (Latest Pattern)

SSC GD Constable Free Mock Test (Latest Pattern)

SSC MTS Free Mock Test (Latest Pattern)

SSC CPO Free Mock Test (Latest Pattern)

SSC MTS Free Preparation App

285 SSC Mocks - Just RS. 249

SSC Exam Free Videos (Youtube)

SSC Study Material

SSC Daily Practice Set

SSC GK Free Tests

SSC GK Questions

Current Affairs Question and Answers (Download PDF)

Daily and Monthly Current Affairs (Download PDF)