



**2017 SSC CGL 21 Aug Shift-1**

All rights reserved. No part of this publication may be reproduced, distributed, or transmitted in any form or by any means, electronic, mechanical, photocopying, recording or otherwise, or stored in any retrieval system of any nature without the permission of cracku.in, application for which shall be made to [support@cracku.in](mailto:support@cracku.in)

## General Awareness

### Instructions

For the following questions answer them individually

### Question 1

The demand for an inferior good decreases with \_\_\_\_\_ in the consumer's income.

- A increase
- B decrease
- C constant
- D double

**Answer:** A

### Explanation:

Increase is the correct word because when people's income increases, they start looking for superior goods and hence demand for inferior goods decreases.

## SSC CGL Free Mock Test

### Question 2

Goods for which the quantity that a consumer chooses, increases as the consumer's income increases and decreases as the income decreases are called?

- A Inferior goods
- B Normal goods
- C Complementary goods
- D Substitute goods

**Answer:** B

### Question 3

"Prevention of cruelty to animals" is listed in the \_\_\_\_\_ list given in the Seventh Schedule in the Constitution of India.

- A Union
- B State
- C Global
- D Concurrent

**Answer:** D

### Question 4

\_\_\_\_\_ makes laws on matters included in Union List and Concurrent List.

- A Lok Sabha
- B Ministry of Defence
- C Prime Minister's Office

D Securities and Exchange Board of India

Answer: A

## 125 SSC CGL Mocks for just Rs. 199

### Question 5

According to the categories of land mentioned in the Chola inscriptions \_\_\_\_\_ was known as the land for the maintenance of schools?

A Vellanvagai

B Brahmadeya

C Shalabhoga

D Devadana

Answer: C

### Question 6

Prince Salim was the name of the future Emperor \_\_\_\_\_.

A Babur

B Humayun

C Jahangir

D Akbar

Answer: C

### Question 7

\_\_\_\_\_ is the breaking up of the rocks on the earth's surface.

A Erosion

B Weathering

C Attrition

D Abrasion

Answer: B

## SSC CGL Previous Papers (DOWNLOAD PDF)

### Question 8

The method of soil conservation in the coastal and dry regions where rows of trees are planted to check the wind movement to protect soil cover is called?

A Mulching

B Contour barriers

C Rock dam

D Shelter belts

Answer: D

Question 9

Biological names are generally derived from which language?

A French

B Latin

C Mexican

D German

Answer: B

Question 10

The members of rhodophyceae are commonly called \_\_\_\_\_ algae.

A Green

B Brown

C Red

D Yellow

Answer: C

**25 SSC CHSL Mocks for just Rs. 149**

Question 11

Aurelia (Medusa) and Adamsia (Polyp) are examples of which Phylum?

A Ctenophora

B Annelida

C Coelenterata

D Aschelminthes

Answer: C

Question 12

Energy in the form of heat is wasted when a machine is operated. This heat is generated due to \_\_\_\_\_.

A burning

B friction

C combustion

D lubrication

Answer: B

**Question 13**

The incident ray, the \_\_\_\_\_ at the point of incidence and the reflected ray all lie in the same plane.

- A surface
- B tangent
- C normal
- D angle of reflection

**Answer:** C

**SSC CGL Tier-2 Previous Papers PDF**

**Question 14**

In Microsoft Word, \_\_\_\_\_ allows us to move selected paragraphs to the right.

- A Decrease Indent
- B Increase Indent
- C Double Indent
- D Single Indent

**Answer:** B

**Question 15**

Blue Vitriol is another name for which chemical?

- A Copper Sulphate
- B Oxygen
- C Copper
- D Magnesium Oxide

**Answer:** A

**Question 16**

The rubbing surface of a matchbox has powdered glass and a little red \_\_\_\_\_.

- A antimony
- B arsenic
- C silicon
- D phosphorus

**Answer:** D

**SSC CGL Important Questions PDF**

**Question 17**

A few organisms can tolerate and thrive in a wide range of temperatures. Such organisms are called \_\_\_\_\_.

- A Osmotic
- B Eurythermal
- C Stenothermal
- D Hydrothermal

**Answer: B**

**Question 18**

\_\_\_\_\_ scheme by the Central Government will strengthen the bond between all the states, regions, and districts of India.

- A Uday Desh Ka Aam Nagrik
- B Urja Ganga
- C Ek Bharat Shrestha Bharat
- D Namami Ganga Yojana

**Answer: C**

**Question 19**

**Who invented Velcro?**

- A Thomas Edison
- B William Harvey
- C George de Mestral
- D Robert Boyles

**Answer: C**

**1500 + Free Must Solved SSC Questions (With Solutions)**

**Question 20**

Which nation will host the FIFA Men's World Cup to be held in the year 2018?

- A Japan
- B South Korea
- C China
- D Russia

**Answer: D**

**Question 21**

**Who has built Charminar?**

- A Humayun
- B Mohammed Quli Qutab Shah
- C Ashoka
- D Narasimha

**Answer: B**

**Question 22**

Which of the following is an Indian military decoration awarded for valour, courageous action or self-sacrifice away from the battlefield?

- A Ashok Chakra
- B Dada Saheb Phalke Awards
- C Arjuna Award
- D Padma Shri

**Answer: A**

## General Science Notes for SSC CGL

**Question 23**

Which of the statements given below are correct?

1. The author of the novel 'Accelerando' is Charles Stross.
2. The author of the novel 'The Windup Girl' is Paolo Bacigalupi.
3. The author of the novel 'The Devil in Silver' is Josh Malerman.

- A 1 and 2
- B 2 and 3
- C 1 and 3
- D 1, 2 and 3

**Answer: A**

**Question 24**

In March 2017, in which country was "world's largest artificial sun" switched on?

- A China
- B USA
- C Germany
- D Russia

**Answer: C**

**Question 25**

With which other country does Bangladesh share its border besides India?

- A China
- B Laos
- C Bhutan
- D Myanmar

Answer: D

## Free SSC Study Material (18,000 Solved Questions)

### Mathematics

#### Instructions

For the following questions answer them individually

#### Question 26

What least number must be added to 329, so that the sum is completely divisible by 7?

- A 1
- B 0
- C 2
- D 3

Answer: B

#### Explanation:

$$\frac{329}{7} = 47$$

no need to add any number as 329 is divisible by 7.

so the answer is option B.

### SSC Exam Free Videos (Youtube)

#### Question 27

A can do a work in 15 days and B in 30 days. If they work on it together, then in how many days will they be able to do 50% of the work?

- A 5
- B 6
- C 4
- D 3

Answer: A

#### Explanation:

Let total work = L.C.M of 15&30 = 30units

A's efficiency =  $30/15 = 2$

B's efficiency =  $30/30 = 1$

To complete 50% of work, i.e; 15 units of work,



both can take  $\frac{15}{2+1} = 5$  days

so the answer is option A.

**Question 28**

What is the area (in sq cm) of an equilateral triangle of side 10 cm?

- A  $25\sqrt{3}$
- B  $50\sqrt{3}$
- C  $75\sqrt{3}$
- D  $10\sqrt{3}$

**Answer:** A

**Explanation:**

$$\text{Area of an equilateral triangle} = \frac{\sqrt{3}}{4} a^2 = \frac{\sqrt{3}}{4} (10)^2 = 25\sqrt{3}$$

So the answer is option A.

**Question 29**

What is the effective discount (in %) on two successive discounts of 15% and 50%?

- A 65
- B 57.5
- C 35
- D 42.5

**Answer:** B

**Explanation:**

$$\text{Effective discount} = 100 - \left(\frac{100-15}{100}\right)\left(\frac{100-50}{100}\right) = 100 - \left(\frac{85}{100}\right)\left(\frac{50}{100}\right) = 100 - 42.5 = 57.5$$

So the answer is option B.

## SSC Free Preparation App

**Question 30**

Profit of Rs 42,500 has to be divided between three partners A, B and C in the ratio 3:5:9. How much (in Rs) does A get?

- A 12500
- B 9500
- C 22500
- D 7500

**Answer:** D

**Explanation:**

$$\text{A's share} = \frac{3}{3+5+9} \times 42500 = \frac{3}{17} \times 42500 = 3 \times 2500 = 7500$$

So the answer is option D.

**Question 31**

The average weight of A, B and C is 49 kg. If the average weight of A and B is 35 kg and that of B and C is 62 kg, then the weight of B (in kgs) is?

- A 47
- B 45
- C 43
- D 49

**Answer:** A

**Explanation:**

$$\frac{A+B+C}{3} = 49 \rightarrow A + B + C = 49 \times 3 = 147 \text{ ----(1)}$$

$$\frac{A+B}{2} = 35 \rightarrow A + B = 35 \times 2 = 70 \text{ ----(2)}$$

$$\frac{B+C}{2} = 62 \rightarrow B + C = 62 \times 2 = 124 \text{ ----(3)}$$

$$(2)+(3)-(1) \Rightarrow A + B + B + C - A - B - C = 124 + 70 - 147$$

$$\Rightarrow B = 47$$

So the answer is option A.

**Question 32**

A shopkeeper by selling 6 items, earns a profit equal to the selling price of 1 item. What is his profit percentage?

- A 20
- B 25
- C 30
- D 35

**Answer:** A

**Explanation:**

Let SP of 1 item = 10/-

SP of 6 items = 60/-

profit = SP of 1 item = 10/-

CP = SP-profit = 60-10 = 50/-

$$\text{profit\%} = \frac{\text{profit}}{\text{CP}} \times 100 = \frac{10}{50} \times 100 = 20\%$$

So the answer is option A.

**Daily Free SSC Practice Set**

**Question 33**

What is the value of 125% of 25% of 80?

- A 50
- B 25
- C 20

D 40

Answer: B

Explanation:

$$\frac{125}{100} \times \frac{25}{100} \times 80 = \frac{3125}{10000} \times 80 = 25$$

So the answer is option B.

Question 34

To cover a distance of 81 km in 1.5 hours what should be the average speed of the car in meters/second?

A 10

B 15

C 12

D 9

Answer: B

Explanation:

$$\text{speed} = \frac{\text{distance}}{\text{time}} = \frac{81}{1.5} \text{ kmph} = \frac{81}{1.5} \times \frac{5}{18} = 15 \text{ m/s}$$

So the answer is option B.

Question 35

In 4 years at simple interest the principal increases by 32%. What will be the compound interest earned (in Rs) on Rs. 24,000 in 3 years at the same rate?

A 5233

B 6332

C 5332

D 6233

Answer: D

Explanation:

$I = 32\%$  of P

$I = PTR/100$

$$\frac{32P}{100} = \frac{P(4)R}{100} \rightarrow R = 8\%$$

Under CI,

$$\text{Total amount} = P\left(1 + \frac{R}{100}\right)^n$$

$$= 24000\left(1 + \frac{8}{100}\right)^3$$

$$= 24000\left(1 + \frac{2}{25}\right)^3$$

$$= 24000\left(\frac{27}{25}\right)^3$$

$$= 24000\left(\frac{19683}{15625}\right)$$

$$= 30,233.088$$

$$CI = 30,233.088 - 24000 = 6233.088$$

So the answer is option D.

Question 36

If  $5/2(8x/3 - 1/2) + 13/2 = 2x/3$ , then what is the value of x?

- A 7/8
- B 8/7
- C -8/7
- D -7/8

Answer: D

Explanation:

$$5/2(8x/3 - 1/2) + 13/2 = 2x/3$$

$$20x/3 - 5/4 + 13/2 = 2x/3$$

$$20x/3 - 2x/3 = 5/4 - 13/2$$

$$18x/3 = -21/4$$

$$x = -7/8$$

So the answer is option D.

Question 37

If  $a^3 + b^3 = 72$  and  $ab = 8$ , then what is the value of  $a + b$ ?

- A 2
- B 5
- C 6
- D 3

Answer: C

Explanation:

$$(a + b)^3 = a^3 + b^3 + 3ab(a + b)$$

$$(a + b)^3 = 72 + 3(8)(a + b)$$

we need to solve 3rd degree equation

so, without solving, by verification,  $a+b = 6$ ,

so the answer is option C.

Question 38

Sum of four times a fraction and 7 times its reciprocal is 16. What is the fraction?

- A 2/7
- B 7/2
- C 4/7
- D 7/4

Answer: B

**Explanation:**

Let that fraction be  $\frac{1}{x}$

$$4\left(\frac{1}{x}\right) + 7x = 16$$

$$\Rightarrow (4 + 7x^2) = 16 \times x$$

$$\Rightarrow 7x^2 - 16x + 4 = 0$$

$$\Rightarrow \left(x - \frac{14}{7}\right)\left(x - \frac{2}{7}\right) = 0$$

$$\Rightarrow (x - 2)\left(x - \frac{2}{7}\right) = 0$$

$$\Rightarrow x = 2 \text{ or } \frac{2}{7}$$

$$\Rightarrow \text{fraction} = \frac{1}{x} = \frac{1}{2} \text{ (or) } \frac{7}{2}$$

so the answer is option B.

## SSC CHSL Previous Question papers (download pdf)

**Question 39**

What is the sum of the first 11 terms of an arithmetic progression if the 3rd term is -1 and the 8th term is 19?

A 204

B 121

C 225

D 104

**Answer:** B

**Explanation:**

$$T_3 = a + 2d = -1 \text{-----(1)}$$

$$T_8 = a + 7d = 19 \text{-----(2)}$$

on solving (1) AND (2)

$$d = 4 \text{ \& } a = -9$$

$$S_n = \frac{n}{2}[2a + (n - 1)d]$$

$$S_{11} = \frac{11}{2}[2(-9) + (11 - 1)(4)]$$

$$S_{11} = \frac{11}{2}[(-18) + (40)]$$

$$S_{11} = \frac{11}{2}[22]$$

$$S_{11} = 121$$

So the answer is option B.

**Question 40**

What is the reflection of the point (-3, 2) in the line  $x = -2$ ?

A (-3, -6)

B (1, 2)

C (-3, 6)

D (-1, 2)

**Answer: D**

**Explanation:**

(diagram)

from the diagram answer is  $(-1, 2)$

So the answer is option D.

**Question 41**

**Point P is the midpoint of segment AB. Co-ordinates of P are  $(1, 3)$  and A are  $(-3, 8)$ . What are the co-ordinates of point B?**

**A**  $(-5, -2)$

**B**  $(-5, 2)$

**C**  $(5, 2)$

**D**  $(5, -2)$

**Answer: D**

**Explanation:**

$$\text{Mid-point} = \left( \frac{x_1+x_2}{2}, \frac{y_1+y_2}{2} \right)$$

$$(1, 3) = \left( \frac{-3+x}{2}, \frac{8+y}{2} \right)$$

$$-3+x = 2 \text{ so } x = 5$$

$$8+y = 6 \text{ so } y = -2$$

so the answer is option D.

## Free SSC Study Material (18,000 Solved Questions)

**Question 42**

**What is the slope of the line perpendicular to the line passing through the points  $(3, -2)$  and  $(4, 2)$ ?**

**A**  $1/4$

**B**  $4$

**C**  $-4$

**D**  $-1/4$

**Answer: D**

**Explanation:**

$$\text{slope } m = \frac{y_2-y_1}{x_2-x_1} = \frac{2+2}{4-3} = 4$$

$$\text{slope of the perpendicular line} = -1/m = -1/4.$$

So the answer is option D.

**Question 43**

**$\Delta ABC$  is similar to  $\Delta PQR$ . If ratio of perimeters of  $\Delta ABC$  and  $\Delta PQR$  is  $3:7$  and if  $PQ = 21$  cm, then the length of  $AB$  (in cm) is?**

**A**  $6$

**B**  $14$

**C**  $9$

D 18

Answer: C

**Explanation:**

For similar triangles, ratio of perimeters = ratio of corresponding sides

$$PQ/AB = 7/3$$

$$21/AB = 7/3$$

$$AB = 9$$

So the answer is option C.

**Question 44**

What is the value of  $2 \sec 45^\circ + \tan 30^\circ$  ?

A  $(2\sqrt{6} + 1)/\sqrt{3}$

B  $\sqrt{3}$

C  $(2\sqrt{2} + 3)/\sqrt{6}$

D  $(9 + 2\sqrt{3})/9$

Answer: A

**Explanation:**

$$2 \sec 45^\circ + \tan 30^\circ = 2\sqrt{2} + 1/\sqrt{3} = (2\sqrt{6} + 1)/\sqrt{3}$$

So the answer is option A.

**Latest Job Updates on Telegram - Join here**

**Question 45**

$\Delta ABC$  is right angled at B. If  $m\angle A = 60^\circ$ , then what is the value of  $\cot C$ ?

A  $\sqrt{2}$

B  $1/\sqrt{3}$

C  $\sqrt{3}$

D  $2/\sqrt{3}$

Answer: C

**Explanation:**

$$B = 90^\circ \quad A = 60^\circ$$

$$\text{then } C = 30^\circ (\because A + B + C = 180^\circ)$$

$$\cot C = \cot 30^\circ = \sqrt{3}$$

So the answer is option C.

**Question 46**

If  $\operatorname{Cosec} \theta = 25/7$ , then what is the value of  $\cos \theta$ ?

A  $25/24$

B  $7/24$

C 24/25

D 7/25

Answer: C

**Explanation:**

$$\operatorname{Cosec} \theta = 25/7$$

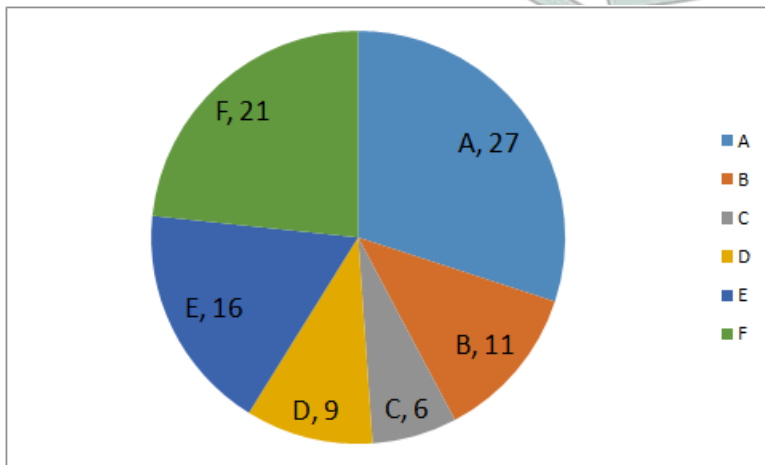
$$\sin \theta = 7/25$$

$$\cos \theta = 1 - \sin^2 \theta = 1 - (7/25)^2 = 24/25$$

So the answer is option C.

**Instructions**

The pie chart shows the votes in 1000s polled in favour of six candidates (A, B, C, D, E, F) contesting for a particular seat. Study the diagram and answer the following questions.



**Question 47**

If Candidate A is disqualified then which candidate will be declared the winner?

A E

B B

C F

D D

Answer: C

**Explanation:**

Candidate F got 2nd highest no. of votes

So the answer is option C.

[Join SSC Daily Quiz Telegram Group](#)

**Question 48**

The winning candidate got how many more votes than the one who came second?

A 6000

B 5000

C 11000



D 7000

**Answer: A**

**Explanation:**

Winner is A = 27000votes

2nd one is F = 21000votes

difference = 6000

So the answer is option A.

**Question 49**

**Analysts believe that if candidate E had not stood in the fray then votes that he got would have been equally divided between F and C, then what would have been the result?**

A A would have lost by 1000 votes

B F would have won by 2000 votes

C F would have lost by 2000 votes

D A would have won by 1000 votes

**Answer: B**

**Explanation:**

E got 16000 votes

16000 votes should be divided between F and C i.e; 8000 each

then F has 21000+8000 = 29000 votes

C has 6000+8000 = 14000 votes

now,

A = 27000

B = 11000

C = 14000

D = 9000

F = 29000

F would be the winner with a majority of 2000 votes

So the answer is option B.

**Question 50**

**If voting attendance was 60% then how many names must be there in the voter list?**

A 225000

B 90000

C 144000

D 150000

**Answer: D**

**Explanation:**

Total votes =  $(27+11+6+9+16+21)*1000 = 90000$

if there was 60% attendance, then total voters =  $90000/0.6 = 150000$

So the answer is option D.

## SSC CGL Free Mock Test

### Reasoning

#### Instructions

For the following questions answer them individually

#### Question 51

Select the related word from the given alternatives.

Cow : Calf :: Hen : ?

- A Chick
- B Cock
- C Egg
- D Fly

Answer: A

#### Explanation:

This is under the category of Animal and Young ones.

Calf is the young one of Cow and Chick is the Young one of Hen.

125 SSC CGL Mocks for just Rs. 199

#### Question 52

Select the related letters from the given alternatives.

DHL : AEI :: QUY : ?

- A MQU
- B NRV
- C OSW
- D PTX

Answer: B

#### Explanation:

DHL is coded as AEI. It followed the sequence-'n-3'

D-3 = A ; H-3 = E ; L-3 = I;

Hence for QUY the code is NRV

Q-3 = N ; U-3 = R ; Y-3 = V

Hence Option B is correct.

#### Question 53

Select the related number from the given alternatives.

0.5 : 2 :: 0.125 : ?

- A 6

B 16

C 8

D 12

**Answer: C**

**Explanation:**

Inverse of 0.5 is 2 and Inverse of 0.125 is 8.

Hence option C is correct

**Question 54**

**Select the odd word from the given alternatives.**

A Book

B Page

C Pen

D Diary

**Answer: C**

**Explanation:**

Except Pen Other Options are a type of Note books.

## SSC CGL Previous Papers (DOWNLOAD PDF)

**Question 55**

**Select the odd letters from the given alternatives.**

A EGI

B MOQ

C UWY

D NLJ

**Answer: D**

**Explanation:**

All other options except 4th one follows the sequence of 'n+2'

$E+2=G$ ;  $G+2=I$ ;

$M+2=O$ ;  $O+2=Q$ ;

$U+2=W$ ;  $W+2=Y$ ;

$N-2=L$ ;  $L-2=J$ ;

Option D does not follow the sequence.

**Question 56**

**Select the odd number from the given alternatives.**

A 47

B 41

C 59

D 63

Answer: D

**Explanation:**

All the given numbers are Prime except 63 out of the given options. Hence Option D is correct.

**Question 57**

A series is given, with one word missing. Choose the correct alternative from the given ones that will complete the series as per dictionary.

?, Lifelike, Lifeline, Lifelong

A Lifeless

B Lifespan

C Lifest

D Lifework

Answer: A

**Explanation:**

Lifespan cannot be the first word, as 's' comes after 'l'.

Thus, first word can only be 'lifeless' as per the dictionary.

=> Ans - (A)

## 25 SSC CHSL Mocks for just Rs. 149

**Question 58**

A series is given, with one term missing. Choose the correct alternative from the given ones that will complete the series.

B, C, E, H, L, ?

A Q

B N

C O

D P

Answer: A

**Explanation:**

$B+1=C$  ;  $C+2=E$  ;  $E+3=H$  ;  $H+4=L$ . Hence to get next number in the sequence Add 5 to L. We get  $L+5=Q$ .

Hence option A is correct

**Question 59**

A series is given, with one number missing. Choose the correct alternative from the given ones that will complete the series.

-4, ?, 3, 8, 14, 21

A 0

B 1

C -2

D -1

**Answer: D**

**Explanation:**

It follows the sequence of  $n+(a+1)$  Where a is a natural number sequence starting from 3.

$$-4 + 3 = -1$$

$$-1 + 4 = 3$$

$$3 + 5 = 8$$

$$8 + 6 = 14$$

$$14 + 7 = 21$$

Hence Option D is correct

**Question 60**

**Meetu's birthday is on Wednesday 8th March. On what day of the week will be Ritu's Birthday in the same year if Ritu was born on 10th July?**

A Monday

B Wednesday

C Friday

D Saturday

**Answer: A**

**Explanation:**

Meetu's Birthday is on 8th march and Reetu's Birthday is on 10th July. There are 124 days in between them. 23 days in march, 30 days in April, 31 days in may, 30 days in June, 10 days in July. Now divide 124 with 7 to find the remainder.

$$124 \div 7 = 5 \text{ (Remainder)}$$

0-Wednesday 1-Thursaday 2-Friday 3-Saturday 4-Sunday 5-Monday....

Hence 10th July must be Monday.

## SSC CGL Tier-2 Previous Papers PDF

**Question 61**

**The weights of 4 boxes are 30, 40, 50 and 80 kilograms. Which of the following cannot be the total weight, in kilograms, of any combination of these boxes and in a combination a box can be used only once?**

A 120

B 110

C 100

D 130

**Answer: C**

**Explanation:**

Every other Number in the options except 100 can be formed using the numbers 30,40,50,80.

$$1) 40 + 80 = 120$$

2)  $30 + 80 = 110$

4)  $50 + 80 = 130$

Hence only 100 cannot be formed.

**Question 62**

From the given alternative words, select the word which cannot be formed using the letters of the given word:

**DUPLICATE**

- A PLATE
- B DUCTILE
- C LUCID
- D TEAM

**Answer: D**

**Explanation:**

Every Word in the options can be formed except Team using DUPLICATE.

There is no 'M' in DUPLICATE

**Question 63**

If PRIMATE is coded as MOFJXQB, then how will COW be coded as?

- A ZLT
- B EDC
- C RFV
- D TGB

**Answer: A**

**Explanation:**

The sequence is 'n-3'

P-3=M ; R-3=O ; I-3=F ; M-3=J ; A-3=X ; T-3=Q ; E-3=B

Hence the code for COW is ZLT

## SSC CGL Important Questions PDF

**Question 64**

In a certain code language, '+' represents 'x', '-' represents '+', 'x' represents '÷' and '÷' represents '-'. What is the answer to the following question?

$11 + 50 - 150 \div 200 = ?$

- A 200
- B 500
- C 250
- D 50

**Answer: B**

**Explanation:**

$$\text{Expression} = 11 + 50 - 150 \div 200 = ?$$

$$\equiv 11 \times 50 + 150 - 200$$

$$= 550 - 50 = 500$$

=> Ans - (B)

**Question 65**

If  $7 \times 1 = 12$ ;  $5 \times 4 = 2$ ;  $6 \times 4 = 4$ ; then what is the value of  $7 \times 4 = ?$

A 8

B 6

C 11

D 28

**Answer: B**

**Explanation:**

The pattern followed is that the positive difference of the number is multiplied by 2.

$$\text{Eg : } 7 \times 1 = (7 - 1) \times 2 = 6 \times 2 = 12$$

$$\text{and } 5 \times 4 = (5 - 4) \times 2 = 1 \times 2 = 2$$

$$\text{and } 6 \times 4 = (6 - 4) \times 2 = 2 \times 2 = 4$$

$$\text{Similarly, } 7 \times 4 = (7 - 4) \times 2 = 3 \times 2 = 6$$

=> Ans - (B)

**Question 66**

Select the missing number from the responses ?

18	90	5
13	143	11
7	?	5

A 12

B 2

C 53

D 35

**Answer: D**

**Explanation:**

In the first row, the product of the first and third number will result in the middle number.

$$\text{Eg : } 18 \times 5 = 90$$

$$\text{and } 13 \times 11 = 143$$

$$\text{Similarly, } 7 \times 5 = 35$$

=> Ans - (D)

**1500 + Free Must Solved SSC Questions (With Solutions)**

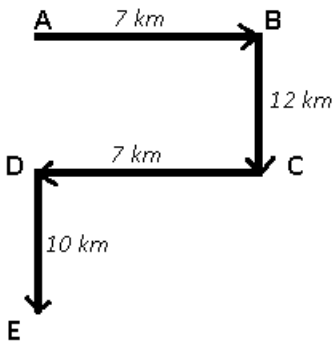
**Question 67**

A man cycles 7 km East, then turns South and cycles 12 km, then turns West and cycles 7 km, then turns to his left and cycles 10 km. Where is he now with reference to his starting position?

- A 22 Kms South
- B 2 Kms South
- C 22 Kms East
- D 2 Kms East

**Answer:** A

**Explanation:**



Let the man starts from point A, then he travels east for 7 km and reaches B. He then turns south and travels for 12 km and reaches C. After that, he cycles west for 7 km and finally reaches point E.

Thus,  $AE = 12 + 10 = 22$  km

∴ The man is 22 km to the south of his initial position.

=> Ans - (A)

**Question 68**

In the question two statements are given, followed by two conclusions, I and II. You have to consider the statements to be true even if it seems to be at variance from commonly known facts. You have to decide which of the given conclusions, if any, follows from the given statements.

**Statement 1 :** All steel is iron.

**Statement 2 :** No iron is solid.

**Conclusion I :** No steel is solid.

**Conclusion II :** Some iron is steel.

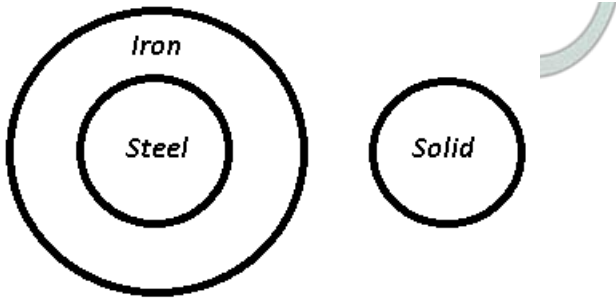
- A Only conclusion I follows
- B Only conclusion II follows
- C Both I and II follow
- D Neither I nor II follows

**Answer:** C

**Explanation:**

The venn diagram for the above statements is :





Conclusion I : No steel is solid = true

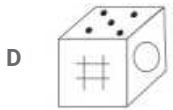
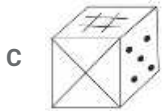
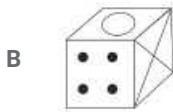
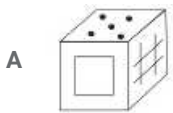
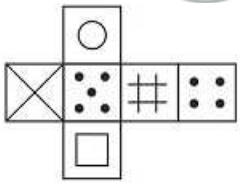
Conclusion II : Some iron is steel = true

Thus, both I and II follow

=> Ans - (C)

**Question 69**

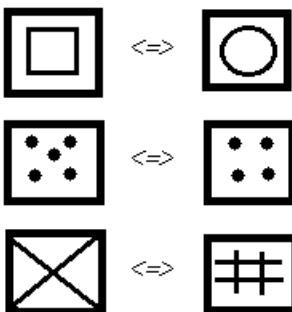
Which of the following cube in the answer figure cannot be made based on the unfolded cube in the question figure?



Answer: C

**Explanation:**

When we fold the given figure, the side with a '5 dots' sign will become the base of the cube and the side with only '4 dots' sign will become top, and thus they will face each other. Similarly, the sides which will face each other will be :



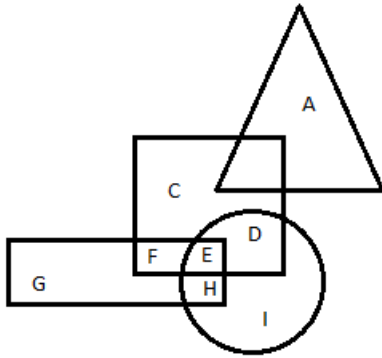
Since, the opposite sides cannot be adjacent in the cube, thus the cube in the third option is not possible.

=> Ans - (C)

## General Science Notes for SSC CGL

Question 70

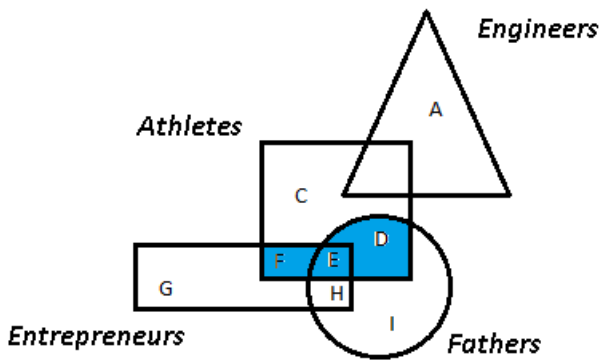
In the following figure, square represents athletes, triangle represents engineers, circle represents fathers and rectangle represents entrepreneurs. Which set of letters represents athletes who are either entrepreneurs or fathers?



- A F,E,D
- B D,E,F,G,H,I
- C G,H,I
- D E,H

Answer: A

Explanation:

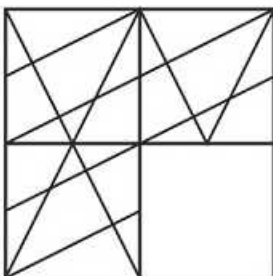


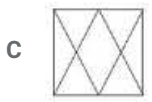
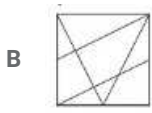
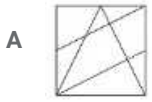
Athletes who are either entrepreneurs or fathers are represented by blue colour = F+E+D

=> Ans - (A)

Question 71

Which answer figure will complete the pattern in the question figure

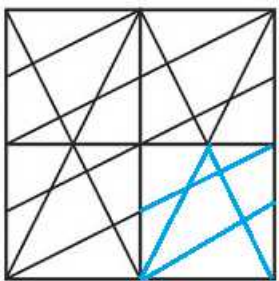




Answer: A

**Explanation:**

When we complete the above figure, we get :

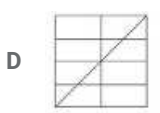
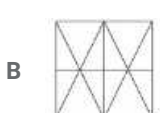
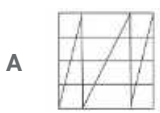
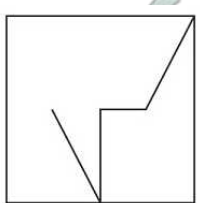


Now, the first figure resembles the above missing part in blue colour.

=> Ans - (A)

**Question 72**

From the given answer select in one in which the question figure is hidden / embedded



Answer: B

**Explanation:**

The question figure is embedded in the following figure :

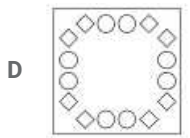
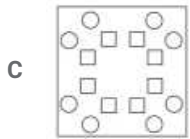
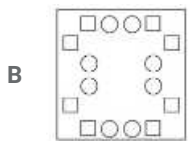
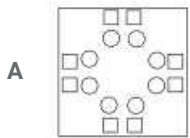
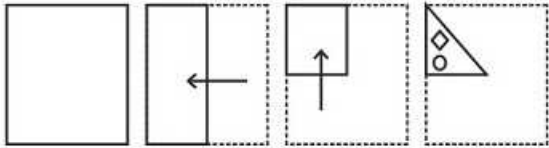


=> Ans - (B)

## Free SSC Study Material (18,000 Solved Questions)

**Question 73**

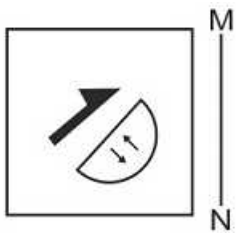
A piece of paper is folded and punched as shown below in the question figures. From the given answer figures, indicate how it will appear when opened.



Answer: D

**Question 74**

If a mirror is placed on the line MN, then which of the answer figures is the right image of the given figure?





Answer: D

**Explanation:**

A vertical mirror is placed, so the object at the left will appear at the right and vice-versa. The half arrow currently pointing north east will face north west in the mirror image, thus first two options are eliminated.

Also, for the smaller arrows in the semi circle, the 1st arrow is pointing upwards, similarly, in the mirror image it will face upwards but the direction will be reversed, thus third option is not possible.

=> Ans - (D)

**Question 75**

A word is represented by only one set of numbers as given in any one of the alternatives. The sets of numbers given in the alternatives are represented by two classes of alphabets as shown in the given two matrices. The columns and rows of Matrix-I are numbered from 0 to 4 and that of Matrix-II are numbered from 5 to 9. A letter from these matrices can be represented first by its row and next by its column, for example 'Y' can be represented by 55, 87 etc and 'Z' can be represented by 14, 01 etc. Similarly, you have to identify the set for the word 'VERY'.

**Matrix - I**

	0	1	2	3	4
0	W	Z	G	T	D
1	S	R	W	G	Z
2	X	F	S	D	E
3	Q	V	C	S	F
4	A	T	Q	Q	A

**Matrix - II**

	5	6	7	8	9
5	Y	N	L	I	Y
6	H	I	P	J	I
7	B	K	O	N	O
8	U	M	Y	B	P
9	J	O	H	L	K

- A 01,43,21,78
- B 31,24,11,87
- C 11,20,66,85
- D 88,56,43,20

Answer: B

**Explanation:**

(A) : 01,43,21,78 = ZQFN

(B) : 31,24,11,87 = **VERY**

(C) : 11,20,66,85 = RXIU

(D) : 88,56,43,20 = BNQX

=> Ans - (B)

# English

## Instructions

For the following questions answer them individually

### Question 76

In the following question, some part of the sentence may have errors. Find out which part of the sentence has an error and select the appropriate option. If a sentence is free from error, select 'No Error'.

A slow smile worked (1)/ its way cross his (2)/ face and into his eyes. (3)/No Error (4)

- A 1
- B 2
- C 3
- D 4

Answer: B

### Explanation:

'cross' is a verb which has been inappropriately used. Instead 'across' can be used which is a preposition. Hence, option B is correct.

## SSC Free Preparation App

### Question 77

In the following question, some part of the sentence may have errors. Find out which part of the sentence has an error and select the appropriate option. If a sentence is free from error, select 'No Error'.

His expression gave no (1)/ clue of what was going (2)/ on among his head. (3)/ No Error (d)

- A 1
- B 2
- C 3
- D 4

Answer: C

### Explanation:

'among' is wrong. Instead 'in' should be used. Hence, option C is correct.

### Question 78

In the following question, the sentence given with blank to be filled in with an appropriate word. Select the correct alternative out of the four and indicate it by selecting the appropriate option.

After being given \_\_\_\_\_ warnings for disrupting class, Thomas was finally sent to the principal's office.

- A singular
- B lone
- C numerous
- D unique

Answer: C

### Explanation:

'Singular' means single. 'Lone' means solitary or single. 'Numerous' means many. 'Unique' means being the only one of its kind. Hence, option C is correct.

**Question 79**

In the following question, the sentence given with blank to be filled in with an appropriate word. Select the correct alternative out of the four and indicate it by selecting the appropriate option.

The \_\_\_\_\_ "pretty ugly" implies that a person can be both attractive and unattractive at the same time.

- A simile
- B metaphor
- C alliteration
- D oxymoron

**Answer: D**

**Explanation:**

'Oxymoron' is a figure of speech in which two words which are opposite in meaning exist together. 'pretty' and 'ugly' are two words which are opposite in meaning and are appearing together. Hence, option D is correct.

## Daily Free SSC Practice Set

**Question 80**

In the following question, out of the four alternatives, select the word similar in meaning to the word given.

**Cynicism**

- A Conviction
- B Bitterness
- C Credence
- D Intuition

**Answer: B**

**Explanation:**

'Cynicism' is a negative word which means an inclination to believe that people are motivated only by self-interest. 'Bitterness' means anger and disappointment or resentment. Hence, option B is correct.

**Question 81**

In the following question, out of the four alternatives, select the word similar in meaning to the word given.

**Pinnacle**

- A Culmination
- B Nadir
- C Nethermost
- D Basal

E 'Pinnacle' means topmost point. 'Culmination' also means highest point or peak. Hence, option A is correct.

**Answer: A**

**Question 82**

In the following question, out of the four alternatives, select the word opposite in meaning to the word given.

**Befuddle**

- A Baffle
- B Daze
- C Fluster
- D Explicate

**Answer: D**

**Explanation:**

'Befuddle' means unable to think clearly. 'Explicate' means to think upon something in detail. Hence, option D is correct.

**SSC CGL Free Online Coaching**

**Question 83**

In the following question, out of the four alternatives, select the word opposite in meaning to the word given.

**Supplant**

- A Supersede
- B Surrender
- C Usurp
- D Oust

**Answer: B**

**Explanation:**

'Supplant' means to take over or replace. 'Surrender' means to give up. Hence, option B is correct.

**Question 84**

In the following question, out of the four alternatives, select the alternative which best expresses the meaning of the idiom/phrase.

**Get the message**

- A Understand what is implied by a remark or action
- B Communicate using a secret language
- C Find it difficult to understand a different language
- D Fire someone from a job

**Answer: A**

**Explanation:**

'Get the message' means to understand what is implied by a remark or action. Hence, option A is correct.

**Question 85**

In the following question, out of the four alternatives, select the alternative which best expresses the meaning of the idiom/phrase.

**Keep at bay**



- A Keep your problems to yourselves
- B to control something and prevent it from causing you problems
- C Not share a secret
- D Maintain a long distance relationship

**Answer: B**

**Explanation:**

'Keep at bay' means to control something and prevent it from causing you problems. Hence, option B is correct.

## SSC CHSL Previous Question papers (download pdf)

**Question 86**

In the following question, out of the four alternatives, select the alternative which will improve the bracketed part of the sentence. In case no improvement is needed, select "no improvement".

Tom pretended to not (heard) a thing.

- A hear
- B hearing
- C be hearing
- D no improvement

**Answer: A**

**Question 87**

In the following question, out of the four alternatives, select the alternative which will improve the bracketed part of the sentence. In case no improvement is needed, select "no improvement".

He must (has change) clothes during the night.

- A have changed
- B has changed
- C have changes
- D no improvement

**Answer: A**

**Question 88**

In the following question, out of the four alternatives, select the alternative which is the best substitute of the words/sentence.

Deriving pleasure from inflicting pain

- A Sadistic
- B Genial
- C Tender
- D Placid

**Answer: A**

## Free SSC Study Material (18,000 Solved Questions)

### Question 89

In the following question, out of the four alternatives, select the alternative which is the best substitute of the words/sentence.

A person highly skilled in music

- A Virtuoso
- B Amateur
- C Novice
- D Dabbler

Answer: A

### Question 90

In the following question, four words are given out of which one word is correctly spelt. Select the correctly spelt word.

- A palatable
- B palateble
- C pallateble
- D pallatable

Answer: A

### Question 91

In the following question, four words are given out of which one word is correctly spelt. Select the correctly spelt word.

- A unnerving
- B unnerveing
- C unerving
- D unerveing

Answer: A

## Latest Job Updates on Telegram - Join here

### Question 92

The question below consists of a set of labelled sentences. Out of the four options given, select the most logical order of the sentences to form a coherent paragraph.

At length, about an hour later, we

X-spied a little pile of boulders rising

Y-this we dragged ourselves

Z-out of the plain, and to

- A XYZ

- B ZYX
- C XZY
- D ZXY

Answer: C

**Question 93**

The question below consists of a set of labelled sentences. Out of the four options given, select the most logical order of the sentences to form a coherent paragraph.

Secondly, it is consistent

X-with human experience that

Y-places and be depressed in others

Z-land should rise gradually in some

- A XYZ
- B ZYX
- C ZXY
- D XZY

Answer: D

**Question 94**

In the following question, a sentence has been given in Active/Passive voice. Out of the four alternatives suggested, select the one which best expresses the same sentence in Passive/Active voice.

The labourers paved the entire stretch of the road.

- A The entire stretch of the road is paved by the labourers.
- B Paving of the entire stretch of the road was done by the labourers.
- C The entire stretch of the road was paved by the labourers.
- D Paving of the entire stretch of the road is done by the labourers.

Answer: C

**Explanation:**

The passive voice of the given statement is - "The entire stretch of the road was paved by the labourers."

## Join SSC Daily Quiz Telegram Group

**Question 95**

In the following question, a sentence has been given in Direct/Indirect speech. Out of the four alternatives suggested, select the one which best expresses the same sentence in Indirect/Direct speech.

The visitor said, "Is your mother at home?"

- A The visitor asked me is my mother at home.
- B The visitor asked to me whether my mother was at home.
- C The visitor asked to me is my mother at home.

D The visitor asked me whether my mother was at home.

**Answer: D**

### Instructions

A passage is given with 5 questions following it. Read the passage carefully and choose the best answer to each question out of the four alternatives.

But before I could be inspired by these amazing people, I had to cleanse my feed. I know my weaknesses: just last week, Facebook memories reminded me of a pizza party I'd had two years ago and I ended up ordering a chicken dominator, with garlic breadsticks and an jalapeno cheese dip. So much for Day One of Couch to 5K training. I stayed right on that couch. So far I've unfollowed BuzzFeed Tasty, TasteMade (even their adorable Tiny Kitchen) and several people who have the enviable advantage of being able to eat as much as they want and not put on weight. By my calculations, dark chocolate is healthy, so I'm still following Earth Loaf, Pascati and Mason & Co.

When I finally found a gym I liked, with the best trainers I have had, I unabashedly shared my workouts every day. From shying away from full-length pictures, I reached a point where I could share videos of myself deadlifting and doing back squats with a barbell across my shoulders. It gave me accountability: I challenged myself to go to the gym for 30 classes straight, and I did it. Which reminds me, it's time to start a new challenge.

### Question 96

**Posts related to which topic does the writer want to remove from her feed?**

- A Dark Chocolate
- B Make-up
- C Sari
- D Food

**Answer: D**

### Question 97

**What has the writer succeeded in doing?**

- A Lost the desired weight
- B Succeeded in overcoming temptations to order pizzas
- C Attended 30 gym classes without a break
- D Removed unhealthy posts including about chocolates

**Answer: C**

## SSC CGL Free Mock Test

### Question 98

**Which of the following is a page related to chocolate?**

- A Earth Loaf
- B BuzzFeed Tasty
- C TasteMade
- D Tiny Kitchen

**Answer: A**

Question 99

What weight loss program has the writer enrolled in?

- A 30 Straight gym classes
- B Couch to 5K
- C Mason & Co
- D Eat chocolate to lose weight

Answer: B

Question 100

What gave the writer accountability?

- A Sharing her workout videos on social media
- B Unfollowing people and pages not related to health
- C Going to the gym daily
- D Doing challenging exercises like deadlifting

Answer: A

**125 SSC CGL Mocks for just Rs. 199**

**SSC CGL Free Mock Test**

**125 SSC CGL Mocks for just Rs. 199**

**SSC CGL Previous Papers (DOWNLOAD PDF)**

**25 SSC CHSL Mocks for just Rs. 149**

**SSC CGL Tier-2 Previous Papers PDF**

**SSC CGL Important Questions PDF**

**1500 + Free Must Solved SSC Questions (With Solutions)**

**General Science Notes for SSC CGL**

**Free SSC Study Material (18,000 Solved Questions)**

**SSC Exam Free Videos (Youtube)**

[\*\*SSC Free Preparation App\*\*](#)

[\*\*Daily Free SSC Practice Set\*\*](#)

[\*\*SSC CGL Free Online Coaching\*\*](#)

[\*\*SSC CHSL Previous Question papers \(download pdf\)\*\*](#)

[\*\*Free SSC Study Material \(18,000 Solved Questions\)\*\*](#)

[\*\*Latest Job Updates on Telegram - Join here\*\*](#)

[\*\*Join SSC Daily Quiz Telegram Group\*\*](#)