



SSC MTS 16th August 2019 Shift-1

All rights reserved. No part of this publication may be reproduced, distributed, or transmitted in any form or by any means, electronic, mechanical, photocopying, recording or otherwise, or stored in any retrieval system of any nature without the permission of cracku.in, application for which shall be made to support@cracku.in

English

Instructions

In the following passage some words have been deleted. Fill in the blanks with the help of the alternatives given. Select the most appropriate option for each blank.

Comprehension:

There lived an old couple whose only pet was a little dog. Having no children, they loved it as though it (1)_____ a baby. The old dame made it a cushion (2)_____ blue crepe, and at mealtime Muko—for that was its name—would sit on it as (3)_____ as any cat. The kind people (4)_____ the pet with tidbits of fish with their own chopsticks, and all the boiled rice (5)_____ wanted.

Question 1

Select the most appropriate option to fill in blank No.1.

- A is
- B are
- C like
- D were

Answer: D

SSC CHSL Previous Papers (DOWNLOAD PDF)

Question 2

Select the most appropriate option to fill in blank No.2.

- A of
- B on
- C at
- D by

Answer: A

Question 3

Select the most appropriate option to fill in blank No.3.

- A securely
- B comfortably
- C strongly
- D compactly

Answer: B

Question 4

Select the most appropriate option to fill in blank No.4.

- A feeding
- B feeds

C feed

D fed

Answer: D

SSC Stenographer Previous Papers (Download PDF)

Question 5

Select the most appropriate option to fill in blank No.5.

A he

B she

C one

D it

Answer: D

Instructions

For the following questions answer them individually

Question 6

Select the most appropriate option to fill in the blank and make a grammatically correct sentence.
It wasn't easy, but finally we succeeded _____ finding a solution to the problem.

A of

B at

C in

D for

Answer: C

Question 7

Select the correctly spelt word.

A Separate

B Successful

C Seige

D Superfisial

Answer: A

SSC GD Constable Previous Papers

Question 8

Select the most appropriate word to fill in the blank and make a meaningful sentence.
We try to keep abreast of the new treatments, but have gained little _____ experience of using them.

- A systematic
- B practical
- C orderly
- D doable

Answer: B

Question 9

Select the most appropriate meaning of the given idiom.
Put the cart before the horse

- A To do last things first
- B To lie about a situation
- C To follow the logical order
- D To do impractical things

Answer: A

Question 10

Select the most appropriate word for the given group of words.
A sentimental longing or wistful affection for a period in the past

- A Nostalgia
- B Paradise
- C Recollection
- D Harmony

Answer: A

SSC MTS Previous Papers (DOWNLOAD PDF)

Question 11

Select the most appropriate meaning of the given idiom.
In the nick of time

- A After the deadline
- B Much in advance
- C At the last possible moment
- D In the middle of things

Answer: C

Question 12

Select the most appropriate option to substitute the underlined segment. If there is no need to substitute it, select No improvement
Sonia is learnt to play the guitar these days.

- A was learning playing
- B was learning to play
- C is learning to play
- D No improvement

Answer: C

Question 13

Select the correctly spelt word.

- A Undoubtedly
- B Uniique
- C Unforgatable
- D Unfortunately

Answer: D

SSC CGL Previous Papers (DOWNLOAD PDF)

Question 14

Select the most appropriate synonym of the given word.

AFFLUENCE

- A Hardship
- B Poverty
- C Wealth
- D Bankruptcy

Answer: C

Question 15

Select the most appropriate option to substitute the underlined segment. If there is no need to substitute it, select No improvement
I had first gone to Srinagar with mine family in 1961.

- A along my family
- B with my family
- C along mine family
- D No improvement

Answer: B

Question 16

Select the most appropriate word for the given group of words.
One who abstains from alcoholic drinks

- A Vegetarian
- B Non-Vegetarian
- C Drunkard
- D Teetotaller

Answer: D

SSC CGL Free Mock Test (Latest Pattern)

Question 17

Identify the segment in the sentence which contains the grammatical error.
A Superintendent of Police have the authority to suspend an inspector.

- A authority to suspend
- B have the
- C A Superintendent of Police
- D an inspector

Answer: B

Question 18

Identify the segment in the sentence which contains the grammatical error. If there is no error, select 'no error'
My friend usually wakes up late on Sunday mornings.

- A usually wakes up
- B No error
- C My friend
- D late on Sunday mornings

Answer: B

Question 19

Identify the segment in the sentence which contains the grammatical error.
If I had gone to the library I can have borrowed a book.

- A I can have
- B gone to the library
- C borrowed a book
- D If I had

Answer: A

SSC CHSL Free Mock Test (Latest Pattern)

Question 20

Select the most appropriate option to substitute the underlined segment. If there is no need to substitute it, select No improvement
My parents both are doctors.

- A My parents are both
- B Both my parents
- C Both my parent
- D No improvement

Answer: B

Question 21

Select the most appropriate synonym of the given word.

ZEST

- A Indifference
- B Detachment
- C Unconcern
- D Enthusiasm

Answer: D

Question 22

Select the most appropriate antonym of the word.

DISTANT

- A Close
- B Faraway
- C Beyond
- D Remote

Answer: A

SSC Stenographer Previous Papers (Latest Pattern)

Question 23

Select the most appropriate option to fill in the blank and make a grammatically correct sentence.

I would have forgotten my appointment if Susan _____ reminded me about it.

- A hadn't
- B wouldn't
- C haven't
- D had

Answer: A

Question 24

Select the most appropriate antonym of the word.

Better

- A Worse
- B Worst
- C Bad
- D Good

Answer: A

Question 25

Select the most appropriate word to fill in the blank and make a meaningful sentence.

Which _____ should we adopt to increase our sales?

- A promotions
- B strategies
- C functions
- D intentions

Answer: B

SSC GD Constable Free Mock Test (Latest Pattern)

Reasoning

Instructions

For the following questions answer them individually

Question 26

The statements below are followed by two conclusions labelled I and II. Assuming that the information in the statements is true, even if it appears to be at variance with generally established facts, decide which conclusion(s) logically and definitely follow(s) from the information given in the statements.

Statements:

- I. Some dawn s are nights.
- II. No night is a noon.
- III. No dawn is a dusk.

Conclusions:

- I. Some dusks are nights.
- II. Some noons are dawns.

- A Only conclusion II follows.
- B Neither I nor II follows.
- C Either conclusion I or II follows.
- D Only conclusion I follows.

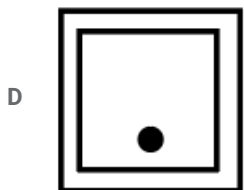
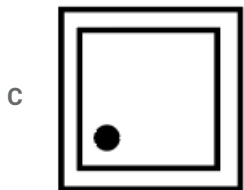
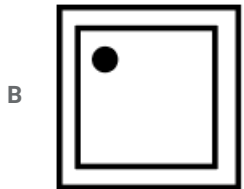
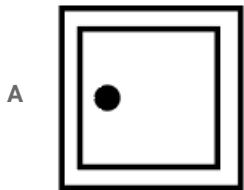
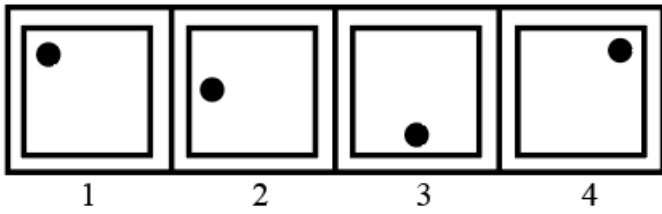
Answer: B

SSC MTS Free Mock Test (Latest Pattern)

Question 27

In the following question, select the figure which can be placed at the sign of question mark (?) from the given alternatives.

Question Figure



Answer: C

Question 28

M, N, P, R, T, W, F and H are sitting around a circle at the centre, P is third to the left of M and second to the right of T. N is second to the right of P. R is second to the right of W who is second to the right of M. F is not an immediate neighbour of P. Who is to the immediate right of P?

A H

B F

C R

D W

Answer: A

Question 29

Select the option that is related to the third term in the same way as the second term is related to the first term.
BUCKET : DSEIGR :: BONUS : ?

- A DPMSU
- B DMSPU
- C DMPSU
- D DSPUM

Answer: C

SSC CPO Free Mock Test (Latest Pattern)

Question 30

Four words have been given out of which three are alike in some manner, while one is different. Choose the odd one.

- A Deer
- B Sheep
- C Cow
- D Donkey

Answer: A

Question 31

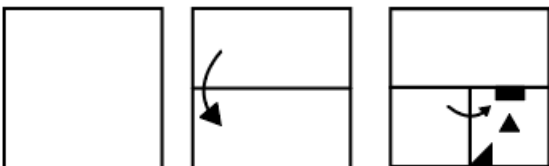
Select the correct option that will fill in the blank and complete the series.
1440, 240, 48, ?, 4, 2





- A 4
- B 6
- C 3
- D 12

Answer: D

Question 32

A piece of paper is folded and punched as shown below in the question figures. From the given answer figures, indicate how it will appear when opened?



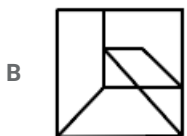
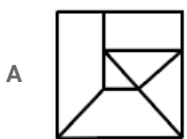
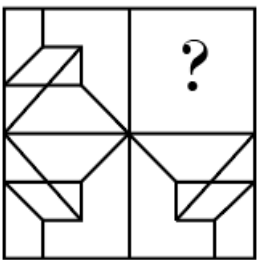


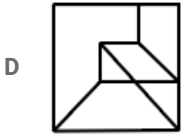
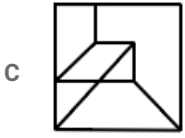
Answer: C

SSC MTS Free Preparation App

Question 33

Which answer figure will complete the pattern in the question figure? (Rotation NOT allowed)





Answer: D

Question 34

Select the option that is related to the third number in the same way as the second number is related to the first number.
735 : 612 :: 476 : ?

A 353

B 336

C 343

D 432

Answer: A

Question 35

If J = 10 and JAM = 130, then JAR = ?

A 170

B 140

C 150

D 180

Answer: D

285 SSC Mocks - Just RS. 249

Question 36

Six people have different heights. U is the tallest one. P is taller than R, who is shorter than S. Q is shorter than R, but taller than T. Who is shortest one?

A Q

B S

C P

D T

Answer: D

Question 37

Satish is 9 ranks ahead of Ajay in the class of 39 students. If Ajay's rank is 15th from the last, then what is Satish's rank from the start?

- A 18th
- B 14th
- C 24th
- D 16th

Answer: D

Question 38

Select the correct combination of mathematical signs to replace * signs and to balance the given equation:
 $28 * 4 * 9 * 16$

- A $- = \times$
- B $- \times +$
- C $\div + =$
- D $+ \div =$

Answer: C

SSC Exam Free Videos (Youtube)

Question 39

If A = 1, B = 3, C = 5 and similarly Z = 51, then find the code for PULSE?

- A 314123379
- B 323412379
- C 342231279
- D 314213279

Answer: A

Question 40

In the following question, select the number which can be placed at the sign of question mark (?) from the given alternatives.

67	39	28
51	?	14
75	28	47

- A 37
- B 26
- C 13

D 41

Answer: A

Question 41

Select the option that is related to the third term in the same way as the second term is related to the first term.
Jasmine : White :: Sunflower : ?

A Indigo

B Yellow

C Violet

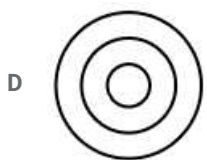
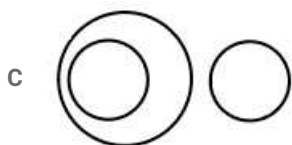
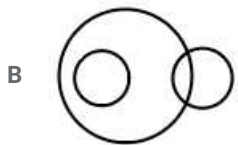
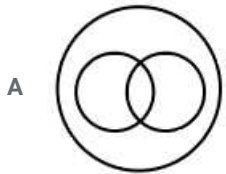
D Pink

Answer: B

SSC Study Material

Question 42

Select the Venn diagram that best represents the given set of classes.
Continent, Country, State



Answer: D

Question 43

In a certain code, 'GRAPH' is written as 'JUZSK'. How is 'CARE' written in that code?

A FZTO

B FZUU

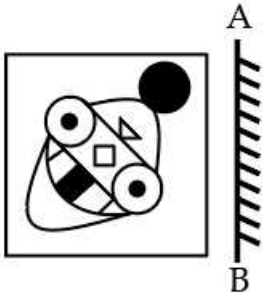
C FZZD

D FZUD

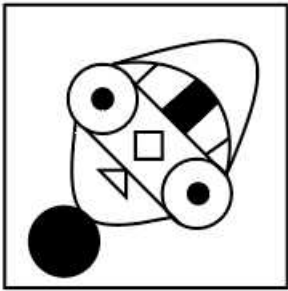
Answer: D

Question 44

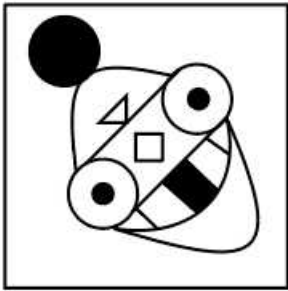
If a mirror is placed on the line AB, then which of the answer figures is the right image of the given figure?



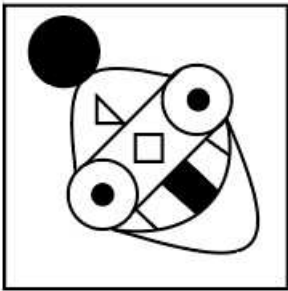
A



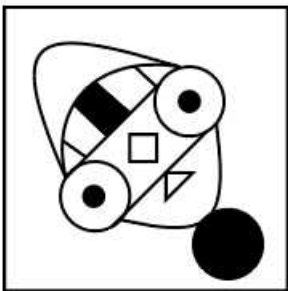
B



C



D



Answer: B

Question 45

Select the option that is related to the third Letter Cluster in the same way as the second Letter Cluster is related to the first Letter Cluster.

BDHP : CFJT :: PHDB : ?

- A BSWN
- B HWSH
- C HSWH
- D QJFF

Answer: D

Question 46

If A stands for '+', B stands for '-', C stands for '×', what would be the value of the given equation?

(10 C 4) A (4 C 4) B 6 = ?

- A 46
- B 60
- C 50
- D 56

Answer: C

Question 47

Read the given statement and conclusions carefully and decide which of the conclusions logically follow(s) from the statement.

Statement:

Road offers the fastest connectivity between Agra and Delhi.

Conclusions:

- I. There is no rail connectivity between Agra and Delhi.
- II. There is no air connectivity between Agra and Delhi.

- A Neither conclusion I nor conclusion II follows.
- B Only conclusion II follows.
- C Only conclusion I follows.
- D Either conclusion I or conclusion II follows.

Answer: A

SSC GK Free Tests

Question 48

Find the wrong term in the given number series:

34, 32, 35, 33, 36, 37

- A 33
- B 37

C 32

D 34

Answer: B

Question 49

In a certain code, 'MIGHTY' is written as 'BJFISN'. How is 'BUILDER' written in that code?

A IHVMGFY

B IVHMCIFY

C YUIMCFI

D YFCMHVI

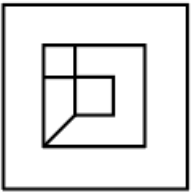
Answer: B

Question 50

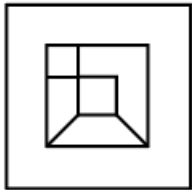
From the given answer figures, select the one in which the question figure is hidden/embedded.



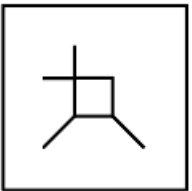
A



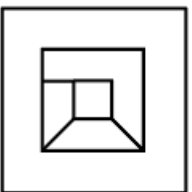
B



C



D



Answer: B

Quant

Instructions

For the following questions answer them individually

Question 51

The ratio of boys and girls in a college was 4 : 5. New students got admitted and the number of boys went up by 50% and the number of girls went up by 60%. What is the new ratio of boys and girls in the college?

- A 3 : 5
- B 3 : 4
- C 5 : 8
- D 2 : 3

Answer: B

Current Affairs Question and Answers (Download PDF)

Question 52

What is the value of the square root of:

$$[\{(100 \text{ of } 0.9 \times 0.8 - 7 \times 1.2 \div 0.2 + 5 \times 4 - 3 \times 2)\} \div 10 + 1.85]$$

- A 12.25
- B 2.5
- C 6.25
- D 3.5

Answer: B

Question 53

How much will a principal of ₹5000 invested on compound interest (compounded annually) amount to, in three years at a rate of 50% per annum?

- A ₹16,375
- B ₹11,250
- C ₹16,875
- D ₹17,275

Answer: C

Question 54

For every ₹5 worth of revenue, a retailer earns ₹1. If the cost of the goods was ₹4800, then how much did he earn?

- A ₹600
- B ₹900
- C ₹1200

D ₹1120
Answer: C

Daily and Monthly Current Affairs (Download PDF)

Question 55

The simple interest on ₹x for m years at a rate of r% is equal to the same on ₹y for n years at the rate of s%. then $\frac{x}{y}$ is equal to:

A $\frac{nr}{ms}$

B $\frac{ns}{mr}$

C $\frac{ms}{nr}$

D $\frac{mr}{ns}$

Answer: B

Question 56

The Table given below presents the annual expenses (in thousands) on various heads made by a firm during 2006-2010. By how much percentage (correct up to two decimal places) is the average expenditure on purchases more than the average expenditure on rent?

Year	Particulars				
	Purchases	Wages	Rent	Interest	Delivery
2006	23500	35000	40000	16000	16000
2007	28500	24000	34000	14000	18000
2008	38500	30000	36000	22000	22000
2009	41000	36000	20000	18000	22000
2010	50000	40000	28000	16000	26000

A 14.23

B 8.00

C 10.00

D 14.87

Answer: D

Question 57

A cricket team has scored 156 runs in 30 overs. They need to score 275 in 50 overs. What is the average runs per over they need to score in the next 20 overs?

A 5.75

B 5.95

C 5.85

D 5.9

Answer: B

SSC CHSL Previous Papers (DOWNLOAD PDF)

Question 58

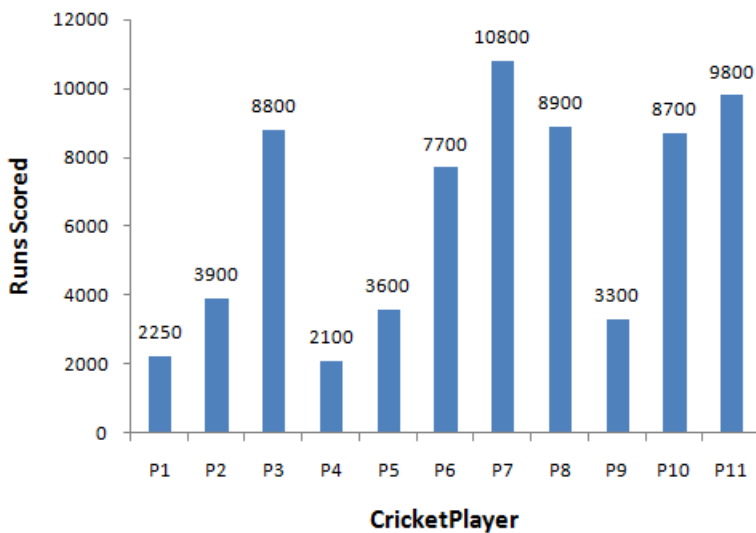
A vegetable seller bought 10 dozens of potatoes for ₹120, another 5 dozens for ₹50 and another 5 dozens for ₹30. He sold the potatoes for ₹9 a dozen. How much discount did he overall offer?

- A 11.11%
- B 5%
- C 7.5%
- D 10%

Answer: D

Question 59

The Bar graph given below presents the runs scored by eleven cricketers, named P1, P2, P3, P4, ... P11 in their respective careers which lasted for five years in each case. Which cricketer bridges the gap between the highest and the lowest scorers of runs?



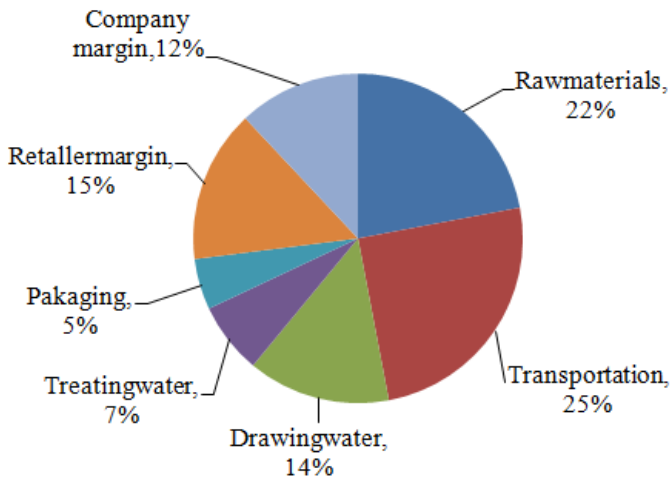
- A P8
- B P6
- C P10
- D P3

Answer: C

Question 60

The Pie chart given below presents the distribution of costs of making a water bottle by a company. If the company earns 20% on cost per bottle and the cost of packaging one bottle is ₹0.50, then what is the selling price of one bottle?

Distribution of costs of making a Water bottle



- A ₹12.50
- B ₹12
- C ₹15
- D ₹10

Answer: B

SSC Stenographer Previous Papers (Download PDF)

Question 61

An experienced carpenter can complete a woodwork in 8 days. A young carpenter can complete the same work in 12 days. Both work together for 3 days, and then the latter leaves. How many days will be taken by the former to complete the remaining work?

- A 3
- B 4
- C 2
- D 6

Answer: A

Question 62

Find the median of the given data:

3, 2, 6, 4, 9, 7, 11, 5, 15

- A 4
- B 5
- C 6
- D 7

Answer: C

Question 63

What is the volume of the sphere whose diameter is 42 cm?(Take $\pi = \frac{22}{7}$)

- A 9702 cm^3
- B 38808 cm^3
- C 10404 cm^3
- D 58212 cm^3

Answer: B

SSC GD Constable Previous Papers

Question 64

X and Y together have ₹1300. If ₹10 less than three-fifth of the amount of X is equal to half of the amount of Y, then how much does X have?

- A ₹700
- B ₹600
- C ₹550
- D ₹650

Answer: B

Question 65

A man can row a boat in still water at a speed of 5 m/s. He covers a stretch of 200 m in a river downstream during high and low tides in 10 s and 25 s respectively. What is the ratio of the speed (in m/s) of the water flowing in the river during high and low tides?

- A 5 : 3
- B 5 : 1
- C 3 : 2
- D 4 : 3

Answer: B

Question 66

What is the proportion equivalent to $\frac{X}{Y} : \frac{Y}{Z} : \frac{X}{Z}$, if $X : Y : Z = 4 : 7 : 9$?

- A 36 : 49 : 32
- B 16 : 21 : 14
- C 36 : 51 : 28
- D 36 : 49 : 28

Answer: D

SSC MTS Previous Papers (DOWNLOAD PDF)

Question 67

A temple has five bells which ring at the intervals of 12, 15, 16, 20 and 25 minutes respectively. If they ring together at midnight, then at what time next will they ring together?

- A 8:00 P.M.
- B 7:00 P.M.
- C 7:30 P.M.
- D 8:30 P.M.

Answer: A

Question 68

A spherical ball of diameter 35 cm rolls 20 times. How much is the distance (in m) covered by it? (Take $\pi = \frac{22}{7}$)

- A 22
- B 20
- C 35
- D 44

Answer: A

Question 69

What is the value of:

$$(1 \times 2 + 3 \times 4 + 5 \times 6 + 7 \times 8 - 9 \times 10) \div 2 \text{ of } 5?$$

- A 1
- B 3
- C 2
- D 4

Answer: A

SSC CGL Previous Papers (DOWNLOAD PDF)

Question 70

30 dozens of nuts were bought for ₹14400. If the nuts are sold in a packet of 5 for ₹250, then how much profit is earned?

- A ₹3200
- B ₹3600
- C ₹4000

D ₹1440

Answer: B

Question 71

A rectangular park was redesigned and as a result of which its length increased by 50%. If the area of the park, remained unchanged, then by how much percentage had the breadth been reduced?

A 25

B 50

C 33.33

D 40.33

Answer: C

Question 72

A and B can do a piece of work alone in 15 and 30 days respectively. In how many days can they together complete the work?

A 10

B 8

C 9

D 12

Answer: A

SSC CGL Free Mock Test (Latest Pattern)

Question 73

The length and the breadth of a cuboid are increased by 10% each, whereas the height is reduced by 10%. By how much did the volume change?

A 10% decrease

B 8.9% increase

C 8.9% decrease

D 10% increase

Answer: B

Question 74

A man on tour travels first 360 km by train at 72 km/h, the next 160 km on a motor cycle at 12.80 km/h, and the last 200 km by on bicycle at 16 km/h. Ignoring the buffer times between the different modes of travel, what is the average speed (in m/s) for his tour?

A 6.67

B 7.33

C 4.33

D 5.67

Answer: A

Question 75

The average weight of a group of eight peoples increased by 2.5 kg when a person weighing 80 kg joined in place of one of the members of the group. The weight of the member replaced was:

- A 60 kg
- B 77.5 kg
- C 70 kg
- D 62.5 kg

Answer: A

SSC CHSL Free Mock Test (Latest Pattern)

General knowledge

Instructions

For the following questions answer them individually

Question 76

Upper House of the Indian Parliament is also known as ____.

- A Lok Sabha
- B Rajya Sabha
- C Vidhan Parishad
- D Vidhan Sabha

Answer: B

SSC Stenographer Previous Papers (Latest Pattern)

Question 77

Peacock Island Temple is also known as ____.

- A Umananda Temple
- B Kailashnath Temple
- C Tirupati Temple
- D Jagannath Temple

Answer: A

Question 78

How many elements are there in the periodic table such that for every element name there is a single alphabet that symbolically represents it (for example, B-Boron, C-Carbon etc.)?

- A 10

B 17

C 7

D 14

Answer: D

Question 79

Name the actor who got the best Lead Actor (Male) award in the British Academy Film Awards (BAFTA) in 2019.

A Rami Malek

B Steve Coogan

C Bradley Cooper

D Christian Bale

Answer: A

SSC GD Constable Free Mock Test (Latest Pattern)

Question 80

Which of the following rivers does NOT drain into the sea?

A Godavari

B Narmada

C Banas

D Ganga

Answer: C

Question 81

Which Economic Survey was also called 'Pink Economic Survey' ?

A Economic Survey 2017-18

B Economic Survey 2015-16

C Economic Survey 2016-17

D Economic Survey 2018-19

Answer: A

Question 82

Which event led to the termination of Non-Cooperation - Khilafat Movement by Gandhiji?

A Passing of Rowlatt Act

B Chauri - Chaura Incident

C Death of Bal Gangadhar Tilak

D Jallianwala Bagh Massacre

Answer: B

SSC MTS Free Mock Test (Latest Pattern)

Question 83

What is Nominal Gross Domestic Product (GDP)?

- A The Gross Domestic Product (GDP) that is calculated in terms of crypto currency.
- B The Gross Domestic Product (GDP) that is calculated by taking a base year as a determinant.
- C The Gross Domestic Product (GDP) that is calculated at the current market price.
- D The Gross Domestic Product (GDP) that excludes all exports and imports in the calculation.

Answer: C

Question 84

What is the peculiarity of the compound Yttrium Barium Copper Oxide (YBCO)?

- A It is a highly radioactive material
- B It is a high temperature superconductor
- C It is an almost 100% transparent material
- D It has got very high malleability and ductility

Answer: B

Question 85

Black soil is mostly found in which part of India?

- A Himalayas
- B Peninsular Plateau
- C Desert
- D Coastal Plains

Answer: B

SSC CPO Free Mock Test (Latest Pattern)

Question 86

Fine leg, Gully, and Midwicket are terms associated with which Sport?

- A Football
- B Cricket
- C Volleyball
- D Hockey

Answer: B

Question 87

Where is Shore Temple located in India?

- A Kanchipuram
- B Chennai
- C Sarnath
- D Mahabalipuram

Answer: D

Question 88

"The general theory of Employment, Interest and money" (1936) was written by ____.

- A Dr. A.P.J. Abdul Kalam
- B Adam Smith
- C John Maynard Keynes
- D Amartya sen

Answer: C

SSC MTS Free Preparation App

Question 89

What is the S.I. unit of Energy?

- A Joule
- B Newton
- C Hertz
- D Pascal

Answer: A

Question 90

Southernmost point of the Peninsular Plateau is marked by which of the following hills?

- A Velikonda
- B Girnar
- C Nilgiri
- D Anaconda

Answer: C

Question 91

Which metal was earlier called Wolfram?

- A Tungsten
- B Molybdenum
- C Zinc
- D Radium

Answer: A

285 SSC Mocks - Just RS. 249

Question 92

Wangala festival is celebrated in which of the following states of India?

- A Bihar
- B Kerala
- C Tamil Nadu
- D Meghalaya

Answer: D

Question 93

Which of the following organisations is the governing body of World Tennis?

- A Tennis Council
- B International Tennis Council
- C Tennis Federation
- D International Tennis Federation

Answer: D

Question 94

Who was the first National Security Advisor of India?

- A Pankaj Singh
- B Manmohan Singh
- C Prof. Rajinder Khanna
- D Brajesh Mishra

Answer: D

SSC Exam Free Videos (Youtube)

Question 95

Elections to Panchayats in a State are conducted by _____.

- A Election Commission of India
- B Joint Public Service Commission
- C State Election Commission
- D Gram Sabha

Answer: C

Question 96

The split in Congress occurred in which of the following sessions?

- A Karachi Session 1934
- B Lahore Session 1927
- C Kanpur Session 1922
- D Surat Session 1907

Answer: D

Question 97

Raja Ravi Varma, considered as one of the greatest painters of India, hailed from which of these states?

- A Maharashtra
- B Karnataka
- C West Bengal
- D Kerala

Answer: D

SSC Study Material

Question 98

Which amendment of the Constitution is called as the 'mini constitution of India' and was brought in during the national emergency in the year 1976?

- A 54th Amendment
- B 25th Amendment
- C 24th Amendment
- D 42nd Amendment

Answer: D

Question 99

Which of the following pairs represents a parasitic relationship?

- A Algae - Coral reefs
- B Ticks on Dog
- C Remora Fish - Sharks
- D Cattle Egrets - Livestock

Answer: B

Question 100

In which year, first Gender Budget Statement appeared in the Union Budget of India?

- A 2001-02
- B 2005-06
- C 2010-11
- D 2007-08

Answer: B

SSC Daily Practice Set

SSC CHSL Previous Papers (DOWNLOAD PDF)

SSC Stenographer Previous Papers (Download PDF)

SSC GD Constable Previous Papers

SSC MTS Previous Papers (DOWNLOAD PDF)

SSC CGL Previous Papers (DOWNLOAD PDF)

SSC CGL Free Mock Test (Latest Pattern)

SSC CHSL Free Mock Test (Latest Pattern)

SSC Stenographer Previous Papers (Latest Pattern)

SSC GD Constable Free Mock Test (Latest Pattern)

SSC MTS Free Mock Test (Latest Pattern)

SSC CPO Free Mock Test (Latest Pattern)

SSC MTS Free Preparation App

285 SSC Mocks - Just RS. 249

SSC Exam Free Videos (Youtube)

SSC Study Material

SSC Daily Practice Set

SSC GK Free Tests

SSC GK Questions

Current Affairs Question and Answers (Download PDF)

Daily and Monthly Current Affairs (Download PDF)