



SSC MTS 16th August 2019 Shift-2

All rights reserved. No part of this publication may be reproduced, distributed, or transmitted in any form or by any means, electronic, mechanical, photocopying, recording or otherwise, or stored in any retrieval system of any nature without the permission of cracku.in, application for which shall be made to support@cracku.in

Instructions

For the following questions answer them individually

Question 1

Select the most appropriate option to fill in the blank and make a grammatically correct sentence.

Although I had never seen her before, I _____ her from a photograph.

- A recognized
- B recognize
- C have recognized
- D am recognizing

Answer: A

SSC CHSL Previous Papers (DOWNLOAD PDF)

Question 2

Select the most appropriate word for the given group of words.

A hollow space in a wall for a statue or ornament

- A Cornice
- B Nook
- C Slot
- D Niche

Answer: D

Question 3

Select the most appropriate synonym of the given word.

FEROCIOUS

- A Fierce
- B Domesticated
- C Gentle
- D Tame

Answer: A

Question 4

Select the most appropriate word to fill in the blank and make a meaningful sentence.

The two friends were too _____ to admit that they were wrong.

- A satisfied
- B voluntary
- C reasonable

D stubborn

Answer: D

SSC Stenographer Previous Papers (Download PDF)

Question 5

Select the most appropriate option to substitute the underlined segment in the given sentence. If there is no need to substitute it, select No improvement

I don't remember exactly when did I go to Shimla last year.

A No improvement

B when I was going

C when I go

D when I went

Answer: D

Question 6

Select the correctly spelt word.

A Obedient

B Villian

C Truely

D Godess

Answer: A

Instructions

Identify the segment in the sentence which contains the grammatical error.

Question 7

Due to a last minute snag, the mission on a moon had to be cancelled.

A the mission

B on a moon

C had to be cancelled

D Due to a last minute snag

Answer: B

SSC GD Constable Previous Papers

Question 8

Rita was a model so she would starve herself to maintain their body weight.

A their body weight

- B Rita was a model
- C so she would starve herself
- D to maintain

Answer: A

Instructions

For the following questions answer them individually

Question 9

Select the correctly spelt word.

- A Assimilate
- B Assassination
- C Appearance
- D Agression

Answer: A

Question 10

Select the most appropriate meaning of the given idiom.
Throw in the towel

- A To decide firmly
- B To provoke someone
- C To take a shower
- D To admit defeat or failure

Answer: D

SSC MTS Previous Papers (DOWNLOAD PDF)

Question 11

Select the most appropriate option to fill in the blank and make a grammatically correct sentence.
Kevin lives by the sea and he's got a boat, so he often _____ sailing.

- A goes
- B is going
- C go
- D has gone

Answer: A

Question 12

Select the most appropriate antonym of the word.
FACILITATE

- A Hinder
- B Encourage
- C Aid
- D Ease

Answer: A

Question 13

Identify the segment in the sentence which contains the grammatical error.
The priest request all the wealthy men to donate money for building a new temple.

- A to donate money
- B all the wealthy men
- C for building a new temple
- D The priest request

Answer: D

SSC CGL Previous Papers (DOWNLOAD PDF)

Question 14

Select the most appropriate antonym of the word.
HARMONY

- A Consensus
- B Agreement
- C Accord
- D Strife

Answer: D

Question 15

Select the most appropriate synonym of the given word.
INTRICATE

- A Straightforward
- B Simple
- C Complicated
- D Plain

Answer: C

Question 16

Select the most appropriate option to substitute the underlined segment in the given sentence. If there is no need to substitute it, select No improvement

Rajesh didn't know my address.

- A No improvement
- B didn't known
- C didn't knew
- D don't knew

Answer: A

SSC CGL Free Mock Test (Latest Pattern)

Question 17

Select the most appropriate word for the given group of words.
A specialist who treats diseases of the nervous system

- A Neurologist
- B Orthopaedic
- C Paediatrician
- D Gynaecologist

Answer: A

Question 18

Select the most appropriate option to substitute the underlined segment in the given sentence. If there is no need to substitute it, select **No improvement**

The two thieves divided the loot among themselves.

- A No improvement
- B between themselves
- C with them
- D among them

Answer: B

Question 19

Select the most appropriate word to fill in the blank and make a meaningful sentence.
As a goodwill _____, I took some colleagues out for a meal.

- A indication
- B gesture
- C reminder
- D token

Answer: B

SSC CHSL Free Mock Test (Latest Pattern)

Question 20

Select the most appropriate meaning of the given idiom.
Know something inside out

- A To know something superficially
- B To know something from a distance
- C To have only a slight idea about something
- D To know everything about something

Answer: D

Instructions

In the following passage some words have been deleted. Fill in the blanks with the help of the alternatives given. Select the most appropriate option for each blank.

Comprehension:

The interior of the Earth has three chief layers. (1)_____are known as the crust, the mantle and the core. There is a thick layer of soil (2)_____ the outer crust. It is found only in (3)_____ parts of the Earth. It consists of disintegrated rock and (4)_____ organic matter called humus. It is this soil which is indispensable for the plant (5)_____.

Question 21

Select the most appropriate option to fill in blank No.1

- A Those
- B This
- C It
- D These

Answer: D

Question 22

Select the most appropriate option to fill in blank No.2

- A in
- B to
- C on
- D for

Answer: C

SSC Stenographer Previous Papers (Latest Pattern)

Question 23

Select the most appropriate option to fill in blank No.3

- A any
- B many

C more

D certain

Answer: D

Question 24

Select the most appropriate option to fill in blank No.4

A collapsed

B decomposed

C corroded

D composed

Answer: B

Question 25

Select the most appropriate option to fill in blank No.5

A increase

B growth

C hike

D rise

Answer: B

SSC GD Constable Free Mock Test (Latest Pattern)

Reasoning

Instructions

For the following questions answer them individually

Question 26

Among 6 persons A, B, C, D, E and F, it is known that; A is taller than at-least 3 persons. C is taller than B, who is taller than exactly 1 person. D is not shorter than C. E is taller than A and D is shorter than A. Who is 4th shortest person among all?

A A

B C

C D

D F

Answer: C

SSC MTS Free Mock Test (Latest Pattern)

Question 27

Select the term that will come next in the following series.

ELFA, GLHA, ILJA, _____, MLNA

- A KLLA
- B KLMA
- C LLMA
- D OLPA

Answer: A

Question 28

Select the option that is related to the third letter-Cluster in the same way as the second letter-Cluster is related to the first letter-Cluster.

AhbH : HbhA :: YfgT : ?

- A YfgT
- B TgfY
- C TfgY
- D YgfT

Answer: B

Question 29

In a certain code, 'PHYSICS' is written as 'CHIPSSY'. How is 'HISTORY' written in that code?

- A HIORTSY
- B HIORSYT
- C HIORSTY
- D HIOSRTY

Answer: C

SSC CPO Free Mock Test (Latest Pattern)

Question 30

Select the option that is analogous to the given set of words.

? : music :: calculator : calculation

- A Notebook
- B Trumpet
- C Bird
- D Phone

Answer: B

Question 31

Select the option that is related to the third term in the same way as the second term is related to the first term.

Austria : Vienna :: Jordan : ?

- A Arab
- B Syria
- C Amman
- D Lebanon

Answer: C

Question 32

In a certain code, 'TABLE' is written as 'IPFEX'. How will 'SCRAP' be written as in the same code?

- A RBQZO
- B TEVGW
- C VAUDM
- D TDSBQ

Answer: B

SSC MTS Free Preparation App

Question 33

In a certain language if 'APPLES' is coded as '123456' and 'CANCEL' is coded as '918954', then state which the correct code for below word is.

'CLEANESS'

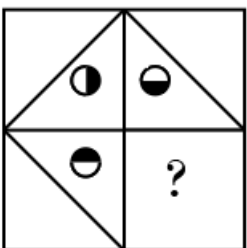
- A 45399824
- B 94518566
- C 89214634
- D 98263332

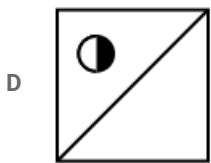
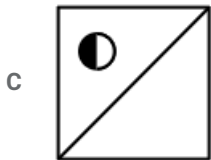
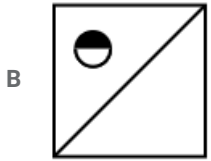
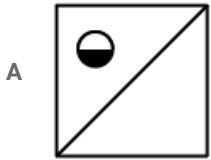
Answer: B

Question 34

Which answer figure will complete the pattern in the question figure?

Question Figure





Answer: C

Question 35

Study the following information carefully and answer the questions given below.

- (i) Eight boys P, Q, R, S, T, U, V and W are sitting in a circular table.
- (ii) P and Q are sitting opposite to each other.
- (iii) S is sitting second to the right of P and V is sitting second to the right of Q.
- (iv) T and W are sitting opposite to each other.
- (v) R is sitting between P and V.

What is the position of T with respect to Q?

- A Second to the left
- B Third to the right
- C Third to the left
- D Second to the right

Answer: C

285 SSC Mocks - Just RS. 249

Question 36

The statements below are followed by two conclusions labelled I and II. Assuming that the information in the statements is true, even if it appears to be at variance with generally established facts, decide which conclusion(s) logically and definitely follow(s) from the information given in the statements.

Statement:

- I. Some accountants are managers.
- II. Some accountants are cashiers.

Conclusions:

- I. All cashiers are accountants.
- II. Some managers are accountants.

- A Only conclusion II follows.
- B Either conclusion I or conclusion II follows.
- C Only conclusion I follows.
- D Both conclusion I and II follow.

Answer: A

Question 37

Select the number that can replace the question mark (?) in the following series.
3, 7, 15, 31, 63, ?

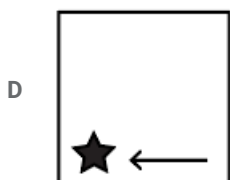
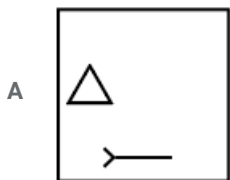
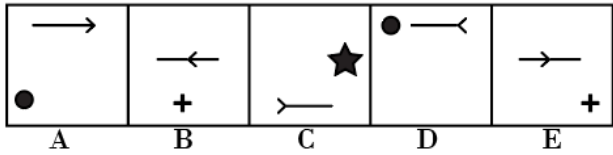
- A 127
- B 131
- C 92
- D 115

Answer: A

Question 38

In the following question, select the figure which can be placed at the sign of question mark (?) from the given alternatives.

Question Figure



Answer: B

SSC Exam Free Videos (Youtube)

Question 39

Read the given statement and conclusions carefully and decide which of the conclusions logically follow(s) from the statement.

Statement:

Sound cannot travel in vacuum.

Conclusions:

I. We cannot hear sound of explosion in vacuum.

II. We cannot hear sound of explosion in at mosphere.

A Neither conclusion I nor conclusion II follow.

B Either conclusion I or conclusion II follows.

C Only Conclusions II follows.

D Only Conclusion I follows.

Answer: D

Question 40

Select the option that is related to the third number in the same way as the second number is related to the first number.

9 : 28 :: 56 : ?

A 3

B 169

C 18

D 112

Answer: B

Question 41

Select the number that can replace the question mark (?) in the following series.

1500, 745, 370, 180, 87.5, ?

A 38.5

B 36.5

C 38.75

D 36.25

Answer: C

SSC Study Material

Question 42

If '×' means '÷', '-' means '×', '÷' means '+' and '+' means '-' then

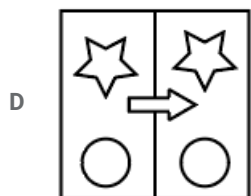
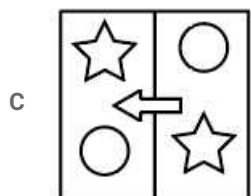
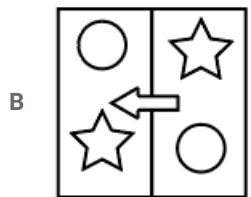
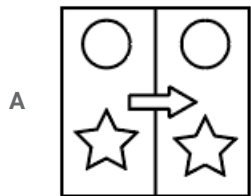
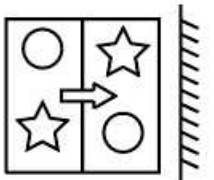
$(3 - 15 \div 11) \times 8 + 7 = ?$

- A 8
- B 1
- C 0
- D 4

Answer: C

Question 43

If a mirror is placed on the line AB, then which of the answer figures is the right image of the given figure?



Answer: C

Question 44

Six friends A, B, C, D, E and F are standing in a row. B is exactly in between F and D. E is standing in between A and C. A is not a neighbor of D and F. C is not a neighbor of D but immediate right of F. F is standing in between which of the following pair?

- A B and D
- B B and A
- C C and A

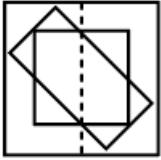
D B and C

Answer: D

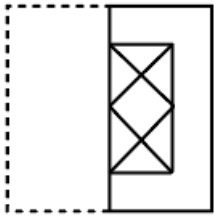
SSC Daily Practice Set

Question 45

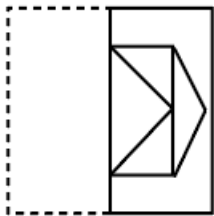
Observe the following figure (A) and Identify the correct figure If the figure (A) is folded at the dotted line.



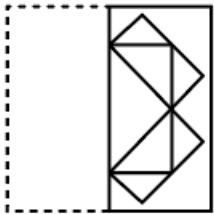
A



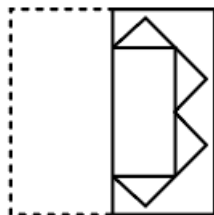
B



C



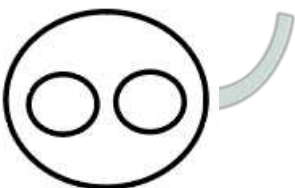
D



Answer: C

Question 46

Select the set of classes that best represents the given Venn diagram.



A Doctor, Nurse, Patient

- B Sun, Moon, Water
- C Human, Sea, Mountain
- D Domestic Animal, Dog, Buffalo

Answer: D

Question 47

If in a certain way, $3 + 4 = 25$ and $7 + 24 = 625$, then find $9 + 40 = ?$

- A 2048
- B 1709
- C 1649
- D 1681

Answer: D

SSC GK Free Tests

Question 48

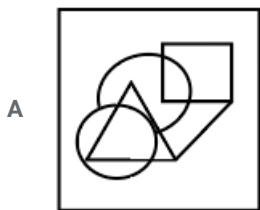
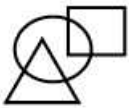
In a certain language if 'FLY' is coded as '285' and 'ACCESS' is coded as '399711', then state the correct code for below word: 'CYCLE'

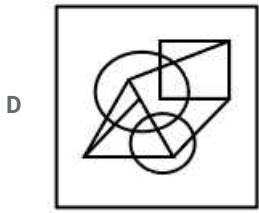
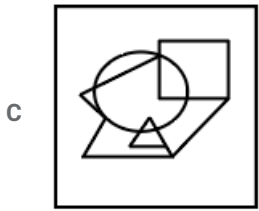
- A 95897
- B 95978
- C 98597
- D 95987

Answer: D

Question 49

From the given answer figures, select the one in which the question figure is hidden/embedded.





Answer: D

Question 50

In the following question, select the number which can be placed at the sign of question mark (?) from the given alternatives.

24 61 49
56 94 66
32 ? 61

A 58

B 94

C 82

D 77

Answer: D

SSC GK Questions

Quant

Instructions

For the following questions answer them individually

Question 51

The ratio of speeds of two aeroplanes is 7 : 15. If the first flight covers a distance of 1050 km in 3 hours, then what is the speed of the 2nd flight?

A 900 km/h

B 675 km/h

C 750 km/h

D 720 km/h

Answer: C

Current Affairs Question and Answers (Download PDF)

Question 52

The ratio between the volume (in cm^3) and the curved surface area (in cm^2) of a cylinder is numerically 14 : 1. If the height of the cylinder is 50 cm, then what is the volume of the cylinder? (Take $\pi = \frac{22}{7}$)

- A 61600 cm^3
- B 92400 cm^3
- C 123200 cm^3
- D 184800 cm^3

Answer: C

Question 53

A student obtained 32% marks and he failed by 6 marks. If he had scored 36% marks, he would have been passed by 2 marks. What is the passing marks (score)?

- A 70
- B 80
- C 66
- D 75

Answer: A

Question 54

The difference of cubes of two numbers is 999. The numbers are in the ratio of 4 : 3. What is the square of the smaller number?

- A 100
- B 49
- C 64
- D 81

Answer: D

Daily and Monthly Current Affairs (Download PDF)

Question 55

6 pencils cost ₹30 and 12 pens cost ₹120. What is the average cost of 50 pencils and 50 pens?

- A ₹5.75
- B ₹6.75
- C ₹5
- D ₹7.5

Answer: D

Question 56

If $0.8 : X :: 5 : 8$, then what is X equal to?

- A 1.16
- B 1.24
- C 1.32
- D 1.28

Answer: D

Question 57

A man starts off on a journey. He travelled for 16 hours in total. First half of the distance was covered at 40 km/h and the second half at 60 km/h. What was the distance covered?

- A 576 km
- B 960 km
- C 384 km
- D 768 km

Answer: D

SSC CHSL Previous Papers (DOWNLOAD PDF)

Question 58

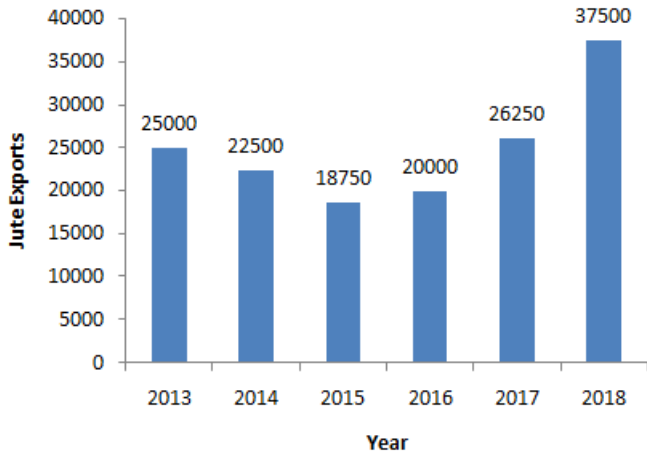
The median of the first seven prime numbers, is:

- A 7
- B 5
- C 13
- D 11

Answer: A

Question 59

The following bar chart shows the quantity (in million kg) of grains exported by a country during from 2013-2018. By how much percent is the maximum export greater than the minimum export during the given period?



- A 75%
- B 50%
- C 100%
- D 66.67%

Answer: C

Question 60

What is the sum of the digits of the largest six-digit number divisible by 3, 4, 5 and 6?

- A 45
- B 42
- C 39
- D 48

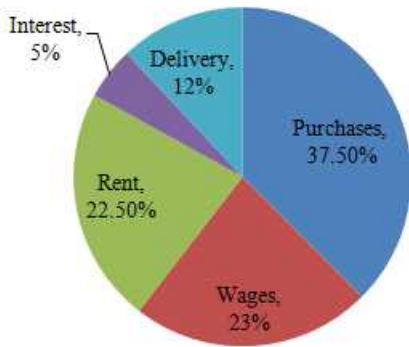
Answer: B

SSC Stenographer Previous Papers (Download PDF)

Question 61

The Pie chart depicts the allocation of the revenue towards the expenses of a particular company. If the company's sales are ₹4000000 and 75% of the revenue is allocated towards expenses, then what is the total amount spent on Wages and Delivery?

Distribution of the expenses of Company



- A ₹14,00,000
- B ₹10,50,000
- C ₹7,00,000
- D ₹8,75,000

Answer: B

Question 62

A, B and C can alone do a task in 40, 120 and 36 days, respectively. A and B together work for 20 days and leave the task incomplete. C resumes it and complete it alone. How many days did C take to complete it?

- A 20
- B 16
- C 18
- D 12

Answer: D

Question 63

A family consists of two grandparents, two parents and four children. Two years ago, the average age of the grandparents was 72 years. One year ago, the average age of parents was 36 years. At present, the average age of the children is 12 years. What is the present average age of the family?

- A 33.75 years
- B 32.75 years
- C 32 years
- D 33 years

Answer: A

Question 64

What is the volume of a cube whose side measures 7.5 cm?

- A 210.94 cm^3
- B 759.375 cm^3
- C 421.875 cm^3
- D 631.81 cm^3

Answer: C

Question 65

What is the difference between the compound interests on ₹10000 for two years at 20% per annum when the interests are compounded half-yearly and yearly respectively?

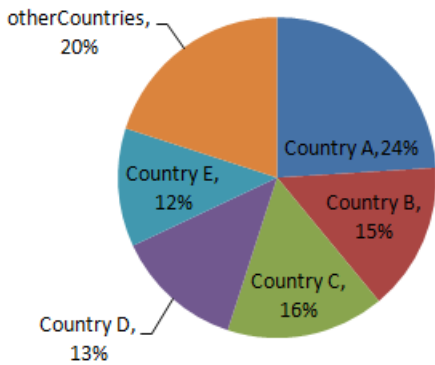
- A ₹441
- B ₹440
- C ₹240
- D ₹241

Answer: D

Question 66

The following Pie chart shows the market share of exporting countries. If a country X constitutes 40% of the share of 'other countries' and the quantity of exports by Country B is ₹15 million, then the quantity exported by Country X, is:

Market share of Exporting Countries



- A ₹4 million
- B ₹1.6 million
- C ₹2 million
- D ₹8 million

Answer: D

SSC MTS Previous Papers (DOWNLOAD PDF)

Question 67

A and B can together complete a task in 21 days. If A alone takes 42 days to complete the task, the number of days that B would take to do the task alone is:

- A 27
- B 32
- C 42
- D 36

Answer: C

Question 68

If selling price of a product is multiplied by 2, then the resultant profit is 6 times the original profit. What is the original profit percentage?

- A 10
- B 25
- C 15
- D 20

Answer: B

Question 69

The value of $2 \times 2 + 4 \times 4 + 2x$ of $3 \times 6 - 7 \times (5 + 4 \div 2)$ is:

- A 4
- B 6
- C 7
- D 5

Answer: C

SSC CGL Previous Papers (DOWNLOAD PDF)

Question 70

A, B, C and D are to share profits in the ratio of 4 : 8 : 11 : 15. If the difference between the minimum and maximum proportions is ₹22000, then what is the sum of the other 2 proportions?

- A ₹38000
- B ₹37050
- C ₹36100
- D ₹39900

Answer: A

Question 71

If the radius of a cylinder is doubled and the height is reduced by 50%, then by how much percent does the volume increase/decrease?

- A 66.67% decrease
- B 75% increase
- C 50% decrease
- D 100% increase

Answer: D

Question 72

A company bought a machine for ₹40000 and spent ₹10000 on its repairs. After some time, the machine was sold for ₹45000. How much discount was offered?

- A 5%
- B $7\frac{1}{2}\%$
- C $\frac{100}{9}\%$
- D 10%

Answer: D

SSC CGL Free Mock Test (Latest Pattern)

Question 73

An item was sold for ₹500. If the selling price was 10% less, the profit would have been 12.5%. What is the cost price of the item?

- A ₹360
- B ₹400
- C ₹420
- D ₹480

Answer: B

Question 74

How much time will it take a principal of ₹640 to yield ₹768 as an amount at 2.5% simple interest per annum?

- A 11 years
- B 9 years
- C 10 years
- D 8 years

Answer: D

Question 75

If $(28 \div 4 \times 7) + (44 \div 4 \times 7) - (12 \times x) = 18$, then the value of x is:

- A 9
- B 12
- C 6
- D 3

Answer: A

SSC CHSL Free Mock Test (Latest Pattern)

General knowledge

Instructions

For the following questions answer them individually

Question 76

If RBI raise repo rate, what is its likely impact on Indian economy?

- A Loans will become cheaper
- B Inflation will decrease
- C Reverse repo rate will decrease
- D Inflation will increase

Answer: B

SSC Stenographer Previous Papers (Latest Pattern)

Question 77

Which of the following monetary tools is used by the RBI to control the inflation?

- A Repo rate
- B Austerity measures
- C Fiscal incentives
- D Fiscal budget

Answer: A

Question 78

Name the Indian-origin scientist who got Canada's highest civilian award - The Order of Canada - for his three decades of pioneering research on workplace injury and the spine.

- A Ravi Baichwal
- B Shrawan Kumar
- C Jeet Aulakh

D Bharat Agnihotri

Answer: B

Question 79

In physics, what is the Hubble Constant?

A The unit of measurement that describes expansion of universe

B The permittivity of free space

C The speed of light in vacuum

D The total energy of blackbody radiators

Answer: A

SSC GD Constable Free Mock Test (Latest Pattern)

Question 80

What fraction of a rupee is one anna, which was a part of the old currency system of India?

A $\frac{1}{6}$ th of a rupee

B $\frac{1}{20}$ th of a rupee

C $\frac{1}{10}$ th of a rupee

D $\frac{1}{16}$ th of a rupee

Answer: D

Question 81

How many members are there in the Monetary Policy Committee of India?

A 3

B 5

C 21

D 6

Answer: D

Question 82

Who is the head coach of the Chennai Super Kings IPL team as of April 2019?

A Gary Kirsten

B Jacques Kallis

C Stephen Fleming

D Mahela Jayawardene

Answer: C

SSC MTS Free Mock Test (Latest Pattern)

Question 83

Which of the following is NOT used in the manufacturing of stainless steel?

- A Sulfur
- B Chromium
- C Carbon
- D Nickel

Answer: A

Question 84

The 74th Amendment Act 1992 added which of the following parts to the Indian Constitution?

- A IX
- B IX B
- C IX C
- D IX A

Answer: D

Question 85

The Election held in a political Constituency to fill a vacancy arising during a Government's term of office is known as _____.

- A Council Election
- B Bye - Election
- C Micro Election
- D Tri-Election

Answer: B

SSC CPO Free Mock Test (Latest Pattern)

Question 86

Which present day state did the 18th century freedom fighter Veerapandiya Kattabomman hail from?

- A Tamil Nadu
- B Karnataka
- C Kerala
- D Telangana

Answer: A

Question 87

The famous UNESCO heritage site, Robben Island served as the political prison of which of the following leaders?

- A Aung San Suu Kyi
- B Martin Luther King Jr.
- C Nelson Mandela
- D Ho Chi Minh

Answer: C

Question 88

The Nile river does NOT flow through which of the following countries?

- A Algeria
- B Tanzania
- C Kenya
- D Egypt

Answer: A

SSC MTS Free Preparation App

Question 89

In which of the following states of India is the Iranshah Atash Behram located in the Udvada city?

- A Chhattisgarh
- B Maharashtra
- C Rajasthan
- D Gujarath

Answer: D

Question 90

Who was awarded UAE highest civilian honour 'Zayed Medal' in 2019?

- A Benjamin Netanyahu
- B Vladimir Putin
- C Imran Khan
- D Narendra Modi

Answer: D

Question 91

Which of the following organs is responsible for the hand-eye coordination and the movement in the human body?

- A Brain
- B Kidney
- C Liver
- D Heart

Answer: A

285 SSC Mocks - Just RS. 249

Question 92

Typhoid and Tuberculosis are what type of diseases?

- A Bacterial
- B Fungal
- C Protozoan
- D Viral

Answer: A

Question 93

The hill station of Kalimpong is situated in _____.

- A West Bengal
- B Arunachal Pradesh
- C Jammu and Kashmir
- D Sikkim

Answer: A

Question 94

Which of the following state - festival pair is NOT correct?

- A Durga Pooja - West Bengal
- B Baisakhi - Uttar Pradesh
- C Gudi Padwa - Maharashtra
- D Chhath Pooja - Bihar

Answer: B

SSC Exam Free Videos (Youtube)

Question 95

Lalit Kala Akademi, is a Government apex cultural body in which field?

- A Performing Arts
- B Music
- C Visual Arts
- D Theatre

Answer: C

Question 96

Who wrote the Book "Five Point Someone"?

- A Gurucharan Das
- B Amish Tripathi
- C Chetan Bhagat
- D Vidhu Vinod Chopra

Answer: C

Question 97

Which organelle of cell helps to keep the cell clean by digesting any foreign material and worn out cell organelle?

- A Golgi Apparatus
- B Lysosomes
- C Mitochondria
- D Plastids

Answer: B

SSC Study Material

Question 98

Indian boxing star Mary Kom hails from which north eastern state?

- A Meghalaya
- B Tripura
- C Mizoram
- D Manipur

Answer: D

Question 99

The Guindy National Park is located in ____.

- A Andhra Pradesh
- B Telangana

C Himachal Pradesh

D Tamil Nadu

Answer: D

Question 100

The Natal Indian Congress was established by which Indian?

A Bal Gangadhar Tilak

B Jawaharlal Nehru

C Mahatma Gandhi

D Govind Ranade

Answer: C

SSC Daily Practice Set

SSC CHSL Previous Papers (DOWNLOAD PDF)

SSC Stenographer Previous Papers (Download PDF)

SSC GD Constable Previous Papers

SSC MTS Previous Papers (DOWNLOAD PDF)

SSC CGL Previous Papers (DOWNLOAD PDF)

SSC CGL Free Mock Test (Latest Pattern)

SSC CHSL Free Mock Test (Latest Pattern)

SSC Stenographer Previous Papers (Latest Pattern)

SSC GD Constable Free Mock Test (Latest Pattern)

SSC MTS Free Mock Test (Latest Pattern)

SSC CPO Free Mock Test (Latest Pattern)

SSC MTS Free Preparation App

285 SSC Mocks - Just RS. 249

SSC Exam Free Videos (Youtube)

SSC Study Material

SSC Daily Practice Set

SSC GK Free Tests

SSC GK Questions

Current Affairs Question and Answers (Download PDF)

Daily and Monthly Current Affairs (Download PDF)