



## SSC MTS 8th August 2019 Shift-3

All rights reserved. No part of this publication may be reproduced, distributed, or transmitted in any form or by any means, electronic, mechanical, photocopying, recording or otherwise, or stored in any retrieval system of any nature without the permission of cracku.in, application for which shall be made to [support@cracku.in](mailto:support@cracku.in)

**Instructions**

For the following questions answer them individually

**Question 1**

Select the synonym of the given word.

**Awkward**

- A Likable
- B Clumsy
- C Worthy
- D Scared

**Answer: B**

**SSC CHSL Previous Papers (DOWNLOAD PDF)**

**Question 2**

Select the correctly spelt word.

- A Independent
- B Independant
- C Indipendent
- D Independint

**Answer: A**

**Question 3**

Identify the segment in the sentence which contains the grammatical error from the given options.

The city of Banaras is widely known from its ghats and temples.

- A ghats and temples
- B The city of Banaras
- C from its
- D is widely known

**Answer: C**

**Question 4**

Select the most appropriate word to fill in the blank.

\_\_\_\_\_ they are twins, they are worlds apart in their attitude to life.

- A Although
- B Despite
- C Whereas

D However

Answer: A

## SSC Stenographer Previous Papers (Download PDF)

### Question 5

Select the most appropriate option to substitute the underlined segment in the given sentence. If there is no need to substitute it, select 'No substitution required'.

They won't commit themselves until they see which way the wind is blowing.

A their till

B No substitution required

C himself until

D them until

Answer: B

### Question 6

Select the most appropriate word to fill in the blank and make a meaningful sentence.

He \_\_\_\_\_ me up on his way to work.

A picked

B raised

C lifted

D dropped

Answer: A

### Question 7

Select the most appropriate word to fill in the blank.

The company \_\_\_\_\_ its first all electric car in the Indian market soon.

A is launching

B launched

C launch

D has launched

Answer: A

## SSC GD Constable Previous Papers

### Question 8

Select the most appropriate option to substitute the underlined segment in the given sentence. If there is no need to substitute it, select 'No substitution required'.

The government is set strict limits on public spending this year.

A had been set

- B have set
- C No substitution required
- D has set

Answer: D

#### Question 9

Select the most appropriate word to fill in the blank and make a meaningful sentence.

Conservative parents usually do not give their \_\_\_\_\_ for uncommon career choices of their children.

- A consent
- B agreement
- C allowance
- D dissent

Answer: A

#### Question 10

Select the most appropriate option to substitute the underlined segment in the given sentence. If there is no need to substitute it, select 'No substitution required'.

The new product will be arrive on supermarket shelves early next year.

- A No substitution required
- B will arrive on
- C will arriving on
- D will arrived on

Answer: B

## SSC MTS Previous Papers (DOWNLOAD PDF)

#### Question 11

Select the antonym of the given word.

**Persuade**

- A Convince
- B Endorse
- C Dissuade
- D Fume

Answer: C

#### Instructions

In the following passage some words have been deleted. Fill in the blanks with the help of the alternatives given. Select the most appropriate option for each blank.

#### Comprehension:

Bengaluru is becoming an exciting destination for higher education for students (1)\_\_\_\_\_ all over the world. International students

(2)\_\_\_\_\_ close to 20% of the student population (3)\_\_\_\_\_ the city and this number is (4)\_\_\_\_\_ increasing. The city has almost 900 colleges - the maximum in any city (5)\_\_\_\_\_ the country.

**Question 12**

Select the most appropriate option to fill in blank No.1.

- A in
- B for
- C from
- D by

**Answer: C**

**Question 13**

Select the most appropriate option to fill in blank No.2.

- A constitute
- B consist
- C construct
- D collect

**Answer: A**

**SSC CGL Previous Papers (DOWNLOAD PDF)**

**Question 14**

Select the most appropriate option to fill in blank No.3.

- A at
- B in
- C to
- D on

**Answer: B**

**Question 15**

Select the most appropriate option to fill in blank No.4.

- A readily
- B barely
- C rarely
- D steadily

**Answer: D**

**Question 16**

Select the most appropriate option to fill in blank No.5.

- A about
- B along
- C across
- D through

**Answer: C**

**SSC CGL Free Mock Test (Latest Pattern)**

**Instructions**

For the following questions answer them individually

**Question 17**

Select the word which means the same as the group of words given.

**A young child just beginning to walk**

- A Toddler
- B Cub
- C Joey
- D Kid

**Answer: A**

**Question 18**

Select the meaning of the given idiom.

**Apples and oranges.**

- A Same things
- B Different things
- C Fresh
- D Nutritious

**Answer: B**

**Question 19**

Select the antonym of the given word.

**Fragile**

- A Novel
- B Tiny
- C Tough
- D Gross

**Answer: C**

## SSC CHSL Free Mock Test (Latest Pattern)

### Question 20

Identify the segment in the sentence which contains the grammatical error from the given options.  
He started life as a teacher before turn to journalism.

- A He started life
- B as a teacher
- C to journalism.
- D before turn

Answer: D

### Question 21

Select the meaning of the given idiom.  
At the drop of a hat.

- A Facing difficulties
- B Completely
- C Immediately
- D Losing a hat

Answer: C

### Question 22

Select the word which means the same as the group of words given.  
Resistant to a particular infection

- A innocent
- B Immune
- C Immortal
- D Innocuous

Answer: B

## SSC Stenographer Previous Papers (Latest Pattern)

### Question 23

Select the correctly spelt word.

- A Definitly
- B Definitely
- C Definetely

D Definitely

Answer: B

**Question 24**

Identify the segment in the sentence which contains the grammatical error from the given options.  
Jaipur, which is renown for its architecture, was founded about 300 years ago.

A about 300 years ago

B was founded

C for its architecture

D Jaipur, which is renown

Answer: D

**Question 25**

Select the synonym of the given word.  
Dedicate

A Decide

B Design

C Denounce

D Devote

Answer: D

## SSC GD Constable Free Mock Test (Latest Pattern)

### Reasoning

**Instructions**

For the following questions answer them individually

**Question 26**

Select the option that is related to the third term in the same way as the second term is related to the first term.

Jute : Sack :: Wood : ?

A Furniture

B Brown

C Plastic

D Hard

Answer: A

## SSC MTS Free Mock Test (Latest Pattern)



Question 27

Six buses B1, B2, B3, B4, B5 and B6 are parked around a circular path (not necessarily in the same order). B3 is third to the right of B6. B4 is to the immediate left of B1. B2 is second to the left of B6. How many buses are between B5 and B1?

- A 0
- B 1
- C 3
- D 2

Answer: D

Question 28

In the following question, select the number which can be placed at the sign of question mark (?) from the given alternatives.

<b>5</b>	<b>9</b>	<b>6</b>	<b>39</b>
<b>3</b>	<b>11</b>	<b>7</b>	<b>26</b>
<b>8</b>	<b>5</b>	<b>4</b>	<b>?</b>

- A 48
- B 44
- C 36
- D 34

Answer: C

Question 29

In a certain code language, 'WINDOW' is written as 'TLAKFT'. What is the code for 'BLADES' in that code language?

- A QCBYJZ
- B PBBXIY
- C PBAXIY
- D QBBYJZ

Answer: C

## SSC CPO Free Mock Test (Latest Pattern)

Question 30

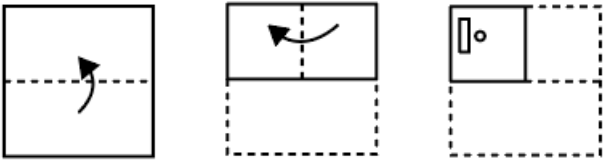
In a certain code language, 'ROAM' is written as '44', 'HIMP' is written as '43'. What is the code for 'BONE' in that code language?

- A 33
- B 34
- C 39
- D 36

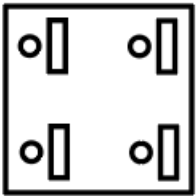
Answer: A

Question 31

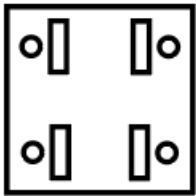
A piece of paper is folded and punched as shown below in the question figures. From the given answer figures, indicate how it will appear when opened?



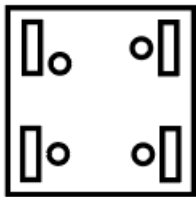
A



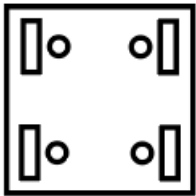
B



C



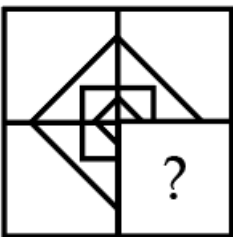
D



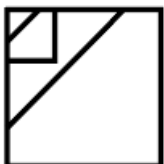
Answer: D

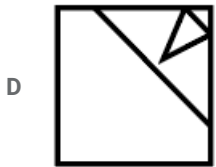
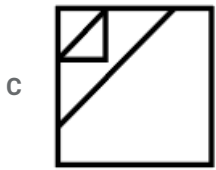
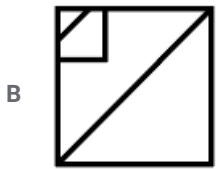
Question 32

Which answer figure will complete the pattern in the question figure?



A





Answer: A

SSC MTS Free Preparation App

Question 33

Select the option that is related to the third Letter Cluster in the same way as the second Letter Cluster is related to the first Letter Cluster.

ROAD : TREI :: MINT : ?

- A OMRY
- B PMSZ
- C PNSZ
- D OLRV

Answer: D

Question 34

Select the letter-pair that can replace the question mark (?) in the following series.

RD, XJ, DP, JV, ?

- A QC
- B PB
- C PC
- D QB

Answer: B

Question 35

After interchanging which two numbers, the value of given equation will be '4'?

$$6 + 3 \div 9 \times 7 - 5$$

- A 7 and 6

B 3 and 5

C 5 and 6

D 9 and 5

Answer: A

## 285 SSC Mocks - Just RS. 249

### Question 36

In a certain code language, 'PENCIL' is written as 'RIPGKP'. What is the code for 'FABRIC' in that code language?

A HFDVKG

B HEDVKG

C IEFWLH

D IFEWLH

Answer: B

### Question 37

Select the number that can replace the question mark (?) in the following series.

600, 120, 30, 10, 5, ?

A 4

B 5

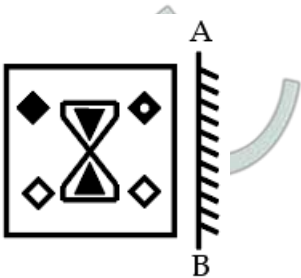
C 3

D 2

Answer: B

### Question 38

If a mirror is placed on the line AB, then which of the answer figures is the right image of the given figure?



B



C



D

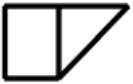


Answer: C

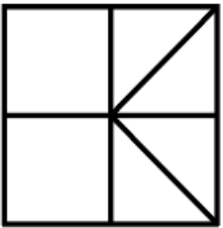
### SSC Exam Free Videos (Youtube)

Question 39

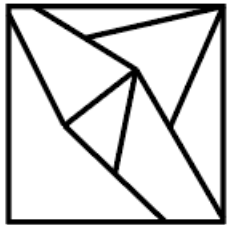
From the given answer figures, select the one in which the question figure is hidden/embedded.



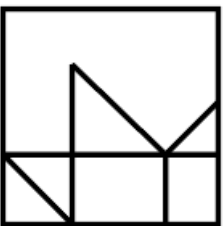
A



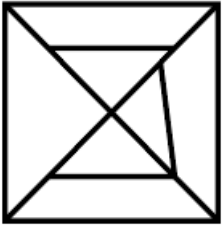
B



C



D




Answer: C

Question 40


Identify the Venn diagram that best represents the relationship between the given classes.

Producer, Director, Actor

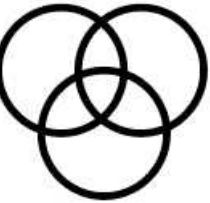
A




B



C



D



Answer: C

Question 41

In a certain code language, 'PAL' is written as '29', 'CAR' is written as '22'. What is the code for 'ZON' in that code language?

A 43

B 45

C 55

D 51

Answer: C

SSC Study Material

Question 42

Select the option that is related to the third term in the same way as the second term is related to the first term.

Film : Producer :: Poem : ?

- A Director
- B Actor
- C Poet
- D Cobbler

Answer: C

Question 43

Select the option that is related to the third number in the same way as the second number is related to the first number.

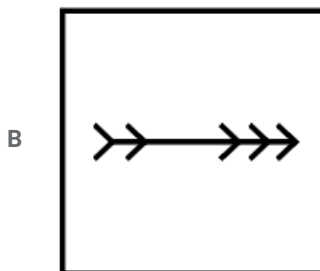
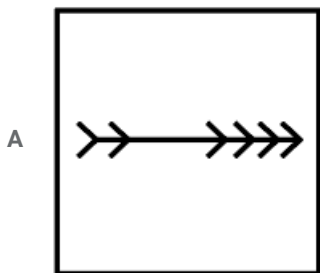
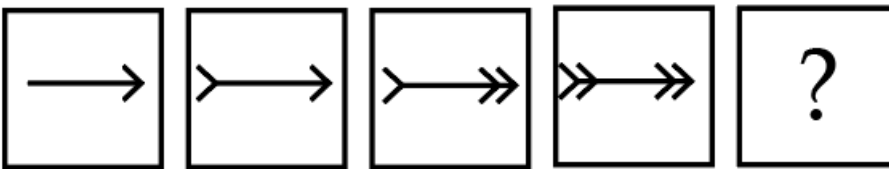
596 : 965 :: 824 : ?

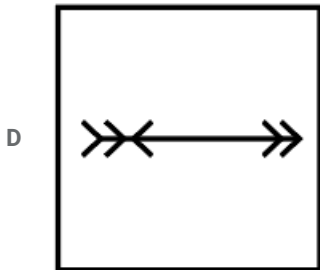
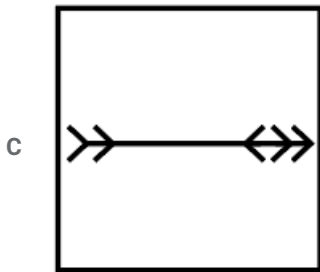
- A 248
- B 408
- C 418
- D 258

Answer: A

Question 44

In the following question, select the figure which can be placed at the sign of question mark (?) from the given alternatives.





Answer: B

## SSC Daily Practice Set

### Question 45

In the following question below are given some statements followed by some conclusions based on those statements. Taking the given statements to be true even if they seem to be at variance from commonly known facts. Read all the conclusions and then decide which of the given conclusion logically follows the given statements.

Statements:

- I. Some pen are sharpener.
- II. All pen are pencil.

Conclusions:

- I. Some pencil are pen.
- II. All sharpener are pen.

- A Both conclusion I and II follows.
- B Only conclusion I follows.
- C Neither conclusion follow.
- D Only conclusion II follows.

Answer: B

### Question 46

Five chairs J, H, P, S and M are placed in a row facing towards east (Not necessarily in the same order). P is second to the left of S. J is second to the right of H. M is to the immediate right of S. Which of the following is the correct position of J?

- A Third to the left of M
- B Second to the right of H
- C Exactly between S and H
- D To the immediate right of S

Answer: B



**Question 47**

Five toys A, B, C, D and E are kept one above the other (not necessarily in the same order). A is four places above C. D is between B and E. E is three places below A. Three of the given four options follows a same logic based on their arrangement. Which of the following does not follow that logic?

- A BD
- B DE
- C EC
- D AC

**Answer: D**

**SSC GK Free Tests**

**Question 48**

In the following question below are given some statements followed by some conclusions based on those statements. Taking the given statements to be true even if they seem to be at variance from commonly known facts. Read all the conclusions and then decide which of the given conclusion logically follows the given statements.

**Statements:**

- I. All L are B.
- II. No T is L.
- III. Some R are T.

**Conclusions:**

- I. Some T are R.
- II. No B is T.
- III. No L is T.

- A Only conclusion I follows.
- B Only conclusion II follows.
- C Both conclusion I and III follows.
- D Both conclusion II and III follows.

**Answer: C**

**Question 49**

By interchanging the given two signs which of the following equation will be incorrect?  
÷ and +?

- A  $12 \div 9 \times 31 + 3 = 105$
- B  $7 \times 16 + 11 \div 5 = 33$
- C  $9 \div 11 + 11 \times 2 = 9$
- D  $6 \times 11 + 2 \div 5 = 38$

**Answer: C**

**Question 50**

In the following question, select the missing number from the given series.  
17, 31, 47, 65, ?

- A 87
- B 89
- C 85
- D 83

Answer: C

## SSC GK Questions

### Quant

#### Instructions

For the following questions answer them individually

#### Question 51

What is the average of first 15 odd numbers among the natural numbers?

- A 18
- B 15
- C 16
- D 17

Answer: B

## Current Affairs Question and Answers (Download PDF)

#### Question 52

What is the circumference of the largest circle which can be inscribed in a square of side 14 cm?(Take  $\pi = \frac{22}{7}$ )

- A 66 m
- B 88 cm
- C 22 cm
- D 44 cm

Answer: D

#### Question 53

The marked price of an article is ₹3040. If the discount offered on this article is 20%, then what will be the selling price?

- A ₹2412
- B ₹3262
- C ₹2432
- D ₹3132

Answer: C

Question 54

The present age of a Manoj is twice the sum of the ages of his two children. After 20 years, the age of Manoj will become equal to the sum of the ages of his two children. What is the present age of Manoj?

- A 40 years
- B 30 years
- C 36 years
- D 35 years

Answer: A

## Daily and Monthly Current Affairs (Download PDF)

Question 55

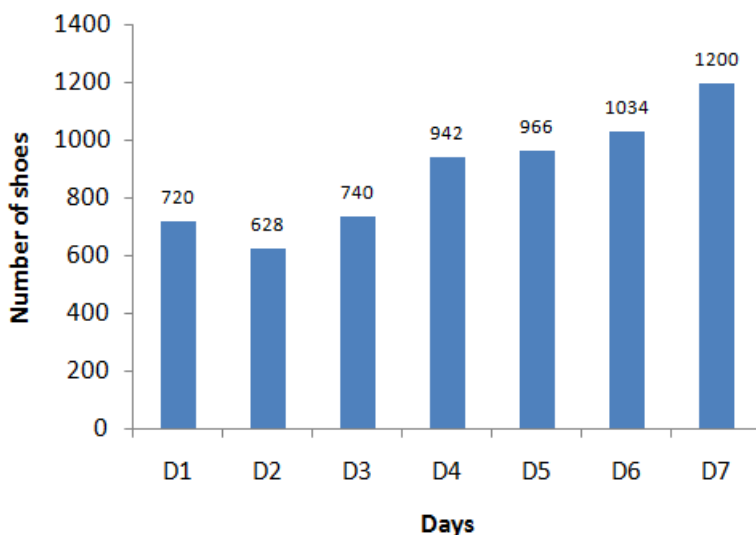
A train starts from A at 6 AM and reaches B at 11 AM on the same day. Another train starts from B at 8 AM and reaches A at 3 PM on the same day. At what time the two trains will have crossed each other?

- A 9:45 AM
- B 8:45 AM
- C 10:30 AM
- D 7:45 AM

Answer: A

Question 56

The Bar graph given below presents the number of shoes manufactured by a company on the different days of a week.



What is the total number of shoes manufactured by the company on all seven days together?

- A 5930
- B 6030

C 6130

D 6230

Answer: D

Question 57

A sum of ₹10000 is invested in three schemes of simple interest. The annual interest rates are respectively, 4%, 6% and 10%. ₹4000 were invested in the first scheme. If the total interest earned after five years is ₹2800, then how much money was invested in the third scheme?

A ₹1500

B ₹5000

C ₹1000

D ₹3000

Answer: C

### SSC CHSL Previous Papers (DOWNLOAD PDF)

Question 58

N and K together can complete a work in 240 days, K and G together can complete the same work in 72 days and N and G together can complete the same work in 80 days. In how many days K alone can complete the same work?

A 280 days

B 240 days

C 360 days

D 180 days

Answer: C

Question 59

A sum of ₹1200 is invested at compound interest (compounded half yearly). If the rate of interest is 10% per annum, then what will be the amount after 18 months?

A ₹1389.15

B ₹1185.45

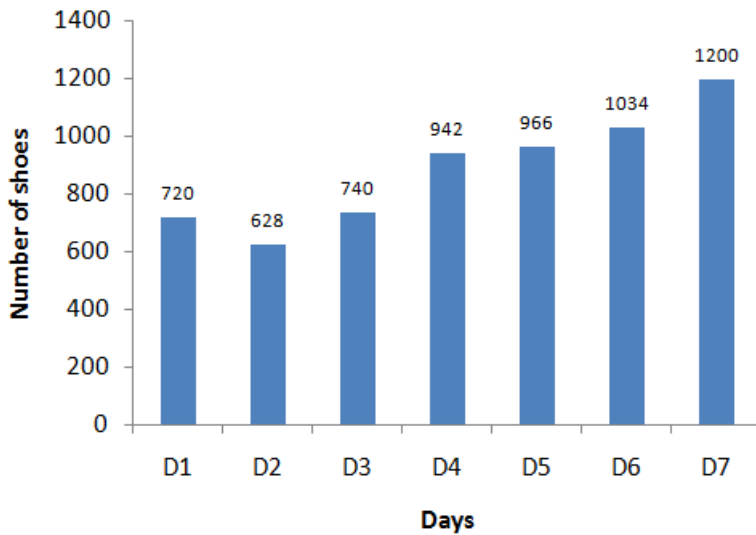
C ₹1563.25

D ₹1295.35

Answer: A

Question 60

The Bar graph given below presents the number of shoes manufactured by a company on the different days of a week.



The number of shoes manufactured on D5 is how much more than the average number of shoes manufactured per day?

- A 72
- B 64
- C 76
- D 68

Answer: C

**SSC Stenographer Previous Papers (Download PDF)**

Question 61

The edge of a cube is 8 cm. What is the total surface area of the cube?

- A  $128 \text{ cm}^2$
- B  $256 \text{ cm}^2$
- C  $384 \text{ cm}^2$
- D  $484 \text{ cm}^2$

Answer: C

Question 62

What is the median of the given data?

41, 43, 46, 50, 85, 61, 76, 55, 68, 95

- A 61
- B 58
- C 57

D 55

Answer: B

Question 63

If A is the smallest three digit number divisible by both 6 and 7 and is the largest four digit number divisible by both 6 and 7, then what is the value of B - A?

A 9912

B 9870

C 9996

D 9954

Answer: B

## SSC GD Constable Previous Papers

Question 64

Raman and Sanjay started a business by investing ₹63000 and ₹42000 respectively. If the total profit at the end of year is ₹9000, then what is the share of Raman?

A ₹5400

B ₹4500

C ₹4200

D ₹3600

Answer: A

Question 65

The ratio of the selling price to the cost price in a transaction is 4 : 5. If the selling price is 280, then how much is the loss?

A ₹16

B ₹15

C ₹20

D ₹30

Answer: C

Question 66

What is the value of  $(9 \div 30)^2 \times 2.4 + 0.3 \text{ of } 12 \times (1 - 0.3)^2 + 9 \times (0.3)^2$ ?

A 3.43

B 3.69

C 2.79

D 2.17

Answer: C

## SSC MTS Previous Papers (DOWNLOAD PDF)

Question 67

Vijay alone can complete a work in 50 days. How much part of the work will be completed in ten days?

A  $\frac{1}{5}$

B  $\frac{1}{3}$

C  $\frac{1}{10}$

D  $\frac{1}{4}$

Answer: A

Question 68

The profit earned on selling an article at ₹720 is half of the loss incurred on selling the same article at ₹360. What is the cost price of the article?

A ₹540

B ₹600

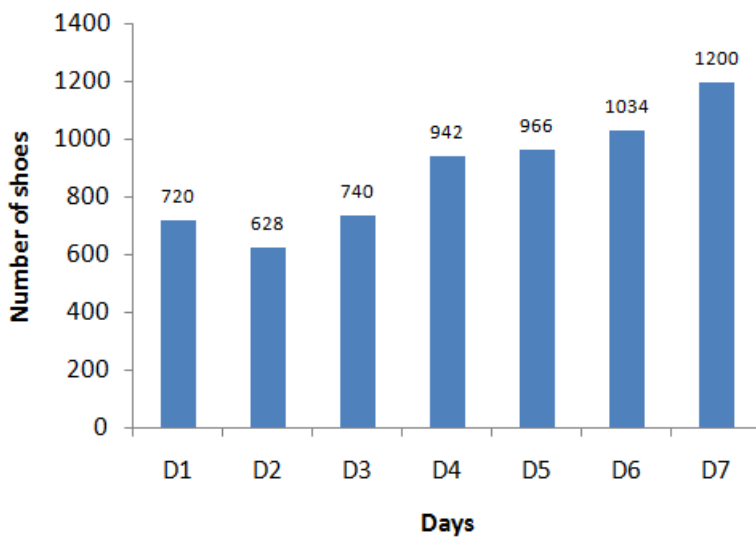
C ₹480

D ₹420

Answer: B

Question 69

The Bar graph given below presents the number of shoes manufactured by a company on the different days of a week.



The number of shoes manufactured on D1 is what percentage of shoes manufactured on D7?

A 80.45

B 60

- C 80
- D 70.25

Answer: B

## SSC CGL Previous Papers (DOWNLOAD PDF)

### Question 70

The ratio of the age of a father and his son is 3 : 1. If the product of their ages is 432, then what is the sum of their ages?

- A 36 years
- B 48 years
- C 60 years
- D 54 years

Answer: B

### Question 71

What is the value of  $2 \div 3 \times 2 + (4 \times -(5 \times 2 + 3))$ ?

- A 3
- B -24
- C 6
- D -21

Answer: A

### Question 72

Rahul's salary is 40% less than Rakesh's salary. Deepak's salary is 80% more than Rahul's salary. If Deepak's salary is ₹ 34560, then what is the salary of Rakesh?

- A ₹32000
- B ₹24000
- C ₹28000
- D ₹26000

Answer: A

## SSC CGL Free Mock Test (Latest Pattern)

### Question 73

A man goes from C to D at 40 km/h and returns from D to C at x km/h. If the average speed of the man for the whole journey is 60 km/h, then what is the value of x?

- A 100



- B 120
- C 110
- D 80

Answer: B

**Question 74**

The average of four numbers is 20. If the average of the first two numbers is 15, then what is the average of the last two numbers?

- A 22
- B 18
- C 25
- D 20

Answer: C

**Question 75**

The length of one of the diagonals of a rhombus is 48 cm. If the side of the rhombus is 26 cm, then what is the area of the rhombus?

- A  $540 \text{ cm}^2$
- B  $420 \text{ cm}^2$
- C  $360 \text{ cm}^2$
- D  $480 \text{ cm}^2$

Answer: D

## SSC CHSL Free Mock Test (Latest Pattern)

### General knowledge

**Instructions**

For the following questions answer them individually

**Question 76**

Asian Infrastructure Investment Bank headquarter is located in which city?

- A Philippines
- B Gurugram
- C Shanghai
- D Beijing

Answer: D

## SSC Stenographer Previous Papers (Latest Pattern)

Question 77

What is Cryptogamae?

- A Plants having covered seeds
- B Flowering plants
- C Non-flowering plants
- D Plants having uncovered seeds

Answer: C

Question 78

The ratio of the length to the height (width) of the national Flag shall be?

- A 3:1
- B 4:1
- C 4:2
- D 3:2

Answer: D

Question 79

Who was the first women Chief Minister of an Indian state?

- A Indira Gandhi
- B Sucheta Kriplani
- C Sarojini Naidu
- D Mamta Banerjee

Answer: B

## SSC GD Constable Free Mock Test (Latest Pattern)

Question 80

According to Census 2011, which of the following states has the highest density of population in India?

- A Uttar Pradesh
- B West Bengal
- C Bihar
- D Maharashtra

Answer: C

Question 81

India's foreign reserves does NOT consist of which of the following?

- A Gold
- B Carbon Bonds
- C Reserve Tranche Position (RTP)
- D Special Drawing Rights (SDR)

**Answer: B**

**Question 82**

**National waterway No.2 is located on which river?**

- A Brahmaputra
- B Ganga
- C Cauvery
- D Mahanadi

**Answer: A**

**SSC MTS Free Mock Test (Latest Pattern)**

**Question 83**

**Which of the following Jyotirlingas is in Maharashtra?**

- A Mahakaleshwar
- B Baidyanath
- C Grishneshwar
- D Malikarjuna

**Answer: C**

**Question 84**

**Which of the following sports persons has received the 'Rajiv Gandhi Khel Ratna' Award?**

- A Gita Phogat
- B Saina Nehwal
- C Deepika Kumari
- D Kapil Dev

**Answer: B**

**Question 85**

**Who was the organizer of revolt of 1857 in Bihar?**

- A Bahadur Shah
- B Nana Sahib

C Maulvi Ahmadullah

D Kunwar Singh

Answer: D

## SSC CPO Free Mock Test (Latest Pattern)

Question 86

Deepika Kumari is associated with which Sport?

A Archery

B Squash

C Swimming

D Badminton

Answer: A

Question 87

"Healthy States, Progressive India" Report has been published by which of the following institution?

A Ministry of Health and Family Welfare

B World Health Organization (WHO)

C United Nations

D Niti Aayog

Answer: D

Question 88

The Sixth Schedule of the Indian Constitution does NOT exercise its control to the tribal areas of which of the following state?

A Manipur

B Tripura

C Assam

D Meghalaya

Answer: A

## SSC MTS Free Preparation App

Question 89

Botanical Survey of India (BSI) Headquarter is located in which city?

A Assam

B New Delhi

C Kolkata

D Bhopal

Answer: C

Question 90

1 pound = \_\_\_\_ ounces

A 16

B 18

C 12

D 20

Answer: A

Question 91

Which of the following is NOT a feature of Eukaryotic cell?

A Nucleus well organized

B Mitochondria present

C Chloroplast absent in plant cells

D Nuclear membrane present

Answer: C

**285 SSC Mocks - Just RS. 249**

Question 92

The World famous Borobudur Temple is situated in:

A Vietnam

B Indonesia

C Cambodia

D Japan

Answer: B

Question 93

GST is NOT applicable on which of the following goods or services?

A Automobiles

B Salon services

C Restaurant services

D Alcohol

Answer: D

Question 94

Which of the following Indian rulers was defeated by Mahmud Ghazni in his first attack in the year 1000 AD?

- A Chandra Pala
- B Anand Pala
- C Jaya Pala
- D Sukh Pala

Answer: C

## SSC Exam Free Videos (Youtube)

Question 95

"Neel Darpan" was written by Dinbandhu Mitra to portray the oppression faced by peasants to grow indigo in:

- A Madras
- B Assam
- C Gujarat
- D Bengal

Answer: D

Question 96

Minamata Convention is signed to tackle the issue of:

- A Nuclear radiations
- B Ozone gas
- C CFC and HFC
- D Mercury

Answer: D

Question 97

Inter-State Council was set up by the recommendation of which committee?

- A Sarkaria committee
- B Y V Reddy Committee
- C TSR Subramanyam committee
- D Chandrababu Naidu committee

Answer: A

SSC Study Material

**Question 98**

**Mawsynram is located on which hills of Meghalaya?**

- A Garo
- B Jaintia
- C Diphu
- D Khasi

**Answer: D**

**Question 99**

**Who among the following takes part in election of the President of India?**

- A Elected Members of both the houses of Parliament and Legislative Assemblies of the states.
- B Elected and nominated members of both the houses of Parliament.
- C Elected members of both the houses of Parliament only.
- D Elected and nominated members of both the houses of Parliament and Legislative Assemblies of the states.

**Answer: A**

**Question 100**

**National Youth Festival is celebrated on the birth anniversary of which of the following personalities?**

- A Milkha Singh
- B Chandrashekhhar Azad
- C Bhagat Singh
- D Swami Vivekanand

**Answer: D**

**SSC Daily Practice Set**

**SSC CHSL Previous Papers (DOWNLOAD PDF)**

**SSC Stenographer Previous Papers (Download PDF)**

**SSC GD Constable Previous Papers**

**SSC MTS Previous Papers (DOWNLOAD PDF)**

**SSC CGL Previous Papers (DOWNLOAD PDF)**

[\*\*SSC CGL Free Mock Test \(Latest Pattern\)\*\*](#)

[\*\*SSC CHSL Free Mock Test \(Latest Pattern\)\*\*](#)

[\*\*SSC Stenographer Previous Papers \(Latest Pattern\)\*\*](#)

[\*\*SSC GD Constable Free Mock Test \(Latest Pattern\)\*\*](#)

[\*\*SSC MTS Free Mock Test \(Latest Pattern\)\*\*](#)

[\*\*SSC CPO Free Mock Test \(Latest Pattern\)\*\*](#)

[\*\*SSC MTS Free Preparation App\*\*](#)

[\*\*285 SSC Mocks - Just RS. 249\*\*](#)

[\*\*SSC Exam Free Videos \(Youtube\)\*\*](#)

[\*\*SSC Study Material\*\*](#)

[\*\*SSC Daily Practice Set\*\*](#)

[\*\*SSC GK Free Tests\*\*](#)

[\*\*SSC GK Questions\*\*](#)

[\*\*Current Affairs Question and Answers \(Download PDF\)\*\*](#)

[\*\*Daily and Monthly Current Affairs \(Download PDF\)\*\*](#)