



IBPS Clerk 11-Dec-2011 NZ 1st

All rights reserved. No part of this publication may be reproduced, distributed, or transmitted in any form or by any means, electronic, mechanical, photocopying, recording or otherwise, or stored in any retrieval system of any nature without the permission of cracku.in, application for which shall be made to support@cracku.in

General Awareness

Instructions

For the following questions answer them individually

Question 1

Which of the following is not a Negotiable Instrument?

- A Cheque
- B Fixed Deposit Receipt.
- C Promissory Note
- D Bill of Exchange
- E All (1) to d: above are negotiable instruments

Answer: E

Take 4 Free IBPS Clerk Mock Tests (With Solutions)

Question 2

Which of the following Stock Exchanges in India has decided to launch "Carbon Index" so that investors can assess risk and opportunities associated with climate change?

- A Delhi Stock Exchange
- B National Stock Exchange
- C Bombay Stock Exchange
- D Kolkata Stock Exchange
- E Ahmedabad Stock Exchange

Answer: C

Question 3

Which of the following would be the 'venue of the World Athletic Championship 2013'?

- A New Delhi
- B Tokyo
- C London
- D Paris
- E Moscow

Answer: E

Question 4

Who among the following will represent India in 17th SAARC Summit held at Addu in Maldives in November 2011 ?

- A Smt. Sonia Gandhi

- B Dr. Manmohan Singh
- C Shri Pranab Mukherjee
- D Shri P Chidambaram
- E Shri Rahul Gandhi

Answer: B

IBPS Clerk Previous Papers (Download PDF)

Question 5

What is the maximum balance amount that is eligible for earning interest in a normal savings bank account?

- A 1 lacs
- B 2 lacs
- C 3 lacs
- D 5 lacs
- E No limit

Answer: E

Question 6

When a customer opens a Deposit account with the Bank, which one of the following is the status of the Bank?

- A Debtor
- B Creditor
- C Trustee
- D Beneficiary
- E None of these

Answer: A

Question 7

Banking Ombudsman Scheme is applicable to the business of

- A All scheduled commercial banks excluding RRBs
- B All scheduled commercial banks including RRBs
- C Only Public Sector Banks
- D All Banking Companies
- E All scheduled banks except private banks

Answer: A

Question 8

Which of the following functions are not being performed by the Reserve Bank of India?

- A Regulation of Banks in India
- B Regulation of Foreign Direct Investment in India
- C Foreign Currency Management in India
- D Control and Supervision of Money Supply
- E Currency Management in India

Answer: B

Question 9

A bank is called as 'Scheduled Bank' when

- A Its business has crossed 1000 crore mark
- B Its branch network is over 100
- C It is included in the second Schedule of the RBI Act
- D When it complies with all the three above
- E None of these

Answer: C

Question 10

Australian Government recently decided to sell Uranium to India. Uranium is used mainly for

- A manufacturing of chemical fertilisers
- B manufacturing of Drugs/ Pharma products
- C nuclear power generation
- D making arsenals
- E making electronic chips

Answer: C

IBPS Clerk Free Preparation App

Question 11

Which of the following organizations/agencies has sought an emergency fund of '1000 crore from banks to tackle acute liquidity crisis, which is coming in the way to give loans to micro borrowers?

- A Regional Rural & Cooperative Banks
- B RBI
- C Micro Finance Institutions
- D NABARD

E None of these

Answer: D

Question 12

Upper limit prescribed for RTGS transaction is -

A 1 lac

B 2 lacs

C 5 lacs

D 50 laes

E No upper limit is prescribed

Answer: E

Question 13

Distribution of insurance products and insurance policies by banks as corporate agents is known as

A General Insurance

B Non-life insurance

C Bancassurance

D insurance banking

E Deposit insurance

Answer: C

Free Banking Study Material (15000 Solved Questions)

Question 14

What does the letter 'L' denote in term 'LAF' as referred every now and then In relation to monetary policy of the RBI ?

A Liquidity

B Liability

C Leveraged

D Longitudinal

E Linear

Answer: A

Question 15

What is the full form of 'FINO', a term we see frequently in financial newspapers ?

A Financial Investment Network and Operations

B Farmers' Investment in National Organisation

- C Farmers Inclusion News and Operations
- D Financial Inclusion Network and Operations
- E None of these

Answer: E

Question 16

Who among the followings has been appointed as a director on board of Bank of America the first non American on the board of the one of the largest financial institutions in the world?

- A Azim Premji
- B Ratan Tata
- C Mukesh Ambani
- D K. V. Kamath
- E Chanda Kocher

Answer: C

IBPS Clerk Free Online Coaching

Question 17

When the rate of inflation increases

- A purchasing power of money increases
- B purchasing power of money decreases
- C value of money increases
- D purchasing power of money remains unaffected
- E amount of money in circulation decreases

Answer: B

Question 18

POSCO is in the process of establishing its plants in India. What does the letter 'P' denote in the name POSCO ?

- A Popular
- B Pallin
- C Pohang
- D Paradeep
- E Petersburg

Answer: C

Question 19

Who amongst the following has become the Chief Minister of a State in India third time consecutively ?

- A Tarun Gagoi
- B Nitish Kumar
- C J. Jayalalitha
- D Mamta Banerjee
- E None of these

Answer: A

Question 20

Who amongst the following is the winner of Man Booker Prize 2011?

- A Andrea Levy
- B Nicola Barker
- C Tom McCarthy
- D Linda Grant
- E Philip Roth

Answer: E

Question 21

Who among the following is one of the recipients of the Nobel Peace Prize-2011 ?

- A Ellen Johnson Sirleaf
- B Jules A. Hoffmann
- C Bruce A. Beutler
- D Adam G. Riess
- E Tomas Transtromer

Answer: A

Question 22

The Food Security Bill-2011 which is in the process of becoming an Act, divides the entire population of the country into two groups. Which of the following are these two groups?

- A Below poverty line and Above poverty line
- B General population and Excluded population
- C Included households and Excluded households
- D Covered under PDS and Not Covered under PDS
- E General households and priority households

Answer: E

Daily Free Banking Online Test

Question 23

RBI has recently deregulated the rates of interest to be provided by various Banks to their depositors/ customers with effect from 25.10.2011 on their accounts.

- A Time Deposit
- B Saving bank
- C Loan
- D Fixed deposit
- E Current

Answer: B

Question 24

Which of the following is the main advantage of "ASBA" --- with the applicants for share allotment?

- A ASBA applicant has got secured allotment of shares
- B ASBA applicant has got certain preference in allotment of shares as compared to general applicants
- C ASBA applicant need not remit the fund for allotment of shares, he/she will do so after shares are allotted to him/ her
- D ASBA Applicants deposit/OD account is not debited. only the funds are blocked for the same and he/she continues to avail interest till the shares are allotted to him/her
- E None of these

Answer: D

Question 25

Which of the following is NOT a function of the Reserve Bank of India ?

- A Fiscal Policy Functions
- B Exchange Control Functions
- C Issuance, Exchange and destruction of currency notes
- D Monetary Authority Functions
- E Supervisory and Control Functions

Answer: A

Download IBPS Clerk General Knowledge PDF

Question 26

With a view to facilitate payment of balance in the deposit account to the person named by the depositor without any hassles in the event of death of the account holder, the following facility was introduced for bank accounts in our country –

- A Will

- B Registration
- C Nomination
- D Indemnity
- E Guarantee

Answer: C

Question 27

The ministry of Finance recently released a comprehensive paper on Govt. debt. Which of the following is/ are true about the same ?

- (A) The paper presents the road map for general debt to be raised by the Govt. of India during the period of 2011-2015 which is the period of the awards of the 13th Finance commission
- (B) As per the estimates, the target debt in the terminal year 2014- 15 will be low, than whatever recommended by the 13th Finance Commission.
- (C) The paper has recommended that the Govt. should try to generate resources in such a way that it does not have to depend much on debt. The total debt should not be more than –3 rd of the total requirements.

- A Only (A)
- B Only (B)
- C Only (A) & (B)
- D Only (B) & (C)
- E None of these

Answer: D

Question 28

'Gorichaland Council' which was recently in news is a body set up for administration of which of the following Districts?

- A Siliguri
- B Bagdogra
- C Malda
- D Darjeeling
- E Gangtok

Answer: A

200+ Free GK Tests for Banking exams

Question 29

Banks in our country normally publicise that additional interest rate is allowed on retail domestic term deposits of -

- A Minors
- B Married women
- C Senior citizens
- D Govt. employees

E Rural residents

Answer: C

Question 30

'FBTR' is a term/abbreviated name related to the area of

A Nuclear power

B Agriculture

C Economy

D Medical Science

E Sports

Answer: A

Question 31

On which one of the following issues IMF has supported monetary policy of India?

A Introduction of GST

B Stimulus for agriculture sector

C Concessions for foreign investment

D Tightening of monetary policy

E None of these

Answer: D

100 Free IBPS Clerk Computer Awareness Tests

Question 32

In the term STRIPS, the first letter 'S' denotes

A Single

B Small

C Special

D Savings

E Separate

Answer: E

Question 33

When the loan is granted for purchase of white goods it is called

A Consumption loan

B White goods loan

- C Consumer durable loan
- D Business loan
- E Proprietary loan

Answer: A

Question 34

Structure of Basel II (Two) is based on how many pillars?

- A Two
- B Ten
- C Four
- D Five
- E Three

Answer: E

200+ Banking Previous Papers (Download PDF)

Question 35

Expand the term FRBM

- A Financial Responsibility and Business Management
- B Fiscal Responsibility and Business Management
- C Financial Responsibility and Budget Management
- D Fiscal Responsibility and Budget Management
- E Formal Responsibility and Business Management

Answer: C

Question 36

The World Economic Outlook, report of IMF indicates that one of the below mentioned nation is expected to achieve highest per cent GDP growth rate in 2011. Which one of the following is that country ?

- A Brazil
- B Russia
- C India
- D China
- E South Africa

Answer: D

Question 37

Which of the following organization/agencies has established a fund known as Investor Protection Fund ?

- A RBI
- B SIDBI
- C Bombay Stock Exchange
- D Ministry of Finance
- E Ministry of Commerce & Industry

Answer: C

Latest Job Updates on Telegram - Join here

Question 38

As per the recent press reports, use of credit cards in India has gone down. What is/are the main reason/s for the same?

- (A) High interest rate charged by the card companies.
- (B) Rise in fraudulent activities related to use of credit cards.
- (C) Govt. policies which do not allow the launch of new credit cards by the banks.

- A Only (A)
- B Only (B)
- C Only (C)
- D All (A), (B) and (C)
- E None of these

Answer: D

Question 39

Which of the following terms is used in the field of Banking?

- A MRI
- B Refraction
- C Depository Receipt
- D Neutralization
- E Atomic Number

Answer: C

Question 40

Reverse Repo is a tool used by RBI to

- A Inject liquidity
- B Absorb liquidity
- C Increase the liquidity with banking system
- D decrease the liquidity

E None of these

Answer: B

Take 4 Free IBPS Clerk Mock Tests (With Solutions)

Question 41

Who amongst the following has asked banks to adopt 'six step' approach to prevent diversion of funds by the companies '?

A Company Registrar

B SEBI

C RBI

D AMFI

E All of these

Answer: C

Question 42

Which one of the following countries has been invited to join BRIC ?

A Indonesia

B Bangladesh

C South Africa

D China

E Argentina

Answer: C

Question 43

Who is Nicolas Sarkozy ?

A French Prime Minister

B French President

C Russian Prime Minister

D Russian President

E None of these

Answer: B

IBPS Clerk Previous Papers (Download PDF)

Question 44

Through which one of the following sources domestic funds are raised by Companies ?

- (A) IPO only.
- (B) FPO only.
- (C) Commercial papers.

- A Only (C)
- B All (A), (B) & (C)
- C Only (A) & (C)
- D Only (A)
- E Only (A) & (B)

Answer: D

Question 45

Which one of the following was the reason owing to which Government wants Reserve Bank of India to tighten prudential norms for NBFCs ?

- A To reduce liquidity in the market
- B It is as per Basel II requirements
- C It is as per Bank for International Settlement (BIS) directives
- D It is to protect NBFCs from any impact of possible economic slowdown
- E None of these

Answer: D

Question 46

Expand the term ALM used in Banking/Finance sector ?

- A Asset Liability Mismatch
- B Asset Liability Maturity
- C Asset Liability Management
- D Asset Liability Manpower
- E None of these

Answer: C

IBPS Clerk Important Questions PDF

Question 47

What are teaser loan rates charged by banks ?

- A Fixed rate of interest charged by banks
- B Floating rate of interest charged by banks

- C Rate of interest in the initial period is less and goes up subsequently
- D Rate of interest in the initial period is more and it goes down subsequently
- E None of these

Answer: C

Question 48

On which one of the following subjects Pranab Sen Committee has submitted its recommendations to the Government of India?

- A MGNREGA
- B Food Security
- C Inflation
- D Food processing industries
- E None of these

Answer: E

Question 49

Expand the term CCEA as used in administrative circles.

- A Cabinet Committee on External Affairs
- B Cabinet Committee on Economic Affairs
- C Cabinet Council on External Affairs
- D Cabinet Council on Economic Affairs
- E None of these

Answer: B

IBPS Clerk Free Preparation App

Question 50

With which one of the following games is Baichung Bhutia related ?

- A Hockey
- B Golf
- C Kabaddi
- D Football
- E Tennis

Answer: D

Explanation:

COMPUTER KNOWLEDGE

Free Banking Study Material (15000 Solved Questions)

Computer Knowledge

Instructions

For the following questions answer them individually

Question 51

Which of the following is contained on chips connected to the system board and is a holding area for data instructions and information? (processed data waiting to be output to secondary storage)

- A program
- B mouse
- C Internet
- D memory.
- E modem

Answer: D

IBPS Clerk Free Online Coaching

Question 52

To reload a Web page, press thebutton.

- A Redo
- B Reload
- C Restore
- D Ctrl
- E Refresh

Answer: E

Question 53

Mobile Commerce is best described as -

- A The use of Kiosks in marketing
- B Transporting products
- C Buying and selling goods/services through wireless handheld devices
- D Using notebook PC's in marketing
- E None of these

Answer: C

Question 54

Video processors consist of..... and..... which store and process images.

- A CPU and VGA
- B CPU and memory
- C VGA and memory
- D VGI and DVI
- E None of these

Answer: B

Question 55

The main circuit-board of the system unit is the –

- A computer program
- B control unit
- C motherboard
- D RAM
- E None of these

Answer: C

Question 56

What is the process of copying software programs from secondary storage media to the hard disk called ?

- A configuration
- B download
- C storage
- D upload
- E installation

Answer: E

Question 57

Which of the following is billionth of a second ?

- A Gigabyte
- B Terabyte
- C Nanosecond
- D Microsecond
- E Terasecond

Answer: C

Daily Free Banking Online Test

Question 58

When the pointer is positioned on ait is shaped like a hand.

- A Grammar error
- B Formatting error
- C Screen'Fip
- D Spelling error
- E Hyperlink

Answer: E

Question 59

The computer abbreviation KB usually means -

- A Key Block
- B Kernel.Boot
- C Key Byte
- D Kit Bit
- E Kilo Byte

Answer: E

Question 60

Connection or link to other documents or Web Pages that contain related information is called -

- A dial-up
- B electronic commerce
- C hyperlink
- D e-cash
- E domain name

Answer: C

Download IBPS Clerk General Knowledge PDF

Question 61

In the absence of parentheses, the order of operation is -

- A Exponentiation, addition or subtraction, multiplication or division
- B Addition or subtraction, multiplication or division, exponentiation
- C Multiplication or division, exponentiation. addition or subtraction

D Exponentiation, multiplication or division, addition or subtraction

E Addition or subtraction, exponentiation, multiplication or division

Answer: D

Question 62

To find the Paste Special option, you use the Clipboard group on thetab of Power Point.

A Design

B Slide Show

C Page Layout

D Insert

E Home

Answer: E

Question 63

A(n)..... program is one that is ready to run and does not need to be altered in any way.

A interpreter

B high-level

C compiler

D COBOL

E executable

Answer: E

200+ Free GK Tests for Banking exams

Question 64

Usually downloaded into folders that hold temporary Internet files,are written to your computer's hard disk by some of the Web sites you visit.

A anonymous files

B behaviour files

C banner ads

D large files

E cookies

Answer: E

Question 65

What is the easiest way to change the phrase, revenues, profits gross margin. To read revenues profits and gross margin '?

- A Use the insert mode position the cursor before the g in gross. then type the word and followed by a space
- B Use the insert mode, position the cursor after the g in gross, then type the word and followed by a space
- C Use the overtyp mode. position the cursor before the g in gross, then type the word and followed by a space
- D Use the over-type mode, position the cursor alter the gin gross. then type the word and followed by space
- E None of these

Answer: A

Question 66

Your business has contracted with another company to have them host and run an application for your company over the Internet. The company providing this service to your business is called an –

- A Internet service provider
- B Internet access provider
- C Application service provider
- D Application access provider
- E Outsource agency

Answer: C

100 Free IBPS Clerk Computer Awareness Tests

Question 67

A(n)allows you to access your e-mail from anywhere.

- A Forum
- B Webmail interface
- C Message Board
- D Weblog
- E None of these

Answer: B

Question 68

Which of the following would you find on LinkedIn ?

- A Games
- B Connections
- C Chat
- D Applications
- E None of these

Answer: B

Question 69

.....is a technique that is used to send more than one call over a single line.

- A Digital transmission
- B Infrared transmission
- C Digitizing
- D Streaming
- E Multiplexing

Answer: E

200+ Banking Previous Papers (Download PDF)

Question 70

The Search Companion can

- A Locate all files containing a specified phrase
- B Restrict its search to a specified set of folders
- C Locate all files containing a specified phrase and restrict its search to a specified set of folders
- D Cannot locate all files containing a specified phrase or restrict its search to a specified set of folders
- E None of these

Answer: C

Question 71

Which of the following cannot be part of an email address ?

- A Period (.)
- B At sign (@)
- C Space ()
- D Underscore (_)
- E None of these

Answer: C

Question 72

Which of the following must be contained in a URL?

- A a protocol identifier
- B the letters, www.
- C the unique registered domain name

- D www. and the unique registered domain name
- E a protocol identifier, www. and the unique registered domain name

Answer: C

Latest Job Updates on Telegram - Join here

Question 73

Which of the following information systems focuses on making manufacturing processes more efficient and of higher quality ?

- A Computer-aided manufacturing
- B Computer-integrated manufacturing
- C Computer-aided software engineering
- D Computer-aided system engineering
- E None of these

Answer: A

Question 74

A mistake in an algorithm that causes incorrect results is called a –

- A logical error
- B syntax error
- C procedural error
- D compiler error
- E machine error

Answer: A

Question 75

A device for changing the connection on a connector to a different configuration is–

- A a converter
- B a component
- C an attachment
- D an adapter
- E voltmeter

Answer: D

Take 4 Free IBPS Clerk Mock Tests (With Solutions)

Question 76

Which of the following will you require to hear music on your computer?

- A Video Card
- B Tape Recorder
- C Mouse
- D Joy Stick
- E Sound Card

Answer: E

Question 77

The signal that a computer is waiting for a command from the user

- A prompt
- B event
- C time slice
- D interrupt
- E None of these

Answer: A

Question 78

This software allows the user to move from page to page on the Web by clicking on or selecting a hyperlink, or by typing in the address of the destination page

- A Web browser
- B Web search engine
- C Web home page
- D Web service
- E None of these

Answer: A

IBPS Clerk Previous Papers (Download PDF)

Question 79

For viewing video CDs, you would use -

- A CD Player
- B Windows Media Player
- C Windows Video Player
- D Windows Movie Player
- E None of these

Answer: B

Question 80

Executing more than one program concurrently by one user on one computer is known as -

- A multiprogramming
- B multiprocessing
- C time-sharing
- D multitasking
- E multiaction

Answer: D

Question 81

Which of the following controls the manner of interaction between the user and the operating system?

- A language translator
- B platform
- C user interface
- D icon
- E None of these

Answer: C

IBPS Clerk Important Questions PDF

Question 82

You can keep your personal files/ folders in –

- A My folder
- B My Documents
- C My Files
- D My Text
- E My Collection

Answer: B

Question 83

Three types of compact disks include CD-ROM, CD-R, and

- A CD-W
- B CD-RAM
- C CD-DVD
- D CD-RW

E None of these

Answer: D

Question 84

All computers must have -

A Word processing software

B An operating system

C A printer attached

D A virus checking program

E None of these

Answer: B

IBPS Clerk Free Preparation App

Question 85

Collecting personal information and effectively posing as another individual is known as the crime of --

A spooling

B spoofing

C hacking

D identity theft

E None of these

Answer: D

Question 86

The box that contains the central electronic components of the computer is the -

A motherboard

B system unit

C peripheral

D input device

E None of these

Answer: A

Question 87

What menu is selected to cut, copy and paste ?

A File

B Edit

- C Tools
- D Table
- E None of these

Answer: B

Free Banking Study Material (15000 Solved Questions)

Question 88

A program that converts a high-level language source file into a machine-language file is called a

- A translator
- B assembler
- C compiler
- D linker
- E None of these

Answer: C

Question 89

Theindicates how much data a particular storage medium can hold.

- A access
- B capacity
- C memory
- D storage
- E None of these

Answer: B

Question 90

A(n)..... is created by an application.

- A executable file
- B software program
- C document
- D operating system
- E None of these

Answer: A

Question 91

Thekey and thekey can be used in combination with other keys to perform shortcuts and special tasks.

- A Control, Alt
- B Function, toggle
- C Delete, Insert
- D Caps Lock, Num Lock
- E None of these

Answer: A

Question 92

What is a file ?

- A A file is a section of main storage used to store data
- B A file is a collection of information that has been given a name and is stored in secondary memory
- C A file is the part of a program that is used to describe what the program should do
- D A file is another name for floppy disk
- E None of these

Answer: B

Question 93

For creating a document, you usecommand at File Menu.

- A Open
- B Close
- C New
- D Save
- E None of these

Answer: C

Question 94

Applications are often referred to as -

- A data files
- B executable files
- C system software
- D the operating system
- E None of these

Answer: B

Question 95

PC stands for -

- A Personal Comprehension
- B Personal Computing
- C Personal Computer
- D Personal Calculations
- E None of these

Answer: C

Question 96

Several computers linked to a server to share programs and storage space

- A Network
- B grouping
- C library
- D integrated system
- E None of these

Answer: A

Daily Free Banking Online Test

Question 97

Soft copy refers to

- A printed output
- B music sounds
- C screen output
- D digitizing
- E None of these

Answer: C

Question 98

Meaningful filename helps in easy file

- A Storing
- B Accessing
- C Identification

- D Printing
- E None of these

Answer: B

Question 99

LAN stands for

- A Local Access Network
- B Local Area Network
- C Logical Access Network
- D Logical Area Network
- E None of these

Answer: B

[Download IBPS Clerk General Knowledge PDF](#)

Question 100

WWW stands for

- A World Work Web
- B Wide Work Web
- C Wide World Web
- D World Wide Web
- E None of these

Answer: D

Explanation:

ENGLISH LANGUAGE

200+ Free GK Tests for Banking exams

English

Instructions

Read each sentence to find out whether there is any grammatical error in it. The error, if any, will be in one part of the sentence. The number of that part is the answer. If there is no error, the answer is e: i.e. 'No Error'. (Ignore the errors of punctuation, if any).

Question 101

I noticed (a)/ several reporters (b)/ hovering around (c)/ outside of the courtroom. (d) No Error' (e)

- A I noticed
- B several reporters
- C hovering around

D outside of the courtroom

E No Error

Answer: D

100 Free IBPS Clerk Computer Awareness Tests

Question 102

My colleague had (a)/ a hard time juggling (b)/ the needs of her family (c)/ with the demands of her job. (d)/ No Error (e)

A My colleague had

B a hard time juggling

C the needs of her family

D with the demands of her job

E No Error

Answer: D

Question 103

Despite all (a)/ the media hype, (b)/ I found the film as (c)/ very disappointing (d)/ No Error (e)

A Despite all

B the media hype

C I found the film as

D very disappointing

E No Error

Answer: C

Question 104

Given that (a)/ there was so less time. (b)/ I think the students have (c)/ done a good job. (d)/ No Error (e)

A Given that

B there was so less time

C I think the students have

D done a good job

E No Error

Answer: E

200+ Banking Previous Papers (Download PDF)

Question 105

The winner of (a) / the journalist of the year award was (b)/ not other than (c)/ the editor's daughter. (d)/ No Error (e)

- A The winner of
- B the journalist of the year award was
- C not other than
- D the editor's daughter
- E No Error

Answer: C

Instructions

In each of the following sentences, an idiomatic expression or a proverb is highlighted. Select the alternative which best describes its use in the sentence.

Question 106

In the last budget, the government brought in a new scheme of taxation.

- A prioritised
- B displayed
- C notified
- D introduced
- E purchased

Answer: D

Question 107

The sales of the company are increasing by leaps and bounds.

- A as proposed
- B in calculated ways
- C with extreme rapidity
- D very slowly
- E far lesser than expected

Answer: C

Latest Job Updates on Telegram - Join here

Question 108

The police made considerable headway in sorting the papers.

- A progress
- B movement

- C action
- D recognition
- E measurement

Answer: A

Question 109

The kind old woman received the stranger with open arms.

- A with her arms free
- B with warmth
- C with restraint
- D with gratitude
- E with hesitation

Answer: B

Question 110

My friend ran off helter-skelter down the slope.

- A unknowingly
- B with minimum speed
- C purposefully
- D with unwavering focus
- E hurriedly and in confusion

Answer: E

Take 4 Free IBPS Clerk Mock Tests (With Solutions)

Instructions

Pick out the most effective word/words from the given word/s to fill in the blanks to make the sentence meaningfully complete in the context of the sentence.

Question 111

I have given myself.....the end of September to finish my research.

- A between
- B until
- C to
- D for
- E near

Answer: C

Question 112

It is..... that John did not hurt himself when he fell off his motorbike.

- A luckily
- B fortunate
- C understanding
- D found
- E knowing

Answer: B

Question 113

You must not look directly at the sunthe eclipse.

- A during
- B in
- C on
- D to
- E at

Answer: A

IBPS Clerk Previous Papers (Download PDF)

Question 114

The mist was so thick, it was like walking..... a cloud.

- A beyond
- B by
- C along
- D through
- E against

Answer: D

Question 115

I told my friend that he could not catch a big fisha small rod like the one he was carrying, but he insisted..... trying.

- A with, on
- B by, about
- C with, about
- D by, on

E on, for

Answer: A

Instructions

In each question below, four words printed in bold type are given. These are numbered a, b, c, and d. One of these words printed in bold may either be wrongly spelt or inappropriate in the context of the sentence. Find out the word that is inappropriate or wrongly spelt, if any. The number of that word is your answer. If all the words printed in bold are correctly spelt and appropriate in the context of the sentence then mark e: i.e. 'All Correct' as your answer.

Question 116

The results (a)/ of the survey (b)/ have been (c)/ very encouraging. (d)/ All Correct (e)

- A The results
- B of the survey
- C have been
- D very encouraging
- E All Correct

Answer: D

IBPS Clerk Important Questions PDF

Question 117

It mattered (a)/ a great deal (b)/ to the actress (c)/ what other people taught (d)/ of her. All Correct (e)

- A It mattered
- B a great deal
- C to the actress
- D what other people taught
- E of her. All Correct

Answer: D

Question 118

The young boy's aggression (a)/ is actually a defence (b)/ mechanism (c)/ against rejection. (d)/ All Correct (e)

- A The young boy's aggression
- B is actually a defence
- C mechanism
- D against rejection
- E All Correct

Answer: E

Question 119

There are no easy solutions (a)/ to the problems (b)/ of nuclear (c)/ waste disposal. (d)/ All Correct (e)

- A There are no easy solutions
- B to the problems
- C of nuclear
- D waste desposal
- E All Correct

Answer: D

IBPS Clerk Free Preparation App

Question 120

The company (a)/ should divan (b)/ more resources (c)/ into research. (d)/All Correct (e)

- A The company
- B should divan
- C more resources
- D into research
- E All Correct

Answer: B

Instructions

Rearrange the following six sentences/ group of sentences (A), (B), (C). (D). (E) and (F) in the proper sequence to form a meaningful paragraph: then answer the questions given below them.

- (A) Then Bankei said to his pupils. -It is my duty to teach him. I am going to keep him here even if the rest of you leave.
- (B) During one of these gaterning a pupil was caught stealing
- (C) Whenever Bankei held his meditation classes, pupils from many parts of Japan would enroll in them.
- (D) Listening to his master, a stream of tears rolled down the lace of the brother who had stolen. All desire to steal had thereafter vanished.
- (E) As soon as Bankei had read the petition he called everyone before him. "You are wise brothers.- he told them. "You know what is right and what is wrong, but this poor brother does not even know right from wrong."
- (F) This angered the other pupils. who drew up a petition asking fur the dismissal of the thief, stating that otherwise they would all leave.

Question 121

Which of the following should be the **SECOND** sentence after the rearrangement ?

- A B
- B C
- C F
- D A
- E E

Answer: A

Question 122

Which of the following should be the FOURTH sentence after the rearrangement?

- A C
- B E
- C F
- D B
- E A

Answer: B

Free Banking Study Material (15000 Solved Questions)

Question 123

Which of the following should be the THIRD sentence after the rearrangement ?

- A A
- B D
- C F
- D C
- E E

Answer: C

Question 124

Which of the following should be the FIRST sentence after the rearrangement ?

- A D
- B C
- C F
- D B
- E E

Answer: B

Question 125

Which of the following should be the FIFTH sentence after the rearrangement ?

- A D
- B C
- C B
- D A

E F

Answer: D

IBPS Clerk Free Online Coaching

Instructions

In the following passage, there are blanks, each of which has been numbered. These numbers are printed below the passage and against each, five words are suggested, one of which fits the blank appropriately. Find out the appropriate word in each case, A merchant was (26) a morning stroll by the seaside when he saw a man squatting on the beach and filling a cup with sand. The merchant watched the man as he (27) the contents of the cup on a large pile of sand beside him and filled the cup again. He continued to repeat this activity. The merchant was curious and so went up to him and asked him what he was doing.

"I am Bidhata (meaning Fate)," said the man. "I am measuring the food each man is to (28) today." "Can you really do that?" asked the merchant. "I (29) you to withhold my midday meal today!" "As you wish," replied Bidhata. The merchant (30) a fish from the fish market across the road, took it home and gave it to his wife. Then he went to his place of work. In the afternoon he came home and sat down to eat. His wife (31) the cooked fish before him. "Fate has it that I won't get my midday meal," (32) the man. "But now who can stop me from eating this delicious fish?" And he(33) out laughing. His wife thought he was laughing at the way the fish had been (34) and she began to scold him. The merchant got angry. lie got up and stunned out of the house. It was only when he cooled down that he realised the (35) of what had happened Fate had succeeded in withholding his share of food tbr that afternoon.

Question 126

- A enjoy
- B thinking
- C going
- D doing
- E taking

Answer: E

Question 127

- A throw
- B keep
- C fill
- D emptied
- E reduced

Answer: D

Question 128

- A insure
- B deplete
- C getting
- D eating
- E receive

Answer: E

Question 129

- A remind
- B plead
- C say
- D challenge
- E tell

Answer: D

Question 130

- A trapped
- B tasted
- C bought
- D chased
- E discovered

Answer: C

Question 131

- A made
- B keep
- C placed
- D ate
- E cleaned

Answer: C

Daily Free Banking Online Test

Question 132

- A rejoiced
- B wonder
- C announce
- D realise
- E thought

Answer: A

Question 133

- A burst
- B started
- C turned
- D walked
- E held

Answer: A

Question 134

- A Prepared
- B appeared
- C look
- D taste
- E clean

Answer: A

Download IBPS Clerk General Knowledge PDF

Question 135

- A mistake
- B offence
- C significance
- D problem
- E event

Answer: C

Instructions

Read the following passage carefully and answer the questions given below it. Certain words are printed in bold to help you to locate them while answering some of the questions.

Amrutananda was a well-known and rich landlord in his village. He and his wife were both cunning and extremely sly. They made a lot of money by cheating and ill-treating their labourers who worked in their fields. One day, a young man named Manikya came to Amrutananda, asking for work. Amrutananda was pleasantly surprised. No one ever wanted to work for him because of his reputation and here was someone walking right into his house! Manikya's next few words made him even happier. Manikya said, 'I will work for you for free. You need not pay me a salary, only give me a place to sleep, two sets of clothes and two meals a day.' Amrutananda was filled with joy when he heard this and was about to agree. When Manikya added, 'I have only one condition: I will tell you the truth always, but one day of the year I will lie to you.'

Amrutananda, who lied happily every day of the year, agreed to this odd condition. So Manikya joined him. He was a wonderful worker – hard – working and trustworthy. He was very honest and soon became Amrutananda's right hand man. A year went by, and because of Manikya's hard work, Amrutananda had an excellent harvest. He and his wife Mandakini, decided to have a big feast to celebrate. They invited all their relatives and friends, who came from across the village and outside to participate in this celebration. Everyone was looking forward to the delicious feast being planned. On the morning of the feast, Amrutananda decided he would also give away some

gifts to his relatives, just so that he could show-off. So he set off for the market in his cart. As soon as he was out of sight. Manikya went running to his mistress. Mandakini. He wept loudly and heat his chest. Then he fell on the floor sobbing, and announced, 'The master is dead.' The cart overturned on the road. Our master has been flattened like a Chapatti" As soon as Amrutananda's wife and relatives heard this, they started wailing. Manikya rushed out, saying he would bring back the body, while everyone started preparing for the last rites.

Manikya now went running to his master and said "Master! Your wife is dead. My kind, loving mistress is dead. A cobra bit her and she fell to the ground, as blue as the spring sky.- Amrutananda was stunned. His beloved Mandakini, his partner in all his schemes, was dead! He couldn't believe it. He rushed back home shouting her name. Mandakini was weeping loudly, sitting in the courtyard. When she saw her husband run in, she stopped mid-wail. and Amrutananda too, stood openmouthed and speechless. Then they fell into each other's arms, unable to believe their eyes.

At once they turned to Manikya, "What is the meaning of this. Manikya his master demanded in a stern voice. Manikya smiled. "Remember my condition, that I would lie only once in a year? Well, I choose today. You *see what lies can do? They nearly destroyed your life. Now think about what happens to the people you lie to everyday. Saying this he walked out, leaving behind a stunned and ashamed landlord.

Question 136

Why didn't anyone want to work for Amrutananda ?

- A He always ill-treated and cheated his labourers.
- B He wanted people to work for him for free
- C He never paid their dues on time.
- D He hardly made them work
- E He had too many conditions

Answer: A

Question 137

Why did Manikya volunteer to work for Amrutananda for free?

- A His food and shelter would be taken care of.
- B He was fond of Amrutananda.
- C He had heard many stories of Amrutananda's generosity.
- D He wanted to teach Amrutananda a lesson.
- E He could not find work anywhere else.

Answer: D

200+ Free GK Tests for Banking exams

Question 138

What was Manikya's intention for lying to his master?

- (A) He wanted to draw some attention to himself.
- (B) He was jealous of his master.
- (C) He wanted to cause trouble during the celebration.

- A Only (A)
- B Only (B) and (C)
- C Only (C)

- D Only (B)
- E None of these

Answer: E

Question 139

What could be an appropriate moral to the story ?

- A Lying destroys lives,
- B Never employ anyone for free.
- C Always think before you cry.
- D Never show off your wealth.
- E Feasts always lead to tragedy.

Answer: A

Question 140

Which of the following statements is false as inferred from the passage?

- A Amrutananda's wife was bitten by a cobra snake.
- B Manikya was a very hard working and trustworthy servant,
- C Amrutananda was known for his shrewdness,
- D Manikya chose to work for Amrutananda for free,
- E Amrutananda's harvest was successful because of Manikya,

Answer: A

100 Free IBPS Clerk Computer Awareness Tests

Question 141

On what condition did Manikya agree to stay and work for Amrutananda ?

- A He would be treated like a family member.
- B He would be allowed to lie on anyone's bed in the year.
- C He would leave the day his master, Amrutananda, lied to him.
- D He would not accept any salary, either in kind or in cash from Amrutananda.
- E That he could leave whenever he pleased without prior notice.

Answer: B

Question 142

What important lesson did Amrutananda learn from Manikya ?

- A To never hire anyone for free.

- B That hardwork is the only key to success.
- C To never show off his wealth.
- D That it is okay to lie for one day of the year.
- E None of these

Answer: E

Question 143

Why did Amrutananda and his wife, Mandakini, wish to have a celebration ?

- A They wanted to treat Manikya to a feast for his effort in the successful harvest.
- B They wanted to give Manikya a farewell.
- C They received a rich harvest and so wanted to have a feast.
- D They had abundant food and did not know what to do with it,
- E They wanted to show off their wealth to their neighbours.

Answer: C

200+ Banking Previous Papers (Download PDF)

Question 144

Why was Amrutananda's wife trying in the house?

- A Nothing was going right during the feast.
- B Her relatives could not make it for the celebration.
- C Her best servant, Manikya announced that he was quitting.
- D She received news that her husband was dead.
- E None of these

Answer: D

Question 145

Which of the following could be an appropriate title for the story "

- A The Unfortunate Landlord.
- B Manikya – the wise labourer.
- C The Evil Labourer
- D The Glorious Feast
- E The Feast that turned into a Disaster.

Answer: B

Instructions

Choose the word which is most nearly the SAME in meaning as the word printed in bold as used in the passage.

Question 146

Overturned

- A Slipped
- B Rotated
- C Inverted
- D Accident
- E Blocked

Answer: C

[Latest Job Updates on Telegram - Join here](#)

Question 147

Odd

- A Acceptable
- B Normal
- C Favourable
- D Unique
- E Strange

Answer: E

Question 148

Stunned

- A Shocked
- B Confused
- C Doubtful
- D Hesitant
- E Scared

Answer: A

Instructions

Choose the word which is most OPPOSITE in meaning of the word printed in bold as used in the passage.

Question 149

Cunning

- A Pure
- B Sly

- C Innocent
- D Harsh
- E Superior

Answer: C

Take 4 Free IBPS Clerk Mock Tests (With Solutions)

Question 150

Ashamed

- A Happy
- B Proud
- C Crateful
- D Peaceful
- E Guilty

Answer: B

IBPS Clerk Previous Papers (Download PDF)

Quant

Instructions

For the following questions answer them individually

Question 151

$$3\frac{3}{6} + 4\frac{1}{2} - 2\frac{2}{3} - 1\frac{11}{12} = ?$$

- A $3\frac{7}{12}$
- B $3\frac{1}{12}$
- C $1\frac{5}{12}$
- D $1\frac{7}{12}$
- E None of these

Answer: B

Explanation:

$$3\frac{3}{6} + 4\frac{1}{2} - 2\frac{2}{3} - 1\frac{11}{12}$$

Lets, rearrange the integers and fractional values

$$= (3 + 4 - 2 - 1) + \left(\frac{3}{6} + \frac{1}{2} - \frac{2}{3} - \frac{11}{12}\right)$$

$$= 4 + \left(\frac{2+6-8-11}{12}\right)$$

$$= 4 - \frac{11}{12}$$

$$= \frac{1}{312}$$

IBPS Clerk Important Questions PDF

Question 152

$$\frac{414 \div 23 \times 7 + 36}{7^2 + (3^2 - 2^2)} = ?$$

- A 3
- B 2
- C 5
- D 4
- E None of these

Answer: A

Explanation:

$$\frac{414 \div 23 \times 7 + 36}{7^2 + (3^2 - 2^2)}$$

$$\frac{18 \times 7 + 36}{7^2 + (3^2 - 2^2)}$$

$$\frac{126 + 36}{7^2 + (3^2 - 2^2)}$$

$$\frac{162}{7^2 + (3^2 - 2^2)}$$

$$\frac{169}{49 + 5}$$

$$= 3$$

Question 153

$$\sqrt{444 \div 37 + 15 + 11 \times (?)} = 7$$

- A 3
- B 4
- C 2
- D 5
- E None of these

Answer: C

Explanation:

$$\sqrt{444 \div 37 + 15 + 11 \times (x)} = 7$$

$$\sqrt{12 + 15 + 11 \times x} = 7$$

$$12 + 15 + 11 \times x = 49$$

$$11 \times x = 49 - 27 = 22$$

$$x = \frac{22}{11}$$

$$= 2$$

Question 154

$$56.4 \times 22.5 - 232 \div 8 = ?$$

- A 1242
- B 1422
- C 1240
- D 1268
- E None of these

Answer: C

Explanation:

$$(56.4 \times 22.5) - (232 \div 8)$$

$$= 1269 - 29$$

$$= 1240$$

IBPS Clerk Free Preparation App

Question 155

$$125 \times 625 + 25 = 5$$

- A 3
- B 8
- C 5
- D 9
- E None of these

Answer: B

Explanation:

EndGroup:

Question 156

$$62626 - 6262 + 626 - 62 + 6 = ?$$

- A 56934
- B 56494
- C 54694
- D 54664
- E None of these

Answer: A

Explanation:

$$62626 + 626 + 6 - 6262 - 62$$

$$= 62626 + 626 + 6 - (6262 + 62)$$

$$= 63258 - 6324$$

$$= 56934$$

Question 157

$$(0.6)^4 \times (0.36)^2 \times (0.216) = (0.6)^{(?)}$$

- A 12
- B 14
- C 11
- D 13
- E None of these

Answer: C

Explanation:

$$(0.6)^4 * (0.6 * 0.6)^2 * (0.6 * 0.6 * 0.6)$$

$$(0.6)^4 * (0.6^2)^2 * (0.6^3)$$

$$(0.6)^{4+4+3}$$

$$(0.6)^{11}$$

Hence , x = 11

Free Banking Study Material (15000 Solved Questions)

Question 158

$$38\% \text{ of } 295 + 62\% \text{ of } 445 = ?$$

- A 380
- B 388
- C 346
- D 391
- E None of these

Answer: B

Explanation:

$$\frac{38}{100} \times 295 + \frac{62}{100} \times 445$$

$$= 112.1 + 275.9$$

$$= 388$$

Question 159

$$84.42 - 43.82 + 16.57 - 32.49$$

- A 24.68
- B 22.48
- C 29.58
- D 26.68
- E None of these

Answer: A

Explanation:

$$84.42 - 43.82 + 16.57 - 32.49$$

$$= 24.68$$

Question 160

$$37\% \text{ of } 248 - 27\% \text{ of } 310 = ?$$

A 8.60

B 7.06

C 9.10

D 8.06

E None of these

Answer: D

Explanation:

$$\frac{37}{100} \times 248 - \frac{27}{100} \times 310$$

$$= 91.76 - 83.7$$

$$= 8.06$$

IBPS Clerk Free Online Coaching

Question 161

$$494 \div 38 \times (?) = 832 \div 4$$

A 18

B 15

C 16

D 12

E None of these

Answer: C

Explanation:

$$494 \div 38 \times (x) = 832 \div 4$$

$$13 * x = 208$$

$$x = 16$$

Question 162

$$27.831 - 31.425 + 18.749 - (?) = 12$$

A 3.255

B 3.105

C 4.155

D 4.345

E None of these

Answer: E

Explanation:

$$27.831 - 31.425 + 18.749 - x = 12$$

$$15.155 - x = 12$$

$$x = 15.155 - 12$$

$$= 3.155$$

Hence, none of these

Question 163

18.5% of 320 + 7.4% of 450 = ?

A 90.5

B 92.8

C 86.3

D 98.6

E None of these

Answer: E

Explanation:

$$\frac{18.5}{100} \times 320 + \frac{7.4}{100} \times 450$$

$$= 92.5$$

Hence, none of these

Question 164

13.013 - 22.104 + 62.903 - 9.048 = ?

A 44.744

B 42.764

C 4.724

D 44.764

E None of these

Answer: D

Explanation:

$$x = 13.013 - 22.104 + 62.903 - 9.048$$

$$= 44.764$$

Question 165

$$24^3 \times 57^5 \div 29^4 - (?) = 4$$

- A $2\frac{1}{7}$
- B $3\frac{2}{7}$
- C $3\frac{4}{7}$
- D $2\frac{3}{7}$
- E None of these

Answer: D

Explanation:

$$2\frac{3}{4} \times 5\frac{5}{7} \div 2\frac{4}{9} - (x) = 4$$

$$2\frac{3}{4} \times 5\frac{5}{7} \div 2\frac{4}{9} - 4 = x$$

$$11\frac{1}{4} \times 40\frac{5}{7} \div 22\frac{4}{9} - 4 = x$$

$$\Rightarrow \frac{45}{7} - 4 = x$$

$$\Rightarrow x = \frac{45}{7} - 4 = \frac{45 - 28}{7} = \frac{17}{7}$$

$$\Rightarrow x = 2\frac{3}{7}$$

Question 166

18% of 350 + 12% of 600 = ?

- A 125
- B 137
- C 135
- D 149
- E None of these

Answer: C

Explanation:

$$\frac{18}{100} \times 350 + \frac{12}{100} \times 600$$

$$= 135$$

Daily Free Banking Online Test

Question 167

(?)% of 432 \times 5 = 540

- A 45
- B 25
- C 34
- D 30
- E None of these

Answer: B

Explanation:

$$(x/100) * 432 * 5 = 540$$

$$x = 540 * 100 / 432 * 5$$

$$x = 25$$

Question 168

$$18 \times \sqrt{1156} \div 17 = (?)^2$$

A 7

B 49

C 6

D 36

E None of these

Answer: C

Explanation:

$$18 \times \sqrt{1156} \div 17 = x^2$$

$$18 \times 34 \div 17 = x^2$$

$$x = \sqrt{36}$$

$$x = 6$$

Question 169

$$3^3 \div 2^2 \times 4^{\frac{1}{2}} + 1^{\frac{3}{4}} = ?$$

A $7^{\frac{1}{2}}$

B $4^{\frac{1}{4}}$

C $3^{\frac{3}{4}}$

D $8^{\frac{1}{2}}$

E None of these

Answer: D

Explanation:

$$3^3 \div 2^2 \times 4^{\frac{1}{2}} + 1^{\frac{3}{4}}$$

$$\frac{15}{4} \div 2 \times \frac{9}{2} + \frac{7}{4}$$

$$= \frac{17}{2}$$

$$= 8^{\frac{1}{2}}$$

Download IBPS Clerk General Knowledge PDF

Question 170

$$143.94 + 36.78 - 71.63 = ?$$

- A 105.09
- B 108.89
- C 111.89
- D 109.09
- E None of these

Answer: D

Explanation:

$$143.94 + 36.78 = 180.72$$

$$180.72 - 71.63 = 109.09$$

Question 171

$$4611 - (18)^2 - 440 + (16)^2 = ?$$

- A 4183
- B 4003
- C 4103
- D 4193
- E None of these

Answer: C

Explanation:

$$= 4611 - 324 - 440 + 256$$

$$= 4103$$

Question 172

$$4359 - 320 \times 3 = 2156 + 14 + (?)$$

- A 3225
- B 3425
- C 3545
- D 3595
- E None of these

Answer: E

Explanation:

$$4359 - 960 = 2156 + 14 + x$$

$$x = 4359 - 960 - 2156 - 14$$

$$= 1229$$

Hence , none of the above

Question 173

$$14^{\frac{3}{4}} \times 13^{\frac{5}{13}} \times 7^{\frac{6}{7}} \text{ of } 3822 = ?$$

- A 240
- B 280
- C 290
- D 254
- E None of these

Answer: E

Explanation:

$$14^{\frac{3}{4}} \times 13^{\frac{5}{13}} \times 7^{\frac{6}{7}} \times 3822$$

$$= 270$$

hence, none of the above

Question 174

$$3\frac{3}{8} \times 4\frac{4}{9} \div 3\frac{4}{7} - 3\frac{3}{5} = ?$$

- A $\frac{3}{5}$
- B $4\frac{1}{5}$
- C $5\frac{1}{5}$
- D $\frac{2}{5}$
- E None of these

Answer: A

Explanation:

$$= 27/8 \times 40/9 \div 25/7 - 18/5$$

$$= 27/8 \times 40/9 \times 7/25 - 18/5$$

$$= 21/5 - 18/5$$

$$= 3/5$$

Question 175

$$21 \times 24 - (4)^3 + 7^2 - (?) = 19^2$$

- A 134
- B 128
- C 161
- D 149
- E None of these

Answer: B

Explanation:

$$(21 * 24) - 64 + 49 - x = 361$$

$$504 - 64 + 49 - x = 361$$

$$489 - x = 361$$

$$x = 489 - 361 = 128$$

100 Free IBPS Clerk Computer Awareness Tests

Question 176

If the total cost of four tube lights and three bulbs is Rs. 260 and the ratio between the cost of a tube light and a bulb is 5 : 2 respectively, what is the total cost of one tube light and six bulbs ?

- A Rs. 210
- B Rs. 130
- C Rs.180
- D Rs.170
- E None of these

Answer: D

Explanation:

Let the cost of tube light be $5x$ and a bulb be $2x$.

$$\text{Given that , } (4 * 5x) + (3 * 2x) = 260$$

$$\Rightarrow 26x = 260$$

$$x = 10$$

$$\text{Cost of 1 tube light and 6 bulbs} = 5x + (6 * 2x)$$

$$= 17x = 17 * 10 = 170$$

Question 177

Three-tenth of a number is equal to 36% of another number. If the sum of these two numbers is 88. then what is the value of the smaller number ?

- A 38
- B 40
- C 48
- D 34
- E None of these

Answer: B

Explanation:

Let the numbers be a and b .

$$\frac{3}{10} a = \frac{36}{100} b$$

$$\text{i.e. } a = \frac{12}{10} b$$

$$\text{also , } a + b = 88$$

$$\frac{12}{10} b + b = 88$$

$$b = 40$$

$a = 88 - b = 88 - 40 = 48$.
hence the smaller number is 40 .

Question 178

The sum of the present ages of Ram, Shyam and Vijay is 72 years. Also the sum of present ages of Ram and Shyam is 42 years. What is the present Vijay ?

- A 30 years
- B 24 years
- C 18 years
- D 36 years
- E None of these

Answer: A

Explanation:

Given , sum of all ages = 72 . sum of ages of Ram and Shyam is 42.

Vijay's present age = $72 - 42 = 30$ years

200+ Banking Previous Papers (Download PDF)

Question 179

The compound interest accrued on a sum of Rs. 7,500 in two years is Rs.927. What would be the rate of interest p.c.p.a. ?

- A 5.4%
- B 8%
- C 6%
- D 8.4%
- E 5%

Answer: C

Explanation:

Given,

Compound interest (CI) = 927

Time period (t)= 2 years

principle amount (P)= 7500

$$CI = P\left\{ \left[1 + \frac{r}{100} \right]^t - 1 \right\}$$

$$927 = 7500\left\{ \left[1 + \frac{r}{100} \right]^2 - 1 \right\}$$

On solving , $r = 6\%$

Question 180

Sohan spends 23% of an amount of money on an insurance policy, 33% on food, 19% on children's education and 16% on recreation. He deposits the remaining amount of Rs.504 in bank. How much total amount did he spend on food and insurance policy together ?

- A Rs. 3,200
- B Rs. 3,126
- C Rs. 3,136
- D Rs. 3,048
- E None of these

Answer: C

Explanation:

Let the total amount be Rs. 'T'

$$\text{Savings percent} = [100 - (23 + 33 + 19 + 16)]\% = 9\%$$

Given, 9% of T = 504

$$\Rightarrow T = 504 * (100/9) = 5600$$

Expenditure on food and insurance policy together = 56% of 5600

$$= \text{Rs. } \frac{56}{100} * 5600$$

=Rs. 3136

Question 181

What least number should be subtracted from 9889 to make it a perfect square ?

- A 84
- B 88
- C 108
- D 74
- E None of these

Answer: B

Explanation:

Clearly,

$$99^2 = 9801$$

$$100^2 = 10000$$

As, $9801 < 9889 < 10000$

Required least number = $9889 - 9801 = 88$

Latest Job Updates on Telegram - Join here

Question 182

In how many different ways can the letters of word 'POWERS' be arranged ?

- A 640
- B 720
- C 1440
- D 360

E None of these

Answer: B

Explanation:

There are 6 different letters in the word POWERS.
The can be arranged in $6!$ ways = 720

Question 183

Five-ninth of sixty two percent of a number is equal to 2790. What is the number ?

A 8100

B 7200

C 6300

D 8500

E None of these

Answer: A

Explanation:

Let the number be 'N'.

Given that, $9^5 * (64/100) * N = 2790$

On solving, $N = 8100$

Question 184

The difference between the circumferences of two circles is 132 cms. and the radius of smaller circle 14 cms. What is the radius of larger circle ?

A 14 cms.

B 21 cms.

C 30 cms.

D 42 cms.

E None of these

Answer: E

Explanation:

Let the radius of the larger circle be R and the radius of smaller circle be r .

Given $r = 14$.

$$2\pi R - 2\pi r = 132$$

$$2\pi (R - r) = 132$$

$$\pi (R - r) = 66$$

$$\text{Consider } \pi = \frac{22}{7}$$

$$R - 14 = \frac{66 \times 7}{22} = 21$$

$$R = 21 + 14 = 35 \text{ cms.}$$

Hence Option E is the correct answer.

Take 4 Free IBPS Clerk Mock Tests (With Solutions)

Question 185

In a test, minimum passing percentage for reserved and unreserved category is 40% and 54% respectively. A candidate from unreserved category secured 300 marks and failed by 24 marks. What are the minimum passing marks of reserved category in that test ?

- A 280
- B 254
- C 230
- D 240
- E None of these

Answer: D

Explanation:

Let the Total marks is 'T' .

The unreserved guy got 300 but failed by 24 marks i.e. his pass mark is $300 + 24 = 324$.

Given that , the pass mark for unreserved guy is 54% of the total . i.e. $\frac{54}{100} T = 324$.

We get , $T = 600$.

Also given that the pass mark for reserved guy is 40% of the total . i.e. $\{40/100\} * 600 = 240$.

Instructions

What should come in place of question mark in the following series ?

Question 186

23 33 46 62 81 103 (?)

- A 126
- B 130
- C 133
- D 128
- E None of these

Answer: D

Explanation:

Clearly ,

$$33 - 23 = 10$$

$$46 - 33 = 13$$

$$62 - 46 = 16$$

$$81 - 62 = 19$$

$$103 - 81 = 22$$

Each difference value is increasing by +3 . Hence , the next difference must be $22+3 = 25$.

Hence, $103 + 25 = 128$

Question 187

7 14 25 38 55 74 (?)

- A 97

- B 99
C 107
D 113
E None of these

Answer: A

Explanation:

Clearly, $14 - 7 = 7$

$$25 - 14 = 11$$

$$38 - 25 = 13$$

$$55 - 38 = 17$$

$$74 - 55 = 19$$

Hence, the next difference must be the next prime number which is 23.

$$\text{So, } X - 74 = 23$$

$$X = 97$$

IBPS Clerk Previous Papers (Download PDF)

Question 188

9 73 105 121 129 (?) 135

- A 13
B 131
C 133
D 134
E None of these

Answer: C

Explanation:

Clearly, $73 - 9 = 64$

$$105 - 73 = 32$$

$$121 - 105 = 16$$

$$129 - 121 = 8$$

Each of the consecutive difference is getting reduced by half. Hence, next difference must be 4.

$$\text{i.e. } x - 129 = 4$$

$$x = 133$$

Instructions

For the following questions answer them individually

Question 189

If a certain sum of money is distributed among 43 people. each one gets Rs. 221 and Rs. 83 is left. What is the total amount ?

- A Rs.9,480
B Rs.9,586

- C Rs.9,408
- D Rs.8,648
- E None of these

Answer: B

Explanation:

Given that each one of the 43 member gets 221 rupees. so, $221 \times 43 = 9503$. But still 83 is left over. So, $9503 + 83 = 9586$

Question 190

Out of the fractions $\frac{6}{11}, \frac{13}{23}, \frac{15}{29}, \frac{3}{7}, \frac{4}{13}$, the third lowest fraction ?

- A $\frac{6}{11}$
- B $\frac{13}{23}$
- C $\frac{15}{29}$
- D $\frac{3}{7}$
- E $\frac{4}{13}$

Answer: C

Explanation:

Out of $\frac{6}{11}, \frac{13}{23}, \frac{15}{29}, \frac{3}{7}, \frac{4}{13}$

$$\frac{6}{11} = 0.54545$$

$$\frac{13}{23} = 0.565$$

$$\frac{15}{29} = 0.52$$

$$\frac{3}{7} = 0.43$$

$$\frac{4}{13} = 0.31$$

Clearly $\frac{4}{13} < \frac{3}{7} < \frac{15}{29} < \frac{6}{11} < \frac{13}{23}$

Hence $\frac{15}{29}$ is the 3rd lowest.

IBPS Clerk Important Questions PDF

Question 191

The salary of an employee of a company increases every month by 4%. If his salary in August was Rs.6,300, what will be his approximate salary in month of October of the same year ?

- A Rs.6,552
- B Rs.6,967
- C Rs.6,814
- D Rs.6,627
- E Rs.6,933

Answer: C

Explanation:

Given that , the salary in august is 6300. And the salary increases by 4% every month. i.e. the new salary will be $(1 + \frac{4}{100})$ times.
In September , it will be $6300 * (1+0.04) = 6552$

In October , it will be $6552 * (1+0.04) = 6814$ rs.

Question 192

What will come in place of both the question marks (?) in the following equation ?

$$\frac{(?)^2}{108} = \frac{16}{(?)}$$

- A 18
- B 16
- C 12
- D 24
- E None of these

Answer: C

Explanation:

$$\text{Given, } \frac{(x)^2}{108} = \frac{16}{(x)}$$

Rearranging them gives, $x^3 = 16 * 108$

$$x^3 = (4*4)*(9*12)$$

$$= (4*4)*(3*3*4*3)$$

$$= 4^3 * 3^3$$

$$= 12^3$$

Hence, $x = 12$

Question 193

If 9^2 is subtracted from a square of a number, the value so obtained is 544. What is the number ?

- A 25
- B 26
- C 32
- D 27
- E None of these

Answer: A

Explanation:

Let , the number be 'x' .

$$\text{Given that , } x^2 - 9^2 = 544 .$$

$$\text{so , } x^2 = 544 + 9^2$$

$$x^2 = 625$$

$$\text{Hence , } x = \sqrt{625}$$

$$= 25$$

Question 194

The ratio of angles of a triangle is 3 : 5 : 7. What is the difference between double the smallest angle and half of the largest angle ?

- A 25
- B 36
- C 38
- D 30
- E None of these

Answer: D

Explanation:

We know that the sum of interior angles of a triangle is equal to 180° .

The total sum of the ratios must be equal to 180° .

Hence each angle of the triangle is $\frac{3 \times 180}{15} = 36^\circ$, $\frac{5 \times 180}{15} = 60^\circ$ and $\frac{7 \times 180}{15} = 84^\circ$

Twice the smallest angle = $2 \times 36 = 72$.

Half the largest angle = $\frac{84}{2} = 42$.

Difference = $72 - 42 = 30$.

Hence Option D is the correct answer.

Question 195

The ratio between the length and the breadth of a rectangle is 4 : 3 respectively. Also as perimeter is 112 cms. What is the area of a rectangle ?

- A 748 sq. cms.
- B 768 sq. cms.
- C 680 sq. cms.
- D 840 sq. cms.
- E None of these

Answer: B

Explanation:

Let the length be l and the breadth be b .

$$\frac{l}{b} = \frac{4}{3}$$
$$b = \frac{3 \times l}{4}$$

$$\text{Also, } 2 \times (l + b) = 112$$

$$l + b = 56$$

$$l + \frac{3 \times l}{4} = 56$$

$$\frac{7 \times l}{4} = 56$$

$$l = 8 \times 4 = 32$$

$$b = 56 - 32 = 24$$

$$\text{Area of Rectangle} = l \times b = 32 \times 24 = 768.$$

Hence option B is the correct answer.

Instructions

What approximate value should come in place of the question mark (?) in the following questions ?

Question 196

$$413^9 \times 319^6 \div 47^4 = ?$$

- A 8
- B 10
- C 6
- D 13
- E 3

Answer: E

Explanation:

$$413^9 \times 319^6 \div 47^4$$

$$61^{13} \times 19^{32} \div 7^4$$

$$= 3.4$$

$$= 3 \text{ (approx)}$$

Free Banking Study Material (15000 Solved Questions)

Question 197

$$3968^{28} \times (6^2) + 410 = ?$$

- A 5800
- B 5500
- C 5400
- D 5600
- E 6100

Answer: B

Explanation:

$$3968^{28} \times (6^2) + 410$$

$$141.7 \times 36 + 410$$

$$5100 + 410$$

$$5500$$

Instructions

For the following questions answer them individually

Question 198

Three men or eight boys can do a piece of work in 17 days. How many days will two men and six boys together take to finish the same work ?

- A 9 days
- B 11 days
- C 14 days
- D 12 days
- E None of these

Answer: D

Explanation:

Given that, 3 men(M) or 8 boys(B) can do the work in 17 days i.e the capacity of 3 men and 8 boys is same.

Hence, $3M = 8B$, which gives, $M = \frac{8}{3}B$

We need to find, the time taken by $2M + 6B$. Replacing M with $\frac{8}{3}B$

we get $2 \times \frac{8}{3}B + 6B = \frac{34}{3}B$.

But as 8 boys can do the job in 17 days, $\frac{34}{3}$ boys can do the same job in $(17 \times \frac{34}{8})$

= 12 days.

Question 199

The cost price of an item is two-third of its selling price. What is the gain/loss percent on that item?

- A 45
- B 50
- C 35
- D 54
- E None of these

Answer: B

Explanation:

Given that,

Cost price (cp) = $\frac{2}{3}$ selling price(sp)

Clearly, selling price is more than cost price. Hence it is a GAIN .

Gain% = $[(sp - cp) / cp] * 100$

= $[(sp/cp) - 1] * 100$

= $(\frac{34}{3} - 1) * 100$

= 50

IBPS Clerk Free Online Coaching

Question 200

The ratio between the present ages of Dheeraj and Raman is 2 : 3 respectively. Four years ago, the ratio between their ages was 5 : 8 respectively. What will be Dheeraj's age after 7 years ?

- A 29 years
- B 35 years
- C 31 years

D 33 years

E 41 years

Answer: C

Explanation:
REASONING

Reasoning

Instructions

For the following questions answer them individually

Question 201

'Mustard' is related to 'Seed' in the same way as 'Carrot' is related to..... ?

A Fruit

B Stem

C Flower

D Root

E None of these

Answer: D

Explanation:

Mustard in an oilseed, hence related to seed, similarly carrot is modified root, thus it is related to root.

=> Ans - (D)

Daily Free Banking Online Test

Question 202

Flow many meaningful English words can be formed with the letters ESTR using each letter only once in each word ?

A None

B One

C Two

D Three

E None of these

Answer: B

Explanation:

Letters - E,S,T,R

Only 1 meaningful word can be formed = Rest

=> Ans - (B)

Question 203

Four of the following five are alike In a certain way and so form a group, Which is the one that does not belong to that group ?

- A Cup
- B Jug
- C Tumbler
- D Plate
- E Pitcher



Answer: D

Explanation:

Apart from plate, all of cup, jug, tumbler and pitcher are used to store liquids, hence plate is the odd one out.

=> Ans - (D)

Question 204

Four of the following five are alike in a certain way and so form a group. Which is the one that does not belong to that group ?

- A Copper
- B Mercury
- C iron
- D Aluminium
- E Zinc

Answer: B

Explanation:

Copper, Iron, Aluminium and Zinc are solids at room temperature whereas Mercury is in liquid state.

=> Ans - (B)

Download IBPS Clerk General Knowledge PDF

Question 205

'FI' is related to 'LO' in the same way as 'PS' is related to ?

- A VY
- B VZ
- C WZ
- D UX
- E None of these

Answer: A

Explanation:

'FI' is related to 'LO'

=> F (+3 letters) = I (+3 letters) = L (+3 letters) = O

Similarly, P (+3 letters) = S (+3 letters) = V (+3 letters) = Y

Thus, PS : VY

=> Ans - (A)

Question 206

Four of the following five are alike in a certain way and so form a group. Which is the one that does not belong to that group ?

- A 217
- B 103
- C 241
- D 157
- E 131

Answer: A

Explanation:

Apart from 217, all are prime numbers, hence 217 is the odd one.

=> Ans - (A)

Question 207

K is brother of T. M is mother of K. W is brother of M. How is W related to T ?

- A Maternal uncle
- B Paternal uncle
- C Grandfather
- D Data inadequate
- E None of these

Answer: A

Explanation:

K is brother of T and M is mother of K, => M is mother of T.

Also, W is brother of M.

Thus, W is the maternal uncle of T.

=> Ans - (A)

200+ Free GK Tests for Banking exams

Question 208

'Gram' is related to 'Mass' in the same way as 'Centimeter' is related to.....?

- A Area
- B Volume
- C Length
- D Sound
- E Energy

Answer: C

Explanation:

Mass is measured in grams. Similarly, length is measured in centimeter.

=> Ans - (C)

Question 209

Four of the following five are alike in a certain way and so form a group. Which is the one that does not belong to that group ?

- A 12
- B 28
- C 52
- D 68
- E 96

Answer: E

Explanation:

All the numbers but for 96 have 6 factors

12 = 1,2,3,4,6,12

28 = 1,2,4,7,14,28

52 = 1,2,4,13,26,52

68 = 1,2,4,17,34,68

96 = 1,2,3,4,6,8,12,16,24,32,48,96

=> Ans - (E)

Question 210

If 'white' means 'black'; 'black' means 'red'; 'red' means 'blue', 'blue' means 'yellow' and yellow means 'grey', then which of the following represents the colour of clear sky ?

- A blue
- B red
- C yellow
- D Cannot be determined
- E None of these

Answer: C

Explanation:

The colour of the clear sky is blue.

According to ques, 'blue' means 'yellow'

Thus, the colour of clear sky = yellow

=> Ans - (C)

100 Free IBPS Clerk Computer Awareness Tests

Question 211

How many such pairs of letters are there in the word STAPLER each of which has as many letters between them in the word as in the English alphabet ?

- A None
- B One
- C Two
- D Three
- E More than three

Answer: C

Explanation:

Word - 'STAPLER'

There are 2 pairs of letters which have as many letters between them in the word as in the English alphabet

= (S,T) , (S,P)

=> Ans - (C)

Question 212

In a certain code MODEL is written as '513#2' and DEAR is written as '3#%8'. How is LOAD written in that code ?

- A 21%3
- B 23%1
- C 25%3
- D 21#3
- E None of these

Answer: A

Explanation:

The codes for each letter is given :

L -> 2

O -> 1

A -> %

D -> 3

Thus, LOAD : **21%3**

=> Ans - (A)

Question 213

Town D is to the West of town M. Town R is to the South of town D. Town K is to the East of town R. Town K is towards which direction of town D ?

- A South
- B East
- C North-East
- D South-East
- E None of these

Answer: D

Explanation:

Town R is to the South of town D. Town K is to the East of town R,

=> Town K is towards south-east of town D.

=> Ans - (D)

200+ Banking Previous Papers (Download PDF)

Question 214

How many such digits are there in the number 5261983 each of which is as far away from the beginning of the number as when the digits are arranged in ascending order within the number ?

- A None
- B One
- C Two
- D Three
- E None of these

Answer: C

Explanation:

Number = '5261983'

When digits are arranged in ascending order, number = '1235689'

Thus, there are 2 digits which remained at their original positions = '2' and '8'

=> Ans - (C)

Question 215

What should come next in the following letter series ?

H G F E D C B A H G F E D C B H G F E D C H

- A F
- B G
- C B
- D A
- E None of these

Answer: B

Explanation:

The pattern followed is that the first 8 alphabets according to English alphabetical order are given in reverse order, with the first alphabet omitted in each of the following terms.

= H G F E D C B A , H G F E D C B , H G F E D C , H G

=> Ans - (B)

Instructions

In each of the questions below are given three statements followed by two conclusions numbered 1 and II, You have to take the given statements to be true even if they seem to be a at variance from commonly known facts. Read all the conclusions and then decide which of the given conclusions logically follows from the given statements disregarding commonly known facts.

- a: if only Conclusion I follows.
- b: if only Conclusion II follows.

- c: if either Conclusion I or II follows.
- d: if neither Conclusion I or II follows.
- e: if both Conclusions I and II follow.

Question 216

Statements :

All benches are cots.

No cot is lamp.

Some lamps are candles.

Conclusions :

I. Some cots are benches.

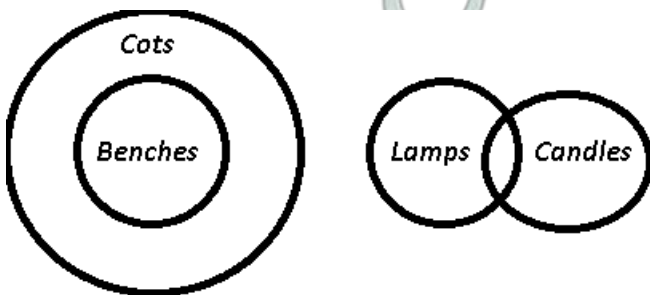
II: Some candles are cots.

- A if only Conclusion I follows.
- B if only Conclusion II follows.
- C if either Conclusion I or II follows.
- D if neither Conclusion I or II follows.
- E if both Conclusions I and II follow.

Answer: A

Explanation:

The venn diagram for above statements is :



Conclusions :

- I. Some cots are benches = true
- II: Some candles are cots = false

Thus, only Conclusion I follows.

=> Ans - (A)

Latest Job Updates on Telegram - Join here

Question 217

Statements :

Some cats are dogs.

All dogs are goats.

All goats are walls.

Conclusions :

I. Some walls are dogs.

II. Some walls are cats.

- A if only Conclusion I follows.
- B if only Conclusion II follows.
- C if either Conclusion I or II follows.

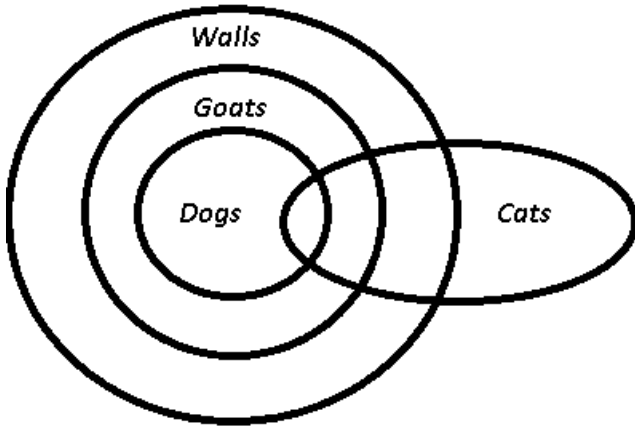
D if neither Conclusion I or II follows.

E if both Conclusions I and II follow.

Answer: E

Explanation:

The venn diagram for above statements is:



Conclusions :

I. Some walls are dogs = true

II. Some walls are cats = true

Thus, both Conclusions I and II follow.

=> Ans - (E)

Question 218

Statements :

Some buildings are sofas.

Some sofas are benches.

Some benches are tables.

Conclusions :

I. Some tables are sofas.

II. No table is sofa.

A if only Conclusion I follows.

B if only Conclusion II follows.

C if either Conclusion I or II follows.

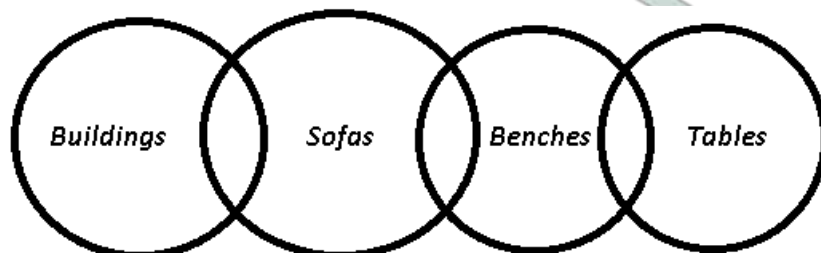
D if neither Conclusion I or II follows.

E if both Conclusions I and II follow.

Answer: C

Explanation:

The venn diagram for above statements is :



Conclusions :

I. Some tables are sofas = may or may not be true

II. No table is sofa = may or may not be true

Thus, either Conclusion I or II follows.

=> Ans - (C)

Question 219

Statements :

All rats are bats.

Some bats are desks.

All desks are chairs.

Conclusions :

I: Some desks are rats.

II. Some chairs are rats.

A if only Conclusion I follows.

B if only Conclusion II follows.

C if either Conclusion I or II follows.

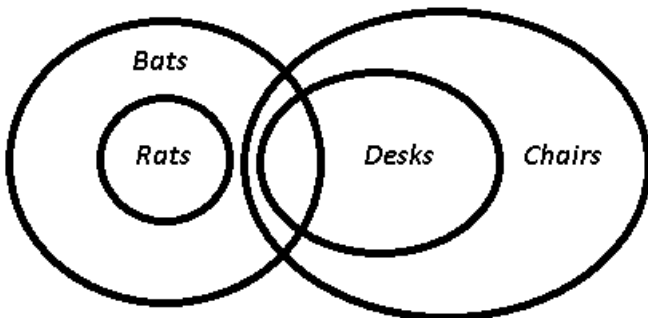
D if neither Conclusion I or II follows.

E if both Conclusions I and II follow.

Answer: D

Explanation:

The venn diagram for above statements is :



Conclusions :

I: Some desks are rats = false

II. Some chairs are rats = false

Thus, neither Conclusion I or II follows.

=> Ans - (D)

Take 4 Free IBPS Clerk Mock Tests (With Solutions)

Question 220

Statements :

Some roads are ponds.

All ponds are stores.

Some stores are bags.

Conclusions :

I. Some bags are ponds.

II. Some stores are roads.

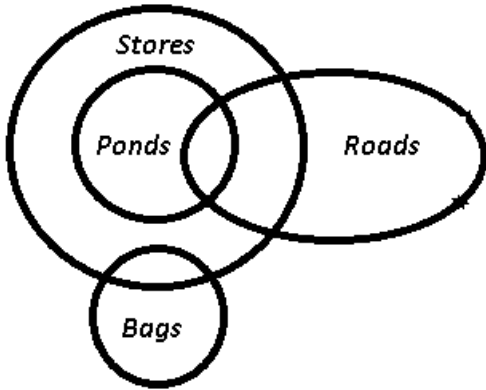
A if only Conclusion I follows.

- B if only Conclusion II follows.
- C if either Conclusion I or II follows.
- D if neither Conclusion I or II follows.
- E if both Conclusions I and II follow.

Answer: B

Explanation:

The venn diagram for above statements is :



Conclusions :

- I. Some bags are ponds = false
- II. Some stores are roads = true

Thus, only Conclusion II follows.

=> Ans - (B)

Instructions

Study the following information carefully and answer the questions given below :

P, Q, R, S, T and M are six students of a school, one each studies in Class 1-VI. Each of them has a favourite colour from red, black, blue, yellow, pink and green, not necessarily in the same order. Q likes black and does not study in Class IV or V. The one who studies in class IV does not like green. P studies in class II, M likes blue and does study in class IV. The one who likes yellow studies in class VI. S likes pink and studies in class I. R does not study at class VI.

Question 221

In which class does R study ?

- A V
- B III
- C IV
- D Data inadequate
- E None of these

Answer: C

Explanation:

S likes pink and studies in class I. P studies in class II and M likes blue. Q likes black.

The one who likes yellow studies in class VI and R does not study at class VI, => T studies in class VI and likes yellow.

Q does not study in Class IV or V and M also does not study in class IV, => R studies in class IV and M studies in class V, which leaves Q, who is studying in class III.

The one who studies in class IV does not like green, => P likes green and R likes red.

Students	Class	Color
P	II	Green
Q	III	Black
R	IV	Red
S	I	Pink
T	VI	Yellow
M	V	Blue

R studies in class IV.

=> Ans - (C)

Question 222

Which colour does R like ?

- A Black
- B Yellow
- C Green
- D Blue
- E None of these

Answer: E

Explanation:

S likes pink and studies in class I. P studies in class II and M likes blue. Q likes black.

The one who likes yellow studies in class VI and R does not study at class VI, => T studies in class VI and likes yellow.

Q does not study in Class IV or V and M also does not study in class IV, => R studies in class IV and M studies in class V, which leaves Q, who is studying in class III.

The one who studies in class IV does not like green, => P likes green and R likes red.

Students	Class	Color
P	II	Green
Q	III	Black
R	IV	Red
S	I	Pink
T	VI	Yellow
M	V	Blue

R likes red color.

=> Ans - (E)

IBPS Clerk Previous Papers (Download PDF)

Question 223

Which colour does P like ?

- A Green

- B Yellow
- C Red
- D Data inadequate
- E None of these

Answer: A

Explanation:

S likes pink and studies in class I. P studies in class II and M likes blue. Q likes black.

The one who likes yellow studies in class VI and R does not study at class VI, => T studies in class VI and likes yellow.

Q does not study in Class IV or V and M also does not study in class IV, => R studies in class IV and M studies in class V, which leaves Q, who is studying in class III.

The one who studies in class IV does not like green, => P likes green and R likes red.

Students	Class	Color
P	II	Green
Q	III	Black
R	IV	Red
S	I	Pink
T	VI	Yellow
M	V	Blue

P likes green color.

=> Ans - (A)

Question 224

Which of the following combinations is correct ?

- A P - II - Yellow
- B Q - III - Green
- C S - I - Black
- D T - V - Yellow
- E None of these

Answer: E

Explanation:

S likes pink and studies in class I. P studies in class II and M likes blue. Q likes black.

The one who likes yellow studies in class VI and R does not study at class VI, => T studies in class VI and likes yellow.

Q does not study in Class IV or V and M also does not study in class IV, => R studies in class IV and M studies in class V, which leaves Q, who is studying in class III.

The one who studies in class IV does not like green, => P likes green and R likes red.

Students	Class	Color
P	II	Green
Q	III	Black
R	IV	Red
S	I	Pink
T	VI	Yellow
M	V	Blue

Clearly, none of the above combinations is correct.

=> Ans - (E)

Question 225

In which class does M study ?

- A IV
- B III
- C II
- D V
- E None of these

Answer: D

Explanation:

S likes pink and studies in class I. P studies in class II and M likes blue. Q likes black.

The one who likes yellow studies in class VI and R does not study at class VI, => T studies in class VI and likes yellow.

Q does not study in Class IV or V and M also does not study in class IV, => R studies in class IV and M studies in class V, which leaves Q, who is studying in class III.

The one who studies in class IV does not like green, => P likes green and R likes red.

Students	Class	Color
P	II	Green
Q	III	Black
R	IV	Red
S	I	Pink
T	VI	Yellow
M	V	Blue

M studies in Class V.

=> Ans - (D)

IBPS Clerk Important Questions PDF

Instructions

In the following questions, the symbols @, ©, \$, % and * are used with the following meaning as illustrated below

'P © Q' means 'P is not greater than Q..

'P % Q' means 'P is not smaller than Q'.

'P * Q' means 'P is neither smaller than nor equal to Q'.

'P @ Q' means P is neither greater than nor equal to Q'.

'P \$ Q' means 'P is neither greater than nor smaller than Q'.

Now in each of the following questions assuming the given statements to be true, find which of the two conclusions I and II given below them is/ are definitely true ?

- a: if only Conclusion 1 is true.
- b: if only Conclusion II is true.
- c: if either Conclusion I or II is true.
- d: if neither Conclusion I nor II is true.
- e: if both Conclusions I and II are true.

Question 226

Statements : K @ V. V © N, N % F

Conclusions:

I. F @ V

II. K @ N

- A if only Conclusion 1 is true.
- B if only Conclusion II is true.
- C if either Conclusion I or II is true.
- D if neither Conclusion I nor II is true.
- E if both Conclusions I and II are true.

Answer: B

Explanation:

the statements and their meanings are as follows:

K @ V: $K < V$

V © N: $\{V\} \leq \{N\}$

N % F: $\{F\} \leq \{N\}$

this can be reduced to two equations of the form

$K < \{V\} \leq \{N\}$ AND $\{F\} \leq \{N\}$

conclusion I. F @ V: means $F < V$ which cannot be inferred as there is no direct relation given

conclusion II. K @ N: means $K < N$ which can be seen from the above equation .

hence the correct option is option B.

Question 227

Statements : H © W, W \$ M, M @ B

Conclusions:

I. B * H

II. M % H

- A if only Conclusion 1 is true.
- B if only Conclusion II is true.
- C if either Conclusion I or II is true.
- D if neither Conclusion I nor II is true.
- E if both Conclusions I and II are true.

Answer: E

Explanation:

the statements with their explanations are as follows:

H © W: $\leq \{H\}\{W\}$

W \$ M: $W = M$

M @ B: M < B

therefore the complete equation be: $\{H\} \leq \{W\} = M < B$.

conclusion I: $B * H: B > H$, which is true as can be seen in the given equation

conclusion II: $M \% H: M > H$ which is also true as can be seen in the equation.

since both the conclusions can be true simultaneously therefore the answer is option E.

Question 228

Statements : $D \% B, B * T, T \$ M$

Conclusions :

I. $T @ D$

II. $M @ D$

A if only Conclusion 1 is true.

B if only Conclusion II is true.

C if either Conclusion I or II is true.

D if neither Conclusion I nor II is true.

E if both Conclusions I and II are true.

Answer: D

Explanation:

the statements in the question translate to:

$D \% B: D \geq B$

$B * T: B > T$

$T \$ M: T = M$

hence the overall equation becomes: $\{D\} \geq \{B\} > T = M$

conclusion 1: $T @ D$ states: $\{T\} \leq \{D\}$ can be true as can be seen in the above equation

conclusion 2: $M @ D$ states: $\{M\} \leq \{D\}$ can be true as can be seen in the above equation.

hence either one of them is true, therefore option C.

IBPS Clerk Free Preparation App

Question 229

Statements : $M * T, T @ K, K @ N$

Conclusions :

I. $N * T$

II. $N * M$

A if only Conclusion 1 is true.

B if only Conclusion II is true.

C if either Conclusion I or II is true.

D if neither Conclusion I nor II is true.

E if both Conclusions I and II are true.

Answer: A

Explanation:

the statements and their meanings are as follows:

M * T: M>T

T @ K:K>T

K @ N:N>K

hence the overall equation will be: M>T AND N>K>T.

conclusion 1 will imply: N>T, which is true by the above single equation.

conclusion 2 will imply: N>M, which cannot be held true as there is no direct relation between the two.

therefore the correct option is A, where only conclusion 1 is true.

Question 230

Statements : R \$ J. J % D, D * F

Conclusions

I. D \$ R

II. D @ R

A if only Conclusion I is true.

B if only Conclusion II is true.

C if either Conclusion I or II is true.

D if neither Conclusion I nor II is true.

E if both Conclusions I and II are true.

Answer: C

Explanation:

three statements in the question will translate to

R=J

{J} ≥ {D}

D=F

based on these relations, one single equation can be as: {J} ≥ {D}=F.

conclusion 1: D=R, which is possible since R can be both greater than or equal to D

conclusion 2 D<R, which is possible since R can be both greater than or equal to D.

But since both cannot happen simultaneously, hence the answer is option C.

Instructions

In each question below is given a group of letters followed by four combinations of digits/symbols numbered a., b., c. and d.. You have to find out which of the combinations correctly represents the group of letters based on the following coding system and the conditions and mark the number of that combination as your answer. If none of the four combinations correctly represents the group of letters, give e. i.e. 'None of these' as the answer. Conditions :

(i) If the first letter is a consonant and the last letter is a vowel, their codes are to be interchanged.

(ii) If both the first and the last letters are vowels, both are to be coded as *.

(iii) If the first letter is a vowel and the last letter is a consonant, both are to be coded as the code for the consonant.

Question 231

TUKDIP

A 1©4627

B 1©4621

C 7©4621

D 1©6427

E None of these

Answer: A



Free Banking Study Material (15000 Solved Questions)

Question 232

EFDMKA

- A S%6548
- B \$%654\$
- C *%654*
- D 8%6548
- E None of these

Answer: C

Question 233

APWI'UH

- A *7@1@*
- B 87@1@3
- C 37@1@8
- D 8@01@8
- E None of these

Answer: E

Question 234

MARTWE

- A 58#1@\$
- B 58#1@5
- C \$8# 1@5
- D \$8#1@5
- E None of these

Answer: C

IBPS Clerk Free Online Coaching

Question 235

HEMKZI

- A 2\$5493
- B 3#5492

- C 3\$5493
- D 2\$5492
- E None of these

Answer: A

Instructions

Study the following information carefully and answer the given questions :

A word and number arrangement machine when given an input line of words and numbers rearranges them following a particular rule in each step. The following is an illustration of input and rearrangement.

Input : base 35 or gone 62 49 87 ahead

Step I : 87 base 35 or gone 62 49 ahead

Step II : 87 ahead base 35 or gone 62 49

Step III : 87 ahead 62 base 35 or gone 49

Step IV : 87 ahead 62 base 49 35 or gone

Step V : 87 head 62 base 49 gone 35 or

and Step V is the last step of the rearrangement.

As per the rules followed in the above steps, find out in each of the following questions the appropriate step for the given input.

Question 236

Input : how was your stay 56 25 36 64. Which of the following will be step VI ?

- A 64 how 56 was your stay 25 36
- B 64 how 56 stay 36 was 25 your
- C 64 how 56 stay 36 was your 25
- D There will be no such step
- E None of these

Answer: D

Explanation:

The pattern followed is that in the first step, the highest number in the arrangement is placed at first position. In the second step, the word with the smallest first letter in the alphabetical order is placed at second position.

The above pattern is followed until all the numbers are arranged in descending order and all the words are arranged in ascending order according to their first alphabet alternatively.

Input : how was your stay 56 25 36 64

Step I : 64 how was your stay 56 25 36

Step II : 64 how 56 was your stay 25 36

Step III : 64 how 56 stay was your 25 36

Step IV : 64 how 56 stay 36 was your 25

Step V : 64 how 56 stay 36 was 25 your

Step V is the final step. Thus, there will be no step VI.

=> Ans - (D)

Question 237

Input : power fail now 52 24 75 gate 34. Which of the following steps will be the last but one?

- A IV

- B V
- C VI
- D VII
- E None of these

Answer: C

Explanation:

The pattern followed is that in the first step, the highest number in the arrangement is placed at first position. In the second step, the word with the smallest first letter in the alphabetical order is placed at second position.

The above pattern is followed until all the numbers are arranged in descending order and all the words are arranged in ascending order according to their first alphabet alternatively.

Input : power fail now 52 24 75 gate 34

Step I : 75 power fail now 52 24 gate 34

Step II : 75 fail power now 52 24 gate 34

Step III : 75 fail 52 power now 24 gate 34

Step IV : 75 fail 52 gate power now 24 34

Step V : 75 fail 52 gate 34 power now 24

Step VI : 75 fail 52 gate 34 now power 24

Step VII : 75 fail 52 gate 34 now 24 power

Step VII is the final step. Thus 6th step is the last but one step.

=> Ans - (C)

Question 238

Step III of an input is : 91 car 85 14 27 few new house. Which of the following is definitely the input ?

- A 85 14 91 car few new house
- B car 91 85 14 27 few new house
- C car 85 14 27 few new house 91
- D Cannot be determined
- E None of these

Answer: D

Explanation:

The pattern followed is that in the first step, the highest number in the arrangement is placed at first position. In the second step, the word with the smallest first letter in the alphabetical order is placed at second position.

The above pattern is followed until all the numbers are arranged in descending order and all the words are arranged in ascending order according to their first alphabet alternatively.

Step III : 91 car 85 14 27 few new house

We cannot determine the input as position of '91' or 'car' or '85' could be anywhere in the input.

=> Ans - (D)

Question 239

Step II of an input is : 75 down 16 24 farm eager 62 sky. How many more steps will be required to complete the rearrangement ?

- A Four
- B Five
- C Six
- D Seven
- E None of these

Answer: A

Explanation:

The pattern followed is that in the first step, the highest number in the arrangement is placed at first position. In the second step, the word with the smallest first letter in the alphabetical order is placed at second position.

The above pattern is followed until all the numbers are arranged in descending order and all the words are arranged in ascending order according to their first alphabet alternatively.

Step II : 75 down 16 24 farm eager 62 sky

Step III : 75 down 62 16 24 farm eager sky

Step IV : 75 down 62 eager 16 24 farm sky

Step V : 75 down 62 eager 24 16 farm sky

Step VI : 75 down 62 eager 24 farm 16 sky

Step VI is the final step. Thus, 4 more steps are required to complete the rearrangement.

=> Ans - (A)

Question 240

Input : 14 35 when they came 61 48 home. How many steps will be required to complete the rearrangement?"

- A Four
- B Five
- C Six
- D Seven
- E None of these

Answer: C

Explanation:

The pattern followed is that in the first step, the highest number in the arrangement is placed at first position. In the second step, the word with the smallest first letter in the alphabetical order is placed at second position.

The above pattern is followed until all the numbers are arranged in descending order and all the words are arranged in ascending order according to their first alphabet alternatively.

Input : 14 35 when they came 61 48 home

Step I : 61 14 35 when they came 48 home

Step II : 61 came 14 35 when they 48 home

Step III : 61 came 48 14 35 when they home

Step IV : 61 came 48 home 14 35 when they

Step V : 61 came 48 home 35 14 when they

Step VI : 61 came 48 home 35 they 14 when

Step VI is the final step.

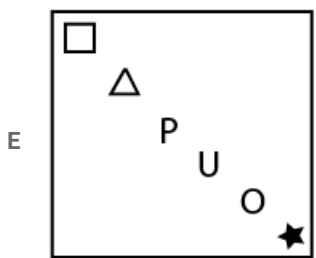
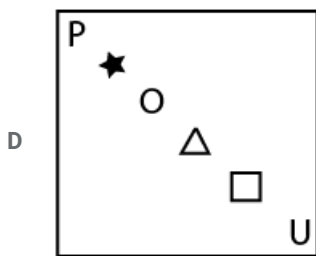
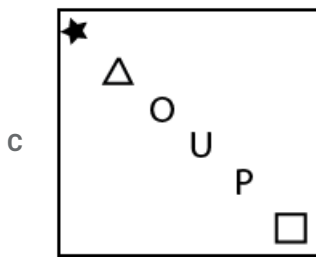
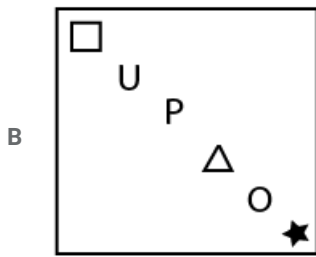
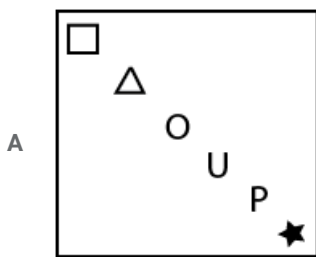
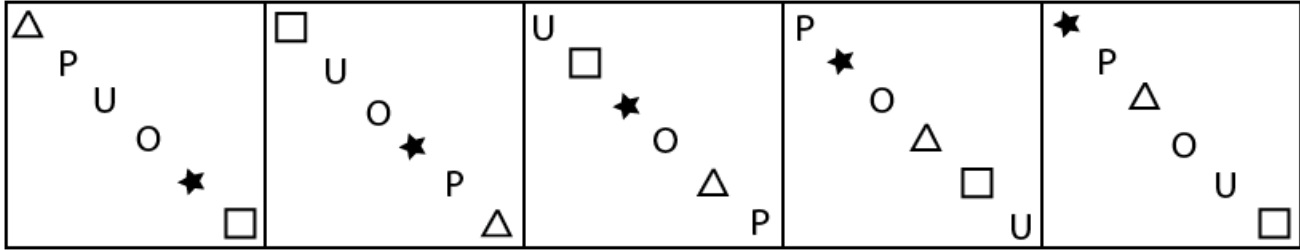
=> Ans - (C)

Daily Free Banking Online Test

Instructions

In each of the questions given below which one of the five answer figures on the right should come after the problem figures on the left, if the sequence were continued?

Question 241



Answer: B

Question 242

Z		T	□		Z	Z	△	V		Z	Z		O	
O	U	★	★	O	U	U	□	★	★	U	□	□	V	★
S		△	△	=	=			O	O		R	R		U

A

O		P
★	□	V
B		R

B

P		Z
★	□	V
U		R

C

P		Z
★	□	V
U		B

D

P		Z
V	★	□
U		B

E

P		Z
★	□	V
B		R

Answer: C

Question 243

△	U	Z	□	★	U	U	P	□	C	Z	P	○	◇	Z
O	□	★	△	O	Z	◇	=	O	O	○	◇	C	O	P
=	⊗	C	C	◇	=	△	C	Z	U	△	□	□	B	J

A

Z	T	○
B	U	O
C	□	P

B

◇	C	T
○	U	O
B	□	P

C

B	U	◇
P	T	C
○	□	Z

D

Z	◇	○
B	U	O
C	□	P

E

B	U	◇
P	O	C
○	□	Z

Answer: C

[Download IBPS Clerk General Knowledge PDF](#)

Question 244

P	△	★	U	△	★	U	U	O	△	□	P	U	★	△	O
△	□	O	U	U	□	★	△	★	□	U	U	★	△	□	U

A

△	★	□
O	U	
	P	

B

□	U	O
P	★	
	△	

C

P	△	U
□	★	
	O	

D

★	△	P
O	□	
	U	

E

□	U	P
O	★	
	△	

Answer: E

Question 245

PRECI	EIPRC	IPRCA	RAIPC	AIPCS
-------	-------	-------	-------	-------

A PCIAS

B PCASI

C IPCSA

D PSAIC

E PSACI

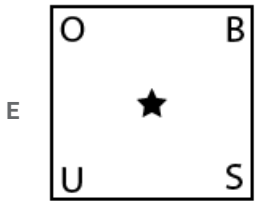
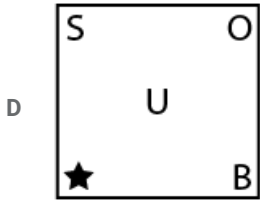
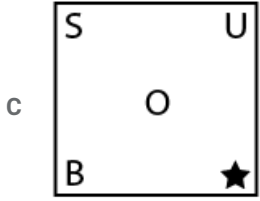
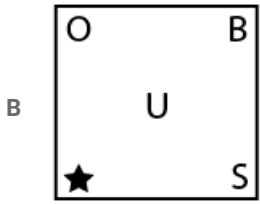
Answer: D

Question 246

B	★	S	B	O	S	S	U	B	S
S		U	★		B		★		
O	U	★	O	U	B	O	★	U	O

A

★	B
	O
S	U



Answer: B

200+ Free GK Tests for Banking exams

Question 247

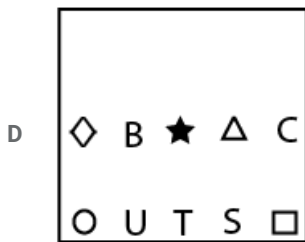
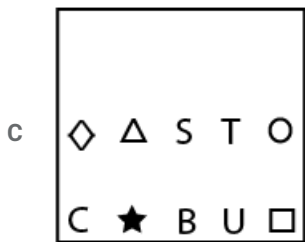
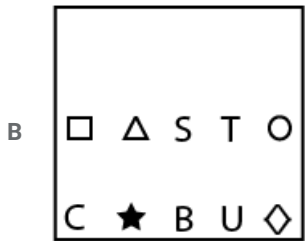
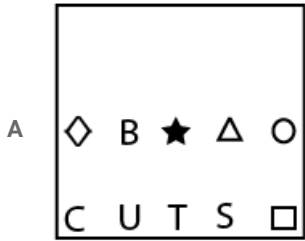
Figures

- A Fig 1
- B Fig 2
- C Fig 3
- D Fig 4
- E Fig 5

Answer: E

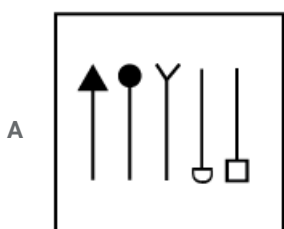
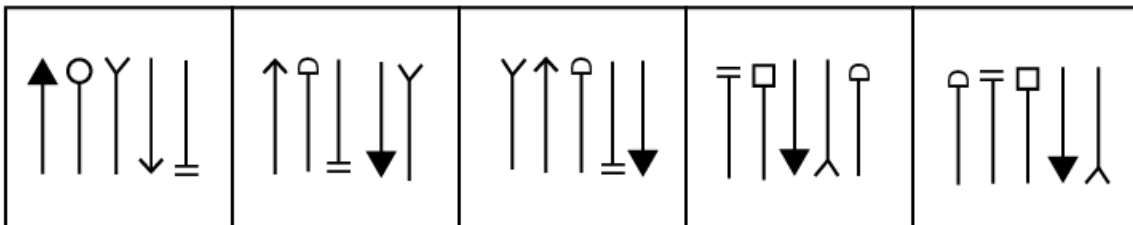
Question 248

U ★ □ C B	S □ C T △	C T S □ U	△ S □ ★ ◇	□ △ ★ S C
△ ◇ O T S	B ★ ◇ O U	◇ O B ★ △	U T O B C	O B U T ◇



Answer: C

Question 249



B

C

D

E

Answer: D

100 Free IBPS Clerk Computer Awareness Tests

Question 250

U	S	V	◇	O	S	=	□	△	★	V	O	◇	O	S
O	□	T	U	S	V	V	O	U	=	□	△	△	V	=
B	△	=	△	B	=	B	S	◇	S	B	◇	B	□	★

A

B

C

★	S	B
=	O	△
□	V	◇

D

▷	△	V
◇	O	S
★	□	B

E

★	S	B
△	O	=
□	V	◇

Answer: B

[200+ Banking Previous Papers \(Download PDF\)](#)

[Take 4 Free IBPS Clerk Mock Tests \(With Solutions\)](#)

[IBPS Clerk Previous Papers \(Download PDF\)](#)

[IBPS Clerk Important Questions PDF](#)

[IBPS Clerk Free Preparation App](#)

[Free Banking Study Material \(15000 Solved Questions\)](#)

[IBPS Clerk Free Online Coaching](#)

[Daily Free Banking Online Test](#)

[Download IBPS Clerk General Knowledge PDF](#)

[200+ Free GK Tests for Banking exams](#)

[100 Free IBPS Clerk Computer Awareness Tests](#)



200+ Banking Previous Papers (Download PDF)

Latest Job Updates on Telegram - Join here