



## SSC CHSL 25 Jan 2017 Evening Shift

All rights reserved. No part of this publication may be reproduced, distributed, or transmitted in any form or by any means, electronic, mechanical, photocopying, recording or otherwise, or stored in any retrieval system of any nature without the permission of cracku.in, application for which shall be made to support@cracku.in

# Reasoning

## Instructions

For the following questions answer them individually

### Question 1

Select the related word/letters/number from the given alternatives.

Gambler : Casino :: Clerk : ?

- A Site
- B Restaurant
- C Office
- D Stage

**Answer:** C

### Explanation:

Expression = Gambler : Casino :: Clerk : ?

A gambler plays in a casino, similarly a clerk works in an office.

=> Ans - (C)

## SSC CHSL Free Mock Test

### Question 2

Select the related word/letters/number from the given alternatives.

K x L : 11 x 12 :: F x R : ?

- A 13 x 4
- B 10 x 15
- C 18 x 6
- D 6 x 18

**Answer:** D

### Explanation:

Expression = K x L : 11 x 12 :: F x R : ?

The pattern followed is that the numerical values of the alphabets are multiplied.

Eg :- K = 11 , L = 12  $\equiv$  11  $\times$  12

Similarly,  $F = 6$ ,  $R = 18 \equiv 6 \times 18$

=> Ans - (D)

### Question 3

Select the related word/letters/number from the given alternatives.

CD: GH :: ?

A PQ: TU

B RS: UV

C MN: OR

D ST: XY

**Answer: A**

### Explanation:

Expression = CD: GH :: ?

The pattern followed is :

C (+1 letter) = D (+3 letters) = G (+1 letter) = H

Similar pattern is only observed in = P (+1 letter) = Q (+3 letters) = T (+1 letter) = U

Thus, **PQ: TU**

=> Ans - (A)

### Question 4

Select the related word/letters/number from the given alternatives.

170 : 13 :: 257 : ?

A 20

B 16

C 22

D 13

**Answer: B**

### Explanation:

Expression = 170 : 13 :: 257 : ?

The pattern followed is =  $x^2 + 1 : x$

Eg :-  $13^2 + 1 : 13 = 170 : 13$

Similarly,  $(16)^2 + 1 = 256 + 1 = 257$

Thus, 257 : 16

=> Ans - (B)

## SSC CHSL Previous Papers (DOWNLOAD PDF)

### Question 5

Select the odd word/letters/number/number pair from the given alternatives.

- A Professor - College
- B Teacher - School
- C Beautician - Parlour
- D Engineer - Home

**Answer:** D

### Explanation:

A professor works in college, teacher at school and a beautician in a parlour, hence engineer-home is the odd one out.

=> Ans - (D)

### Question 6

Select the odd word/letters/number/number pair from the given alternatives.

- A BJRZ
- B MUCK
- C GOWE
- D SAIR

**Answer:** D

### Explanation:

(A) : B (+8 letters) = J (+8 letters) = R (+8 letters) = Z

(B) : M (+8 letters) = U (+8 letters) = C (+8 letters) = K

(C) : G (+8 letters) = O (+8 letters) = W (+8 letters) = E

(D) : S (+8 letters) = A (+8 letters) = I (+9 letters) = R

=> Ans - (D)

**Question 7**

Select the odd word/letters/number/number pair from the given alternatives.

- A 168
- B 198
- C 196
- D 191

**Answer:** D

**Explanation:**

Among the given numbers only 191 is prime and odd, hence it is the odd one out.

=> Ans - (D)

## SSC CGL MTS Previous Papers (DOWNLOAD PDF)

**Question 8**

Select the odd word/letters/number/number pair from the given alternatives.

- A 51
- B 76
- C 96
- D 92

**Answer:** A

**Explanation:**

Among the given numbers, only 51 is odd, hence it is the odd one out.

=> Ans - (A)

**Question 9**

A series is given with one term missing. Choose the correct alternative from the given ones that will complete the series.

CLNW, EJPU, GHRS, IFTQ, ?

- A KOVD
- B KODV

C KVDO

D KDVO

**Answer: D**

**Explanation:**

Expression : CLNW, EJPU, GHRS, IFTQ, ?

The pattern followed in each letter of the terms is :

1st letter : C (+2 letters) = E (+2 letters) = G (+2 letters) = I (+2 letters) = K

2nd letter : L (-2 letters) = J (-2 letters) = H (-2 letters) = F (-2 letters) = D

3rd letter : N (+2 letters) = P (+2 letters) = R (+2 letters) = T (+2 letters) = V

4th letter : W (-2 letters) = U (-2 letters) = S (-2 letters) = Q (-2 letters) = O

Thus, missing term = **KDVO**

=> Ans - (D)

**Question 10**

**A series is given with one term missing. Choose the correct alternative from the given ones that will complete the series.**

**DG, JM, PS, VY, ?**

A BD

B BE

C CE

D CD

**Answer: B**

**Explanation:**

Expression : DG, JM, PS, VY, ?

The pattern followed in each letter of the terms is :

1st letter : D (+6 letters) = J (+6 letters) = P (+6 letters) = V (+6 letters) = B

2nd letter : G (+6 letters) = M (+6 letters) = S (+6 letters) = Y (+6 letters) = E

Thus, missing term = **BE**

=> Ans - (B)

**SSC CGL GD Constable Previous Papers (DOWNLOAD PDF)**

### Question 11

A series is given with one term missing. Choose the correct alternative from the given ones that will complete the series.

13, 24, 46, 79, ?

A 123

B 120

C 133

D 151

**Answer: A**

#### **Explanation:**

Multiples of 11 are added.

$$13 + 11 = 24$$

$$24 + 22 = 46$$

$$46 + 33 = 79$$

$$79 + 44 = 123$$

=> Ans - (A)

### Question 12

In the following question, two statements are given each followed by two conclusions I and II. You have to consider the statements to be true even if they seem to be at variance from commonly known facts. You have to decide which of the given conclusions, if any, follows from the given statements.

**Statement:**

(I) Flowers give everything to the world before shedding off from the plant.

(II) Human beings should inherit these good qualities from flowers.

**Conclusions:**

(I) Imparting education and good learnings to the world is a noble deed.

(II) Flowers teach us to live a meaningful and significant life.

A Only conclusion II follows

B Conclusion I and II both follow

C Neither I nor II follow

D Only conclusion I follows

**Answer: B**

### Question 13

A series is given with one term missing. Choose the correct alternative from the given ones that will complete the series.

Spring, Summer, Monsoon, ?

- A PreWinter
- B Rainy
- C Autumn
- D Winter

**Answer:** D

#### **Explanation:**

Order of weathers is given.

= Spring -> Summer -> Monsoon -> Winter

=> Ans - (D)

## SSC Stenographer Previous Papers (DOWNLOAD PDF)

### Question 14

Usha, Tulsi, Divya, Pooja, Rohit, Aakash and Aditi are facing north. Rohit is at the immediate left of Aakash, while Divya is the neighbour of Tulsi and Pooja. The one who is third to the left of Pooja is on one of the ends. Aditi is fourth to the left of Rohit. Who are the neighbours of Tulsi?

- A Aditi and Divya
- B Aakash and Pooja
- C Divya and Pooja
- D Aakash only

**Answer:** A

#### **Explanation:**

The one who is third to the left of Pooja is on one of the ends.

=> Pooja is sitting in the middle.

Rohit is at the immediate left of Aakash. Aditi is fourth to the left of Rohit.

=> Aditi \_ \_ \_ Rohit Aakash

Also, Divya is the neighbour of Tulsi and Pooja.



=> Divya sits to the immediate left of Pooja.

Thus, arrangement :

|       |       |       |       |       |        |      |
|-------|-------|-------|-------|-------|--------|------|
| Aditi | Tulsi | Divya | Pooja | Rohit | Aakash | Usha |
|-------|-------|-------|-------|-------|--------|------|

∴ **Aditi and Divya** are the neighbours of Tulsi.

=> Ans - (A)

### Question 15

Arrange the given words in the sequence in which they occur in the dictionary.

- i. Carrier
- ii. Capability
- iii. Cause
- iv. Course

- A ii, i, iii, iv  
B i, ii, iii, iv  
C ii, iii, i, iv  
D ii, iv, i, iii

Answer: A

### Explanation:

As per the order of dictionary :

= Capability -> Carrier -> Cause -> Course

≡ ii, i, iii, iv

=> Ans - (A)

### Question 16

In a certain code language "POUCH" is written as "53461", and "PRAYERS" is written as "578902 ↑". How will "CHEES" be written in that code language?

- A 6102 ↑  
B 6100 ↑  
C 610 ↑ 0  
D 6001 ↑

Answer: B

### Explanation:

The codes for each letter is given :

C -> 6

H -> 1

E -> 0

E -> 0

S -> ↑

Thus, CHESS : 6100↑

=> Ans - (B)

## SSC CGL Previous Papers (DOWNLOAD PDF)

### Question 17

Find the missing number in Given Series ?

|     |    |   |
|-----|----|---|
| 9   | 4  | 1 |
| 36  | 25 | 1 |
| 144 | 81 | ? |

A 3

B 2

C 63

D 68

Answer: A

#### Explanation:

In each row, for the numbers  $a$ ,  $b$  and  $c$ , pattern is :  $c = \sqrt{a} - \sqrt{b}$

$$\text{Eg :- } \sqrt{9} - \sqrt{4} = 3 - 2 = 1$$

$$\sqrt{36} - \sqrt{25} = 6 - 5 = 1$$

$$\text{Similarly, } \sqrt{144} - \sqrt{81} = 12 - 9 = 3$$

=> Ans - (A)

### Question 18

If K denotes  $\times$ , T denotes  $\div$ , V denotes  $+$  and R denotes  $-$ , then

$$16 \text{ V } 24 \text{ T } 8 \text{ R } 6 \text{ T } 2 \text{ K } 3 = ?$$

A 10

B 9

C 12

D 11

Answer: A

**Explanation:**

Expression :  $16 \vee 24 \text{ T } 8 \text{ R } 6 \text{ T } 2 \text{ K } 3 = ?$

$$\equiv 16 + 24 \div 8 - 6 \div 2 \times 3$$

$$= 16 + \left(\frac{24}{8}\right) - (3 \times 3)$$

$$= 16 + 3 - 9 = 10$$

=> Ans - (A)

**Question 19**

In the following question, which one set of letters when sequentially placed at the gaps in the given letter series shall complete it?

x\_za\_yza\_xy\_aa\_

A yxaza

B yxaxa

C xyazz

D yxazz

Answer: A

**Explanation:**

The pattern followed is that the term 'xyz' is repeated and a's in increasing order are appended at the end.

= xyza xyzaa xyzaaa

=> Ans - (A)

## SSC CGL Free Mock Test (Latest Pattern)

**Question 20**

If northwest becomes south, northeast becomes west and so on, then east will become which direction?

A North-west

B South-east

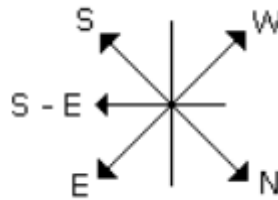
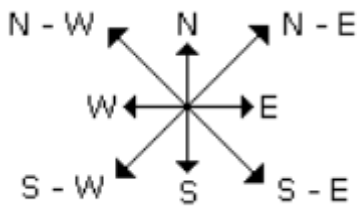
C South

D North

Answer: A

**Explanation:**

If north-west becomes south, north-east becomes west and so on, then :



It is clear from the diagrams that new name of East will become North-west.

=> Ans - (A)

**Question 21**

A word is represented by only one set of numbers as given in any one of the alternatives. The sets of numbers given in the alternatives are represented by two classes of alphabets as shown in the given two matrices. The columns and rows of Matrix-I are numbered from 0 to 4 and that of Matrix-II are numbered from 5 to 9. A letter from these matrices can be represented first by its row and next by its column, for example, 'D' can be represented by 20, 44 etc., and can be represented by 57,76 etc. Similarly, you have to identify the set for the word 'MOUSE'.

**MATRIX 1:**

|   |   |   |   |   |   |
|---|---|---|---|---|---|
|   | 0 | 1 | 2 | 3 | 4 |
| 0 | D | E | R | U | M |
| 1 | M | R | E | D | U |
| 2 | D | M | U | R | E |
| 3 | U | D | M | E | R |
| 4 | E | U | R | M | D |

**MATRIX 2:**

|   |   |   |   |   |   |
|---|---|---|---|---|---|
|   | 5 | 6 | 7 | 8 | 9 |
| 5 | S | N | T | N | O |
| 6 | T | S | A | O | N |
| 7 | O | T | N | S | A |
| 8 | A | O | S | N | T |
| 9 | N | A | O | T | S |

A 21, 59, 03, 99, 40

B 32, 68, 13, 66, 01

C 04, 75, 41, 86, 12

D 43, 86, 30, 55, 32

**Answer:** A

**Explanation:**

(A) : 21, 59, 03, 99, 40 = **MOUSE**

(B) : 32, 68, 13, 66, 01 = MODSE

(C) : 04, 75, 41, 86, 12 = MOUOE

(D) : 43, 86, 30, 55, 32 = MOUSM

=> Ans - (A)

**Question 22**

Pointing towards a lady in a photograph, Ram says, "Her mother is the mother-in-law of my father's brother". How is the lady related to Ram?

A Mother

B Sister

C Aunt

D Mother-in-law

**Answer:** C

**Explanation:**

Ram's father's brother = Ram's uncle

Mother-in-law of Ram's uncle = Ram's uncle wife's mother

Thus, the lady is the wife of Ram's uncle

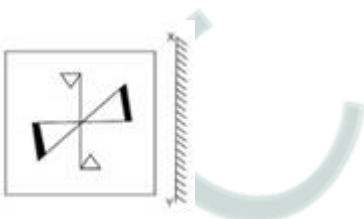
=> That lady is Ram's aunt.

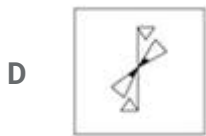
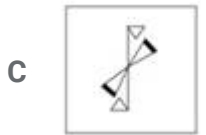
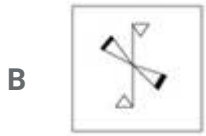

=> Ans - (C)

## SSC Stenographer Previous Papers (Latest Pattern)

**Question 23**

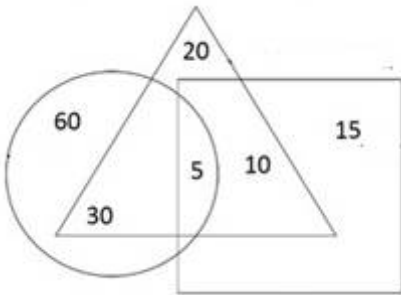
If a mirror is placed on the line XY, then which of the answer figures is the right image of the given figure?





Answer: B

Question 24



A 30

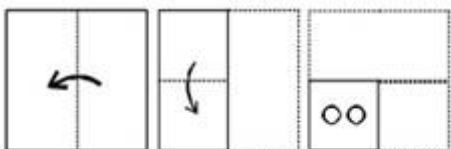
B 20

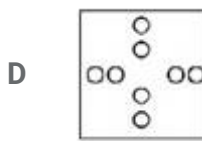
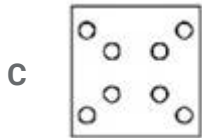
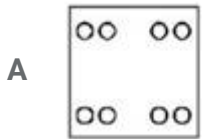
C 60

D 10

Answer: B

Question 25





Answer: A

## SSC GD Constable Free Mock Test (Latest Pattern)

### General Awareness

#### Instructions

For the following questions answer them individually

#### Question 26

In 2007, which monument was declared a winner of the New 7 Wonders of the World?

- A Taj Mahal
- B Hawa Mahal
- C Agra Fort
- D Lotus Temple

Answer: A

## SSC MTS Free Mock Test (Latest Pattern)

#### Question 27

Deepa Mehta was nominated for Oscars for the movie "Water" in the category of .....

- A Best Sound Mixing
- B Best Original Score
- C Best Original Song
- D Best Foreign Language Film

**Answer: D**

**Question 28**

**Myopia affects which of the following organs?**

- A Heart
- B Skin
- C Eyes
- D Mouth

**Answer: C**

**Question 29**

**Which of the following bears flowers?**

- A Bryophyta
- B Pteridophyta
- C Gymnosperms
- D Angiosperms

**Answer: D**

## **SSC CPO Free Mock Test (Latest Pattern)**

**Question 30**

**Oxygenated blood flows out of the heart through the .....**

- A aorta
- B pulmonary artery



C vena cava

D atrium

**Answer: A**

**Question 31**

**Covalent Bond is also called .....**

A Molecular Bond

B Proton Bond

C Nucleus Bond

D Electron Bond

**Answer: A**

**Question 32**

**Sulphur and Chlorine can have what type of a bond?**

A Polar covalent

B Polyionic

C Nonpolar covalent

D Ionic

**Answer: A**

**25 SSC CHSL MOCKS 149**

**Question 33**

**Which of these is not a database management system (DBMS)?**

A Sybase

B SAP HANA

C MySQL

D Cosmos

**Answer: D**

**Question 34**

**Losar festival is celebrated in which state?**

- A** Assam
- B** Orissa
- C** Nagaland
- D** Sikkim

**Answer: D**

**Question 35**

**If for the year a country's GDP was \$ 1315 million, consumer spending was \$900 million, investment by businesses was \$180 million, exports were \$85 million and imports were \$100 million, calculate government spending?**

- A** \$220 million
- B** \$250 million
- C** \$580 million
- D** \$610 million

**Answer: B**

## **SSC CHSL Important Questions and Answers (Download PDF)**

**Question 36**

**Stagflation exists when .....**

- A** price indices and output both decrease.
- B** price indices increase but output decreases.
- C** price indices and output both increase.
- D** price indices decrease but output increases.

**Answer: B**

**Question 37**

**Kanha Tiger Reserve is in which state?**

- A Maharashtra
- B Andhra Pradesh
- C Chhattisgarh
- D Madhya Pradesh

**Answer: D**

**Question 38**

**Which of the following is a greenhouse gas or a gas which can deplete the ozone layer?**

- A Ar
- B HN<sub>3</sub>
- C CO<sub>2</sub>
- D C<sub>4</sub>H<sub>6</sub>

**Answer: C**

**SSC CHSL Free Videos (Youtube)**

**Question 39**

**ABM stands for .....**

- A Anti Belligerent Mine
- B Anti Base Machine
- C Anti Body Mechanics
- D Anti Ballistic Missile

**Answer: A**

**Question 40**

**In terms of size, Venus ranks no. in our Solar System.**

- A 5

**B** 6

**C** 7

**D** 8

**Answer: B**

**Question 41**

**Who was the first to measure the circumference of earth?**

**A** Erechtheus

**B** Aegeus

**C** Eratosthenes

**D** Apheidas

**Answer: C**

**SSC CHSL Syllabus**

**Question 42**

**When did the first Huna invasion take place?**

**A** 358 AD

**B** 458 AD

**C** 558 AD

**D** 658 AD

**Answer: B**

**Question 43**

**Chandragupta (322-298 BC) was the ruler of which dynasty?**

**A** Maurya

**B** Mewar

**C** Mughal

D Peshwas

**Answer: A**

**Question 44**

**Who Invented Electric Stove?**

A Lloyd Groff Copeman

B Bartolomeo Cristofori

C Leonardo da Vinci

D Philip Diehl

**Answer: A**

**SSC CHSL Expected Cutt off**

**Question 45**

**Instrument used for measuring specific gravity is called .....**

A Bathymeter

B Cryometer

C Areometer

D Cymometer

**Answer: C**

**Question 46**

**Cryogenics is a branch of Physics that deal with .....**

A very high temperatures

B very low temperatures

C growth of extremely small crystals

D growth of extremely large crystals

**Answer: B**

**Question 47**

**Indian Constitution has how many Articles?**

- A 95
- B 195
- C 295
- D 395

**Answer: D**

**SSC CHSL Study Material**

**Question 48**

**Article 31A of the Indian Constitution "Saving of Laws providing for acquisition of estates, etc" deals with?**

- A the State Government
- B the Union Government
- C the fundamental rights of the Indian Citizen
- D the directive principles of state policy

**Answer: C**

**Question 49**

**What is the full name of Sachin Tendulkar?**

- A Sachin Suresh Tendulkar
- B Sachin Mahesh Tendulkar
- C Sachin Ramesh Tendulkar
- D Sachin Lokesh Tendulkar

**Answer: C**

**Question 50**

**Who is the author of "The Lowland"?**

- A Amitav Ghosh
- B kiran Desai
- C Jhumpa Lahiri
- D Aravind Adiga

**Answer: C**

## SSC CHSL Free App

### English

#### Instructions

For the following questions answer them individually

#### Question 51

In the following question, out of the four alternatives, select the alternative which is the best substitute of the phrase.

disgusting and an unpleasant smell.

- A oops
- B ouch
- C darn
- D rancid

**Answer: D**

## SSC CHSL Free Mock Test

#### Question 52

In the following question, some part of the sentence may have errors. Find out which part of the sentence has an error and select the appropriate option. If a sentence is free from error, select 'No Error'.

Maya was not promoted to(A)/the post of a manager(B)/till for a few months of her resignation.(C)/No error(D)

- A A
- B B

C C

D D

Answer: C

**Question 53**

In the following question, out of the four alternatives, select the alternative which best expresses the meaning of the idiom/phrase.

**No man is an island**

A a man is self sufficient only when he gets married

B no one is selfsufficient; everyone relies on others

C nobody prefers to live alone

D to not marry is like living on an island

Answer: B

**Question 54**

In the following question, the sentence given with blank to be filled in with an appropriate word. Select the correct alternative out of the four and indicate it by selecting the appropriate option.

This letter is to .....you with the problems faced by the society members.

A acquaint

B illustrate

C convince

D demonstrate

Answer: A

**SSC CHSL Prevoius Papers (DOWNLOAD PDF)**

**Question 55**

Select the antonym of brawl

A truce

B fracas



C altercation

D bicker

**Answer: A**

**Question 56**

Select the word with the correct spelling.

A thankfuel

B chancer

C nibbling

D pollyglot

**Answer: C**

**Question 57**

In the following question, out of the four alternatives, select the alternative which is the best substitute of the phrase.

a person who can endure pain or hardship without showing their feelings or complaining.

A agitate

B fluster

C stoic

D upset

**Answer: C**

## **SSC CGL MTS Previous Papers (DOWNLOAD PDF)**

**Question 58**

Select the synonym of  
antagonize

A alienate

B placid

C sync

D serene

Answer: A

**Question 59**

In the following question, a sentence has been given in Direct/Indirect speech. Out of the four alternatives suggested, select the one, which best express the same sentence in Indirect/Direct speech.

The professor said to Suraj, "Who were you waiting for?"

A The professor asked Suraj who he was waiting for.

B The professor asked Suraj who he had been waiting for.

C The professor inquired with Suraj who he was waiting for.

D The professor asked Suraj who he has been waiting for.

Answer: B

**Question 60**

Select the antonym of  
offensive

A obnoxious

B agreeable

C repugnant

D odious

Answer: B

## SSC CGL GD Constable Previous Papers (DOWNLOAD PDF)

**Question 61**

Select the synonym of:  
incisive

A daffy

B concise

- C stolid
- D tedious

Answer: B

**Question 62**

Rearrange the parts of the sentence in correct order.

I am raising these questions

Pare early warning signs

Qof a deeper crisis

Rbecause such events

- A RQP
- B PQR
- C RPQ
- D QRP

Answer: C

**Question 63**

In the following question, out of the four alternatives, select the alternative which best expresses the meaning of the idiom/phrase.

The squeaky wheel gets the grease

- A the most noticeable problems are the ones most likely to get attention
- B one unfortunate child always keep getting punished
- C the person who complains the most is hated the most
- D the favourite child or student gets the most attention

Answer: A

## SSC Stenographer Previous Papers (DOWNLOAD PDF)

**Question 64**

In the following question, some part of the sentence may have errors. Find out which part of the sentence has an error and select the appropriate option. If a sentence is free from error, select 'No Error'.

One who perpetually hesitates(A)/which of the two things he will do first(B)/will ultimately do neither.(C)No error(D)

- A A
- B B
- C C
- D D

Answer: D

**Question 65**

Improve the bracketed part of the sentence. The other shirt (will cost) you more.

- A would cost
- B will be costing
- C could be costing
- D no improvement

Answer: D

**Question 66**

Rearrange the parts of the sentence in correct order.

Even the knowledge

Pfor less disastrous policies

Qthe Census would make

Rof elementary facts from

- A QRP
- B QPR
- C PRQ
- D RQP

Answer: D

**SSC CGL Previous Papers (DOWNLOAD PDF)**

**Question 67**

Select the word with the correct spelling.

- A mongose
- B salvaged
- C belives
- D although

**Answer: D**

**Question 68**

In the following question, a sentence has been given in Active/Passive voice. Out of four alternatives suggested, select the one, which best expresses the same sentence in Passive/Active voice.  
I will wash the car every Sunday.

- A The car would be washed by me every Sunday.
- B The car will be washed by me every Sunday.
- C Every Sunday the car would be washed by me.
- D The car will have been washed by me every Sunday.

**Answer: B**

**Question 69**

In the following question, the sentence given with blank to be filled in with an appropriate word. Select the correct alternative out of the four and indicate it by selecting the appropriate option.  
If you exercise .....for half an hour daily, then you will rid yourself from the problem of hypertension.

- A recurrently
- B regularly
- C routinely
- D continuously

**Answer: B**

## **SSC CGL Free Mock Test (Latest Pattern)**

**Question 70**

Improve the bracketed part of the sentence.  
Having finished the voluminous novel, (it was being put away by him).

- A it was put away by him
- B he has had put it away
- C he put it away
- D no improvement

**Answer: C**

**Explanation:**

Start Group:

**Instructions**

In the following passage, some of the words have been left out. Read the passage carefully and select the correct answer for the given blank out of the four alternatives.

The chasm .....(1).....the needs of the people who struggle .....(2)..... survival, action and inaction by representatives, and lack of remedial justice has compromised representative democracy .....(3)..... Defections from one party to another indicate.....(4).....of the basic obligations of representatives, even ..... (5).....their own people starve.

**Question 71**

**The chasm .....the needs of the people**

- A between
- B of
- C about
- D in

**Answer: A**

**Question 72**

**Who struggle .....survival, action**

- A for
- B with
- C from
- D of

**Answer: A**

## SSC Stenographer Previous Papers (Latest Pattern)

### Question 73

Lack of remedial justice has compromised representative democracy .....

- A really
- B superlatively
- C enormously
- D too much

Answer: C

### Question 74

Defections from one party to another indicate .....of the basic obligations of representatives

- A renouncing
- B renunciation
- C renunciate
- D the renunciation

Answer: B

### Question 75

Even .....their own people starve.

- A like
- B so
- C whereas
- D as

Answer: D

## SSC GD Constable Free Mock Test (Latest Pattern)

# Mathematics

## Instructions

For the following questions answer them individually

### Question 76

If  $5(4x)^4 < 3x^2 > 4x^6$ ; then the value of x is

- A 3
- B 1
- C 2
- D 5

Answer: A

## SSC MTS Free Mock Test (Latest Pattern)

### Question 77

Mother can bake 20 cakes in 4 hours, Mother and Dadima together can bake 60 cakes in 10 hours. How many cakes Dadima can bake in 30 hours?

- A 30
- B 75
- C 60
- D 25

Answer: A

### Explanation:

Cakes baked by Mother in 1 hour =  $\frac{20}{4} = 5$

Cakes baked by Mother and Dadima together in 1 hour =  $\frac{60}{10} = 6$

=> Cakes baked by Dadima in 1 hour =  $6 - 5 = 1$

∴ Cakes baked by Dadima in 30 hours =  $30 \times 1 = 30$

### Question 78

What is the value of  $99992 \times 100008$ ?

- A 9999999936



B 9999899936

C 9999999836

D 9999999926

**Answer: A**

**Explanation:**

Expression :  $99992 \times 100008$

$$= (100000 - 8) \times (100000 + 8)$$

$$= (100000)^2 - (8)^2$$

$$= 10000000000 - 64 = 9999999936$$

=> Ans - (A)

**Question 79**

Of the 3 numbers whose average is 70, the first is  $\frac{1}{9}$  times the sum of other 2. The first number is

A 32

B 21

C 14

D 42

**Answer: B**

**Explanation:**

Let the three numbers be  $x, y, z$

$$\text{Sum of three numbers} = x + y + z = 70 \times 3 = 210$$

$$\text{According to ques, } \Rightarrow x = \frac{1}{9} \times (y + z)$$

$$\Rightarrow x = \frac{1}{9} \times (210 - x)$$

$$\Rightarrow 9x = 210 - x$$

$$\Rightarrow 9x + x = 10x = 210$$

$$\Rightarrow x = \frac{210}{10} = 21$$

## SSC CPO Free Mock Test (Latest Pattern)

**Question 80**

Point P is the midpoint of seg AB. Coordinates of P are (1,1) and A are (4,3). What are the coordinates of point B?

A (2, 1)

B (-2, -1)

C (2, -1)

D (-2, 1)

**Answer: B**

**Explanation:**

Coordinates of mid point of line joining A  $(x_1, y_1)$  and B  $(x_2, y_2) = \left(\frac{x_1+x_2}{2}, \frac{y_1+y_2}{2}\right)$

Let coordinates of B  $(x, y)$

A = (4,3) and P = (1,1)

$$\Rightarrow 1 = \frac{4+x}{2}$$

$$\Rightarrow x = 2 - 4 = -2$$

$$\text{Similarly, } 1 = \frac{3+y}{2}$$

$$\Rightarrow y = 2 - 3 = -1$$

Thus, coordinates of B (-2,-1)

**Question 81**

**If the amount received at the end of 2nd and 3rd year at Compound Interest on a certain Principal is Rs 33708, and Rs 35730.48 respectively, what is the rate of interest?**

A 6 percent

B 3 percent

C 12 percent

D 10 percent

**Answer: A**

**Explanation:**

Compound interest at the end of 2nd year = Rs. 33,708

Compound interest at the end of 3rd year = Rs. 35,730.48

$$\Rightarrow \text{Difference} = 35730.48 - 33708 = \text{Rs. } 2022.48$$

This is the interest obtained on the amount of 2nd year.

$$\therefore \text{Rate of interest, } r = \frac{2022.48}{33708} \times 100 = 6\%$$

$\Rightarrow$  Ans - (A)

**Question 82**

Slope of the side DA of the rectangle ABCD is  $\frac{1}{3}$ . What is the slope of the side AB?

- A 3
- B  $\frac{1}{3}$
- C  $-\frac{1}{3}$
- D -3

**Answer: D**

**Explanation:**

Sides DA and AB are perpendicular to each other and product of slopes of two perpendicular lines = -1

Let slope of side AB =  $m$  and slope of side DA =  $\frac{1}{3}$

$$\Rightarrow m \times \frac{1}{3} = -1$$

$$\Rightarrow m = -3$$

$\Rightarrow$  Ans - (D)

**25 SSC CHSL MOCKS 149**

**Question 83**

If the radius of a circle is increased by 29% its area increases by

- A 58 percent
- B 29 percent
- C 33.205 percent
- D 66.41 percent

**Answer: D**

**Explanation:**

Let radius = 10 cm

$$\Rightarrow \text{Area of circle} = \pi(10)^2 = 100\pi \text{ sq. cm}$$

If radius is increased by 29%,  $\Rightarrow$  New radius = 12.9 cm

$$\text{New area} = \pi(12.9)^2 = 166.41\pi \text{ sq. cm}$$

$$\Rightarrow \% \text{ increase in area} = \frac{166.41 - 100}{100} \times 100$$

$$= 66.41 \%$$

#### Question 84

A shopkeeper by selling 23 Lotto shoes, earns a profit equal to the selling price of 7 Lotto shoes. His profit percentage is

- A 43.75 percent
- B 30.4 percent
- C 60.8 percent
- D 17.05 percent

**Answer:** A

#### **Explanation:**

Let Cost price of 1 shoe = Rs.  $x$

Let Selling price of 1 shoe = Rs.  $y$

Profit of 23 shoes = Rs.  $23(y - x)$

According to ques,  $\Rightarrow 23(y - x) = 7y$

$$\Rightarrow 23y - 23x = 7y$$

$$\Rightarrow 23x = 23y - 7y = 16y$$

$$\Rightarrow \frac{x}{y} = \frac{16}{23}$$

$$\therefore \text{Profit \%} = \frac{x}{y} \times 100$$

$$= \frac{16}{23} \times 100 = 43.75\%$$

#### Question 85

If  $3x + 7 = 5x + 1$ , then the numerical value of  $(x + 4)^2$  is

- A -1
- B 49
- C -49
- D 1

**Answer:** B

#### **Explanation:**

Expression :  $3x + 7 = 5x + 1$

$$\Rightarrow 5x - 3x = 7 - 1 = 6$$

$$\Rightarrow x = \frac{6}{2} = 3$$

$$\begin{aligned} \text{To find : } & (x + 4)^2 \\ & = (3 + 4)^2 = (7)^2 = 49 \end{aligned}$$

## SSC CHSL Important Questions and Answers (Download PDF)

### Question 86

If Giri's salary is  $\frac{9}{5}$  times of Hariprasad's and Shaukat's is  $\frac{9}{2}$  times of Hariprasad's, what is the ratio of Giri's salary to Shaukat's?

- A 10:81
- B 81:10
- C 5:2
- D 2:5

**Answer:** D

#### Explanation:

Let Hariprasad's salary =  $10x$

$$\Rightarrow \text{Giri's salary} = \frac{9}{5} \times 10x = 18x$$

$$\Rightarrow \text{Shaukat's salary} = \frac{9}{2} \times 10x = 45x$$

$$\therefore \text{Ratio of Giri's salary to Shaukat's} = \frac{18x}{45x}$$

$$= 2 : 5$$

### Question 87

If  $\sin 330^\circ = x$ , then the value of  $x$  is

- A  $-\sqrt{3}/2$
- B  $-1/2$
- C  $2/\sqrt{3}$
- D  $\sqrt{2}$

**Answer:** B

#### Explanation:

Expression :  $\sin 330^\circ = x$

$$= \sin(360 - 30)$$

$$= -\sin 30 = -\frac{1}{2}$$

=> Ans - (B)

**Question 88**

If  $x - y = 7$  and  $x + y = 13$ , then  $x^2 - y^2$  is

- A 104
- B 30
- C 30
- D 91

**Answer:** D

**Explanation:**

Equation 1 :  $x - y = 7$

Equation 2 :  $x + y = 13$

Adding both equations, we get :  $2x = 7 + 13 = 20$

=>  $x = \frac{20}{2} = 10$

Substituting value of 'x' in equation 1, =>  $y = 10 - 7 = 3$

To find :  $x^2 - y^2 = (10^2 - 3^2)$

=  $100 - 9 = 91$

## SSC CHSL Free Videos (Youtube)

**Question 89**

A car travels a certain distance at 34 km/h and comes back at 66 km/h. What is the average speed for total journey?

- A 50 km/hr
- B 39.76 km/hr
- C 55.12 km/hr
- D 44.88 km/hr

**Answer:** D

**Explanation:**

Average speed of the journey is the harmonic mean of the speeds 34 and 66 km/hr

Harmonic mean of two numbers 'x' and 'y' =  $\frac{2}{\frac{1}{x} + \frac{1}{y}}$

$$\begin{aligned} \text{Average speed} &= \frac{2}{\frac{1}{34} + \frac{1}{66}} \\ &= 2 \div \frac{66+34}{66 \times 34} = \frac{2 \times 66 \times 34}{100} \\ &= \frac{4488}{100} = 44.88 \text{ km/hr} \\ &\Rightarrow \text{Ans - (D)} \end{aligned}$$

**Question 90**

30% discount is offered on an item. By applying a promo code the customer wins 10% cash back. What is the effective discount?

- A 40.7 percent
- B 40 percent
- C 37 percent
- D 13 percent

**Answer: C**

**Explanation:**

Let the marked price of item = Rs.  $100x$

$$\begin{aligned} \text{Amount after 30 \% discount} &= 100x - \frac{30}{100} \times 100x \\ &= 100x - 30x = \text{Rs. } 70x \end{aligned}$$

$$\begin{aligned} \text{Selling price after 10 \% cashback} &= 70x - \frac{10}{100} \times 70x \\ &= 70x - 7x = \text{Rs. } 63x \end{aligned}$$

$$\Rightarrow \text{Total discounted amount} = 100x - 63x = \text{Rs. } 37x$$

$$\therefore \text{Effective discount} = \frac{37x}{100x} \times 100 = 37\%$$

**Question 91**

A cylindrical vessel of height 7 cm and radius 5 cm is completely filled with sand. When this sand is poured out it forms a right circular cone of radius 8 cm what will be the height of this cone?

- A 8.2 cm
- B 16.4 cm
- C 24.6 cm
- D 32.8 cm

**Answer: A**

**Explanation:**

Let height of cone =  $h$  cm and radius,  $r = 8$  cm

Height of cylinder,  $H = 7$  cm and Radius,  $R = 5$  cm

Volume of cylinder = Volume of cone

$$\Rightarrow \pi R^2 H = \frac{1}{3} \pi r^2 h$$

$$\Rightarrow (5)^2 \times 7 = \frac{1}{3} \times (8)^2 \times h$$

$$\Rightarrow h = \frac{25 \times 7 \times 3}{64} = \frac{525}{64}$$

$$\Rightarrow h = 8.2 \text{ cm}$$

## SSC CHSL Syllabus

### Question 92

What is the value of  $\frac{\operatorname{cosec} A}{\sqrt{(\operatorname{cosec}^2 A - 1)}}$  ?

A  $\sin A$

B  $\sec A$

C  $\tan A$

D  $\cos A$

**Answer: B**

**Explanation:**

$$\text{Expression: } \frac{\operatorname{cosec} A}{\sqrt{(\operatorname{cosec}^2 A - 1)}}$$

Using,  $(\operatorname{cosec}^2 A - \cot^2 A = 1)$

$$= \frac{\operatorname{cosec} A}{\sqrt{\cot^2 A}} = \frac{\operatorname{cosec} A}{\cot A}$$

$$= \frac{1}{\sin A} \div \frac{\cos A}{\sin A}$$

$$= \frac{1}{\sin A} \times \frac{\sin A}{\cos A}$$

$$= \frac{1}{\cos A} = \sec A$$

$\Rightarrow$  Ans - (B)

### Question 93

$\Delta ABC$  is right angled at B. BD is the altitude. AD is 8 cm and DC is 50 cm. What is the length of BD?

A 25 cm

B 20 cm

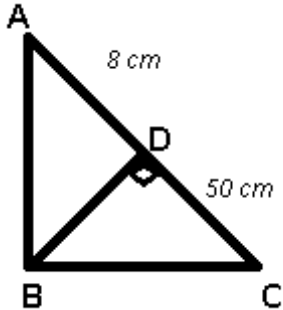


C 16 cm

D 15 cm

Answer: B

Explanation:



Let  $BD = x$  cm

Using,  $(BD)^2 = (AD) \times (CD)$

$$\Rightarrow (x)^2 = 8 \times 50 = 400$$

$$\Rightarrow x = \sqrt{400} = 20 \text{ cm}$$

$\Rightarrow$  Ans - (B)

Question 94

If  $\sec A - \tan A = x$ , then the value of  $x$  is

A  $\sqrt{[(1 + \sin A)/(1 - \sin A)]}$

B  $\sqrt{[(1 - \sin A)/(1 + \sin A)]}$

C  $(1 - \sin A)/(1 + \sin A)$

D  $(1 + \sin A)/(1 - \sin A)$

Answer: B

Explanation:

Expression :  $\sec A - \tan A = x$

$$= \frac{1}{\cos A} - \frac{\sin A}{\cos A}$$

$$= \frac{1 - \sin A}{\cos A} = \frac{\sqrt{(1 - \sin A)^2}}{\sqrt{1 - \sin^2 A}}$$

$$= \sqrt{\frac{(1 - \sin A)^2}{(1 - \sin A)(1 + \sin A)}}$$

$$= \sqrt{\frac{1 - \sin A}{1 + \sin A}}$$

$\Rightarrow$  Ans - (B)

## SSC CHSL Expected Cutt off

### Question 95

In a rectangle

- A Diagonals bisect opposite angles
- B Consecutive sides are congruent
- C All sides are congruent
- D Diagonals form two congruent triangles

**Answer:** D

### Explanation:

In a rectangle, diagonals are of equal length and they bisect each other.

Also, both the diagonals will have vertically opposite angles between them which are equal.

Thus, Diagonals form two congruent triangles (by SAS criteria)

=> Ans - (D)

### Question 96

Two fractions are such that their product is 4 and sum is  $\frac{68}{15}$ . Find the two fractions.

- A  $\frac{6}{15}, \frac{10}{3}$
- B  $\frac{6}{5}, \frac{10}{3}$
- C  $\frac{7}{2}, \frac{8}{7}$
- D  $\frac{10}{7}, \frac{14}{5}$

**Answer:** B

### Explanation:

Let the two numbers be  $x$  and  $y$

$$\Rightarrow x + y = \frac{68}{15} \text{ and } x \cdot y = 4$$

$$\Rightarrow x\left(\frac{68}{15} - x\right) = 4$$

$$\Rightarrow x\left(\frac{68-15x}{15}\right) = 4$$

$$\Rightarrow 68x - 15x^2 = 60$$

$$\Rightarrow 15x^2 - 68x + 60 = 0$$

$$\Rightarrow 15x^2 - 50x - 18x + 60 = 0$$

$$\Rightarrow 5x(3x - 10) - 6(3x - 10) = 0$$

$$\Rightarrow (5x - 6)(3x - 10) = 0$$

$$\Rightarrow x = \frac{6}{5}, \frac{10}{3}$$

### Question 97

Read the data answer the given questions

|              | Quantity of cost | Average cost |
|--------------|------------------|--------------|
| MOBILES      | 52               | 15000        |
| CAMERAS      | 76               | 8000         |
| TVs          | 31               | 51000        |
| REFRIGERATOR | 71               | 26000        |
| AC           | 70               | 20000        |

What is the total value of the stocks in lakhs rupees?

A 621.5

B 120

C 62.15

D 300

**Answer: C**

#### Explanation:

Total cost of mobiles =  $52 \times 15000 = \text{Rs. } 7,80,000$

Total cost of Cameras =  $76 \times 8000 = \text{Rs. } 6,08,000$

Total cost of TVs =  $31 \times 51000 = \text{Rs. } 15,81,000$

Total cost of Refrigerator =  $71 \times 26000 = \text{Rs. } 18,46,000$

Total cost of AC =  $70 \times 20000 = \text{Rs. } 14,00,000$

$\therefore$  Total cost =  $7,80,000 + 6,08,000 + 15,81,000 + 18,46,000 + 14,00,000 = \text{Rs. } 62,15,000$

Total cost in lakhs = Rs 62.15 lakhs

$\Rightarrow$  Ans - (C)

**SSC CHSL Study Material**

### Question 98

Read the data and answer the given questions

| Years | Ratio import/export |
|-------|---------------------|
| 2011  | 0.8                 |
| 2012  | 0.8                 |
| 2013  | 1.2                 |
| 2014  | 1.2                 |
| 2015  | 1.5                 |

If the Imports In 2012 was Rs. 1200 crores and the total exports In the years 2012 and 2013 together was Rs. 3200 crores, then the Imports in 2013 was?

- A 1700
- B 1500
- C 1417
- D 2040

**Answer:** D

#### **Explanation:**

Imports in 2012 = Rs. 1200 crores

Let Exports in 2012 = Rs.  $y$  crores

Ratio of imports and exports in 2012 = 0.8

$$\Rightarrow \frac{1200}{y} = 0.8$$

$$\Rightarrow y = \frac{1200}{0.8} = 1500$$

Total exports In the years 2012 and 2013 together = Rs. 3200 crores

$\Rightarrow$  Exports in 2013 = Rs.  $(3200 - 1500)$  crores = Rs. 1700 crores

Let imports in 2013 = Rs.  $x$  crores

Ratio of imports and exports in 2013 =  $\frac{x}{1700} = 1.2$

$$\Rightarrow x = 1700 \times 1.2 = 2040$$

$\therefore$  Imports in 2013 was Rs. 2040 crores

$\Rightarrow$  Ans - (D)

### Question 99

Read the given data and answer the questions ?

| Measured On Birthday | Hieght of Children in CMs |
|----------------------|---------------------------|
| 4                    | 100                       |
| 5                    | 105                       |
| 6                    | 110                       |
| 7                    | 115                       |
| 8                    | 125                       |
| 9                    | 135                       |
| 10                   | 140                       |
| 11                   | 145                       |
| 12                   | 155                       |
| 13                   | 160                       |
| 14                   | 165                       |
| 15                   | 170                       |
| 16                   | 175                       |

What is the increase in height of child from 5th birthday to 16 birthday ?

- A 75 cms
- B 70 cms
- C 65 cms
- D 80 cms

**Answer:** B

#### Explanation:

Height on 5th birthday = 105 cm

Height on 16th birthday = 175 cm

Increase in height =  $175 - 105 = 70$  cm

=> Ans - (B)

### Question 100

Read the data answer the given questions

|                |    |
|----------------|----|
| Deep Sleep     | 25 |
| Dreaming       | 10 |
| Light Sleep    | 10 |
| Exreamly Sleep | 15 |
| Awake          | 40 |

Between 10pm to 6am, a fitness band records the following data. How long was the user Dreaming or was Awake?

- A 4 hours
- B 3 hours
- C 2 hours
- D 4.5 hours

**Answer:** A

**Explanation:**

Total time between 10 pm to 6 am = 8 hours

% time spent on dreaming and being awake =  $10 + 40 = 50\%$

=> Time spent on dreaming and being awake =  $\frac{50}{100} \times 8$

=  $\frac{8}{2} = 4$  hours

=> Ans - (A)

**SSC CHSL Free App**

**SSC CHSL Free Mock Test**

**SSC CHSL Previous Papers (DOWNLOAD PDF)**

**SSC CGL MTS Previous Papers (DOWNLOAD PDF)**

**SSC CGL GD Constable Previous Papers (DOWNLOAD PDF)**

**SSC Stenographer Previous Papers (DOWNLOAD PDF)**

**SSC CGL Previous Papers (DOWNLOAD PDF)**

**SSC CGL Free Mock Test (Latest Pattern)**

**SSC Stenographer Previous Papers (Latest Pattern)**

**SSC GD Constable Free Mock Test (Latest Pattern)**

**SSC MTS Free Mock Test (Latest Pattern)**

**SSC CPO Free Mock Test (Latest Pattern)**

**25 SSC CHSL MOCKS 149**

**SSC CHSL Important Questions and Answers (Download PDF)**

**SSC CHSL Free Videos (Youtube)**

**SSC CHSL Syllabus**

**SSC CHSL Expected Cutt off**

**SSC CHSL Study Material**

**SSC CHSL Free App**