



SSC CPO 16th-March-2019-Shift-2

All rights reserved. No part of this publication may be reproduced, distributed, or transmitted in any form or by any means, electronic, mechanical, photocopying, recording or otherwise, or stored in any retrieval system of any nature without the permission of cracku.in, application for which shall be made to support@cracku.in

Reasoning

Instructions

For the following questions answer them individually

Question 1

If $AT = 20$ and $BEG = 70$, then $BANK = \dots\dots\dots$

- A 318
- B 308
- C 228
- D 282

Answer: B

Free SSC Study Material (18,000 Solved Questions)

Question 2

Identify the number that does NOT belong in the given series.

5, 9, 17, 29, 55, 65

- A 55
- B 29
- C 9
- D 5

Answer: A

Question 3

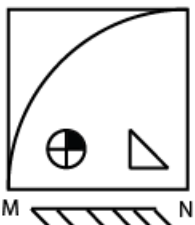
Three of the following four numbers are alike in a certain way and one is different. Identify the different one.

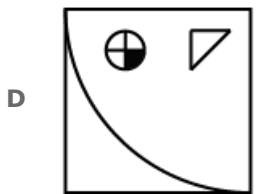
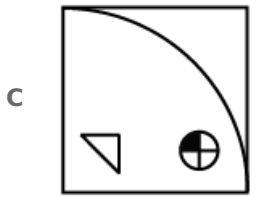
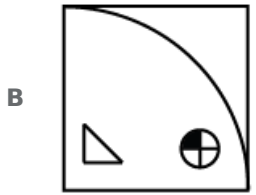
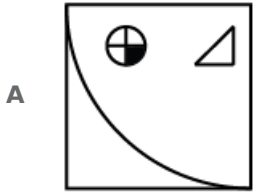
- A 2047
- B 4702
- C 6041
- D 4306

Answer: C

Question 4

If a mirror is placed on the line MN, then which of the answer figures is the correct mirror image of the given figure?



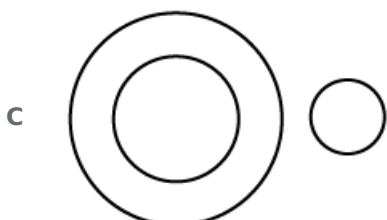

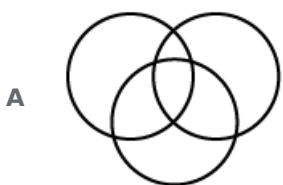


Answer: D

SSC CPO Free Mock Test (Latest Pattern)

Question 5

Select the Venn diagram that represents the correct relationship between the following classes.
Vegetables, Brinjal, Apple



D



Answer: C

Question 6

Select the set of numbers that is similar to the following set of numbers.
(18, 54, 36)

A (16, 40, 32)

B (10, 40, 20)

C (2, 6, 10)

D (8, 24, 16)

Answer: D

Question 7

Select the word-pair in which the two words are related in the same way as are the two words in the given word-pair.

Steel : Iron

A Chromium : Silver

B Brass : Copper

C Bronze : Iron

D Nickel : Tin

Answer: B

SSC CPO Previous Papers

Question 8

Choose the option which has the same relation as the words given below :
Airplane : Airport/Hangar

A Car : Garage

B Farm : Grains

C Objects : Store/Storehouse

D Horse : Saddle

Answer: A

Question 9

Which two numbers should be interchanged to make the following equation correct?

$$7 - 8 \div 4 + 5 \times 3 = 8 \times 3 + 6 \div 2 - 3$$

- A 4 and 5
- B 7 and 5
- C 4 and 2
- D 6 and 7

Answer: B

Question 10

Select the correct alternative to indicate the arrangement of the following words in a logical and meaningful order.

- 1) Editor
- 2) Publisher
- 3) Author
- 4) Reader
- 5) Bookseller

- A 3, 1, 2, 5, 4
- B 4, 3, 1, 2, 5
- C 1, 3, 2, 5, 4
- D 3, 2, 1, 5, 4

Answer: A

1500 + Free Must Solved SSC Questions (With Solutions)

Question 11

If '×' stands for addition, '÷' stands for subtraction, '+' stands for multiplication and '-' stands for division, then what will be the value of the following expression?

$$26 \div 13 \times 8 + 6 - 2$$

- A 17
- B 47
- C 27
- D 37

Answer: D

Question 12

Two statements are given, followed by two conclusions I and II. Assuming these statements to be true, even if they seem to be at variance with commonly known facts, decide which of the given conclusions logically follow (s) from the statements.

Statements:

Some roads are metros.

Some metros are cars.

Conclusions:

I. All cars are either roads or metros.

II. Some cars are metros.

- A Only conclusion I follows.
- B Neither conclusion I nor II follows.
- C Only conclusion II follows.
- D Either conclusion I or II follows.

Answer: C

Question 13

Three of the following four words are alike in a certain way and one is different. Find the odd one out.

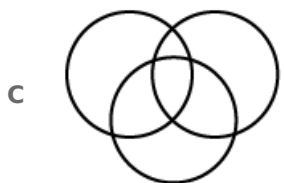
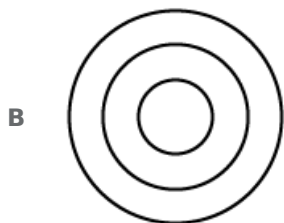
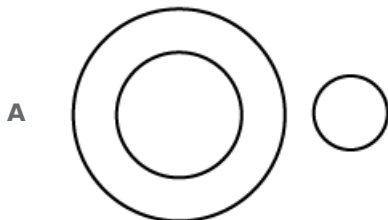
- A Lion
- B Whale
- C Elephant
- D Shark

Answer: D

SSC CGL Free Mock Test (Latest Pattern)

Question 14

Select the Venn diagram that represents the correct relationship between the following classes. Jaisalmer, Jaipur, Rajasthan



D



Answer: D

Question 15

Three of the following four number-pairs are alike in a certain way and one is different. Identify the different one.

A 37 : 75

B 29 : 59

C 28 : 56

D 26 : 53

Answer: C

Question 16

Select the option that is related to the third term in the same way as the second term is related to the first term.

ADGJ : ZWTQ :: MPSV :

A NKHE

B MKHE

C NJGC

D GJLM

Answer: A

SSC CGL Previous Papers (DOWNLOAD PDF)

Question 17

'Optimist' is related to 'Pessimist' in the same way as 'Cheerful' is related to '

A Selfish

B Beautiful

C Ugly

D Gloomy

Answer: D

Question 18

Select the set of numbers that is similar to the following set of numbers.
(12, 37, 112)

- A (15, 46, 139)
- B (7, 24, 73)
- C (13, 40, 118)
- D (9, 28, 83)

Answer: A

Question 19

Select the number-pair in which the two numbers are related in the same way as are the two numbers of the given number pair.

13 : 174

- A 15 : 224
- B 8 : 69
- C 14 : 200
- D 9 : 81

Answer: B

Daily Free SSC Practice Set

Question 20

Three of the following four letter-clusters are alike in a certain way and one is different. Find the odd one out.

- A KOTZ
- B DHMS
- C GIMP
- D FJOU

Answer: C

Question 21

In a certain code language, SON is written as 345 and ROAM is written as 6412. How will RANSOM be written as in the same language?

- A 615342
- B 651342
- C 615324
- D 612435

Answer: A

Question 22

Three of the following four number-pairs are alike in a certain way and one is different. Identify the different one.

- A 15 : 115
- B 23 : 161
- C 29 : 203
- D 27 : 189

Answer: A

SSC CHSL Previous Papers (DOWNLOAD PDF)

Question 23

Select the option that is related to the third term in the same way as the second term is related to the first term.

HVW : FTU :: DRS :

- A FTU
- B BOQ
- C BPQ
- D APQ

Answer: C

Question 24

Which number will replace the question mark (?) in the following series?

1, 4, 3, 4, 7, 7, 13, 13, ?

- A 20
- B 22
- C 31
- D 21

Answer: D

Question 25

Which number will replace the question mark (?) in the following series?

7, 14, 33, 70, 131, ?

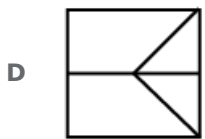
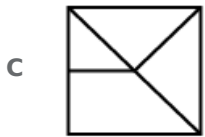
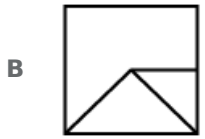
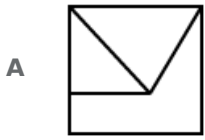
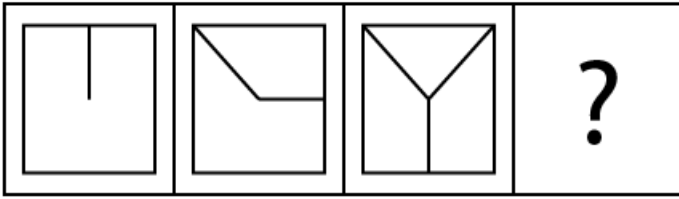
- A 190
- B 218
- C 131
- D 222

Answer: D

SSC CHSL Free Mock Test (Latest Pattern)

Question 26

Select the option that will come next in the given series.



Answer: C

Question 27

Three of the following four letter-clusters are alike in a certain way and one is different. Find the odd one out.

A UFXC

B SHBY

C TGPK

D YAJQ

Answer: D

Question 28

Select the correct alternative to indicate the arrangement of the following words in a logical and meaningful order.

- 1) Knee
- 2) Heel
- 3) Ankle
- 4) Thigh
- 5) Calf

A 2, 3, 1, 4, 5

B 2, 3, 1, 5, 4

C 4, 5, 3, 2, 1

D 2, 3, 5, 1, 4

Answer: D

General Science Notes (Download PDF)

Question 29

If sign '+' is interchanged with '÷' and number '2' is interchanged with '6', which of the following equations would be correct?

A $8 + 6 \div 2 = 8$

B $2 + 8 \div 6 = 6$

C $2 + 8 \div 2 = 8$

D $2 + 6 \div 8 = 11$

Answer: D

Question 30

Choose the mirror image of the given word if the mirror is placed to the right of the word.

MOUNTAIN

A NIATNUOM

B MOUNTAIN

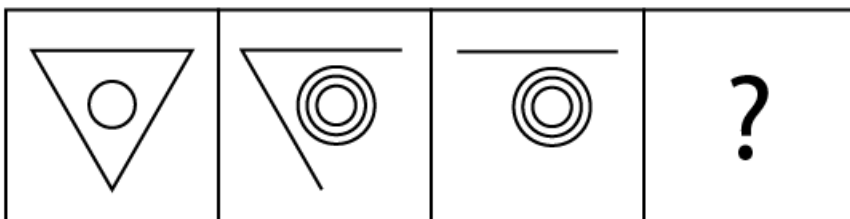
C NIATIUOM

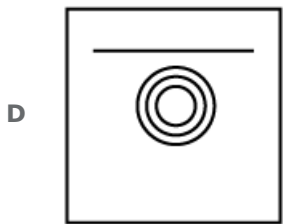
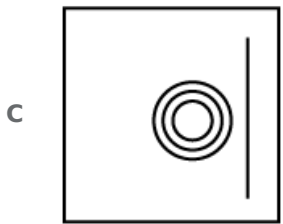
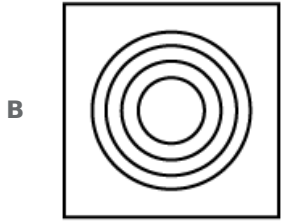
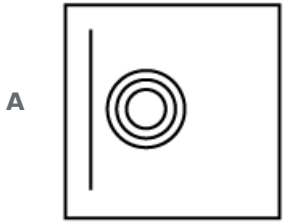
D NIATNUOM

Answer: A

Question 31

Select the option that will come next in the given series.



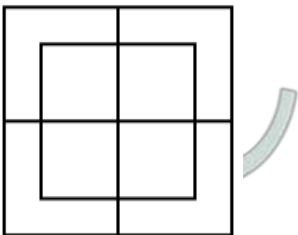


Answer: B

SSC GD Constable Previous Papers

Question 32

How many squares are there in the following figure?



A 8

B 14

C 10

D 12

Answer: C

Question 33

If in a language, 'foot' is called 'elbow', 'elbow' is called 'ankle', 'ankle' is called 'palm', 'palm' is called 'finger' and 'finger' is called 'knee', then in that language, on what would one wear a ring?

- A Ankle
- B Knee
- C Palm
- D Finger

Answer: B

Question 34

Three of the following four number-pairs are alike in a certain way and one is different. Identify the different one.

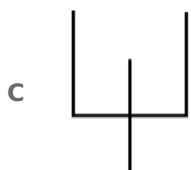
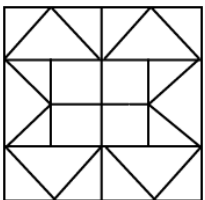
- A 9 : 729
- B 13 : 2197
- C 7 : 343
- D 17 : 4814

Answer: D

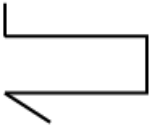
SSC MTS Previous Papers (DOWNLOAD PDF)

Question 35

Select the option that is embedded in the following figure. (Rotation is not allowed)



D



Answer: C

Question 36

Two statements are given, followed by two conclusions I and II Assuming these statements to be true, even if they seem to be at variance with commonly known facts, decide which of the given conclusions logically follow(s) from the statements.

Statements:

No Tablet is lion.

All lions are bells.

Conclusions:

I. No bell is tablet.

II. Some bells are lions.

- A Only conclusion I follows.
- B Both conclusions I and II follow.
- C Only conclusion II follows.
- D Neither conclusion I nor II follows.

Answer: C

Question 37

Which letter-cluster will replace the question mark (?) in the following series?
IVM, HWL, GXK, FYJ, ?

- A EZH
- B EAH
- C EZI
- D DZI

Answer: C

SSC Stenographer Previous Papers (DOWNLOAD PDF)

Question 38

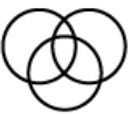



Which letter will replace the question mark (?) in the following series?
B, E, H, K, N, ?

- A O
- B P
- C Q
- D N

Answer: C

Question 39

Select the Venn diagram that represents the correct relationship between the following classes.
Fathers, Doctors, Singers

- A 
- B 
- C 
- D 

Answer: A

Question 40

Select the number-pair in which the two numbers are related in the same way as are the two numbers of the given number pair.

68 : 30

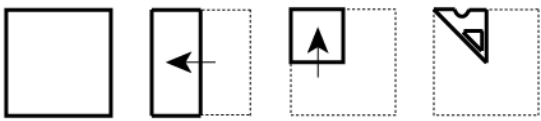
- A 350 : 49
- B 222 : 131
- C 125 : 27
- D 520 : 350


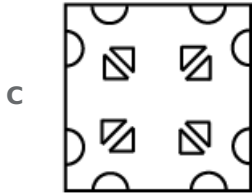
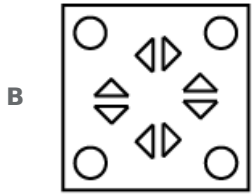
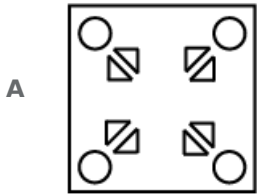
Answer: D

SSC Stenographer Previous Papers (Latest Pattern)

Question 41

The sequence of folding a piece of square paper and the manner in which the folded paper has been cut is shown. How would this paper look when unfolded?





Answer: D

Question 42

Three of the following four words are alike in a certain way and one is different. Find the odd one out.

A Potato

B Garlic

C Tomato

D Ginger

Answer: C

Question 43

A man is facing towards the east. He then turns 45° anti-clockwise, again 180° anti-clockwise and then 225° clock wise. In which direction is he facing now?

A West

B North

C South

D East

Answer: D

SSC GD Constable Free Mock Test (Latest Pattern)

Question 44

If in a certain code, EDITION is written as VWRGRLM, then which word will be coded as SLMVHGB?

- A HAUGHTY
- B HONESTY
- C AMNESTY
- D EDITORS

Answer: B

Question 45

'Belgium' is related to 'Europe' in the same way as 'Japan' is related to '.....'.

- A Africa
- B Australia
- C Asia
- D Europe

Answer: C

Question 46

From his house, Avinash went to Kapil's house situated 500 m towards the north-east of his own house. From there, both of them went to Varun's house situated 400 m towards the south of Kapil's house. What is the shortest distance between Avinash's current location and his location at the beginning?

- A 900 m
- B 400 m
- C 300 m
- D 500 m

Answer: C

SSC MTS Free Mock Test (Latest Pattern)

Question 47

Select the option that is related to the third number in the same way as the second number is related to the first number.

23 : 138 :: 17 :

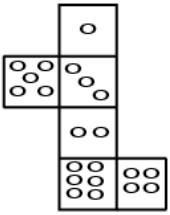
- A 96
- B 102
- C 346

D 56

Answer: B

Question 48

If the following figure is folded to form a cube, how many dots would appear on the face opposite the face bearing four dots?



A 5

B 3

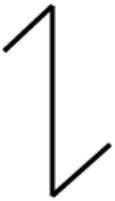
C 6

D 2

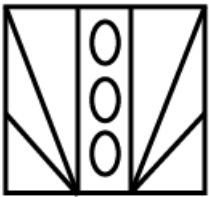
Answer: A

Question 49

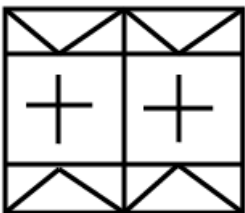
Select the option in which the given figure is embedded.



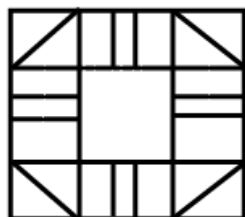
A



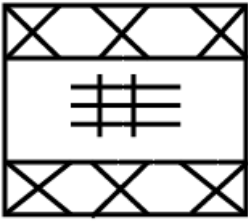
B



C



D

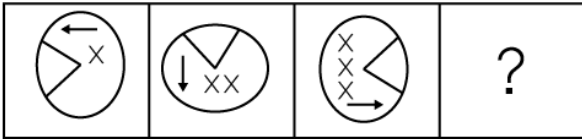


Answer: B

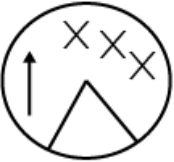
SSC CGL Tier-2 Previous Papers PDF

Question 50

Select the option that will come next in the given series.



A



B



C



D



Answer: D

SSC Exam Free Videos (Youtube)

General knowledge

Instructions

For the following questions answer them individually

Question 51

Which of the following would you associate with the word 'diopetre'?

- A Urology
- B Ophthalmology
- C Neurology
- D Oncology

Answer: B

SSC Study Material

Question 52

..... fabric from Madhya Pradesh is registered with a GI tag.

- A Pambarthi
- B Chanderi
- C Bhagalpuri
- D Sholapuri

Answer: B

Question 53

Which of the following is NOT a nationalised bank?

- A South Indian Bank
- B Syndicate Bank
- C Canara Bank
- D Vijaya Bank

Answer: A

Question 54

Which of the following is NOT a national political party?

- A Nationalist Congress Party
- B Bhartiya Janata Party
- C United Democratic Party
- D Indian National Congress

Answer: C

SSC Daily Practice Set

Question 55

'Expectation is the root of all heartache' is a quote by

- A William Shakespeare
- B Dalai Lama
- C Mahavir
- D Buddha

Answer: A

Question 56

Considered one of the best in India, Temi Tea garden is the only tea estate in the state of:

- A West Bengal
- B Sikkim
- C Assam
- D Odisha

Answer: B

Question 57

Which renowned tabla player's son is also a famous tabla player who has collaborated with international bands?

- A Ustad Bismillah Khan
- B Ustad Amjad Ali
- C Ustad Allah Rakha
- D Ustad Rashid Khan

Answer: C

SSC GK Free Tests

Question 58

Who was the first Indian woman to win an Olympic medal?

- A Karunam Malleswari
- B Saina Nehwal
- C Mary Kom
- D Sakshi Malik

Answer: A

Question 59

..... was honoured with the "Outstanding Parliamentarian Award" in 2017.

- A Hukum Dev Narayan

- B Bhartruhari Mahtab
- C Ghulam Nabi Azad
- D Dinesh Trivedi

Answer: B

Question 60

..... is the biography of Sachin Tendulkar.

- A The Test of My Life
- B Playing to Win
- C Playing It My Way
- D Ace Against Odds

Answer: C

Current Affairs Question and Answers (Download PDF)

Question 61

In humans, each cell normally contains pairs of chromosomes.

- A 22
- B 24
- C 23
- D 21

Answer: C

Question 62

Mangal Pandey was hanged in 1857 for attacking the British officers in:

- A Allahabad
- B Benaras
- C Calcutta
- D Barrackpore

Answer: D

Question 63

Who discovered radium?

- A Abdus Salam
- B Alexander Fleming
- C Pierre and Marie Currie

D Ronald Ross

Answer: C

Daily and Monthly Current Affairs (Download PDF)

Question 64

Who is the second woman Speaker of the Lok Sabha?

A Smriti Irani

B Nirmala Sitharaman

C Meira Kumar

D Suman Mahajan

Answer: D

Question 65

India celebrates National Engineer's Day on September 15, which is the birth anniversary of:

A Veeru Shahastrabuddhi

B Mokshagundam Visvesvaraya

C E. Sreedharan

D Shiva Ayyadurai

Answer: B

Question 66

..... was the first President of the Bhartiya Janata Party.

A Kushabhau Thakre

B Atal Bihari Vajpayee

C Lal Krishna Advani

D Murli Manohar Joshi

Answer: B

285 SSC Mocks - Just RS. 249

Question 67

Nepa Nagar in Madhya Pradesh is known for:

A Steel Mills

B Pottery

C Sugar Mills

D Newsprint Factory

Answer: D

Question 68

'All the world's a stage, And all the men and women merely players' — is a phrase from the play:

- A Macbeth
- B Julius Ceaser
- C The Merchant of Venice
- D As You Like It

Answer: D

Question 69

The Thimithi festival in Tamil Nadu is celebrated in the honor of:

- A Padmavati
- B Sita
- C Draupadi
- D Surpanakha

Answer: C

SSC GK Questions

Question 70

Security Printing and Minting Corporation of India Limited (SPMCIL) was established in:

- A 2001
- B 2005
- C 2003
- D 2006

Answer: D

Question 71

Penicillin, one of the world's first antibiotics, was discovered by:

- A Marie Curie
- B Alexander Fleming
- C Alexander Graham Bell
- D Pierre Curie

Answer: B

Question 72

The Wright brothers completed the world's first successful controlled powered flight in:

- A 1908
- B 1909
- C 1911
- D 1903

Answer: D

SSC Free Preparation App

Question 73

The Bahujan Samaj Party was formed in:

- A 1988
- B 1984
- C 1976
- D 1967

Answer: B

Question 74

Which of the following has an odometer?

- A Water heater
- B Car
- C Blood pressure monitoring device
- D Air pump

Answer: B

Question 75

The period has been described as the 'golden age' of Indian history.

- A Mughal
- B Maratha
- C Gupta
- D Buddhist

Answer: C

Free SSC Study Material (18,000 Solved Questions)

Question 76

Which of the following is NOT a printing press of the Security Printing and Minting Corporation of India Limited (SPMCIL)?

- A Bank Note Press
- B Bank Security Press
- C Currency Note Press
- D Security Printing Press

Answer: B

Question 77

The Sanskrit phrase "Atithi Devo Bhava" means:

- A I salute you
- B The guest is God
- C Good day
- D See you soon

Answer: B

Question 78

Which Indian State/Union Territory has the shortest coastline?

- A Gujarat
- B Maharashtra
- C Puducherry
- D Tamil Nadu

Answer: C

SSC CPO Free Mock Test (Latest Pattern)

Question 79

Who among the following is the highest-rated Visually impaired chess player in India?

- A Darpan Inani
- B Baskaran Adhiban
- C Krishnan Sasikiran
- D Pentala Harikrislma

Answer: A

Question 80

..... was officially acknowledged as the most recorded artist in music history by the Guinness Book of World Records in 2011.

- A Mariah Carey
- B Asha Bhosle
- C Lata Mangeshkar
- D Beyonce

Answer: B

Question 81

Which Gharana of classical singing did late Pandit Bhimsen Joshi belong to?

- A Etawah
- B Malhar
- C Kirana
- D Dhruwad

Answer: C

SSC CPO Previous Papers

Question 82

As of January 2019 was the longest serving Chief Minister of Gujarat.

- A Keshubhai Patel
- B Narendra Modi
- C Madhav Singh Solanki
- D Chimanbhai Patel

Answer: B

Question 83

Ohm's Law states that:

- A Electric current = Voltage / Resistance
- B Power = Voltage + Current
- C Power = Voltage × Current
- D Electric current = Resistance / Voltage

Answer: A

Question 84

The Test of My Life is an autobiography of.

- A Yuvraj Singh
- B Sachin Tendulkar
- C MS Dhoni
- D Gautam Gambhir

Answer: A

1500 + Free Must Solved SSC Questions (With Solutions)

Question 85

The names of Wright brothers credited with inventing the aeroplane were:

- A William and Oliver
- B William and Orville
- C Wilbur and Orville
- D Wilbm and Oliver

Answer: C

Question 86

As on December 12, 2018 The Nationalist Congress Party was led by:

- A Sudhakar Reddy
- B Sharad Pawar
- C Rahul Gandhi
- D Sitaram Yechury

Answer: B

Question 87

Kanishka was a king.

- A Kushan
- B Gupta
- C Maurya
- D Chola

Answer: A

SSC CGL Free Mock Test (Latest Pattern)

Question 88

'Sardeshmukhi' in the Maratha regime was a:

- A Designation equivalent to Peshwa
- B A coin during the Maratha regime
- C Tax levied on revenue
- D Name given to Shivaji

Answer: C

Question 89

..... is the stigma of *Crocus Sativus* L.

- A Saffron
- B Turmeric
- C Artichoke
- D Ginger

Answer: A

Question 90

What is known as Hunter's Moon in the West, is called as in India.

- A Pousha Purnima
- B Magha Purnima
- C Chaitra Purnima
- D Kartik Purnima

Answer: D

SSC CGL Previous Papers (DOWNLOAD PDF)

Question 91

Which of the following states is NOT famous for the Bhut Jolokia pepper?

- A Odisha
- B Nagaland
- C Manipur
- D Assam

Answer: A

Question 92

Inertia is proportional to:

- A Mass
- B Weight

C Length

D Height

Answer: A

Question 93

Fulminology is the study of:

A Volcanic eruptions

B Lightening

C Natural gases

D Atmosphere

Answer: B

Daily Free SSC Practice Set

Question 94

The is a tax on production/manufacture of goods within the country.

A Sales tax

B Excise duty

C Service tax

D Customs duty

Answer: B

Question 95

Devanagari evolved from the script.

A Brahmi

B Inuktikut

C Hebrew

D Kana

Answer: A

Question 96

..... won a gold medal by setting a world record score in the men's skeet final event of the 8th Asian Shotgun Championship held in Kuwait in December 2018.

A Saeed Al Maktoum

B Angad Vir Singh Bajwa

C Vijay Kumar

D Jitu Rai

Answer: B

SSC CHSL Previous Papers (DOWNLOAD PDF)

Question 97

Which Indian state has the maximum number of sea ports?

- A Tamil Nadu
- B Maharashtra
- C Gujarat
- D Kamataka

Answer: B

Question 98

The Mughal empire reached its greatest extent under:

- A Jahangir
- B Shah Jahan
- C Akbar
- D Aurangzeb

Answer: D

Question 99

..... means the minimum lending rate which is determined by the Reserve Bank of India (RBI) and no bank is allowed to lend funds below this rate.

- A Cash reserve ratio
- B Base rate
- C Repo rate
- D Marginal cost

Answer: B

SSC CHSL Free Mock Test (Latest Pattern)

Question 100

This contemporary Indian dancer who merged Kathak and Kathakali with other dance forms has been awarded the Sangeet Natak Akademi Award in 1996 and Padma Shri in 2007. His/her name is:

- A Birju Maharaj
- B Jailal Misra
- C Astad Deboo

D Uday Shankar

Answer: C

General Science Notes (Download PDF)

Quant

Instructions

For the following questions answer them individually

Question 101

If $x - \frac{1}{x} = 2\sqrt{2}$, then $x^2 + \frac{1}{x^2}$ is equal to:

A 16

B 12

C 11

D 10

Answer: D

SSC GD Constable Previous Papers

Question 102

2.4 converted to percentage is.

A 0.24

B 24

C 240

D 2.4

Answer: C

Question 103

A can do a work in 30 days, B can do the same work in 48 days. After working alone for 20 days A left and B started working, how long will B take to complete the work?

A 24 days

B 28 days

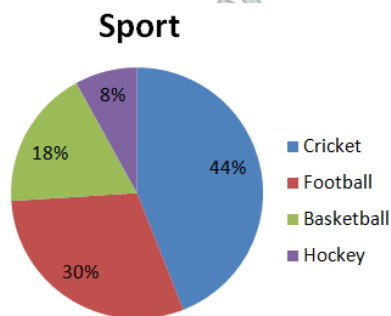
C 38 days

D 16 days

Answer: D

Question 104

The given pie-chart shows favourite sport of students of a school.



In the given pie-chart, if there were 1280 students in all, how many liked football?

- A 102
- B 550
- C 230
- D 384

Answer: D

SSC MTS Previous Papers (DOWNLOAD PDF)

Question 105

The sides of a triangle are in the ratio 3 : 2 : 4 and the perimeter is 72 cm. The sides are:

- A 24, 16, 32
- B 48, 24, 12
- C 36, 24, 12
- D 36, 18, 9

Answer: A

Question 106

What percent of 2.4 m is 3.2 cm?

- A 75%
- B 7.5%
- C $100\frac{1}{3}\%$
- D $13\frac{1}{3}\%$

Answer: D

Question 107

A shopkeeper buys a book for ₹2,500 and marks its price at 15% above cost. He allows a discount of ₹345. The discount percentage is:

- A 10
- B 12
- C 11
- D 13

Answer: B

SSC Stenographer Previous Papers (DOWNLOAD PDF)

Question 108

A sum at a Simple interest of 8% pa. becomes $\frac{7}{5}$ of itself in how many years?

- A 5
- B $2\frac{1}{2}$
- C $3\frac{1}{2}$
- D 2

Answer: A

Question 109

PA and PB are two tangents to a circle with centre O, from a point P outside the circle. A and B are points on the circle. If $\angle OAB = 38^\circ$, then $\angle APB$ is equal to:

- A 25°
- B 35°
- C 20°
- D 76°

Answer: D

Question 110

The largest number of four digits that is exactly divisible by 15, 21 and 30 is:

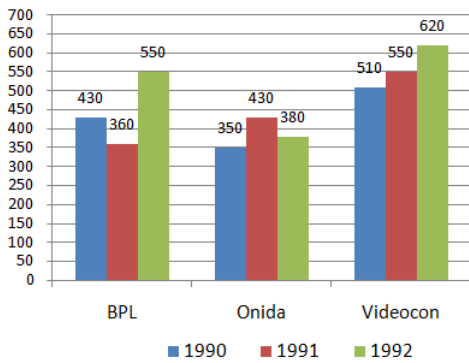
- A 9840
- B 9910
- C 9830
- D 9870

Answer: D

SSC Stenographer Previous Papers (Latest Pattern)

Question 111

The given bar chart, shows the sales (in thousands) for sets of televisions of three companies in three years.



In the given bar-chart, What is a difference between the average sales of televisions A and B for 3 years?

- A 78
- B 56
- C 104
- D 60

Answer: D

Question 112

Two pipes can fill a cistern in 72 and 90 minutes respectively. If both the pipes are left open how long will it take for the cistern to be half full?

- A 40 minutes
- B 24 minutes
- C 48 minutes
- D 20 minutes

Answer: D

Question 113

A watch was sold at a profit of 10%. Had it been sold at ₹77 more the profit percent would have been 12%. The cost price of the watch is:

- A ₹3,760
- B ₹3,850
- C ₹3,945
- D ₹3,900

Answer: B

SSC GD Constable Free Mock Test (Latest Pattern)

Question 114

Find the cost of carpeting a room which is 11 m long and 6 m broad by a carpet which is 60 cm broad at the rate of ₹112.50 per meter.

- A ₹12,375
- B ₹13,280
- C ₹11,695
- D ₹12,040

Answer: A

Question 115

A trader allows a discount of 8% on marked price. If the selling price is ₹667, the discount in rupees is:

- A ₹47
- B ₹54
- C ₹58
- D ₹43

Answer: C

Question 116

A field is 119 m × 18 m in dimension. A tank 17 m × 6 m × 3 m is dug out in the middle and the soil removed is evenly spread over the remaining part of the field. The increase in level on the remaining part of the field is:

- A 14 cm
- B 13 cm
- C 15 cm
- D 12 cm

Answer: C

SSC MTS Free Mock Test (Latest Pattern)

Question 117

Divide ₹8,288 between A, B and C such that the proportion of their shares is 5 : 7 : 9. The share of C is:

- A ₹2,032
- B ₹3,552
- C ₹3,872
- D ₹2,612

Answer: B

Question 118

If 15 men can do a piece of work in 14 days, how many men will be needed to do the work in 30 days?

- A 8
- B 10
- C 7
- D 9

Answer: C

Question 119

The interest on ₹24,000 in 2 years compounded annually when the rates are 8% p.a and 10% p.a for two successive years is:

- A ₹3,994
- B ₹4,512
- C ₹5,040
- D ₹5,866

Answer: B

SSC CGL Tier-2 Previous Papers PDF

Question 120

$15 - \{5 + 24 \div (3 \times 9 - 15)\}$ is equal to.

- A -2
- B $11\frac{1}{3}$
- C $6\frac{1}{4}$
- D 8

Answer: D

Question 121

The angle of elevation of a flying drone from a point on the ground is 60° . After flying for 5 seconds the angle of elevation drops to 30° . If the drone is flying horizontally at a constant height of $1000\sqrt{3}$ m, the distance travelled by the drone is:

- A 2000 m
- B 1000 m
- C 3000 m
- D 4000 m

Answer: A

Question 122

An oil merchant has 3 varieties of oil of volumes 432, 594 and 702 litres respectively. The number of cans of equal size that would be required to fill the oil separately is:

- A 13, 15, 17
- B 8, 11, 13
- C 8, 13, 15
- D 6, 9, 11

Answer: B

SSC Exam Free Videos (Youtube)

Question 123

The table below shows the admission and transfer in standards 1-3 of a school.

std	2015			2016	
	Existing	Admission	Transfer	Admission	Transfer
1	232	12	8	23	36
2	241	6	11	15	10
3	248	16	13	21	24

In the given table, in Standard 1, how many students were there at the end of year 2016?

- A 223
- B 228
- C 236
- D 232

Answer: A

Question 124

The average of squares of numbers 1 to 5 is:

- A 11
- B 5
- C 8
- D 9

Answer: A

Question 125

210102 can be divided exactly by:

- A 7
- B 3
- C 4

D 8

Answer: B

SSC Study Material

Question 126

A pipe can fill a tank in 4 hours and a leak at the bottom can empty that full tank in 6 hours. If after the tank is $\frac{1}{3}$ full, the leak is completely closed, how much time from beginning will it take for the tank to get filled completely?

A 12 hours

B 4 hours

C 9 hours

D $\frac{20}{3}$ hours

Answer: D

Question 127

In an examination, Shreya score 84 out of 90 in Mathematics, 45 out of 50 in Science, 23 out of 25 in Computer Science and 68 out of 80 in English. In which subject did Shreya score the highest percentage?

A Mathematics

B English

C Science

D Computer Science

Answer: A

Question 128

$(-4) \times (1020 \div 85 \times 3 - 22)$ is equal to.-

A -402

B -56

C 912

D 72

Answer: B

SSC Daily Practice Set

Question 129

The value of $\cos^2 45^\circ + \sin^2 30^\circ - \sin^2 60^\circ$ is equal to.

A $\frac{3}{2}$

- B $\frac{1}{2}$
- C 0
- D 1

Answer: C

Question 130

A, B and C are partners in a firm sharing profit in the ratio of 3 : 4 : 5. If they set aside 4% of the profits as emergency fund and shared the rest of the profit and B gets his share of profit as ₹1,81,400, the amount of profit set aside for emergency fund is:

- A ₹27,845
- B ₹18,140
- C ₹22,675
- D ₹24,500

Answer: C

Question 131

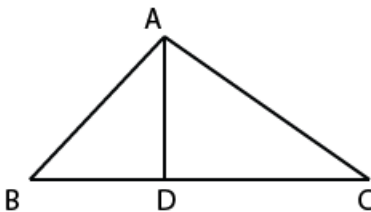
If $(x - 2)^3 + (x - 3)^3 + (x - 10)^3 = (x - 2)(x - 3)(3x - 30)$, then what is the value of x ?

- A 7
- B 5
- C 18
- D 3

Answer: B

SSC GK Free Tests

Question 132



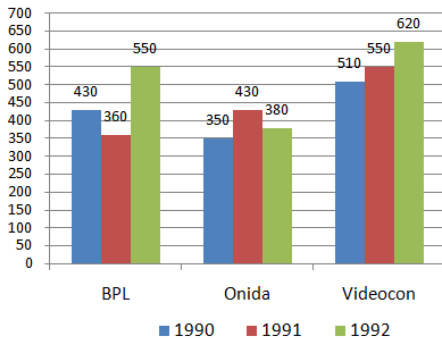
In the triangle given above $\angle ADB = 90^\circ$, $\angle ABC = 45^\circ$, $AD = 10$ cm, $AC = 20$ cm. The length of BC is:

- A 10 cm
- B 27.32 cm
- C 18.42 cm
- D 14.14 cm

Answer: B

Question 133

The given bar chart, shows the sales (in thousands) for sets of televisions of three companies in three years.



In the given bar-chart, if profit earned per television by C in 1992 was ₹825, the total profit earned was:

- A ₹51150 lakhs
- B ₹5115 lakhs
- C ₹511.5 lakhs
- D ₹51.15 lakhs

Answer: B

Question 134

A gardener planted 1936 saplings in a garden such that there were as many rows of saplings as the columns. The number of rows planted is:

- A 46
- B 44
- C 48
- D 42

Answer: B

Current Affairs Question and Answers (Download PDF)

Question 135

A boy walks 15 m in 7 seconds and then walks back in 5 seconds. His average speed (in m/s) is:

- A 6
- B 2.5
- C 3.25
- D 4

Answer: B

Question 136

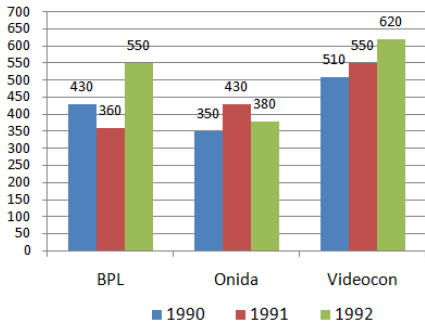
If $a^3 + b^3 = 432$ and $a + b = 12$, then $(a + b)^2 - 3ab$ is equal to:

- A 42
- B 52
- C 36
- D 38

Answer: C

Question 137

The given bar chart, shows the sales (in thousands) for sets of televisions of three companies in three years.



In the given bar-chart, what is the ratio of television sales between A in year 1992 and C in year 1991?

- A 1 : 1
- B 1 : 2
- C 2 : 1
- D 1 : 3

Answer: A

Daily and Monthly Current Affairs (Download PDF)

Question 138

A swimming pool is 40 m in length, 30 m in breadth and 2.2 m in depth. The cost of cementing its floor and the four sides at ₹25/m² is:

- A ₹43,980
- B ₹37,540
- C ₹34,260
- D ₹37,700

Answer: D

Question 139

The value of $\cot^2 A - \frac{1}{\sin^2 A}$ is equal to:

- A 0

- B -1
- C -2
- D 1

Answer: B

Question 140

A river is 3 m deep and 36 m wide which flows at the rate of 5 km/h in to the sea. The volume of water that runs into the sea per minute is:

- A 8300 m³
- B 9000 m³
- C 7600 m³
- D 6400 m³

Answer: B

285 SSC Mocks - Just RS. 249

Question 141

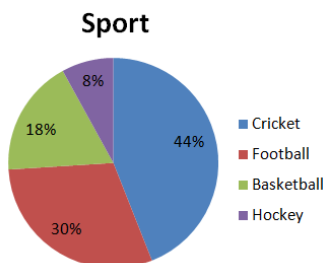
A part of the journey is covered in 31.5 minutes at 80 km/h and the remaining part in 16 minutes at 75 km/h. The total distance of the journey is:

- A 45 km
- B 38 km
- C 62 km
- D 54 km

Answer: C

Question 142

The given pie-chart shows favourite sport of students of a school.



In the given pie-chart, what is the difference in percentage between liking for football and basketball?

- A 10
- B 8
- C 13
- D 12

Answer: D

Question 143

A girl 1.2 m tall can just see the sun over a 3.62 m tall wall which is 2.42 m away from her. The angle of elevation of the sun is:

- A 60°
- B 30°
- C 90°
- D 45°

Answer: D

SSC GK Questions

Question 144

The table below shows the admissions and transfers in standards 1-3 of a school.

std	2015			2016	
	Existing	Admission	Transfer	Admission	Transfer
1	232	12	8	23	36
2	241	6	11	15	10
3	248	16	13	21	24

In the given table, what was the total strength in Standards 1-3 at the end of 2015?

- A 723
- B 721
- C 710
- D 704

Answer: A

Question 145

ABCD is a cyclic quadrilateral such that AB is a diameter of the circle circumscribing it and angle ADC = 144° . Then angle BAC is equal to: $(\pi = \frac{22}{7})$

- A 60°
- B 150°
- C 54°
- D 40°

Answer: C

Question 146

Which least number should be added to 1000 so that the number obtained is exactly divisible by 37?

- A 1

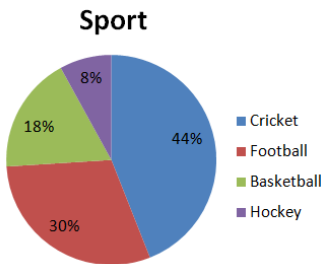
- B 25
- C 36
- D 13

Answer: C

SSC Free Preparation App

Question 147

The given pie-chart shows favourite sport of students of a school.



In the given pie-chart, if the school strength was 2500, how many liked cricket more than hockey?

- A 1075
- B 504
- C 900
- D 750

Answer: C

Question 148

A rectangular solid is 20 cm long and 12 cm wide. If its volume is 2160 cm^3 , the height is:

- A 11 cm
- B 10 cm
- C 12 cm
- D 9 cm

Answer: D

Question 149

The table below shows the admission and transfer in standards 1-3 of a school.

std	2015			2016	
	Existing	Admission	Transfer	Admission	Transfer
1	232	12	8	23	36
2	241	6	11	15	10
3	248	16	13	21	24

In the given table, what was the difference between admission and transfer in standard 3 in year 2016?

- A 3
- B 9

C 8

D 5

Answer: A

Free SSC Study Material (18,000 Solved Questions)

Question 150

A train 100 m long running at uniform speed crosses a station which is 500 m long in 25 seconds. How long will it take for the train to pass a station that is 380 m long?

A 21 seconds

B 20 seconds

C 19 seconds

D 22 seconds

Answer: B

SSC CPO Free Mock Test (Latest Pattern)

English

Instructions

For the following questions answer them individually

Question 151

Select the most appropriate option to substitute the underlined segment in the given sentence. If there is no need to substitute it, select No substitution required.

A third of us are feeling compelled to check our phones in the middle of the night.

A A third among us feeling compelled to check our phones

B A third of us feel compelled to check our phones

C No substitution required

D A third of us feel compelled checking our phones

Answer: B

SSC CPO Previous Papers

Question 152

Select the word, which means the same as the group of words given.

A harsh chaotic mixture of sounds

A consonance

B dissonance

C cacophony

D euphony

Answer: C

Question 153

Identify the segment in the sentence, which contains the grammatical error.

Scientists have found that life was creeping and crawling about the Earth 1.5 billion years early than previously thought.

A previously thought

B 1.5 billion years early than

C Scientists have found

D about the Earth

Answer: B

Question 154

Select the wrongly spelt word.

A horrible

B heiress

C hospitallity

D hostility

Answer: C

1500 + Free Must Solved SSC Questions (With Solutions)

Question 155

Select the synonym of the given word.

DETRACTORS

A devotees

B reviewers

C critics

D admirers

Answer: C

Question 156

Select the synonym of the given word.

IMMINENT

A important

B forthcoming

C immature

D truthful

Answer: B

Instructions

Read the following passage and answer the questions given after it.

Passage:

We often worry about lying awake in the middle of the night - but it could be good for you. A growing body of evidence from both science and history suggests that the eight-hour sleep may be unnatural. In the early 1990s, psychiatrist Thomas Wehr conducted an experiment in which a group of people were plunged into darkness for 14 hours every day for a month. It took some time for their sleep to regulate but by the fourth week the subjects had settled into a very distinct sleeping pattern. They slept first for four hours, then woke for one or two hours before falling into a second four-hour sleep. Though sleep scientists were impressed by the study, among the general public the idea that we must sleep for eight consecutive hours persists.

In 2001, historian Roger Ekirch of Virginia Tech published a seminal paper, drawn from 16 years of research, revealing a wealth of historical evidence that humans used to sleep in two distinct chunks. Roger Ekirch says a 1595 engraving by Jan Saenredam is evidence of activity at night. His book *At Day's Close: Night in Times Past*, published four years later, unearthed more than 500 references to a segmented sleeping pattern - in diaries, court records, medical books and literature, from Homer's *Odyssey* to an anthropological account of modern tribes in Nigeria.

Much like the experience of Wehr's subjects, these references describe a first sleep which began about two hours after dusk, followed by waking period of one or two hours and then a second sleep. "It's not just the number of references - it is the way they refer to it, as if it was common knowledge," Ekirch says. During this waking period people were quite active. They often got up, went to the toilet or smoked tobacco and some even visited neighbors. Most people stayed in bed, read, wrote and often prayed. Countless prayer manuals from the late 15th century offered special prayers for the hours in between sleeps. Ekirch found that references to the first and second sleep started to disappear during the late 17th Century. This started among the urban upper classes in northern Europe and over the course of the next 200 years filtered down to the rest of Western society. By the 1920s the idea of a first and second sleep had receded entirely from our social consciousness. He attributes the initial shift to improvements in street lighting, domestic lighting and a surge in coffee houses - which were sometimes open all night. As the night became a place for legitimate activity and as that activity increased, the length of time people could dedicate to rest dwindled.

Question 157

The above passage that an eight-hour sleep is natural.

- A confirms the myth
- B elaborates the myth
- C promotes the myth
- D examines the myth

Answer: D

SSC CGL Free Mock Test (Latest Pattern)

Question 158

What did the experiment conducted by Thomas Wehr prove?

- A It brought into question that sleeping for four consecutive hours is necessary.
- B It proved sleeping for eight consecutive hours is not a norm.
- C It established that when the nights are longer, people slept in two distinct chunks.
- D It proved that all people slept in two distinct chunks of four hours.

Answer: B

Question 159

Roger Ekirch indicated that

- A** sleeping for eight consecutive hours is a modern standard for sleep.
- B** a segmented sleeping pattern was an established common habit in nations with long winters.
- C** a segmented sleeping pattern was a historically established common old habit.
- D** the practice of sleeping for eight consecutive hours was popularized by epics

Answer: C

Question 160

Which of the following options is NOT true with reference to the segmented sleeping pattern?

- A** People were physically active.
- B** People were socially active.
- C** People prayed actively.
- D** People visited all-night coffee shops.

Answer: D

SSC CGL Previous Papers (DOWNLOAD PDF)

Question 161

What caused the idea of a first and second sleep to entirely recede from our social consciousness?

- A** Industrialization and introduction of night shifts
- B** All-night coffee shops
- C** A group of rich people defying sleep
- D** An active night life facilitated by artificial lighting

Answer: D

Instructions

For the following questions answer them individually

Question 162

Select the word, which means the same as the group of words given.

the hard remains of a prehistoric animal or plant that are found inside a rock.

- A** fossil
- B** ruins
- C** relics
- D** vestiges

Answer: A

Question 163

Select the most appropriate option to substitute the underlined segment in the given sentence. If there is no need to substitute it, select No substitution required.

Creatures began moving properly around 570 million years ago shortly before the Cambrian explosion sparked the first vertebrates.

- A the Cambrian explosion when sparked the first vertebrates.
- B No substitution required
- C the Cambrian explosion whom sparked the first vertebrates.
- D the Cambrian explosion who sparked the first vertebrates.

Answer: B

Daily Free SSC Practice Set

Question 164

Select the most appropriate option to substitute the underlined segment in the given sentence. If there is no need to substitute it, select No substitution required.

A study has uncovered a previously overlooked law of natural selection based on "survival of the slacker", that is, spend all day lazing about could be good for human evolution.

- A No substitution required
- B spending all day lazing about must be good for human evolution
- C spend all day lazing about will be good for human evolution
- D spending all day lazing about could be good for human evolution

Answer: D

Question 165

Select the most appropriate meaning of the underlined idiom in the given sentence.

When the mixer would not work Naren's mother said, "If it's not one thing , it's another.How will I manage?"

- A when one thing goes wrong, then another, and another
- B when we entertain one guest, then there are many more coming
- C when we know a cause, then there isn't another to be looked for
- D when a machine is not functional, it makes others also malfunction

Answer: A

Question 166

Select the most appropriate meaning of the underlined idiom in the given sentence.

Sandhya was excited about getting her new posting but I told her "Dont count your chickens before they hatch".

- A do not count on something that is not going to happen

- B do not wish for something that has not yet happened
- C do not count on a good thing that has not yet happened
- D do not expect something good to happen

Answer: C

SSC CHSL Previous Papers (DOWNLOAD PDF)

Question 167

Identify the segment in the sentence, which contains the grammatical error.

More than 25% people admits they have not sent or received a hand-written letter in the past decade.

- A a hand-written letter
- B More than 25% people admits
- C they have not sent or received
- D in the past decade

Answer: B

Question 168

Select the most appropriate meaning of the underlined idiom in the given sentence.

Anil and Suresh are just finding their feet in the new venture.

- A beginning to understand the work and feeling confident
- B getting comfortable and getting a good salary
- C buying and using comfortable foot wear
- D making people fall at their feet, accepting defeat

Answer: A

Question 169

Identify the segment in the sentence, which contains the grammatical error.

Security firms would get prosecuted for a breach of their duty if they do not introduced adequate procedures to protect children from harm.

- A would get prosecuted
- B for a breach of their duty
- C to protect children
- D do not introduced

Answer: D

SSC CHSL Free Mock Test (Latest Pattern)

Question 170

Select the antonym of the given word.
MUDDLE

- A refuse
- B order
- C refute
- D spoil

Answer: B

Question 171

Select the synonym of the given word.
CLINCHED

- A bounded
- B finalized
- C devoted
- D argued

Answer: B

Question 172

Select the most appropriate meaning of the underlined idiom in the given sentence.
The politician began his speech by saying, "Lend me your ears".

- A to politely ask for someone's hearing-aid
- B to politely ask for someone's speakers
- C to politely ask for someone's full attention
- D to politely ask for someone's headphones

Answer: C

General Science Notes (Download PDF)

Question 173

Select the most appropriate words to fill in the blanks.

Teaching is so much more than in front of a whiteboard as one of the most important elements of teaching is relationships with students.

- A standing; building
- B waiting; building
- C waiting; enabling
- D standing; enabling

Answer: A

Question 174

Select the most appropriate words to fill in the blanks.

Although many western cultures are moving towards more less hierarchical organizations, the new research suggests that power structures and basic values of charity and fraternity are the cornerstones of successful societies.

- A organized; radical
- B substantial; informal
- C liberal; traditional
- D liberal; radical

Answer: C

Question 175

Select the wrongly spelt word.

- A reinforcement
- B remembrance
- C reimburssement
- D reflection

Answer: C

SSC GD Constable Previous Papers

Question 176

Select the antonym of the given word.

COMPLACENT

- A conceited
- B concerned
- C contentious
- D contended

Answer: B

Question 177

Select the antonym of the given word

LAUNCH

- A withdraw
- B dinner
- C release
- D brake

Answer: A

Question 178

Select the word, which means the same as the group of words given.
to show or state that someone or something is not guilty of something

- A escape
- B pardon
- C charge
- D vindicate

Answer: D

SSC MTS Previous Papers (DOWNLOAD PDF)

Question 179

Select the synonym of the given word.
ELUSIVE

- A distorted
- B wrong
- C intangible
- D refined

Answer: C

Question 180

Select the most appropriate meaning of the underlined idiom in the given sentence.
“Get down to brass tacks now”, ordered the Team Leader, when he found that the targets were nowhere near completion.

- A start taking up the most important facts of a situation
- B become angry about something that is not done
- C come back to the tracks and start again
- D examine the thumb tacks used to fix a notice

Answer: A

Question 181

Select the most appropriate words to fill in the blanks.
Advocates say the idea of a basic income eliminates poverty traps and income while the individual and reducing paperwork.

- A redistributes; empowering
- B earned; helping
- C earns; eliminating

D distributes; empowers

Answer: A

SSC Stenographer Previous Papers (DOWNLOAD PDF)

Question 182

Select the wrongly spelt word.

- A contraction
- B contextual
- C concievable
- D commitment

Answer: C

Question 183

Identify the segment in the sentence, which contains the grammatical error.
Last year the UK saw it's first child diagnosed with internet addiction.

- A Last year
- B the UK saw
- C it's first child
- D diagnosed with

Answer: C

Question 184

Select the word, which means the same as the group of words given.
the science and art of growing fruits, vegetables, flowers, or ornamental plants

- A agriculture
- B horticulture
- C viniculture
- D sericulture

Answer: B

SSC Stenographer Previous Papers (Latest Pattern)

Question 185

Identify the segment in the sentence, which contains the grammatical error.

Tesla designed system for sending electricity over the air through a series of enormous towers.

- A for sending electricity
- B Tesla designed system

C through a series of enormous towers

D over the air

Answer: B

Question 186

Select the synonym of the given word.

REQUISITE

A dominant

B dynamic

C critical

D obligatory

Answer: D

Question 187

Select the most appropriate words to fill in the blanks.

All societies are held together by seven universal moral rules, which include to superiors and the property of others.

A deferring; respecting

B deferring; guarding

C following; respecting

D conforming; guarding

Answer: A

SSC GD Constable Free Mock Test (Latest Pattern)

Question 188

Select the wrongly spelt word.

A Inquisitive

B Inherent

C Ininstitutional

D Invitation

Answer: C

Question 189

Select the most appropriate words to fill in the blanks.

The idea of a basic income as a replacement for means-tested payments has its share of supporters on both the left and the right of the political

A extra; support

- B goodness; zone
- C free; range
- D welfare; spectrum

Answer: D

Question 190

Select the most appropriate option to substitute the underlined segment in the given sentence. If there is no need to substitute it, select No substitution required.

Doing short bursts of high intensity exercise can be most effective to weight loss than moderate workouts.

- A more effective to weight loss than
- B No substitution required
- C most effective for weight loss than
- D more effective for weight loss than

Answer: D

SSC MTS Free Mock Test (Latest Pattern)

Instructions

In the following passage some words have been deleted. Fill in the blanks with the help of the alternatives given. Select the most appropriate option for each number.

Passage:

Screen time is an inescapable reality of modern childhood, with kids of every age (1) hours upon hours in front of iPads, smartphones and televisions. That's not always a bad thing: Educational apps and TV shows (2) great ways for children to sharpen their developing brains and (3) their communication skills-not to mention the break these (4) provide to harried parents. But tread carefully: A number of troubling studies connect delayed cognitive (5) in kids with extended exposure to electronic media.

Question 191

Select the most appropriate option to fill in blank No.1.

- A complying
- B spending
- C earning
- D cheating

Answer: B

Question 192

Select the most appropriate option to fill in blank No.2.

- A are
- B is
- C were

D have been

Answer: A

Question 193

Select the most appropriate option to fill in blank No.3.

A improve

B bumish

C dull

D freshen

Answer: A

SSC CGL Tier-2 Previous Papers PDF

Question 194

Select the most appropriate option to fill in blank No.4.

A vessels

B gadgets

C utensils

D products

Answer: B

Question 195

Select the most appropriate option to fill in blank No.5.

A increment

B improvement

C progress

D change

Answer: C

Instructions

For the following questions answer them individually

Question 196

Select the word, which means the same as the group of words given.
a company or person that makes or sells sweets or chocolate

A confectioner

B vendor

C chef

D wholesaler

Answer: A

SSC Exam Free Videos (Youtube)

Question 197

Select the wrongly spelt word.

A apartheid

B appearance

C appropriate

D apparent

Answer: C

Question 198

Select the antonym of the given word

EXPANSION

A complaint

B constraint

C contraction

D constriction

Answer: C

Question 199

Select the antonym of the given word.

EVASIVE

A frank

B abusive

C opaque

D slippery

Answer: A

SSC Study Material

Question 200

Select the most appropriate option to substitute the underlined segment in the given sentence. If there is no need to substitute it, select No substitution required.

The World Health Organization were classified Internet gaming as an official mental health disorder.

A No substitution required

- B** The World Health Organization classify Internet gaming
- C** The World Health Organization has classified Internet gaming
- D** The World Health Organization classifying Internet gaming

Answer: C

SSC Daily Practice Set

Free SSC Study Material (18,000 Solved Questions)

SSC CPO Free Mock Test (Latest Pattern)

SSC CPO Previous Papers

1500 + Free Must Solved SSC Questions (With Solutions)

SSC CGL Free Mock Test (Latest Pattern)

SSC CGL Previous Papers (DOWNLOAD PDF)

Daily Free SSC Practice Set

SSC CHSL Previous Papers (DOWNLOAD PDF)

SSC CHSL Free Mock Test (Latest Pattern)

General Science Notes (Download PDF)

SSC GD Constable Previous Papers

SSC MTS Previous Papers (DOWNLOAD PDF)

SSC Stenographer Previous Papers (DOWNLOAD PDF)

SSC Stenographer Previous Papers (Latest Pattern)

SSC GD Constable Free Mock Test (Latest Pattern)

SSC MTS Free Mock Test (Latest Pattern)

SSC CGL Tier-2 Previous Papers PDF

SSC Exam Free Videos (Youtube)

SSC Study Material

SSC Daily Practice Set

SSC GK Free Tests

Current Affairs Question and Answers (Download PDF)

Daily and Monthly Current Affairs (Download PDF)

285 SSC Mocks - Just RS. 249

SSC GK Questions

SSC Free Preparation App