



SSC JE Mechanical Engineering 2015

All rights reserved. No part of this publication may be reproduced, distributed, or transmitted in any form or by any means, electronic, mechanical, photocopying, recording or otherwise, or stored in any retrieval system of any nature without the permission of cracku.in, application for which shall be made to support@cracku.in

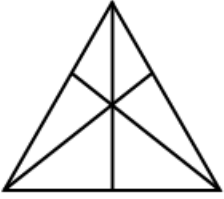
General Intelligence and Reasoning

Instructions

For the following questions answer them individually

Question 1

How many triangles are there in the figure?

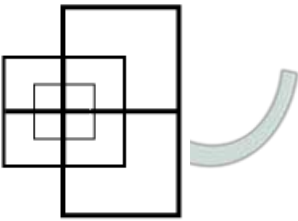


- A 7
- B 10
- C 16
- D 20

Answer: C

Question 2

Find the number of minimum straight lines required to make figure

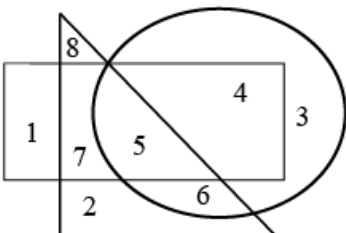


- A 13
- B 17
- C 15
- D 19

Answer: A

Question 3

Write the number of space enclosed by rectangle and circle but not by triangle



- A 3
- B 2

C 1

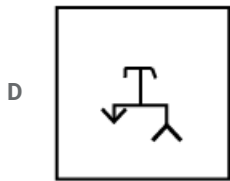
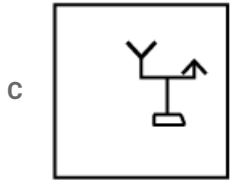
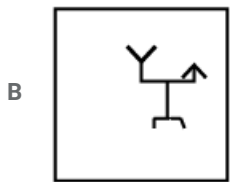
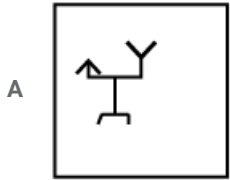
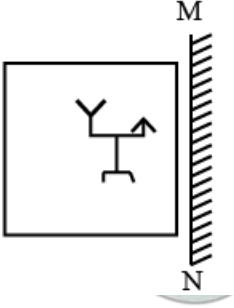
D 4

Answer: D

Question 4

If a mirror is placed on the line MN, then which of the answer figures is the right image of the given figure?

Question figure



Answer: A

Question 5

A word is represented by only one set of numbers as given in any one of the alternatives. The sets of numbers given in the alternatives are represented by two classes of alphabets as in two matrices given below. The columns and rows of Matrix I are numbered from 0 to 4 and that of Matrix II are numbered from 5 to 9. A letter from these matrices can be represented first by its row and next by its column, e.g. 'M' can be represented by 01, 14 etc., and 'S' can be represented by 58, 77 etc. Similarly, you have to identify the set the word 'ROHAN'.

Matrix I					
	0	1	2	3	4
0	H	M	X	W	K
1	N	R	N	Y	M
2	K	V	H	P	W
3	Y	Z	R	M	N
4	W	V	H	J	P

Matrix II					
	5	6	7	8	9
5	A	D	E	S	B
6	T	U	O	G	Q
7	O	Q	S	D	A
8	S	E	U	E	D
9	Q	B	A	T	O

- A 11, 57, 00, 55, 12
- B 11, 75, 00, 55, 10
- C 32, 75, 21, 55, 10
- D 32, 67, 41, 55, 12

Answer: B

Explanation:

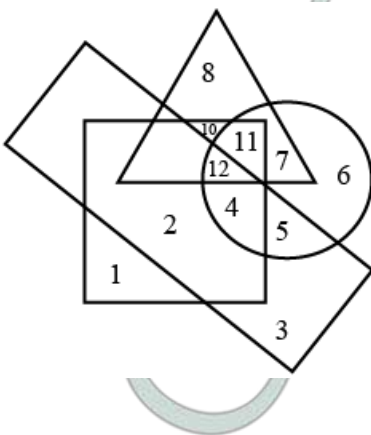
- R = 11, 32,
- O = 75, 67, 99
- H = 00, 22,
- A = 55, 97, 79
- N = 10, 12, 34,

From option B,
ROHAN = 11, 75, 00, 55, 10

∴ The correct answer is option B.

Question 6

In the given figure, the circle stands for intelligent, square for hardworking, triangle for Post graduate and the rectangle for loyal employees. Study the figure and answer the following questions. Employees who are intelligent, hardworking and loyal but not Post graduate are represented by



- A 11
- B 5
- C 4
- D 3

Answer: C

Instructions

In following questions one/two statement(s) are given are followed by two conclusion/assumption, I and II. You have to consider the statements to be true even if they seem to be at variance from commonly known facts. You have to decide which of the given conclusion/assumptions, if any, follows from the given statements.

Question 7

Statements : All students are girls.

Some students are not talented.

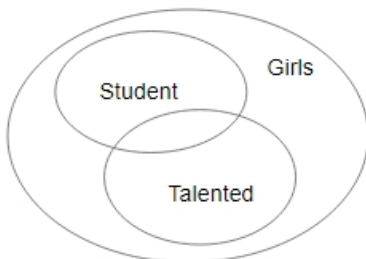
Conclusions : I. No students is talented

II. Some girls are talented

- A Only I follows
- B Only II follows
- C Both I and II follows
- D Neither I nor II follows

Answer: D

Explanation:



Neither I nor II follows.

∴ the correct answer is option D.

Question 8

Statements : 1. Tigers do not fly

2. Hens do not fly.

Conclusions : I. Tigers are birds

II. All birds cannot fly

- A Only I follows
- B Only II follows
- C Both I and II follows
- D Neither I nor II follows

Answer: D

Explanation:

From the both statements,

Neither I nor II follows.

∴ The correct answer is option D.

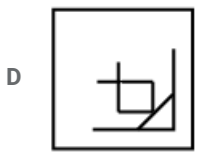
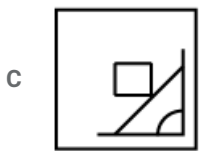
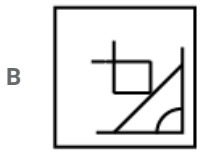
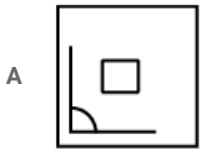

Instructions

For the following questions answer them individually

Question 9

Which answer figure will complete the pattern in the question figure?

Question figure

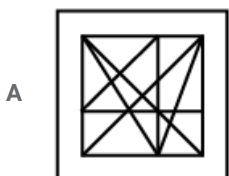



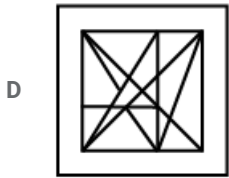
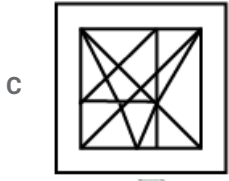
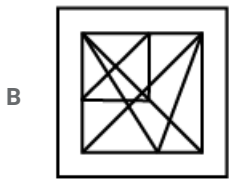
Answer: B

Question 10

From the given answer figures, select the one in which the question figure is hidden/embedded.

Question figure



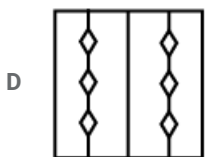
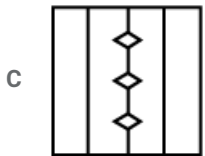
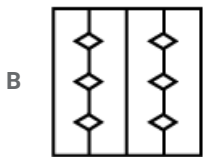
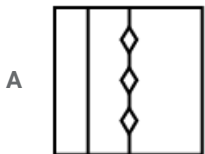
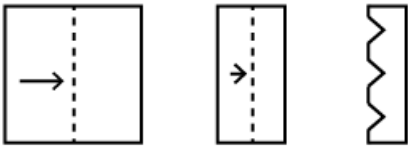


Answer: A

Question 11

A piece of paper is folded and cut as shown below in the question figures. From the given answer figures, indicate how it will appear when opened.

Question figures



Answer: B

Question 12

Ramu's mother has three sons. The eldest one is called onekari, the second one is called twokari. Then the third son's name is

A Teenkari

B Sandu

C Ramu

D Nokari

Answer: C

Explanation:

Third son's name is Ramu.

Question 13

Ashok is heavier than Gopal. Mahesh is lighter than Jayesh. Prashant is heavier than Jayesh but lighter than Gopal. Who among them is heaviest ?

A Gopal

B Ashok

C Prashant

D mahesh

Answer: B

Explanation:

Ashok is heavier than Gopal so,

Ashok > Gopal

Mahesh is lighter than Jayesh so,

Jayesh > Mahesh

Prashant is heavier than Jayesh but lighter than Gopal so,

Gopal > Prashant > Jayesh

by the combination of all statements,

Ashok > Gopal > Prashant > Jayesh > Mahesh

So, Ashok is heaviest.

Question 14

From the given alternative words, select the word which cannot be formed using the letters of the given word :

KILOMETERS

A OIL

B MEET

C TREES

D STREET

Answer: D

Explanation:

'STREET' cannot be formed using the letters of the 'KILOMETERS'.

Question 15

In a certain code language, if the word 'RHOMBUS' is coded as TJQODWU, then how is the word 'RECTANGLE' in that language ?

- A TGEVCPIMG
- B TGEVCPING
- C TGEWDPING
- D TGFWEPIING

Answer: B

Explanation:

'RHOMBUS' is coded as,

- R + 2 = T
- H + 2 = J
- O + 2 = Q
- M + 2 = O
- B + 2 = D
- U + 2 = W
- S + 2 = U

Similarly,

- R + 2 = T
- E + 2 = G
- C + 2 = E
- T + 2 = V
- A + 2 = C
- N + 2 = P
- G + 2 = I
- L + 2 = N
- E + 2 = G

'RECTANGLE' is coded as 'TGEVCPING'.

∴ The correct answer is option B.

Question 16

If in a certain code 'Education' is written as 3 6 5 7 9 8 2 1 4 then how 'Conduct' can be written?

- A 7 1 4 6 5 7 8
- B 6 5 4 7 8 7 1
- C 1 4 5 8 7 7 6
- D 6 4 8 5 7 6 7

Answer: A

Explanation:

- E = 3
- D = 6
- U = 5
- C = 7
- A = 9
- T = 8
- I = 2
- O = 1
- N = 4

'Conduct' can be written as '7146578'.

Question 17

If $7x = 8k$ and $5y = 6k$ then the value of ratio x is to y is

A 20 : 21

B 21 : 20

C 35 : 48

D 48 : 35

Answer: A

Explanation:

$$7x = 8k$$

$$x = 8k/7$$

$$\text{and } 5y = 6k$$

$$y = 6k/5$$

$$x : y = \frac{8k}{7} : \frac{6k}{5} = 20 : 21$$

Question 18

If $44 + 12 = 30$, $77 + 14 = 61$, $84 + 16 = 66$ then what should be for $44 + 22 = ?$

A 28

B 20

C 32

D 24

Answer: B

Explanation:

$$44 - (12 + 2) = 30$$

$$77 - (14 + 2) = 61$$

$$84 - (16 + 2) = 66$$

Similarly,

$$44 - (22 + 2) = 20$$

∴ The correct answer is option B.

Question 19

Select the set of symbols which can be fitted correctly in the equation,

$$8 \underline{\quad} 4 \underline{\quad} 2 \underline{\quad} 6 \underline{\quad} 3 = 32$$

A $\times, -, +, \div$

B $+, \times, \div, -$

C $+, \div, \times, -$

D $-, \times, \div, +$

Answer: A

Explanation:

From option A),

LHS

$$8 \times 4 - 2 + 6 \div 3$$

$$32 - 2 + 2$$

$$= 32$$

RHS

∴ Option A is the correct answer

Instructions

In the following question, which one of the given responses would be a meaningful order of the following?

Question 20

1. Village
2. State
3. Nation
4. District

- A 1, 2, 4, 3
B 1, 4, 2, 3
C 2, 3, 1, 4
D 4, 2, 3, 1

Answer: B

Explanation:

Village are comes under the District, District comes under the State and State comes under the Nation.

Question 21

1. Branches
2. Root
3. Trunk
4. Leaf
5. Flower

- A 4, 1, 3, 2, 5
B 2, 3, 1, 4, 5
C 1, 2, 3, 4, 5
D 4, 3, 1, 2, 5

Answer: B

Explanation:

The order of the parts of a tree - Root, Trunk, Branch, Leaf, Flower

∴ Option B is the correct answer.

Question 22

1. Adulthood
2. Babyhood
3. Childhood
4. Infancy

- A 4, 3, 2, 1
B 4, 2, 3, 1
C 4, 1, 2, 3

D 4, 3, 1, 2

Answer: B

Explanation:

The first stage of every person is infancy then babyhood after then childhood and the next stage adulthood so order, Infancy, babyhood, childhood, adulthood

∴ Option B is the correct answer.

Instructions

In the following questions, a series is given with one term missing. Choose the correct alternative from the given ones that will complete the series.

Question 23

CDDP DEER EFFT FGGV GHX ?

A ZIIH

B HIIZ

C HJJY

D HIJZ

Answer: B

Explanation:

In the series, every letter increased by 1 in each term. So,

Next term = HIIZ

∴ The correct answer is option B.

Question 24

l m n m n o p n o p q r ?

A pqrst

B lmnop

C opqrs

D hpqrs

Answer: C

Explanation:

The series follows pattern as,

lmn/mnop/nopqr/opqrst

∴ The correct answer is option C.

Question 25

R I A T N I E ?

A A

B B

C C

D D

Answer: B

Explanation:

In the alphabet 'R' is the 9 letter from the reverse order.

I is the 9th letter from R

A is the 8th letter from I

T is the 7th letter from A

N is the 6th letter from T

I is the 5th letter from N

E is the 4th letter from I

So,

The 3rd letter from E is B.

∴ The correct answer is option B.

Question 26

$\left(\frac{1}{8}\right), \left(\frac{1}{4}\right), \left(\frac{1}{2}\right), 1, ?, 4$

A $\left(\frac{3}{8}\right)$

B $\left(\frac{2}{8}\right)$

C 2

D 6

Answer: C

Explanation:

The series follows pattern as,

$$\frac{1}{8} \times 2 = \frac{1}{4},$$

$$\frac{1}{4} \times 2 = \frac{1}{2},$$

$$\frac{1}{2} \times 2 = 1,$$

$$1 \times 2 = 2,$$

$$2 \times 2 = 4$$

Missing term = 2

Question 27

11, 12, 16, 25, ?

A 45

B 41

C 43

D 49

Answer: B

Explanation:

$$11 + 1^2 = 12$$

$$12 + 2^2 = 16$$

$$16 + 3^2 = 25$$

$$25 + 4^2 = 41$$

Question 28

3, 9, 21, 45, ?

- A 54
- B 78
- C 87
- D 93

Answer: D

Explanation:

the series follows pattern as,

$$0 + 3 = 3$$

$$3 + 6 = 9$$

$$9 + 12 = 21$$

$$21 + 24 = 45$$

$$45 + 48 = 93$$

∴ Option D is the correct answer.

Instructions

In the following questions, select the missing number from the given responses.

Question 29

13	15	12
2	4	5
4	5	8
30	65	?

- A 64
- B 69
- C 65
- D 68

Answer: D

Explanation:

$$13 \times 2 + 4 = 30$$

$$15 \times 4 + 5 = 65$$

$$12 \times 5 + 8 = 68$$

Question 30

20	30	12
3	4	8
80	?	116

- A 120
- B 60

- C 100
D 140

Answer: D

Explanation:

$$20 \times 3 + 20 = 80$$

$$12 \times 8 + 20 = 116$$

$$30 \times 4 + 20 = 140$$

Instructions

For the following questions answer them individually

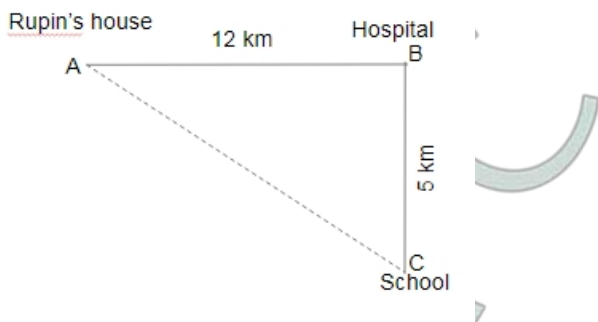
Question 31

Hospital is 12 km towards east of Rupin's house. His school is 5 km towards south of Hospital. What is the shortest distance between Rupin's house and school?

- A 16 km
B 17 km
C 12 km
D 13 km

Answer: D

Explanation:



From the Pythagoras,

$$AC^2 = AB^2 + BC^2$$

$$AC^2 = (12)^2 + (5)^2$$

$$AC^2 = 169$$

$$AC = 13 \text{ km}$$

Shortest distance = 13 km.

Question 32

Two cars started from a particular spot. The car A ran straight at the speed of 30 kmph for 2 hours north and then took a right turn. It ran 40 km and again turned right. It stopped after east at the speed of 20 kmph for 2 hours and turned left. It ran for 100 km and then stopped. How far were there two cars from each other when both of them stopped at last ?

- A 17 km
B 18 km
C 19 km
D 20 km

Answer: D

Instructions

In the following questions, select the related word/ letters/number from the given alternatives.

Question 33

CHAIR : FURNITURE :: FORK : ?

- A SPOON
- B CUTLERY
- C CROCKERY
- D FOOD

Answer: B

Explanation:

Chair comes under the furniture similarly fork comes under the cutlery.

Question 34

Compass : Ship :: Vastu : ?

- A Building
- B Flat
- C Home
- D Land

Answer: C

Explanation:

Compass used to find the correct direction of ships similarly vastu used to to find the correct direction of **home**.

Question 35

BOOK : LIBRARY :: ? : FILE

- A COMPUTER
- B DATA
- C FOLDER
- D BYTES

Answer: B

Explanation:

Books are available in the library similarly **data** is available in file.

Question 36

q : d :: b : ?

- A p
- B d

C q

D b

Answer: A

Explanation:

Water image of 'q' is 'd'.

Similarly,

Water image of 'b' is 'p'.

∴ The correct answer is option A.

Question 37

ABB : EGJ :: FHL : ?

A BDH

B JMT

C FHH

D JJL

Answer: B

Explanation:

In ABB : EGJ,

A + 4 → E

B + 5 → G

B + 6 → H

Similarly,

In FHL : ?,

F + 4 → J

H + 5 → M

L + 6 → T

Missing term - JMT

Question 38

EV : KP :: TG : ?

A ZA

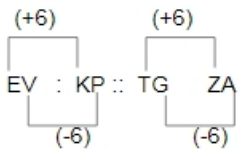
B AZ

C ZZ

D AA

Answer: A

Explanation:



Missing term = ZA

Question 39

21 : 65 :: 31 : ?

- A 78
- B 80
- C 85
- D 95

Answer: D

Explanation:

$$21 \times 3 + 2 = 65$$

$$31 \times 3 + 2 = 95$$

∴ Option D is the correct answer.

Question 40

17 : 102 :: 23 : ?

- A 112
- B 138
- C 216
- D 413

Answer: B

Explanation:

$$17 \times 6 = 102$$

Similarly,

$$23 \times 6 = 138$$

Question 41

25 : 36 :: ?

- A 9 : 25
- B 16 : 25
- C 25 : 49
- D 81 : 121

Answer: B

Explanation:

$$5^2 = 25$$

$$(5 + 1)^2 = 6^2 = 36$$

Similarly,

$$4^2 = 16$$

$$(4 + 1)^2 = 5^2 = 25$$

∴ Option B is the correct answer.

Instructions

In the following questions, find the odd word/number pair from the given alternatives.

Question 42

- A stare
- B glance
- C look
- D hug

Answer: D

Explanation:

Except 'hug' remaining all words mean to look something.

∴ The correct answer is option D.

Question 43

- A Analogy
- B Reasoning
- C Decoding
- D Cycling

Answer: D

Explanation:

Except **cycling** remaining all are subjects.

Question 44

- A Nephrology
- B Astrology
- C Pathology
- D Entomology

Answer: B

Explanation:

Except "astrology" remaining all are related to study of animals.

∴ The correct answer is option B.

Question 45

- A accdff
- B prrsu

C mnnqq

D egg hij

Answer: C

Explanation:

Except option C, all other options have difference of the 1 letter in between first and 2nd letter.

∴ The correct answer is option C.

Question 46

A OQTX

B JMNQ

C EGJN

D XZCG

Answer: B

Explanation:

In OQTX,

$$O + 2 = Q + 3 = T + 4 = X$$

In JMNQ,

$$J + 3 = M + 1 = N + 3 = Q$$

In EGJN,

$$E + 2 = G + 3 = J + 4 = N$$

In XZCG,

$$X + 2 = Z + 3 = C + 4 = G$$

∴ The correct answer is option B.

Question 47

A NMOK

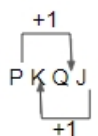
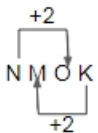
B PKQJ

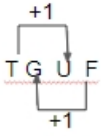
C RLSK

D TGUF

Answer: A

Explanation:





MNOK is odd.

∴ The correct answer is option A.

Question 48

- A 997
- B 976
- C 778
- D 895

Answer: A

Explanation:

$$997 \rightarrow 9 + 9 + 7 = 25$$

$$976 \rightarrow 9 + 7 + 6 = 22$$

$$778 \rightarrow 7 + 7 + 8 = 22$$

$$895 \rightarrow 8 + 9 + 5 = 22$$

∴ The correct answer is option A.

Question 49

- A 8
- B 87
- C 111
- D 96

Answer: A

Explanation:

$$87 \rightarrow 8 + 7 = 15$$

$$111 \rightarrow 1 + 1 + 1 = 3$$

$$96 \rightarrow 9 + 6 = 15$$

The sum of the digits of 87, 111 and 96 is divisible by 3.

∴ The correct answer is option A.

Instructions

For the following questions answer them individually

Question 50

Pick the odd number from the sequence below :

2, 3, 6, 7, 11, 15, 30

- A 7

B 11

C 6

D 30

Answer: B

Explanation:

In first number: The number is first added to same number.

In second number: The answer should added by 1.

$$1 + 1 = 2$$

$$2 + 1 = 3$$

$$3 + 3 = 6$$

$$6 + 1 = 7$$

$$7 + 7 = 14$$

$$14 + 1 = 15$$

$$15 + 15 = 30$$

So, 11 is odd number.

General Awareness

Instructions

For the following questions answer them individually

Question 51

The storage form of glucose is

A Insulin

B Glycogen

C Glucagon

D Fructose

Answer: B

Question 52

Thigmotropism is the response of the plant to

A Gravity

B Water

C Light

D Contact

Answer: D

Question 53

Root hairs are produced from

- A trichotnes
- B trichiblast
- C rhizodermis
- D epidermis

Answer: C

Question 54

Second Ozone hole was detected over

- A Antartica
- B Artica
- C Sweden
- D Northern hemisphere

Answer: A

Question 55

Glycolysis during fermentation results in not gain of

- A 1 ATP
- B 2 ATPs
- C 3 ATPs
- D 4 ATPs

Answer: B

Question 56

The disadvantage of self-pollination is

- A seeds are less in number
- B no dependence of pollinating agents
- C mechanism is too simple
- D no wastage of pollengrains

Answer: A

Question 57

By increasing the intensity of incident light on the surface, the photo electric current

- A increases
- B decreases
- C unchanged

D increases initially and then decreases

Answer: D

Question 58

The Phenomenon of light splitting into seven distinct colours when it passes through prism is

A diffraction

B polarisation

C dispersion

D reflection

Answer: C

Question 59

A block placed on an inclined plane of slope angle θ slides down with a constant speed. The coefficient of kinetic friction is equal to

A $\sin \theta$

B $\cos \theta$

C $\tan \theta$

D $\cot \theta$

Answer: C

Question 60

A plumb bob is hanging from the ceiling of a car. If the car moves with an acceleration a , the angle made by the string with the vertical is

A $\sin^{-1} \left(\frac{a}{g} \right)$

B $\sin^{-1} \left(\frac{g}{a} \right)$

C $\tan^{-1} \left(\frac{a}{g} \right)$

D $\tan^{-1} \left(\frac{g}{a} \right)$

Answer: C

Question 61

Who is called the 'Father of Indian Cinema'?

A Raj Kapoor

B Dilip kumar

C Mehboob Khan

D Dada Saheb Phalke

Answer: D

Question 62

Name the first Indian woman to climb Mount Everest

- A Santosh Yadav
- B Bachhendri Pal
- C Rita Farai
- D Leela Seth

Answer: B

Question 63

Which IPL Team won the eighth edition of the Indian Premier League?

- A Mumbai Indians
- B Chennai Super Kings
- C Delhi Daredevils
- D Kolkata Knight Riders

Answer: A

Question 64

Nehru Trophy is associated with which sport in India?

- A Football
- B Cricket
- C Hockey
- D None of the above

Answer: C

Question 65

Aung San Suu Kyi, a prodemocracy campaigner, is from which of the following countries?

- A Nepal
- B Myanmar
- C Bangladesh
- D China

Answer: B

Question 66

Usain Bolt is famous as

- A an astronaut
- B a boxer

C an athlete

D a cricketer

Answer: C

Question 67

Which of the following is the morning 'Ragg' in music ?

A Sohini

B Bhairavi

C Sarang

D Malhaar

Answer: B

Question 68

When was the first All India Postage Stamp issued?

A 1854

B 1858

C 1850

D 1856

Answer: A

Question 69

In which country was paper currency first used?

A India

B Egypt

C China

D Japan

Answer: C

Question 70

The murder of Archduke Ferdinand and his wife triggered off which of the following events?

A Crimean War

B Balkan War

C First World War

D Second World War

Answer: B

Question 71

.com represents

- A communication domain
- B Educational domain
- C Commercial domain
- D Government domain

Answer: A

Question 72

IKE stands for

- A Internet Key Exchange
- B Information Key Execution
- C Information Key Exchange
- D Infrastructure Key Encryption

Answer: A

Question 73

When salt is added to water, the boiling point of water is

- A Lowered
- B Unaffected
- C Increased
- D Constant

Answer: C

Question 74

The gas dissolved in water that makes it acidic

- A hydrogen
- B nitrogen
- C carbon dioxide
- D ammonia

Answer: C

Question 75

The hydrogen ion concentration of a solution is measured using a

- A thermometer
- B pH meter

C hydrometer

D barometer

Answer: B

Question 76

Non-bonding valence electrons are

A Involved only in covalent bond formation

B Involved only in ionic bond formation

C Involved in both ionic and covalent bond formation

D Not involved in covalent bond formation

Answer: C

Question 77

When is the World Earth Day celebrated?

A 4 April

B 22 April

C 1 May

D 23 March

Answer: B

Question 78

World "No Tobacco Day" was observed globally on

A 31 May

B 2 June

C 15 June

D 20 June

Answer: A

Question 79

The greenhouse gases, otherwise called radioactively active gases include

A Carbon dioxide

B CH_4

C N_2O

D All of these

Answer: D

Question 80

The most serious environmental effect posed by hazardous wastes is

- A air pollution
- B contamination of ground water
- C increased use of land of landfills
- D None of the above

Answer: B

Question 81

Which Delhi Sultan resorted to price control and rationing?

- A Balban
- B Muhammad-bin-Tughluq
- C Bahlul Lodi
- D Alaud-din-Khilji

Answer: D

Question 82

The Maratha ruler Shivaji ruled his kingdom with the help of a Council of Ministers called

- A Ashtapradan
- B Ashtadigajas
- C Navarathnas
- D Mantriparishad

Answer: A

Question 83

Ms. Florence Nightingale was associated with

- A Seven years War
- B Thirty Years War
- C Crimean War
- D Hundred Years War

Answer: C

Question 84

Who among the following Gupta emperor was known as 'Vikramaditya'?

- A Samudra Gupta
- B Kumar Gupta

C Chandra Gupta I

D Chandra Gupta II

Answer: D

Question 85

The finely painted cotton fabric made in Golkanda was called

A Calico

B Muslin

C Kalamkari

D Palampore

Answer: C

Question 86

Which of the best type of cotton grown in the world?

A Long staple

B Medium staple

C Short staple

D Thick staple

Answer: A

Question 87

Which one of the following is first multipurpose project constructed in India?

A Rihand

B Thungabadra

C Farraka Barrage

D Damodar

Answer: D

Question 88

What is the symbol of (WWF) World Wildlife Fund?

A Red Panda

B Rhododendron

C Bear

D White Tiger

Answer: A

Question 89

Market Gardening comes in this category

- A Horticulture
- B Monoculture
- C Subsistence farming
- D Sericulture

Answer: A

Question 90

A deep or french in the ocean floor is called

- A Ridges
- B Crest
- C Trough
- D Continental Shelf

Answer: B

Question 91

Name the co-operative society that provides housing loan facility at reasonable rates

- A Credit co-operatives
- B Housing co-operatives
- C Consumer co-operatives
- D Producer's co-operatives

Answer: B

Question 92

Name the biggest employer in India

- A Steel Authority of India Ltd (SAIL)
- B Post & Telecom Department
- C Food Corporation of India (FCI)
- D Indian Railways

Answer: D

Question 93

Which of the following is an allied activity of agriculture

- A Livestock
- B Small Scale Industry

C Money lending

D Insurance

Answer: A

Question 94

Disguised unemployment means

A Working as Self-Employed

B Not working whole day

C Marginal Productivity is zero

D Production is less

Answer: C

Question 95

Cartel is a part of

A Monopoly

B Oligopoly

C Perfect competition

D Monopolistic competition

Answer: B

Question 96

In the presidential system of government, the President is

A Head of the state

B Head of the state and Head of the Government

C Head of the Government

D Head of the Executive

Answer: B

Question 97

The Chief Election Commissioner of India is appointed by

A Chief Justice of India

B Prime Minister

C President

D Parliament

Answer: C

Question 98

The Election Commission of India is

- A An independent body
- B Quasi-judicial body
- C Quasi-legislative body
- D Executive body

Answer: A

Question 99

Articles 23 and 24 of the Indian Constitution deal with

- A Right against Exploitation
- B Right to Freedom
- C Right to Freedom of Religion
- D Right to Education

Answer: A

Question 100

Which of the following ideologies aims at the spiritualization of politics?

- A Marxism
- B Socialism
- C Sarvodaya
- D Pularism

Answer: C

General Engineering (Mechanical)

Instructions

For the following questions answer them individually

Question 101

In a homogeneous, isotropic elastic material, the modulus of elasticity E in terms of G and K is equal to

- A $\frac{9KG}{G+3K}$
- B $\frac{9KG}{3G+K}$
- C $\frac{3K+G}{3G+K}$
- D $\frac{6KG}{K+3G}$

Answer: A

Question 102

In a composite bar the resultant strain produced will be

- A sum of the strain produced by the individual bars
- B same as the strain produced in each bar
- C difference of strain produced by the individual bars
- D same as the stress produced in each bars

Answer: B

Question 103

Two springs of stiffness k_1 and k_2 respectively are connected in series, what will be the stiffness of the composite spring?

- A $k = \frac{k_1 k_2}{k_1 + k_2}$
- B $k = \frac{k_1 + k_2}{k_1 k_2}$
- C $k = k_1 + k_2$
- D $k = k_1 k_2$

Answer: A

Question 104

A solid shaft transmits 44 kW power at 700 rps. Calculate the torque produced

- A 10 Nm
- B 100 Nm
- C 600 Nm
- D 60 Nm

Answer: A

Question 105

What are the equilibrium conditions to be satisfied for a particle applied with a system of non-coplanar concurrent forces?

- A $\sum F_x = 0$ and $\sum F_y = 0$
- B $\sum F_x = 0, \sum F_y = 0$ and $\sum M_{z-axis} = 0$
- C $\sum F_x = 0, \sum F_y = 0$ and $\sum F_z = 0$
- D $\sum F_x = 0, \sum F_y = 0, \sum F_z = 0, \sum M_x = 0, \sum M_y = 0,$ and $\sum M_z = 0$

Answer: D

Question 106

As per first law of thermodynamics, when any system confined within a boundary is carried through a series of operations such that the final state is same as the initial state, then

- A the net work transfer is higher than the net heat transfer
- B the network transfer is lower than the net heat transfer
- C the network transfer is equal to the net heat transfer
- D the network transfer is equal to or higher than the net heat transfer

Answer: C

Question 107

Enthalpy is calculated as the

- A sum of internal energy and the product of pressure and volume of the system
- B sum of internal energy and the product of pressure and density of the system
- C difference between the internal energy and the product of pressure and density of the system
- D difference between the internal energy and the product of pressure and volume of the system

Answer: A

Question 108

The area below the p-V diagram of a non-flow process represents

- A heat transfer
- B mass transfer
- C work transfer
- D entropy transfer

Answer: C

Question 109

A heat engine is a device that operates on a thermodynamics cycle

- A to convert the heat supplied into complete work energy under reversible conditions
- B to convert the heat supplied into complete work energy under all conditions
- C to produce useful work from the heat received from a source and also rejects the remaining heat to the sink under all conditions
- D to produce useful work from the heat received from a source and also rejects the remaining heat to the sink under reversible conditions

Answer: C

Question 110

Sub-cooling in a vapour compression cycle

- A decreases the required work and refrigeration effect
- B increase the required work and refrigeration effect
- C increases the required work and decrease the refrigeration effect

D does not affect the required work and increases the refrigeration effect

Answer: D

Question 111

An ideal flow of any fluid must fulfil the following

- A Boundary layer theory
- B Continuity equation
- C Newton's law of viscosity
- D Pascal's law

Answer: B

Question 112

If w is the specific weight of the liquid and h the depth of any point from the surface, then the pressure intensity at that point will be

- A h
- B wh
- C w/h
- D h/w

Answer: B

Question 113

The stress-strain relation of the newtonian fluid is

- A Hyperbolic
- B Inverse type
- C Linear
- D Parabolic

Answer: C

Question 114

When a vertical wall is subjected to pressure due to liquid on both sides, the resultant pressure is the ____ of the two pressures.

- A Sum
- B Difference
- C Arithmetic
- D Geometric mean

Answer: A

Question 115

A flow in which each liquid particle has a definite path, and the paths of individual particles do not cross each other is called

- A Steam flow
- B Uniform flow
- C Streamline flow
- D Turbulent flow

Answer: B

Question 116

A fluid is said to be ideal, if it is

- A inviscous and incompressible
- B inviscous and compressible
- C viscous and compressible
- D viscous and incompressible

Answer: A

Question 117

Netwon's law of viscosity is a relationship between

- A pressure, velocity and temperature
- B shear stress and rate of shear strain
- C shear pressure and rate of shear strain
- D rate of shear strrain and temperature

Answer: B

Question 118

The coefficient of discharge of an orifice varies with

- A Reynolds number
- B Weber number
- C Froude number
- D Mach number

Answer: A

Question 119

In manometer a better liquid combination is one having

- A lower surface tension
- B higher surface tension
- C high viscosity

D low viscosity

Answer: A

Question 120

A micrometer with inclined tube is called is

- A inverted manometer
- B differential manometer
- C closed tube manometer
- D sensitive manometer

Answer: D

Question 121

Hydrometer is used to determine

- A density of liquids
- B specific gravity of the liquid
- C flow of liquids
- D relative humidity

Answer: B

Question 122

Continuity equation for a compressible fluid is

- A $A_1 V_1 = A_2 V_2$
- B $\rho_1 A_1 V_1 = \rho_2 A_2 V_2$ ($A \rightarrow$ area)
- C $\frac{A_1 V_1}{\rho_1} = \frac{A_2 V_2}{\rho_2}$ ($V \rightarrow$ velocity)
- D $\frac{\rho_1 A_1}{V_1} = \frac{\rho_2 A_2}{V_2}$ ($\rho \rightarrow$ density)

Answer: B

Question 123

For the same maximum temperature in the cycle, the average temperature of heat addition of a Rankine cycle compared to that of Carnot cycle is

- A lower
- B higher
- C same
- D not related

Answer: B

Question 124

If a reheater is added to a Rankine Cycle, then usually,

- A the network and efficiency increase
- B the network and efficiency decrease
- C the network remain same and efficiency increases
- D the network remain same and efficiency remains same

Answer: A

Question 125

The Babcock and Wilcox boiler is considered as a

- A natural convection fire tube boiler
- B forced convection fire tube boiler
- C natural convection water tube boiler
- D forced convection water tube boiler

Answer: C

Question 126

Boiler accessories are used to ensure

- A improved performance
- B safe operation
- C easy maintenance
- D automatic control

Answer: A

Question 127

The Benson boiler has

- A two drums - one for water and another for steam
- B a horizontal steam drum
- C a vertical steam drum
- D no steam drum

Answer: D

Question 128

For air compressor, least work input will be needed if the compression is

- A isentropic
- B isothermal

C polytropic

D hyperbolic

Answer: B

Question 129

Rotary compressor is best suited for

A large quantity of air at high pressure

B small quantity at high pressure air

C small quantity at low high pressure air

D large quantity of air at low pressure

Answer: D

Question 130

Steam nozzle converts

A heat energy to kinetic energy

B kinetic energy to heat energy

C heat energy to potential energy

D potential energy to heat energy

Answer: A

Question 131

The degree of reaction of a steam turbine is the ratio between the enthalpy drops in

A moving blades and that in the stage

B moving blades and that in the nozzle

C in the nozzle and that in the moving blades

D in the nozzle and that in the stage

Answer: A

Question 132

The expansion process in the throttling device of a vapour compression cycle is

A isothermal process

B adiabatic process

C isenthalpic process

D isentropic process

Answer: C

Question 133

Lowering the evaporator pressure in a vapour compression cycle

- A decreases the required work and COP
- B increases the required work and COP
- C increases the required work and decreases the COP
- D decreases the required work and increases the COP

Answer: C

Question 134

In ammonia-water vapour absorption refrigeration system

- A ammonia is the refrigerant and water is absorbent
- B ammonia is the absorbent and water is refrigerant
- C both ammonia and water are refrigerants
- D both ammonia and water are absorbents

Answer: A

Question 135

Air refrigeration is preferably used in aircrafts because

- A it uses air that is available in plenty in the atmosphere
- B it has high COP
- C its weight per tons of refrigeration is low
- D it is cheaper

Answer: C

Question 136

What is the ratio of maximum tangential stress (σ_t) and maximum radial stress (σ_r) of a solid disk flywheel ?

- A $\frac{\sigma_t}{\sigma_r} = 0.5$
- B $\frac{\sigma_t}{\sigma_r} = 1.0$
- C $\frac{\sigma_t}{\sigma_r} = 1.5$
- D $\frac{\sigma_t}{\sigma_r} = 2.0$

Answer: B

Question 137

The cone angle of a pivot bearing is increased by 2%. The maximum load carrying capacity at the bearing will increase by

- A 0.05%

- B 1%
- C 0.5%
- D 0%

Answer: C

Question 138

Why are gear teeth made harder?

- A To avoid wear
- B To avoid pitting
- C To avoid abrasion
- D To avoid tensile strength

Answer: A

Question 139

A structural member subjected to an axial compressive force is called

- A beam
- B Column
- C frame
- D strut

Answer: B

Question 140

Volumetric strain of a rectangular body subjected to an axial force, in terms of linear strain e and Poisson's ratio μ , is equal to

- A $e(1 - 2\mu)$
- B $e(1 - \mu)$
- C $e(1 - 3\mu)$
- D $e(1 + \mu)$

Answer: A

Question 141

Torsional rigidity of a solid circular shaft of diameter d is proportional to

- A d
- B d^2
- C d^4
- D $\frac{1}{d^2}$

Answer: C

Question 142

Two shafts, one solid and the other hollow, are made of the same materials and are having length and weight. The hollow shaft as compared to solid shaft is

- A More strong
- B Less strong
- C Have some strength
- D None of the above

Answer: A

Question 143

The point of contra-flexure occurs only in

- A Continuous beams
- B Cantilever beams
- C Overhanging beams
- D Simply supported beams

Answer: C

Question 144

Which of the following theorem is used for the equilibrium of the body applied with three concurrent coplanar forces?

- A Varignon's theorem
- B Lame's theorem
- C Pythagoras theorem
- D Hamilton theorem

Answer: B

Question 145

A body of mass 5 kg accelerates at a constant rate of 2 m/s^2 on a smooth horizontal surface due to an external force acting at 30° with horizontal. The magnitude of the force is

- A $10 \cos 30N$
- B $10 \sin 30N$
- C $\frac{10}{\cos 30} N$
- D $\frac{10}{\sin 30} N$

Answer: C

Question 146

In case of a circular section the section modulus is given as

A $\frac{\pi d^2}{16}$

B $\frac{\pi d^3}{16}$

C $\frac{\pi d^3}{32}$

D $\frac{\pi d^4}{64}$

Answer: C

Question 147

.Leaf springs are subjected to

A bending stress

B tensile stress

C shear stress

D compressive stress

Answer: A

Question 148

The strength of a beam mainly depends on

A centre of gravity of the section

B its weight

C section modulus

D bending moments

Answer: C

Question 149

According to Bernoulli's equation

A $Z + \frac{P}{W} + \frac{V^2}{2g} = \text{constant}$

B $Z + \frac{P}{W} - \frac{V^2}{2g} = \text{constant}$

C $Z - \frac{P}{W} + \frac{V^2}{2g} = \text{constant}$

D $Z - \frac{P}{W} - \frac{V^2}{2g} = \text{constant}$

Answer: A

Question 150

The length of the divergent portion of venturimeter in comparison to convergent portion is

A less

- B more
- C same
- D more or less depending on capacity

Answer: B

Question 151

Orifice meter is used for measurement of

- A Temperature
- B Pressure
- C Rate of flow
- D Viscosity

Answer: C

Question 152

.When Venturimeter is inclined, then for a given flow it will show

- A less reading
- B more reading
- C same reading
- D inaccurate reading

Answer: C

Question 153

A Manometer is used to measure

- A Discharge
- B Pressure
- C Volume
- D Temperature

Answer: B

Question 154

During the opening of a valve in a pipelines, the flow is

- A Steady
- B Unsteady
- C Uniform
- D Free vortex

Answer: B

Question 155

Water at 20°C is flowing through a 20 cm diameter pipe. Take kinematic viscosity of water at $20^{\circ}\text{C} = 0.0101$ stoke. Assume that the changes from laminar to turbulent at $\text{Re} = 2320$. The critical velocity will be

- A 1.117 cm/s
- B 11.17 cm/s
- C 111.7 cm/s
- D 0.117 cm/s

Answer: A

Question 156

Froude number is the ratio of inertial force to

- A Gravitation force
- B Surface tension
- C Elasticity
- D Viscosity

Answer: A

Question 157

Any change in load is adjusted by adjusting following parameter on turbine

- A Absolute velocity
- B Blade velocity
- C Net head
- D Flow

Answer: D

Question 158

Kaplan turbine

- A is used where high head is available
- B has poor part-load efficiency
- C has inlet adjustable guide vanes
- D has adjustable runner vanes

Answer: D

Question 159

The speed of an imaginary turbine, identical with the given turbine, which will develop a unit power under unit head, is known as

- A Normal speed

- B Abnormal speed
- C Unit speed
- D Specific speed

Answer: D

Question 160

In a centrifugal pump casing, the flow of water leaving the impeller is

- A Rectilinear flow
- B Radial flow
- C Free vortex motion
- D Forced vortex motion

Answer: D

Question 161

The efficiency of a centrifugal pump is maximum when its blades are

- A Bent forward
- B Bent backward
- C Bent forward first and then backward
- D Bent backward first and then forward

Answer: B

Question 162

To avoid cavitation in centrifugal pumps

- A Suction pressure should be low
- B Delivery pressure should be low
- C Suction pressure should be high
- D Delivery pressure should be high

Answer: C

Question 163

Loss of energy per unit volume due to friction in case of flow through a pipe at length L and diameter D is expressed as

- A $4fL \frac{v^2}{2gD}$
- B $4f \left(\frac{L}{D}\right) \times \left(\frac{v^2}{g}\right)$
- C $4f \left(\frac{L}{D}\right) \left(\frac{\rho v^2}{2g}\right)$

D $4f \left(\frac{L}{D} \right) \times \left(\frac{\rho v^2}{2} \right)$

Answer: A

Question 164

In an isothermal process, the heat transfer is

- A less than the work transfer
- B equal to the work transfer
- C less than or equal to the work transfer
- D more than the work transfer

Answer: B

Question 165

A heat engine receives 1000 kJ of heat and produces 600 kJ of work. The amount of heat rejected in kJ and the efficiency percentage of the engine, respectively will be

- A 400, 40%
- B 400, 60%
- C 600, 40%
- D 600, 60%

Answer: B

Question 166

The efficiency of a Carnot Engine depends on

- A the nature of the working fluid
- B the duration of working of the engine
- C the capacity of the engine
- D the temperature limits of the working fluid

Answer: D

Question 167

In case of S.I. engine to have high thermal efficiency of fuel air mixture ratio should be

- A lean
- B rich
- C irrespective of mixture
- D chemically correct

Answer: D

Question 168

For the same output, same speed and same compression ratio the thermal efficiency of a two stroke cycle petrol engine as compared to that for stroke cycle petrol engine is

- A more
- B less
- C same as long as compression ratio is same
- D same as long as output is same

Answer: B

Question 169

The chemically correct stoichiometric ratio for petrol is

- A 14.8 : 1
- B 11 : 1
- C 18 : 1
- D 15 : 1

Answer: A

Question 170

The mean effective pressure of an Otto cycle is the ratio between

- A the network produced and the clearance volume
- B the network produced and the swept volume
- C the network produced and the cylinder volume
- D the network produced and the crank case volume

Answer: B

Question 171

The Otto cycle thermal efficiency, with usual notation, is given as, where r is compression ratio and γ is the adiabatic index

- A $\eta_o = 1 - r^{\gamma-1}$
- B $\eta_o = 1 - r^\gamma$
- C $\eta_o = 1 - \left(\frac{1}{r^{\gamma-1}}\right)$
- D $\eta_o = 1 - \left(\frac{1}{r^\gamma}\right)$

Answer: C

Question 172

For the same inlet condition and compression ratio, the efficiency of an Otto cycle is

- A lower than that of the diesel cycle

- B lower than or equal to that of the diesel cycle
- C higher than that of the diesel cycle
- D higher than or equal to that of the diesel cycle

Answer: C

Question 173

.At triple point, there are

- A three constant thermodynamics properties
- B three states of matter in equilibrium
- C three or more modes of energy transfer
- D three degrees of freedom

Answer: B

Question 174

As the pressure increases, the saturation temperature of the vapour

- A increases
- B decreases
- C increases first and then decreases
- D decreases first and then increases

Answer: A

Question 175

The chemically correct stoicheiometric ratio for petrol is

- A 14.8 : 1
- B 11 : 1
- C 18 : 1
- D 15 : 1

Answer: A

Question 176

Metacentric height is the distance between

- A metacentre and water surface
- B metacentre and centroid
- C metacentre and centre of gravity
- D metacentre and centre of buoyancy

Answer: C

Question 177

The centre of gravity of the volume of the liquid displaced by an immersed body is called

- A metacentre
- B centre of buoyancy
- C centre of gravity
- D centroid

Answer: B

Question 178

The ratio of actual measured head to head imparted to fluid by impeller for a centrifugal pump is known as

- A mechanical
- B volumetric
- C manometric
- D impeller

Answer: C

Question 179

The process used for relieving the internal stresses previously set up in the metal and for increasing the machinability of steel, is

- A normalising
- B full annealing
- C process annealing
- D spheroidising

Answer: B

Question 180

The process of making hollow casting of desired thickness by permanent mould without the use of cores is known as

- A die casting
- B slush casting
- C pressed casting
- D centrifugal casting

Answer: D

Question 181

According to Indian standard specifications, a plain carbon steel designated by 40C8 means that the percentage of carbon content is

- A 0.04
- B 0.35 to 0.45

C 0.4 to 0.6

D 0.6 to 0.8

Answer: D

Question 182

A moving mandrel is used in

A wire drawing

B tube drawing

C metal cutting

D forging

Answer: B

Question 183

Crater wear takes place in a single point cutting tool at the

A flank

B side rake

C face

D tip

Answer: C

Question 184

The relationship between tool life (T) and cutting speed (V) is expressed as, where n and C are constant

A $V^n T = C$

B $\frac{V}{T} = C$

C $VT^n = C$

D $\frac{T}{V} = 0$

Answer: C

Question 185

Black colour is generally painted on

A oxygen cylinder

B acetylene cylinder

C hydrogen cylinder

D None of the above

Answer: A

Question 186

Consumable electrodes is used in

- A carbon arc welding
- B submerged arc welding
- C TIG arc welding
- D MIG arc welding

Answer: D

Question 187

The directional solidification in casting can be improved by using

- A chills and chaplets
- B chills and padding
- C chaplets and padding
- D chills, chaplets and padding

Answer: B

Question 188

The purpose of chaplets is

- A just like chills to ensure directional solidification
- B to provide efficient venting
- C to support the cores
- D to join upper and lower parts of the moulding box

Answer: C

Question 189

The centre of gravity of a complex link in a four bar chain mechanism will experience

- A No acceleration
- B Only linear acceleration
- C Only angular acceleration
- D Both linear and angular acceleration

Answer: A

Question 190

The power from the engine to the rear axle of an automobile is transmitted by means of

- A Worm and worm wheel
- B Spur gears

- C Bevel gears
- D Hooke's joint

Answer: D

Question 191

The included angle for the v-belt is usually

- A 10° to 20°
- B 20° to 30°
- C 30° to 40°
- D 60° to 80°

Answer: C

Question 192

In railway axle boxes, the bearing used is

- A Cylindrical roller bearing
- B Deep groove ball bearing
- C Double row spherical roller bearing
- D Double row self-aligning ball bearing

Answer: A

Question 193

When the sleeve of a Porter governor moves upwards, the governor speed

- A Increases
- B Decreases
- C Remains unaffected
- D First increases and then decreases

Answer: A

Question 194

When the load on engine increases, it becomes necessary to increase the supply of working fluid and when the load decreases, less working fluid is required. The supply of the working fluid to the engine is controlled by a

- A D-slide valve
- B Governor
- C Meyer's expansion valve
- D Fly wheel

Answer: B

Question 195

For high speed engines, the cam follower should move with

- A Uniform velocity
- B Simple harmonic motion
- C Uniform acceleration and retardation
- D Cycloidal motion

Answer: B

Question 196

The minimum required centre distance of two mating spur gears is decided based on

- A Surface compressive strength of the gear material
- B Bending strength of the gear material
- C Ultimate strength of the gear material
- D Fatigue strength of the gear material

Answer: B

Question 197

Which of the following bearings can take large thrust loads?

- A Deep-Groove ball bearing
- B Filling-Notch ball bearing
- C Self-aligning ball bearing
- D Angular-Contact bearing

Answer: D

Question 198

The cotter joint is used to connect two rods which are in

- A Tension only
- B Compression only
- C Tension and Compression only
- D Shear only

Answer: C

Question 199

Which of the following statements regarding 'mitre gears' is correct?
These are employed for

- A minimum back-lash

- B great speed reduction
- C equal speed
- D minimum axial thrust

Answer: C

Question 200

Regarding journal bearing under film lubrication condition, which of the following statements is correct?

Frictional resistance is

- A directly proportional to the presence
- B independent of the area
- C proportional to the speed of rotation
- D inversely proportional to the viscosity of the lubricant

Answer: C