



## SSC MTS 9th August 2019 Shift-3

All rights reserved. No part of this publication may be reproduced, distributed, or transmitted in any form or by any means, electronic, mechanical, photocopying, recording or otherwise, or stored in any retrieval system of any nature without the permission of cracku.in, application for which shall be made to [support@cracku.in](mailto:support@cracku.in)

**Instructions**

For the following questions answer them individually

**Question 1**

Select the most appropriate option to substitute the underlined segment in the given sentence. If there is no need to substitute it, select option 'No substitution required'.

The trainee hand a copy of his appointment letter to the HR head.

- A hand over the copy
- B handed over a copy
- C No substitution required
- D handed of a copy

**Answer: B**

**SSC CHSL Previous Papers (DOWNLOAD PDF)**

**Question 2**

Select the correctly spelt word.

- A Eleantry
- B Elimantry
- C Elimentary
- D Elementary

**Answer: D**

**Question 3**

Select the most appropriate option to substitute the underlined segment in the given sentence. If there is no need to substitute it, select option 'No substitution required'.

Despite spending six years in politics, he are still regard by many as the new kid on the block.

- A he is still regarded
- B he are still regarding
- C he is still regard
- D No substitution required

**Answer: A**

**Question 4**

Select the most appropriate word to fill in the blank and make a meaningful sentence.

She seemed \_\_\_\_\_ about the plan as she did not react much .

- A interested
- B uninterested

C enthusiastic

D excited

Answer: B

## SSC Stenographer Previous Papers (Download PDF)

### Question 5

Select the most appropriate option to fill in the blank and make a grammatically correct sentence.

I was determined not to stay in hospital for any longer \_\_\_\_ was strictly necessary.

A than

B then

C that

D when

Answer: A

### Question 6

Select the meaning of the given idiom.

To pour oil in troubled water

A To raise a controversy

B To create tension

C To calm a dispute

D To light a fire

Answer: C

### Question 7

Select the most appropriate option to substitute the underlined segment in the given sentence. If there is no need to substitute it, select option 'No substitution required'.

The interview was broadcast on the same day he was sworn in as President.

A was broadcasted

B had broadcast

C No substitution required

D broadcast

Answer: C

## SSC GD Constable Previous Papers

### Question 8

Select the synonym of the given word.

Apparent

- A Obscure
- B Obvious
- C Obsolete
- D Objective

Answer: B

**Question 9**

Identify the segment in the sentence which contains the grammatical error from the given options.  
It's important for media to be more responsibly and careful.

- A more responsibly
- B It's important
- C for media to be
- D and careful

Answer: A

**Question 10**

Select the antonym of the given word.  
Attract

- A Allure
- B Invite
- C Lure
- D Repel

Answer: D

## SSC MTS Previous Papers (DOWNLOAD PDF)

**Question 11**

Select the most appropriate word to fill in the blank and make a meaningful sentence.  
The author touched the \_\_\_\_\_ of her career with her second novel which won the Pulitzer Prize.

- A peek
- B nadir
- C peak
- D base

Answer: C

**Question 12**

Select the most appropriate option to fill in the blank and make a grammatically correct sentence.  
The bodies \_\_\_\_\_ identified as those of two suspected drug dealers.

- A have
- B was
- C had
- D were

Answer: D

**Question 13**

Select the word which means the same as the group of words given.  
A person who wastes his money on luxury

- A Extravagant
- B Expensive
- C Monarch
- D Frugal

Answer: A

**SSC CGL Previous Papers (DOWNLOAD PDF)**

**Question 14**

Identify the segment in the sentence which contains the grammatical error from the given options.  
Put off the air conditioner unless you will catch a cold

- A Put off the air conditioner
- B you will
- C catch a cold
- D unless

Answer: D

**Question 15**

Select the word which means the same as the group of words given.  
One who works very hard

- A Industrious
- B Exhausted
- C Exploited
- D Labourer

Answer: A

**Question 16**

Identify the segment in the sentence which contains the grammatical error from the given options.  
The company has invested a great deal of time and effort to setting up new training schemes.

- A The company has
- B time and effort to setting up
- C new training schemes
- D invested a great deal of

Answer: B

## SSC CGL Free Mock Test (Latest Pattern)

### Question 17

Select the correctly spelt word.

- A Moddern
- B Modren
- C Modern
- D Modrran

Answer: C

### Instructions

In the following passage some words have been deleted. Fill in the blanks with the help of the alternatives given. Select the most appropriate option for each blank.

### Comprehension:

Louis Braille was a French educator and inventor (1)\_\_\_\_ a system of reading and writing for the visually impaired. His system (2)\_\_\_\_ virtually unchanged to date and is known worldwide simply as 'braille'. Blinded (3)\_\_\_\_ both eyes as a result of an early childhood (4)\_\_\_\_, Braille mastered his disability while still a boy. He (5)\_\_\_\_ at school and received a scholarship to the Royal Institute for Blind Youth.

### Question 18

Select the most appropriate option to fill in blank No.1.

- A from
- B in
- C by
- D of

Answer: D

### Question 19

Select the most appropriate option to fill in blank No.2.

- A leaves
- B rests
- C remains
- D preserves

Answer: C

## SSC CHSL Free Mock Test (Latest Pattern)

### Question 20

Select the most appropriate option to fill in blank No.3.

- A with
- B on
- C to
- D in

Answer: D

### Question 21

Select the most appropriate option to fill in blank No.4.

- A occasion
- B plan
- C provision
- D accident

Answer: D

### Question 22

Select the most appropriate option to fill in blank No.5.

- A recorded
- B talented
- C excelled
- D skilled

Answer: C

## SSC Stenographer Previous Papers (Latest Pattern)

### Instructions

For the following questions answer them individually

### Question 23

Select the antonym of the given word.

Hopeful

- A Healthy
- B Cheerful
- C Optimistic

D Pessimistic

Answer: D

Question 24

Select the synonym of the given word.  
Slender

A Slippery

B Slim

C Sturdy

D Strong

Answer: B

Question 25

Select the meaning of the given idiom.  
Fair's fair

A White supremacy

B Just treatment

C Disappointed

D Fair complexion

Answer: B

## SSC GD Constable Free Mock Test (Latest Pattern)

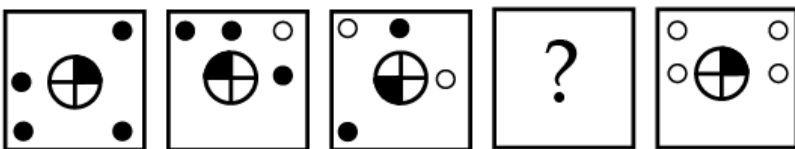
### Reasoning

Instructions

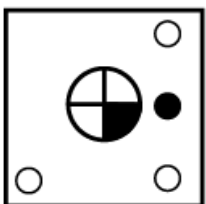
For the following questions answer them individually

Question 26

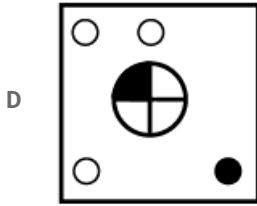
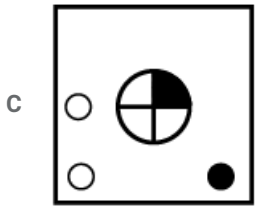
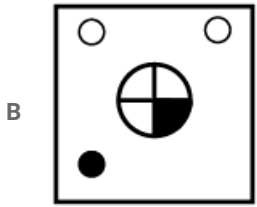
In the following question, select the figure which can be placed at the sign of question mark(?) from the given alternatives.



A





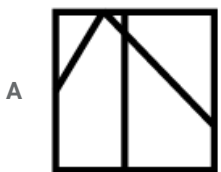
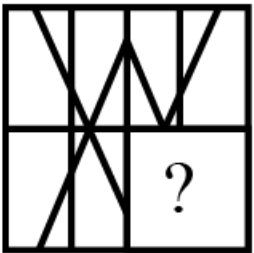


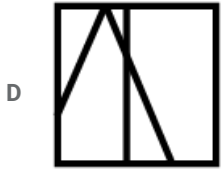
Answer: A

## SSC MTS Free Mock Test (Latest Pattern)

Question 27

Which answer figure will complete the pattern in the question figure?

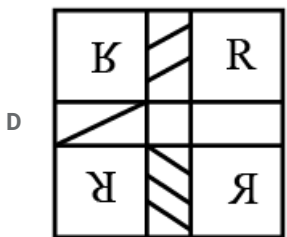
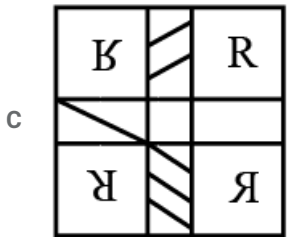
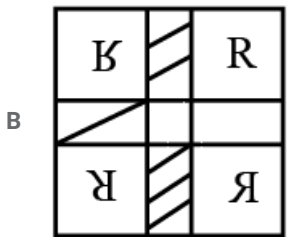
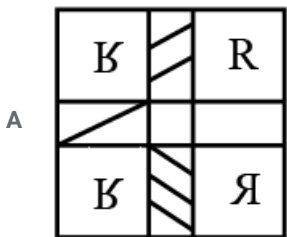
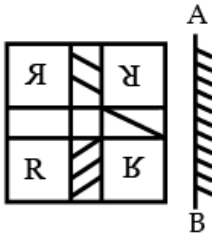




Answer: D

Question 28

If a mirror is placed on the line AB, then which of the answer figures is the right image of the given figure?



Answer: D

Question 29

Six boys P, Q, R, S, T and G are sitting around a circular table facing towards the centre (not necessarily in the same order). P is to the immediate right of G. Q is second to the left of T. R is second to the left of S. G is second to the right of S. How many boys are sitting between R and T?

- A 0
- B 1
- C 2
- D 3

Answer: C

## SSC CPO Free Mock Test (Latest Pattern)

### Question 30

In a certain code language, 'REASON' is written as 'SDBRPM'. What is the code for 'NGLISH' in that code language?

- A PGMIUH
- B OFMHTG
- C PGNIUH
- D OEMHTG

Answer: B

### Question 31

Six tailors G1, G2, G3, G4, G5 and G6 are sitting around a circular table facing towards the centre (not necessarily in the same order). G6 is second to the left of G3. G2 is second to the right of G1. G5 is to the immediate left of G6. Which tailor is sitting second to the right of G3?

- A G1
- B G6
- C G4
- D G5

Answer: C

### Question 32

After interchanging two signs '+' and 'x' what will be the value of given equation?

$$6 \times 8 \div 32 + 64 - 11 = ?$$

- A 11
- B 13
- C 14
- D 10

Answer: A

**SSC MTS Free Preparation App**

**Question 33**

Select the option that is related to the third term in the same way as the second term is related to the first term.

Plate : Utensil :: Car : ?

- A Tyre
- B Bike
- C Vehicle
- D Driver

**Answer: C**

**Question 34**

By interchanging which two signs the equation will be correct?

$$5 - 9 + 16 \times 91 \div 13 = -98$$

- A  $\div$  and  $-$
- B  $+$  and  $\div$
- C  $\times$  and  $-$
- D  $+$  and  $-$

**Answer: D**

**Question 35**

Select the number that can replace the question mark (?) in the following series.

36, 73, 147, 295, ?

- A 591
- B 581
- C 621
- D 691

**Answer: A**

**285 SSC Mocks - Just RS. 249**

**Question 36**

Select the Letter Cluster that can replace the question mark (?) in the following series.

MOND, RUUL, WABT, BGIB, ?

- A GMQJ
- B HNQJ
- C HNPS
- D GMPJ

**Answer: D**

**Question 37**

Three of the following four number-pairs are alike in a certain way and one is different. Find the odd one out.

- A 15 : 210
- B 37 : 1331
- C 63 : 3906
- D 18 : 306

Answer: B

**Question 38**

In the following question below are given some statements followed by some conclusions based on those statements. Taking the given statements to be true even if they seem to be at variance from commonly known facts. Read all the conclusions and then decide which of the given conclusion logically follows the given statements.

Statements:

I. Some flower are soft.

II. No hard is soft.

Conclusions:

I. Some hard are flower.

II. Some soft are flower.

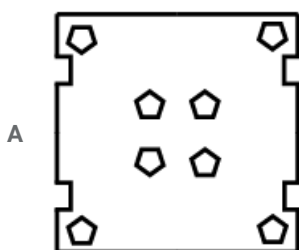
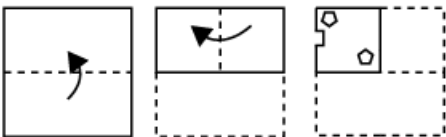
- A Neither conclusion follows
- B Only conclusion II follows
- C Both conclusion I and II follows
- D Only conclusion I follows

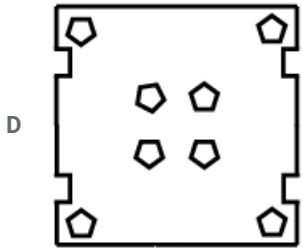
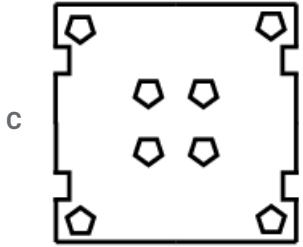
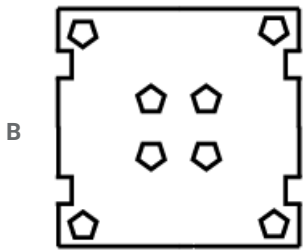
Answer: B

**SSC Exam Free Videos (Youtube)**

**Question 39**

A piece of paper is folded and punched as shown below in the question figures. From the given answer figures, indicate how it will appear when opened?





Answer: B

Question 40

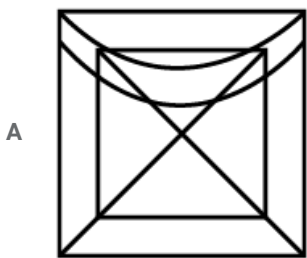
In a certain code language, 'PRO' is written as '48', 'BAL' is written as '14'. What is the code for 'COH' in that code language?

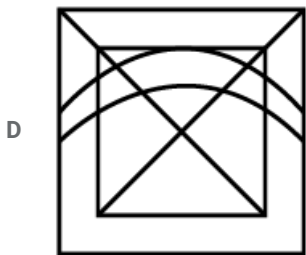
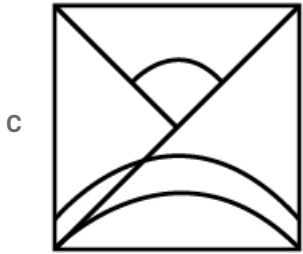
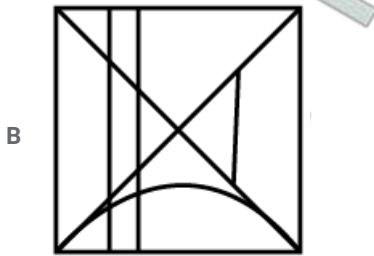
- A 24
- B 26
- C 25
- D 27

Answer: C

Question 41

From the given answer figures, select the one in which the question figure is hidden/embedded.





Answer: D

## SSC Study Material

### Question 42

Select the option that is related to the third term in the same way as the second term is related to the first term.

Arc : Circle :: ?

A Clock : Needle

B Blade : Sofa

C Tyre : Bike

D House : Room

Answer: C

### Question 43

In a certain code language, 'VERBAL' is written as '225182112', 'CURANT' is written as '3211811420'. What is the code for 'SOLVER' in that code language?

A 19151222518

B 19151123518

C 19151122518

D 19152412518

Answer: A

Question 44

Select the number that can replace the question mark (?) in the following series.  
1107, 1127, 1167, 1227, 1307, ?





- A 1397
- B 1407
- C 1427
- D 1417

Answer: B

SSC Daily Practice Set

Question 45

Identify the Venn diagram that best represents the relationship among the given classes.  
Table, Chair, Refrigerator

- A 
- B 
- C 
- D 

Answer: C

Question 46

In a certain code language, 'MODERN' is written as 'JLABOK'. What is the code for 'NUMBER' in that code language?

- A KRJYBO
- B LSKZCP
- C LTKZCP
- D KRKYBO

Answer: A



Question 47

Six benches N1, N2, N3, N4, N5 and N6 are kept one above the other (not necessarily in the same order). N4 is above N3 and N5 only. There are four benches between N1 and N5. N2 is three places above N3. Which of the following statement is not correct?

- A N1 is between N6 and N2
- B There are two bench between N3 and N2
- C N5 is at the bottom end
- D N2 is just above N6

Answer: A

SSC GK Free Tests

Question 48

Select the option that is related to the third Letter Cluster in the same way as the second Letter Cluster is related to the first Letter Cluster.

ROL : URO :: TAG : ?

- A XEL
- B XEK
- C WDJ
- D WEJ

Answer: C

Question 49

In the following question, select the number which can be placed at the sign of question mark(?) from the given alternatives.

<b>6</b>	<b>13</b>	<b>72</b>
<b>4</b>	<b>7</b>	<b>24</b>
<b>9</b>	<b>11</b>	<b>?</b>

- A 31
- B 16
- C 90
- D 20

Answer: C

**Question 50**

In the following question below are given some statements followed by some conclusions based on those statements. Taking the given statements to be true even if they seem to be at variance from commonly known facts. Read all the conclusions and then decide which of the given conclusion logically follows the given statements.

**Statements:**

I. All H are B .

II. All R are B .

**Conclusions:**

I. Some H are R.

II. No H is R.

III. Some B are R.

- A Only conclusion I follows
- B Conclusion III and either conclusion I or II follows
- C Both conclusion II and III follow
- D Only conclusion II follows

**Answer: B**

**SSC GK Questions**

**Quant**

**Instructions**

For the following questions answer them individually

**Question 51**

On selling an article for ₹2400 a trader earns 25% profit. If he had sold it for ₹2160, then what was his profit or loss percentage?

- A  $12\frac{1}{2}\%$  loss
- B  $12\frac{1}{2}\%$  profit
- C 15% profit
- D 15% loss

**Answer: B**

**Current Affairs Question and Answers (Download PDF)**

**Question 52**

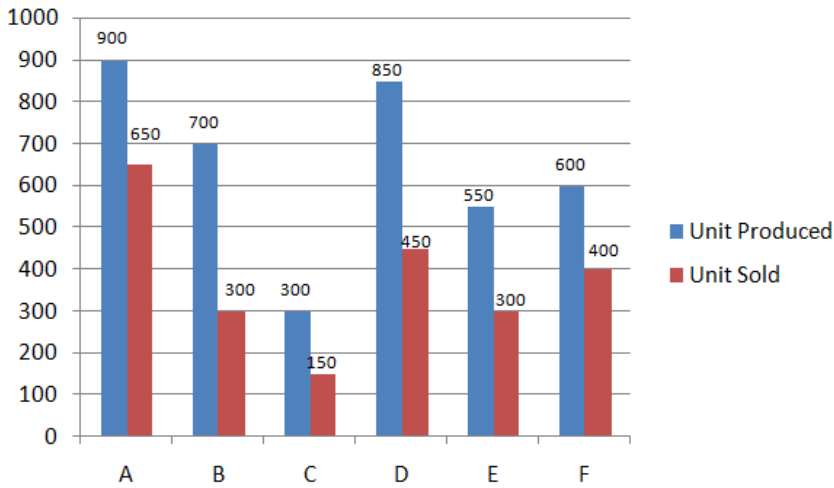
HCF and LCM of two numbers p and q is A and B respectively, if  $A + B = p + q$ , then the value of  $A^3 + B^3$  is:

- A  $p^3 + q^3$
- B  $q^3$
- C  $p^3$
- D  $p^3 - q^3$

**Answer: A**

Question 53

The Bar Graph shows the Production and Sales of Mobile handset of various companies A, B, C, D, E & F in a month.



The total units sold by companies A, B and C together is approximately what per cent of the total units produced by Companies A, B and C together (correct to nearest integer)?

- A 50
- B 76
- C 58
- D 62

Answer: C

Question 54

A fighter plane travels at 1440 km/h. How many meters does it travel in one second?

- A 374
- B 394
- C 400
- D 385

Answer: C

## Daily and Monthly Current Affairs (Download PDF)

Question 55

Daily ticket of a metro train costs ₹120 and Monthly pass costs ₹3276. If Sohan buys the Monthly pass and travels for 30 days in a month then what Percentage does he save?

- A 18%
- B 15%
- C 12%
- D 9%

Answer: D

Question 56

20% discount is offered on an item. By applying a promo code Rishi wins 4% cash back. What is the equivalent single discount?

- A 33%
- B 23.20%
- C 22.60%
- D 24%

Answer: B

Question 57

$$(x^5 \div x^4)^3 \div x^2 = ?$$

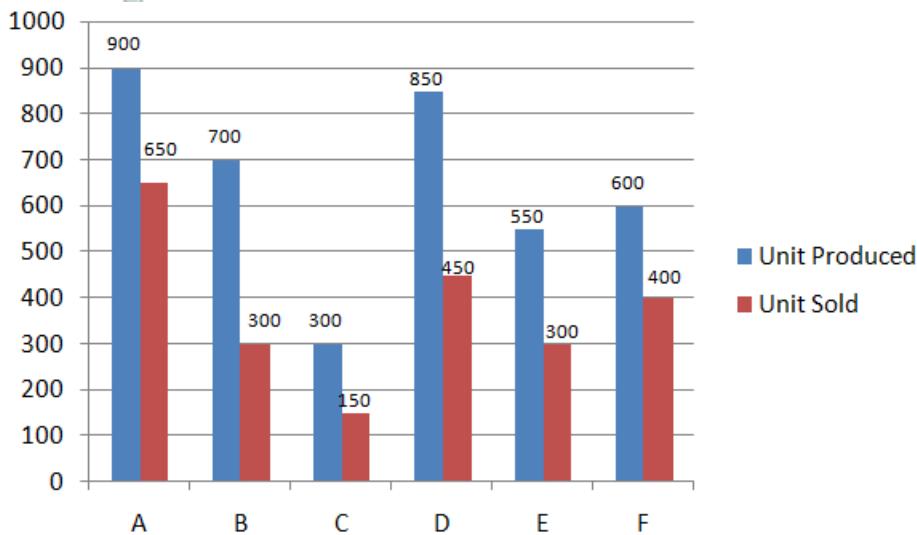
- A  $x$
- B  $x^3$
- C  $x^{-1}$
- D  $x^2$

Answer: A

## SSC CHSL Previous Papers (DOWNLOAD PDF)

Question 58

The Bar Graph shows the Production and Sales of Mobile handset of various companies A, B, C, D, E & F in a month.



What is the average number of Units produced by all the companies together?

- A 650
- B 675
- C 600
- D 625

Answer: A

**Question 59**

a and b are two numbers such that their mean proportion is 6 and third proportion is 48. What is the value of a and b?

- A 3, 6
- B 3, 12
- C 6, 6
- D 6, 12

**Answer: B**

**Question 60**

Ramesh borrowed ₹12000 at 13% per annum simple interest what amount will Ramesh pay to clear his debt after 5 years?

- A ₹18600
- B ₹19800
- C ₹20000
- D ₹18800

**Answer: B**

## SSC Stenographer Previous Papers (Download PDF)

**Question 61**

X takes 10 days less than the time taken by Y to finish a piece of work. X and Y together can do it in 12 days. In how many days Y alone can finish the work?

- A 25 days
- B 32.5 days
- C 22.5 days
- D 30 days

**Answer: D**

**Question 62**

A hall with dimensions 25 metres long and 15 metres broad is surrounded by a path of uniform width of 3.5 metres. The cost of flooring the path, at ₹25.50 per square metre is:

- A ₹8389.5
- B ₹8146.50
- C ₹9149.50
- D ₹4186.50

**Answer: A**

Question 63

0.15% of  $33\frac{1}{3}\%$  of 180000 is:

- A 150
- B 90
- C 9
- D 900

Answer: B

## SSC GD Constable Previous Papers

Question 64

The hypotenuse of a right-angled triangle is 39 cm and the difference of other two sides is 21 cm. Then, the area of the triangle is:

- A  $360 \text{ cm}^2$
- B  $540 \text{ cm}^2$
- C  $280 \text{ cm}^2$
- D  $270 \text{ cm}^2$

Answer: D

Question 65

A bag contains the amount of ₹25.8 in the form of 1 rupee, 50 paise and 10 paise coins and are in the ratio of 3 : 2 : 3. How many 50 paise coins are there in the bag?

- A 18
- B 3
- C 12
- D 36

Answer: C

Question 66

Two classes M and N have average marks 25 and 40 respectively, the overall average obtained is 30. The ratio of the students in the class M and N is:

- A 5 : 3
- B 1 : 2
- C 2 : 1
- D 5 : 6

Answer: C

## SSC MTS Previous Papers (DOWNLOAD PDF)

Question 67

The mode of 2, 2, 3, 3, 5, 5, 5, 7, 8, 8, 9, 10 is:

- A 5
- B 2
- C 3
- D 6

Answer: A

Question 68

A train crosses a stationary object in 25 sec. What is the length of the train if the speed of the train is 25 m/s?

- A 500 m
- B 625 m
- C 300 m
- D 620 m

Answer: B

Question 69

If the length of a side of the square is equal to that of the diameter of a circle, then the ratio of the area of the square and that of the circle is: ( $\pi = \frac{22}{7}$ )

- A 14 : 11
- B 28 : 11
- C 11 : 14
- D 11 : 7

Answer: A

## SSC CGL Previous Papers (DOWNLOAD PDF)

Question 70

At what percent per annum will ₹6000 amounts to ₹7986 in 3 years if the interest is compounded annually?

- A 12.5%
- B 8%
- C 10%
- D 11%

Answer: C

Question 71

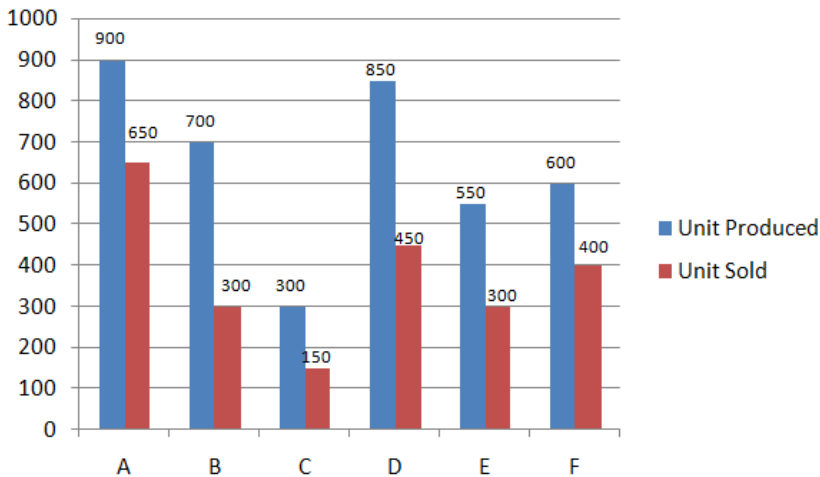
To travel 612 km, Train A takes 9 hours more than Train B. If the speed of the Train A is doubled, it takes 3 hours less than Train B. The speed (in km/h) of Train B is:

- A 30.6 km/h
- B 1.2 km/h
- C 40.8 km/h
- D 51 km/h

Answer: C

Question 72

The Bar Graph shows the Production and Sales of Mobile handset of various companies A, B, C, D, E & F in a month.



Which Company had the highest percentage of sale with respect to its production?

- A D
- B A
- C E
- D B

Answer: B

SSC CGL Free Mock Test (Latest Pattern)

Question 73

Three categories of employees A, B and C get wages in the ratio of 1 : 2 : 3 if they get increments of 5%, 10% and 15% respectively. What will be the new ratio of their wages?

- A 21 : 44 : 69
- B 7 : 22 : 23
- C 7 : 21 : 23
- D 21 : 22 : 23

Answer: A



**Question 74**

The mean of 20 observations was 85, but later it was found that 97 was misread as 79. The correct mean is:

- A 85.7
- B 85.8
- C 85.9
- D 85.6

**Answer: C**

**Question 75**

Shiv Purchased a table for ₹135000 and sold it for ₹110000 what is loss percentage?

- A  $\frac{270}{22} \%$
- B  $\frac{2200}{27} \%$
- C 30%
- D  $\frac{500}{27} \%$

**Answer: D**

## SSC CHSL Free Mock Test (Latest Pattern)

### General knowledge

**Instructions**

For the following questions answer them individually

**Question 76**

The tomb of a Sufi Saint is called \_\_\_\_\_.

- A Dargah
- B Khanqah
- C Cul-de-Sac
- D Idgah

**Answer: A**

## SSC Stenographer Previous Papers (Latest Pattern)

**Question 77**

Minimum Support Price is announced by \_\_\_\_\_.

- A Cabinet Committee on Economic Affairs
- B Ministry of Agriculture
- C Chamber of Commerce

D Ministry of Finance

Answer: A

Question 78

Sunil Arora has been appointed as the 23rd \_\_\_\_\_ of India.

A Comptroller & Auditor General

B Chief Economic Advisor

C Chief Election Commissioner

D RAW Chief

Answer: C

Question 79

Mouma Das is related to which sport?

A Hockey

B Table Tennis

C Archery

D Shooting

Answer: B

## SSC GD Constable Free Mock Test (Latest Pattern)

Question 80

Which of the following pairs of State - Chief Minister is correct?

A Chhattisgarh - Bhupesh Baghel

B Goa - Nirmala Sitharaman

C Madhya Pradesh - Jyotiraditya Scindia

D Rajasthan - Gopinath Munde

Answer: A

Question 81

What is the chemical name of table salt?

A Calcium Chloride

B Sodium Sulphate

C Magnesium Dioxide

D Sodium Chloride

Answer: D

**Question 82**

Deficiency of which of the following causes Beri Beri in human beings?

- A Vitamin A
- B Vitamin D
- C Vitamin C
- D Vitamin B1

**Answer: D**

**SSC MTS Free Mock Test (Latest Pattern)**

**Question 83**

Union Budget and Railway Budget of India were merged in which year?

- A 2015
- B 2018
- C 2017
- D 2016

**Answer: D**

**Question 84**

Who presided over the Drafting Committee of the Constitution?

- A Sardar Vallabhbhai Patel
- B Dr. B. R. Ambedkar
- C V. P. Menon
- D Jawaharlal Nehru

**Answer: B**

**Question 85**

Which article of Indian Constitution guarantees Protection of Life and Personal Liberty?

- A Article 21
- B Article 21A
- C Article 22
- D Article 20

**Answer: A**

**SSC CPO Free Mock Test (Latest Pattern)**

**Question 86**

**Who among the following established the Depressed Classes Association?**

- A Babu Jagjivan Ram
- B Mahatma Gandhi
- C Dr. B. R. Ambedkar
- D Sardar Vallabhbhai Patel

**Answer: C**

**Question 87**

**Ghaghra and Son are tributaries of which river?**

- A Yamuna
- B Brahmaputra
- C Chambal
- D Ganga

**Answer: D**

**Question 88**

**The Archaeological Site of Inamgaon is situated in \_\_\_\_\_**

- A Gujarat
- B Maharashtra
- C Karnataka
- D Uttar Pradesh

**Answer: B**

**SSC MTS Free Preparation App**

**Question 89**

**Who painted the painting 'My Mother'?**

- A Nandalal Bose
- B Bankim Chandra Chatterjee
- C Debendranath Tagore
- D Abanindranath Tagore

**Answer: D**

**Question 90**

**Which component of blood fights against germs that enter human body?**

- A Platelets
- B Haemoglobin
- C White blood cells
- D Red blood cells

**Answer: C**

**Question 91**

**Which of the following is correct?**

- A Gulfaroshan is a festival of flowers.
- B Munshi was a person who can read, write and teach Arabic.
- C Murals are the hanging rock paintings.
- D Aurang was a type of horsecart.

**Answer: A**

**285 SSC Mocks - Just RS. 249**

**Question 92**

**Ladakh lies between \_\_\_\_\_.**

- A Middle Himalayas and Shivaliks
- B Greater Himalayas and Shivaliks
- C Shivaliks and Zaskar Mountains
- D Karakoram Range and Zaskar Mountains

**Answer: D**

**Question 93**

**Lion tailed Macaque is also called as \_\_\_\_\_.**

- A Black Ape
- B Beard Ape
- C Silver Ape
- D Howler Ape

**Answer: B**

**Question 94**

**Deficiency of which hormone in the body causes 'Goitre'?**

- A Thyroxine
- B Estrogen

C Adrenaline

D Testosterone

**Answer: A**

## SSC Exam Free Videos (Youtube)

### Question 95

The Economic Survey of India is prepared under the guidance of:

A Chief Economic Advisor

B RBI Governor

C Finance Commission

D Finance Minister

**Answer: A**

### Question 96

FIFA was established in \_\_\_\_\_.

A Spain

B France

C England

D Italy

**Answer: B**

### Question 97

The process of breaking down of rocks by the action of wind, water and climate is called as \_\_\_\_\_.

A Solifluction

B Weathering

C Erosion

D Land slide

**Answer: B**

## SSC Study Material

### Question 98

Who was conferred with Palestine's highest award "Grand Collar of Palestine" in 2018?

A Vladimir Putin

B Donald Trump

- C Narendra Modi
- D Benjamin Netanyahu

**Answer: C**

**Question 99**

**73rd Constitutional Amendment Act added which part to the Indian Constitution?**

- A Part IX - B
- B Part IX
- C Part X
- D Part IX - A

**Answer: B**

**Question 100**

**Who started the newspaper 'Kesari'?**

- A Lala Lajpat Rai
- B Bipin Chandra Pal
- C Dada Bhai Naoroji
- D Bal Gangadhar Tilak

**Answer: D**

## **SSC Daily Practice Set**

**SSC CHSL Previous Papers (DOWNLOAD PDF)**

**SSC Stenographer Previous Papers (Download PDF)**

**SSC GD Constable Previous Papers**

**SSC MTS Previous Papers (DOWNLOAD PDF)**

**SSC CGL Previous Papers (DOWNLOAD PDF)**

**SSC CGL Free Mock Test (Latest Pattern)**

**SSC CHSL Free Mock Test (Latest Pattern)**

**SSC Stenographer Previous Papers (Latest Pattern)**

[\*\*SSC GD Constable Free Mock Test \(Latest Pattern\)\*\*](#)

[\*\*SSC MTS Free Mock Test \(Latest Pattern\)\*\*](#)

[\*\*SSC CPO Free Mock Test \(Latest Pattern\)\*\*](#)

[\*\*SSC MTS Free Preparation App\*\*](#)

[\*\*285 SSC Mocks - Just RS. 249\*\*](#)

[\*\*SSC Exam Free Videos \(Youtube\)\*\*](#)

[\*\*SSC Study Material\*\*](#)

[\*\*SSC Daily Practice Set\*\*](#)

[\*\*SSC GK Free Tests\*\*](#)

[\*\*SSC GK Questions\*\*](#)

[\*\*Current Affairs Question and Answers \(Download PDF\)\*\*](#)

[\*\*Daily and Monthly Current Affairs \(Download PDF\)\*\*](#)