



SSC MTS 19th August 2019 Shift-1

All rights reserved. No part of this publication may be reproduced, distributed, or transmitted in any form or by any means, electronic, mechanical, photocopying, recording or otherwise, or stored in any retrieval system of any nature without the permission of cracku.in, application for which shall be made to support@cracku.in

Instructions

For the following questions answer them individually

Question 1

Select the correctly spelt word.

- A Foriegn
- B Foaurth
- C February
- D Foward

Answer: C

SSC CHSL Prevoius Papers (DOWNLOAD PDF)

Question 2

Select the most appropriate option to fill in the blank and make a grammatically correct sentence.

If I _____ that you were coming over, I would have cancelled my programme.

- A know
- B knows
- C had known
- D am knowing

Answer: C

Question 3

Select the most appropriate word for the given group of words.

An animal that lives by killing and eating other animals

- A Amphibian
- B Prey
- C Predator
- D Quadruped

Answer: C

Instructions

In the following passage some words have been deleted. Fill in the blanks with the help of the alternatives given. Select the most appropriate option for each blank.

Comprehension:

Throughout the ages, birds have been a source of wonder to all who have (1)_____ their soaring flight or listened to (2)_____ sweet songs. As a group, birds are (3)_____. They are the only creatures covered (4)_____ feathers. This evolutionary development (5)_____ birds from all other animals.

Question 4

Select the most appropriate option to fill in blank No.1.

- A claimed
- B verified
- C observed
- D supported

Answer: C

SSC Stenographer Previous Papers (Download PDF)

Question 5

Select the most appropriate option to fill in blank No.2.

- A them
- B its
- C their
- D they

Answer: C

Question 6

Select the most appropriate option to fill in blank No.3.

- A mundane
- B unique
- C indifferent
- D ordinary

Answer: B

Question 7

Select the most appropriate option to fill in blank No.4.

- A on
- B at
- C with
- D from

Answer: C

SSC GD Constable Previous Papers

Question 8

Select the most appropriate option to fill in blank No.5.

- A is separated
- B has been separated
- C separates
- D was separated

Answer: C

Instructions

For the following questions answer them individually

Question 9

Identify the segment in the sentence which contains the grammatical error. If there is no error, select 'No Error'.
Sushmita's youngest sister is not only beautiful but even intelligent also.

- A but even intelligent also
- B is not only beautiful
- C No Error
- D Sushmita's youngest sister

Answer: A

Question 10

Select the correctly spelt word.

- A Wednesday
- B Worthwile
- C Wayther
- D Weird

Answer: D

SSC MTS Previous Papers (DOWNLOAD PDF)

Question 11

Select the most appropriate antonym of the word.

APPLAUD

- A Cheer
- B Criticize
- C Praise
- D Clap

Answer: B

Question 12

Select the most appropriate option to fill in the blank and make a grammatically correct sentence.
I wasn't feeling well yesterday, but I feel a little _____ today.

- A more better
- B best
- C better
- D good

Answer: C

Question 13

Select the most appropriate option to substitute the underlined segment in the given sentence. If there is no need to substitute it, select **No improvement**

A little carefulness can have averted the accident.

- A can averted
- B could have averted
- C could have avert
- D No improvement

Answer: B

SSC CGL Previous Papers (DOWNLOAD PDF)

Question 14

Select the most appropriate word to fill in the blank and make a meaningful sentence.
It's a venue for every occasion and one that offers _____ meals on special days.

- A offensive
- B amusing
- C thrilling
- D delightful

Answer: D

Question 15

Select the most appropriate option to substitute the underlined segment in the given sentence. If there is no need to substitute it, select **No improvement**

I had to reconsider my decision as going to Syria might been dangerous.

- A had to be
- B might have been
- C may have
- D No improvement

Answer: B

Question 16

Select the most appropriate word to fill in the blank and make a meaningful sentence.
Winning both the races has been a _____ surprise, but the success is well deserved.

- A satisfying
- B pleasant
- C civilized
- D charming

Answer: B

SSC CGL Free Mock Test (Latest Pattern)

Question 17

Select the most appropriate meaning of the given idiom.
No strings attached

- A Without conditions or restrictions
- B Forced to do something
- C Involving a choice to be made
- D Lacking clarity

Answer: A

Question 18

Select the most appropriate synonym of the given word.
ABANDONED

- A Continued
- B Adopted
- C Initiated
- D Deserted

Answer: D

Question 19

Select the most appropriate meaning of the given idiom.
When pigs fly

- A A difficult situation
- B An argument between two people
- C A practical idea
- D A time that will never come

Answer: D

SSC CHSL Free Mock Test (Latest Pattern)

Question 20

Select the most appropriate antonym of the word.

Congested

- A Cleared
- B Crowded
- C Choked
- D Crammed

Answer: A

Question 21

Select the most appropriate synonym of the given word.

ADVANTAGEOUS

- A Unlucky
- B Adverse
- C Favourable
- D Crucial

Answer: C

Question 22

Identify the segment in the sentence which contains the grammatical error.

After a heated argument they went to their respective place.

- A they went
- B After a heated argument
- C respective place
- D to their

Answer: C

SSC Stenographer Previous Papers (Latest Pattern)

Question 23

Select the most appropriate option to substitute the underlined segment in the given sentence. If there is no need to substitute it, select **No improvement**

While the teacher was scrutinizing the sums, Swaminathan was gazing on his face.

- A gaze on
- B No improvement

C gazed at

D gazing at

Answer: D

Question 24

Select the most appropriate word for the given group of words.
A large crowd of people intent on causing trouble or violence

A Mob

B Procession

C Spectators

D Audience

Answer: A

Question 25

Identify the segment in the sentence which contains the grammatical error.
Ram cannot withdraw all his money unless he does not give a prior notice.

A all his money

B Ram cannot withdraw

C a prior notice

D unless he does not give

Answer: D

SSC GD Constable Free Mock Test (Latest Pattern)

Reasoning

Instructions

For the following questions answer them individually

Question 26

If in a certain code language, 'RAW' is written as 'TIN', 'NET' is written as 'SHG', how is 'WATER' written in that code?

A GHTIN

B TINGH

C NIGHT

D NIGTH

Answer: C

SSC MTS Free Mock Test (Latest Pattern)

Question 27

If in a certain language, 'EXECUTIVE' is coded as 'EVITUCEXE' then how is 'MAUSOLEUM' coded in that language?

- A AUUCOSLMM
- B MUELOSUAM
- C MUELOSUMA
- D ALUEOSUMM

Answer: B

Question 28

Select the letter cluster that will replace the question mark (?) in the following series.
ACEGI, BDFHJ, KMOQS, ? , UWYAC, VXZBD

- A PQRTV
- B LPRTV
- C TUVWX
- D LNPRT

Answer: D

Question 29

If in a certain code language 'BHAI' is written as '2819', then how will 'CDGH' be written in that language?

- A 3478
- B 8437
- C 3487
- D 7348

Answer: A

SSC CPO Free Mock Test (Latest Pattern)

Question 30

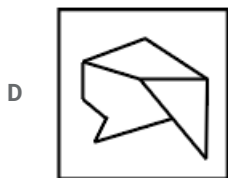
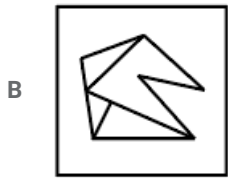
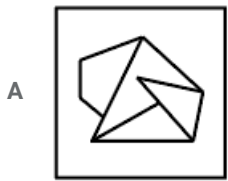
Six persons B, C, D, F, G and H are sitting in a row facing the north.
B and C are sitting at the ends.
F is sitting second to the left of C.
D is adjacent to both B and H.
What is the position of G with respect to F?

- A Immediate right
- B Immediate left
- C Second to the left
- D Second to the right

Answer: A

Question 31

Select the option in which the given figure is embedded. (Rotation is not allowed)



Answer: A

Question 32

If '+' means '-', '-' means '×', '÷' means '+' and '×' means '÷', then

$$10 \times 5 \div 3 - 2 + 3 = ?$$

A 5

B 21

C $\frac{53}{3}$

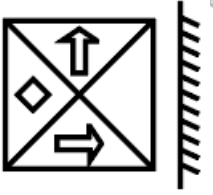
D 18

Answer: A

SSC MTS Free Preparation App

Question 33

Choose the option that most closely resembles the mirror image of the given Figure when mirror is placed at right side.



A



B



C



D



Answer: C

Question 34

If B = 2 and BUT = 43 then BOSS = ?

A 56

B 59

C 55

D 57

Answer: C

Question 35

Select the option that is related to the third term in the same way as the second term is related to the first term.
Genuine : Authentic :: Mirage : ?

- A Reflection
- B Image
- C Illusion
- D Hideout

Answer: C

285 SSC Mocks - Just RS. 249

Question 36

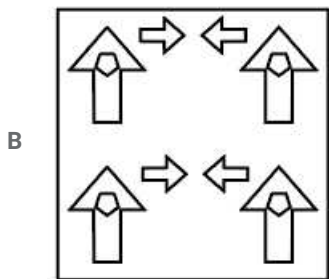
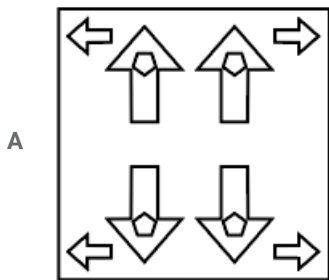
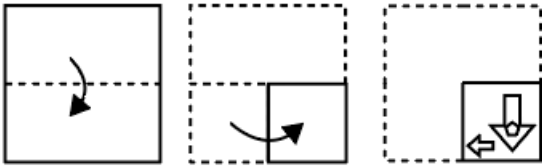
Select the number that can replace the question mark (?) in the following series.
2807, 1400, 697, ?, 171, 84

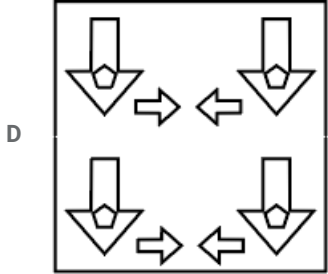
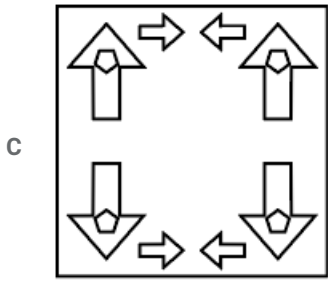
- A 697
- B 84
- C 371
- D 346

Answer: D

Question 37

The sequence of folding a piece of paper and the manner in which the folded paper has been cut is shown in the following figures. How would this paper look when unfolded?

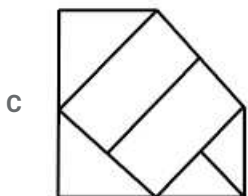
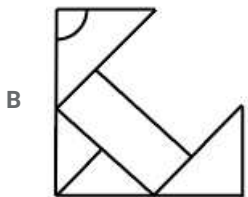
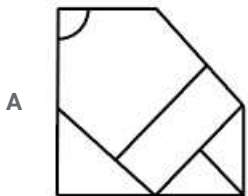
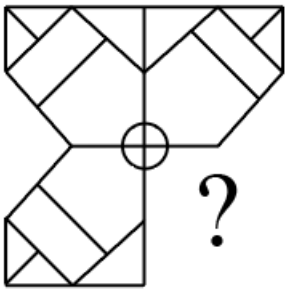


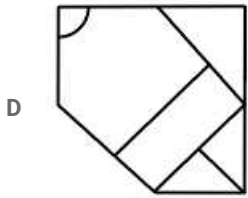


Answer: C

Question 38

Study the given pattern carefully and select the figure that can replace the question mark (?) in it.





Answer: A

SSC Exam Free Videos (Youtube)

Question 39

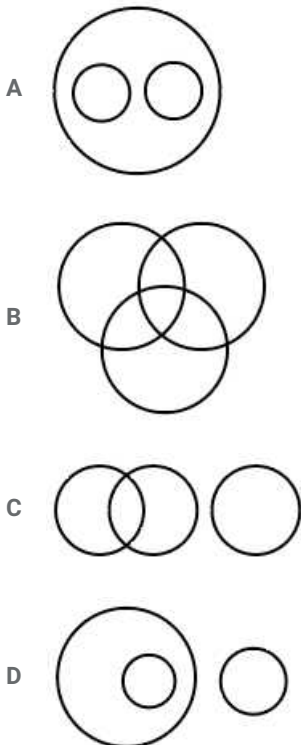
'Lion' is related to 'Cub' in the same way as 'Cow' is related to ____.

- A Calf
- B Lamb
- C Foal
- D Joey

Answer: A

Question 40

Choose the Venn diagram from the given options which best represents the relationship amongst the following classes: Fishes, sharks, dolphins



Answer: D

Question 41

Select the number that can replace the question mark (?) in the following series.

-1, 5, 23, 59, 119, 209, ?

- A 409
- B 309
- C 335
- D 289

Answer: C

SSC Study Material

Question 42

If '#' means '+', '@' means 'x', '&' means '/' and '\$' means '-' then
 $200 \& 5 @ 3 \$ 20 \# 5 = ?$

- A 105
- B 100
- C 85
- D 120

Answer: A

Question 43

Six friends A, B, C, D, E and F are sitting around a round table facing the centre. A sits second to the right of B, E sits second to the left of C. B doesn't sit adjacent to E. D does not sit opposite to E or C. Who sits to the immediate left of E?

- A A
- B D
- C B
- D C

Answer: A

Question 44

Five friends A, B, C, D and E bought cars which were priced differently. B's car was costlier than C's car but was less costly than E's car. A's car was costlier than D's car but less costly than C's car. Whose car was the 2nd costliest?

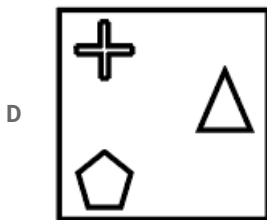
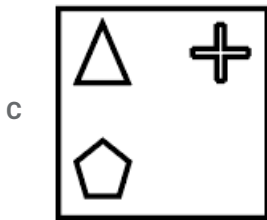
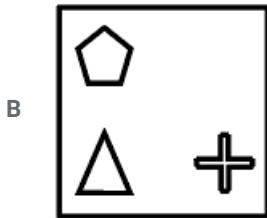
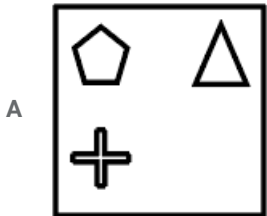
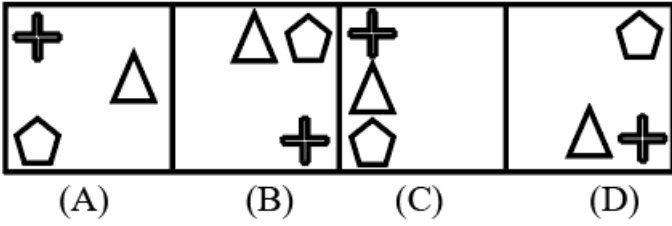
- A E
- B A
- C B
- D C

Answer: C

SSC Daily Practice Set

Question 45

Select the figure that will come next in the following series.



Answer: D

Question 46

If $4 + 5 = 41$ and $10 + 12 = 244$, then $6 + 8 = ?$

A 200

B 88

C 96

D 100

Answer: D

Question 47

Select the option that is related to the third term in the same way as the second term is related to the first term.
CINQ : EKPS :: FRGS : ?

- A HTIU
- B HITU
- C ITJU
- D HTUI

Answer: A

SSC GK Free Tests

Question 48

Two statements are given, followed by two conclusions numbered I and II. Assuming the statements to be true, even if they seem to be at variance with commonly known facts, decide which of the conclusions logically follow(s) from the statements.

Statement:

I. All tables are books.

II. All pens are books.

Conclusions:

I. Some tables are pens.

II. Some books are pens.

- A Only conclusion II follows
- B Only conclusion I follows
- C Either conclusion I or conclusion II follows
- D Both conclusion I and conclusion II follow

Answer: A

Question 49

Read the given statement and conclusions carefully and decide which of the conclusions logically follow(s) from the statement.

Statement:

Only white colour vehicles should be allowed in India for promoting peace.

Conclusions:

I. Blue colour vehicles promote peace.

II. White colour vehicles promote peace

- A Only Conclusion I follows.
- B Only Conclusions II follows.
- C Neither conclusion I nor conclusion II follow
- D Either conclusion I or conclusion II follows.

Answer: B

Question 50

Select the option that is related to the third term in the same way as the second term is related to the first term.
147 : 159 :: 167 : ?

- A 276
- B 143
- C 176
- D 181

Answer: D

SSC GK Questions

Quant

Instructions

For the following questions answer them individually

Question 51

Pipe A can fill a tank in 10 hours. Pipe B can fill the same tank in 12 hours. Pipe C can empty the full tank in 16 hours. All the pipes are opened at 8 : 00 A.M. and Pipe A and B are closed at 10 : 00 A.M. After how much time from starting will the tank be empty?

- A 5 hours 52 minutes
- B 5 hours 24 minutes
- C 4 hours 30 minutes
- D 4 hours 8 minutes

Answer: A

Current Affairs Question and Answers (Download PDF)

Question 52

The volume of a right circular cylinder is 3 times the volume of a right circular cone. The radius of the cone and the cylinder are 3 cm and 6 cm respectively. If the height of the cylinder is 1 cm, then what is the slant height of the cone?

- A $\sqrt{13}$ cm
- B 4 cm
- C 5 cm
- D $\sqrt{15}$ cm

Answer: C

Question 53

Cost price of an article is ₹1440 and its selling price is ₹1800. What is the profit percentage?

- A 15%
- B 25%
- C 20%
- D 12.5%

Answer: B

Question 54

What is the greatest number which can exactly divide 192, 1056 and 1584?

- A 48
- B 56
- C 44
- D 36

Answer: A

Daily and Monthly Current Affairs (Download PDF)

Question 55

The sum of two numbers x and y is 48 and their difference is 6. Then $x : y = ?$

- A 8 : 9
- B 7 : 6
- C 9 : 7
- D 3 : 7

Answer: C

Question 56

A sum is divided between two persons in the ratio 3 : 2. If one person got ₹12 less than the other person, then what is the sum?

- A ₹60
- B ₹50
- C ₹72
- D ₹44

Answer: A

Question 57

What is the compound interest on ₹5000 in 2 years at the rate of 20% per annum? (interest compounded half yearly)

- A ₹2340.50
- B ₹2275.50
- C ₹2290.50
- D ₹2320.50

Answer: D

SSC CHSL Previous Papers (DOWNLOAD PDF)

Question 58

The ratio of two numbers is 2 : 1. If each number is increased by 5, then the new ratio becomes 3 : 2. What is the sum of the numbers?

- A 15
- B 45
- C 30
- D 20

Answer: A

Question 59

12.5% of A = 55. What is the value of A?

- A 480
- B 500
- C 440
- D 550

Answer: C

Question 60

Average age of 12 students is 14 years. If the age of teacher is also included, the average becomes 15 years. What is the age of the teacher?

- A 23 years
- B 25 years
- C 27 years
- D 28 years

Answer: C

SSC Stenographer Previous Papers (Download PDF)

Question 61

The volume of a sphere is $36 \pi \text{ cm}^3$. What is the radius of the sphere?

- A 4 cm
- B 2 cm
- C 5 cm
- D 3 cm

Answer: D

Question 62

The Table presents the amount of milk (in litres) sold by two milkmen in eight days.

Days	Milkman 1	Milkman 2
1	28	31
2	34	32
3	38	43
4	37	41
5	53	49
6	58	59
7	63	62
8	67	69

What is the difference between the average milk sold per day by Milkman 1 and the average milk sold by Milkman 2 per day?

- A 2 litre
- B 3 litre
- C 1 litre
- D 4 litre

Answer: C

Question 63

A 600 metres long train can cross a 1200 metres long platform in 36 seconds. In how much time(in seconds) can it cross a bridge 2200 metres long?

- A 56
- B 52
- C 48
- D 44

Answer: A

SSC GD Constable Previous Papers

Question 64

The Table presents the amount of milk (in litres) sold by two milkmen in eight days.

Days	Milkman 1	Milkman 2
1	28	31
2	34	32
3	38	43
4	37	41
5	53	49
6	58	59
7	63	62
8	67	69

If A is the total amount(in litres) of milk sold by milkman 1 in day 2 and day 3, and B is the total amount(in litres) of milk sold by milkman 2 in day 7 and day 8 then $(B - A)$ is equal to:

- A 59
- B 56

C 58

D 57

Answer: A

Question 65

A sum becomes ₹500 in 5 years and ₹600 in 7 years at a certain rate percent p.a at of simple interest. What is the sum?

A ₹300

B ₹400

C ₹200

D ₹250

Answer: D

Question 66

What is the value of:

$$2 - 2 \div 2 \times 2 + 2(2 \text{ of } 2 - 2 - 2 \div 2)?$$

A 4

B 0

C 2

D 1

Answer: C

SSC MTS Previous Papers (DOWNLOAD PDF)

Question 67

The difference between the selling prices of an article is ₹1440, when it is sold at 20% profit and 17.5% loss. What will be the selling price when it is sold at 15% profit?

A ₹4108

B ₹4218

C ₹4612

D ₹4416

Answer: D

Question 68

What are respectively the curved surface area and volume of a hemisphere of radius 21 cm? (Take $\pi = \frac{22}{7}$)

A $2772 \text{ cm}^2, 19404 \text{ cm}^3$

B $4158 \text{ cm}^2, 19404 \text{ cm}^3$

C $2772 \text{ cm}^2, 4158 \text{ cm}^3$

D 2772 cm^2 , 9702 cm^3

Answer: A

Question 69

Speed of a man is 45 km/h. In how much time (in seconds) will he cover a distance of 225 metres?

A 24

B 16

C 18

D 22

Answer: C

SSC CGL Previous Papers (DOWNLOAD PDF)

Question 70

A can do a piece of work alone in 10 days, whereas B alone can do it in 15 days. They work together and get ₹2000 for their work. What is the share of B?

A ₹1200

B ₹800

C ₹1000

D ₹1600

Answer: B

Question 71

Average of 10 numbers is 14.8. If two numbers 5 and 23 are replaced by 13 and 26 respectively, then what is the new average?

A 15.9

B 13.8

C 16.3

D 14.5

Answer: A

Question 72

The Table presents the amount of milk (in litres) sold by two milkmen in eight days.

Days	Milkman 1	Milkman 2
1	28	31
2	34	32
3	38	43
4	37	41
5	53	49
6	58	59
7	63	62
8	67	69

The total amount of milk (in litres) sold by milkman in all 8 days is what percent (correct to one decimal place) more than the total amount of milk sold by milkman 1 in first six days?

- A 55.6
- B 57.2
- C 56.8
- D 58.9

Answer: A

SSC CGL Free Mock Test (Latest Pattern)

Question 73

What is difference between mean and median of the given data:

4, 6, 3, 7, 10, 13, 16 and 5?

- A 5
- B 1.5
- C 3
- D 4.5

Answer: B

Question 74

What is the value of:

$$3^3 - \frac{61}{122} + 2 \div \frac{1}{2} \text{ of } \frac{4}{3} \left(1 + \frac{1}{3}\right) + \frac{1}{2} \times \frac{4}{3}?$$

- A $\frac{155}{12}$
- B 3
- C $\frac{163}{11}$
- D 9

Answer: A

Question 75

Marked price of an article is ₹1500. If $16\frac{2}{3}\%$ discount is given, then what is the selling price?

A ₹1000

B ₹1300

C ₹1250

D ₹1150

Answer: C

SSC CHSL Free Mock Test (Latest Pattern)

General knowledge

Instructions

For the following questions answer them individually

Question 76

In terms of total land area what is India's rank in the world in the list of largest countries?

A 4

B 5

C 6

D 7

Answer: D

SSC Stenographer Previous Papers (Latest Pattern)

Question 77

'Akbarname' and 'Ain-i-Akbari" are written by _____.

A Akbar

B Ziauddin Barani

C Abul Fazal

D Abdul Qadir Badayuni

Answer: C

Question 78

Kapaleeswarar Temple in Tamil Nadu is dedicated to which Indian God?

A Vishnu

B Durga

C Brahma

D Shiva

Answer: D

Question 79

The percentage of deposits which a bank must keep as cash reserves with itself is known as _____.

- A Liquidity Reserve Ratio
- B Statutory Liquidity Ratio
- C Capital Output Ratio
- D Cash Reserve Ratio

Answer: D

SSC GD Constable Free Mock Test (Latest Pattern)

Question 80

Where is the head office of Vijaya Bank situated?

- A Kolkata
- B Bangalore
- C Mumbai
- D Delhi

Answer: B

Question 81

Which Organisation has won the 2018 Indira Gandhi Prize for Peace Disarmament and Development?

- A Centre for Science and Environment
- B NITI Aayog
- C Peace for India
- D Wildlife International

Answer: A

Question 82

Members of which National Association were led by Chandrashekhara Azad and Bhagat Singh?

- A Hindustan Socialist Republican Association
- B Indian National Congress
- C Rashtiya Sewa Sangh
- D Communist Party of India

Answer: A

SSC MTS Free Mock Test (Latest Pattern)

Question 83

With reference to the famous monasteries of India, which of the following pairs is incorrect?

- A Tawang-Arunachal Pradesh
- B Key-Himachal Pradesh
- C Rumtek-Sikkim
- D Ghum-Jammu and Kashmir

Answer: D

Question 84

Atoms of different elements with different atomic numbers, having same mass number is known as _____.

- A Isobars
- B Isohalines
- C Isotopes
- D Ion

Answer: A

Question 85

Bathukamma festival is celebrated in which state of India?

- A Punjab
- B Telangana
- C Uttar Pradesh
- D Maharashtra

Answer: B

SSC CPO Free Mock Test (Latest Pattern)

Question 86

Which of the following is NOT a type of Fungi?

- A Agarics
- B Penicillium
- C Gonyaulax
- D Aspergillus

Answer: C

Question 87

Which of the following is NOT a coastal landform?

- A Moraines
- B Sea Cliff
- C Sea Caves
- D Sea Stacks

Answer: A

Question 88

Who won Hero Indian Super League 2018-19?

- A Kerala Blasters
- B FC Goa
- C Bengaluru FC
- D Atletico de Kolkata

Answer: C

SSC MTS Free Preparation App

Question 89

Paytm partnered with which of the following institutions to help customers make insurance premium payments online in November 2018?

- A United India Insurance
- B Life Insurance Corporation
- C General Insurance Company
- D Oriental Insurance Company

Answer: B

Question 90

The commonly used Vitamin B Complex is constituted of how many vitamins?

- A 8
- B 12
- C 10
- D 6

Answer: A

Question 91

When did the Constituent Assembly adopt the Constitution of India?

- A 26th November 1949

- B 26th January 1950
- C 26th November 1947
- D 26th January 1947

Answer: A

285 SSC Mocks - Just RS. 249

Question 92

Exchange of gases occurs through which part of the plant tissue?

- A Phloem
- B Stomata
- C Xylem
- D Midrib

Answer: B

Question 93

As of January 2019, Agriculture as a subject is included in which list of the Constitution?

- A Residuary Powers
- B Union list
- C State List
- D Concurrent List

Answer: C

Question 94

India lifted South Asian Football Federation SAFF Women's Championship for how many times in a row in March 2019?

- A 3rd
- B 6th
- C 4th
- D 5th

Answer: D

SSC Exam Free Videos (Youtube)

Question 95

The Right of Children to Free and Compulsory Education (RTE) Act, which gives every child aged 6-14 the fundamental right for education, was assented to in which year?

- A 2001

- B 1975
- C 2009
- D 1947

Answer: C

Question 96

In which year was the Battle of Saragarhi fought?

- A 1880
- B 1870
- C 1897
- D 1890

Answer: C

Question 97

The largest inhabited riverine island is located on which river?

- A Brahmaputra
- B Godavari
- C Ganga
- D Krishna

Answer: A

SSC Study Material

Question 98

Which of the following is known as energy currency of the cell?

- A Adenosine Diphosphate
- B Adenosine Triphosphate
- C Glycine Triphosphate
- D Adenosine Phosphate

Answer: B

Question 99

Which film has won the IIFA best film Award 2018?

- A Mom
- B Newton
- C Tumhari Sulu

D Hindi Medium

Answer: C

Question 100

The Battle of Karnal in 1739 was fought between Nadir Shah and whom among the following?

A Akbar Shah

B Bahadur Shah Zafar

C Aurangzeb

D Muhammad Shah

Answer: D

SSC Daily Practice Set

SSC CHSL Previous Papers (DOWNLOAD PDF)

SSC Stenographer Previous Papers (Download PDF)

SSC GD Constable Previous Papers

SSC MTS Previous Papers (DOWNLOAD PDF)

SSC CGL Previous Papers (DOWNLOAD PDF)

SSC CGL Free Mock Test (Latest Pattern)

SSC CHSL Free Mock Test (Latest Pattern)

SSC Stenographer Previous Papers (Latest Pattern)

SSC GD Constable Free Mock Test (Latest Pattern)

SSC MTS Free Mock Test (Latest Pattern)

SSC CPO Free Mock Test (Latest Pattern)

SSC MTS Free Preparation App

285 SSC Mocks - Just RS. 249

SSC Exam Free Videos (Youtube)

SSC Study Material

SSC Daily Practice Set

SSC GK Free Tests

SSC GK Questions

Current Affairs Question and Answers (Download PDF)

Daily and Monthly Current Affairs (Download PDF)